



Surname _____

Other Names _____

Centre Number _____

Candidate Number _____

Candidate Signature _____

AS CHEMISTRY

Paper 1: Inorganic and Physical Chemistry

7404/1R

Friday 26 May 2017 Morning

Time allowed: 1 hour 30 minutes

For this paper you must have:

- the Periodic Table/Data Sheet, provided as an insert (enclosed)
- a ruler with millimetre measurements
- a calculator, which you are expected to use where appropriate.

At the top of the page, write your surname and other names, your centre number, your candidate number and add your signature.

[Turn over]



J U N 1 7 7 4 0 4 1 R 0 1

BLANK PAGE



INSTRUCTIONS

- Use black ink or black ball-point pen.
- Answer ALL questions.
- You must answer the questions in the spaces provided. Do not write on blank pages.
- All working must be shown.
- Do all rough work in this book. Cross through any work you do not want to be marked.

INFORMATION

- The marks for questions are shown in brackets
- The maximum mark for this paper is 80.

ADVICE

- You are advised to spend about 65 minutes on SECTION A and 25 minutes on SECTION B.

DO NOT TURN OVER UNTIL TOLD TO DO SO



SECTION A

Answer ALL questions in this section.

0 1 This question is about atomic structure.

0 1 . 1 Write the full electron configuration for each of the following species. [2 marks]

Cl^- _____

Fe^{2+} _____

0 1 . 2 Write an equation, including state symbols, to represent the process that occurs when the third ionisation energy of manganese is measured. [1 mark]



- 01.4** A sample of nickel was analysed in a time of flight (TOF) mass spectrometer. The sample was ionised by electron impact ionisation. The spectrum produced showed three peaks with abundances as set out in TABLE 1.

TABLE 1

m/z	Abundance / %
58	61.0
60	29.1
61	9.9

Give the symbol, including mass number, of the ion that would reach the detector first in the sample.

Calculate the relative atomic mass of the nickel in the sample.

Give your answer to one decimal place.

[3 marks]

Symbol of ion _____



Relative atomic mass

9

[Turn over]



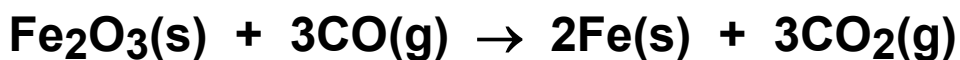
0 2 This question is about energetics.

0 2 . 1 Write an equation, including state symbols, for the reaction with an enthalpy change equal to the enthalpy of formation for iron(III) oxide. [1 mark]

0 2 . 2 TABLE 2 contains some standard enthalpy of formation data.

TABLE 2

	CO(g)	Fe ₂ O ₃ (s)
$\Delta_f H^\ominus / \text{kJ mol}^{-1}$	-111	-822



$$\Delta H = -19 \text{ kJ mol}^{-1}$$

Use these data and the equation for the reaction of iron(III) oxide with carbon monoxide to calculate a value for the standard enthalpy of formation for carbon dioxide.

Show your working. [3 marks]



$\Delta_f H^\ominus$ _____ kJ mol^{-1}

[Turn over]



0 2 . 3 Some enthalpy data are given in TABLE 3.

TABLE 3

Process	$\Delta H / \text{kJ mol}^{-1}$
$\text{N}_2(\text{g}) + 3\text{H}_2(\text{g}) \rightarrow 2\text{NH}_3(\text{g})$	-92
$\text{N}_2(\text{g}) \rightarrow 2\text{N}(\text{g})$	+944
$\text{H}_2(\text{g}) \rightarrow 2\text{H}(\text{g})$	+436

Use the data from TABLE 3 to calculate the bond enthalpy for N-H in ammonia.

[3 marks]

N-H bond enthalpy _____

_____ kJ mol^{-1}



0 2 . 4 Give one reason why the bond enthalpy that you calculated in Question 2.3 is different from the mean bond enthalpy quoted in a data book (388 kJ mol^{-1}). [1 mark]


8

[Turn over]



0	3
---	---

A student planned and carried out an experiment to determine the enthalpy of reaction when magnesium metal displaces zinc from aqueous zinc sulfate.



The student used this method:

- A measuring cylinder was used to transfer 50 cm^3 of a 1.00 mol dm^{-3} aqueous solution of zinc sulfate into a glass beaker.
- A thermometer was placed in the beaker.
- 2.08 g of magnesium metal powder were added to the beaker.
- The mixture was stirred and the maximum temperature recorded.

The student recorded a starting temperature of $23.9 \text{ }^\circ\text{C}$ and a maximum temperature of $61.2 \text{ }^\circ\text{C}$.

0	3
---	---

1

Show by calculation which reactant was in excess.

Use the data to calculate the experimental value for enthalpy of reaction in kJ mol^{-1} (Assume that the specific heat capacity of the solution is $4.18 \text{ J K}^{-1}\text{g}^{-1}$ and the density of the solution is 1.00 g cm^{-3}).
[6 marks]



Reactant in excess _____

Enthalpy of reaction _____ kJ mol^{-1}

[Turn over]



BLANK PAGE



03.2 Another student used the same method and obtained a value for the enthalpy of reaction of -142 kJ mol^{-1}

A data book value for the enthalpy of reaction is -310 kJ mol^{-1}

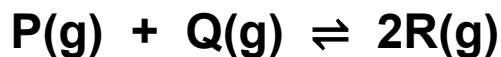
Suggest the most likely reason for the large difference between the student's experimental value and the data book value.
[1 mark]

[Turn over]



0	4
---	---

When substances P and Q react together to form substance R an equilibrium is established according to the equation



The equilibrium constant expression is

$$K_c = \frac{[\text{R}]^2}{[\text{P}][\text{Q}]}$$

1.0 mol of P and 1.0 mol of Q were mixed in a container with volume 1.0 dm³

At equilibrium, x mol of P had reacted.

0	4	.	1
---	---	---	---

The amount, in moles, of each of P and Q at equilibrium is $(1-x)$.

Deduce in terms of x the amount, in moles, of R in the equilibrium mixture. [1 mark]



0 4 . 2 At 298 K the value of the equilibrium constant $K_c = 3.6$

Calculate a value for the equilibrium concentration, in mol dm^{-3} , of R. [3 marks]

Equilibrium concentration of R

_____ mol dm^{-3}

4

[Turn over]



0 5 This question is about intermolecular forces.

0 5 . 1 Give the meaning of the term electronegativity. [1 mark]

0 5 . 2 Explain how permanent dipole-dipole forces arise between hydrogen chloride molecules. [2 marks]



0 5 . 3 Complete TABLE 4 by naming the shape of each molecule.

Place a tick (✓) in the final column if the molecule has a permanent dipole. [4 marks]

TABLE 4

Molecule	Name of shape	Tick (✓) if molecule has a permanent dipole
SiH ₄		
PH ₃		
BeCl ₂		
CH ₃ Cl		

7

[Turn over]

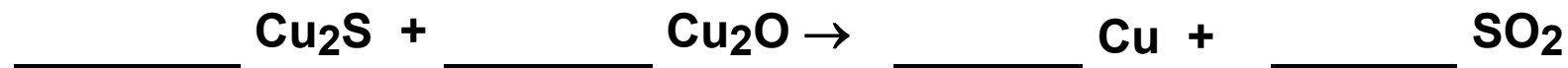


06

Copper can be produced from rock that contains CuFeS_2

06.1

Balance the equations for the two stages in this process. [2 marks]



0 6 . 2

Suggest two reasons why the sulfur dioxide by-product of this process is removed from the exhaust gases. [2 marks]

Reason 1

Reason 2

[Turn over]



0 6 . 3 A passenger jet contains 4050 kg of copper wiring.


A rock sample contains 1.25% CuFeS_2 by mass.

Calculate the mass, in tonnes, of rock needed to produce enough copper wire for a passenger jet. (1 tonne = 1000 kg)
[4 marks]

Mass of rock _____ tonnes



0 6 . 4 Copper can also be produced by the reaction of carbon with copper(II) oxide according to the equation



Calculate the percentage atom economy for the production of copper by this process.

Give your answer to the appropriate number of significant figures. [2 marks]

Percentage atom economy _____

10

[Turn over]



0	7
---	---

An aqueous solution Y is known to contain one type of group 2 metal ion and one type of negative ion.

Aqueous solutions of sulfuric acid and magnesium nitrate are added to separate samples of solution Y. The observations are shown in TABLE 5.

TABLE 5

Solution added	Observation with solution Y
Sulfuric acid	A white precipitate forms
Magnesium nitrate	A white precipitate forms



0 7 . 1 Suggest the identity of the group 2 metal ion present in solution Y.

Write an ionic equation, including state symbols, for the reaction that takes place when sulfuric acid is added to solution Y. [2 marks]

Group 2 metal ion _____

Ionic equation _____

0 7 . 2 Suggest the identity of the negative ion present in solution Y.

Write an ionic equation, including state symbols, for the reaction that takes place when magnesium nitrate is added to solution Y. [2 marks]

Negative ion _____

Ionic equation _____

4

[Turn over]



0 8 When an acidified solution of sodium nitrite (NaNO_2) is added to aqueous potassium iodide, iodine and nitrogen monoxide (NO) are formed.

0 8 . 1 Give the oxidation state of nitrogen in the following species. [2 marks]

NO_2^- _____

NO _____

0 8 . 2 Write a half-equation for the conversion of NO_2^- in an acidic solution into NO [1 mark]



0 8 . 3 Write a half-equation for the conversion of I^- into I_2 [1 mark]

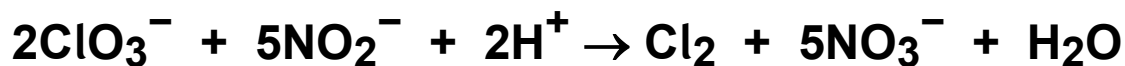
0 8 . 4 Write an overall ionic equation for the reaction of NO_2^- in an acidic solution with I^- [1 mark]

0 8 . 5 State the role of NO_2^- in the reaction with I^- [1 mark]

[Turn over]



0 8 . 6 In aqueous solution, nitrite ions react with acidified chlorate(V) ions according to the equation



A 25.0 cm³ sample of an aqueous solution of sodium nitrite required 27.40 cm³ of a 0.0200 mol dm⁻³ solution of potassium chlorate(V) for complete reaction.

Calculate the concentration, in g dm⁻³, of sodium nitrite in the sample. [4 marks]



Concentration of sodium nitrite

_____ g dm⁻³

10

[Turn over]




SECTION B

Answer ALL questions in this section.

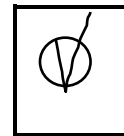
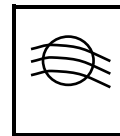
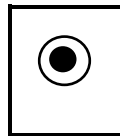
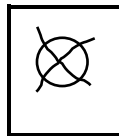
Only ONE answer per question is allowed.

For each answer completely fill in the circle alongside the appropriate answer.

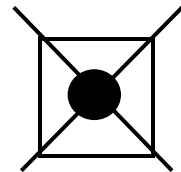
CORRECT METHOD



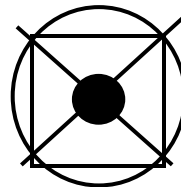
WRONG METHODS



If you want to change your answer you must cross out your original answer as shown.



If you wish to return to an answer previously crossed out, ring the answer you now wish to select as shown.



You may do your working in the blank space around each question but this will not be marked.
Do NOT use additional sheets for this working.



0 9 Which is the correct crystal structure for the substance named? [1 mark]

	Substance	Structure
<input type="radio"/> A	Iodine	Simple molecular
<input type="radio"/> B	Diamond	Ionic
<input type="radio"/> C	Sodium chloride	Giant covalent
<input type="radio"/> D	Graphite	Metallic

1 0 Which is the best technique to remove the silver chloride that forms when aqueous solutions of silver nitrate and sodium chloride react? [1 mark]

- A** Refluxing
- B** Evaporation
- C** Filtration
- D** Distillation

[Turn over]



1 1

Which statement about astatine is correct?
[1 mark]

A Astatine has a greater electronegativity than bromine

B Astatine is a better oxidising agent than bromine

C Astatine has a greater boiling point than bromine

D Astatine has a greater first ionisation energy than bromine

1 2

Which statement about time of flight mass spectrometry is correct? [1 mark]

A The current in the detector is proportional to the ion abundance

B Sample particles gain electrons to form positive ions

C Particles are detected in the order of their kinetic energies

D Ions are accelerated by a magnetic field



1 3 Chlorine exists as two isotopes ^{35}Cl and ^{37}Cl in the ratio 3:1

Which statement about peaks in the mass spectrum of Cl_2 is correct? [1 mark]

- A Peaks at $m/z = 70$ and 74 in the ratio 3:1
- B Peaks at $m/z = 70, 72$ and 74 in the ratio 9:6:1
- C Peaks at $m/z = 70, 72$ and 74 in the ratio 9:3:1
- D Peaks at $m/z = 70$ and 72 in the ratio 3:1

[Turn over]



1 4

A 4.85 g sample of anhydrous sodium sulfate is dissolved in water and the solution made up to 250 cm³ in a volumetric flask.

What is the concentration in mol dm⁻³ of sodium sulfate in the solution? [1 mark]

A 0.0341

B 0.137

C 0.163

D 0.273



1 5 Which of these contains the greatest number of atoms? [1 mark]

A 127mg of iodine

B 1.54×10^{-4} kg of phosphorus

C 81.0 mg of carbon dioxide

D 1.70×10^{-4} kg of ammonia

[Turn over]



1 6

25.0 cm³ samples of NaOH solution were taken by pipette from a beaker. These were then titrated with an aqueous solution of ethanoic acid. The concentration of ethanoic acid calculated from the experimental results was found to be lower than the actual value.

Which of these could explain the difference?
[1 mark]

- A Rinsing the pipette with distilled water before filling with NaOH
- B Rinsing the burette with distilled water before filling with ethanoic acid
- C Rinsing the walls of the conical flask with distilled water during the titration
- D Rinsing the beaker with distilled water before filling with NaOH



17

A 20.0 cm^3 sample of a $0.400 \text{ mol dm}^{-3}$ aqueous solution of a metal bromide (MBr_n) reacts exactly with 160 cm^3 of $0.100 \text{ mol dm}^{-3}$ aqueous silver nitrate.

What is the formula of the metal bromide?
[1 mark]

A MBr

B MBr_2 C MBr_3 D MBr_4

[Turn over]



1 8

Which species has one or more bond angle(s) of 90° ? [1 mark]

A CH_4

B NH_4^+

C ClF_4^-

D AlCl_4^-



1 9 The forward reaction in this equilibrium is endothermic



Which statement is correct? [1 mark]

A If the total pressure is increased at constant temperature, the proportion of COCl_2 in the equilibrium mixture will decrease

B Use of a catalyst will increase the proportion of COCl_2 in the equilibrium mixture at constant temperature and pressure

C Reducing the equilibrium concentration of CO will increase the value of the equilibrium constant

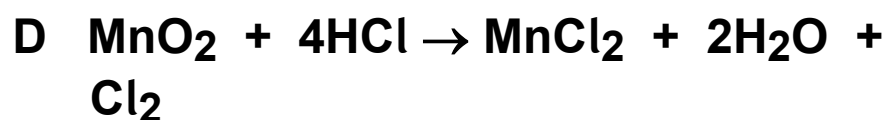
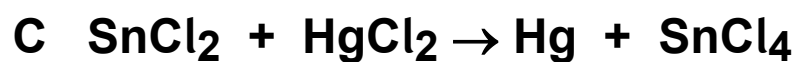
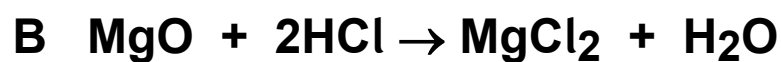
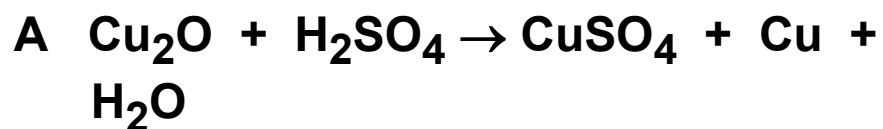
D Raising the temperature from 373 K to 473 K will increase the value of the equilibrium constant

[Turn over]



2 0

Which of these is NOT a redox reaction?
[1 mark]

**2 1**

Which of these has the highest first ionisation energy? [1 mark]

A Na

B Al

C Si

D Cl



2 2 What is the empirical formula of an oxide of nitrogen that contains 26% nitrogen by mass? [1 mark]

A NO_2

B N_2O_3

C N_2O_5

D N_4O_5

[Turn over]



2	3
---	---

Which species is NOT produced by a redox reaction between solid sodium iodide and concentrated sulfuric acid? [1 mark]

A Na_2SO_4

B H_2S

C S

D SO_2

15

END OF QUESTIONS



There are no questions printed on this page

For Examiner's Use	
Question	Mark
1	
2	
3	
4	
5	
6	
7	
8	
Section B	
TOTAL	

Copyright Information

For confidentiality purposes, from the November 2015 examination series, acknowledgements of third party copyright material will be published in a separate booklet rather than including them on the examination paper or support materials. This booklet is published after each examination series and is available for free download from www.aqa.org.uk after the live examination series.

Permission to reproduce all copyright material has been applied for. In some cases, efforts to contact copyright-holders may have been unsuccessful and AQA will be happy to rectify any omissions of acknowledgements. If you have any queries please contact the Copyright Team, AQA, Stag Hill House, Guildford, GU2 7XJ

Copyright © 2017 AQA and its licensors. All rights reserved.

IB/M/Jun17/PM/7404/1R/E6

