

A



Surname _____

Other Names _____

Centre Number _____

Candidate Number _____

Candidate Signature _____

Functional Skills Certificate
FUNCTIONAL MATHEMATICS

Level 1

4367

Thursday 8 November 2018 **Morning**

Time allowed: 1 hour 30 minutes

At the top of the page, write your surname and other names, your centre number, your candidate number and add your signature.


[Turn over]



N O V 1 8 4 3 6 7 0 1

For this paper you must have:

- a calculator
- mathematical instruments
- a copy of the Data Book (Examination) (enclosed).



INSTRUCTIONS

- Use black ink or black ball-point pen. Draw diagrams in pencil.
- Answer ALL questions.
- You must answer the questions in the spaces provided. Do not write on blank pages.
- If you need extra space for your answer(s), use the lined pages at the end of this book. Write the question number against your answer(s).
- Do all rough work in this book. Cross through any work you do not want to be marked.



3

- **State the units of your answer where appropriate.**

INFORMATION

- **The marks for questions are shown in brackets.**
- **The maximum mark for this paper is 60.**
- **You may ask for more answer paper, graph paper and tracing paper. These must be tagged securely to this answer book.**
- **Evidence of checking is specifically assessed in Questions 2(d) and 4(c). These questions are indicated with a †.**

ADVICE

- **In all calculations, show clearly how you work out your answer.**

DO NOT TURN OVER UNTIL TOLD TO DO SO



4

Answer ALL questions in the spaces provided.

1 ANGLING

There is a DATA SHEET for Angling.

1 (a) In an angling competition there are

- 7 semi-finals with 12 anglers**
- 5 semi-finals with 16 anglers**
- 3 semi-finals with 24 anglers.**

In total, how many anglers qualify for the final? [3 marks]



5

[Turn over]



BLANK PAGE



7

1 (b) Each semi-final lasts for 36 hours.

One semi-final starts at 09 00 on March 12th.

**When does this semi-final finish?
[1 mark]**

Circle your answer.

09 00 on March 13th

21 00 on March 12th

09 00 on March 14th

21 00 on March 13th

[Turn over]



8

1 (c) In one semi-final, the winner catches 10 fish.

The total weight of the 10 fish is 148 pounds.

In the same semi-final, Laura catches 6 fish.

The total weight of the 6 fish is 90 pounds.

Laura says,

“The mean weight of my fish is MORE THAN the mean weight of the winner’s fish.”

Is she correct?

**You MUST show your working.
[3 marks]**



[Turn over]



BLANK PAGE



1 (d) The weight of the heaviest fish Laura catches in the competition is 17 pounds.

Last year, in Australia, she caught a fish weighing 8.2 kilograms.

Which fish was heavier?

Use the steps on the data sheet to help you. [4 marks]

[Turn over]



1 (e) The table shows information about the 12 anglers in the final of a different competition.

| Angler | Total weight of fish | Number of fish | Heaviest fish |
|---------------|-----------------------------|-----------------------|----------------------|
| Todd | 117 lb | 6 | 25 lb 2 oz |
| Kevin | 88 lb | 3 | 34 lb 5 oz |
| Rose | 99 lb | 4 | 30 lb 0 oz |
| Lata | 123 lb | 6 | 27 lb 3 oz |
| Ben | 136 lb | 7 | 28 lb 7 oz |
| Amy | 131 lb | 10 | 19 lb 12 oz |
| Cath | 103 lb | 4 | 29 lb 4 oz |
| Harry | 70 lb | 3 | 31 lb 8 oz |

| | | | | |
|--------------|---------------|--------------|-----------|--------------------|
| Steve | 136 lb | 7 oz | 8 | 24 lb 13 oz |
| Ju | 129 lb | 4 oz | 9 | 32 lb 1 oz |
| Divit | 86 lb | 6 oz | 4 | 27 lb 10 oz |
| Fred | 130 lb | 14 oz | 11 | 18 lb 11 oz |

List the anglers who came first, second and third in this final. [3 marks]

13

First _____
Second _____
Third _____

14

[Turn over]



2 COUNCIL TAX

There is a DATA SHEET for Council Tax.

2(a) Matt, Sam and Tom are all 20 years old.

They share a home in Mossett.

The Council Tax band is E.

They are deciding how to pay the Council Tax.

Matt says, “We will pay 10 monthly payments.”

Sam says, “We will all pay the same amount.”

Tom says, “£60 each per monthly payment is enough.”



15

Is Tom correct?

You MUST show your working.
[4 marks]

[Turn over]



2 (b) Emmie is 23 years old.

She lives on her own in Kribly.

The Council Tax band for her home is B.

She says,

“With 25% discount my Council Tax will still be MORE THAN £1000 per year.”

Is she correct?

**You MUST show your working.
[5 marks]**



[Turn over]



18

2 (c) Emmie's parents live in Kribly.

They pay £2580 Council Tax.

How much of the £2580 does the council use for buses? [2 marks]

†2 (d) Dan and Mary are both disabled adults.

They live together in Heath.

The usual Council Tax band for their home is D.

Their home is adapted for their needs, so is re-banded.



19

By how much is their Council Tax reduced? [2 marks]

Check your answer.

Show how you have done your check. [1 mark]

[Turn over]

| |
|----|
| |
| 14 |



3 WINTER WONDERLAND

Winter Wonderland:

- **Lots of activities**
- **Fun for all ages**
- **Overnight stays available**

Jane has two children:

- **Meg, aged 4**
- **Jack, aged 8**

Jane is planning a visit to Winter Wonderland.



3 (a) Here are the ticket prices.

TICKET PRICES

£38 per adult or child aged 5 and over

£25 per child aged under 5

How much will Jane pay for tickets for herself and her two children? [2 marks]

[Turn over]



[Turn over]



3 (c) Jane and her children can choose what activities to do after lunch.

She has already booked these activities.

13 00 Mrs Christmas 20 minutes

15 30 Elves 30 minutes

Jane says, “We must choose what activities to do between the Mrs Christmas activity and the Elves activity. We want to do as many different activities as possible.”

The other activities available are

- Reindeer 30 minutes**
- Ice skating 50 minutes**
- Sleigh ride 20 minutes**
- Winter crafts 30 minutes**
- Treasure hunt 40 minutes**



25

Complete the plan for their activities on the pages 26 and 27.

You do NOT need to allow time between activities. [5 marks]

[Turn over]



Practise on this plan.

| Activity | Start time | Length of activity | End time |
|----------------------|-------------------|---------------------------|-----------------|
| Lunch | 12 00 | 1 hour | 13 00 |
| Mrs Christmas | 13 00 | 20 mins | 13 20 |
| Elves | 15 30 | 30 mins | 16 00 |



Use this plan for your answer.

| Activity | Start time | Length of activity | End time |
|----------------------|-------------------|---------------------------|-----------------|
| Lunch | 12 00 | 1 hour | 13 00 |
| Mrs Christmas | 13 00 | 20 mins | 13 20 |
| Elves | 15 30 | 30 mins | 16 00 |

[Turn over]



3 (d) Myra and some friends are going to Winter Wonderland.

They will stay for 3 nights.

Myra looks at the prices of different-sized lodges.

| Arrival date | Size of lodge | | |
|---------------------------------------|----------------------|---------------------|---------------------|
| | Sleeps 4 | Sleeps 5 | Sleeps 6 |
| Friday 23rd Nov (3 nights) | £320 | £385 | £455 |
| Friday 30th Nov (3 nights) | £378 | £439 | £495 |
| Friday 7th Dec (3 nights) | £410 | £450 | £545 |



Myra is booking lodges for 15 people.

They will arrive on Friday 7th December.

She can book three lodges that sleep 5 OR one lodge of each size.

She says,

“Booking three lodges that sleep 5 is cheaper by MORE THAN £50”

Is she correct?

**You MUST show your working.
[5 marks]**

[Turn over]



BLANK PAGE



31


[Turn over]

| |
|----|
| |
| 16 |

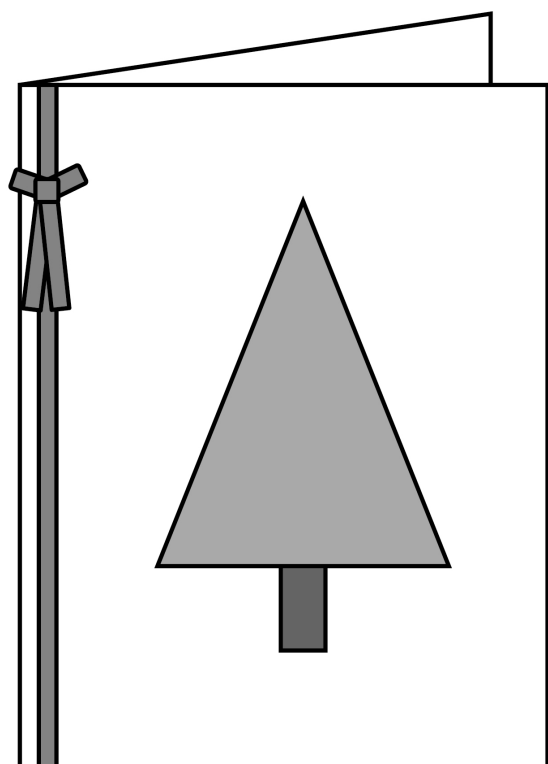


4 CHRISTMAS CARDS

Leah says, “I make and sell Christmas cards. I put designs onto card blanks.”



Card blank

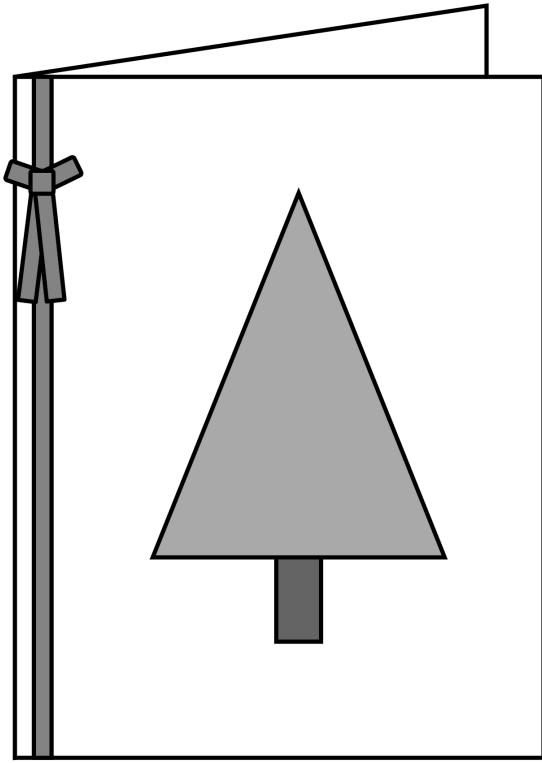


Card blank with design



33

Leah is designing a card with a Christmas tree picture.



[Turn over]

34

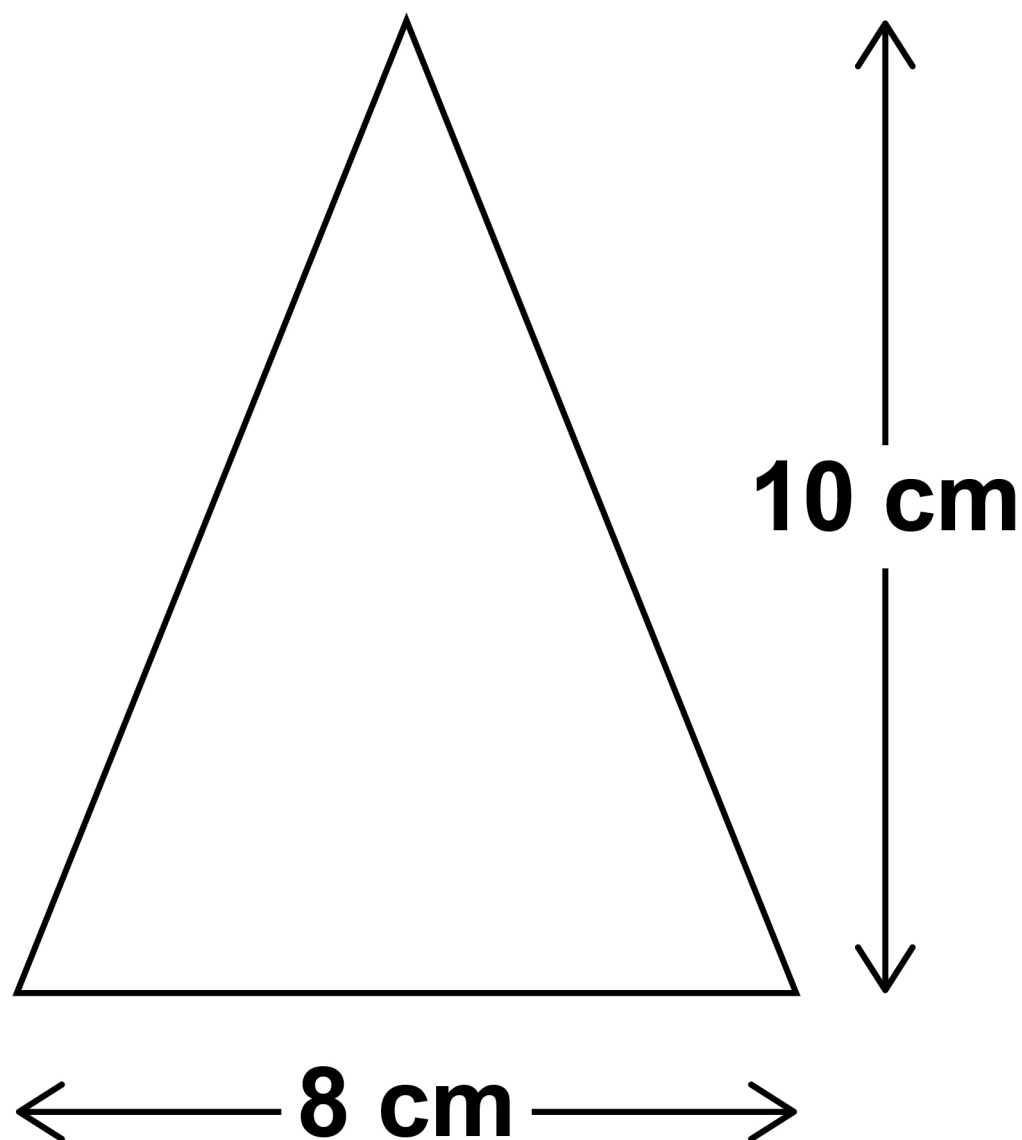
4 (a) Leah buys pieces of green felt.

Each piece is a 30 cm by 24 cm rectangle.

For the Christmas tree she cuts isosceles triangles from the felt.

Here is a sketch of one of the triangles.

It is not drawn accurately.



35

**Show that she can cut 15 of these triangles from one piece of felt.
[3 marks]**

Use the scale drawing on page 37.

One triangle is already drawn for you.

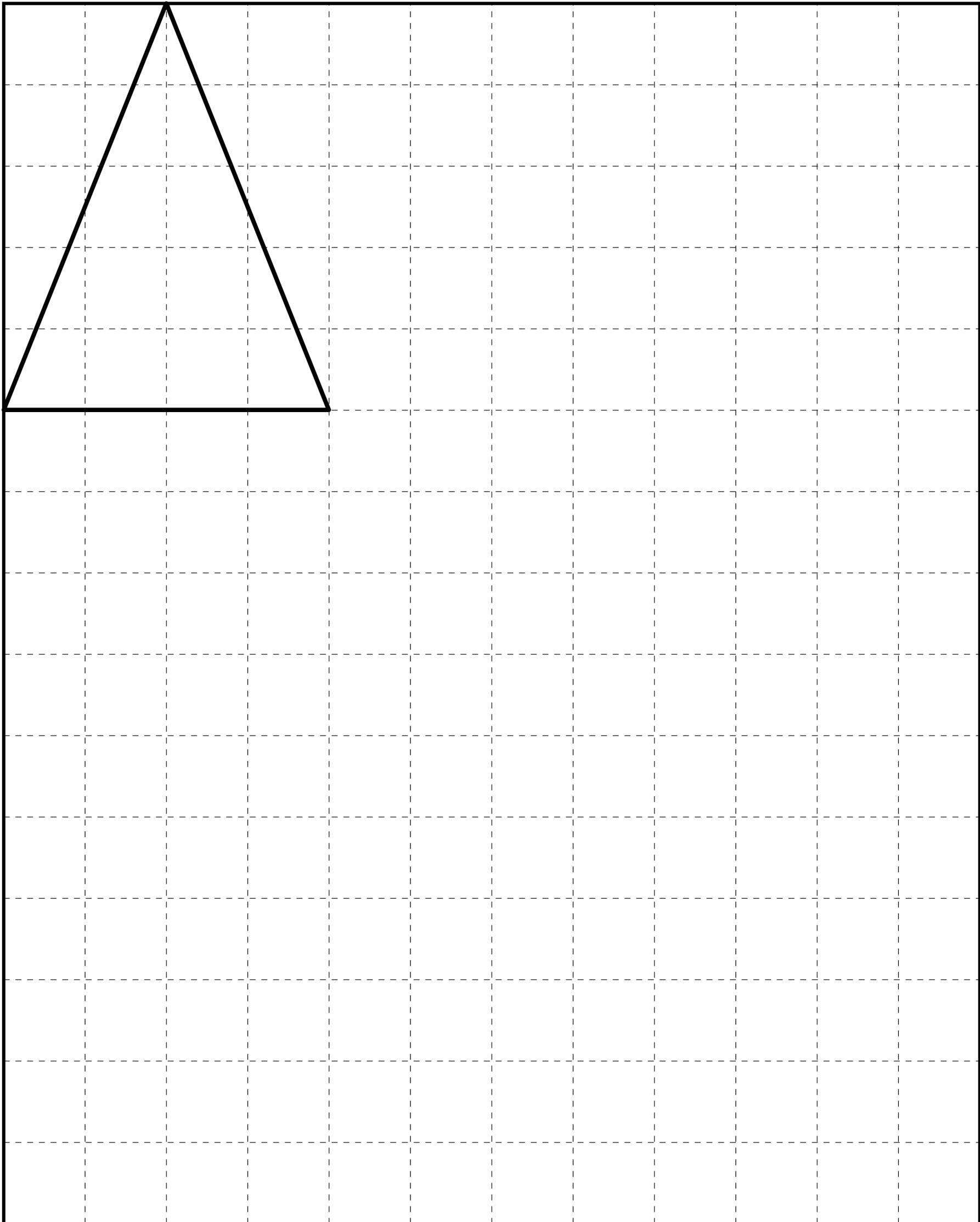
[Turn over]



BLANK PAGE



Scale: 1 square represents 2 cm



[Turn over]



38

Leah wants to make 60 cards with the Christmas tree design.

4 (b) Leah wants to add a bow made of ribbon to each card.

Each bow uses 40 cm of ribbon.

The ribbon costs £1.50 per 2-metre roll.

Leah says,

“It will cost £18 to buy the rolls of ribbon I need for 60 cards.”

Show that she is correct.

[4 marks]



Leah buys card blanks in packs of 10

†4 (c) Work out how many packs she needs for 60 cards. [2 marks]

Check your answer.

Show how you have done your check. [1 mark]

[Turn over]



40

4 (d) Card blanks cost £7.50 PER PACK.

The table shows the costs of the items she needs to decorate the card blanks.

| | Total cost |
|--------------------|-------------------|
| Felt | £4 |
| Ribbon | £18 |
| Other costs | £5.60 |

Leah sells all 60 cards for £2.75 each.

She says,

“I have made MORE THAN £90 profit on the cost of making the cards.”

Is she correct?

You MUST show your working.

[6 marks]

46

There are no questions printed on this page

| For Examiner's Use | |
|--------------------|------|
| Question | Mark |
| 1 | |
| 2 | |
| 3 | |
| 4 | |
| TOTAL | |

Copyright information

For confidentiality purposes, from the November 2015 examination series, acknowledgements of third party copyright material will be published in a separate booklet rather than including them on the examination paper or support materials. This booklet is published after each examination series and is available for free download from www.aqa.org.uk after the live examination series.

Permission to reproduce all copyright material has been applied for. In some cases, efforts to contact copyright-holders may have been unsuccessful and AQA will be happy to rectify any omissions of acknowledgements. If you have any queries please contact the Copyright Team, AQA, Stag Hill House, Guildford, GU2 7XJ.

Copyright © 2018 AQA and its licensors. All rights reserved.

IB/M/Nov18/CD/4367/E1

