

A



Surname \_\_\_\_\_

Other Names \_\_\_\_\_

Centre Number \_\_\_\_\_

Candidate Number \_\_\_\_\_

Candidate Signature \_\_\_\_\_

# Functional Skills Certificate

## FUNCTIONAL MATHEMATICS

Level 2

**4368**

Thursday 8 November 2018

Morning

Time allowed: 1 hour 30 minutes

For this paper you must have:

- a calculator
- mathematical instruments
- a copy of the Data Book (Examination) (enclosed).



At the top of the page, write your surname and other names, your centre number, your candidate number and add your signature.

[Turn over]



N 0 V 1 8 4 3 6 8 0 1

## **INSTRUCTIONS**

- **Use black ink or black ball-point pen. Draw diagrams in pencil.**
- **Answer ALL questions.**
- **You must answer the questions in the spaces provided. Do not write on blank pages.**
- **If you need extra space for your answer(s), use the lined pages at the end of this book. Write the question number against your answer(s).**
- **Do all rough work in this book. Cross through any work you do not want to be marked.**
- **State the units of your answer where appropriate.**

## **INFORMATION**

- **The marks for questions are shown in brackets.**
- **The maximum mark for this paper is 60.**
- **You may ask for more answer paper, graph paper and tracing paper. These must be tagged securely to this answer book.**
- **Evidence of checking is specifically assessed in Questions 2(d) and 3(a). These questions are indicated with a †.**

## **ADVICE**

- **In all calculations, show clearly how you work out your answer.**

**DO NOT TURN OVER UNTIL TOLD TO DO SO**

Answer ALL questions in the spaces provided.

## 1 ANGLING

There is a DATA SHEET for Angling.

- 1 (a) In an angling competition there are seven quarter-finals.

The table shows the number of anglers in each of the quarter-finals.

Quarter-final 1	15 anglers	Semi-final 1	Final
Quarter-final 2	12 anglers		
Quarter-final 3	12 anglers		
Quarter-final 4	9 anglers		
Quarter-final 5	12 anglers	Semi-final 2	
Quarter-final 6	12 anglers		
Quarter-final 7	12 anglers		

How many anglers qualify for the final?

You MUST show your working. [4 marks]



---

---

---

---

---

---

---

---

---

---

---

---

---

---

---

---

---

---

---

---

---

---

---

---

---

---

**[Turn over]**



1 (b) John and Lata are in one of the quarter-finals.

Here are the weights of the fish they have caught in the first 12 hours.

John      17 lb 2 oz      19 lb 12 oz      16 lb 13 oz      20 lb 5 oz

Lata      18 lb 4 oz      17 lb 1 oz      18 lb 11 oz

John says,

“The mean weight of my fish is MORE THAN the mean weight of Lata’s fish.”

Is he correct?

You MUST show your working. [5 marks]

---

---

---

---

---

---

---

---



---

---

---

---

---

---

---

---

---

---

---

---

---

---

---

---

---

---

---

---

---

---

---

---

---

---

---

**[Turn over]**



1 (c) The weight of the heaviest fish that John catches is 20 lb 3 oz

Last year, in Australia, he caught a fish weighing 9 kg 120 g

John says,

“The fish I caught in Australia was heavier.”

Is he correct?

You MUST show your working. [5 marks]

---

---

---

---

---

---

---

---

---

---

---

---

---

---





---

---

---

---

---

---

---

---

---

---

---

---

---

---

---

---

---

---

---

---

---

---

---

---

---

---

[Turn over]



**2 COUNCIL TAX**

**There is a DATA SHEET for Council Tax.**

**2 (a) Tom and Mary are both 47 years old.**

**They share a home in Kribly.**

**The Council Tax is band G.**

**They pay their Council Tax in 10 monthly payments.**

**Work out the Council Tax payment for April.  
[3 marks]**

---

---

---

---

---

---

---

---

---

---

---

---



**BLANK PAGE**

**[Turn over]**



- 2 (b) Dan is disabled and lives on his own.  
His home is NOT adapted for his needs.  
He moves to a new home.  
He makes these notes.

	Old home	New home
Area	Heath	Mossett
Usual band	C	D
25% discount	Yes	Yes

Dan will adapt his new home in Mossett for his needs.

He says,

“My Council Tax will then be cheaper than I paid in Heath by at least £100”

Is he correct?

You MUST show your working. [6 marks]

---

---

---



---

---

---

---

---

---

---

---

---

---

**[Turn over]**



2 (c) In Waybridge, the total income from Council Tax is £38 320 000

Estimate how much of the £38 320 000 the council spends on buses each week.

Give your answer to a suitable degree of accuracy.  
[3 marks]

---



---



---



---



---



---



---

David is calculating the Council Tax in Bretton, another part of Waybridge.

The Council Tax for band D is £1504.44

He works out the Council Tax in the other bands using these proportions.

	A	B	C	D	E	F	G	H
Proportion of band D	$\frac{6}{9}$	$\frac{7}{9}$	$\frac{8}{9}$	1	$\frac{11}{9}$	$\frac{13}{9}$	$\frac{15}{9}$	$\frac{18}{9}$



†2 (d) Work out the Council Tax in band B. [2 marks]

---

---

---

Check your answer.

Show how you have done your check. [1 mark]

---

---

---

2 (e) How many times bigger is the Council Tax in band H than in band A?

Circle your answer. [1 mark]

$\frac{12}{9}$

2

3

12


[Turn over]

16




### 3 CHRISTMAS CARDS

Leah says, “I make and sell Christmas cards. I put designs onto card blanks.”



**Card blank**



**Card blank with design**





†3 (a) You buy card blanks in packs.

<p><b>CARD BLANKS</b> <b>Packs of 15</b> <b>Only £6.49</b></p>
--

**Work out the cost of 60 of these card blanks.**  
**[2 marks]**

---

---

---

---

---

---

---

**Check your answer.**  
**Show how you have done your check. [1 mark]**

---

---

---

---

---


---

---



**[Turn over]**

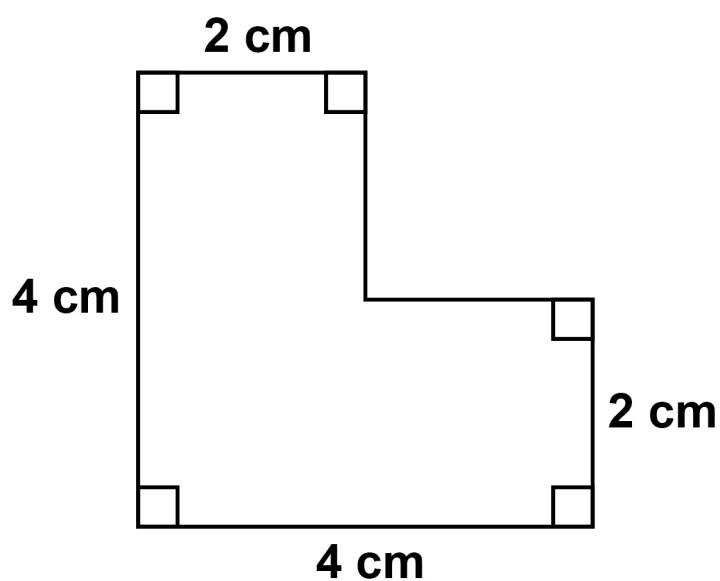
Leah is designing a card with a chimney and a PAIR of Santa's boots.



- 3 (b) Leah cuts the boots from sheets of paper measuring 13 cm by 10 cm

Here is a sketch of one of the boots.


It is not drawn accurately.



Show how 10 boots can be cut from a 13 cm by 10 cm sheet.

Use the grids below and on page 21. [3 marks]

Practise on this grid.



[Turn over]

BLANK PAGE




Put your answer on this grid.


[Turn over]



3 (c) Leah makes 150 cards with this design.



She uses 15 sheets of red felt for the chimneys.

She buys a bulk pack of 150 card blanks.

This table shows the costs of the items she needs for the cards.

Item	Cost
Paper for boots	75p per sheet
Red felt	£1.40 per sheet
150 card blanks	£43.50
Other costs	£16.50



**Leah sells each card for £1.20**

**She says,**

**“My profit will be MORE THAN 65% of the cost of making the cards.”**

**Is she correct? [8 marks]**

**You MUST show your working.**

---

---

---

---

---

---

---

---

---

---

---

---

---

---

---

---

---

---

---

---

---

---

---

---

**[Turn over]**







---

---

---

---

---

---

---

---

---

---

---

---

---

---

---

---

---

---

---

---

---

---

---

[Turn over]



4 WINTER WONDERLAND

**Winter Wonderland**

**Lots of activities:**

- **Fun for all ages**
- **Overnight stays available**

**Jane and Mike have two children:**

- **Meg, aged 4**
- **Jack, aged 8**

**Jane and her family are planning a visit to Winter Wonderland.**

**4 (a) Here are the ticket prices.**

**TICKET PRICES**

**£38 per adult or child aged 5 and over**

**£25 per child aged under 5**

**plus £5 booking fee per family**



**Altogether, how much will Jane pay for herself and her family? [3 marks]**

---

---

---

---

---

---

---

---

---

---

**[Turn over]**



**4 (b) The activities at Winter Wonderland start at 10 am**

- **Jane and her family want to arrive 45 minutes before the first activity starts.**
- **They live 80 miles away.**
- **Jane will drive at an average speed of 50 miles per hour.**

**What is the LATEST time they should set off?  
[4 marks]**

---

---

---

---

---

---

---

---

---

---

---

---

---

---

---

---



---

---

**[Turn over]**



4 (c) Jane has already booked the following activities.

Time	Activity	Length of activity
10 00	Christmas theatre	40 minutes
13 30	Mrs Christmas	40 minutes
16 10	Elves	30 minutes

She has also booked lunch at the Boat Inn from 12 30 to 13 20

Jane is planning other activities for the rest of the day.

Jane says,

“We need at least 10 minutes between activities and before and after lunch. We want to do as many different activities as possible. We will leave after the Elves activity.”



Here are the other activities.  
Each activity can start at any time.

Activity	Length
Snow tubing	40 minutes
Reindeer	30 minutes
Ice skating	50 minutes
Sleigh ride	20 minutes
Winter crafts	30 minutes
Treasure hunt	40 minutes

Write a plan for the day, showing the start and end times of each activity. [5 marks]

---

---

---

---

---

---

---

---

[Turn over]



---



---



---



---



---



---



---



---



---



---



---



---



---



---



---



---



---



---



---



---



---



---





---

---

---

---

---

---

---

---

---

---

---

---

---

---

---

---

---

---

---

---

---

---

---

---

---

---

[Turn over]



4 (d) Myra and some friends are going to Winter Wonderland.

They will stay for 3 nights.

Myra looks at the prices of different-sized lodges.

Arrival date	Size of Lodge		
	Sleeps 4	Sleeps 5	Sleeps 6
Friday 23rd Nov (3 nights)	£320	£385	£455
Friday 30th Nov (3 nights)	£378	£439	£495
Friday 7th Dec (3 nights)	£410	£450	£545

Myra is booking lodges for 20 people.

They will arrive on Friday 30th November.

What is the cheapest possible price for her booking?

State clearly how many of each type of lodge to book. [4 marks]

---



---



---



---

---

---

---

---

---

---

---

---

---

---

---

---

---

---

---

---

---

---

---

---

---

---

---

---

---

---

---

---

---

END OF QUESTIONS

16



**Additional page, if required.**

**Write the question numbers in the left-hand margin.**






**Additional page, if required.**

**Write the question numbers in the left-hand margin.**

Lined writing area with a vertical margin line on the left and horizontal lines for writing.



**Additional page, if required.**

**Write the question numbers in the left-hand margin.**

---

---

---

---

---

---

---

---

---

---

---

---

---

---

---

---

---

---

---

---

---

---

---



**There are no questions printed on this page**

For Examiner's Use	
Question	Mark
1	
2	
3	
4	
<b>TOTAL</b>	

### **Copyright information**

For confidentiality purposes, from the November 2015 examination series, acknowledgements of third-party copyright material will be published in a separate booklet rather than including them on the examination paper or support materials. This booklet is published after each examination series and is available for free download from [www.aqa.org.uk](http://www.aqa.org.uk) after the live examination series.

Permission to reproduce all copyright material has been applied for. In some cases, efforts to contact copyright-holders may have been unsuccessful and AQA will be happy to rectify any omissions of acknowledgements. If you have any queries please contact the Copyright Team, AQA, Stag Hill House, Guildford, GU2 7XJ.

Copyright © 2018 AQA and its licensors. All rights reserved.

**IB/M/Nov18/CD/4368/E2**

