

A



Surname \_\_\_\_\_

Other Names \_\_\_\_\_

Centre Number \_\_\_\_\_

Candidate Number \_\_\_\_\_

Candidate Signature \_\_\_\_\_

**GCSE  
MATHEMATICS**

**F**

Foundation Tier      Paper 3 Calculator

**8300/3F**

**Monday 12 November 2018**

**Morning**

**Time allowed: 1 hour 30 minutes**

**For this paper you must have:**

- a calculator
- mathematical instruments.



**At the top of the page, write your surname and other names, your centre number, your candidate number and add your signature.**

**[Turn over]**



N 0 V 1 8 8 3 0 0 3 F 0 1

**BLANK PAGE**



## **INSTRUCTIONS**

- **Use black ink or black ball-point pen. Draw diagrams in pencil.**
- **Answer ALL questions.**
- **You must answer the questions in the spaces provided. Do not write on blank pages.**
- **Do all rough work in this book. Cross through any work you do not want to be marked.**

## **INFORMATION**

- **The marks for questions are shown in brackets.**
- **The maximum mark for this paper is 80.**
- **You may ask for more answer paper, graph paper and tracing paper. These must be tagged securely to this answer book.**

## **ADVICE**

**In all calculations, show clearly how you work out your answer.**

**DO NOT TURN OVER UNTIL TOLD TO DO SO**



**Answer ALL questions in the spaces provided**

**1 Add 8 mm to 7 cm**

**Circle your answer. [1 mark]**

**150 mm**

**1.5 cm**

**7.8 cm**

**708 mm**

**2 In a pie chart, one sector represents  $\frac{1}{4}$  of the data.**

**What is the angle of that sector?**

**Circle your answer. [1 mark]**

**$4^\circ$**

**$25^\circ$**

**$45^\circ$**

**$90^\circ$**

**3 Which of these CANNOT be the number of lines of symmetry of a triangle?**

**Circle your answer. [1 mark]**

**0**

**1**

**2**

**3**



4 Circle the fraction equal to 0.12 [1 mark]

$$\frac{1}{12}$$

$$\frac{3}{25}$$

$$\frac{1}{8}$$

$$\frac{6}{5}$$

5 (a) Solve  $n + 7 = 103$  [1 mark]

---

---

---

$n =$  \_\_\_\_\_

5 (b) Solve  $\frac{m}{6} = 12$  [1 mark]

---

---

---

$m =$  \_\_\_\_\_

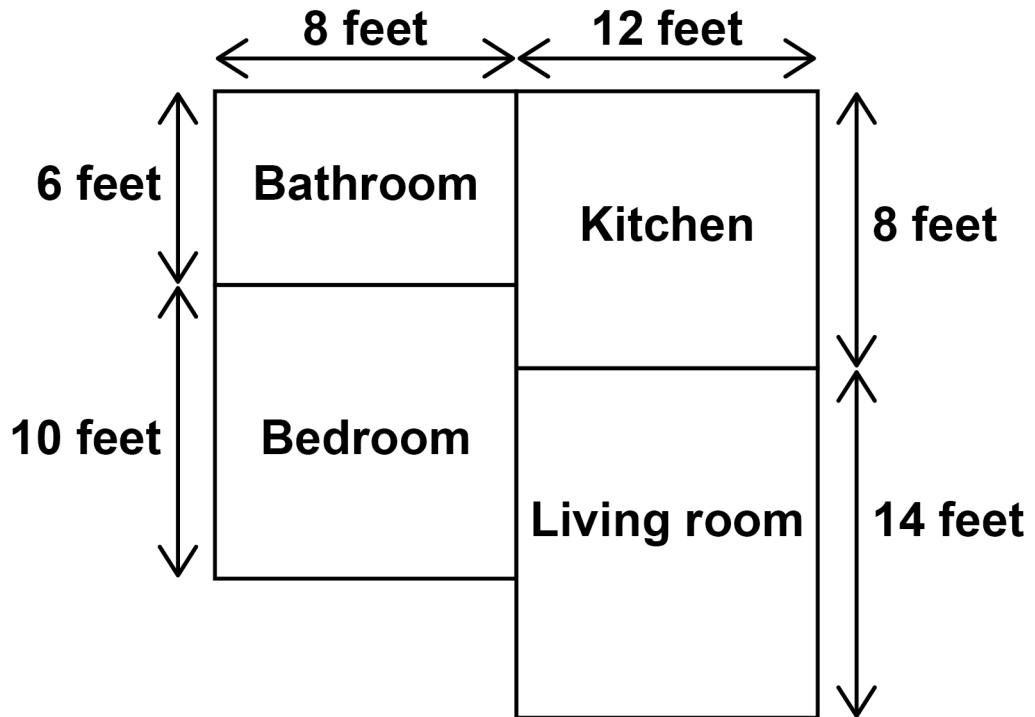
[Turn over]



6

6 Here is a plan of a flat with four rectangular rooms.

The diagram is not drawn accurately.




On the grid on the opposite page, make an accurate scale drawing of the plan.

Label each room.

Take the sides of each square to be 1 cm.

Use a scale of 1 cm represents 2 feet [3 marks]





0 7

**[Turn over]**

3

7 Here are two groups of numbers, A and B.

Group A

19	11
14	32
16	9

Group B

31	18
28	12

One number is moved from A to B.

The sum of the numbers in B is now 20 MORE than the sum of the numbers in A.

Which number is moved?

You MUST show your working. [3 marks]

---

---

---

---

---

---

---

---





---

---

---

---

---

---

---

---

---

---


**Answer** \_\_\_\_\_

**[Turn over]**



8 Beth sells hot dogs at a market.

Each hot dog is a sausage in a bread roll.



Hot dogs £3 each

The table shows her costs.

Fee paid to market	£240
Bread rolls	42p per pack of 6
Sausages	£2.50 per jar of 10
Other costs	£57

Beth sells the hot dogs for £3 each.

She sells 300 hot dogs.

Work out her total profit. [5 marks]

---

---

---





9 A company sells houses.

The line graph shows the number sold per week for 30 weeks.

### HOUSES SOLD

Number  
of weeks



9 (a) Work out the range of the number of houses sold per week. [2 marks]

---

---

---

Answer \_\_\_\_\_



9 (b) Work out the median number of houses sold per week. [2 marks]

---

---

---

Answer \_\_\_\_\_

[Turn over]

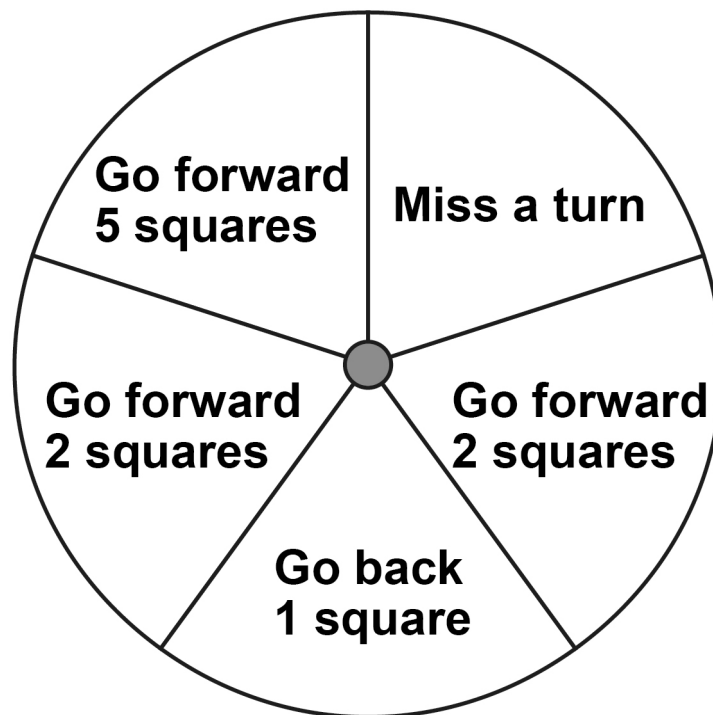


**BLANK PAGE**





- 10 In a game, a fair spinner has five equal sections as shown.



- 10 (a) Chloe spins the spinner.

Write down the probability that she gets 'Miss a turn'. [1 mark]

Answer \_\_\_\_\_





10 (b) The spinner lands on 'Go back 1 square' three times in a row.

Jamal is next to spin.

Write down the probability that he gets 'Go back 1 square'. [1 mark]

Answer \_\_\_\_\_

10 (c) In one game there are 85 spins.

How many of these spins are expected to be 'Go forward 2 squares'? [2 marks]

---

---

---

---

---

---

---

---

Answer \_\_\_\_\_

[Turn over]



11 Circle the cube number. [1 mark]

9

10 000

333

729

12 How many minutes is 225 seconds?

Circle your answer. [1 mark]

$2 \frac{5}{12}$

$2 \frac{1}{4}$

$3 \frac{1}{4}$

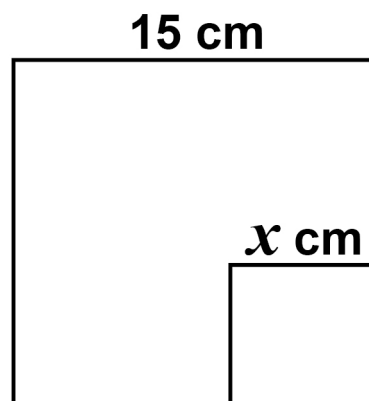
$3 \frac{3}{4}$

6

13 A small square has length  $x$  cm

A large square has length 15 cm

The diagram is not drawn accurately.





14 (a) The term-to-term rule of a sequence is

Add 8 and divide by 2

The first term of the sequence is  $-24$

Work out the next two terms. [2 marks]

---

---

---

---

---

---

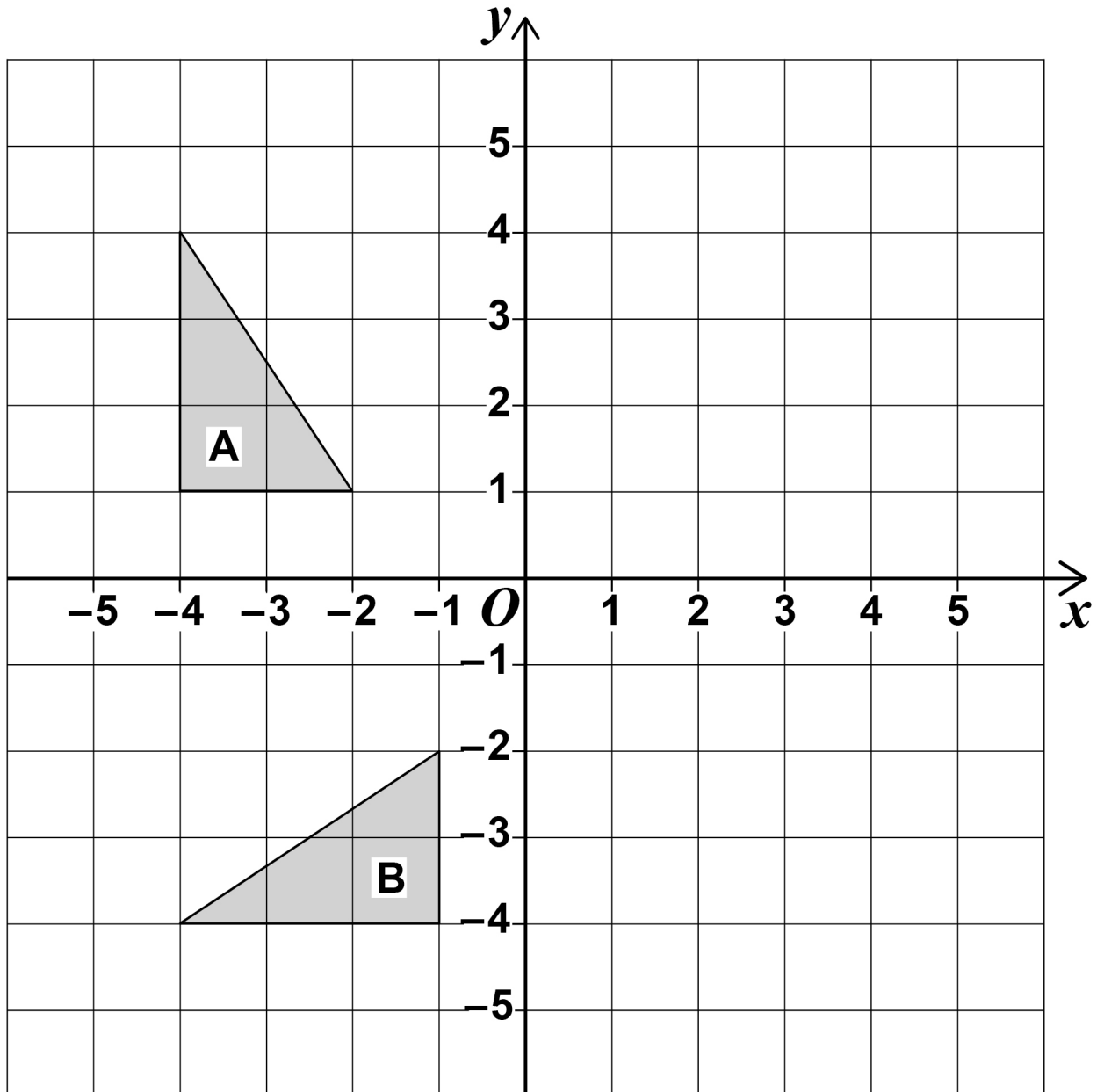
---

Answer \_\_\_\_\_ and \_\_\_\_\_





- 15 Describe fully the SINGLE transformation that maps shape A to shape B. [3 marks]



---

---

---

---

---

---

---

**[Turn over]**



**16 Amal drives her car for work.**

**She claims 40p per mile from her employer.**

**Amal's car travels 52 miles for each gallon of petrol.**

**She pays £5.36 per gallon for petrol.**

**On one journey Amal drives 260 miles.**

**For this journey, how much MORE does she claim than she pays for petrol? [4 marks]**

---

---

---

---

---

---

---

---

---

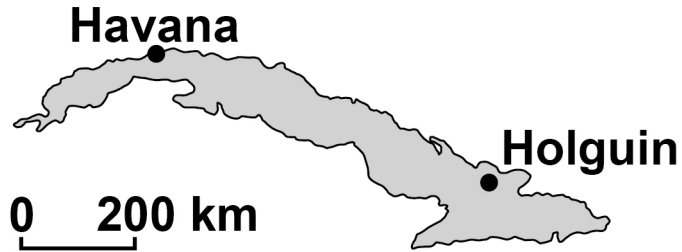
---

---





- 17 Here is a map of Cuba.  
The scale line below represents 200 km



Work out the actual distance from Havana to Holguin. [3 marks]

---

---

---

---

---

---

---

Answer \_\_\_\_\_ km



18 Four friends all give each other presents.  
The total cost of the presents is £83.40  
Work out the mean cost of a present. [3 marks]

---

---

---

---

---

---

---

---

Answer £ \_\_\_\_\_

[Turn over]



6

19 A forest has 6500 trees.

The trees are beech or maple.

number of beech : number of maple = 1.6 : 1

19 (a) What fraction of the trees are beech? [2 marks]

---

---

---

---

---

---

---

---

Answer \_\_\_\_\_

19 (b) Write number of beech : number of maple in the form  $1 : n$  [1 mark]

Answer \_\_\_\_\_ :

[Turn over]



20 A shape is translated by the vector  $\begin{pmatrix} 0 \\ 4 \end{pmatrix}$

In which direction does the shape move?

Circle your answer. [1 mark]

up

down

left

right

21 The length of a table is 110 cm to the nearest cm

Complete the error interval. [2 marks]

\_\_\_\_\_ cm  $\leq$  length < \_\_\_\_\_ cm

6



**BLANK PAGE**

**[Turn over]**







---

---

---

---

---

---

---

---

---

---

**[Turn over]**





---

---

---

---

---

---

---

---

---

---

Tea

---

Coffee

---

7

[Turn over]



**24** A music festival has taken place each year from 2011

The table shows the number of people who attended each year.

<b>Year</b>	<b>2011</b>	<b>2012</b>	<b>2013</b>	<b>2014</b>
<b>Number of people</b>	<b>350</b>	<b>583</b>	<b>906</b>	<b>1471</b>

<b>Year</b>	<b>2015</b>	<b>2016</b>	<b>2017</b>	<b>2018</b>
<b>Number of people</b>	<b>2023</b>	<b>2612</b>	<b>3251</b>	<b>3780</b>

The festival organisers draw a time series graph to represent the data.

The first four years have been plotted.

**24 (a)** Complete the graph on page 37. [2 marks]

**24 (b)** Use the graph to estimate the number of people who will attend the festival in 2019 [2 marks]

---



---

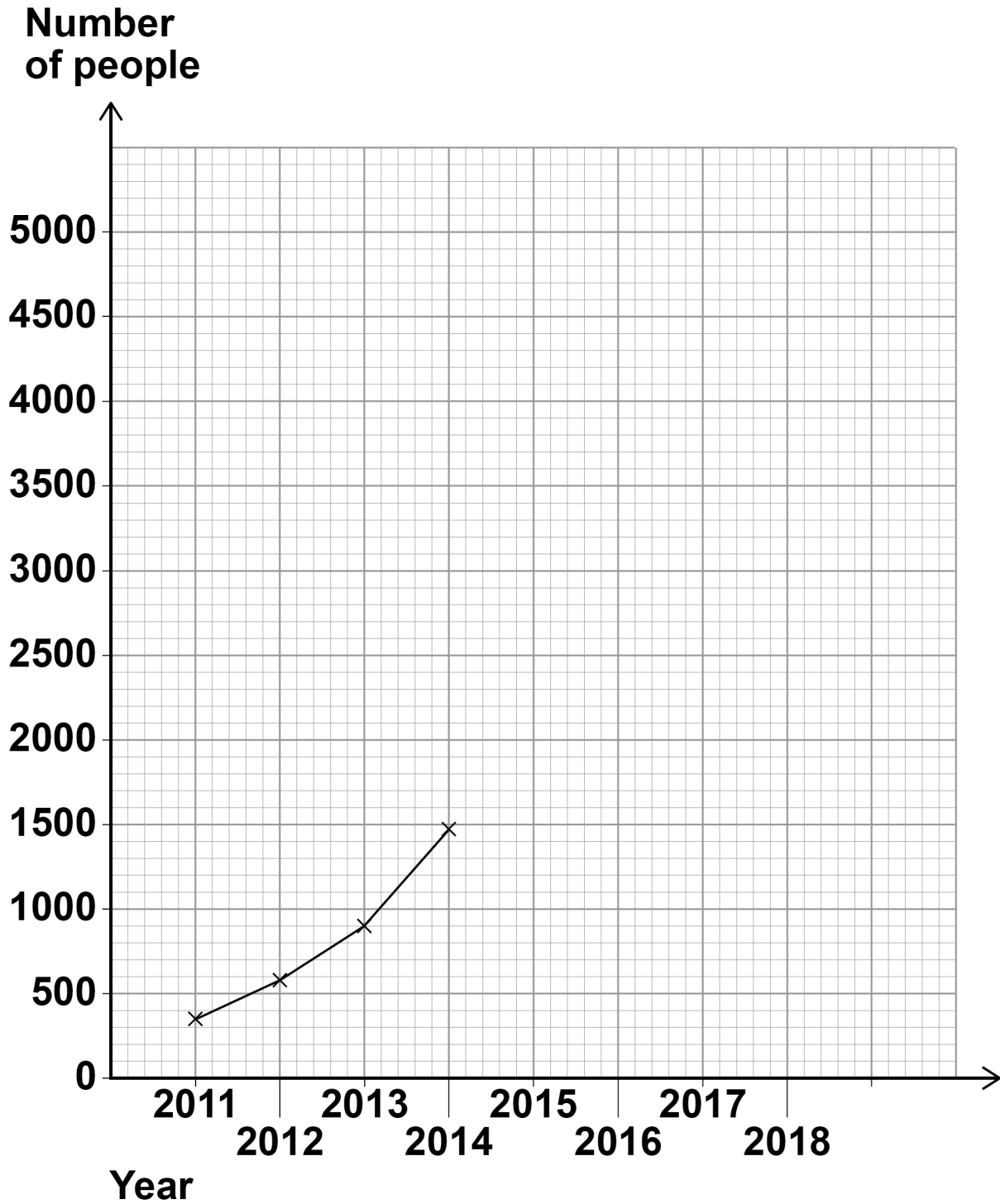


---

**Answer**

---





[Turn over]

4





---

---

---

---

---

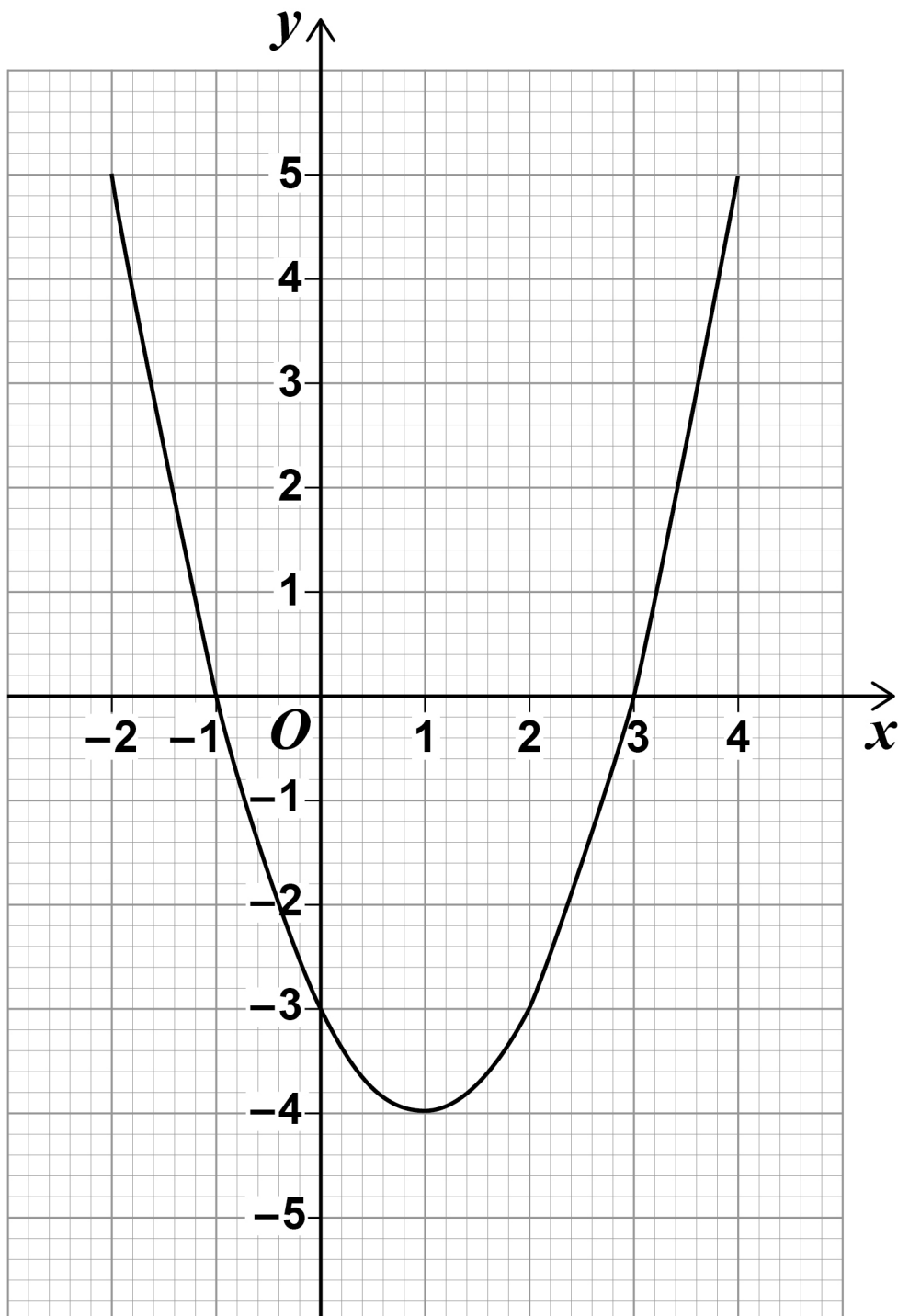
---

---

**[Turn over]**



26 Here is a quadratic graph.





41

Circle the  $x$ -coordinate of the turning point of the graph. [1 mark]

-4

-1

1

3

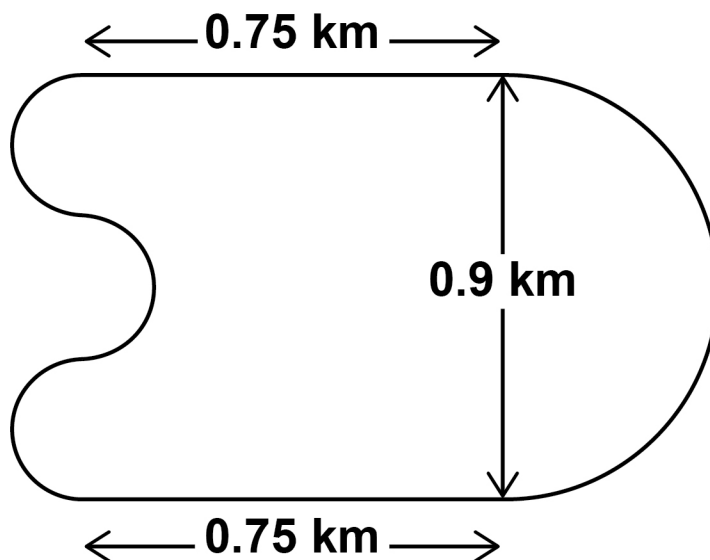
[Turn over]

4



- 27 A motor racing circuit consists of
- two parallel straight sections, each of length 0.75 km
  - a semicircle of diameter 0.9 km
  - three equal, smaller semicircles.

The diagram is not drawn accurately.



The length of a motor race must be greater than 305 km

What is the lowest number of FULL laps needed at this circuit?

You MUST show your working. [5 marks]





28 Solve  $8 > 3 - \frac{1}{2}x$  [2 marks]

---

---

---

---

---

---

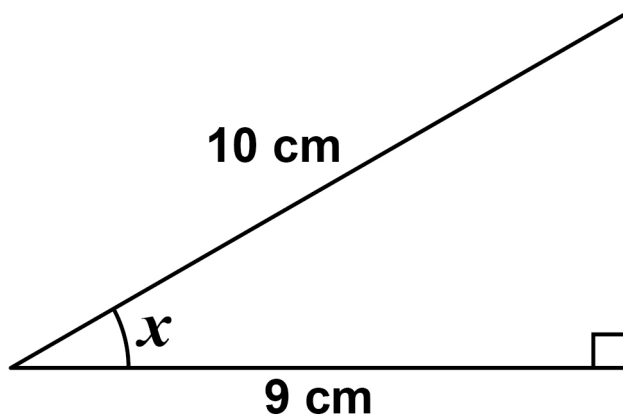
---

---

Answer \_\_\_\_\_

29 Use trigonometry to work out the size of angle  $x$ .  
[2 marks]

The diagram is not drawn accurately.





**There are no questions printed on this page**

For Examiner's Use	
Pages	Mark
4–5	
6–7	
8–11	
12–15	
16–18	
19–21	
22–25	
26–27	
28–30	
32–35	
36–37	
38–41	
42–45	
<b>TOTAL</b>	

### Copyright information

For confidentiality purposes, from the November 2015 examination series, acknowledgements of third-party copyright material will be published in a separate booklet rather than including them on the examination paper or support materials. This booklet is published after each examination series and is available for free download from [www.aqa.org.uk](http://www.aqa.org.uk) after the live examination series.

Permission to reproduce all copyright material has been applied for. In some cases, efforts to contact copyright-holders may have been unsuccessful and AQA will be happy to rectify any omissions of acknowledgements. If you have any queries please contact the Copyright Team, AQA, Stag Hill House, Guildford, GU2 7XJ.

Copyright © 2018 AQA and its licensors. All rights reserved.

**IB/M/Nov18/CD/8300/3F/E4**

