



Cambridge International AS & A Level

CANDIDATE NAME



CENTRE NUMBER

--	--	--	--	--

CANDIDATE NUMBER

--	--	--	--



MARINE SCIENCE

9693/31

Paper 3 A Level Theory

October/November 2025

1 hour 45 minutes

You must answer on the question paper.

No additional materials are needed.

INSTRUCTIONS

- Answer **all** questions.
- Use a black or dark blue pen. You may use an HB pencil for any diagrams or graphs.
- Write your name, centre number and candidate number in the boxes at the top of the page.
- Write your answer to each question in the space provided.
- Do **not** use an erasable pen or correction fluid.
- Do **not** write on any bar codes.
- You may use a calculator.
- You should show all your working and use appropriate units.

INFORMATION

- The total mark for this paper is 75.
- The number of marks for each question or part question is shown in brackets [].

This document has **16** pages. Any blank pages are indicated.





Section A

Answer **all** questions in this section.

1 (a) Fig. 1.1 shows the life cycle of a jellyfish.

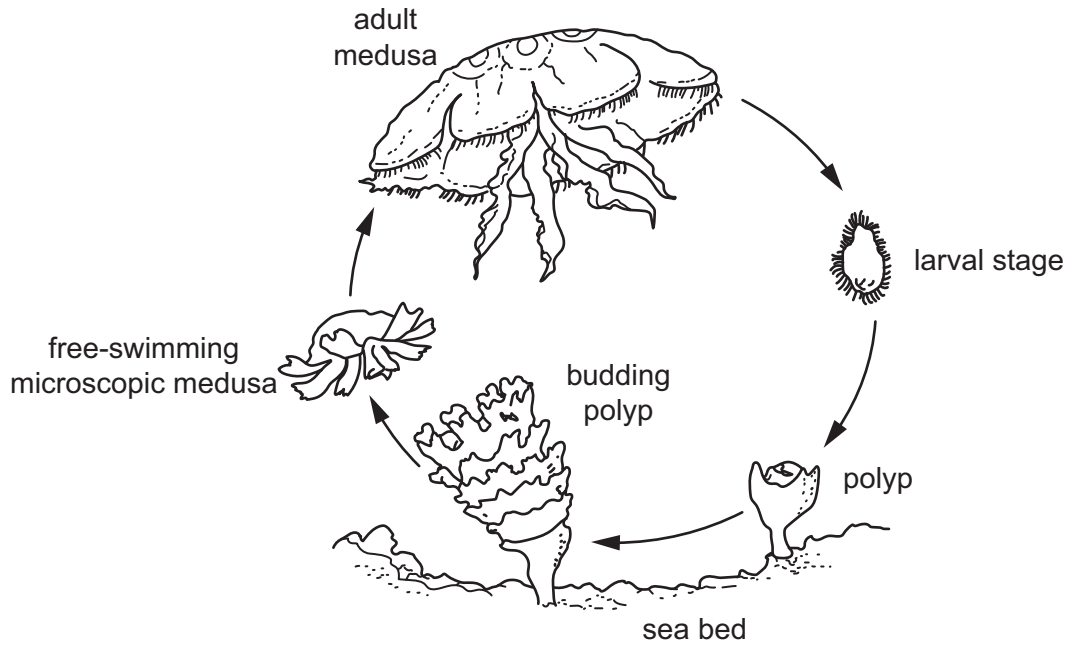


Fig. 1.1

(i) Use Fig. 1.1 to state the type of life cycle shown by the jellyfish **and** give **two** reasons for your answer.

type of life cycle

reason 1

reason 2

[3]

(ii) Polyps are sessile and adult medusae are non-sessile.

State **one** advantage of having a non-sessile stage in the life cycle.

..... [1]

DO NOT WRITE IN THIS MARGIN

DO NOT WRITE IN THIS MARGIN

DO NOT WRITE IN THIS MARGIN

DO NOT WRITE IN THIS MARGIN

DO NOT WRITE IN THIS MARGIN



- 2 (a) Atlantic cod swim at slow speeds just above the sea bed. They use pumped ventilation.

Fig. 2.1 shows an Atlantic cod.



Fig. 2.1

Explain the role of the operculum in pumped ventilation.

.....

.....

.....

.....

.....

.....

..... [3]

- (b) Atlantic cod feed on benthic invertebrates and fish. Cod prefer to be in deep, cold waters when hunting prey during the day and to rest in shallow, warm waters at night.

The rate of operculum movements decreases with decreasing temperatures.

- (i) Explain why the decrease in the rate of operculum movements is an advantage when hunting for prey in colder waters.

.....

.....

.....

.....

.....

..... [3]

DO NOT WRITE IN THIS MARGIN





- (ii) After the prey has been swallowed, it forms a ball in the stomach where it is digested. Digestion involves enzymes breaking down larger molecules of food into smaller ones so that they can be absorbed into the blood. Digestion can take many hours.

Suggest the disadvantages to the cod of eating too much prey at once.

.....

.....

.....

..... [2]

- (iii) Fig. 2.2 shows the effect of temperature on the rate of digestion of food by enzymes.

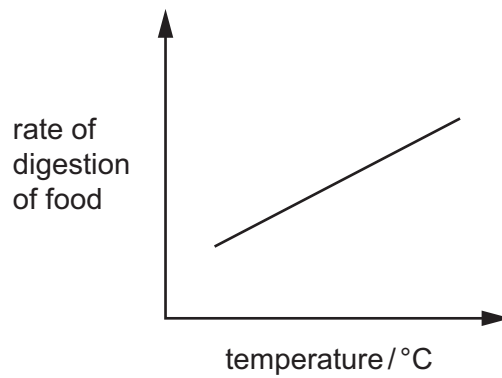


Fig. 2.2

Use **all** the information provided to suggest why cod rest in warm, shallow waters at night and **not** in deep waters.

.....

.....

.....

.....

.....

..... [3]

[Total: 11]



DO NOT WRITE IN THIS MARGIN



- 3 (a) Île du Grand-Connétable is an uninhabited island situated 15km from the coast of French Guiana, in South America. It is a steep-sided, treeless rock that provides nesting sites for thousands of seabirds. The island and the waters around it have been designated a marine protected area because of the high biodiversity both in the sea and on land.

Fig. 3.1 shows a photograph of part of the island.



Fig. 3.1

- (i) The site conserves species such as the Atlantic goliath grouper and the Guiana dolphin, which are both on the International Union for Conservation of Nature (IUCN) Red List.

State why some species are listed on the IUCN Red List.

.....
 [1]

- (ii) The main sources of income for local people on Île du Grand-Connétable are commercial and recreational fishing as well as tourism. The site is managed locally and includes science activities for local schoolchildren and visitors.

Suggest **and** explain possible conflicts of interests which could occur between some local people and conservationists.

.....

 [3]

DO NOT WRITE IN THIS MARGIN

DO NOT WRITE IN THIS MARGIN

DO NOT WRITE IN THIS MARGIN

DO NOT WRITE IN THIS MARGIN

DO NOT WRITE IN THIS MARGIN





(iii) In 2020, Île du Grand-Connétable was added to the IUCN Green List of protected and conserved areas. IUCN Green List sites are certified for being managed effectively.

Suggest how this marine protected area could be managed effectively to produce a long-term positive impact on people and nature.

.....
.....
.....
.....
.....
.....
.....
..... [4]

(iv) Suggest the possible effects of **excessive** conservation of the Atlantic goliath grouper and the Guiana dolphin.

.....
.....
.....
..... [2]

(b) (i) State the meaning of the term ecotourism.

.....
..... [1]

(ii) Suggest **two** ways marine protected areas can benefit from ecotourism.

1
.....
2
..... [2]

[Total: 13]

DO NOT WRITE IN THIS MARGIN







4 (a) Fig. 4.1 shows a chloroplast from a red mangrove leaf.

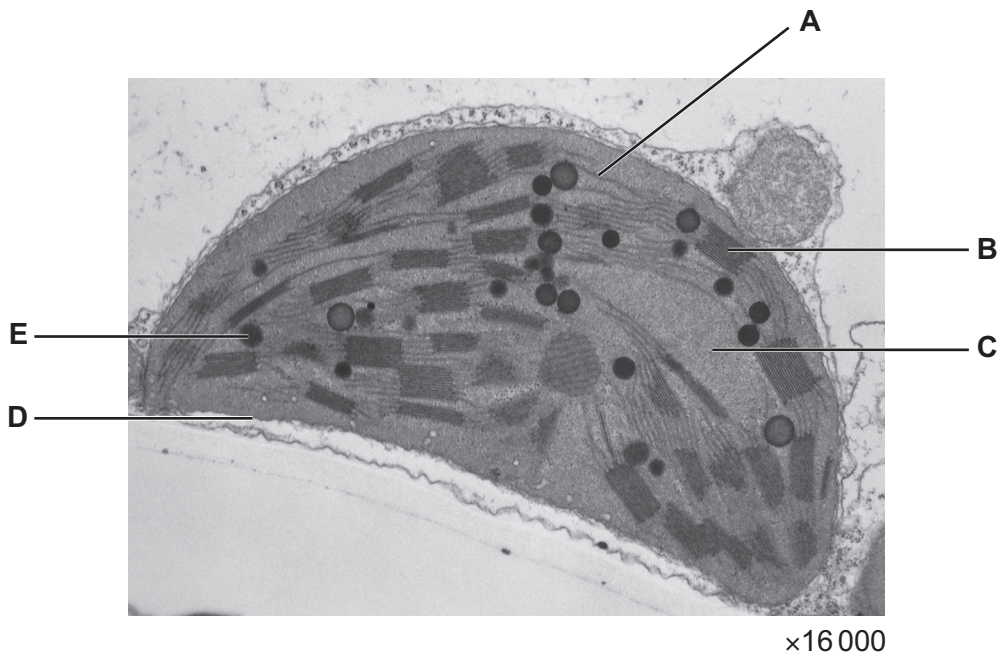


Fig. 4.1

(i) Identify structures A to D in Fig. 4.1.

structure	name
A	
B	
C	
D	

[3]

(ii) State the letter where the light-independent stage of photosynthesis occurs.

..... [1]

(iii) Letter E represents a carbohydrate made of large molecules produced from photosynthesis.

Name this carbohydrate.

..... [1]



DO NOT WRITE IN THIS MARGIN



(b) Hydrogencarbonate indicator changes colour depending on pH.

(i) Explain how the hydrogen ion concentration in a solution determines pH.

.....

.....

.....

..... [2]

(ii) Fig. 4.2 shows a laboratory experiment on photosynthesis using discs cut from the leaves of red mangrove trees (leaf discs).

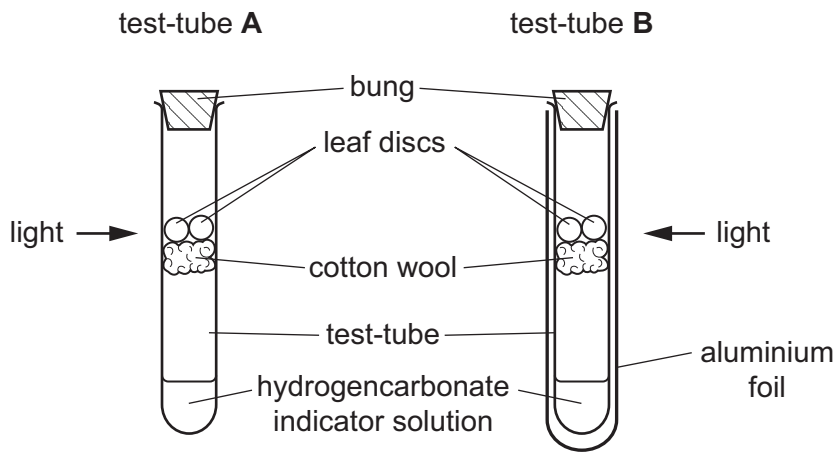


Fig. 4.2

Air was bubbled into the hydrogencarbonate indicator solution in both test-tubes at the start of the experiment. This turned the indicator a red colour.

Fig. 4.3 shows the different colours of the hydrogencarbonate indicator solution as the pH changes.

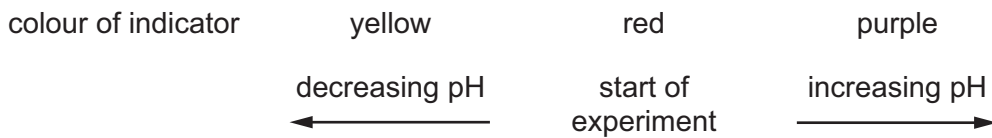


Fig. 4.3

DO NOT WRITE IN THIS MARGIN

DO NOT WRITE IN THIS MARGIN

DO NOT WRITE IN THIS MARGIN

DO NOT WRITE IN THIS MARGIN

DO NOT WRITE IN THIS MARGIN





Predict the colour of the hydrogencarbonate indicator solution in test-tube **A** after 20 minutes. Give reasons for your answer.

colour

reasons

.....

.....

.....

[3]

(iii) Suggest what you would expect to happen in test-tube **B** after 20 minutes **and** explain why.

.....

.....

.....

.....

.....

..... [3]

[Total: 13]

DO NOT WRITE IN THIS MARGIN

DO NOT WRITE IN THIS MARGIN

DO NOT WRITE IN THIS MARGIN

DO NOT WRITE IN THIS MARGIN

DO NOT WRITE IN THIS MARGIN





6 Cells of both animals and plants contain many smaller structures, including smooth endoplasmic reticulum, Golgi bodies and mitochondria.

(a) Outline the structure and function of smooth endoplasmic reticulum **and** Golgi bodies.

.....
.....
.....
.....
.....
.....
.....
.....
.....
.....
.....
.....
.....
.....
.....
.....
.....
.....
.....
.....
..... [6]

(b) Mitochondria are involved in respiration.

Describe the process of respiration in marine organisms.

.....
.....
.....
.....
.....
.....
.....
.....
.....
.....
.....
.....
.....
.....
.....
.....
.....
.....
.....
..... [5]

[Total: 11]



DO NOT WRITE IN THIS MARGIN

* 00080000015 *

DFD



DO NOT WRITE IN THIS MARGIN





BLANK PAGE

DO NOT WRITE IN THIS MARGIN

DO NOT WRITE IN THIS MARGIN

DO NOT WRITE IN THIS MARGIN

DO NOT WRITE IN THIS MARGIN

DO NOT WRITE IN THIS MARGIN

The boundaries and names shown, the designations used and the presentation of material on any maps contained in this question paper/insert do not imply official endorsement or acceptance by Cambridge Assessment International Education concerning the legal status of any country, territory, or area or any of its authorities, or of the delimitation of its frontiers or boundaries.

Permission to reproduce items where third-party owned material protected by copyright is included has been sought and cleared where possible. Every reasonable effort has been made by the publisher (UCLES) to trace copyright holders, but if any items requiring clearance have unwittingly been included, the publisher will be pleased to make amends at the earliest possible opportunity.

To avoid the issue of disclosure of answer-related information to candidates, all copyright acknowledgements are reproduced online in the Cambridge Assessment International Education Copyright Acknowledgements Booklet. This is produced for each series of examinations and is freely available to download at www.cambridgeinternational.org after the live examination series.

Cambridge Assessment International Education is part of Cambridge Assessment. Cambridge Assessment is the brand name of the University of Cambridge Local Examinations Syndicate (UCLES), which is a department of the University of Cambridge.

