



Cambridge IGCSE™ (9–1)

CANDIDATE NAME



CENTRE NUMBER

--	--	--	--	--

CANDIDATE NUMBER

--	--	--	--



BIOLOGY

0970/62

Paper 6 Alternative to Practical

October/November 2025

1 hour

You must answer on the question paper.

No additional materials are needed.

INSTRUCTIONS

- Answer **all** questions.
- Use a black or dark blue pen. You may use an HB pencil for any diagrams or graphs.
- Write your name, centre number and candidate number in the boxes at the top of the page.
- Write your answer to each question in the space provided.
- Do **not** use an erasable pen or correction fluid.
- Do **not** write on any bar codes.
- You may use a calculator.
- You should show all your working and use appropriate units.

INFORMATION

- The total mark for this paper is 40.
- The number of marks for each question or part question is shown in brackets [].

This document has **16** pages. Any blank pages are indicated.



- 1 A student investigated the rate of respiration in yeast using different concentrations of glucose. They used a 5% glucose solution to make a 1% glucose solution and a 4% glucose solution. The student used this method:

- Step 1 Label two small test-tubes **1%** and **4%**.
- Step 2 Use a syringe to put 1 cm^3 of 5% glucose solution into the small test-tube labelled **1%**. Put 4 cm^3 of 5% glucose solution into the small test-tube labelled **4%**.
- Step 3 Use a clean syringe to put 4 cm^3 of distilled water into the small test-tube labelled **1%**. Put 1 cm^3 of distilled water into the small test-tube labelled **4%**.
- Step 4 Pour yeast suspension into the small test-tube labelled **1%** until it is completely full.
- Step 5 Keep the small test-tube upright and carefully place a large test-tube over the top of the small test-tube labelled **1%**. Push the small test-tube up to the top of the large test-tube, as shown in Fig. 1.1A. Quickly invert the test-tubes, as shown in Fig. 1.1B.

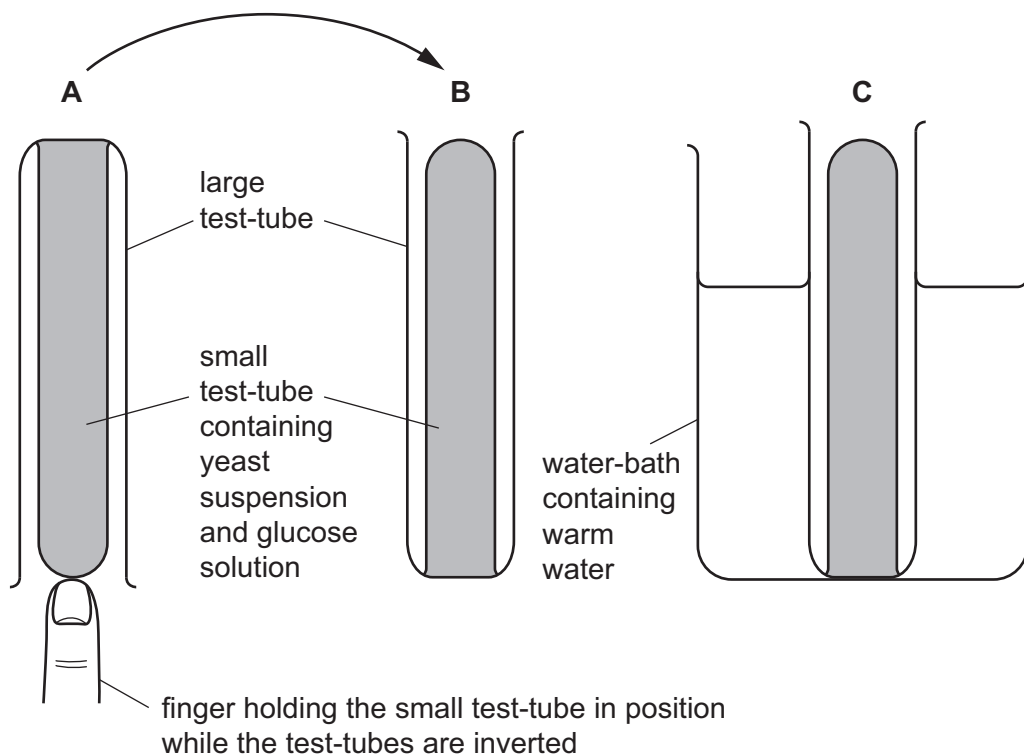


Fig. 1.1

- Step 6 Put the large test-tube and the small test-tube labelled **1%** into a warm water-bath, as shown in Fig. 1.1C.
- Step 7 Start the stop-clock and wait for five minutes.



Step 8 After five minutes, stop the stop-clock and use a ruler to measure the height of the yeast suspension in the **large** test-tube, as shown in Fig. 1.2.

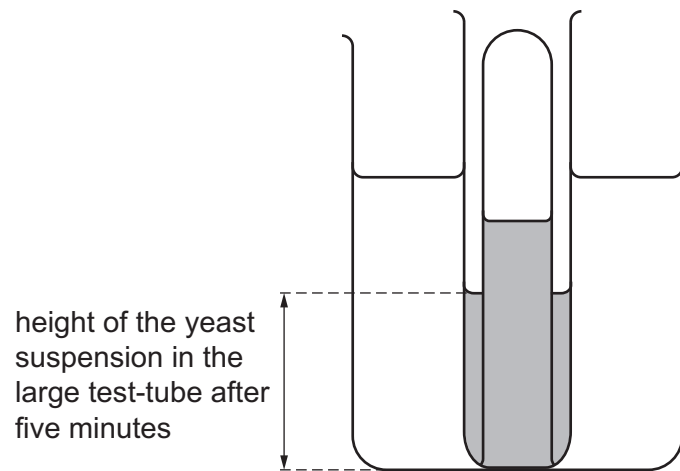


Fig. 1.2

Step 9 Remove the test-tubes from the warm water-bath and discard them.

Step 10 Pour yeast suspension into the small test-tube labelled **4%** until it is completely full.

Step 11 Repeat steps 5 to 8 with the small test-tube labelled **4%**.





(a) Fig. 1.3 is a diagram of the water-baths in steps 8 and 11.

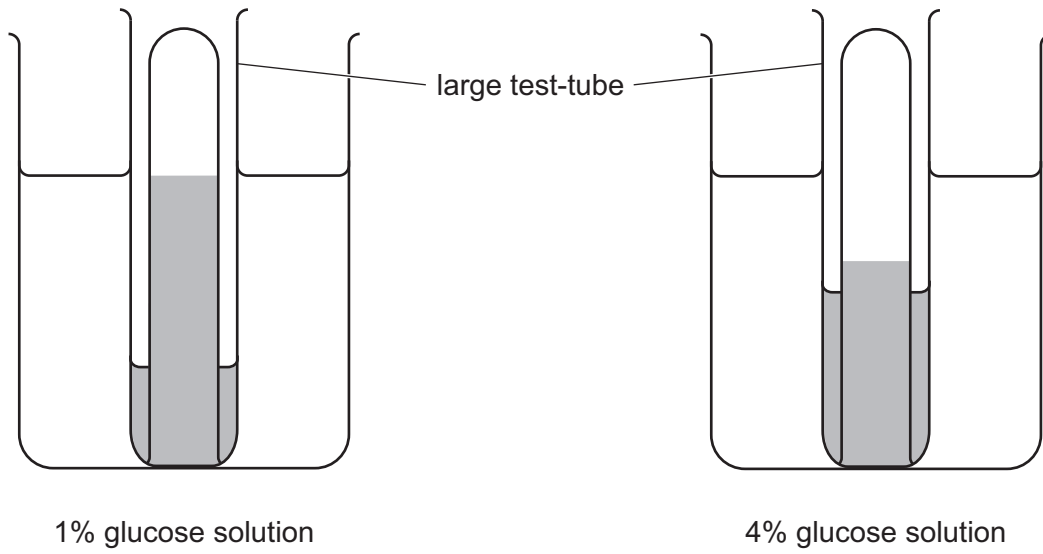


Fig. 1.3

(i) Measure the height of the yeast suspension in each of the **large** test-tubes shown in Fig. 1.3.

Prepare a table for the results and record your measurements from Fig. 1.3.

[4]





(ii) State a conclusion for the results of this investigation.

.....

.....

..... [1]

(iii) State the independent and dependent variables in this investigation.

independent variable

.....

dependent variable

..... [2]

(iv) Describe how the temperature of the water-bath could be maintained.

.....

.....

..... [1]

(v) Explain why a clean syringe was used in step 3.

.....

.....

..... [1]

DO NOT WRITE IN THIS MARGIN





(b) A student extended the investigation by using more concentrations of glucose solution.

Calculate the volumes of 5% glucose solution and distilled water that are needed to make 5 cm³ of a 3% glucose solution.

volume of 5% glucose solution cm³

volume of distilled water cm³

[1]

(c) Sports drinks often contain glucose, which is a reducing sugar.

State how you could test a sample of a sports drink for reducing sugar.

.....
.....
.....
.....
..... [2]

(d) (i) The ethanol emulsion test can be used to show that a sample of food contains fat.

State the result of a positive test.

..... [1]

(ii) Suggest **one** safety precaution that should be followed when using ethanol.

.....
.....
..... [1]

[Total: 14]

DO NOT WRITE IN THIS MARGIN

DO NOT WRITE IN THIS MARGIN

DO NOT WRITE IN THIS MARGIN

DO NOT WRITE IN THIS MARGIN

DO NOT WRITE IN THIS MARGIN





3 (a) Fig. 3.1 is a photograph of a necklace starfish, *Fromia monilis*.




Fig. 3.1

(i) Draw a large diagram of the necklace starfish shown in Fig. 3.1.



DO NOT WRITE IN THIS MARGIN



(ii) Line **PQ** in Fig. 3.1 represents the diameter of the necklace starfish.

Measure the length of line **PQ** in Fig. 3.1.

length of line **PQ** mm

Calculate the actual diameter of the necklace starfish using the formula and your measurement.

$$\text{magnification} = \frac{\text{length of line PQ in Fig. 3.1}}{\text{actual diameter of the necklace starfish}}$$

Give your answer to **two** significant figures.

Space for working.

..... mm
[3]






(iii) Fig. 3.2 is a photograph of a spiny starfish, *Marthasterias glacialis*. Fig. 3.3 is a photograph of a necklace starfish.

The magnifications of the photographs are **not** the same.



spiny starfish

Fig. 3.2



necklace starfish

Fig. 3.3

State **two** ways the spiny starfish in Fig. 3.2 differs from the necklace starfish in Fig. 3.3, and **one** way it is similar.

Do **not** include references to size in your answer.

difference 1

.....

difference 2

.....

similarity 1

.....

[3]

DO NOT WRITE IN THIS MARGIN

DO NOT WRITE IN THIS MARGIN

DO NOT WRITE IN THIS MARGIN

DO NOT WRITE IN THIS MARGIN

DO NOT WRITE IN THIS MARGIN





(b) Seven-armed starfish live in the sea.

Scientists investigated the distribution of seven-armed starfish, *Luidia ciliaris*, in one region.

- Photographs of 20m² areas of seabed were taken at different depths.
- The depth of the water in each area was measured when the water was at its highest level (high tide).
- The numbers of seven-armed starfish in each photograph were counted.
- All photographs were taken on the same day in July.

(i) State **two** ways that the method used by the scientists ensured that the numbers of seven-armed starfish counted at different depths could be compared.

1

.....

2

.....

[2]

The results of the investigation are shown in Table 3.1.

DO NOT WRITE IN THIS MARGIN






Table 3.1

depth/m	number of seven-armed starfish counted
0.0–9.9	337
10.0–19.9	1486
20.0–29.9	1243
30.0–39.9	241
40.0–49.9	121

(ii) Plot a histogram on the grid of the data in Table 3.1.





(iii) State the depth range in Table 3.1 at which most seven-armed starfish were found.

.....m [1]

(iv) Using the information in Table 3.1, calculate the total number of seven-armed starfish that were photographed at all depths, and use this value to calculate the percentage of starfish that were photographed in the 0.0–9.9 m range.

Express the percentage as a whole number.

Space for working.

total number of seven-armed starfish photographed

percentage of seven-armed starfish photographed at 0.0–9.9 m%
[3]

[Total: 20]



DO NOT WRITE IN THIS MARGIN



* 00080000015 *

DFD



DO NOT WRITE IN THIS MARGIN





DO NOT WRITE IN THIS MARGIN

DO NOT WRITE IN THIS MARGIN

DO NOT WRITE IN THIS MARGIN

DO NOT WRITE IN THIS MARGIN

DO NOT WRITE IN THIS MARGIN

Permission to reproduce items where third-party owned material protected by copyright is included has been sought and cleared where possible. Every reasonable effort has been made by the publisher (UCLES) to trace copyright holders, but if any items requiring clearance have unwittingly been included, the publisher will be pleased to make amends at the earliest possible opportunity.

To avoid the issue of disclosure of answer-related information to candidates, all copyright acknowledgements are reproduced online in the Cambridge Assessment International Education Copyright Acknowledgements Booklet. This is produced for each series of examinations and is freely available to download at www.cambridgeinternational.org after the live examination series.

Cambridge Assessment International Education is part of Cambridge Assessment. Cambridge Assessment is the brand name of the University of Cambridge Local Examinations Syndicate (UCLES), which is a department of the University of Cambridge.

