



Cambridge IGCSE™ (9–1)

ECONOMICS

0987/12

Paper 1 Multiple Choice

October/November 2025

45 minutes

You must answer on the multiple choice answer sheet.

You will need: Multiple choice answer sheet
Soft clean eraser
Soft pencil (type B or HB is recommended)

INSTRUCTIONS

- There are **thirty** questions on this paper. Answer **all** questions.
- For each question there are four possible answers **A, B, C** and **D**. Choose the **one** you consider correct and record your choice in soft pencil on the multiple choice answer sheet.
- Follow the instructions on the multiple choice answer sheet.
- Write in soft pencil.
- Write your name, centre number and candidate number on the multiple choice answer sheet in the spaces provided unless this has been done for you.
- Do **not** use correction fluid.
- Do **not** write on any bar codes.
- You may use a calculator.

INFORMATION

- The total mark for this paper is 30.
- Each correct answer will score one mark.
- Any rough working should be done on this question paper.

This document has **12** pages. Any blank pages are indicated.



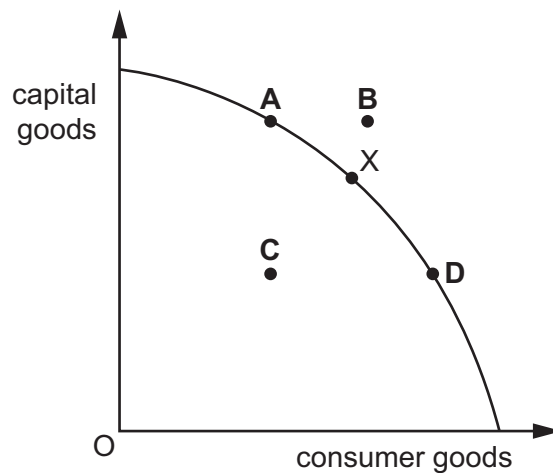
- 1 A government wants to build a new hospital.

What is most likely to prevent the government from doing this?

- A People in the country cannot afford healthcare.
 - B People in the country would go abroad for healthcare.
 - C The government cannot agree how big the hospital should be.
 - D The government does not have enough money.
- 2 Which term describes the loss of potential benefit to a consumer when making a choice between alternatives?
- A opportunity cost
 - B scarcity
 - C shortage
 - D the economic problem
- 3 A country is producing at point X on its production possibility curve (PPC) which shows how it can allocate its production between capital goods and consumer goods.

A period of recession then causes some of its factories to close.

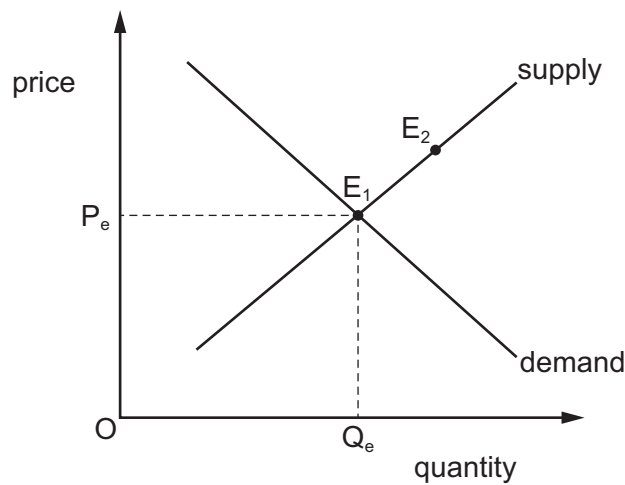
Which point could represent the country's new position?



4 Which combination gives correct examples of macroeconomics and microeconomics?

	macroeconomics	microeconomics
A	study of demand for a product	study of price of a product
B	study of behaviour of firms	study of individual behaviour
C	study of the economy as a whole	study of specific markets
D	study of the international economy	study of the national economy

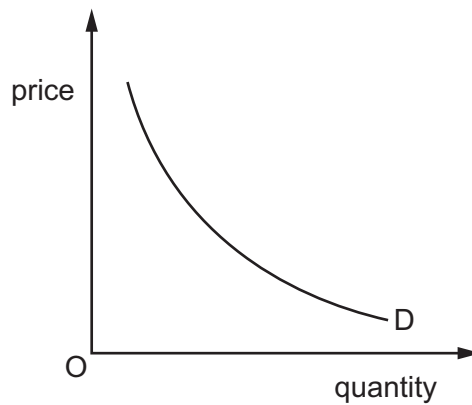
5 The diagram shows the supply and demand curves for a good. The initial market equilibrium is given at point E_1 . There is a change in the market that leads to a new equilibrium at E_2 .



What is the cause of the change in the market equilibrium?

- A** a decrease in the price of a substitute good
- B** a decrease in raw material prices
- C** an increase in the price of a substitute good
- D** an increase in raw material prices

- 6 The diagram shows the demand curve for a good.



What can be concluded about a single downward-sloping demand curve?

- A consumers increase demand when their incomes rise
 - B consumers plan to buy less when prices rise
 - C firms produce less as prices rise
 - D firms sell more when prices rise
- 7 When the price of butter increased by 10%, the quantity supplied of butter increased by 20%.

What is the price elasticity of supply (PES) of butter?

- A -2.0
 - B -0.5
 - C +0.5
 - D +2.0
- 8 How are economic decisions determined in a market economic system?
- A by a mixture of market forces and government intervention
 - B by central planners of production and consumption
 - C by government regulation of the price mechanism
 - D by the forces of demand and supply

- 9 A bridge is built over a river which enables journey times to be reduced.

The table shows costs and benefits of building the bridge.

	\$000
private benefit	12
private cost	10
external benefit	8
external cost	5

Which calculation represents social benefit?

- A $\$12\,000 - \$10\,000 = \$2\,000$
- B $\$8\,000 - \$5\,000 = \$3\,000$
- C $\$12\,000 + \$5\,000 = \$17\,000$
- D $\$8\,000 + \$12\,000 = \$20\,000$
- 10 What is **not** a role of the central bank?
- A to act as the lender of last resort
- B to hold deposits from the general public
- C to issue notes and coins
- D to manage the gold reserves of the country
- 11 The table shows the proportion of disposable income spent on three different goods by four different households.

Which household is likely to have the lowest income?

	food %	transport %	holidays %
A	50	15	5
B	35	18	10
C	30	20	15
D	20	25	20

12 In which occupations do wages tend to be lowest?

- A in those where the work is dangerous
- B in those where there is an excess supply of labour
- C in those where workers belong to trade unions
- D in those where workers need long training

13 How might a trade union increase its bargaining power?

- A by expanding the market for the product
- B by increasing the cost of union membership for workers
- C by restricting the entry of workers to the industry
- D by supporting wage claims in other industries

14 To be able to produce a car tyre, rubber is required.

If a car tyre manufacturer merges with a supplier of rubber, which type of merger is this?

- A conglomerate
- B horizontal
- C internal
- D vertical

15 When it produces 100 units, a firm's total variable cost is \$300 and its total fixed cost is \$2700.

What is the average total cost?

- A \$3 B \$24 C \$27 D \$30

16 What is likely to be found when there are many small firms in an industry?

- A There are few barriers to entry.
- B There is high expenditure on research and development.
- C There is little competition.
- D Very large capital costs are needed to establish a firm.

17 A government imposes tariffs on imported goods.

What is **not** a likely reason for this?

- A to boost domestic output
- B to influence the country's balance of payments
- C to protect domestic employment
- D to reduce the exports from the country

18 A government collects the following revenue in a year.

	\$m
taxes on goods	30
taxes on income	500
taxes on services	20
customs and excise duties	50

What is the amount of indirect tax revenue?

- A \$30m B \$70m C \$100m D \$500m

19 Which policy measures would be classified as fiscal policy?

- A changes in interest rates and money supply
- B changes in labour market policies to encourage more training
- C changes in tax rates and government spending
- D changes in the exchange rate

20 What is the most likely result of a fall in interest rates?

- A a fall in inflation
- B a fall in investment
- C a rise in consumer spending
- D a rise in saving

21 What does a successful supply-side policy increase in an economy?

- A the level of unemployment
- B the production possibilities
- C the rate of inflation
- D the rate of interest

22 In one particular year, South Sudan's population growth was 1.3% while its GDP growth was 2%.

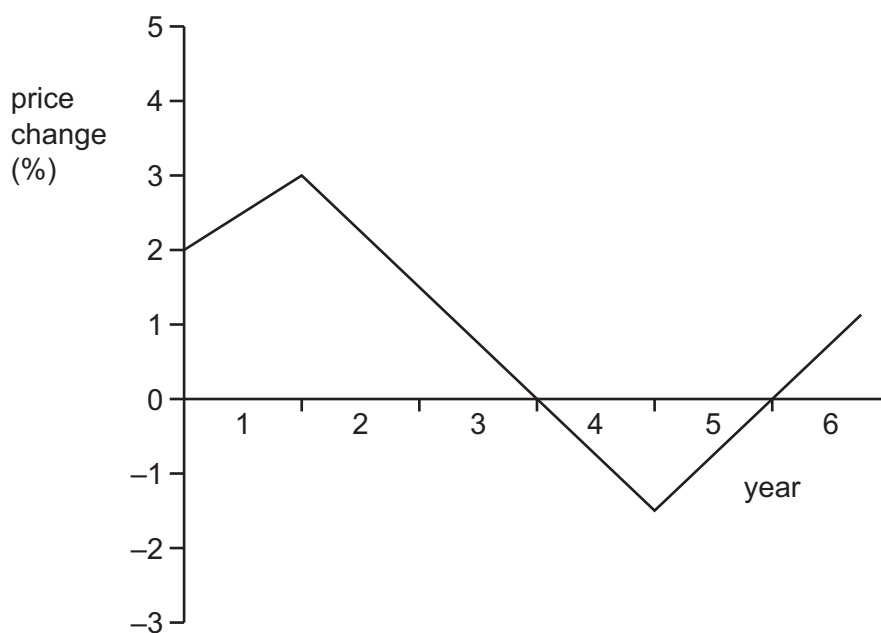
What is the most likely consequence of this?

- A GDP per capita will decrease
- B the rate of inflation will decrease
- C the standard of living will increase
- D unemployment will increase

23 What are the correct definitions of unemployment and employment relative to the number of people of working age?

	unemployment	employment
A	those who want a job but cannot get one at the current wage rate	those who are not in full-time education
B	those who want a job but cannot get one at the current wage rate	those who have a job at the current wage rate
C	those without a job	those who are not in full-time education
D	those without a job	those who have a job at the current wage rate

24 The graph shows changes in the average price level.



When did the country experience deflation?

- A year 2 to year 5
- B year 2 to year 3
- C year 2 to year 4
- D year 4 to year 5

25 In many high-income economies, increasing income inequality has led to greater levels of poverty.

Which combination of policies would aim to reduce income inequality?

	fiscal policy	supply-side policy
A	decrease corporation tax	create more competition
B	increase income tax	reduce the power of trade unions
C	increase inheritance tax	increase the national minimum wage
D	increase sales tax	privatise more public sector firms

- 26** A country has a falling birth rate and a rising death rate, while an increasing number of its working age adults (16–60 years) are seeking employment abroad.

How is this likely to affect the numbers in the different age groups in the country?

	under 16 years	16–60 years	over 60 years
A	fall	fall	fall
B	fall	rise	rise
C	rise	fall	rise
D	rise	rise	fall

- 27** What is an advantage of international specialisation?

- A** Choice is limited.
- B** Countries become over-dependent on each other.
- C** Resources are used more efficiently.
- D** Transport costs are decreased.

- 28** An economy raises its tariffs on imported goods.

What is the most likely result?

- A** a fall in the rate of inflation
- B** an increase in consumer choice
- C** an increase in domestic production
- D** the current account of the balance of payments moves into a deficit

- 29** Which combination of changes in export revenue and import expenditure is most likely to cause a country's exchange rate to depreciate?

	export revenue	import expenditure
A	decreases	decreases
B	decreases	increases
C	increases	decreases
D	increases	increases

30 A government wishes to reduce the deficit on the current account of its balance of payments.

Which policy should it adopt?

- A** increase subsidies on exports
- B** increase taxes on its exports
- C** remove an embargo on imports
- D** remove tariffs on its imports

BLANK PAGE

Permission to reproduce items where third-party owned material protected by copyright is included has been sought and cleared where possible. Every reasonable effort has been made by the publisher (UCLES) to trace copyright holders, but if any items requiring clearance have unwittingly been included, the publisher will be pleased to make amends at the earliest possible opportunity.

To avoid the issue of disclosure of answer-related information to candidates, all copyright acknowledgements are reproduced online in the Cambridge Assessment International Education Copyright Acknowledgements Booklet. This is produced for each series of examinations and is freely available to download at www.cambridgeinternational.org after the live examination series.

Cambridge Assessment International Education is part of Cambridge Assessment. Cambridge Assessment is the brand name of the University of Cambridge Local Examinations Syndicate (UCLES), which is a department of the University of Cambridge.