



Cambridge IGCSE™

GEOGRAPHY

0460/22

Paper 2 Geographical Skills

October/November 2025

INSERT

1 hour 30 minutes

INFORMATION

- This insert contains additional resources referred to in the questions.
- You may annotate this insert and use the blank spaces for planning. **Do not write your answers** on the insert.



This document has **8** pages. Any blank pages are indicated.

Fig. 2.3 for Question 2

Relief map of the Philippines

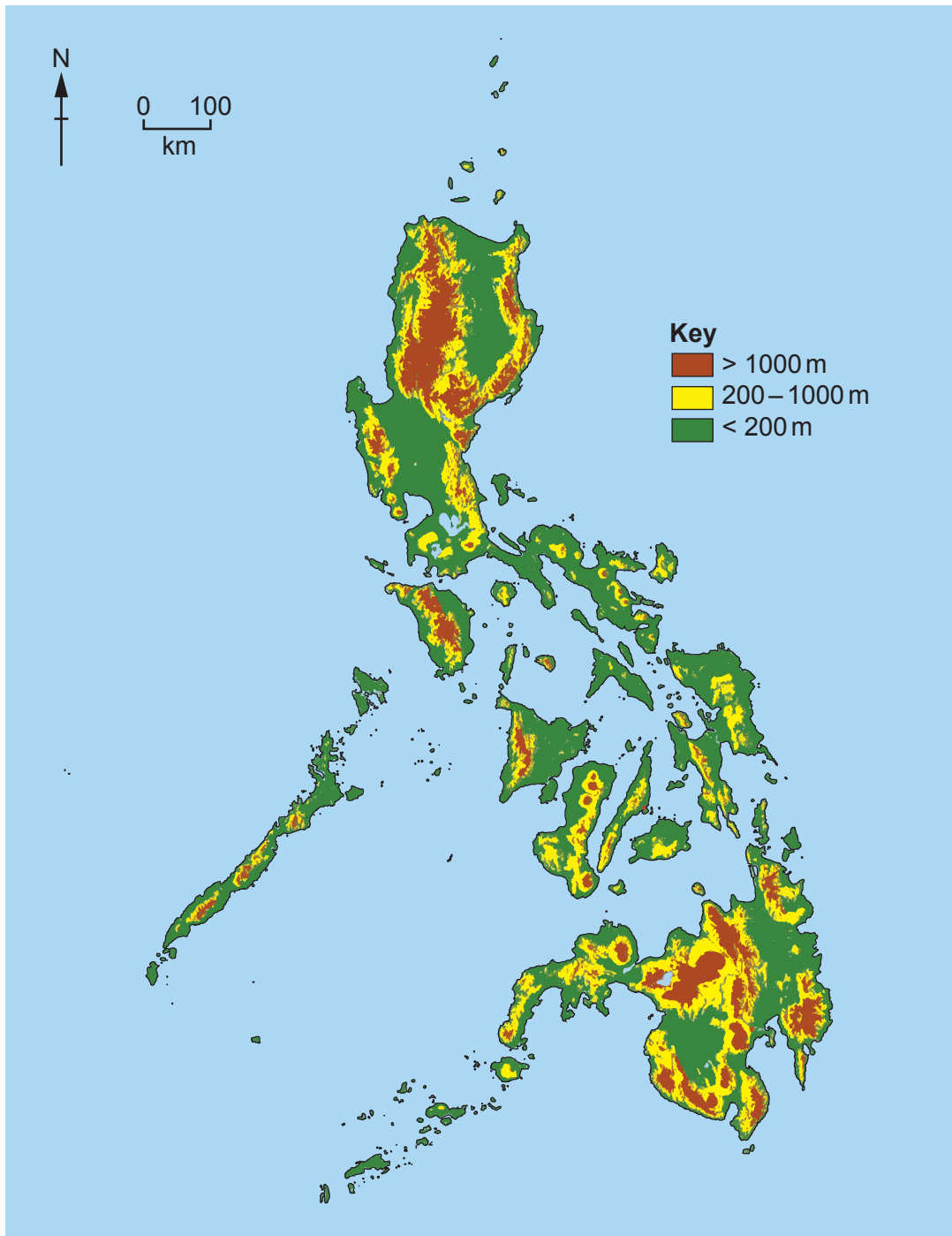


Fig. 3.1 for Question 3

**Information about the population living in squatter settlements in urban areas
in selected countries in Africa**

Content removed due to copyright restrictions.

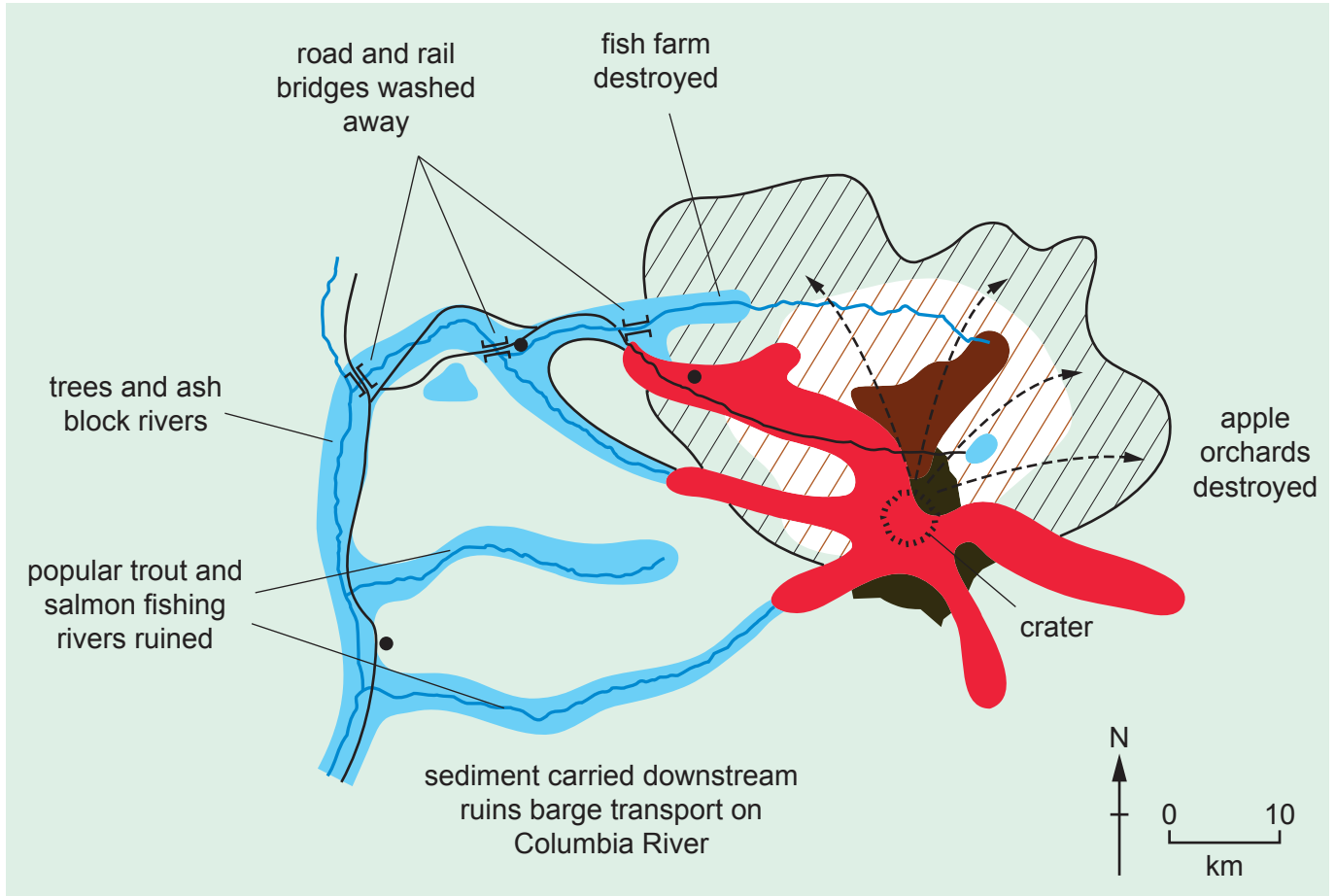
Fig. 3.2 for Question 3

Photograph of a squatter settlement in Colombia, an LEDC in South America

Content removed due to copyright restrictions.

Fig. 4.2 for Question 4

The effects of the Mount St Helens eruption on the surrounding area



Key










-  flows of superheated ash or gas (nuée ardente)
-  zone of total destruction
-  forest destroyed
-  ash covers crops
-  landslide
-  mudflows of ash and water (lahars)
-  settlements
-  roads
-  flooded areas

Fig. 6.1 for Question 6

A photograph of a renewable source of energy



Fig. 6.2 for Question 6

A photograph of a renewable source of energy



BLANK PAGE

The boundaries and names shown, the designations used and the presentation of material on any maps contained in this question paper/insert do not imply official endorsement or acceptance by Cambridge Assessment International Education concerning the legal status of any country, territory, or area or any of its authorities, or of the delimitation of its frontiers or boundaries.

Permission to reproduce items where third-party owned material protected by copyright is included has been sought and cleared where possible. Every reasonable effort has been made by the publisher (UCLES) to trace copyright holders, but if any items requiring clearance have unwittingly been included, the publisher will be pleased to make amends at the earliest possible opportunity.

To avoid the issue of disclosure of answer-related information to candidates, all copyright acknowledgements are reproduced online in the Cambridge Assessment International Education Copyright Acknowledgements Booklet. This is produced for each series of examinations and is freely available to download at www.cambridgeinternational.org after the live examination series.

Cambridge Assessment International Education is part of Cambridge Assessment. Cambridge Assessment is the brand name of the University of Cambridge Local Examinations Syndicate (UCLES), which is a department of the University of Cambridge.