

1. Nov/2021/Paper_21/No.5

(a)



Khalid has these 10 number cards.

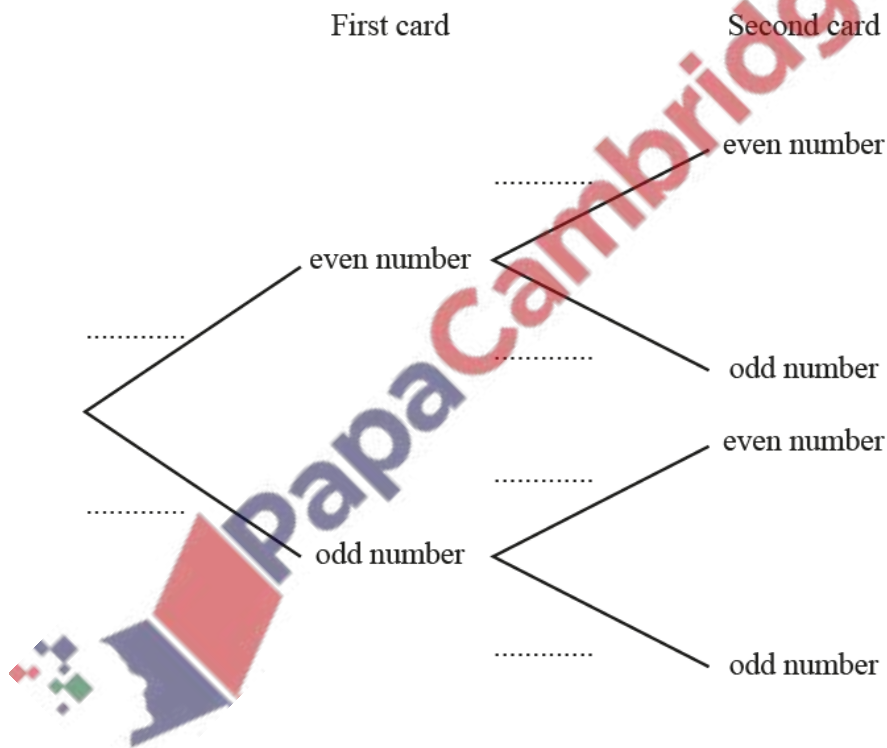
He takes a card at random, notes the number and replaces it.

He then takes a second card.

(i) Find the probability that the first card Khalid takes shows an even number.

..... [1]

(ii) Complete the tree diagram.

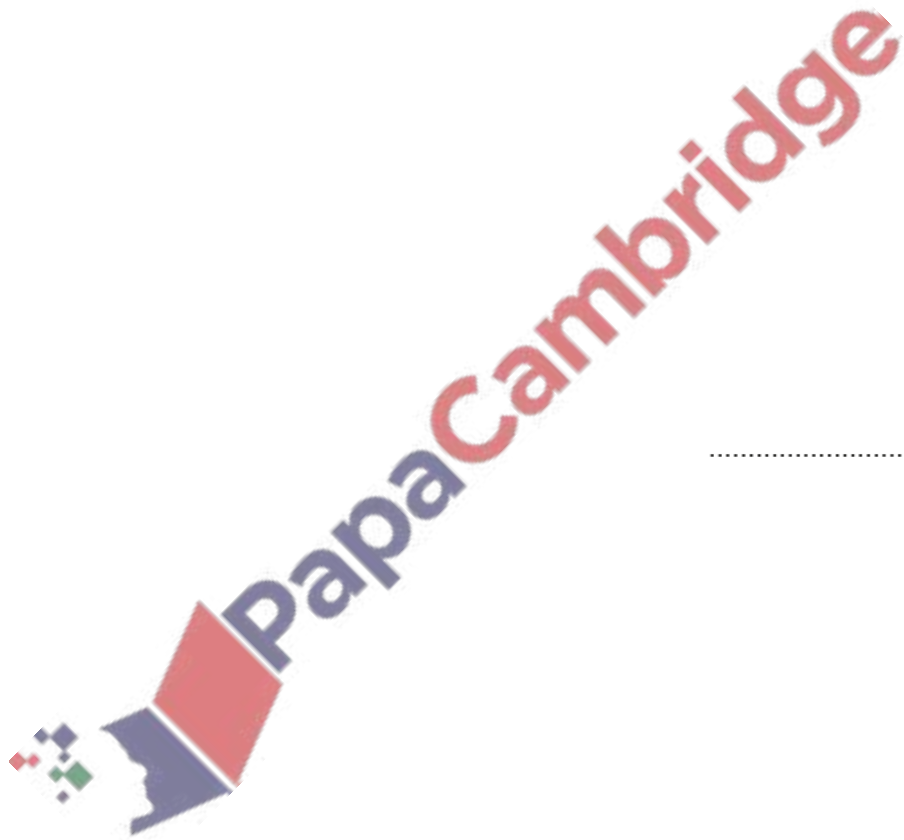


[2]

(iii) Work out the probability that Khalid takes one odd number and one even number.

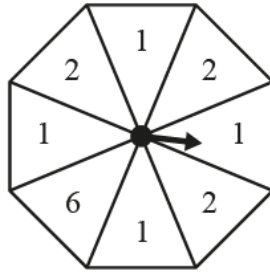
- (b) Basma has a bag containing 5 yellow counters, 3 pink counters and 4 black counters. She takes two counters from the bag at random, without replacement.

Find the probability that she takes one yellow counter and one pink counter.
Give your answer as a fraction in its simplest form.



..... [3]

(a)



Asma has this fair 8-sided spinner.

(i) She spins the spinner once.

Find the probability that the score is

(a) 6,

..... [1]

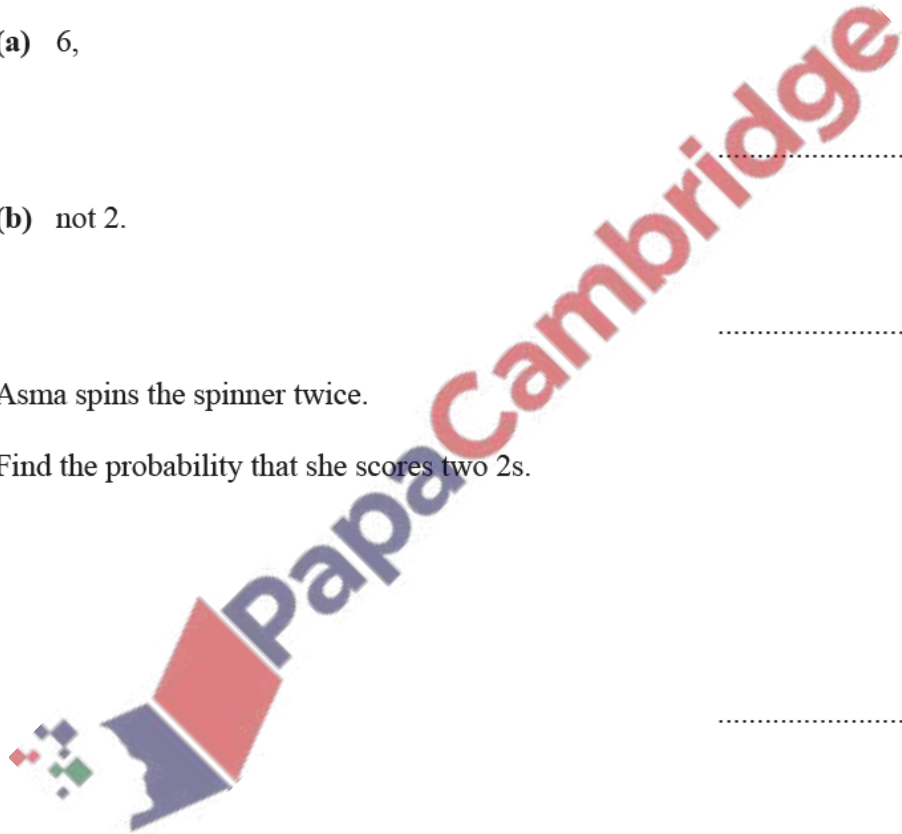
(b) not 2.

..... [1]

(ii) Asma spins the spinner twice.

Find the probability that she scores two 2s.


..... [2]



- (b) Leon has 7 red counters, 6 green counters and 3 white counters.
He takes two counters at random, without replacement.

Find the probability that the two counters are the same colour.

..... [3]



3. June/2021/Paper_11/No.11

- (a) In a survey, 3 out of every 100 women were taller than 1.9 m.
One of these 100 women is picked at random.

Calculate the probability that she is **not** taller than 1.9 m.

..... [1]

- (b) A new housing estate is being planned.
There are three possible plans: *A*, *B* and *C*.
A survey was carried out to see which plan people preferred.
The relative frequency table shows the results.

Plan	<i>A</i>	<i>B</i>	<i>C</i>
Relative frequency	0.3	0.5	0.2

52 people preferred plan *C*.

- (i) Find how many people preferred plan *A*.

..... [2]

- (ii) Calculate the total number of people surveyed.

..... [1]



4. June/2021/Paper_12/No.7

A bag contains coloured counters.


A counter is taken from the bag at random.

The table shows the probabilities of taking a counter of each colour.

Colour	Red	Green	Blue	Yellow
Probability	0.15	0.3		0.42

Complete the table.

[2]



100 adults in a town were surveyed about the number of emails they each received one day. The table shows the results.

Number of emails	1	2	3	4	5	6	7	8
Number of adults	8	10	22	28	15	9	5	3

(a) Find the mode.

..... [1]

(b) Calculate the mean.

..... [2]

(c) One of these adults is chosen at random.


Find the probability that they received **fewer than** 4 emails that day.
Give your answer as a fraction in its simplest form.

..... [2]

(d) The town has 18 000 adults.

Use the survey results to estimate the number of adults in the town who received exactly 5 emails that day.

..... [2]



(c) The probability that both balls are black is $\frac{14}{33}$.

Form an equation in x and solve it to find the number of black balls in the bag.
Show your working.

..... [4]

