



UNIVERSITY OF CAMBRIDGE INTERNATIONAL EXAMINATIONS
General Certificate of Education Ordinary Level

CHEMISTRY

5070/12

Paper 1 Multiple Choice

May/June 2012

1 hour

Additional Materials: Multiple Choice Answer Sheet
Soft clean eraser
Soft pencil (type B or HB is recommended)



READ THESE INSTRUCTIONS FIRST

Write in soft pencil.

Do not use staples, paper clips, highlighters, glue or correction fluid.

Write your name, Centre number and candidate number on the Answer Sheet in the spaces provided unless this has been done for you.

There are **forty** questions on this paper. Answer **all** questions. For each question there are four possible answers **A, B, C** and **D**.

Choose the **one** you consider correct and record your choice in **soft pencil** on the separate Answer Sheet.

Read the instructions on the Answer Sheet very carefully.

Each correct answer will score one mark. A mark will not be deducted for a wrong answer.

Any rough working should be done in this booklet.

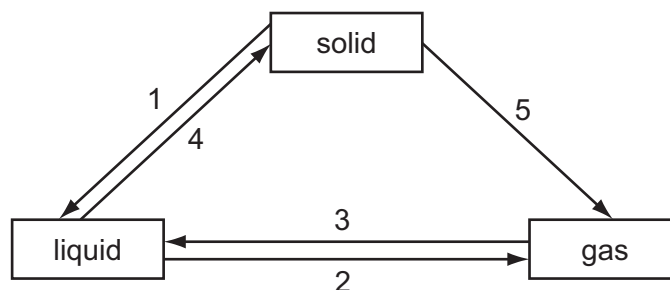
A copy of the Periodic Table is printed on page 16.

This document consists of **13** printed pages and **3** blank pages.



2

- 1 The diagram shows some of the changes of state.



Which statement is correct?

- A Although the change is not shown on the diagram, a gas can change directly to a solid.
 - B The changes 1 and 3 involve particles moving closer together.
 - C The changes 2 and 4 involve particles moving further apart.
 - D The changes 3, 4 and 5 all involve the release of energy.
- 2 Which gas is **not** obtained industrially by fractional distillation?
- A ammonia
 - B argon
 - C nitrogen
 - D oxygen
- 3 When dilute hydrochloric acid is added to a white powder a gas is produced.

The solution remaining is tested separately with small volumes of both aqueous ammonia and aqueous sodium hydroxide.

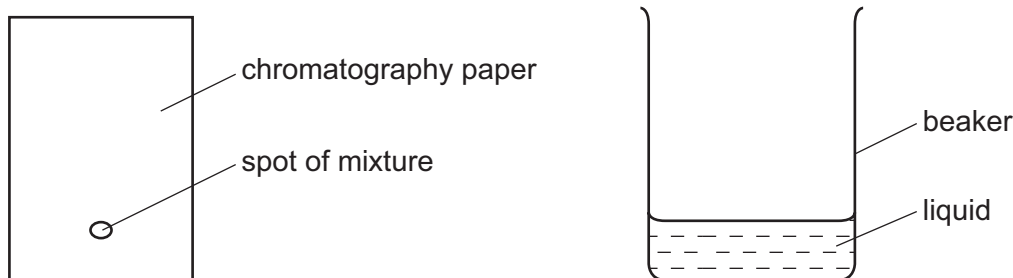
A white precipitate is produced in both tests.

What is the white powder?

- A aluminium oxide
- B calcium oxide
- C copper(II) carbonate
- D zinc carbonate

- 4 A mixture of two substances is spotted onto a piece of chromatography paper.

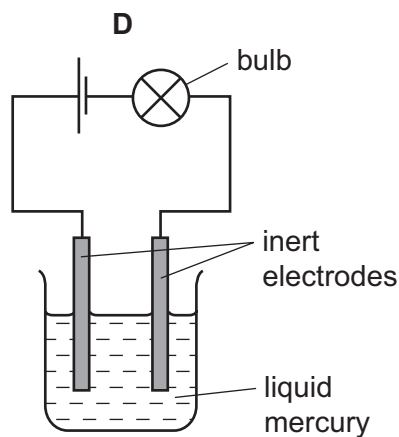
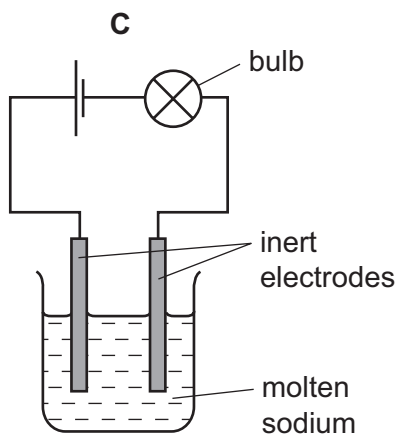
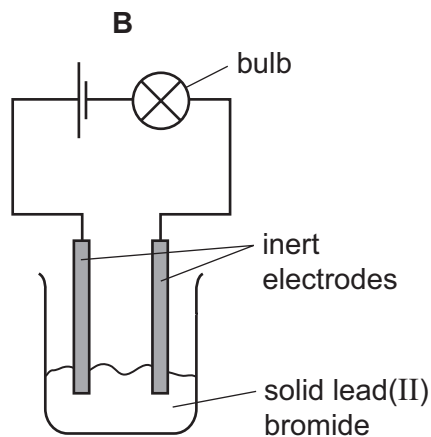
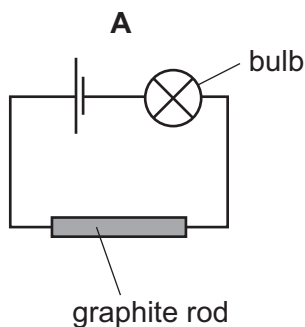
The paper is inserted into a beaker containing a liquid.



For separation of the substances to occur the spot of mixture must

- A be placed so that the spot is just below the level of the liquid.
 - B be soluble in the liquid.
 - C contain substances of the same R_f values.
 - D contain substances that are coloured.
- 5 Which reagent could be used to distinguish between dilute nitric acid and dilute hydrochloric acid?
- A aqueous barium chloride
 - B aqueous silver nitrate
 - C aqueous sodium hydroxide
 - D copper(II) carbonate
- 6 What is the structure of sand?
- A a macromolecule
 - B an ionic lattice
 - C a polymer
 - D a simple molecule
- 7 Pentane, C_5H_{12} , has a higher boiling point than propane, C_3H_8 . Which statement explains the difference in boiling point?
- A Carbon-carbon single bonds are stronger than carbon-hydrogen bonds.
 - B Pentane has more covalent bonds to break.
 - C Pentane does not burn as easily as propane.
 - D The forces of attraction between pentane molecules are stronger than those between propane molecules

8 In which set of apparatus will the bulb be **least** bright?



9 Four substances have the following electrical properties.

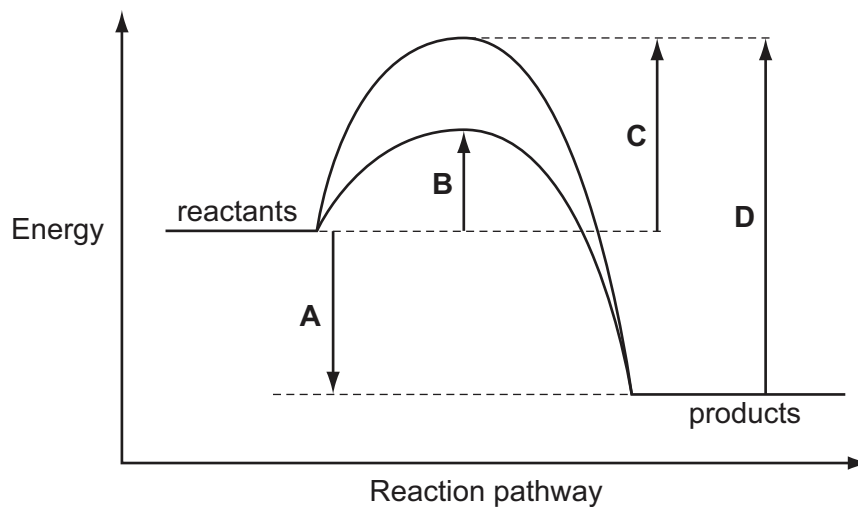
substance	property
W	does not conduct under any conditions
X	conducts only in aqueous solution
Y	conducts in both the molten and solid states
Z	conducts in both the molten and aqueous states

What are these four substances?

	W	X	Y	Z
A	HCl	S	NaCl	Pb
B	Pb	HCl	NaCl	S
C	S	HCl	Pb	NaCl
D	S	NaCl	HCl	Pb

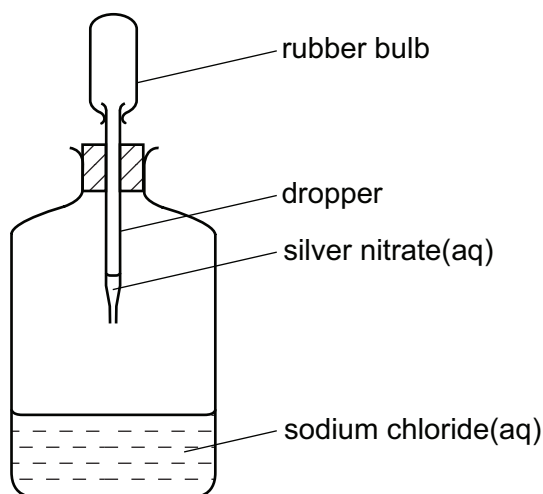
- 10 The energy profile diagram shows the pathways for a reaction with and without a catalyst.

Which energy change is the activation energy for the catalysed reaction?



- 11 Which statement about conduction of electricity is correct?
- A Electricity is conducted in aqueous solution by electrons.
 - B Electricity is conducted in a metal wire by ions.
 - C Electricity is conducted in a molten electrolyte by electrons.
 - D Electricity is conducted in an acid solution by ions.

- 12 When the rubber bulb of the dropper in the diagram is squeezed, the aqueous silver nitrate drops into the aqueous sodium chloride and a white precipitate of silver chloride is formed.



What happens to the total mass of the bottle and contents?

- A It increases due to the formation of the heavy precipitate.
 - B It remains the same because only a physical change has taken place.
 - C It decreases because heat is evolved.
 - D It remains the same because none of the products escapes from the bottle.
- 13 What has the same mass as 0.25 mol of copper atoms?
- A 0.5 mol of oxygen molecules
 - B 1 mol of sulfur dioxide molecules
 - C 1.5 mol of water molecules
 - D 2 mol of oxygen atoms
- 14 Which change **always** takes place when an aqueous solution of copper(II) sulfate is electrolysed?
- A Copper is deposited at the negative electrode.
 - B Oxygen is evolved at the positive electrode.
 - C Sulfate ions move towards the negative electrode.
 - D The colour of the solution fades.

15 Which substance will conduct electricity without being chemically changed?

- A sodium chloride solution
- B solid iron
- C solid sodium chloride
- D solid sulfur

16 A sample of air was bubbled into water. The pH of the water slowly changed from 7 to 6.

Which gas in the sample caused this change?

- A carbon dioxide
- B carbon monoxide
- C nitrogen
- D oxygen

17 The oxide Q dissolves in water to form a colourless solution. This solution reacts with sodium carbonate to produce carbon dioxide.

What is Q?

- A copper(II) oxide
- B sodium oxide
- C sulfur dioxide
- D zinc oxide

18 The following statements about dilute sulfuric acid are **all** correct.

- 1 Addition of Universal Indicator shows that the solution has a pH value of less than 7.0.
- 2 A white precipitate is formed when aqueous barium nitrate is added.
- 3 The solution reacts with copper(II) oxide, forming a blue solution.
- 4 The solution turns anhydrous copper(II) sulfate from white to blue.

Which two statements confirm the acidic nature of the solution?

- A 1 and 2 B 1 and 3 C 2 and 4 D 3 and 4

19 Which ion reacts with aqueous ammonia to give a precipitate that dissolves in an excess of ammonia?

- A $Al^{3+}(aq)$ B $Fe^{2+}(aq)$ C $Fe^{3+}(aq)$ D $Zn^{2+}(aq)$

20 Which element is **most** likely to be used as an industrial catalyst?

- A Li B Cs C Rh D Po

21 Which compound when reacted with sulfuric acid produces a product which is used as a fertiliser?

- A ammonia
B calcium carbonate
C calcium hydroxide
D sodium hydroxide

22 In which reaction is the underlined substance behaving as an oxidising agent?

- A $\underline{\text{BaCl}_2} + \text{Na}_2\text{SO}_4 \rightarrow \text{BaSO}_4 + 2\text{NaCl}$
B $3\text{CuO} + \underline{2\text{NH}_3} \rightarrow 3\text{Cu} + \text{N}_2 + 3\text{H}_2\text{O}$
C $2\text{FeCl}_2 + \underline{\text{Cl}_2} \rightarrow 2\text{FeCl}_3$
D $\text{O}_2 + \underline{2\text{SO}_2} \rightarrow 2\text{SO}_3$

23 Which statements are true about **all** the noble gases?

- 1 The number of protons in their atoms equals the number of neutrons.
- 2 The number of protons in their atoms does not equal the number of electrons.
- 3 They all have eight electrons in their outer shell.
- 4 They do not react to form ionic compounds.

- A 1, 2 and 3
B 1 and 3 only
C 3 only
D 4 only

24 How many electrons and protons are in an **ion** of an element in Group 2 of the Periodic Table?

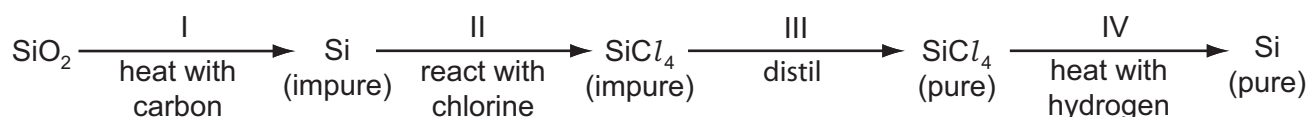
	Number of electrons	Number of protons
A	6	4
B	10	12
C	22	20
D	139	137

- 25 A metal **X** forms oxides with the formulae XO and X_2O_3 .

Where is **X** in the Periodic Table?

- A in Group II
 - B in Group III
 - C the second Period
 - D in the transition elements
- 26 What is a characteristic of a weak acid?
- A It does not react with sodium carbonate.
 - B It forms an aqueous solution with a pH of 8.
 - C It is only partially ionised when added to water.
 - D It turns litmus solution blue.

- 27 The reaction scheme represents the process for obtaining pure silicon.



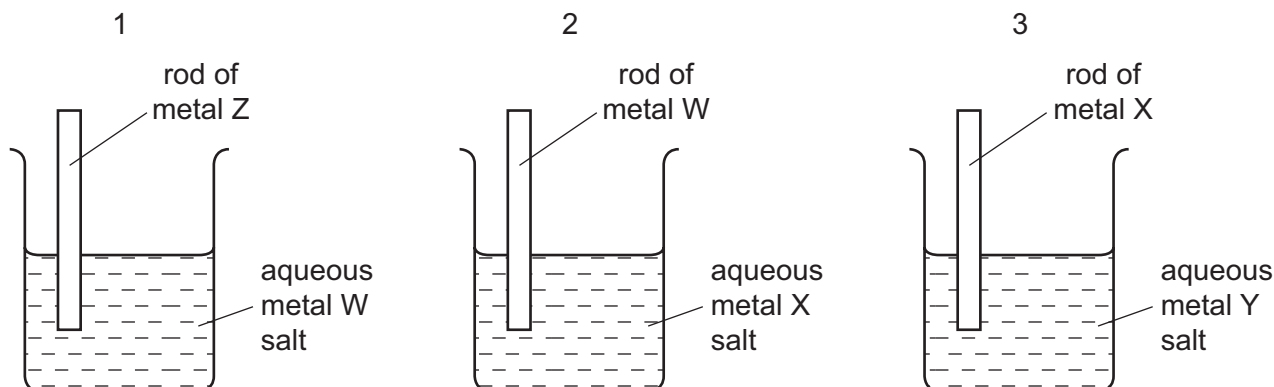
In which of the stages is the silicon reduced?

- A I only
 - B I and II
 - C I and IV
 - D II and III
- 28 Which metal can be obtained from its oxide using hydrogen?
- A calcium
 - B copper
 - C magnesium
 - D zinc
- 29 Which substance undergoes decomposition because of the high temperature in the blast furnace?
- A coke
 - B calcium carbonate
 - C calcium silicate
 - D slag

30 Which reaction occurring in the blast furnace is an acid base reaction?

- A $C + CO_2 \rightarrow 2CO$
 B $C + O_2 \rightarrow CO_2$
 C $CaO + SiO_2 \rightarrow CaSiO_3$
 D $Fe_2O_3 + 3CO \rightarrow 2Fe + 3CO_2$

31 Three different beakers are set up as shown.



In beaker 1 metal W is displaced from solution.

In beaker 2 metal X is displaced from solution.

In beaker 3 metal Y is displaced from solution.

What is the order of **decreasing** reactivity of the four metals?

	most reactive	→			least reactive
A	W	X	Y	Z	
B	X	Y	W	Z	
C	Z	W	X	Y	
D	Z	X	W	Y	

32 Aluminium is manufactured by the electrolysis of aluminium oxide.

Which substances are formed at the electrodes?

	positive electrode	negative electrode
A	aluminium	carbon dioxide
B	aluminium	oxygen
C	carbon dioxide	aluminium
D	oxygen	carbon dioxide

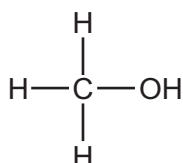
- 33 The processes photosynthesis, respiration and fermentation all change the amount of carbon dioxide in the atmosphere.

Which processes increase the amount of carbon dioxide in the atmosphere?

- A photosynthesis and fermentation
 - B photosynthesis only
 - C respiration and fermentation
 - D respiration only
- 34 Which process would destroy the bacteria in water?
- A chlorination
 - B desalination
 - C filtration
 - D treatment with carbon
- 35 Which compound has more than two carbon atoms per molecule?
- A ethanoic acid
 - B ethanol
 - C ethene
 - D ethyl ethanoate
- 36 The equations show some reactions of organic compounds.

Which is an addition reaction?

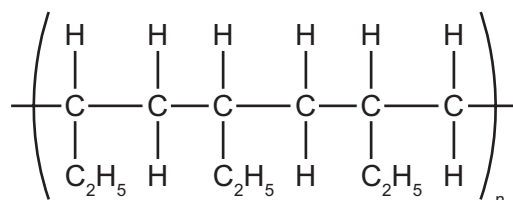
- A $\text{CH}_4 + \text{Br}_2 \rightarrow \text{CH}_3\text{Br} + \text{HBr}$
 - B $\text{C}_2\text{H}_5\text{OH} + \text{O}_2 \rightarrow \text{CH}_3\text{CO}_2\text{H} + \text{H}_2\text{O}$
 - C $\text{C}_2\text{H}_5\text{OH} + \text{CH}_3\text{CO}_2\text{H} \rightarrow \text{CH}_3\text{CO}_2\text{C}_2\text{H}_5 + \text{H}_2\text{O}$
 - D $\text{C}_4\text{H}_4 + 2\text{Br}_2 \rightarrow \text{C}_4\text{H}_4\text{Br}_4$
- 37 Which statement about methanol is correct?
- A It can be oxidised to form methanoic acid.
 - B It is a constituent of alcoholic drinks.
 - C It is formed by fermentation.
 - D Its fully displayed structural formula is



- 38 A 10 cm^3 sample of a gaseous hydrocarbon is completely burnt in oxygen. The total volume of the products is 70 cm^3 . All gas volumes are measured at room temperature and pressure.

Which equation represents the combustion of the hydrocarbon?

- A $\text{CH}_4(\text{g}) + 2\text{O}_2(\text{g}) \rightarrow \text{CO}_2(\text{g}) + 2\text{H}_2\text{O}(\text{g})$
 B $\text{C}_2\text{H}_4(\text{g}) + 3\text{O}_2(\text{g}) \rightarrow 2\text{CO}_2(\text{g}) + 2\text{H}_2\text{O}(\text{g})$
 C $\text{C}_3\text{H}_8(\text{g}) + 5\text{O}_2(\text{g}) \rightarrow 3\text{CO}_2(\text{g}) + 4\text{H}_2\text{O}(\text{g})$
 D $2\text{C}_2\text{H}_6(\text{g}) + 7\text{O}_2(\text{g}) \rightarrow 4\text{CO}_2(\text{g}) + 6\text{H}_2\text{O}(\text{g})$
- 39 One mole of magnesium is dissolved in excess aqueous ethanoic acid, CH_3COOH .
 How many moles of hydrogen, H_2 , will be produced?
- A 0.5 B 1 C 2 D 4
- 40 The section of a polymer chain is shown.



Which molecule would produce this polymer and by which type of polymerisation?

	molecule	type of polymerisation
A	$\text{CH}_3\text{--CH=CH--CH}_3$	condensation
B	$\text{CH}_3\text{--CH}_2\text{--CH=CH}_2$	addition
C	$\text{CH}_3\text{--CH}_2\text{--CH}_2\text{--CH=CH}_2$	condensation
D	$\text{CH}_3\text{--CH=CH--CH}_3$	addition

BLANK PAGE

BLANK PAGE

BLANK PAGE

DATA SHEET
The Periodic Table of the Elements

Group																								
I	II											III	IV	V	VI	VII	0							
												1 H Hydrogen 1												
7 Li Lithium 3	9 Be Beryllium 4																	11 B Boron 5						
23 Na Sodium 11	24 Mg Magnesium 12																	12 C Carbon 6						
39 K Potassium 19	40 Ca Calcium 20	45 Sc Scandium 21	48 Ti Titanium 22	51 V Vanadium 23	52 Cr Chromium 24	55 Mn Manganese 25	56 Fe Iron 26	59 Co Cobalt 27	59 Ni Nickel 28	64 Cu Copper 29	65 Zn Zinc 30	70 Ga Gallium 31	73 Ge Germanium 32	75 As Arsenic 33	79 Se Selenium 34	84 Kr Krypton 36								
85 Rb Rubidium 37	88 Sr Strontium 38	89 Y Yttrium 39	91 Zr Zirconium 40	93 Nb Niobium 41	96 Mo Molybdenum 42	101 Ru Ruthenium 44	101 Rh Rhodium 45	106 Pd Palladium 46	108 Ag Silver 47	112 Cd Cadmium 48	115 In Indium 49	119 Sn Tin 50	122 Sb Antimony 51	127 Te Tellurium 52	131 Xe Xenon 54									
133 Cs Caesium 55	137 Ba Barium 56	139 La Lanthanum 57	178 Hf Hafnium 72	181 Ta Tantalum 73	184 W Tungsten 74	186 Re Rhenium 75	190 Os Osmium 76	192 Ir Iridium 77	195 Pt Platinum 78	197 Au Gold 79	201 Hg Mercury 80	204 Tl Thallium 81	207 Pb Lead 82	209 Bi Bismuth 83										
Fr Francium 87	226 Ra Radium 88	227 Ac Actinium 89																	209 Bi Bismuth 83					
																			207 Pb Lead 82					
																			204 Tl Thallium 81					
																			201 Hg Mercury 80					
																			197 Au Gold 79					
																			195 Pt Platinum 78					
																			192 Ir Iridium 77					
																			190 Os Osmium 76					
																			186 Re Rhenium 75					
																			184 W Tungsten 74					
																			181 Ta Tantalum 73					
																			178 Hf Hafnium 72					
																			172 Lu Lutetium 71					
																			169 Tm Thulium 69					
																			167 Er Erbium 68					
																			165 Ho Holmium 67					
																			162 Dy Dysprosium 66					
																			159 Tb Terbium 65					
																			157 Gd Gadolinium 64					
																			152 Eu Europium 63					
																			150 Sm Samarium 62					
																			144 Nd Neodymium 60					
																			141 Pr Praseodymium 59					
																			140 Ce Cerium 58					
																			137 Ba Barium 56					
																			133 Cs Caesium 55					
																			127 I Iodine 53					
																			122 Sb Antimony 51					
																			119 Sn Tin 50					
																			115 In Indium 49					
																			112 Cd Cadmium 48					
																			108 Ag Silver 47					
																			106 Pd Palladium 46					
																			103 Rh Rhodium 45					
																			101 Ru Ruthenium 44					
																			101 Rh Rhodium 45					
																			106 Pd Palladium 46					
																			112 Cd Cadmium 48					
																			115 In Indium 49					
																			119 Sn Tin 50					
																			122 Sb Antimony 51					
																			127 I Iodine 53					
																			131 Xe Xenon 54					
																			136 Kr Krypton 36					
																			142 Sr Strontium 38					
																			146 Ba Barium 56					
																			150 Ce Cerium 58					
																			154 Eu Europium 63					
																			158 Gd Gadolinium 64					
																			162 Dy Dysprosium 66					
																			166 Er Erbium 68					
																			170 Yb Ytterbium 70					
																			174 Lu Lutetium 71					
																			178 Yb Ytterbium 70					
																			182 No Nobelium 102					
																			186 Md Mendelevium 101					
																			190 Fm Fermium 100					
																			194 Es Einsteinium 99					
																			198 Cf Californium 98					
																			202 Bk Berkelium 97					
																			206 Cm Curium 96					
																			210 Am Americium 95					
																			214 Pu Plutonium 94					
																			218 Np Neptunium 93					
																			222 U Uranium 92					
																			226 Pa Protactinium 91					
																			230 Th Thorium 90					
																			234 Ce Cerium 58					
																			238 Nd Neodymium 60					
																			242 Sm Samarium 62					
																			246 Eu Europium 63					
																			250 Gd Gadolinium 64					
																			254 Tb Terbium 65					
																			258 Dy Dysprosium 66					
																			262 Ho Holmium 67					
																			266 Er Erbium 68					
																			270 Yb Ytterbium 70					
																			274 Lu Lutetium 71					
																			278 No Nobelium 102					
																			282 Md Mendelevium 101					
																			286 Fm Fermium 100					
																			290 Es Einsteinium 99					
																			294 Cf Californium 98					
																			298 Bk Berkelium 97					
																			302 Cm Curium 96					
																			306 Am Americium 95					
																			310 Pu Plutonium 94					
																			314 Np Neptunium 93					
																			318 U Uranium 92					
																			322 Pa Protactinium 91					
																			326 Th Thorium 90					
																			330 Ce Cerium 58					
																			334 Nd Neodymium 60					
																			338 Sm Samarium 62					
																			342 Eu Europium 63					
																			346 Gd Gadolinium 64					
																			350 Tb Terbium 65					
																			354 Dy Dysprosium 66					
																			358 Ho Holmium 67					
																			362 Er Erbium 68					
																			366 Yb Ytterbium 70					
																			370 Lu Lutetium 71					
																			374 No Nobelium 102					
																			378 Md Mendelevium 101					
																			382 Fm Fermium 100					
																			386 Es Einsteinium 99					
																			390 Cf Californium 98					
																			394 Bk Berkelium 97					
																			398 Cm Curium 96					
																			402 Am Americium 95					
																			406 Pu Plutonium 94					
																			410 Np Neptunium 93					
																			414 U Uranium 92					
																			418 Pa Protactinium 91					
																			422 Th Thorium 90					
																			426 Ce Cerium 58					
																			430 Nd Neodymium 60					
																			434 Sm Samarium 62					
																			438 Eu Europium 63					
																			442 Gd Gadolinium 64					
																			446 Tb Terbium 65					
																			450 Dy Dysprosium 66					
																			454 Ho Holmium 67					
																			458 Er Erbium 68					
																			462 Yb Ytterbium 70					
																			466 Lu Lutetium 71					
																			470 No Nobelium 102					
																			474 Md Mendelevium 101					
																			478 Fm Fermium 100					
																			482 Es Einsteinium 99					
																			486 Cf Californium 98					
																			490 Bk Berkelium 97					
																			494 Cm Curium 96					
																			498 Am Americium 95					
																			502 Pu Plutonium 94					
																			506 Np Neptunium 93					
																			510 U Uranium 92					
																			514 Pa Protactinium 91					
																			518 Th Thorium 90					
																			522 Ce Cerium 58					
																			526 Nd Neodymium 60					
																			530 Sm Samarium 62					
																			534 Eu Europium 63					
																			538 Gd Gadolinium 64					
																			542 Tb Terbium 65					
																			546 Dy Dysprosium 66					
																			550 Ho Holmium 67					
																			554 Er Erbium 68					
																			558 Yb Ytterbium 70					
																			562 Lu Lutetium 71					
																			566 No Nobelium 102					
																			570 Md Mendelevium 101					
																			574 Fm Fermium 100					
																			578 Es Einsteinium 99					
																			582 Cf Californium 98					
																			586 Bk Berkelium 97					
																			590 Cm Curium 96					
																			594 Am Americium 95					
																			598 Pu Plutonium 94					
																			602 Np Neptunium 93					
																			606 U Uranium 92					
																			610 Pa Protactinium 91					
																			614 Th Thorium 90					
																			618 Ce Cerium 58					
																			622 Nd Neodymium 60					
																			626 Sm Samarium 62					
																			630 Eu Europium 63					
																			634 Gd Gadolinium 64					
																			638 Tb Terbium 65					
																			642 Dy Dysprosium 66					
																			646 Ho Holmium 67					
																			650 Er Erbium 68					
																			654 Yb Ytterbium 70					
																			658 Lu Lutetium 71					
																			662 No Nobelium 102					
																			666 Md Mendelevium 101					
																			670 Fm Fermium 100					
																			674 Es Einsteinium 99					
																			678 Cf Californium 98					
																			682 Bk Berkelium 97					
																			686 Cm Curium 96					
																			690 Am Americium 95					
																			694 Pu Plutonium 94					
																			698 Np Neptunium 93					
																			702 U Uranium 92					
																			706 Pa Protactinium 91					
																			710 Th Thorium 90					
																			714 Ce Cerium 58					
																			718 Nd Neodymium 60					
																			722 Sm Samarium 62					
																			726 Eu Europium 63					
																			730 Gd Gadolinium 64					
																			734 Tb Terbium 65					
																			738 Dy Dysprosium 66					
																			742 Ho Holmium 67					
																			746 Er Erbium 68					
																			750 Yb Ytterbium 70					
																			754 Lu Lutetium 71					
																			758 No Nobelium 102					
																			762 Md Mendelevium 101					
																			766 Fm Fermium 100					
																			770 Es Einsteinium 99					
																			774 Cf Californium 98					
																			778 Bk Berkelium 97					
																			782 Cm Curium 96					
																			786 Am Americium 95					
																			790 Pu Plutonium 94					
																			794 Np Neptunium 93					
																			798 U Uranium 92					
																			802 Pa Protactinium 91					
																			806 Th Thorium 90					
																			810 Ce Cerium 58					
																			814 Nd Neodymium 60					
																			818 Sm Samarium 62					
																			822 Eu Europium 63					
																			826 Gd Gadolinium 64					
																			830 Tb Terbium 65					
																			834 Dy Dysprosium 66					
																			838 Ho Holmium 67					
																			842 Er Erbium 68					
																			846 Yb Ytterbium 70					
																			850 Lu Lutetium 71					
																			854 No Nobelium 102					
																			858 Md Mendelevium 101					
																			862 Fm Fermium 100					
																			866 Es Einsteinium 99					
																			870 Cf Californium 98					
																			874 Bk Berkelium 97					
																			878 Cm Curium 96					
																			882 Am Americium 95					
																			886 Pu Plutonium 94					
																			890 Np Neptunium 93					
																			894 U Uranium 92					
																			898 Pa Protactinium 91					
																			902 Th Thorium 90					
																			906 Ce Cerium 58					
																			910 Nd Neodymium 60					
																			914 Sm Samarium 62					
																			918 Eu Europium 63					
																			922 Gd Gadolinium 64					
																			926 Tb Terbium 65					
																			930 Dy Dysprosium 66					
																			934 Ho Holmium 67					
																			938 Er Erbium 68					
																			942 Yb Ytterbium 70					
																			946 Lu Lutetium 71					
																			950 No Nobelium 102					
																			954 Md Mendelevium 101					
																			958 Fm Fermium 100					
																			962 Es Einsteinium 99					
																			966 Cf Californium 98					
																			970 Bk Berkelium 97					
																			974 Cm Curium 96					
																			978 Am Americium 95					
																			982 Pu Plutonium 94					
																			986 Np Neptunium 93					
																			990 U Uranium 92					
																			994 Pa Protactinium 91					
																			998 Th Thorium 90					
																			1002 Ce Cerium 58					
																			1006 Nd Neodymium 60					
																			1010 Sm Samarium 62					

*58-71 Lanthanoid series
†90-103 Actinoid series

a	X	a = relative atomic mass
b	X	X = atomic symbol
		b = proton (atomic) number

Key

The volume of one mole of any gas is 24 dm³ at room temperature and pressure (r.t.p.).

Permission to reproduce items where third-party owned material protected by copyright is included has been sought and cleared where possible. Every reasonable effort has been made by the publisher (UCLES) to trace copyright holders, but if any items requiring clearance have unwittingly been included, the publisher will be pleased to make amends at the earliest possible opportunity.

University of Cambridge International Examinations is part of the Cambridge Assessment Group. Cambridge Assessment is the brand name of University of Cambridge Local Examinations Syndicate (UCLES), which is itself a department of the University of Cambridge.