

Centre Number	Candidate Number	Name
---------------	------------------	------

UNIVERSITY OF CAMBRIDGE INTERNATIONAL EXAMINATIONS
International General Certificate of Secondary Education

CHEMISTRY

0620/02

Paper 2 (Core)

October/November 2005

1 hour 15 minutes

Candidates answer on the Question Paper.
No Additional Materials required.

READ THESE INSTRUCTIONS FIRST

Write your Centre number, candidate number and name on all the work you hand in.
Write in dark blue or black pen in the spaces provided on the Question Paper.
You may use a pencil for any diagrams, graphs or rough working.
Do not use staples, paper clips, highlighters, glue or correction fluid.

Answer **all** questions.

The number of marks is given in brackets [] at the end of each question or part question.
A copy of the Periodic Table is printed on page 16.

For Examiner's Use

1	
2	
3	
4	
5	
6	
Total	

This document consists of **16** printed pages.

1 The diagram shows part of the Periodic Table.

				He
C	N	O	F	Ne
		S	Cl	Ar
			Br	Kr

(a) Answer these questions using only the elements shown in the diagram.

Write down the symbol for an element which

- (i) has five electrons in its outer shell, [1]
- (ii) has diatomic molecules, [1]
- (iii) reacts with sodium to form sodium bromide, [1]
- (iv) is a noble gas, [1]
- (v) has a giant covalent structure, [1]
- (vi) has a lower proton number than fluorine, [1]
- (vii) is the most abundant gas in the air. [1]

(b) Write down a use for each of the following elements.

- (i) argon
..... [1]
- (ii) helium
..... [1]
- (iii) oxygen
..... [1]

(c) (i) Draw a diagram to show the electronic structure of argon.

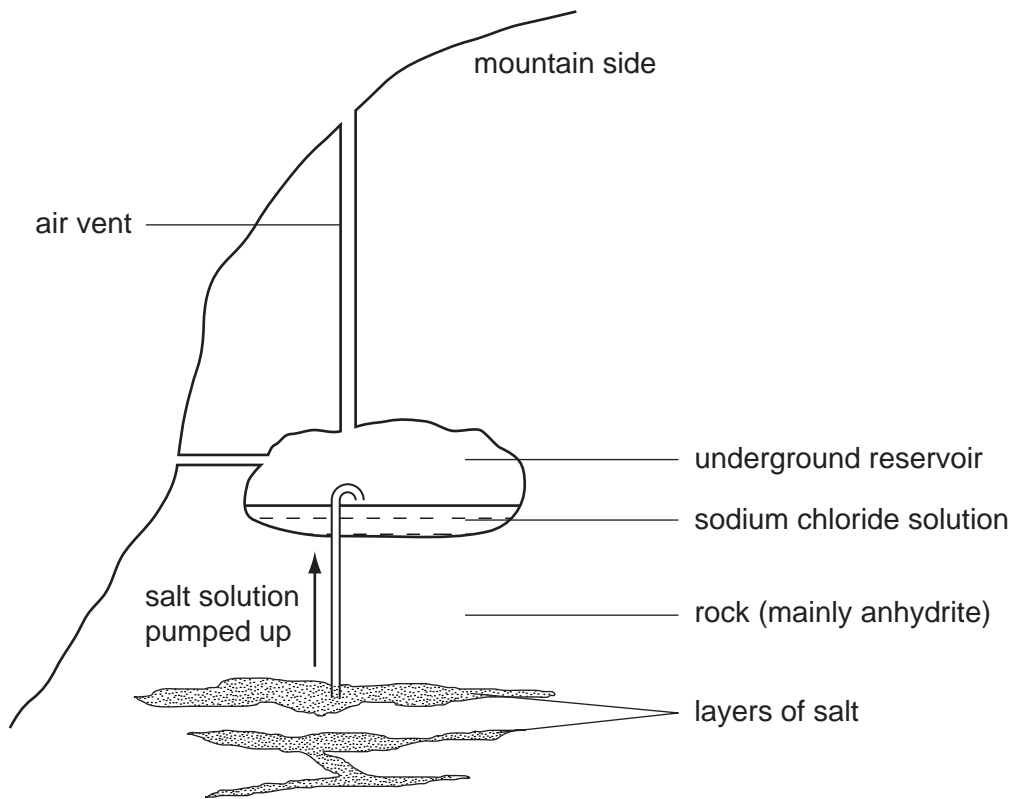
[2]

(ii) Why is argon very unreactive?

.....

[1]

2 The diagram shows the salt mines at Bex in Switzerland.



The salt is dissolved by water from underground springs and then pumped up to a reservoir where it is stored as a solution.

(a) Write the chemical formula for sodium chloride.

..... [1]

(b) Suggest how solid sodium chloride is obtained from the sodium chloride solution.

..... [1]

(c) Sodium chloride has an ionic giant structure.
Which one of the following best describes an aqueous solution of sodium chloride?
Tick one box.

- a mixture of sodium ions and chlorine molecules in water
- a mixture of sodium and chlorine atoms in water
- a mixture of sodium and chloride ions in water
- a mixture of sodium, chloride, oxide and hydrogen ions

[1]

(d) Describe a test for chloride ions.

test

result

[2]

(e) The rock surrounding the layers of salt is anhydrite.
Pure anhydrite has the chemical formula CaSO_4 .

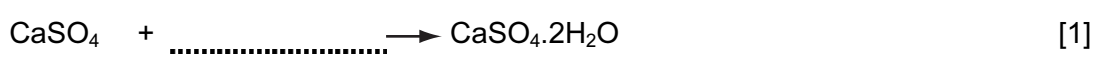
(i) State the name of the chemical found in anhydrite.

..... [1]

(ii) Calculate the relative formula mass of the chemical in pure anhydrite.

[1]

(iii) When anhydrite reacts with water, gypsum ($\text{CaSO}_4 \cdot 2\text{H}_2\text{O}$) is formed.
Complete the equation for this reaction.



(iv) Which one of the following describes this reaction?
Put a ring around the correct answer.

combustion fermentation hydration oxidation reduction [1]

- (v) The chemical in anhydrite can be made by reacting calcium hydroxide with sulphuric acid.
Complete the balanced equation for this reaction.



- (vi) The spring water running through the rocks changes anhydrite into gypsum. This reaction is exothermic.
Use this information to explain why the temperature of the mine never falls below 17°C even in cold winters.

.....
..... [1]

- (f) The air inside the mine contains 19% oxygen.
Which one of the following best describes the oxygen level inside the mine compared with that outside the mine?
Tick one box.

the level of oxygen inside the mine is higher

the level of oxygen is the same

the level of oxygen is about a quarter of that of the outside air

the level of oxygen inside the mine is lower

[1]

- 3 Hydrogen peroxide solution, H_2O_2 , decomposes slowly in the absence of a catalyst. Oxygen and water are formed.

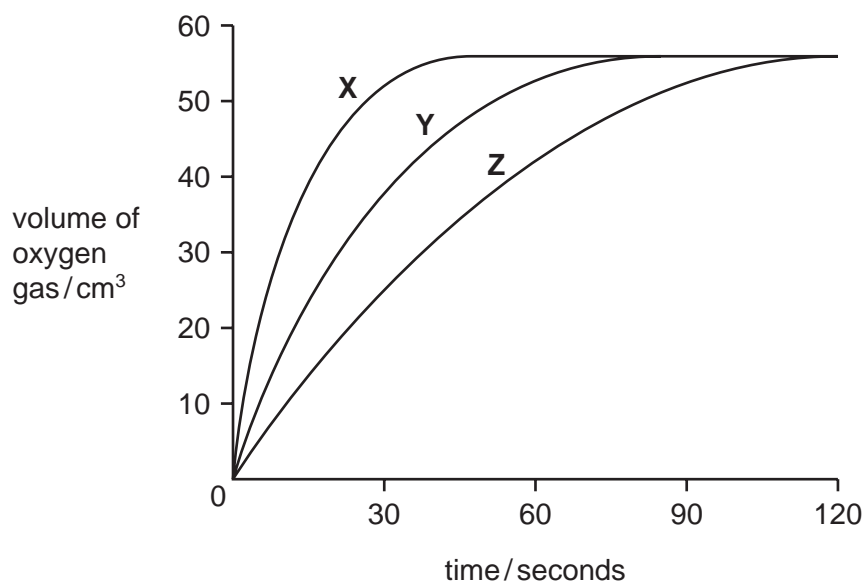


- (a) Draw a diagram of the apparatus you could use to investigate the speed of this reaction.

You must label your diagram.

[3]

- (b) Catalyst **X** was added to 50cm^3 of hydrogen peroxide solution at 20°C and the amount of oxygen given off was recorded over a two minute period. The experiment was repeated with the same amounts of catalyst **Y** and catalyst **Z**. Apart from the type of catalyst, all conditions were kept the same in the three experiments. A graph of the results is shown below.



- (i) What is a catalyst?

.....

[1]

(ii) Which catalyst, **X**, **Y** or **Z**, produced oxygen gas the fastest?
Explain your answer.

.....
..... [2]

(iii) Why is the final amount of oxygen gas the same in each experiment?

.....
..... [1]

(iv) Many transition metals and their oxides are good catalysts.
State **two** other properties of transition metals which are not shown by other metals.

.....
..... [2]

(c) The experiment with catalyst **Z** was repeated at 40°C.
All other conditions were kept the same.
The speed of the reaction increased.
Explain why, using ideas about particles.

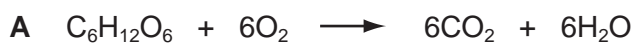
.....
.....
..... [2]

(d) Some enzymes also catalyse the decomposition of hydrogen peroxide.

(i) State one difference between an enzyme and an inorganic catalyst such as a transition metal.

..... [1]

(ii) Enzymes are also responsible for fermentation reactions.
Which one of the following equations **A**, **B**, **C** or **D** describes fermentation?



..... [1]

4 The list shows some oxides.

- calcium oxide
- magnesium oxide
- nitrogen dioxide
- sodium oxide
- sulphur dioxide

(a) From this list choose **two** oxides which are basic.
Give a reason for your answer.

.....
 [2]

(b) (i) Which **two** oxides from this list contribute to acid rain?

..... [2]

(ii) How do each of these oxides get into the atmosphere?

name of oxide

source of oxide [1]

name of oxide

source of oxide [1]

(c) Calcium oxide is manufactured from calcium carbonate.

(i) Complete the word equation for this reaction.

calcium carbonate → calcium oxide + [1]

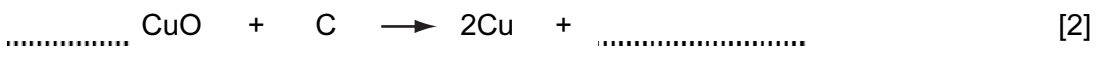
(ii) What condition is needed for this reaction to take place?

..... [1]

(d) (i) Explain why calcium oxide and sodium oxide cannot be reduced by heating with carbon.

..... [1]

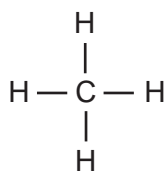
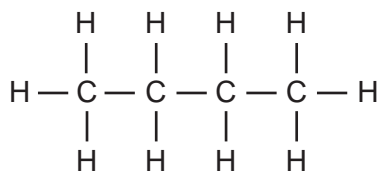
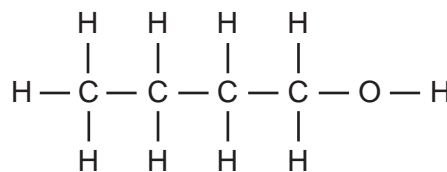
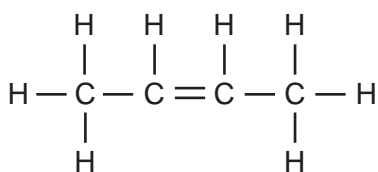
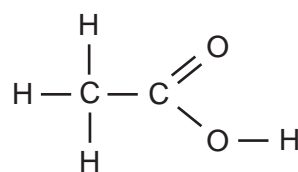
(ii) Copper(II) oxide can be reduced by heating with carbon.
Complete the equation for this reaction.



(iii) What do you understand by the term *reduction*?

.....
..... [1]

5 The structures of some organic compounds are shown below.

**A****B****C****D****E**

(a) Name compound **A**.

..... [1]

(b) Which **two** of the compounds **A** to **E** belong to the same homologous series?

..... [1]

(c) (i) Which one of the compounds **A** to **E** has the same functional group as ethanol?

..... [1]

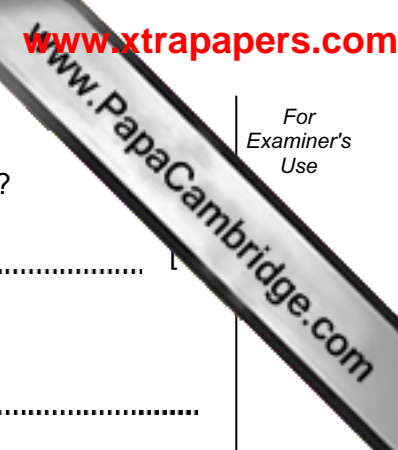
(ii) Draw the structure of ethanol, showing all atoms and bonds.

[2]

(iii) Describe how ethanol is made in industry from ethene.

.....

..... [2]



(d) (i) Which one of the compounds **A** to **E** is an unsaturated hydrocarbon?

..... [1]

(ii) Describe a chemical test for an unsaturated hydrocarbon.

test

result [2]

(e) Compound **E** is acidic.

(i) State the name of compound **E**.

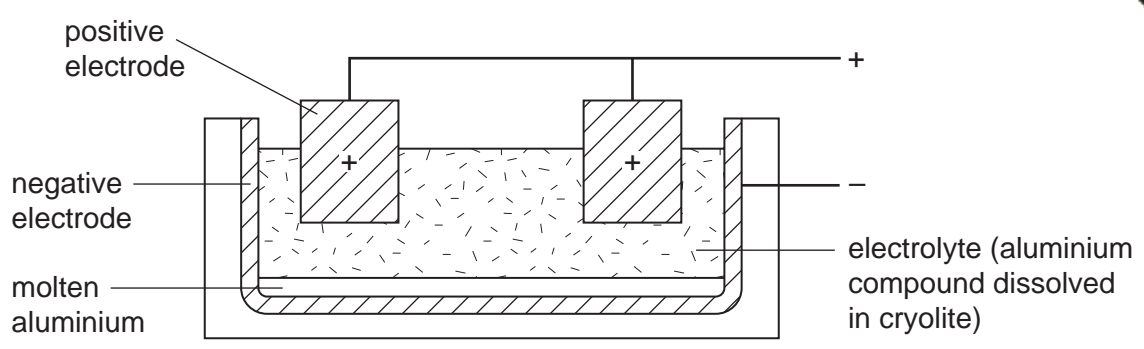
..... [1]

(ii) Describe a test to show that compound **E** is acidic.

test

result [2]

6 The diagram shows an electrolysis cell used to extract aluminium.



(a) What compound of aluminium is used for the electrolyte?

..... [1]

(b) The electrolyte must be molten for the electrolysis to work. Explain why.

..... [1]

(c) (i) State the name of the substance used for the electrodes.

..... [1]

(ii) To which electrode do the aluminium ions move during electrolysis? Explain your answer.

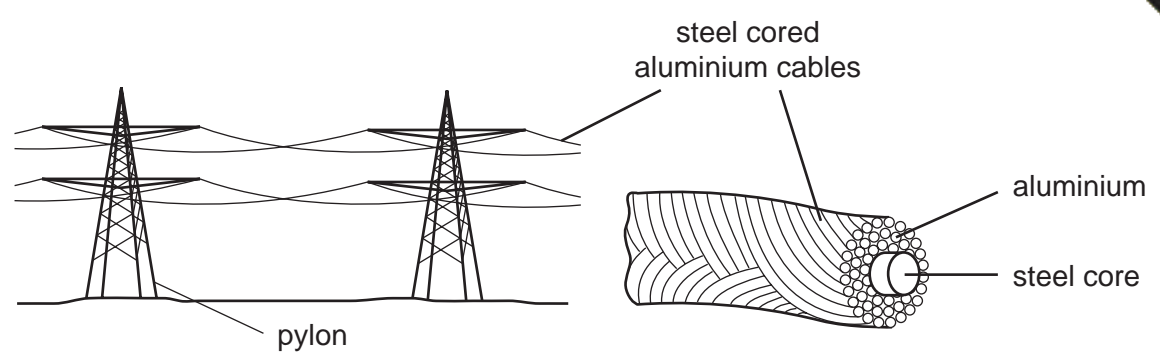
..... [2]

(d) Complete the following sentences about the molten electrolyte using words from the list below.

- | | | | |
|------------|-----------|-----------|-----------|
| bauxite | chemical | cryolite | decreased |
| electrical | haematite | increased | light |

The melting point of the electrolyte is by adding
 This means that less energy
 is needed to melt the electrolyte. [3]

(e) Aluminium is used in overhead power cables.



The table shows some properties of three metals which could be used for the power cables.

metal	relative electrical conductivity	density / grams per cm ³	price / £ per kg	relative strength
aluminium	0.4	2.70	18	9
copper	0.7	8.92	15	30
steel	0.1	7.86	2.7	50

- (i) Suggest why aluminium is used for overhead power cables rather than copper.
 [1]
- (ii) Suggest why steel is not used alone for overhead power cables.
 [1]
- (iii) Why is steel used as a core for overhead power cables?
 [1]
- (iv) Electrical insulators are used in parts of the pylons which carry the electrical cables. Which one of the following is an electrical insulator? Put a ring around the correct answer.
 aluminium ceramic graphite zinc [1]

(f) Aluminium has many uses.

(i) Why is aluminium used for aircraft bodies?

..... [1]

(ii) Describe a test for aluminium ions.

test

result

..... [3]

DATA SHEET
The Periodic Table of the Elements

		Group															
I	II	III	IV	V	VI	VII	O										
		1 H Hydrogen 1										2 He Helium 2					
7 Li Lithium 3	9 Be Beryllium 4												19 F Fluorine 9	20 Ne Neon 10			
23 Na Sodium 11	24 Mg Magnesium 12												16 O Oxygen 8	32 S Sulphur 16			
39 K Potassium 19	40 Ca Calcium 20	45 Sc Scandium 21	48 Ti Titanium 22	51 V Vanadium 23	52 Cr Chromium 24	55 Mn Manganese 25	56 Fe Iron 26	59 Co Cobalt 27	59 Ni Nickel 28	64 Cu Copper 29	65 Zn Zinc 30	70 Ga Gallium 31	73 Ge Germanium 32	75 As Arsenic 33	79 Se Selenium 34	84 Kr Krypton 36	
85 Rb Rubidium 37	88 Sr Strontium 38	89 Y Yttrium 39	91 Zr Zirconium 40	93 Nb Niobium 41	96 Mo Molybdenum 42	101 Ru Ruthenium 44	101 Ru Ruthenium 44	103 Rh Rhodium 45	106 Pd Palladium 46	108 Ag Silver 47	112 Cd Cadmium 48	115 In Indium 49	119 Sn Tin 50	122 Sb Antimony 51	128 Te Tellurium 52	131 Xe Xenon 54	
133 Cs Caesium 55	137 Ba Barium 56	139 La Lanthanum 57	178 Hf Hafnium 72	181 Ta Tantalum 73	184 W Tungsten 74	190 Os Osmium 76	190 Os Osmium 76	192 Ir Iridium 77	195 Pt Platinum 78	197 Au Gold 79	201 Hg Mercury 80	204 Tl Thallium 81	207 Pb Lead 82	209 Bi Bismuth 83	84 Po Polonium 84	85 At Astatine 85	86 Rn Radon 86

140 Ce Cerium 58	141 Pr Praseodymium 59	144 Nd Neodymium 60	150 Sm Samarium 62	152 Eu Europium 63	157 Gd Gadolinium 64	162 Dy Dysprosium 66	165 Ho Holmium 67	167 Er Erbium 68	169 Tm Thulium 69	173 Yb Ytterbium 70	175 Lu Lutetium 71
232 Th Thorium 90	238 U Uranium 92	238 U Uranium 92	94 Pu Plutonium 94	95 Am Americium 95	96 Cm Curium 96	98 Cf Californium 98	99 Es Einsteinium 99	100 Fm Fermium 100	101 Md Mendelevium 101	102 No Nobelium 102	103 Lr Lawrencium 103

*58-71 Lanthanoid series
90-103 Actinoid series

Key

a	X	a = relative atomic mass
	X	X = atomic symbol
b		b = proton (atomic) number

The volume of one mole of any gas is 24 dm³ at room temperature and pressure (r.t.p.).