



UNIVERSITY OF CAMBRIDGE INTERNATIONAL EXAMINATIONS
International General Certificate of Secondary Education

CANDIDATE
NAME

CENTRE
NUMBER

--	--	--	--	--

CANDIDATE
NUMBER

--	--	--	--

* 0 2 7 9 9 4 1 7 3 8 *

CHEMISTRY

0620/31

Paper 3 (Extended)

October/November 2011

1 hour 15 minutes

Candidates answer on the Question Paper.

No Additional Materials are required.

READ THESE INSTRUCTIONS FIRST

Write your Centre number, candidate number and name on all the work you hand in.
Write in dark blue or black pen.
You may use a pencil for any diagrams, graphs or rough working.
Do not use staples, paper clips, highlighters, glue or correction fluid.
DO NOT WRITE IN ANY BARCODES.

Answer **all** questions.
A copy of the Periodic Table is printed on page 16.

At the end of the examination, fasten all your work securely together.
The number of marks is given in brackets [] at the end of each question or part question.

For Examiner's Use	
1	
2	
3	
4	
5	
6	
7	
Total	

This document consists of **15** printed pages and **1** blank page.

1 This question is concerned with the following oxides.

- sulfur dioxide
- carbon monoxide
- lithium oxide
- aluminium oxide
- nitrogen dioxide
- strontium oxide

(a) (i) Which of the above oxides will react with hydrochloric acid but not with aqueous sodium hydroxide?

..... [1]

(ii) Which of the above oxides will react with aqueous sodium hydroxide but not with hydrochloric acid?

..... [1]

(iii) Which of the above oxides will react with both hydrochloric acid and aqueous sodium hydroxide?

..... [1]

(iv) Which of the above oxides will not react with hydrochloric acid or with aqueous sodium hydroxide?

..... [1]

(b) Two of the oxides are responsible for acid rain. Identify the **two** oxides and explain their presence in the atmosphere.

.....
.....
.....
.....
..... [5]

(c) Lithium oxide is an ionic compound.

(i) Identify another ionic oxide in the list on page 3.

..... [1]

(ii) Draw a diagram which shows the formula of lithium oxide, the charges on the ions and the arrangement of the valency electrons around the negative ion.
Use x to represent an electron from an atom of oxygen.
Use o to represent an electron from an atom of lithium.

[2]

[Total: 12]

2 Two important greenhouse gases are methane and carbon dioxide.

(a) Methane is twenty times more effective as a greenhouse gas than carbon dioxide. The methane in the atmosphere comes from both natural and industrial sources.

(i) Describe **two** natural sources of methane.

.....
..... [2]

(ii) Although methane can persist in the atmosphere for up to 15 years, it is eventually removed by oxidation. What are the products of this oxidation?

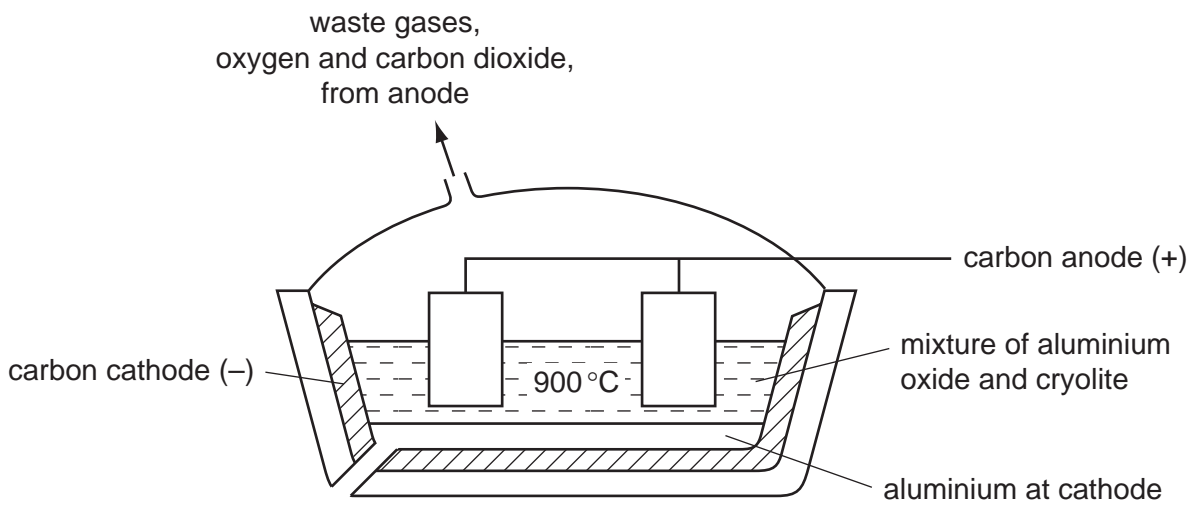
..... [2]

(b) How do the processes of respiration, combustion and photosynthesis determine the percentage of carbon dioxide in the atmosphere?

.....
.....
.....
..... [4]

[Total: 8]

3 Aluminium is extracted by the electrolysis of a molten mixture of alumina, which is aluminium oxide, and cryolite.



(a) (i) Alumina is obtained from the main ore of aluminium. Name this ore.

..... [1]

(ii) Explain why it is necessary to use a mixture, alumina and cryolite, rather than just alumina.

..... [2]

(iii) Copper can be extracted by the electrolysis of an aqueous solution. Suggest why the electrolysis of an aqueous solution cannot be used to extract aluminium.


..... [2]

(b) The ions which are involved in the electrolysis are Al^{3+} and O^{2-} . The products of this electrolysis are given on the diagram. Explain how they are formed. Use equations where appropriate.

..... [4]

(c) The uses of a metal are determined by its properties.

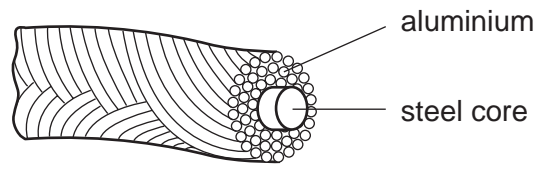
(i) Foods which are acidic can be supplied in aluminium containers.



Explain why the acid in the food does not react with the aluminium.

.....
..... [1]

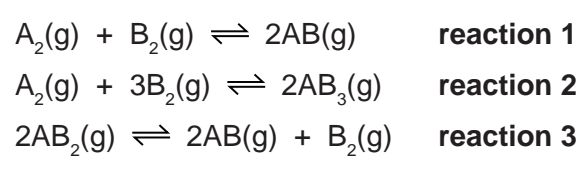
(ii) Explain why overhead electrical power cables are made from aluminium with a steel core.



.....
.....
..... [3]

[Total: 13]

4 Reversible reactions can come to equilibrium. The following are three examples of gaseous equilibria.

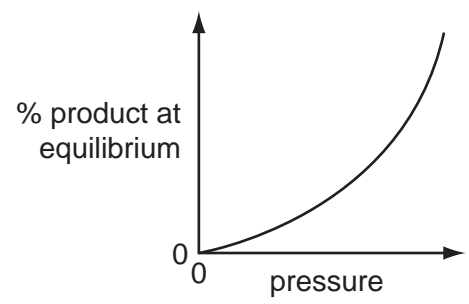


(a) Explain the term *equilibrium*.

.....
..... [2]

(b) The following graphs show how the percentage of products of a reversible reaction at equilibrium could vary with pressure.
For each graph, decide whether the percentage of products decreases, increases or stays the same when the pressure is **increased**, then match each graph to one of the above reactions and give a reason for your choice.

(i)



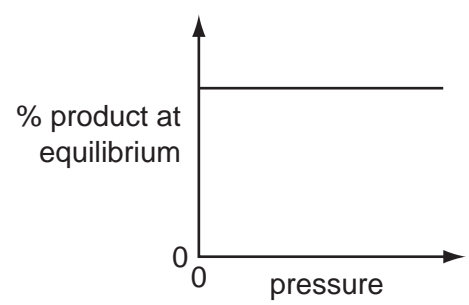
effect on percentage of products

reaction

reason

..... [3]

(ii)



effect on percentage of products

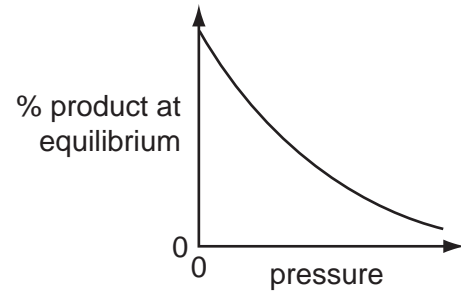
reaction

reason

..... [3]

9

(iii)



effect on percentage of products

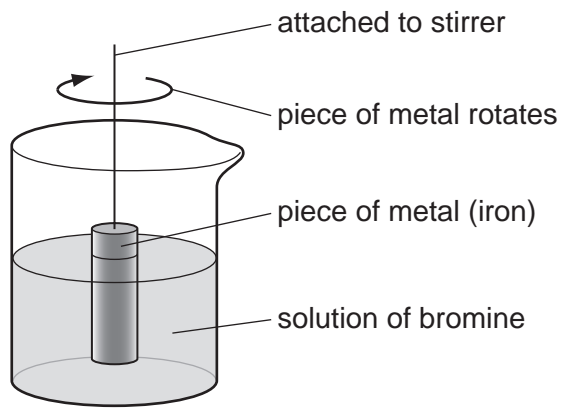
reaction

reason

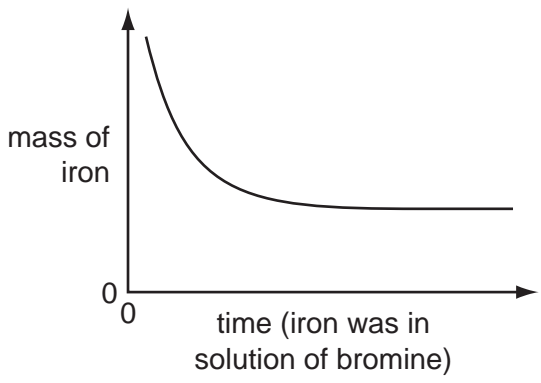
..... [3]

[Total: 11]

5 The rate of the reaction between iron and aqueous bromine can be investigated using the apparatus shown below.

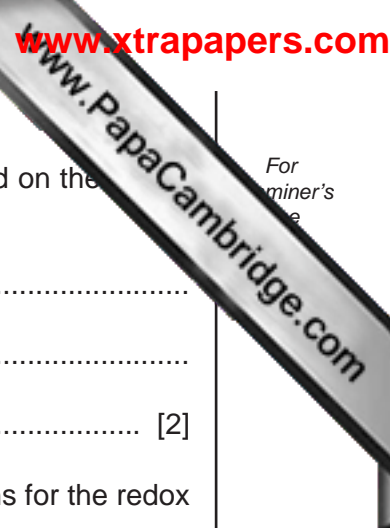


(a) A piece of iron was weighed and placed in the apparatus. It was removed at regular intervals and the clock was paused. The piece of iron was washed, dried, weighed and replaced. The clock was restarted. This was continued until the solution was colourless. The mass of iron was plotted against time. The graph shows the results obtained.



(i) Suggest an explanation for the shape of the graph.
.....
.....
..... [3]

(ii) Predict the shape of the graph if a similar piece of iron with a much rougher surface had been used. Explain your answer.
.....
..... [2]

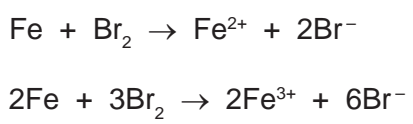


For
miner's
e

(iii) Describe how you could find out if the rate of this reaction depended on the rate of stirring.

.....
.....
..... [2]

(b) Iron has two oxidation states +2 and +3. There are two possible equations for the redox reaction between iron and bromine.



(i) Indicate, on the first equation, the change which is oxidation. Give a reason for your choice.

.....
..... [2]

(ii) Which substance in the first equation is the reductant (reducing agent)?

..... [1]

(c) Describe how you could test the solution to find out which ion, Fe²⁺ or Fe³⁺, is present.

.....
.....
..... [3]

[Total: 13]

6 Structural formulae are an essential part of Organic Chemistry.

(a) Draw the structural formula of each of the following. Show all the bonds in the structure.

(i) ethanoic acid

[1]

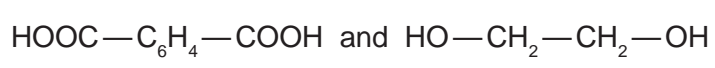
(ii) ethanol

[1]

(b) (i) Ethanoic acid and ethanol react to form an ester.
What is the name of this ester?

..... [1]

(ii) The same linkage is found in polyesters. Draw the structure of the polyester which can be formed from the monomers shown below.

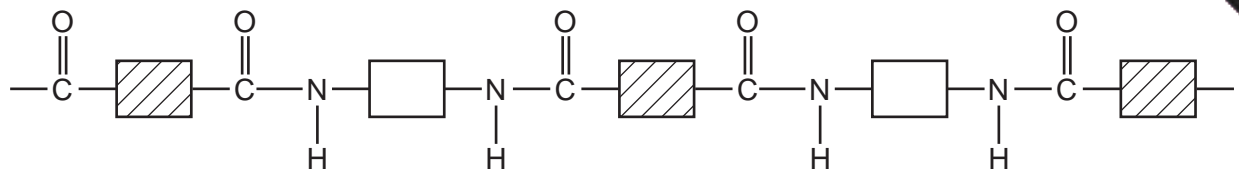


[3]

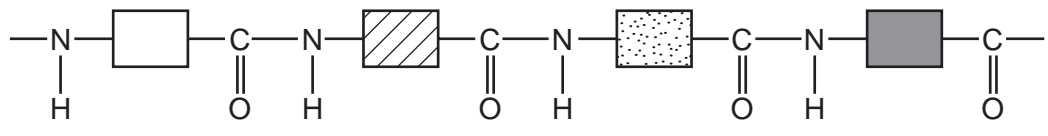
(iii) Describe the pollution problems caused by non-biodegradable polymers.

.....
.....
..... [2]

(c) Two macromolecules have the same amide linkage.
Nylon, a synthetic polymer, has the following structure.



Protein, a natural macromolecule, has the following structure.



How are they different?

.....

.....

..... [2]

[Total: 10]

7 Some hydroxides, nitrates and carbonates decompose when heated.

(a) (i) Name a metal hydroxide which does not decompose when heated.

..... [1]

(ii) Write the equation for the thermal decomposition of copper(II) hydroxide.

..... [2]

(iii) Suggest why these two hydroxides behave differently.

..... [1]

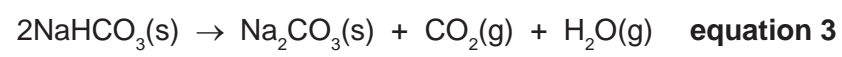
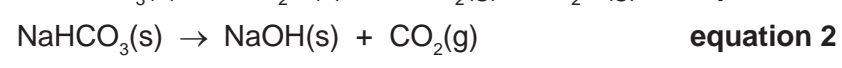
(b) (i) Metal nitrates, except those of the Group 1 metals, form three products when heated. Name the products formed when zinc nitrate is heated.

.....
..... [2]

(ii) Write the equation for the thermal decomposition of potassium nitrate.

..... [2]

(c) There are three possible equations for the thermal decomposition of sodium hydrogencarbonate.



The following experiment was carried out to determine which one of the above is the correct equation.

A known mass of sodium hydrogencarbonate was heated for ten minutes. It was then allowed to cool and weighed.

Results

Mass of sodium hydrogencarbonate = 3.36 g

Mass of the residue = 2.12 g

Calculation

M_r for $\text{NaHCO}_3 = 84 \text{ g}$; M_r for $\text{Na}_2\text{O} = 62 \text{ g}$; M_r for $\text{NaOH} = 40 \text{ g}$

M_r for $\text{Na}_2\text{CO}_3 = 106 \text{ g}$

(i) Number of moles of NaHCO_3 used = [1]

(ii) If residue is Na_2O , number of moles of Na_2O =

If residue is NaOH , number of moles of NaOH =

If residue is Na_2CO_3 , number of moles of Na_2CO_3 = [2]

(iii) Use the number of moles calculated in (i) and (ii) to decide which one of the three equations is correct. Explain your choice.

.....
.....
..... [2]

[Total: 13]

DATA SHEET
The Periodic Table of the Elements

		Group																																																																																							
I	II	III	IV	V	VI	VII	0																																																																																		
7 Li Lithium 3	9 Be Beryllium 4	1 H Hydrogen 1	11 B Boron 5	12 C Carbon 6	14 N Nitrogen 7	16 O Oxygen 8	19 F Fluorine 9	20 Ne Neon 10																																																																																	
23 Na Sodium 11	24 Mg Magnesium 12	27 Al Aluminium 13	28 Si Silicon 14	31 P Phosphorus 15	32 S Sulfur 16	35.5 Cl Chlorine 17	40 Ar Argon 18																																																																																		
39 K Potassium 19	40 Ca Calcium 20	55 Mn Manganese 25	56 Fe Iron 26	59 Co Cobalt 27	59 Ni Nickel 28	64 Cu Copper 29	65 Zn Zinc 30	70 Ga Gallium 31	73 Ge Germanium 32	75 As Arsenic 33	79 Se Selenium 34	80 Br Bromine 35	84 Kr Krypton 36																																																																												
85 Rb Rubidium 37	88 Sr Strontium 38	93 Nb Niobium 41	101 Ru Ruthenium 44	103 Rh Rhodium 45	106 Pd Palladium 46	108 Ag Silver 47	112 Cd Cadmium 48	115 In Indium 49	119 Sn Tin 50	122 Sb Antimony 51	128 Te Tellurium 52	127 I Iodine 53	131 Xe Xenon 54																																																																												
133 Cs Caesium 55	137 Ba Barium 56	181 Ta Tantalum 73	186 Re Rhenium 75	192 Ir Iridium 77	195 Pt Platinum 78	197 Au Gold 79	201 Hg Mercury 80	204 Tl Thallium 81	207 Pb Lead 82	209 Bi Bismuth 83	210 Po Polonium 84	210 At Astatine 85	210 Rn Radon 86																																																																												
87 Fr Francium	88 Ra Radium	226 Ra Radium	227 Ac Actinium																																																																																						
		*58-71 Lanthanoid series																																																																																							
		†90-103 Actinoid series																																																																																							
		<table border="1" style="margin: auto; border-collapse: collapse;"> <tr> <td style="padding: 2px;">a</td> <td style="padding: 2px;">X</td> </tr> <tr> <td style="padding: 2px;">Key</td> <td style="padding: 2px;">b</td> </tr> </table>										a	X	Key	b																																																																										
a	X																																																																																								
Key	b																																																																																								
		<table border="1" style="margin: auto; border-collapse: collapse;"> <tr> <td style="padding: 2px;">a</td> <td style="padding: 2px;">= relative atomic mass</td> </tr> <tr> <td style="padding: 2px;">X</td> <td style="padding: 2px;">= atomic symbol</td> </tr> <tr> <td style="padding: 2px;">b</td> <td style="padding: 2px;">= proton (atomic) number</td> </tr> </table>										a	= relative atomic mass	X	= atomic symbol	b	= proton (atomic) number																																																																								
a	= relative atomic mass																																																																																								
X	= atomic symbol																																																																																								
b	= proton (atomic) number																																																																																								
		<table border="1" style="margin: auto; border-collapse: collapse;"> <tr> <td style="padding: 2px;">140</td> <td style="padding: 2px;">Ce</td> <td style="padding: 2px;">141</td> <td style="padding: 2px;">Pr</td> <td style="padding: 2px;">144</td> <td style="padding: 2px;">Nd</td> <td style="padding: 2px;">150</td> <td style="padding: 2px;">Sm</td> <td style="padding: 2px;">152</td> <td style="padding: 2px;">Eu</td> <td style="padding: 2px;">157</td> <td style="padding: 2px;">Gd</td> <td style="padding: 2px;">159</td> <td style="padding: 2px;">Tb</td> <td style="padding: 2px;">162</td> <td style="padding: 2px;">Dy</td> <td style="padding: 2px;">165</td> <td style="padding: 2px;">Ho</td> <td style="padding: 2px;">167</td> <td style="padding: 2px;">Er</td> <td style="padding: 2px;">169</td> <td style="padding: 2px;">Tm</td> <td style="padding: 2px;">173</td> <td style="padding: 2px;">Yb</td> <td style="padding: 2px;">175</td> <td style="padding: 2px;">Lu</td> </tr> <tr> <td style="padding: 2px;">58</td> <td style="padding: 2px;">Cerium</td> <td style="padding: 2px;">59</td> <td style="padding: 2px;">Praseodymium</td> <td style="padding: 2px;">60</td> <td style="padding: 2px;">Neodymium</td> <td style="padding: 2px;">62</td> <td style="padding: 2px;">Samarium</td> <td style="padding: 2px;">63</td> <td style="padding: 2px;">Europium</td> <td style="padding: 2px;">64</td> <td style="padding: 2px;">Gadolinium</td> <td style="padding: 2px;">65</td> <td style="padding: 2px;">Terbium</td> <td style="padding: 2px;">66</td> <td style="padding: 2px;">Dysprosium</td> <td style="padding: 2px;">67</td> <td style="padding: 2px;">Holmium</td> <td style="padding: 2px;">68</td> <td style="padding: 2px;">Erbium</td> <td style="padding: 2px;">69</td> <td style="padding: 2px;">Thulium</td> <td style="padding: 2px;">70</td> <td style="padding: 2px;">Ytterbium</td> <td style="padding: 2px;">71</td> <td style="padding: 2px;">Lutetium</td> </tr> <tr> <td style="padding: 2px;">90</td> <td style="padding: 2px;">Thorium</td> <td style="padding: 2px;">91</td> <td style="padding: 2px;">Protactinium</td> <td style="padding: 2px;">92</td> <td style="padding: 2px;">Uranium</td> <td style="padding: 2px;">94</td> <td style="padding: 2px;">Plutonium</td> <td style="padding: 2px;">95</td> <td style="padding: 2px;">Americium</td> <td style="padding: 2px;">96</td> <td style="padding: 2px;">Curium</td> <td style="padding: 2px;">97</td> <td style="padding: 2px;">Berkelium</td> <td style="padding: 2px;">98</td> <td style="padding: 2px;">Californium</td> <td style="padding: 2px;">99</td> <td style="padding: 2px;">Einsteinium</td> <td style="padding: 2px;">100</td> <td style="padding: 2px;">Fermium</td> <td style="padding: 2px;">101</td> <td style="padding: 2px;">Mendelevium</td> <td style="padding: 2px;">102</td> <td style="padding: 2px;">Nobelium</td> <td style="padding: 2px;">103</td> <td style="padding: 2px;">Lawrencium</td> </tr> </table>										140	Ce	141	Pr	144	Nd	150	Sm	152	Eu	157	Gd	159	Tb	162	Dy	165	Ho	167	Er	169	Tm	173	Yb	175	Lu	58	Cerium	59	Praseodymium	60	Neodymium	62	Samarium	63	Europium	64	Gadolinium	65	Terbium	66	Dysprosium	67	Holmium	68	Erbium	69	Thulium	70	Ytterbium	71	Lutetium	90	Thorium	91	Protactinium	92	Uranium	94	Plutonium	95	Americium	96	Curium	97	Berkelium	98	Californium	99	Einsteinium	100	Fermium	101	Mendelevium	102	Nobelium	103	Lawrencium
140	Ce	141	Pr	144	Nd	150	Sm	152	Eu	157	Gd	159	Tb	162	Dy	165	Ho	167	Er	169	Tm	173	Yb	175	Lu																																																																
58	Cerium	59	Praseodymium	60	Neodymium	62	Samarium	63	Europium	64	Gadolinium	65	Terbium	66	Dysprosium	67	Holmium	68	Erbium	69	Thulium	70	Ytterbium	71	Lutetium																																																																
90	Thorium	91	Protactinium	92	Uranium	94	Plutonium	95	Americium	96	Curium	97	Berkelium	98	Californium	99	Einsteinium	100	Fermium	101	Mendelevium	102	Nobelium	103	Lawrencium																																																																

The volume of one mole of any gas is 24 dm³ at room temperature and pressure (r.t.p.).

Permission to reproduce items where third-party owned material protected by copyright is included has been sought and cleared where possible. Every reasonable effort has been made by the publisher (UCLES) to trace copyright holders, but if any items requiring clearance have unwittingly been included the publisher will be pleased to make amends at the earliest possible opportunity.

University of Cambridge International Examinations is part of the Cambridge Assessment Group. Cambridge Assessment is the brand name of University of