



**Cambridge International Examinations**  
Cambridge International General Certificate of Secondary Education

**CHEMISTRY**

**0620/12**

Paper 1 Multiple Choice

**May/June 2014**

**45 Minutes**

Additional Materials: Multiple Choice Answer Sheet  
Soft clean eraser  
Soft pencil (type B or HB is recommended)



**READ THESE INSTRUCTIONS FIRST**

Write in soft pencil.

Do not use staples, paper clips, glue or correction fluid.

Write your name, Centre number and candidate number on the Answer Sheet in the spaces provided unless this has been done for you.

**DO NOT WRITE IN ANY BARCODES.**

There are **forty** questions on this paper. Answer **all** questions. For each question there are four possible answers **A, B, C** and **D**.

Choose the **one** you consider correct and record your choice in **soft pencil** on the separate Answer Sheet.

**Read the instructions on the Answer Sheet very carefully.**

Each correct answer will score one mark. A mark will not be deducted for a wrong answer.

Any rough working should be done in this booklet.

A copy of the Periodic Table is printed on page 16.

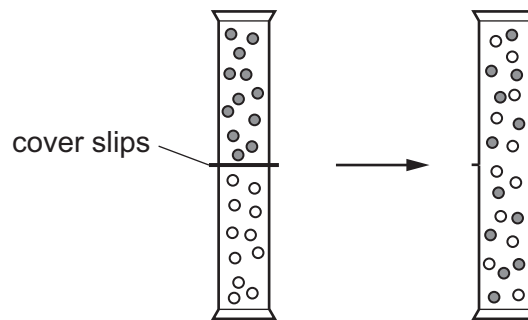
Electronic calculators may be used.

The syllabus is approved for use in England, Wales and Northern Ireland as a Cambridge International Level 1/Level 2 Certificate.

This document consists of **16** printed pages.

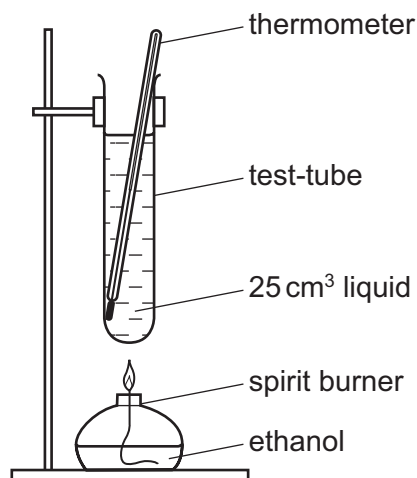
- 1 Two gas jars each contain a different gas. The gas jars are connected and the cover slips are removed.

The diagram shows what happens to the particles of the gases.



Which process has occurred?

- A chemical reaction
  - B condensation
  - C diffusion
  - D evaporation
- 2 A liquid is heated until it boils.



Which result shows that the liquid in the test-tube is pure water?

- A Condensation forms at the top of the test-tube.
- B Steam is produced.
- C The thermometer reads 100 °C.
- D There is nothing left behind in the test-tube.

3 Which two methods can be used to separate a salt from its solution in water?

- 1 crystallisation
- 2 decanting
- 3 distillation
- 4 filtration

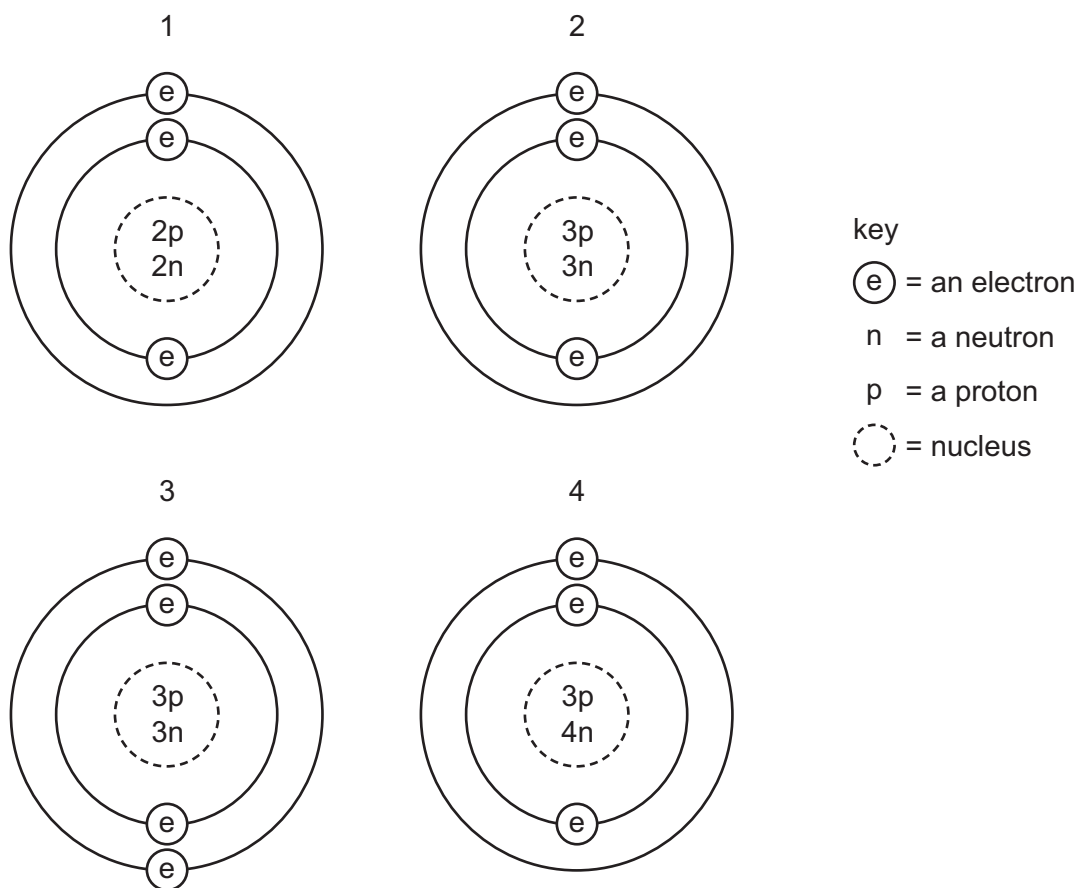
**A** 1 and 2      **B** 1 and 3      **C** 2 and 3      **D** 3 and 4

4 Which statements about a phosphorus atom,  $^{31}_{15}\text{P}$ , are correct?

- 1 The nucleon number is 16.
- 2 The number of outer electrons is 5.
- 3 The proton number is 15.

**A** 1, 2 and 3      **B** 1 and 2 only      **C** 1 and 3 only      **D** 2 and 3 only

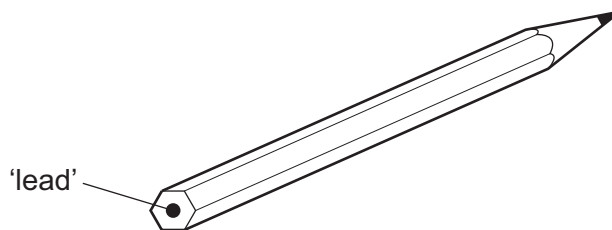
5 The diagrams show four particles.



Which two diagrams show **atoms** that are isotopes of each other?

**A** 1 and 2      **B** 1 and 3      **C** 2 and 3      **D** 2 and 4

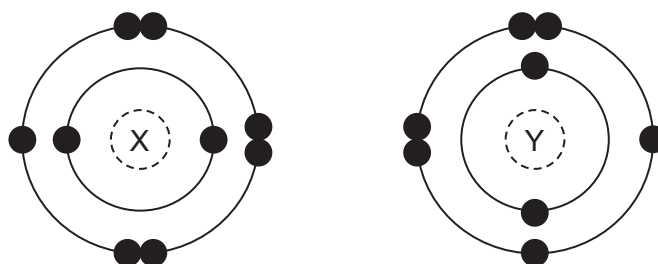
- 6 The 'lead' in a pencil is made of a mixture of graphite and clay.



When the percentage of graphite is increased, the pencil slides across the paper more easily.

Which statement explains this observation?

- A** Graphite has a high melting point.  
**B** Graphite is a form of carbon.  
**C** Graphite is a lubricant.  
**D** Graphite is a non-metal.
- 7 The electronic structures of two atoms, X and Y, are shown.

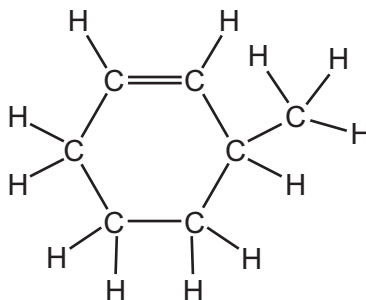


X and Y combine together to form a compound.

What is the type of bonding in the compound and what is the formula of the compound?

	type of bonding	formula
<b>A</b>	covalent	$X_2Y$
<b>B</b>	covalent	$XY_2$
<b>C</b>	ionic	$XY_2$
<b>D</b>	ionic	$X_2Y$

- 8 The structure of an organic compound, X, is shown.



What is the molecular formula of X?

- A  $C_6H_9$       B  $C_6H_{12}$       C  $C_7H_{12}$       D  $C_7H_{14}$
- 9 What is the relative molecular mass,  $M_r$ , of nitrogen dioxide?
- A 15      B 23      C 30      D 46
- 10 Electrical cables are made from either .....1....., because it is a very good conductor of electricity, or from.....2....., because it has a low density. Overhead cables have a .....3..... core in order to give the cable strength.

Which words correctly complete gaps 1, 2 and 3?

	1	2	3
<b>A</b>	aluminium	copper	magnesium
<b>B</b>	copper	aluminium	magnesium
<b>C</b>	copper	aluminium	steel
<b>D</b>	magnesium	copper	steel

- 11 What will be produced at the anode and at the cathode, if molten potassium chloride is electrolysed?

	anode (+)	cathode (-)
<b>A</b>	chlorine	hydrogen
<b>B</b>	chlorine	potassium
<b>C</b>	hydrogen	chlorine
<b>D</b>	potassium	chlorine

12 Solutions of two chemicals are mixed.

A reaction occurs and the temperature change is measured.

Which statement is correct?

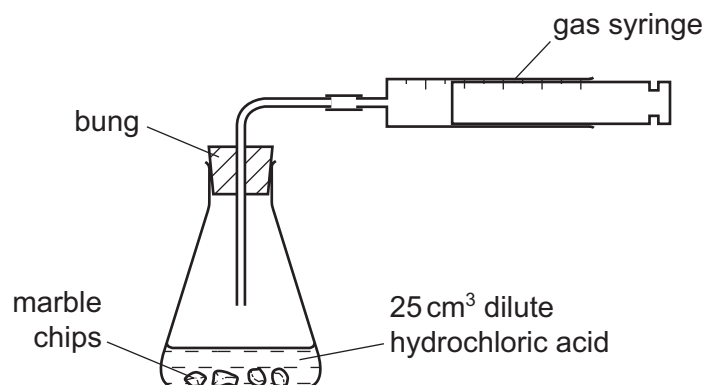
- A If the reaction is endothermic, the temperature decreases and energy is taken in.
- B If the reaction is endothermic, the temperature increases and energy is given out.
- C If the reaction is exothermic, the temperature decreases and energy is given out.
- D If the reaction is exothermic, the temperature increases and energy is taken in.

13 Power stations produce electrical energy from different fuels.

Which fuel causes least pollution to the atmosphere?

- A coal
- B fuel oil
- C natural gas
- D radioactive isotopes

14 A student was investigating the reaction between marble chips and dilute hydrochloric acid.



Which changes would reduce the rate of reaction?

	temperature of acid	concentration of acid	surface area of marble chips
<b>A</b>	decrease	decrease	decrease
<b>B</b>	decrease	decrease	increase
<b>C</b>	increase	decrease	decrease
<b>D</b>	increase	increase	increase

15 Which equation shows an oxidation reaction?

- A  $C + O_2 \rightarrow CO_2$
- B  $CaCO_3 \rightarrow CaO + CO_2$
- C  $CaO + 2HCl \rightarrow CaCl_2 + H_2O$
- D  $N_2O_4 \rightarrow 2NO_2$

16 In separate experiments, a catalyst is added to a reaction mixture and the temperature of the mixture is decreased.

What are the effects of these changes on the rate of the reaction?

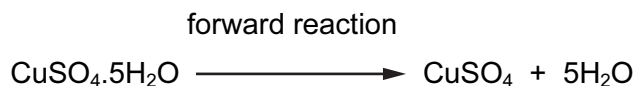
	catalyst added	temperature decreased
<b>A</b>	faster	faster
<b>B</b>	faster	slower
<b>C</b>	slower	faster
<b>D</b>	slower	slower

17 Different plants grow best under different pH conditions.

Which plant grows best in alkaline soil?

	plant	grows best in soil at pH
<b>A</b>	cabbage	6-8
<b>B</b>	potato	4-7
<b>C</b>	strawberry	5-7
<b>D</b>	wheat	6-7

- 18 The equation shows a reaction that is reversed by changing the conditions.



How can the forward reaction be reversed?

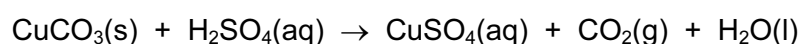
	by adding water	by heating
<b>A</b>	✓	✓
<b>B</b>	✓	x
<b>C</b>	x	✓
<b>D</b>	x	x

- 19 Element X forms an oxide, XO, that neutralises sulfuric acid.

Which row describes X and XO?

	element X	nature of oxide, XO
<b>A</b>	metal	acidic
<b>B</b>	metal	basic
<b>C</b>	non-metal	acidic
<b>D</b>	non-metal	basic

- 20 Copper carbonate reacts with dilute sulfuric acid to make copper sulfate.



Which row gives the correct order of steps for making copper sulfate crystals?

	step 1	step 2	step 3	step 4
<b>A</b>	add excess acid to the copper carbonate	filter	evaporate filtrate to point of crystallisation	leave to cool
<b>B</b>	add excess acid to the copper carbonate	filter	evaporate to dryness	leave to cool
<b>C</b>	add excess copper carbonate to the acid	evaporate to point of crystallisation	leave to cool	filter
<b>D</b>	add excess copper carbonate to the acid	filter	evaporate filtrate to point of crystallisation	leave to cool



21 Element X is a non-metal.

In which position of the Periodic Table could element X be found?

- A at the bottom of Group I
- B at the top of Group 0
- C at the top of Group I
- D in the transition elements

22 Aqueous sodium hydroxide is added to solid X and the mixture is heated.

A green precipitate is formed and an alkaline gas is given off.

Which ions are present in X?

- A  $\text{NH}_4^+$  and  $\text{Fe}^{2+}$
- B  $\text{NH}_4^+$  and  $\text{Fe}^{3+}$
- C  $\text{OH}^-$  and  $\text{Fe}^{2+}$
- D  $\text{OH}^-$  and  $\text{Fe}^{3+}$

23 A student carried out an experiment to find the order of reactivity of five metals. They were tested with cold water, hot water and steam and the results recorded in a table.

metal	cold water	hot water	steam
V	no reaction	reacts slowly	vigorous reaction
W	no reaction	no reaction	slow reaction
X	reacts slowly	vigorous reaction	not attempted
Y	no reaction	no reaction	no reaction
Z	vigorous reaction	explosive reaction	not attempted

What is the order of reactivity of these metals?

	most reactive		→	least reactive	
A	V	W		X	Z
B	W	X		V	Y
C	Z	X		W	Y
D	Z	X		W	V

24 Why is argon gas used to fill electric lamps?


- A It conducts electricity.
- B It glows when heated.
- C It is less dense than air.
- D It is not reactive.

25 An element melts at  $1455^{\circ}\text{C}$ , has a density of  $8.90\text{ g/cm}^3$  and forms a green chloride.

Where in the Periodic Table is this element found?

														A
B														
							C							
													D	

26 The diagrams show two items that may be found in the home. Each item contains zinc.



zinc plated bucket



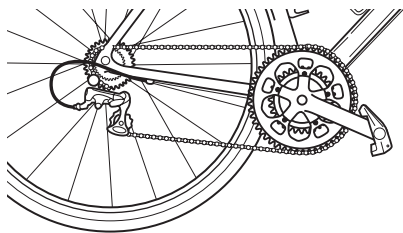
brass door-knocker

In which is zinc used as an alloy?

	bucket	door-knocker
A	✓	✓
B	✓	x
C	x	✓
D	x	x

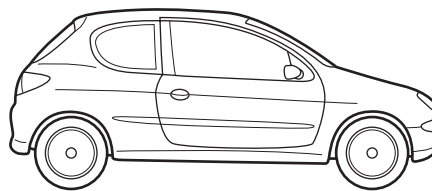
27 Which object is likely to be made from stainless steel?

A



bicycle chain

B




car body

C



can of beans

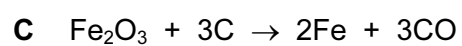
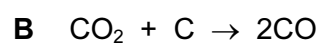
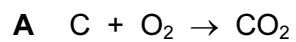
D



teaspoon

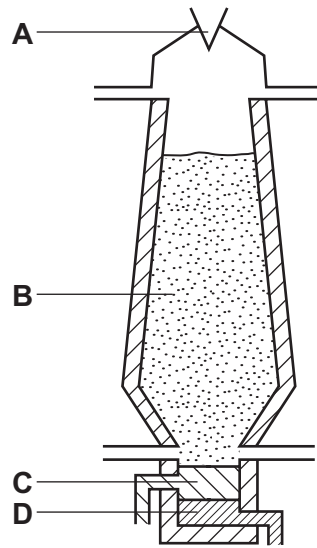
28 Four reactions that take place in the blast furnace to produce iron are shown.

Which reaction is used to keep the furnace hot?




29 The diagram shows a blast furnace.


In which part is iron ore changed to iron?



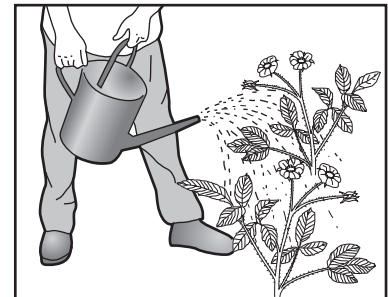
30 The diagram shows some uses of water in the home.



1



2



3

For which uses is it important for the water to have been treated?

- A** 1 only      **B** 2 only      **C** 3 only      **D** 1, 2 and 3

31 A piece of uncoated iron and three pieces of iron with various coatings were left exposed to the air.

Which piece of iron would rust?

- A** the painted piece  
**B** the tin-coated piece  
**C** the uncoated piece  
**D** the zinc-coated piece

32 Which compound would **not** be an effective fertiliser?

- A ammonium nitrate,  $\text{NH}_4\text{NO}_3$
- B calcium oxide,  $\text{CaO}$
- C calcium phosphate,  $\text{Ca}_3(\text{PO}_4)_2$
- D potassium nitrate,  $\text{KNO}_3$

33 Sulfur dioxide,  $\text{SO}_2$ , nitrogen dioxide,  $\text{NO}_2$ , and carbon monoxide,  $\text{CO}$ , are air pollutants.

Which row correctly shows their major source?

	motor car engines	power stations
A	CO	$\text{NO}_2$ , $\text{SO}_2$
B	$\text{NO}_2$ , CO	$\text{SO}_2$
C	$\text{SO}_2$ , $\text{NO}_2$	CO
D	$\text{SO}_2$	$\text{NO}_2$ , CO

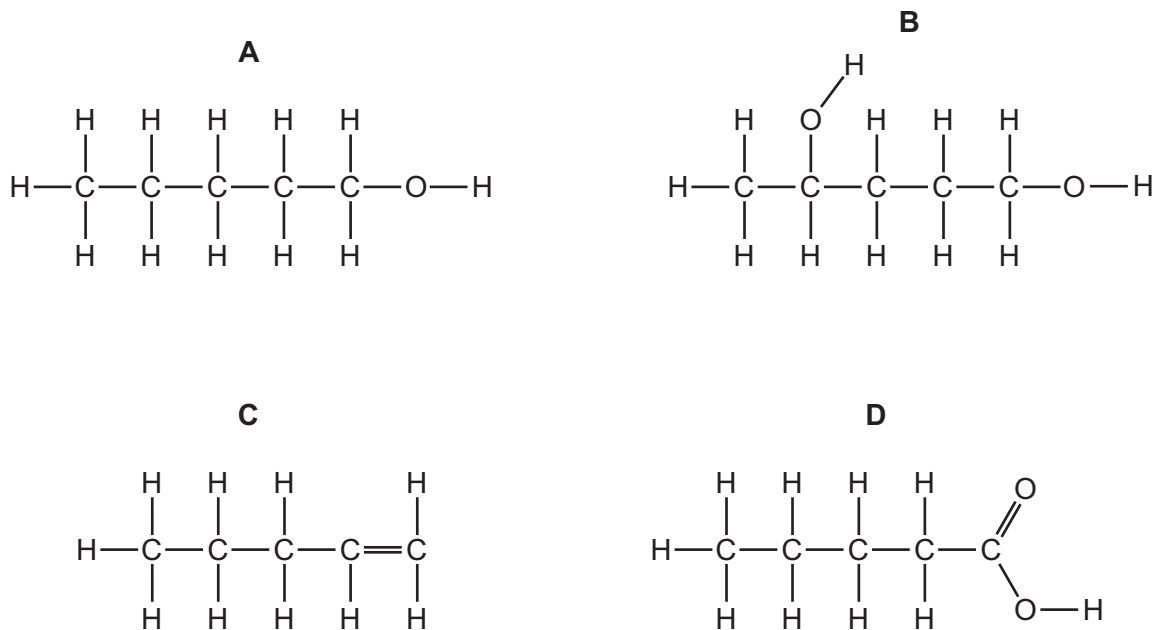
34 Which process does **not** produce carbon dioxide?

- A combustion of methane
- B fermentation of sugar
- C polymerisation of ethene
- D respiration

35 Which pollutant gas is produced by the decomposition of vegetation?

- A carbon monoxide
- B methane
- C nitrogen oxide
- D sulfur dioxide

36 Which diagram shows the structure of pentanoic acid?



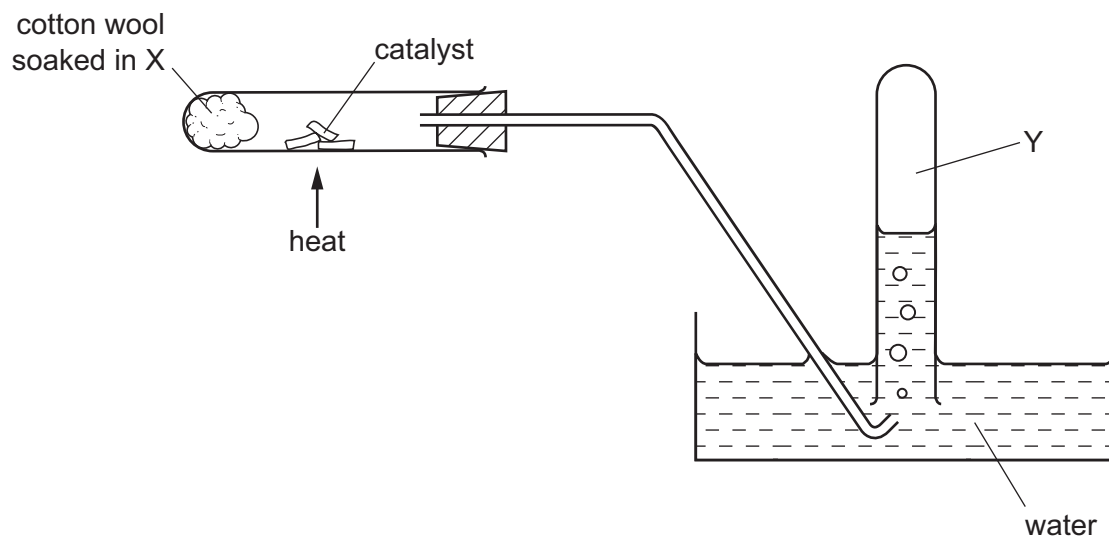
37 The table shows the composition of four different types of petroleum (crude oil).

fraction	Arabian Heavy /%	Arabian Light /%	Iranian Heavy /%	North Sea /%
gasoline	18	21	21	23
kerosene	11.5	13	13	15
diesel oil	18	20	20	24
fuel oil	52.5	46	46	38

Which type of petroleum is best for the motor vehicle industry?

- A** Arabian Heavy
- B** Arabian Light
- C** Iranian Heavy
- D** North Sea

38 The diagram shows the cracking of substance X.



Which type of organic compound is found in Y, which is **not** present in X?

- A acid  
 B alcohol  
 C alkane  
 D alkene
- 39 In which reaction could one of the products belong to the same homologous series as the organic reactant?
- A addition of steam to ethene  
 B combustion of an alkane  
 C cracking of an alkane  
 D polymerisation of ethene
- 40 Ethanol is produced from either ethene or sugar.

Which type of chemical reaction is used in each case?

	ethene → ethanol	sugar → ethanol
A	addition	fermentation
B	addition	fractional distillation
C	distillation	fermentation
D	distillation	fractional distillation

**DATA SHEET**  
**The Periodic Table of the Elements**

		Group																																																																																																								
I	II	III	IV	V	VI	VII	VIII						0																																																																																													
7 <b>Li</b> Lithium 3	9 <b>Be</b> Beryllium 4	1 <b>H</b> Hydrogen 1	11 <b>B</b> Boron 5	12 <b>C</b> Carbon 6	14 <b>N</b> Nitrogen 7	16 <b>O</b> Oxygen 8	19 <b>F</b> Fluorine 9	20 <b>Ne</b> Neon 10	23 <b>Na</b> Sodium 11	24 <b>Mg</b> Magnesium 12	27 <b>Al</b> Aluminium 13	28 <b>Si</b> Silicon 14	31 <b>P</b> Phosphorus 15	32 <b>S</b> Sulfur 16	35.5 <b>Cl</b> Chlorine 17	40 <b>Ar</b> Argon 18	39 <b>K</b> Potassium 19	40 <b>Ca</b> Calcium 20	45 <b>Sc</b> Scandium 21	48 <b>Ti</b> Titanium 22	51 <b>V</b> Vanadium 23	52 <b>Cr</b> Chromium 24	55 <b>Mn</b> Manganese 25	56 <b>Fe</b> Iron 26	59 <b>Co</b> Cobalt 27	59 <b>Ni</b> Nickel 28	64 <b>Cu</b> Copper 29	65 <b>Zn</b> Zinc 30	70 <b>Ga</b> Gallium 31	73 <b>Ge</b> Germanium 32	75 <b>As</b> Arsenic 33	79 <b>Se</b> Selenium 34	80 <b>Br</b> Bromine 35	84 <b>Kr</b> Krypton 36	85 <b>Rb</b> Rubidium 37	88 <b>Sr</b> Strontium 38	89 <b>Y</b> Yttrium 39	91 <b>Zr</b> Zirconium 40	93 <b>Nb</b> Niobium 41	96 <b>Mo</b> Molybdenum 42	101 <b>Ru</b> Ruthenium 44	106 <b>Pd</b> Palladium 46	112 <b>Cd</b> Cadmium 48	115 <b>In</b> Indium 49	119 <b>Sn</b> Tin 50	122 <b>Sb</b> Antimony 51	128 <b>Te</b> Tellurium 52	131 <b>Xe</b> Xenon 54	133 <b>Cs</b> Caesium 55	137 <b>Ba</b> Barium 56	139 <b>La</b> Lanthanum 57	178 <b>Hf</b> Hafnium 72	181 <b>Ta</b> Tantalum 73	184 <b>W</b> Tungsten 74	190 <b>Os</b> Osmium 76	192 <b>Ir</b> Iridium 77	195 <b>Pt</b> Platinum 78	197 <b>Au</b> Gold 79	201 <b>Hg</b> Mercury 80	204 <b>Tl</b> Thallium 81	207 <b>Pb</b> Lead 82	209 <b>Bi</b> Bismuth 83	210 <b>Po</b> Polonium 84	210 <b>At</b> Astatine 85	226 <b>Ra</b> Radium 88	227 <b>Ac</b> Actinium 89	228 <b>Th</b> Thorium 90	232 <b>Pa</b> Protactinium 91	238 <b>U</b> Uranium 92	238 <b>Np</b> Neptunium 93	238 <b>Pu</b> Plutonium 94	238 <b>Am</b> Americium 95	238 <b>Cm</b> Curium 96	238 <b>Bk</b> Berkelium 97	238 <b>Cf</b> Californium 98	238 <b>Es</b> Einsteinium 99	238 <b>Fm</b> Fermium 100	238 <b>Md</b> Mendelevium 101	238 <b>No</b> Nobelium 102	238 <b>Lr</b> Lawrencium 103	140 <b>Ce</b> Cerium 58	141 <b>Pr</b> Praseodymium 59	144 <b>Nd</b> Neodymium 60	147 <b>Pm</b> Promethium 61	150 <b>Sm</b> Samarium 62	152 <b>Eu</b> Europium 63	157 <b>Gd</b> Gadolinium 64	162 <b>Dy</b> Dysprosium 66	165 <b>Ho</b> Holmium 67	167 <b>Er</b> Erbium 68	169 <b>Tm</b> Thulium 69	173 <b>Yb</b> Ytterbium 70	175 <b>Lu</b> Lutetium 71	140 <b>Ce</b> Cerium 58	141 <b>Pr</b> Praseodymium 59	144 <b>Nd</b> Neodymium 60	147 <b>Pm</b> Promethium 61	150 <b>Sm</b> Samarium 62	152 <b>Eu</b> Europium 63	157 <b>Gd</b> Gadolinium 64	162 <b>Dy</b> Dysprosium 66	165 <b>Ho</b> Holmium 67	167 <b>Er</b> Erbium 68	169 <b>Tm</b> Thulium 69	173 <b>Yb</b> Ytterbium 70	175 <b>Lu</b> Lutetium 71

\*58-71 Lanthanoid series  
†90-103 Actinoid series

a	<b>X</b>	a = relative atomic mass
b	<b>X</b>	<b>X</b> = atomic symbol
		b = proton (atomic) number

Key

The volume of one mole of any gas is 24 dm<sup>3</sup> at room temperature and pressure (r.t.p.).

Permission to reproduce items where third-party owned material protected by copyright is included has been sought and cleared where possible. Every reasonable effort has been made by the publisher (UCLES) to trace copyright holders, but if any items requiring clearance have unwittingly been included, the publisher will be pleased to make amends at the earliest possible opportunity.

Cambridge International Examinations is part of the Cambridge Assessment Group. Cambridge Assessment is the brand name of University of Cambridge Local Examinations Syndicate (UCLES), which is itself a department of the University of Cambridge.