



**Cambridge Assessment International Education**  
Cambridge International General Certificate of Secondary Education

---

**CHEMISTRY****0620/23**

Paper 2 Multiple Choice (Extended)

**May/June 2019****45 minutes**

Additional Materials:      Multiple Choice Answer Sheet  
   Soft clean eraser  
   Soft pencil (type B or HB is recommended)

\* 2 5 1 8 9 6 6 7 5 4 \*



---

**READ THESE INSTRUCTIONS FIRST**

Write in soft pencil.

Do not use staples, paper clips, glue or correction fluid.

Write your name, centre number and candidate number on the Answer Sheet in the spaces provided unless this has been done for you.

**DO NOT WRITE IN ANY BARCODES.**There are **forty** questions on this paper. Answer **all** questions. For each question there are four possible answers **A, B, C** and **D**.Choose the **one** you consider correct and record your choice in **soft pencil** on the separate Answer Sheet.**Read the instructions on the Answer Sheet very carefully.**

Each correct answer will score one mark. A mark will not be deducted for a wrong answer.

Any rough working should be done in this booklet.

A copy of the Periodic Table is printed on page 16.

Electronic calculators may be used.

---

This syllabus is regulated for use in England, Wales and Northern Ireland as a Cambridge International Level 1/Level 2 Certificate.

This document consists of **15** printed pages and **1** blank page.

- 1 Hydrogen chloride gas ( $M_r = 36.5$ ) is released at P in the apparatus shown.

The Universal Indicator paper turns red after 38 s.



The experiment is repeated using sulfur dioxide ( $M_r = 64$ ).

What is the result for sulfur dioxide?

	Universal Indicator turns	time for Universal Indicator to change colour / s
<b>A</b>	blue	26
<b>B</b>	blue	51
<b>C</b>	red	26
<b>D</b>	red	51

- 2 Which piece of apparatus is used to measure  $24.8 \text{ cm}^3$  of gas produced during a reaction?

- A** beaker  
**B** conical flask  
**C** measuring cylinder  
**D** pipette

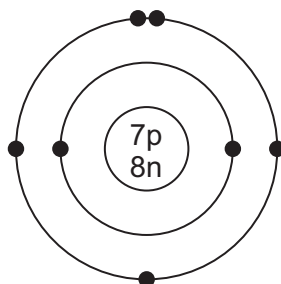
- 3  $R_f$  values are used to identify unknown substances using paper chromatography.

Which statements about  $R_f$  values are correct?

- 1  $R_f$  values are always less than 1.0.
- 2  $R_f$  value = distance travelled by solvent  $\div$  distance travelled by unknown substance.
- 3 The higher the  $R_f$  value, the further the unknown substance travels.
- 4  $R_f$  values are not affected by the solubility of the unknown substance.

- A** 1 and 2      **B** 1 and 3      **C** 2 and 3      **D** 3 and 4

4 The structure of an atom is shown.



key

● = electron

n = neutron

p = proton

Which element is the atom an isotope of?

- A nitrogen
- B oxygen
- C phosphorus
- D titanium

5 Which row describes the formation of single covalent bonds in methane?

<b>A</b>	atoms share a pair of electrons	both atoms gain a noble gas electronic structure
<b>B</b>	atoms share a pair of electrons	both atoms have the same number of electrons in their outer shell
<b>C</b>	electrons are transferred from one atom to another	both atoms gain a noble gas electronic structure
<b>D</b>	electrons are transferred from one atom to another	both atoms have the same number of electrons in their outer shell

6 Which statement describes the structure of an ionic compound?

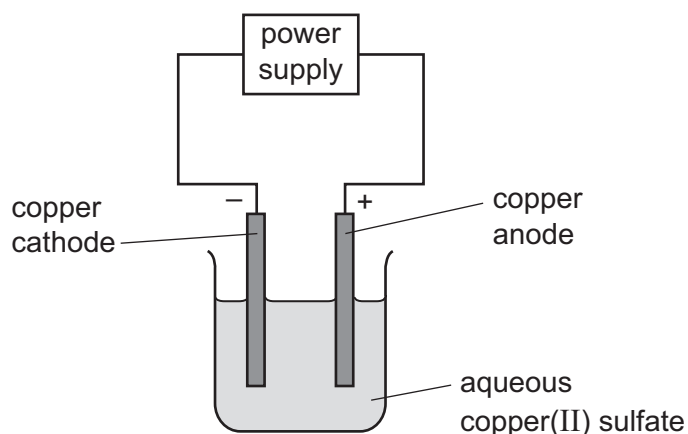
- A It is a giant lattice of oppositely charged ions.
- B It is a giant lattice of positive ions in a 'sea' of electrons.
- C It is a giant molecule of oppositely charged ions.
- D It is a simple molecule of oppositely charged ions.

7 When propane burns in air, carbon dioxide and water are formed.

What is the chemical equation for this reaction?

- A  $C_3H_8 + 2O_2 \rightarrow CO_2 + 2H_2O$
- B  $C_3H_8 + 3O_2 \rightarrow 3CO_2 + H_2O$
- C  $C_3H_8 + 4O_2 \rightarrow 3CO_2 + 4H_2O$
- D  $C_3H_8 + 5O_2 \rightarrow 3CO_2 + 4H_2O$

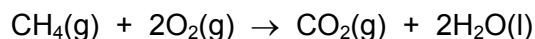
- 8 What is the concentration of a solution that contains 25.0 g NaOH in 500 cm<sup>3</sup> of water?
- A 0.125 mol/dm<sup>3</sup>  
B 0.800 mol/dm<sup>3</sup>  
C 1.25 mol/dm<sup>3</sup>  
D 3.20 mol/dm<sup>3</sup>
- 9 An aqueous solution of copper(II) sulfate was electrolysed using copper electrodes.



Which equation for the reaction at the anode is correct?

- A  $\text{Cu} \rightarrow \text{Cu}^{2+} + 2\text{e}^{-}$   
B  $\text{Cu} + 2\text{e}^{-} \rightarrow \text{Cu}^{2+}$   
C  $\text{Cu}^{2+} \rightarrow \text{Cu} + 2\text{e}^{-}$   
D  $\text{Cu}^{2+} + 2\text{e}^{-} \rightarrow \text{Cu}$
- 10 In the manufacture of aluminium by electrolysis, aluminium oxide is dissolved in molten cryolite.
- Why is cryolite used?
- A It lowers the melting point of the aluminium.  
B It makes the aluminium a better conductor.  
C It removes impurities from the aluminium.  
D The mixture has a lower melting point than pure aluminium oxide.
- 11 Which statement about a fuel cell in a car is correct?
- A The fuel cell produces heat, which powers the car.  
B The fuel cell is supplied with hydrogen directly from the air.  
C The only emission from a fuel cell is nitrogen gas, which is non-polluting.  
D The fuel cell produces electricity, which powers an electric motor.

12 Methane burns in oxygen to form carbon dioxide and water.



The bond energies are shown in the table.

bond	bond energy in kJ/mol
C–H	410
C–O	360
C=O	805
O–H	460
O–O	146
O=O	496

What is the energy change for this reaction?

**A** –818 kJ/mol    **B** –102 kJ/mol    **C** +102 kJ/mol    **D** +818 kJ/mol

13 Which change in reaction conditions increases both the collision rate and the proportion of molecules with sufficient energy to react?

- A** addition of a catalyst
- B** increasing the concentration of a reactant
- C** increasing the surface area of a reactant
- D** increasing the temperature of the reaction

14 When blue-green crystals of nickel(II) sulfate are heated, water is produced and a yellow solid remains. When water is added to the yellow solid, the blue-green colour returns.

Which process describes these changes?

- A** combustion
- B** corrosion
- C** neutralisation
- D** reversible reaction






- 21 Which statement about the properties of elements in Group I and in Group VII is correct?
- A Bromine displaces iodine from an aqueous solution of potassium iodide.
- B Chlorine, bromine and iodine are diatomic gases at room temperature.
- C Lithium, sodium and potassium are soft non-metals.
- D Lithium, sodium and potassium have an increasing number of electrons in their outer shells.
- 22 Gas G has 10 electrons. Gas H has eight more electrons than gas G. Both gases are monoatomic.

Which statement about G and H is correct?

- A Both gases are in the same group of the Periodic Table.
- B Both gases are in the same period of the Periodic Table.
- C Both gases are very reactive.
- D Gas G has a higher atomic mass than gas H.
- 23 The diagrams show the structure of two substances used to make electrical conductors.

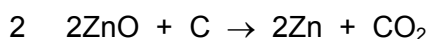
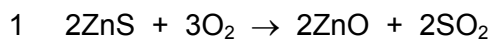


Which statement correctly describes X and Y?

- A X is a pure metal and Y is a compound.
- B X is a pure metal and Y is an alloy.
- C X is a solid and Y is a liquid.
- D X is harder and stronger than Y.
- 24 Magnesium nitrate, magnesium hydroxide and magnesium carbonate all decompose when heated.
- Which statement about these decomposition reactions is correct?
- A Magnesium carbonate decomposes to release carbon dioxide and oxygen.
- B Magnesium hydroxide decomposes to release hydrogen and oxygen.
- C Magnesium hydroxide decomposes to release water vapour.
- D Magnesium nitrate decomposes to release oxygen only.



25 Zinc is extracted from its ore, zinc blende, using two chemical reactions.



Which substance is reduced in reactions 1 and 2?

	reaction 1	reaction 2
<b>A</b>	O <sub>2</sub>	C
<b>B</b>	O <sub>2</sub>	ZnO
<b>C</b>	ZnS	C
<b>D</b>	ZnS	ZnO

26 Four metals, zinc, M, copper and magnesium, are reacted with aqueous solutions of their nitrates.

The results are shown.

metal	magnesium nitrate	M nitrate	copper nitrate	zinc nitrate
magnesium		✓	✓	✓
zinc	x	✓	✓	
M	x		✓	x
copper	x	x		x

key

✓ = reacts

x = no reaction

What is the order of reactivity of these four metals starting with the most reactive?

- A** copper → zinc → M → magnesium
- B** copper → M → zinc → magnesium
- C** magnesium → M → zinc → copper
- D** magnesium → zinc → M → copper

27 Aluminium is used to make containers for storing food.

Which property makes it suitable for this use?

- A** conducts heat
- B** low density
- C** resists corrosion
- D** shiny surface

28 Water can be treated by filtration then chlorination.

Which uses do **not** need water of this quality?

- 1 water for cooling in industry
- 2 water for washing clothes
- 3 water for drinking

**A** 1, 2 and 3      **B** 1 and 2 only      **C** 1 and 3 only      **D** 2 and 3 only

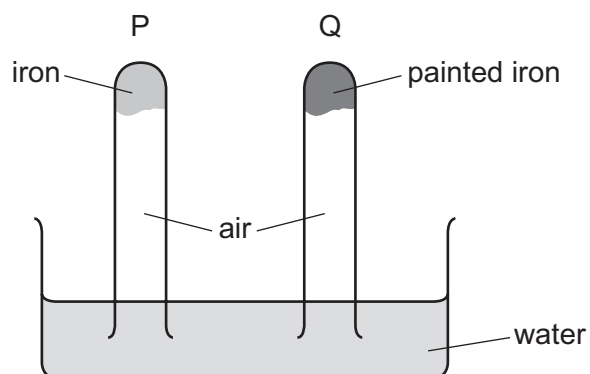
29 Catalytic converters in car exhausts change polluting gases into non-polluting gases.

Which statements about oxides of nitrogen and car engines are correct?

- 1 The nitrogen in oxides of nitrogen comes from compounds in petrol.
- 2 The oxygen in oxides of nitrogen comes from the air in the car engine.
- 3 Catalytic converters convert oxides of nitrogen into nitrogen and other gases.

**A** 1 and 2      **B** 2 and 3      **C** 2 only      **D** 3 only

30 The diagram shows an experiment to investigate how paint affects the rusting of iron.




What happens to the water level in tubes P and Q?

	tube P	tube Q
<b>A</b>	falls	rises
<b>B</b>	no change	rises
<b>C</b>	rises	falls
<b>D</b>	rises	no change

31 Which row about the carbon cycle is correct?

	process for removing carbon dioxide from the atmosphere	process for returning carbon dioxide to the atmosphere
<b>A</b>	photosynthesis	combustion of hydrocarbons
<b>B</b>	photosynthesis	cracking of hydrocarbons
<b>C</b>	respiration	combustion of hydrocarbons
<b>D</b>	respiration	cracking of hydrocarbons

32 Ammonia is manufactured in an exothermic reaction.



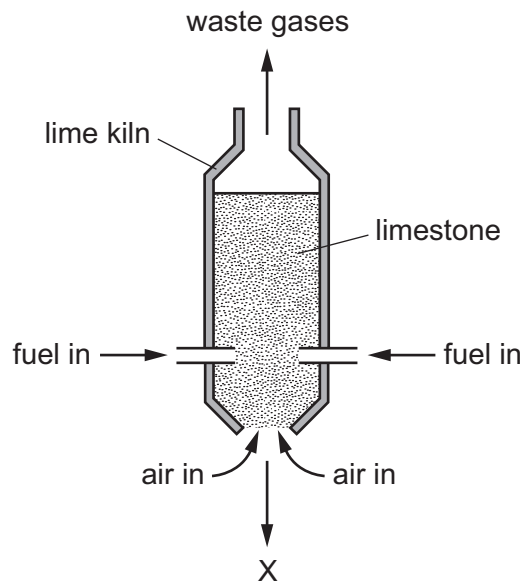
What is the effect of lowering the temperature on the rate of formation and equilibrium yield of ammonia?

	rate of formation	equilibrium yield
<b>A</b>	decreases	decreases
<b>B</b>	decreases	increases
<b>C</b>	increases	decreases
<b>D</b>	increases	increases

33 Which row shows the conditions used in the Contact process?

	temperature / °C	pressure / atm	catalyst
<b>A</b>	25	2	iron
<b>B</b>	25	200	iron
<b>C</b>	450	2	vanadium(V) oxide
<b>D</b>	450	200	vanadium(V) oxide

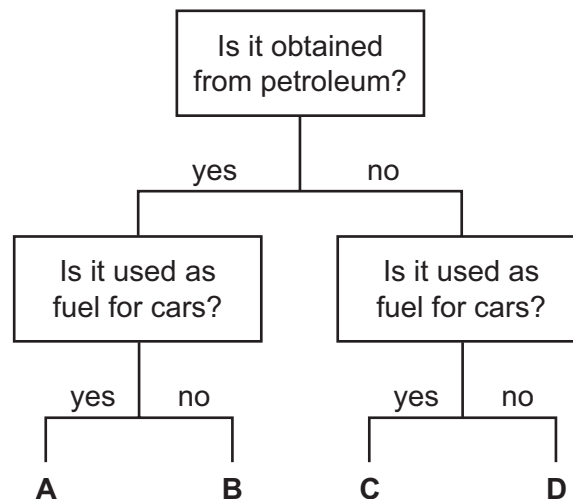
34 The diagram represents a lime kiln used to heat limestone to a very high temperature.



What leaves the kiln at X?

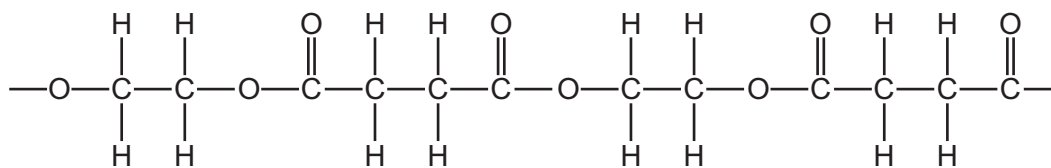
- A calcium carbonate
- B calcium hydroxide
- C calcium oxide
- D calcium sulfate

35 Which fuel could be gasoline?





40 A section of a polymer is shown.



How many different types of monomer units formed this section of polymer?

**A** 1

**B** 2

**C** 3

**D** 4

**BLANK PAGE**

---

Permission to reproduce items where third-party owned material protected by copyright is included has been sought and cleared where possible. Every reasonable effort has been made by the publisher (UCLES) to trace copyright holders, but if any items requiring clearance have unwittingly been included, the publisher will be pleased to make amends at the earliest possible opportunity.

To avoid the issue of disclosure of answer-related information to candidates, all copyright acknowledgements are reproduced online in the Cambridge Assessment International Education Copyright Acknowledgements Booklet. This is produced for each series of examinations and is freely available to download at [www.cambridgeinternational.org](http://www.cambridgeinternational.org) after the live examination series.

Cambridge Assessment International Education is part of the Cambridge Assessment Group. Cambridge Assessment is the brand name of the University of Cambridge Local Examinations Syndicate (UCLES), which itself is a department of the University of Cambridge.

## The Periodic Table of Elements

		Group															
I	II											III	IV	V	VI	VII	VIII
3 <b>Li</b> lithium 7	4 <b>Be</b> beryllium 9	<div style="border: 1px solid black; padding: 5px; text-align: center;"> <b>Key</b>            atomic number            atomic symbol            name            relative atomic mass         </div>										5 <b>B</b> boron 11	6 <b>C</b> carbon 12	7 <b>N</b> nitrogen 14	8 <b>O</b> oxygen 16	9 <b>F</b> fluorine 19	10 <b>Ne</b> neon 20
11 <b>Na</b> sodium 23	12 <b>Mg</b> magnesium 24											1 <b>H</b> hydrogen 1	13 <b>Al</b> aluminium 27	14 <b>Si</b> silicon 28	15 <b>P</b> phosphorus 31	16 <b>S</b> sulfur 32	17 <b>Cl</b> chlorine 35.5
19 <b>K</b> potassium 39	20 <b>Ca</b> calcium 40	21 <b>Sc</b> scandium 45	22 <b>Ti</b> titanium 48	23 <b>V</b> vanadium 51	24 <b>Cr</b> chromium 52	25 <b>Mn</b> manganese 55	26 <b>Fe</b> iron 56	27 <b>Co</b> cobalt 59	28 <b>Ni</b> nickel 59	29 <b>Cu</b> copper 64	30 <b>Zn</b> zinc 65	31 <b>Ga</b> gallium 70	32 <b>Ge</b> germanium 73	33 <b>As</b> arsenic 75	34 <b>Se</b> selenium 79	35 <b>Br</b> bromine 80	36 <b>Kr</b> krypton 84
37 <b>Rb</b> rubidium 85	38 <b>Sr</b> strontium 88	39 <b>Y</b> yttrium 89	40 <b>Zr</b> zirconium 91	41 <b>Nb</b> niobium 93	42 <b>Mo</b> molybdenum 96	43 <b>Tc</b> technetium —	44 <b>Ru</b> ruthenium 101	45 <b>Rh</b> rhodium 103	46 <b>Pd</b> palladium 106	47 <b>Ag</b> silver 108	48 <b>Cd</b> cadmium 112	49 <b>In</b> indium 115	50 <b>Sn</b> tin 119	51 <b>Sb</b> antimony 122	52 <b>Te</b> tellurium 128	53 <b>I</b> iodine 127	54 <b>Xe</b> xenon 131
55 <b>Cs</b> caesium 133	56 <b>Ba</b> barium 137	57–71 lanthanoids	72 <b>Hf</b> hafnium 178	73 <b>Ta</b> tantalum 181	74 <b>W</b> tungsten 184	75 <b>Re</b> rhenium 186	76 <b>Os</b> osmium 190	77 <b>Ir</b> iridium 192	78 <b>Pt</b> platinum 195	79 <b>Au</b> gold 197	80 <b>Hg</b> mercury 201	81 <b>Tl</b> thallium 204	82 <b>Pb</b> lead 207	83 <b>Bi</b> bismuth 209	84 <b>Po</b> polonium —	85 <b>At</b> astatine —	86 <b>Rn</b> radon —
87 <b>Fr</b> francium —	88 <b>Ra</b> radium —	89–103 actinoids	104 <b>Rf</b> rutherfordium —	105 <b>Db</b> dubnium —	106 <b>Sg</b> seaborgium —	107 <b>Bh</b> bohrium —	108 <b>Hs</b> hassium —	109 <b>Mt</b> meitnerium —	110 <b>Ds</b> darmstadtium —	111 <b>Rg</b> roentgenium —	112 <b>Cn</b> copernicium —	114 <b>Fl</b> flerovium —	116 <b>Lv</b> livermorium —	—	—	—	—

lanthanoids	57 <b>La</b> lanthanum 139	58 <b>Ce</b> cerium 140	59 <b>Pr</b> praseodymium 141	60 <b>Nd</b> neodymium 144	61 <b>Pm</b> promethium —	62 <b>Sm</b> samarium 150	63 <b>Eu</b> europium 152	64 <b>Gd</b> gadolinium 157	65 <b>Tb</b> terbium 159	66 <b>Dy</b> dysprosium 163	67 <b>Ho</b> holmium 165	68 <b>Er</b> erbium 167	69 <b>Tm</b> thulium 169	70 <b>Yb</b> ytterbium 173	71 <b>Lu</b> lutetium 175
actinoids	89 <b>Ac</b> actinium —	90 <b>Th</b> thorium 232	91 <b>Pa</b> protactinium 231	92 <b>U</b> uranium 238	93 <b>Np</b> neptunium —	94 <b>Pu</b> plutonium —	95 <b>Am</b> americium —	96 <b>Cm</b> curium —	97 <b>Bk</b> berkelium —	98 <b>Cf</b> californium —	99 <b>Es</b> einsteinium —	100 <b>Fm</b> fermium —	101 <b>Md</b> mendelevium —	102 <b>No</b> nobelium —	103 <b>Lr</b> lawrencium —

The volume of one mole of any gas is 24 dm<sup>3</sup> at room temperature and pressure (r.t.p.).