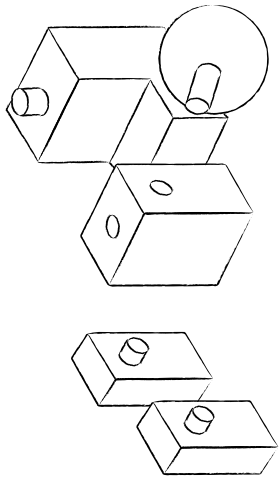



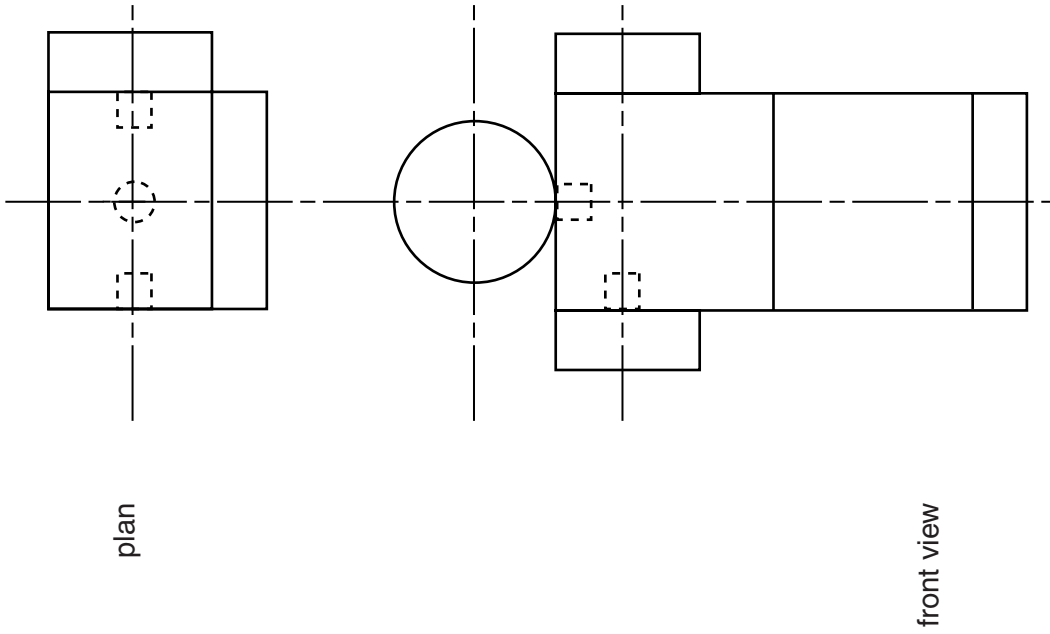
Section A Answer all questions in this section. [2]

Sketches of the five parts of a toy figure are shown below.



A1 (a) Complete the full size orthographic views of the fully assembled toy figure by:

- (i) adding the missing lines to the plan; [4]
- (ii) adding the missing hidden detail to the front view; [3]
- (iii) adding the projection symbol in the given box. [3]



(b) A stencil is to be used to add a name to the toy figure. In the space below use sketches and notes to show how to use a stencil. [2]

0445/23 May/June 2015 1 hour
© UCLES 2015 DC (KN/SG) 101707/3

Centre Number

Candidate Number

Candidate Surname

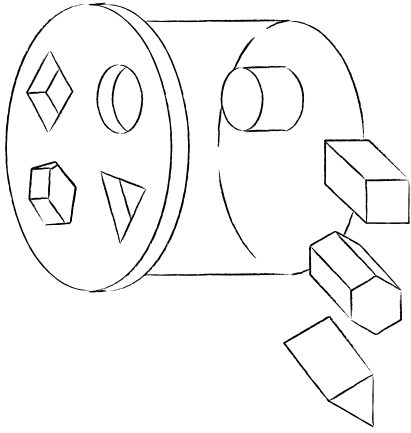
Other Names

[Turn over

For Examiner's use	

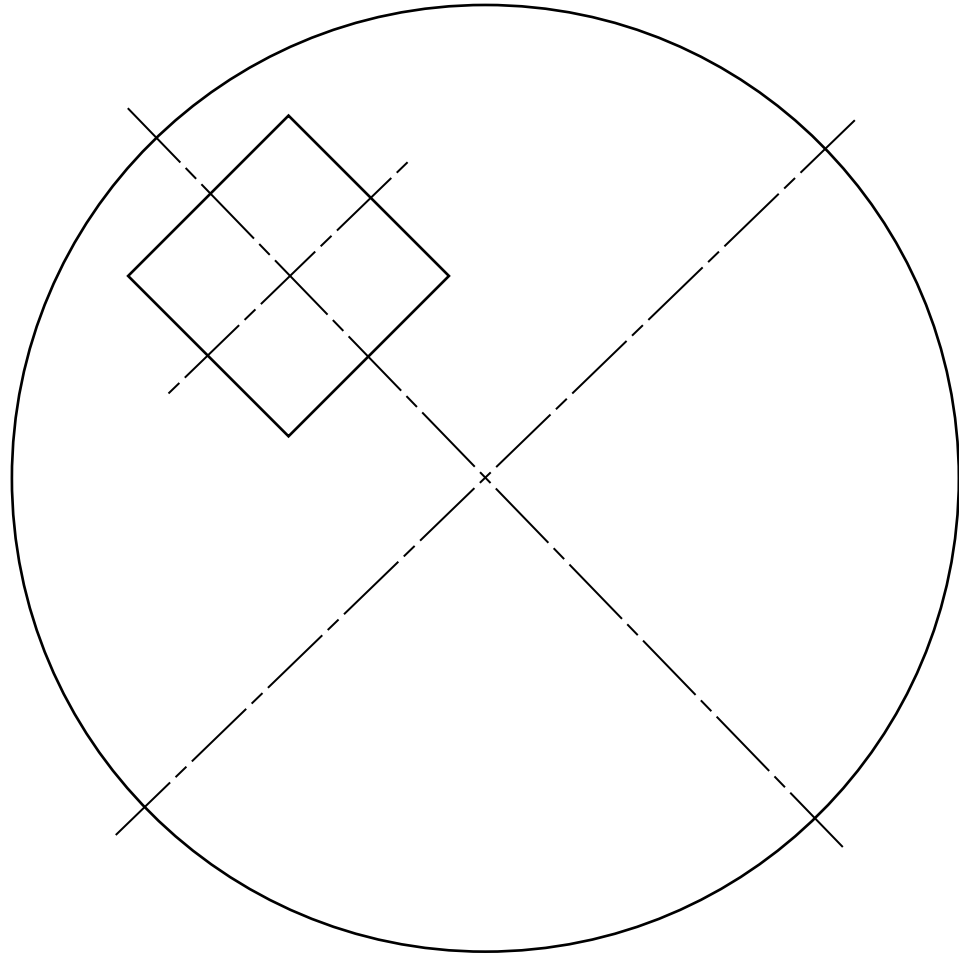
Section B
Answer either question B4 or B5.

B4 A sketch of a shape sorter is shown on the right.



(a) On the centre lines below complete the 1 : 2 scale drawing of the top of the shape sorter by accurately adding:

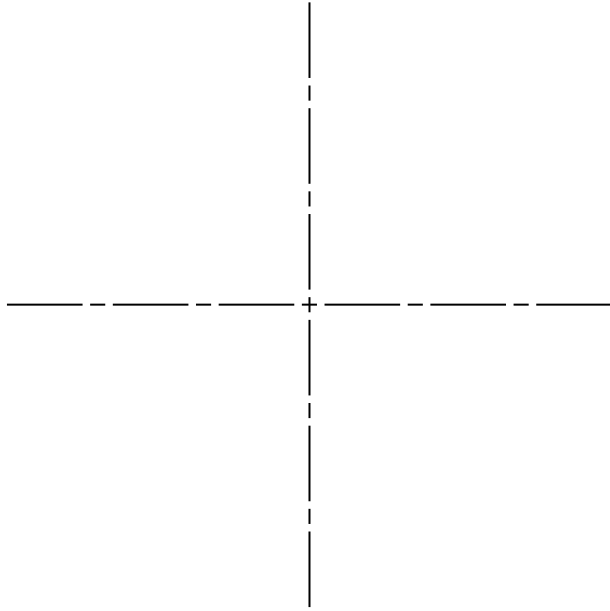
- (i) a Ø60 circle; [3]
- (ii) a 60 side equilateral triangle; [5]
- (iii) a 40 side regular hexagon. [5]



(b) The shape sorter is available in four different colours. The 2014 sales for the four different coloured shape sorters is shown in the table below.

red	blue	yellow	green
450	1500	900	750

Draw a pie chart on the centre lines below to show the 2014 sales of the shape sorter. Use colour and labels to enhance the appearance of the drawing. [7]



(c) A modified design for the top of the shape sorter is to be produced by CAD.

(i) Complete the words below to show the meaning of the word CAD.

Computer A **D** [2]

(ii) A line drawing of an elliptical shape has been found on the internet and is to be used in the modified design for the top of the shape sorter. Explain how to capture this elliptical shape from the internet and use it in the CAD drawing.


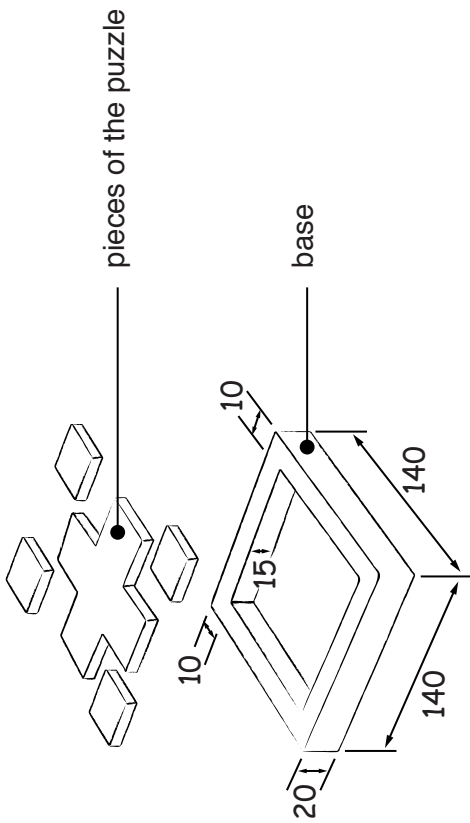
.....

 [3]

0445/23 © UCLES 2015	May/June 2015 DC (KN/SG) 101707/3	1 hour			
Centre Number	Candidate Number	Candidate Surname	Other Names	[Turn over	
For Examiner's Use					

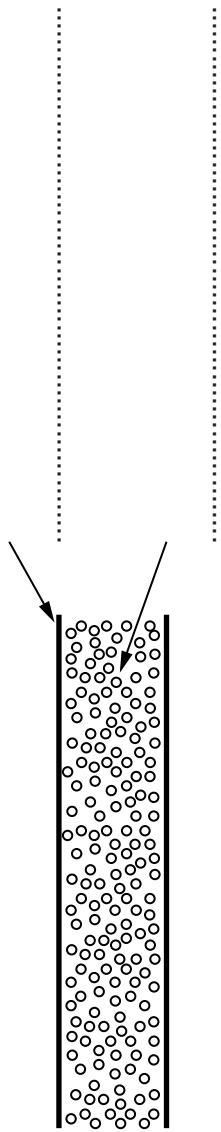
B5 A sketch of a puzzle is shown below.

(b) A drawing of one of the pieces of the puzzle is shown below. Construct a scale 1 : 3 enlargement of the given piece of the puzzle. [10]



(a) The pieces of the puzzle are made from foamboard.

(i) Label the materials on the sectional view of a piece of foamboard below. [2]



(ii) Complete the list below to show three pieces of equipment that would be used to cut the foamboard. [2]

1. A cutting mat

2.

3.

(iii) Explain **one** reason why foamboard is considered a suitable material for the pieces of the puzzle. [2]

-
-
-
-

→ A

