



Section A

Answer **one** question from this section.

- 1 (a) Study Fig. 1.1, which shows information about the world's population structure in 1950, 2015 and 2100 (estimated).

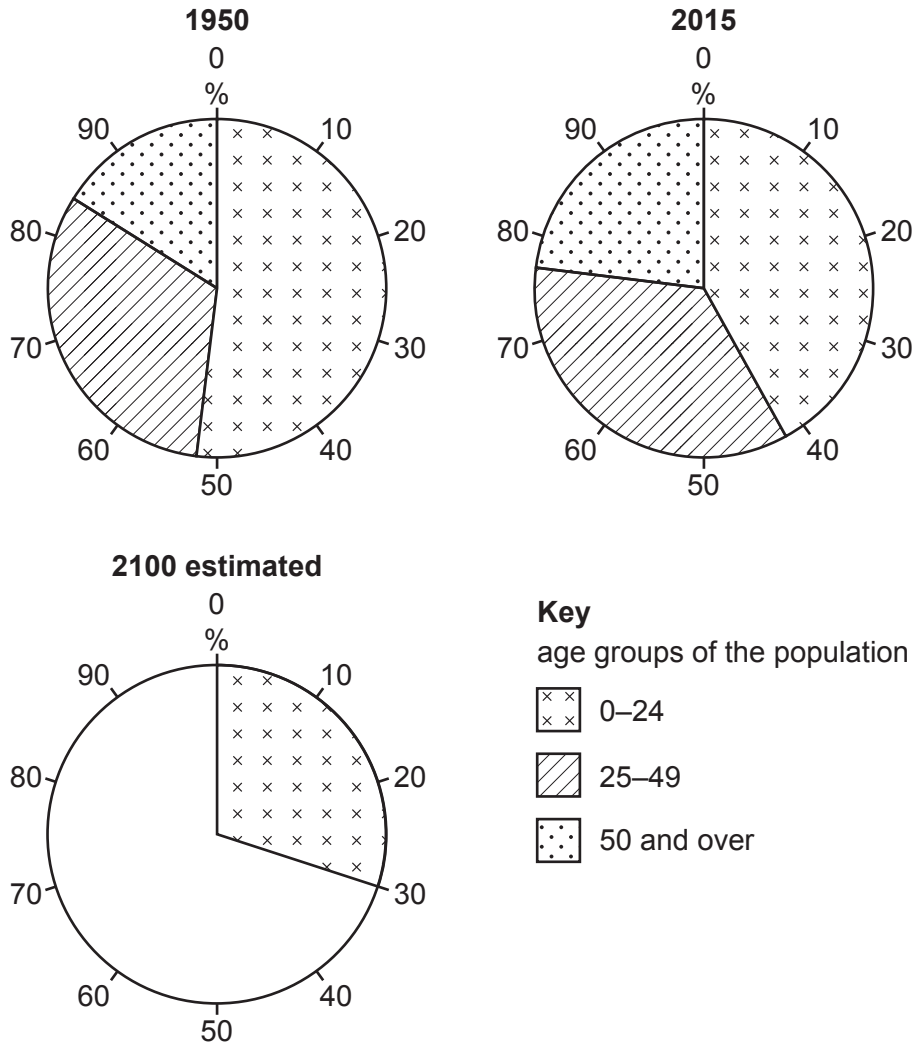


Fig. 1.1

- (i) What is meant by *population structure*?

.....

..... [1]

- (ii) Complete Fig. 1.1 using the following information about the estimated population in 2100. [2]

age group	percentage of total population
25–49 years	30
50 and over	40

- (iii) Using information from Fig. 1.1 **only**, describe the changes in the world's population structure between **1950 and 2015**.

.....

.....

.....

.....

.....

.....

..... [3]

- (iv) Suggest reasons for the changes in the percentage of the population aged between 0 and 24 years from 1950 to 2015.

.....

.....

.....

.....

.....

.....

.....

.....

..... [4]

(b) Study Fig. 1.2, which is a population pyramid for Niger (an LEDC in Africa) in 2015.

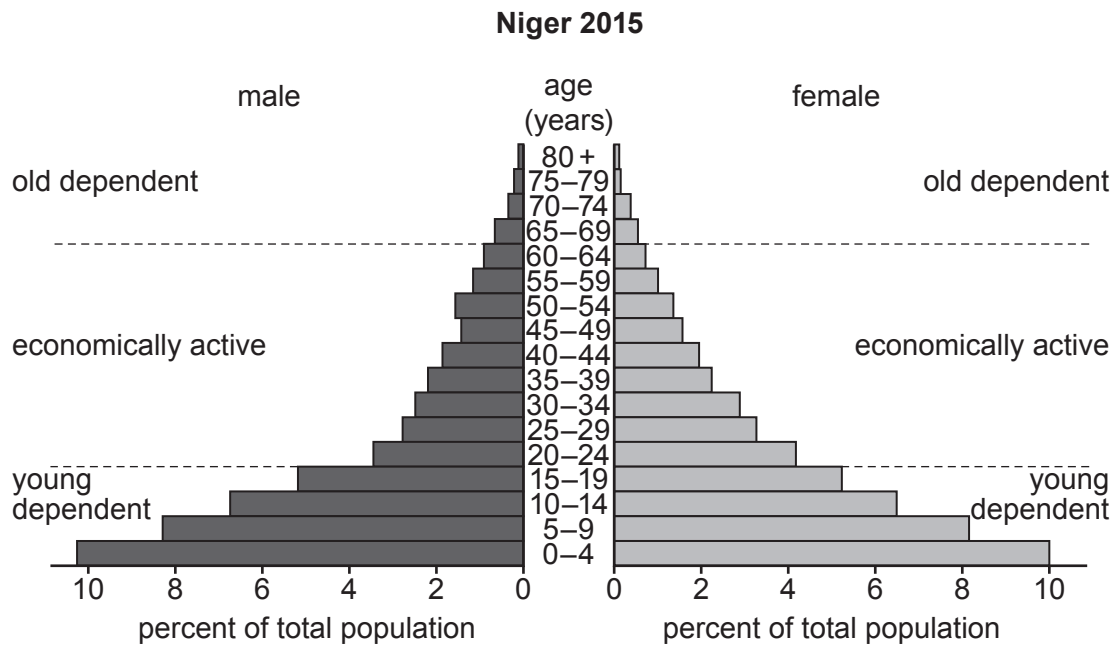


Fig. 1.2

(i) Describe **three** features of the population pyramid of Niger which are typical of an LEDC.

- 1 .....
- .....
- 2 .....
- .....
- 3 .....
- ..... [3]





- 2 (a) Study Fig. 2.1, which shows information about internal migration to Mexico City, the capital of Mexico (an LEDC).

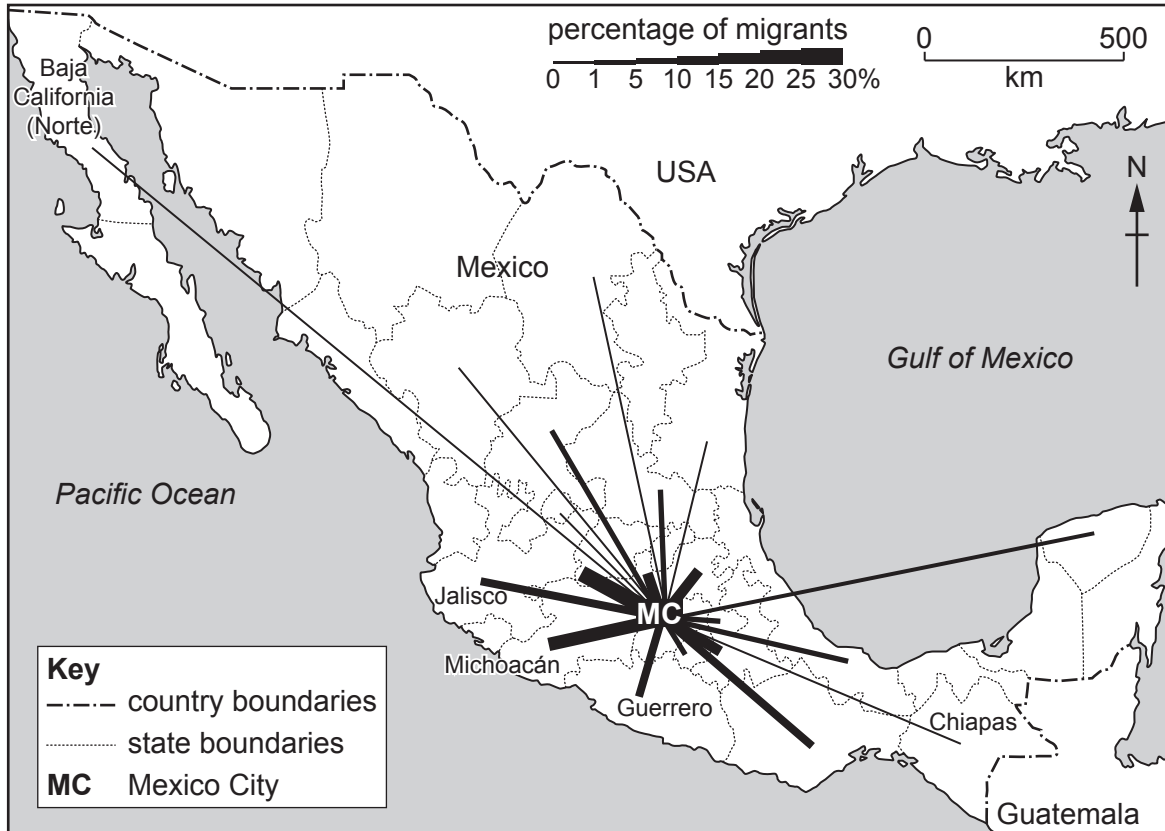


Fig. 2.1

- (i) What is meant by *internal migration*?

.....  
 ..... [1]

- (ii) Put the following three Mexican states in rank order according to the percentage of migrants to Mexico City. [2]

Chiapas	Jalisco	Michoacán
.....	largest	
.....	↑	
.....	↓	
	smallest	

(iii) Using evidence from Fig. 2.1 **only**, suggest why there is more migration to Mexico City from Guerrero than Baja California (Norte).

.....  
.....  
.....  
.....  
.....  
..... [3]

(iv) Describe the problems caused **in rural areas** in LEDCs as a result of large amounts of people **migrating away from them**.

.....  
.....  
.....  
.....  
.....  
.....  
.....  
..... [4]



(b) Study Fig. 2.2, which shows information about two squatter settlements in Mexico City.

name of squatter settlement	Chalma	Isidro Fabela
density: average space per person (m <sup>2</sup> )	34	29
building materials used for walls	%	%
scrap materials	20	5
bricks or breeze blocks	80	95
building material used for roof	%	%
scrap materials	33	28
corrugated iron	52	23
concrete or tiles	15	49
water provision	%	%
public standpipe	87	2
tap in home	13	98
electricity provision	%	%
illegal connection	88	0
legal supply	12	100

**Fig. 2.2**

(i) Using Fig. 2.2 **only**, describe **three** differences between Chalma and Isidro Fabela. Do **not** use statistics in your answer.

- 1 .....
- .....
- 2 .....
- .....
- 3 .....
- ..... [3]





## Section B

Answer **one** question from this section.

- 3 (a) Study Fig. 3.1, which is a sketch showing an area of coastline.




Fig. 3.1

- (i) Identify the feature labelled **X**.

.....

[1]

- (ii) Use labelled arrows to identify the following features in Fig. 3.1:

– cave

– beach.

[2]

(iii) Explain how the process of abrasion (corrasion) may have formed the cave you have labelled in Fig. 3.1.

.....  
.....  
.....  
.....  
.....  
..... [3]

(iv) Suggest why bays and headlands have developed along the coast shown in Fig. 3.1.

.....  
.....  
.....  
.....  
.....  
.....  
..... [4]

(b) Study Fig. 3.2 (Insert), which is a photograph of an area of coastline.

(i) Describe the benefits of living in a coastal area such as that shown in Fig. 3.2.

.....  
.....  
.....  
.....  
.....  
..... [3]





4 (a) Study Fig. 4.1 (Insert), which is a photograph of a river near its source.

(i) What is meant by the *source* of a river?

.....  
..... [1]

(ii) Describe **two** features shown in Fig. 4.1 which are typical of a river near its source.

1 .....

.....

2 .....

..... [2]

(iii) Explain how the river shown in Fig. 4.1 may have eroded its valley by hydraulic action.

.....

.....

.....

.....

.....

..... [3]

(iv) Explain how potholes may form along rivers such as the one shown in Fig. 4.1.

.....

.....

.....

.....

.....

.....

.....

.....

.....

..... [4]



(b) Study Fig. 4.2 (Insert), which is a photograph of Cairo and the River Nile, in Egypt (an LEDC).

(i) Suggest reasons why many large urban settlements, such as Cairo, have grown up close to rivers.

.....  
.....  
.....  
.....  
.....  
..... [3]

(ii) Explain why living close to a river, such as the Nile, may be hazardous.

.....  
.....  
.....  
.....  
.....  
.....  
.....  
.....  
.....  
.....  
.....  
..... [5]

(c) Explain how an oxbow lake is formed. You should include a labelled diagram or diagrams in the box below.

.....

.....

.....

.....

.....

.....

.....

.....

.....

.....

.....

.....

.....

.....

.....

.....

.....


.....

.....

.....

.....

.....



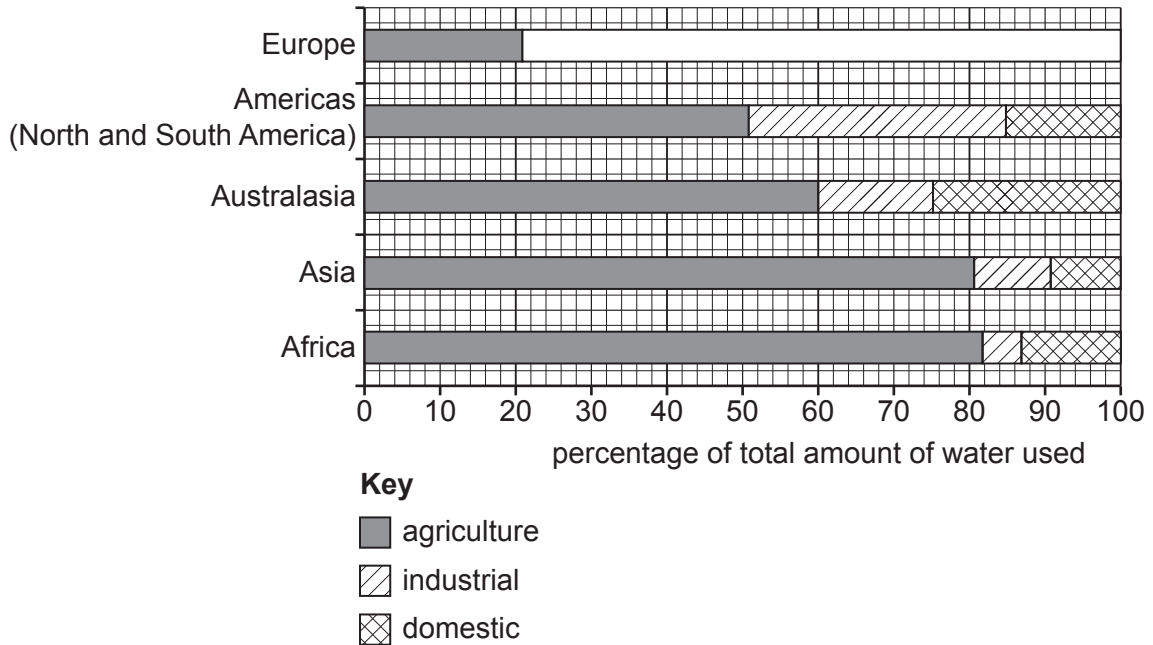
[7]

[Total: 25]

**Section C**

Answer **one** question from this section.

- 5 (a) Study Fig. 5.1, which is a graph showing information about the use of water in different continents.



**Fig. 5.1**

- (i) What percentage of Africa's water is used in homes?

..... %

[1]

- (ii) Complete Fig. 5.1 using the following information about the use of water in Europe.

use	percentage of total water used
industrial	57
domestic	22

[2]

(iii) Compare the use of water in Asia and the Americas.

.....  
.....  
.....  
.....  
.....  
..... [3]

(iv) Suggest reasons why most water in Africa is used for agriculture.

.....  
.....  
.....  
.....  
.....  
.....  
..... [4]

(b) Study Fig. 5.2 (Insert), which is a map showing the planned Ilisu dam in Turkey.

(i) Describe **three** features of the reservoir which will be created by the Ilisu dam scheme.

1 .....  
.....  
2 .....  
.....  
3 .....  
..... [3]

(ii) Suggest the advantages and disadvantages of the Ilisu dam scheme.

Advantages .....

.....

.....

.....

.....

Disadvantages .....

.....

.....

.....

..... [5]



- 6 (a) Study Fig. 6.1, which is a graph showing the changes in employment in different sectors in South Africa (an MEDC) between 2008 and 2014.

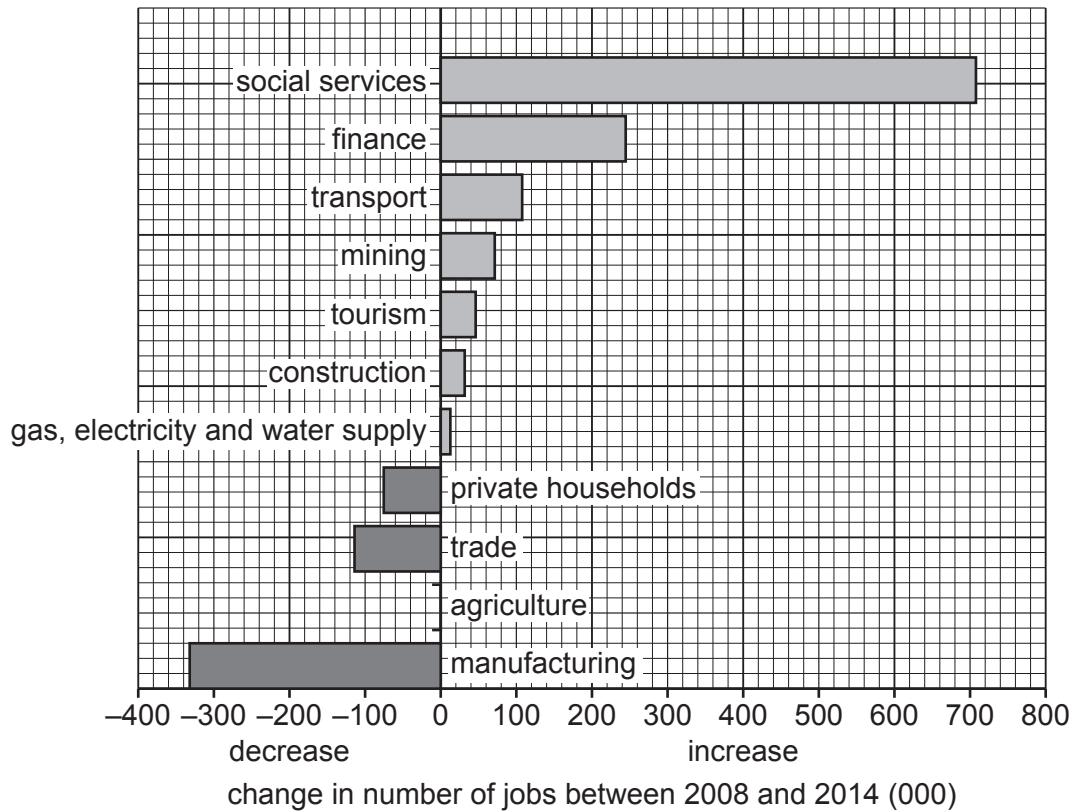


Fig. 6.1

- (i) Complete Fig. 6.1 by using the following information.

The number of jobs in agriculture decreased by 120 000.

[1]

- (ii) Compare the increase in jobs in finance and tourism between 2008 and 2014. Use statistics in your answer.

.....

.....

.....

..... [2]

(iii) Suggest **three** reasons for the decline in employment in manufacturing in South Africa.

- 1 .....
- .....
- 2 .....
- .....
- 3 .....
- ..... [3]

(iv) Explain why the tourist industry is important in many countries.

- .....
- .....
- .....
- .....
- .....
- .....
- .....
- .....
- .....
- ..... [4]

(b) Study Fig. 6.2 (Insert), which is a photograph of part of Lanzarote, a Spanish island where tourism is important.

(i) Using Fig. 6.2 **only**, identify **three** natural attractions of Lanzarote for tourism.

- 1 .....
- .....
- 2 .....
- .....
- 3 .....
- ..... [3]









