



**Cambridge International Examinations**  
Cambridge International General Certificate of Secondary Education

CANDIDATE  
NAME

CENTRE  
NUMBER

--	--	--	--	--

CANDIDATE  
NUMBER

--	--	--	--



**PHYSICS**

**0625/33**

Paper 3 Extended

**October/November 2015**

**1 hour 15 minutes**

Candidates answer on the Question Paper.

No Additional Materials are required.

**READ THESE INSTRUCTIONS FIRST**

Write your Centre number, candidate number and name on all the work you hand in.

Write in dark blue or black pen.

You may use a pencil for any diagrams or graphs.

Do not use staples, paper clips, glue or correction fluid.

**DO NOT WRITE IN ANY BARCODES.**

Answer **all** questions.

Electronic calculators may be used.

You may lose marks if you do not show your working or if you do not use appropriate units.

Take the weight of 1 kg to be 10 N (i.e. acceleration of free fall =  $10 \text{ m/s}^2$ ).

At the end of the examination, fasten all your work securely together.

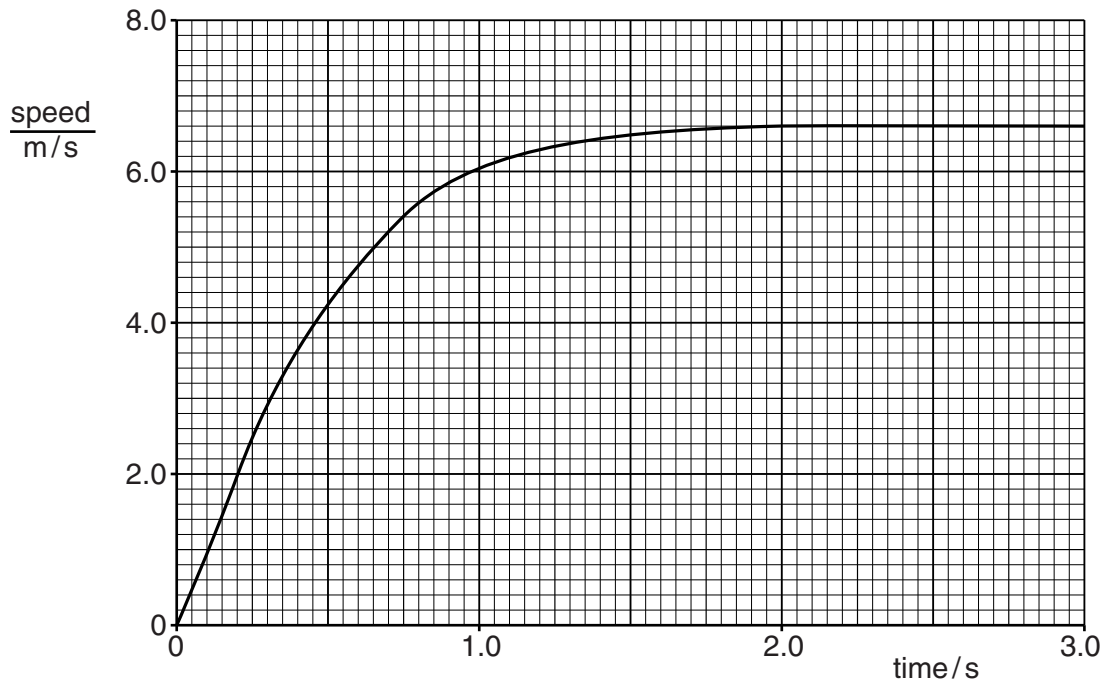
The number of marks is given in brackets [ ] at the end of each question or part question.

The syllabus is approved for use in England, Wales and Northern Ireland as a Cambridge International Level 1/Level 2 Certificate.

This document consists of **14** printed pages and **2** blank pages.

- 1 A plastic ball is dropped from the balcony of a tall building and falls towards the ground in a straight line.

Fig. 1.1 is the speed-time graph for the falling ball.



**Fig. 1.1**

- (a) State and explain, in terms of forces, what is happening to the speed of the ball between time  $t = 2.0\text{ s}$  and  $t = 3.0\text{ s}$ .

.....  
 .....  
 ..... [2]

- (b) On Fig. 1.1, mark a point P on the line where the acceleration of the ball is not constant. [1]

- (c) Using Fig. 1.1,

- (i) calculate the acceleration of the ball between  $t = 0\text{ s}$  and  $t = 0.25\text{ s}$ ,

acceleration = ..... [2]

- (ii) estimate the distance that the ball falls in the first 3.0 s.

distance = ..... [2]

[Total: 7]

3

2 A student has 500 identical, rectangular sheets of paper. The mass of  $1.0\text{m}^2$  of the paper is 0.080 kg.

(a) Using a metre rule, she measures the length of one sheet of paper and its width. The length is 0.300 m and the width is 0.210 m.

(i) Calculate the mass of one sheet of paper.

mass = .....[1]

(ii) The student makes a single pile of the 500 sheets of paper.

With a metre rule, she measures the height of the pile. The height of the pile is 0.048 m.

Calculate the density of the paper.

density = .....[3]

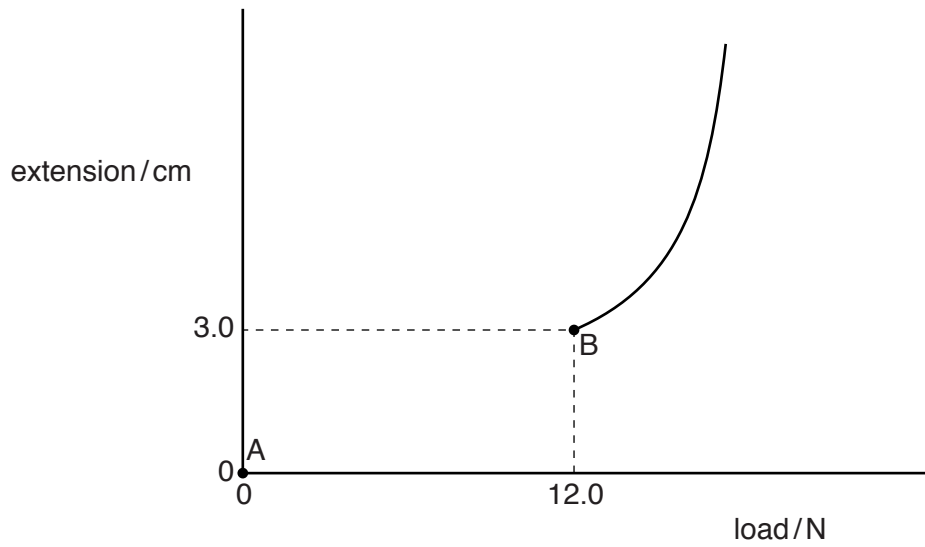
(b) A second student has only 5 sheets of the same type of paper.

Suggest how this student determines the density of the paper to a similar accuracy. Additional apparatus may be used.

.....  
.....  
.....  
.....[2]

[Total: 6]

- 3 Fig. 3.1 shows part of the extension-load graph for a spring.



**Fig. 3.1**

The spring obeys Hooke's law between points A and B.

- (a) (i) On Fig. 3.1, complete the graph between A and B. [1]

- (ii) State the name of point B.

.....[1]

- (b) The average value of the load between A and B is 6.0 N.

Calculate the work done in extending the spring from A to B.

work done = .....[2]

5

(c) The spring has an unstretched length of 4.0 cm.

An object is hung on the spring and the spring length increases from 4.0 cm to 6.0 cm.

(i) Calculate the mass of the object.

mass = .....[3]

(ii) The object is immersed in a liquid but remains suspended from the spring.

The liquid exerts an upward force on the object and the length of the spring decreases to 5.0 cm.

Calculate the upward force exerted on the object by the liquid.

upward force = .....[2]

[Total: 9]

- 4 A soft rubber ball of mass 0.15 kg is dropped, in a vacuum, from a height of 2.0m on to a hard surface. The ball then bounces.

(a) State the main energy changes taking place when

(i) the ball is falling,

.....

(ii) the ball hits the surface and is changing shape,

.....

(iii) the ball is regaining its shape and is rising from the surface.

.....

[3]

(b) Calculate the speed with which the ball hits the surface.

speed = ..... [4]

(c) After rebounding from the surface, the ball rises to a height of 1.9m.

Suggest why the height to which the ball rises is less than the height from which the ball falls.

.....

.....[1]

[Total: 8]

5 (a) State two examples of physical properties that vary with temperature and that may be used for the measurement of temperature.

- 1. ....
  - 2. ....
- [2]

(b) When first manufactured, a liquid-in-glass thermometer has no scale markings.

(i) Describe the procedure needed to determine

- 1. the position on the thermometer of the lower fixed point,  
.....  
.....  
.....
  - 2. the position on the thermometer of the upper fixed point.  
.....  
.....  
.....
- [3]

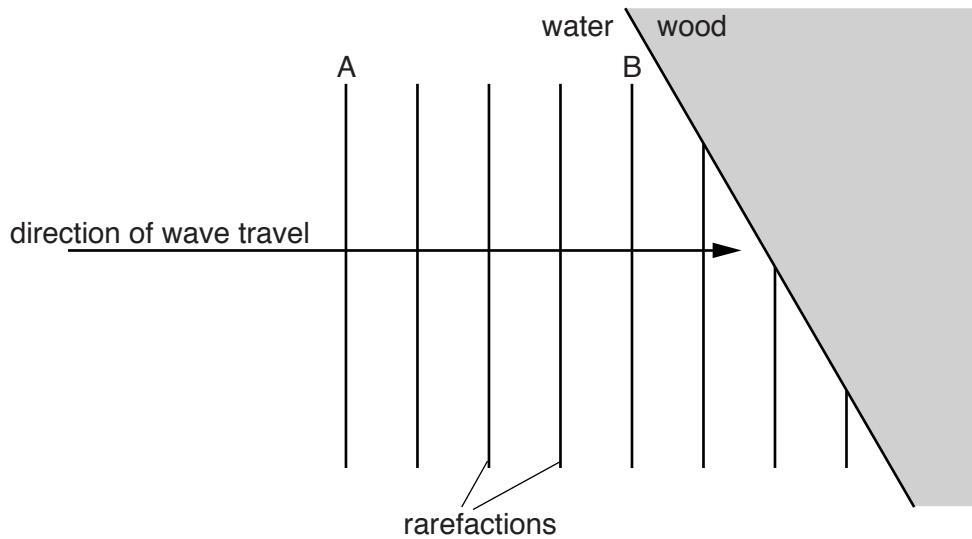
(ii) Explain why

- 1. the graduations marked on the thermometer between the fixed points are spaced equally,  
.....  
..... [1]
- 2. the expansion of the glass of the thermometer is ignored.  
.....  
..... [1]

[Total: 7]

- 6 A dolphin produces a sound wave in water of frequency 7800 Hz.

Fig. 6.1 represents rarefactions of the sound wave travelling in the water and hitting the side of a wooden ship at an angle.



**Fig. 6.1**

- (a) State what is meant by a *rarefaction*.

.....  
 .....[1]

- (b) On Fig. 6.1, two rarefactions A and B are labelled. The distance between rarefaction A and rarefaction B is 0.76 m.

Determine

- (i) the wavelength in water of the sound wave,

wavelength = .....[1]

- (ii) the time taken for the rarefaction at A to reach the point where rarefaction B is now positioned.

time = .....[2]



(c) The sound wave passes from the water into the wood where the speed of sound is greater.

State what happens to

(i) the frequency,

.....[1]

(ii) the wavelength.

.....[1]

(d) On Fig. 6.1, sketch the positions in the wood of the three incomplete rarefactions. [2]

[Total: 8]



8 A metal sphere, mounted on an insulating plastic stand, is positively charged.

(a) State the name of the unit in which electric charge is measured.

.....[1]

(b) A smaller metal sphere, also mounted on an insulating plastic stand, is uncharged.

This smaller sphere is moved close to the positively charged sphere. Fig. 8.1 shows the two spheres.

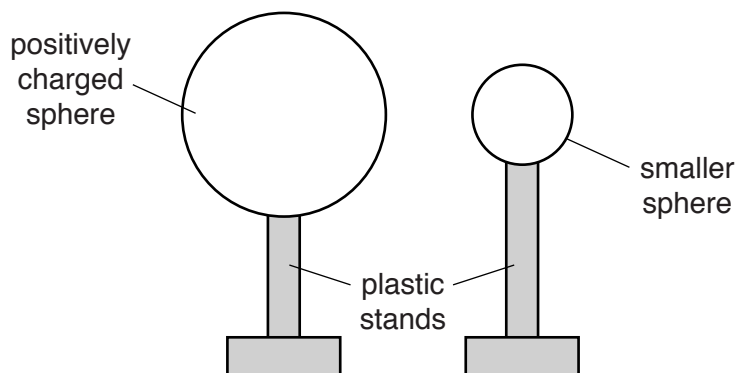


Fig. 8.1

(i) On Fig. 8.1, draw the distribution of charge on the smaller sphere. [2]

(ii) An earthed metal wire is touched against the smaller metal sphere.

State and explain what happens to the charge on the smaller sphere.

.....  
 .....  
 .....[2]

(c) Explain, in terms of their structures, why the metal wire is an electrical conductor but the plastic stand is an electrical insulator.

.....  
 .....  
 .....[2]

[Total: 7]



10 The output of an a.c. generator in a power station is 5000V.

A transformer increases the voltage to 115 000V before the electrical power is transmitted to a distant town.

(a) State and explain, using a relevant equation, one advantage of transmitting electrical power at a high voltage.

.....  
.....  
.....  
.....  
.....[3]

(b) The transformer contains two coils, the primary coil and the secondary coil.

(i) State the other main component of a transformer and the material from which it is made.

.....  
.....[1]

(ii) State the component in the transformer to which the a.c. generator is connected.

.....  
.....[1]

(iii) There are 400 turns on the primary coil of the transformer.

Calculate the number of turns on the secondary coil.

number of turns = .....[2]

(c) Transformers within the town reduce the voltage to 230V.

Suggest one reason for this.

.....  
.....[1]

[Total: 8]

11 Uranium-238 and uranium-234 are radioactive isotopes of the element uranium.

A uranium-238 nucleus is different from a uranium-234 nucleus but both decay by the emission of an  $\alpha$ -particle.

(a) (i) In terms of the particles in each, state how a nucleus of uranium-238 differs from a nucleus of uranium-234.

.....  
 ..... [2]

(ii) Although the two nuclei are different, they are both nuclei of uranium.

State a property that makes these isotopes the same element.

.....  
 ..... [1]

(b) When  $\alpha$ -particles pass through air, they are more strongly ionising than  $\beta$ -particles.

Suggest **two** reasons why this is so.

.....  
 ..... [2]

(c) In an experiment,  $\alpha$ -particles are allowed to strike a thin gold foil in a vacuum.

Almost all the  $\alpha$ -particles pass straight through the gold undeflected. Only a very small number of  $\alpha$ -particles are deflected from their original path.

This result reveals certain features of the atoms of the gold.

State what is shown about atoms by the fact that

(i) most  $\alpha$ -particles pass straight through the gold undeflected,

.....  
 ..... [1]

(ii) some  $\alpha$ -particles are deflected back the way they came.

.....  
 ..... [1]

[Total: 7]



**BLANK PAGE**

---

Permission to reproduce items where third-party owned material protected by copyright is included has been sought and cleared where possible. Every reasonable effort has been made by the publisher (UCLES) to trace copyright holders, but if any items requiring clearance have unwittingly been included, the publisher will be pleased to make amends at the earliest possible opportunity.

To avoid the issue of disclosure of answer-related information to candidates, all copyright acknowledgements are reproduced online in the Cambridge International Examinations Copyright Acknowledgements Booklet. This is produced for each series of examinations and is freely available to download at [www.cie.org.uk](http://www.cie.org.uk) after the live examination series.

Cambridge International Examinations is part of the Cambridge Assessment Group. Cambridge Assessment is the brand name of University of Cambridge Local Examinations Syndicate (UCLES), which is itself a department of the University of Cambridge.