



UNIVERSITY OF CAMBRIDGE INTERNATIONAL EXAMINATIONS
International General Certificate of Secondary Education

COMBINED SCIENCE

0653/11

Paper 1 Multiple Choice

May/June 2013

45 minutes

Additional Materials: Multiple Choice Answer Sheet
Soft clean eraser
Soft pencil (type B or HB is recommended)



READ THESE INSTRUCTIONS FIRST

Write in soft pencil.

Do not use staples, paper clips, highlighters, glue or correction fluid.

Write your name, Centre number and candidate number on the Answer Sheet in the spaces provided unless this has been done for you.

DO NOT WRITE IN ANY BARCODES.

There are **forty** questions on this paper. Answer **all** questions. For each question there are four possible answers **A, B, C** and **D**.

Choose the **one** you consider correct and record your choice in **soft pencil** on the separate Answer Sheet.

Read the instructions on the Answer Sheet very carefully.

Each correct answer will score one mark. A mark will not be deducted for a wrong answer.

Any rough working should be done in this booklet.

A copy of the Periodic Table is printed on page 16.

Electronic calculators may be used.

This document consists of **16** printed pages.

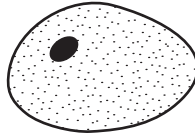


2

1 Which substance can enter a plant cell by diffusion?

- A carbon dioxide
- B cellulose
- C protein
- D starch

2 The diagram shows an animal cell. The maximum diameter of the diagram is 25 mm.



The actual cell was 0.02 mm maximum diameter.

What is the magnification of the drawing?

- A $\times 25$ B $\times 200$ C $\times 1250$ D $\times 2500$

3 A test-tube contains a solution of an enzyme.

Which colour is obtained when the biuret test is carried out on this solution?

- A blue
- B blue-black
- C orange
- D purple

4 Which two chemical substances are required for photosynthesis?

- A carbon dioxide and glucose
- B glucose and oxygen
- C oxygen and water
- D water and carbon dioxide

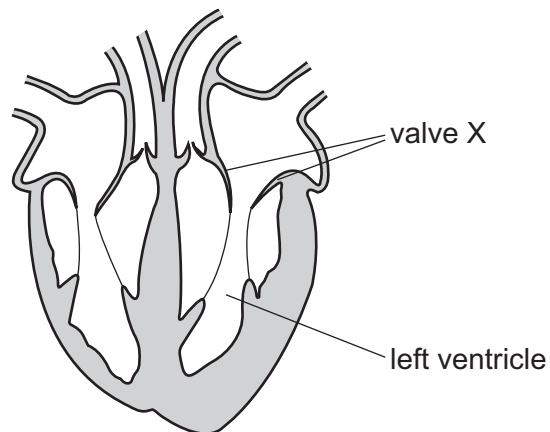
- 5 Mixtures were made from 5 cm^3 of a starch solution and 2 cm^3 of a solution of an enzyme that digests starch. The mixtures were all kept at the same temperature.

The table shows the different concentrations of the starch and starch-digesting enzyme solutions in each mixture.

In which mixture would it take the **longest** time for all the starch to disappear?

	concentration of starch solution / %	concentration of starch-digesting enzyme / %
A	4	8
B	4	4
C	2	8
D	2	4

- 6 What is the word equation for aerobic respiration?
- A** carbon dioxide + glucose \rightarrow oxygen + water
- B** carbon dioxide + water \rightarrow glucose + oxygen
- C** glucose + oxygen \rightarrow carbon dioxide + water
- D** oxygen + water \rightarrow carbon dioxide + glucose
- 7 The diagram shows a section through the heart.



Which events occur as the left ventricle contracts?

- A** atrial wall contracts and valve X closes
- B** atrial wall contracts and valve X opens
- C** atrial wall relaxes and valve X closes
- D** atrial wall relaxes and valve X opens

8 In what form is water as it enters and is lost from a plant?

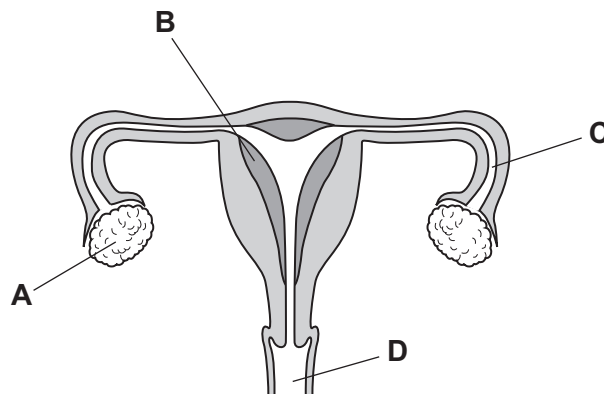
	as it enters	as it is lost
A	liquid	liquid
B	liquid	vapour
C	vapour	liquid
D	vapour	vapour

9 What is the effect of adrenaline in the control of metabolic activity?

	blood glucose concentration	rate of heart beat
A	decreases	decreases
B	decreases	increases
C	increases	decreases
D	increases	increases

10 The diagram shows a section through the female reproductive system.

Where is the fertilised egg implanted?



11 What describes asexual reproduction?

	number of parents	a zygote is produced	offspring identical to the parent
A	1	no	yes
B	1	yes	no
C	2	no	yes
D	2	yes	no

12 What occurs about two weeks after menstruation?

- A the release of a gamete from an ovary
- B the release of a gamete from the uterus
- C the release of a zygote from an ovary
- D the release of a zygote from the uterus

13 The diagram shows five organisms in a food chain.

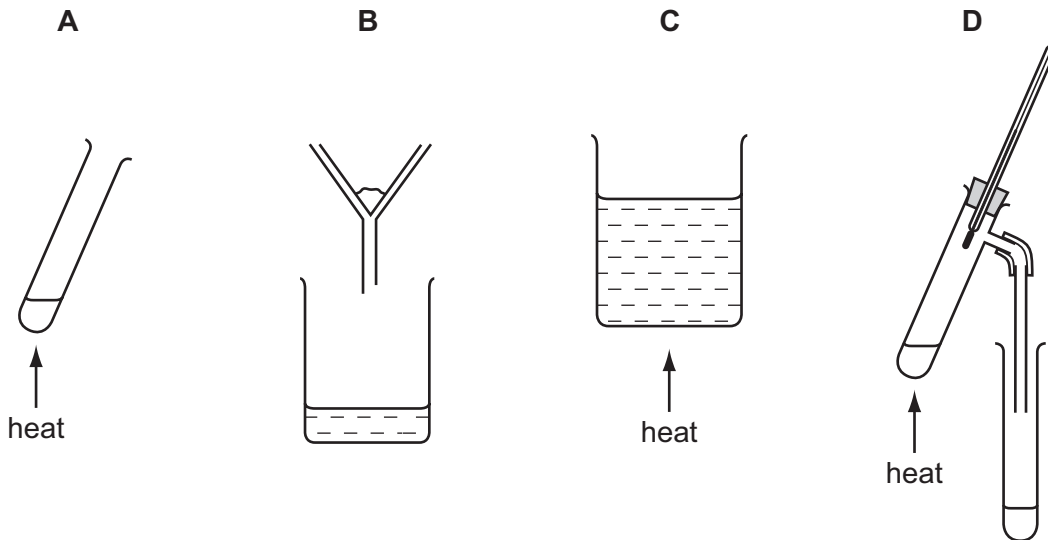
$$T \rightarrow U \rightarrow V \rightarrow W \rightarrow X$$

Which organisms are consumers?

- A T, U and V
- B T, W and X
- C T, V and X
- D U, V and W

14 Aqueous copper(II) sulfate consists of copper(II) sulfate dissolved in water.

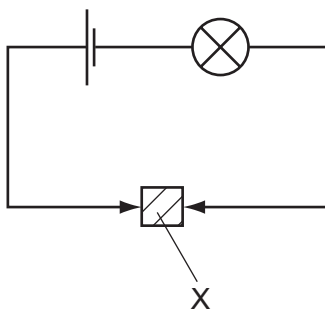
Which apparatus could **not** be used to remove water from this solution?



6

15 A solid X is placed in the circuit shown.

The lamp lights.



What is X?

- A an alloy
- B a compound
- C an electrolyte
- D a salt

16 The reaction of zinc and sulfur to form zinc sulfide is exothermic.

Which information in the table is correct?

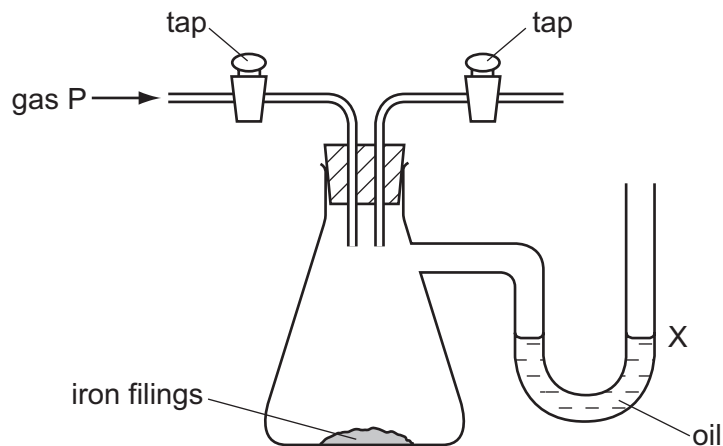
	elements in zinc sulfide	energy change during the formation of zinc sulfide
A	difficult to separate	heat given out
B	difficult to separate	heat taken in
C	easy to separate	heat given out
D	easy to separate	heat taken in

17 A student carries out experiments with zinc and dilute hydrochloric acid.

Which change in conditions makes the reaction slower?

- A adding a suitable catalyst
- B increasing the concentration of the acid
- C increasing the particle size of the zinc
- D increasing the temperature

18 The diagram shows an experiment on the rusting of iron.



The flask is filled with gas P. The taps are closed and the apparatus is left for a week.

The experiment is repeated with four different gases.

What happens to the oil level at X?

	gas P	oil level at X
A	damp nitrogen	rises
B	damp oxygen	falls
C	dry nitrogen	falls
D	dry oxygen	rises

19 Which mixture **cannot** be separated by distillation?

- A** air
- B** petroleum
- C** salt water
- D** sulfur and iron

20 Which statements about air are correct?

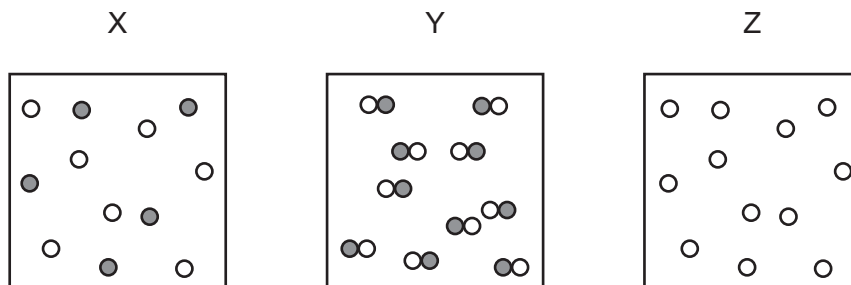
- 1 Air contains a small amount of argon which is a noble gas.
- 2 Air is made up of 78% oxygen and 21% nitrogen.
- 3 Air contains carbon dioxide which is a product of both respiration and the combustion of natural gas.

- A** 1, 2 and 3 **B** 1 and 2 only **C** 1 and 3 only **D** 2 and 3 only

21 Which substance conducts electricity?

- A $\text{CO}_2(\text{g})$ B $\text{NaCl}(\text{s})$ C $\text{NaOH}(\text{aq})$ D $\text{S}(\text{s})$

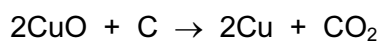
22 The diagrams represent the particles in substances X, Y and Z.



Which row correctly identifies X, Y and Z as an element, a compound or a mixture?

	element	compound	mixture
A	X	Y	Z
B	Y	Z	X
C	Z	X	Y
D	Z	Y	X

23 The equation shows the reaction of copper oxide with carbon.



In the reaction, the carbon is the1..... agent and is2..... during the reaction.

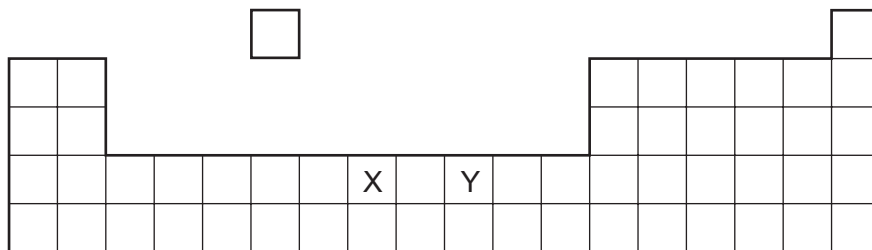
Which words complete gaps 1 and 2?

	1	2
A	oxidising	oxidised
B	oxidising	reduced
C	reducing	oxidised
D	reducing	reduced

24 Which pair of gases can be identified using limewater and damp litmus paper?

- A carbon dioxide and chlorine
 B carbon dioxide and hydrogen
 C chlorine and oxygen
 D hydrogen and chlorine

25 The diagram shows an outline of part of the Periodic Table.



What do elements X and Y have in common?

- 1 They form coloured compounds.
- 2 They can be used as catalysts.
- 3 They have low melting points.

A 1, 2 and 3 **B** 1 and 2 only **C** 1 and 3 only **D** 2 and 3 only

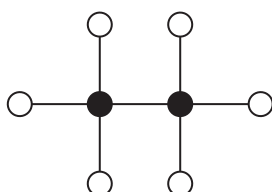
26 Three boiling tubes are each filled with a gas from Group VII in the Periodic Table.

Gas 1 is brown. Gas 2 is purple. Gas 3 is green.

Which gases are in the tubes?

	gas 1	gas 2	gas 3
A	<i>Cl</i>	I	Br
B	Br	<i>Cl</i>	I
C	Br	I	<i>Cl</i>
D	I	Br	<i>Cl</i>

27 The diagram shows a molecule of ethane.



key

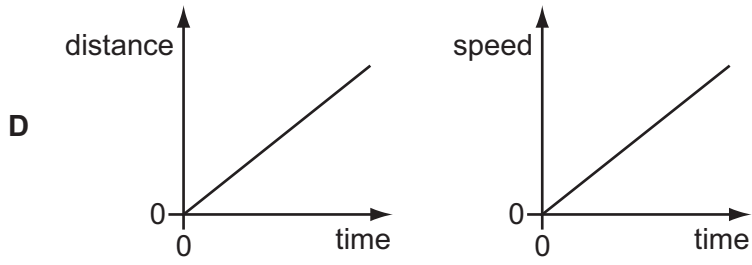
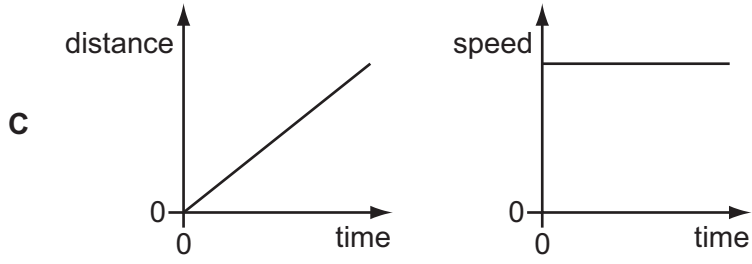
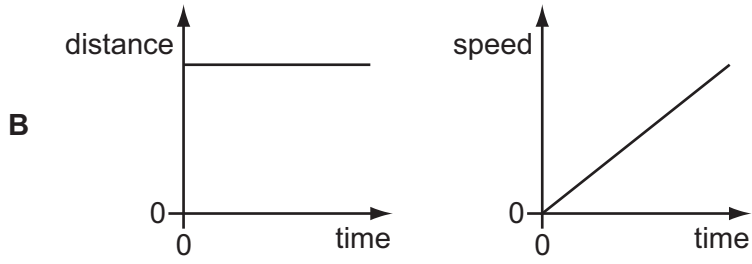
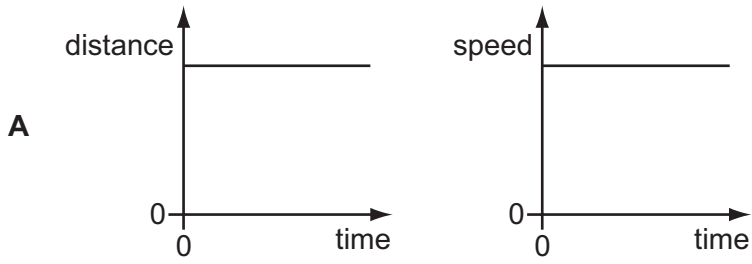
● carbon atom

○ hydrogen atom

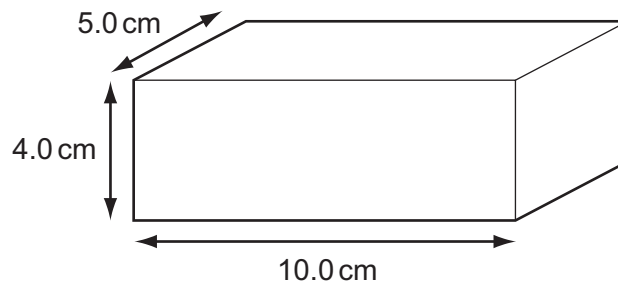
What is the molecular formula of ethane?

A CH₆ **B** CH₃ **C** C₂H₄ **D** C₂H₆

28 Which pair of distance/time and speed/time graphs represents an object which is moving with constant speed?

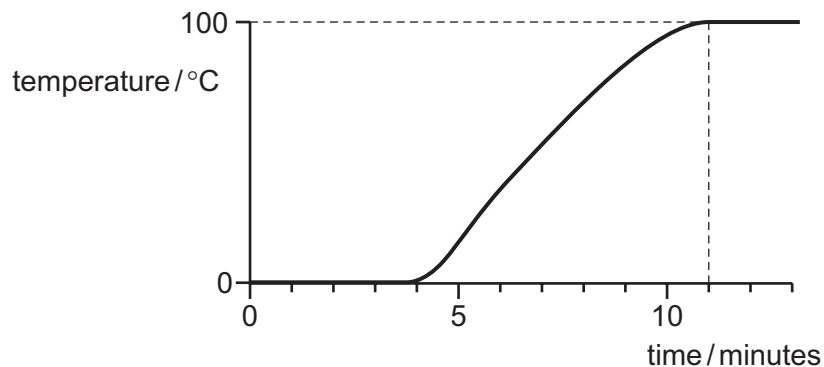


- 29 A rectangular metal block has the dimensions shown. The density of the metal is 8.0 g/cm^3 .



What is the mass of the metal block?

- A** 160 g **B** 320 g **C** 400 g **D** 1600 g
- 30 Which energy resource is non-renewable?
- A** geothermal energy
B hydroelectric energy
C nuclear energy
D wave energy
- 31 When sweat evaporates, which change of state takes place?
- A** gas to liquid
B liquid to gas
C liquid to solid
D solid to gas
- 32 A block of ice is supplied with heat at a constant rate. Eventually, the melted ice boils. The graph shows how the temperature changes with time.



How long does it take to melt all the ice?

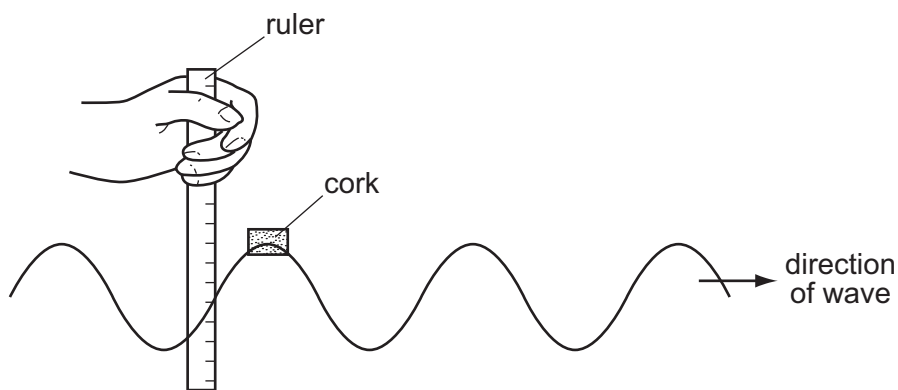
- A** 4 minutes **B** 7 minutes **C** 11 minutes **D** 13 minutes

33 The International Space Station orbits the Earth in the vacuum above the atmosphere.
The electrical systems in the Space Station produce heat.

How is this heat transferred from the external surfaces of the Space Station into space?

- A conduction only
- B convection only
- C radiation only
- D conduction, convection and radiation

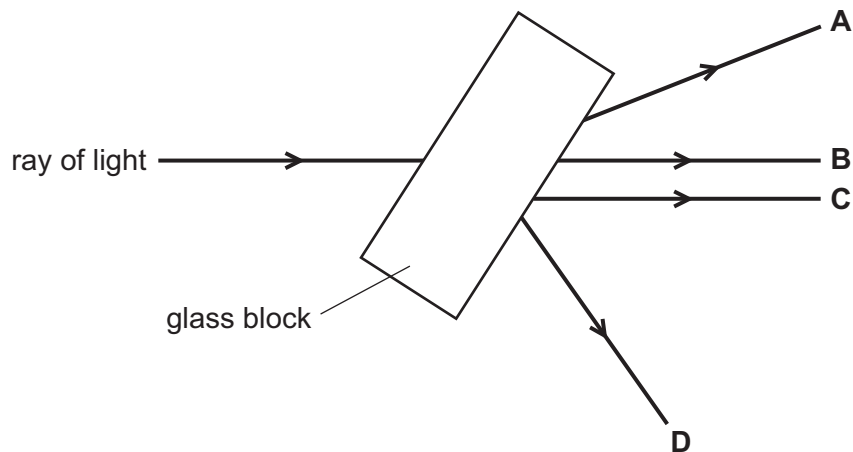
34 A student measures the distance a cork moves up and down on a wave in a tank of water.



Which quantity can she obtain from this measurement?

- A amplitude
- B frequency
- C speed
- D wavelength

35 Which labelled ray shows the path of the ray of light after it has passed through the glass block?



36 Electromagnetic waves have many different applications.

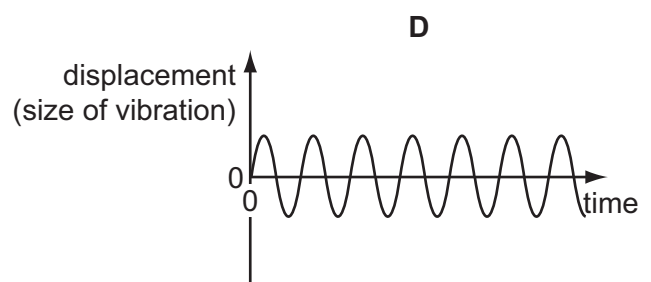
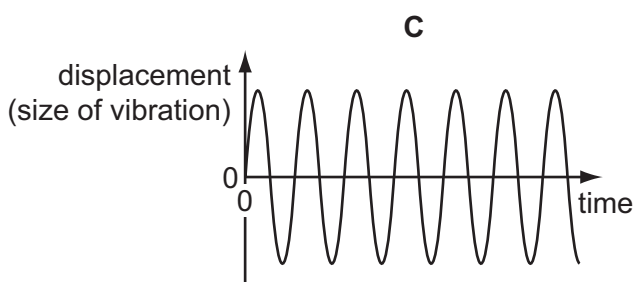
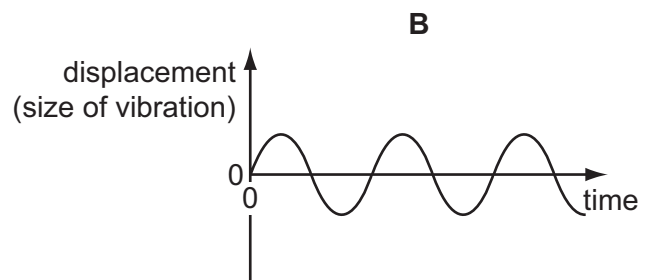
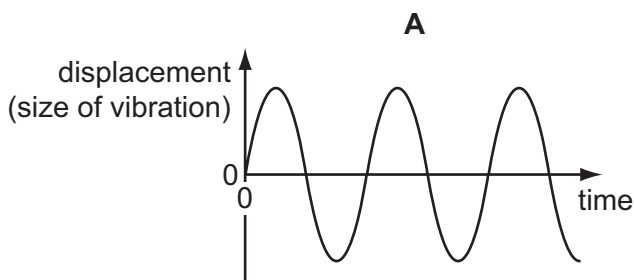
Which row identifies the type of electromagnetic wave used in each application?

	satellite television	terrestrial television (not satellite)	television remote controllers
A	microwaves	radio waves	infrared waves
B	microwaves	radio waves	microwaves
C	radio waves	infrared waves	infrared waves
D	radio waves	infrared waves	microwaves

37 A microphone is connected to an oscilloscope. The oscilloscope produces graphs of four different sounds.

The scales for the graphs are the same.

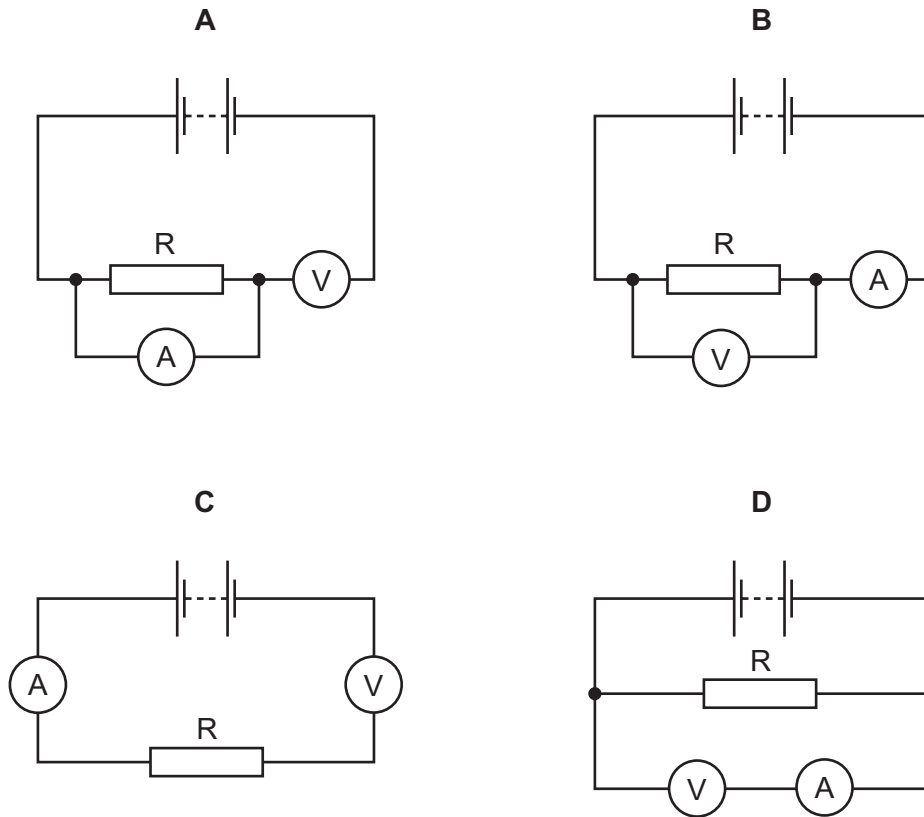
Which graph shows the quietest sound with the highest pitch?



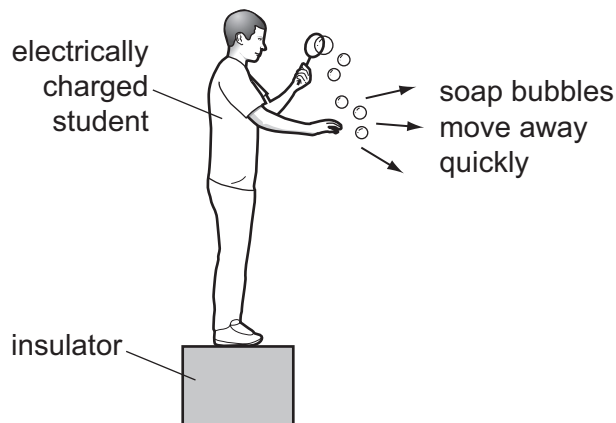
38 A student wishes to find the resistance of resistor R.

The diagrams show four possible circuits which the student could use.

Which circuit can be used to find the resistance of resistor R?



39 An electrically charged student produces soap bubbles. When he holds his hand near the bubbles, they move away quickly from his hand.



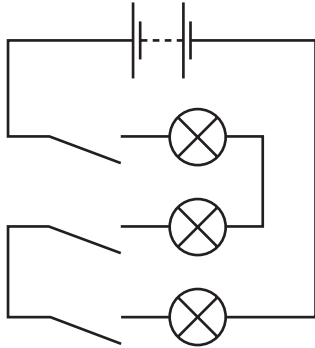
For this movement of the bubbles to happen, which statement is correct?

- A The bubbles must be negatively charged.
- B The bubbles must be positively charged.
- C The bubbles must have the opposite charge to the charge on the student.
- D The bubbles must have the same charge as the charge on the student.

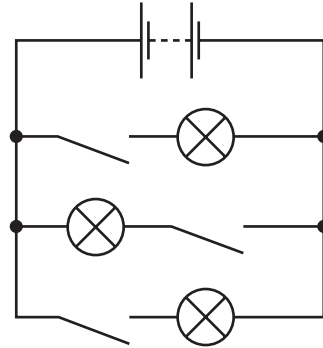
40 An electrician wishes to connect three lamps in a circuit so that each lamp can be on and off separately.

Which circuit should be used?

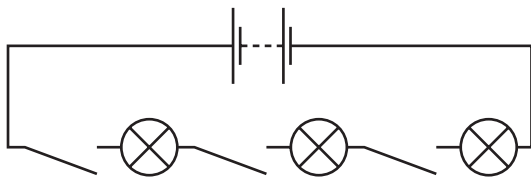
A



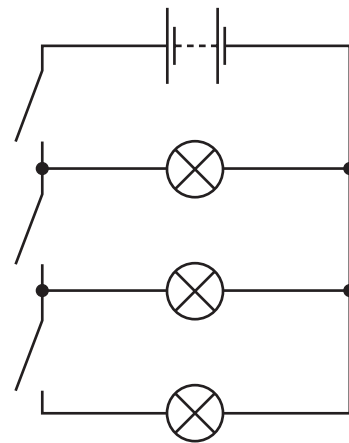
B



C



D



DATA SHEET
The Periodic Table of the Elements

		Group												
I	II	III	IV	V	VI	VII	0					0		
7 Li Lithium 3	9 Be Beryllium 4	1 H Hydrogen 1	11 B Boron 5	12 C Carbon 6	14 N Nitrogen 7	16 O Oxygen 8	19 F Fluorine 9	20 Ne Neon 10	27 Al Aluminium 13	28 Si Silicon 14	31 P Phosphorus 15	32 S Sulfur 16	35.5 Cl Chlorine 17	40 Ar Argon 18
39 K Potassium 19	40 Ca Calcium 20	55 Mn Manganese 25	56 Fe Iron 26	59 Co Cobalt 27	59 Ni Nickel 28	64 Cu Copper 29	65 Zn Zinc 30	70 Ga Gallium 31	73 Ge Germanium 32	75 As Arsenic 33	79 Se Selenium 34	80 Br Bromine 35	84 Kr Krypton 36	
85 Rb Rubidium 37	88 Sr Strontium 38	91 Zr Zirconium 40	101 Ru Ruthenium 44	103 Rh Rhodium 45	106 Pd Palladium 46	108 Ag Silver 47	112 Cd Cadmium 48	115 In Indium 49	119 Sn Tin 50	122 Sb Antimony 51	128 Te Tellurium 52	127 I Iodine 53	131 Xe Xenon 54	
133 Cs Caesium 55	137 Ba Barium 56	181 Ta Tantalum 73	190 Os Osmium 76	192 Ir Iridium 77	195 Pt Platinum 78	197 Au Gold 79	201 Hg Mercury 80	204 Tl Thallium 81	207 Pb Lead 82	209 Bi Bismuth 83	210 Po Polonium 84	210 At Astatine 85	210 Rn Radon 86	
226 Ra Radium 88	227 Ac Actinium 89	140 Ce Cerium 58	141 Pr Praseodymium 59	144 Nd Neodymium 60	150 Sm Samarium 62	152 Eu Europium 63	157 Gd Gadolinium 64	162 Dy Dysprosium 66	165 Ho Holmium 67	167 Er Erbium 68	169 Tm Thulium 69	173 Yb Ytterbium 70	175 Lu Lutetium 71	
		232 Th Thorium 90	238 Pa Protactinium 91	238 U Uranium 92	238 Np Neptunium 93	238 Am Americium 95	238 Cm Curium 96	238 Bk Berkelium 97	238 Cf Californium 98	238 Fm Fermium 100	238 Md Mendelevium 101	238 No Nobelium 102	238 Lr Lawrencium 103	

*58-71 Lanthanoid series
†90-103 Actinoid series

a	X	a = relative atomic mass
	X	X = atomic symbol
b		b = proton (atomic) number

The volume of one mole of any gas is 24 dm³ at room temperature and pressure (r.t.p.).

Permission to reproduce items where third-party owned material protected by copyright is included has been sought and cleared where possible. Every reasonable effort has been made by the publisher (UCLES) to trace copyright holders, but if any items requiring clearance have unwittingly been included, the publisher will be pleased to make amends at the earliest possible opportunity.

University of Cambridge International Examinations is part of the Cambridge Assessment Group. Cambridge Assessment is the brand name of University of Cambridge Local Examinations Syndicate (UCLES), which is itself a department of the University of Cambridge.