



Cambridge Pre-U

GEOGRAPHY

9768/03

Paper 3 Geographical Issues

October/November 2020

INSERT

2 hours 45 minutes

INFORMATION

- This insert contains all the resources referred to in the questions.
- You may annotate this insert and use the blank spaces for planning. **Do not write your answers** on the insert.



This syllabus is regulated for use in England, Wales and Northern Ireland as a Cambridge International Level 3 Pre-U Certificate.

This document has **8** pages. Blank pages are indicated.

Fig. 1.1 for Question 1

The intensity of the 2011 Christchurch, New Zealand and 2010 Haiti earthquakes as measured by the Modified Mercalli (MM) scale

Christchurch, New Zealand (2011)

MM	Settlement	Population
VIII	Darfield	2 000
VII	Burnham	1 000
VI	Rolleston	3 000
VI	Rakaia	1 000
VI	Leeston	1 000
VI	Lincoln	2 000
V	Oxford	2 000
V	Christchurch	364 000
V	Methven	1 000
V	Woodend	3 000
V	Amberley	1 000
IV	Oamaru	13 000
IV	Pleasant Point	1 000
IV	Timaru	28 000
IV	Greymouth	9 000
IV	Westport	4 000
IV	Hokitika	3 000
III	Brightwater	2 000
III	Blenheim	27 000
III	Wakefield	2 000
II	Wanaka	4 000

Haiti (2010)

MM	Settlement	Population
IX	Gressier	26 000
IX	Carrefour	442 000
IX	Leogane	134 000
VIII	Port-au-Prince	1 235 000
VIII	Petionville	283 000
VIII	Delmas 73	383 000
VIII	Grand Goave	49 000
VIII	Petit Goave	116 000
VIII	Croix-des-Bouquets	229 000
VIII	Miragoane	89 000
VIII	Kenscoff	42 000
VIII	Cabaret	4 000
VII	Fond Parisien	18 000
VII	Jacmel	138 000
VI	Cotes-de-Fer	2 000
VI	Cayes Jacmel	2 000
VI	Fond-des-Blancs	3 000

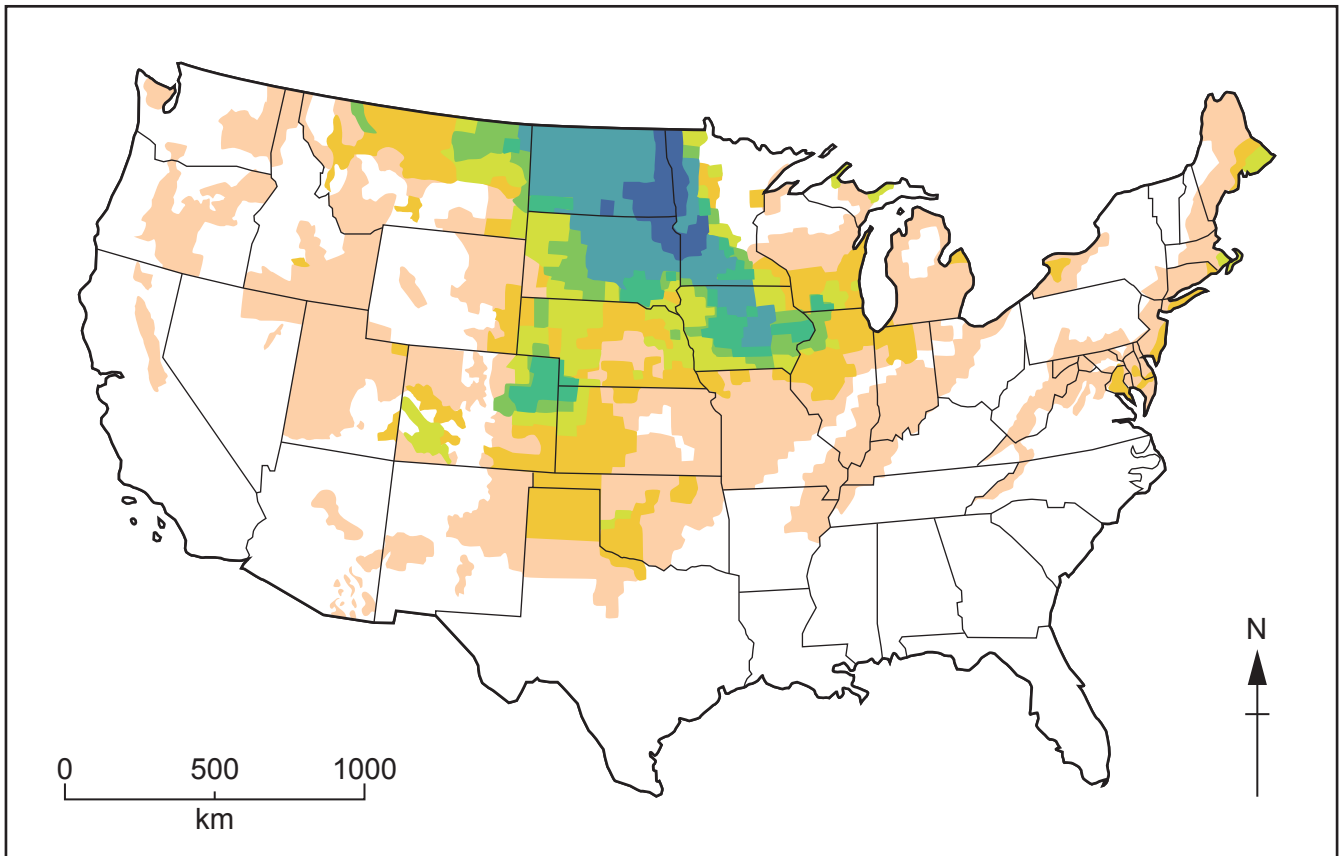
Key

Modified Mercalli scale of intensity

IX	highest
VIII	
VII	
VI	
V	
IV	
III	
II	lowest

Fig. 2.1 for Question 2

The number of blizzard warnings in mainland USA, 2009–2014



Key

blizzard warnings 6-year total

- 21–75
- 11–20
- 9–10
- 7–8
- 5–6
- 3–4
- 1–2
- 0

Fig. 3.1 for Question 3

The variation in largest annual flows of the River Severn at Bewdley, Worcestershire, UK, between 1923 and 2013

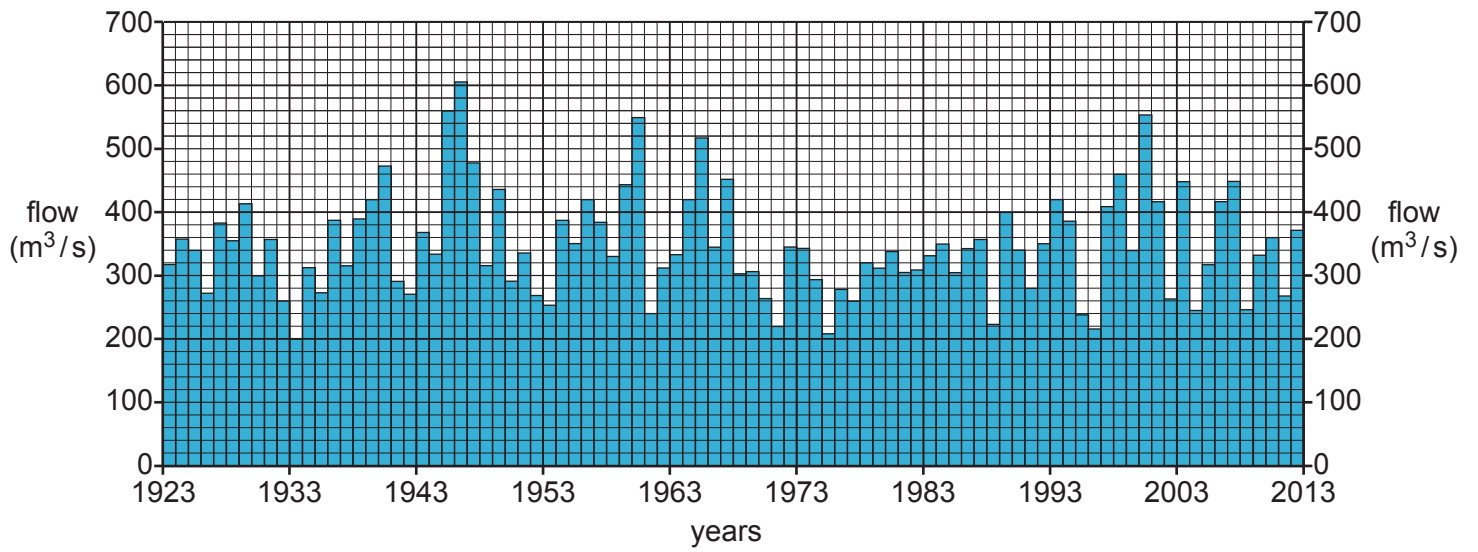
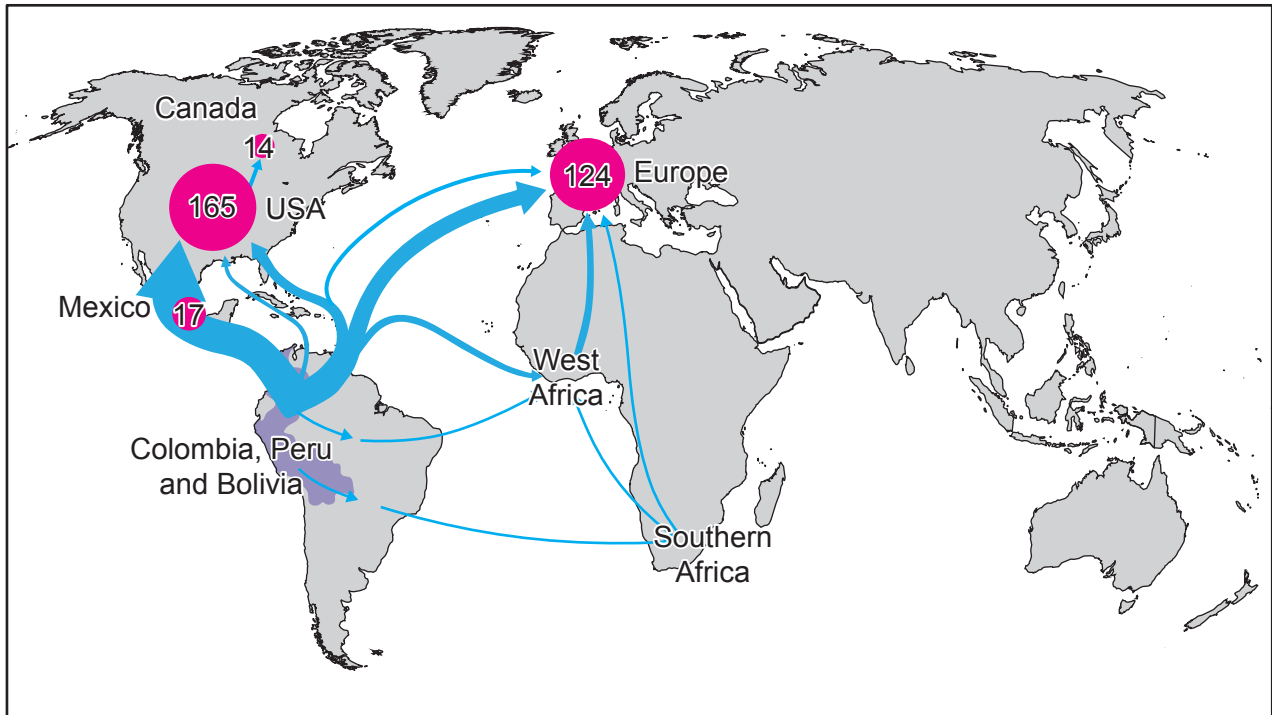


Fig. 4.1 for Question 4

The main estimated global flows of cocaine, 2010



Key

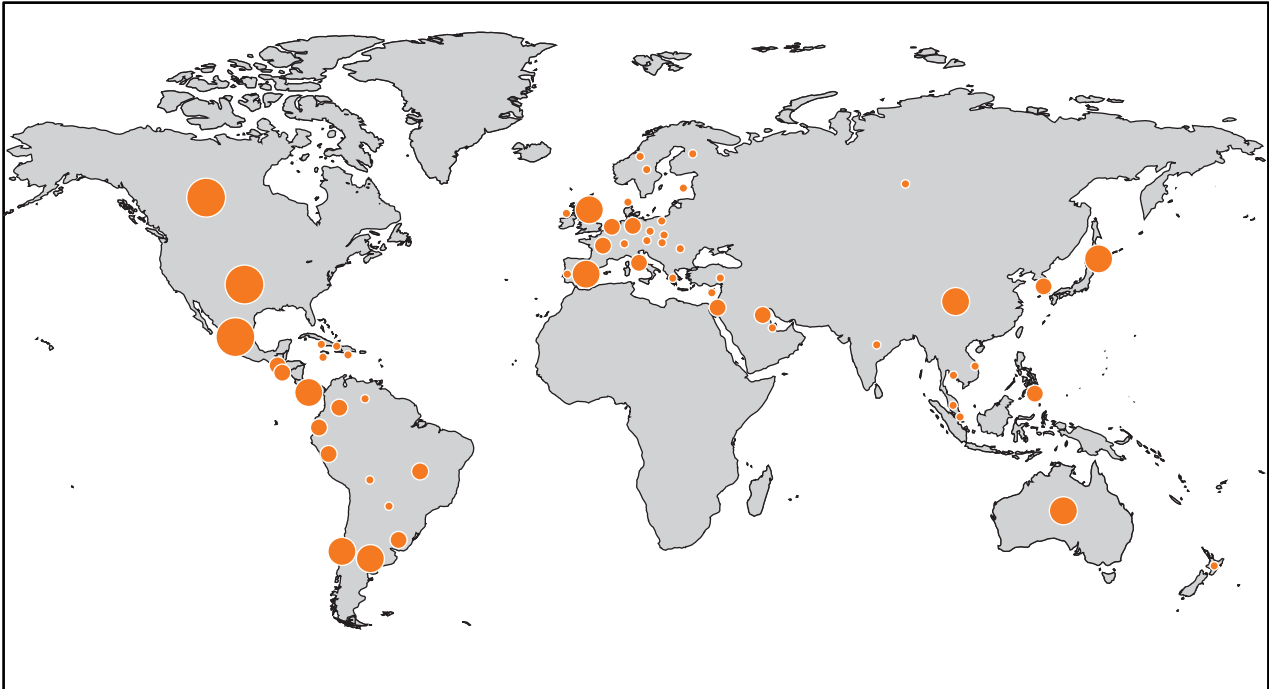
- main cocaine producers
- cocaine consumption (in metric tons)

cocaine trafficking (in metric tons)

- 140
- 60
- 15
- 6

Fig. 5.1 for Question 5

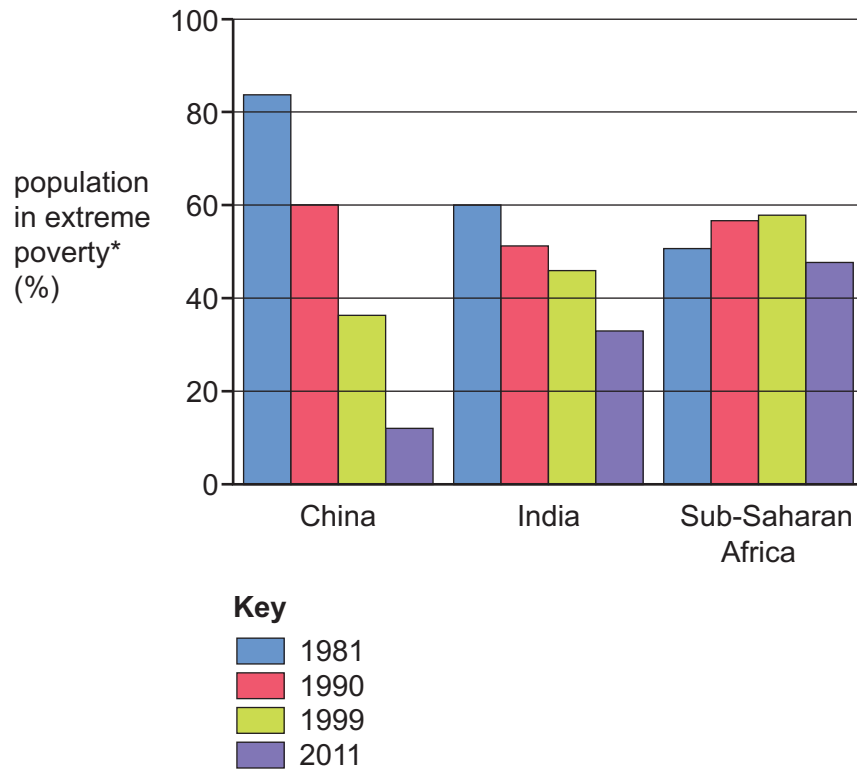
The global pattern of confirmed cases of swine flu, June 2009



- Key**
cumulative cases
- 501 and more
 - 51–500
 - 11–50
 - 1–10

Fig. 6.1 for Question 6

Changes in the rates of extreme poverty between 1981 and 2011 for selected world regions



* a person is considered to be in extreme poverty if they live on less than \$1.90 US per day.

BLANK PAGE

The boundaries and names shown, the designations used and the presentation of material on the maps contained in this question paper/insert do not imply official endorsement or acceptance by Cambridge Assessment International Education concerning the legal status of any country, territory, or area or any of its authorities, or of the delimitation of its frontiers or boundaries.

Permission to reproduce items where third-party owned material protected by copyright is included has been sought and cleared where possible. Every reasonable effort has been made by the publisher (UCLES) to trace copyright holders, but if any items requiring clearance have unwittingly been included, the publisher will be pleased to make amends at the earliest possible opportunity.

To avoid the issue of disclosure of answer-related information to candidates, all copyright acknowledgements are reproduced online in the Cambridge Assessment International Education Copyright Acknowledgements Booklet. This is produced for each series of examinations and is freely available to download at www.cambridgeinternational.org after the live examination series.

Cambridge Assessment International Education is part of the Cambridge Assessment Group. Cambridge Assessment is the brand name of the University of Cambridge Local Examinations Syndicate (UCLES), which itself is a department of the University of Cambridge.