



UNIVERSITY OF CAMBRIDGE INTERNATIONAL EXAMINATIONS
International General Certificate of Secondary Education

CO-ORDINATED SCIENCES

0654/11

Paper 1 Multiple Choice

October/November 2013

45 minutes

Additional Materials: Multiple Choice Answer Sheet
 Soft clean eraser
 Soft pencil (type B or HB is recommended)

* 5 1 8 5 5 8 9 1 1 8 *

READ THESE INSTRUCTIONS FIRST

Write in soft pencil.

Do not use staples, paper clips, highlighters, glue or correction fluid.

Write your name, Centre number and candidate number on the Answer Sheet in the spaces provided unless this has been done for you.

DO NOT WRITE IN ANY BARCODES.

There are **forty** questions on this paper. Answer **all** questions. For each question there are four possible answers **A, B, C** and **D**.

Choose the **one** you consider correct and record your choice in **soft pencil** on the separate Answer Sheet.

Read the instructions on the Answer Sheet very carefully.

Each correct answer will score one mark. A mark will not be deducted for a wrong answer.

Any rough working should be done in this booklet.

A copy of the Periodic Table is printed on page 20.

Electronic calculators may be used.

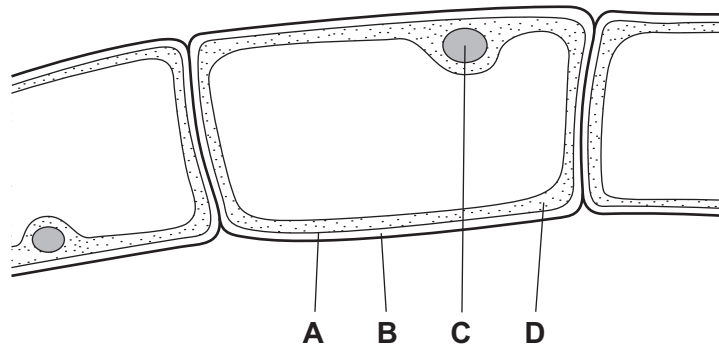
This document consists of **17** printed pages and **3** blank pages.



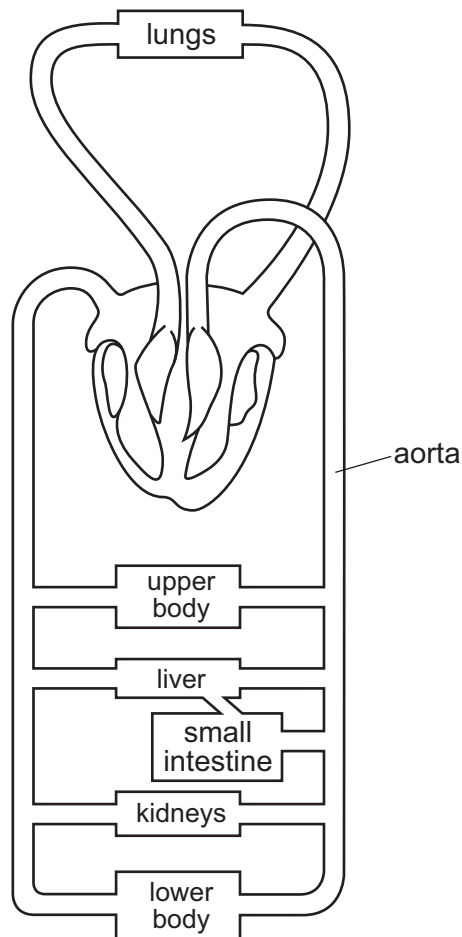
2

- 1 The diagram shows part of an organism that lives in water, magnified by a microscope.

Which part shows that the organism **must** be a plant?



- 2 The diagram shows the blood circulatory system of a human.



How many times must a blood cell pass through the heart on its way from the kidneys to the aorta?

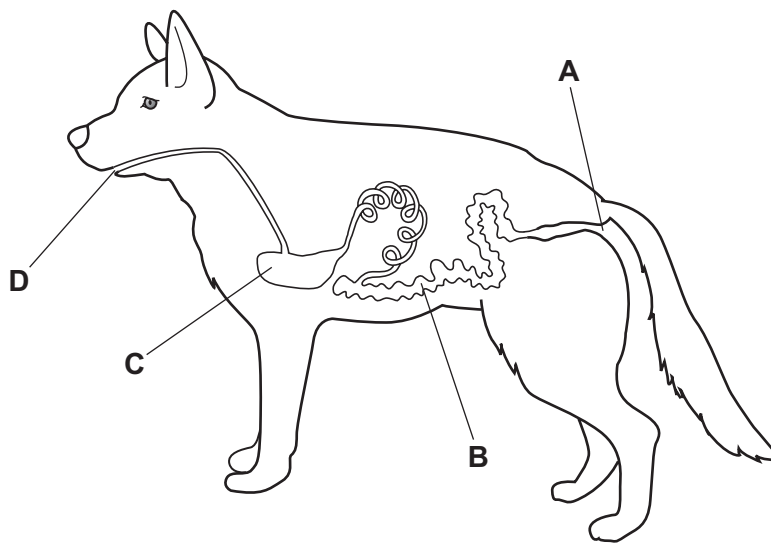
- A once only
- B twice only
- C four times
- D more than four times

3 Which row shows a chemical molecule and the basic unit from which it is made?

	chemical molecule	basic unit
A	glycogen	amino acid
B	glycogen	simple sugar
C	oil	amino acid
D	oil	simple sugar

4 The diagram shows the alimentary canal of a dog.

Where does egestion occur?



5 Which statement about blood components is correct?

- A** Platelets make antibodies.
- B** Platelets transport oxygen.
- C** White blood cells carry out phagocytosis.
- D** White blood cells transport carbon dioxide.

6 Which is **not** a way that liver cells use energy?

- A** cell division
- B** heat production
- C** movement
- D** protein synthesis

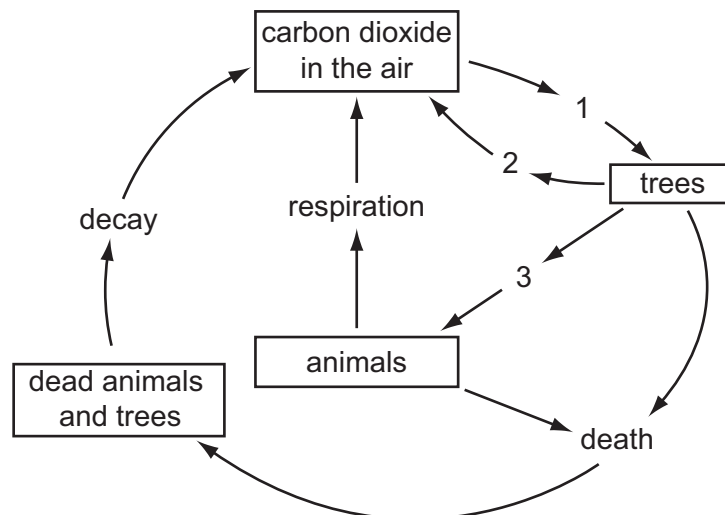
- 7 What is the meaning of homeostasis?
- A breathing faster after exercise
 - B getting rid of carbon dioxide from the lungs
 - C keeping conditions in the body constant
 - D preventing the body from getting too hot
- 8 What does the central nervous system consist of?
- A brain and peripheral nerves
 - B brain and spinal cord
 - C brain only
 - D spinal cord only
- 9 Pollination is the transfer of pollen
- A from anther to sepal.
 - B from anther to stigma.
 - C from sepal to anther.
 - D from stigma to anther.
- 10 In a plant, what leads to offspring that are identical to the parent?
- A asexual reproduction
 - B insect-pollination
 - C seed germination
 - D sexual reproduction
- 11 In mice, the allele for black fur is dominant to the allele for white fur. Two heterozygous mice mate.
- What colour are the offspring likely to be?
- A all black
 - B some black and some white
 - C all grey
 - D all white

- 12 Dung beetles lay their eggs in the faeces of plant-eating mammals like buffalo. Both the adult beetles and their young stages eat the **undigested** food in the faeces.

Which shows this food relationship?

- A buffalo → dung beetles
buffalo → grass
- B dung beetles → grass → buffalo
- C grass → dung beetles → buffalo
- D grass → buffalo
grass → dung beetles

- 13 The diagram shows part of the carbon cycle in a forest. The numbers represent different processes.

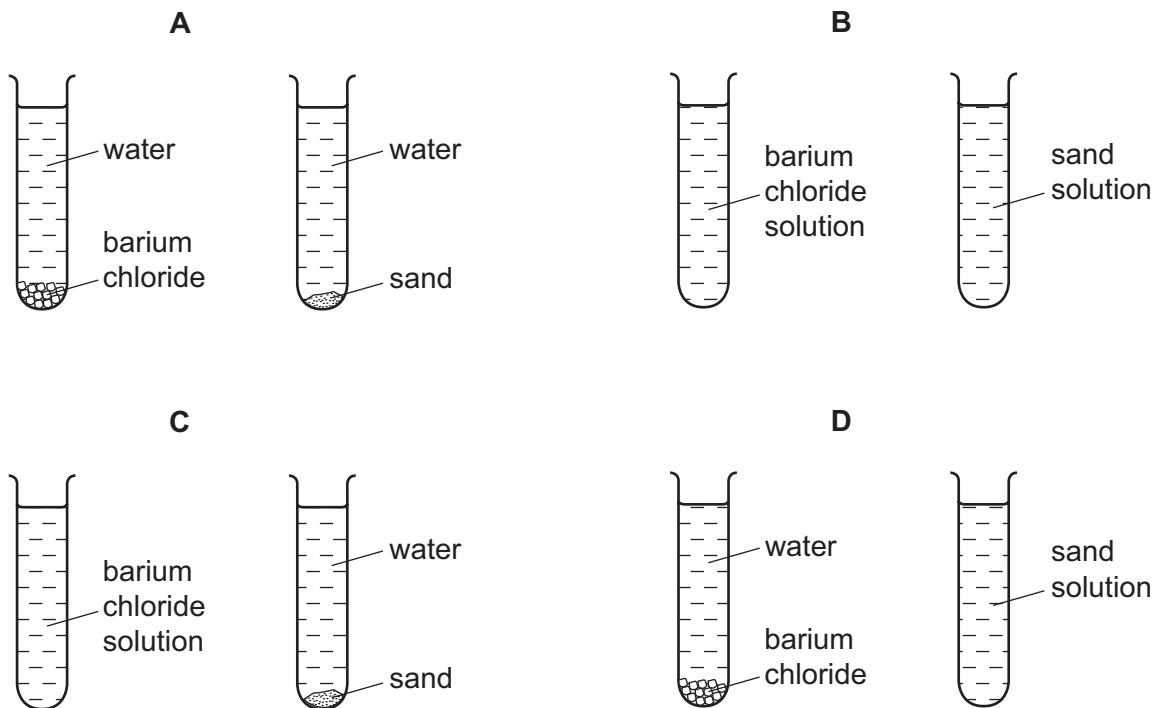


Which of these processes is reduced as a result of deforestation?


- A 1 only
- B 1 and 2 only
- C 2 and 3 only
- D 1, 2 and 3

- 14 Small amounts of barium chloride and sand are shaken with separate samples of water in two test-tubes. The test-tubes are left to stand for 24 hours.

Which diagram shows how the test-tubes appear at the end?



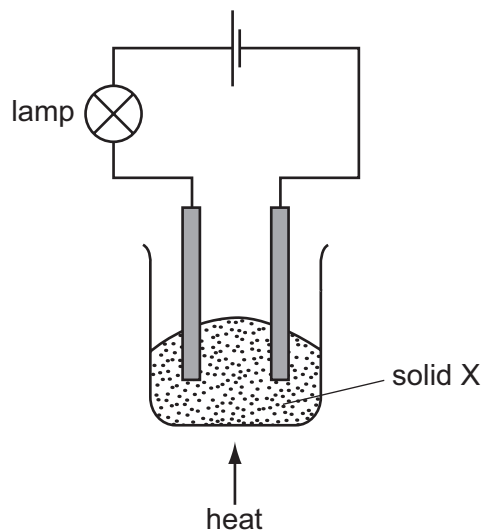
- 15 Substance Q is used to make a cooking pan.



What are the properties of substance Q?

	melting point	thermal conductivity
A	high	high
B	high	low
C	low	high
D	low	low

16 The experiment shown is used to investigate the properties of solid X.



At first, the lamp does not light.

On heating, solid X melts and the lamp lights.

What type of substance is X?

- A a compound of a metal and a non-metal
- B a compound of two non-metals
- C a metallic element
- D a non-metallic element

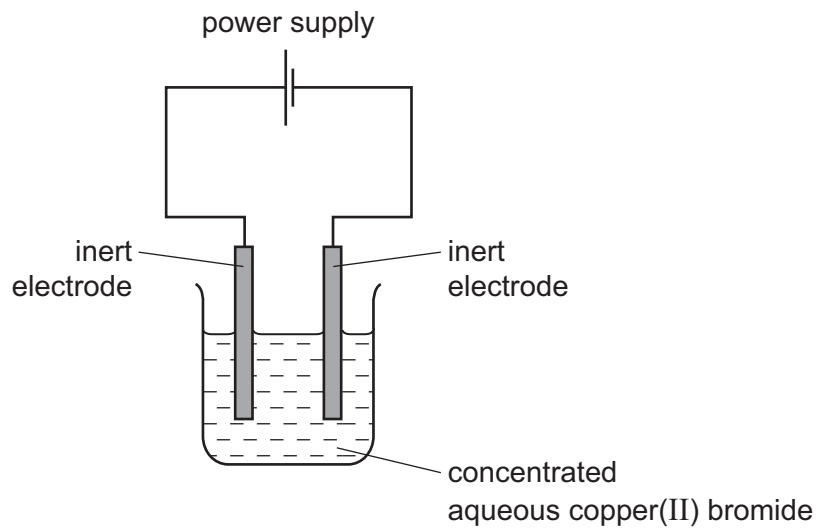
17 The table shows the temperature of some water before and after a solid is dissolved in it.

Which change is the most exothermic?

	temperature before /°C	temperature after /°C
A	20	18
B	20	40
C	25	18
D	25	42

18 The diagram shows the circuit for electrolysis of concentrated aqueous copper(II) bromide.

Copper(II) bromide is similar to copper(II) chloride.



Which row describes the products at each electrode?

	cathode	anode
A	bromine	copper
B	copper	bromine
C	copper	oxygen
D	hydrogen	bromine

19 Hydrogen can occur as an atom, an ion and a molecule.

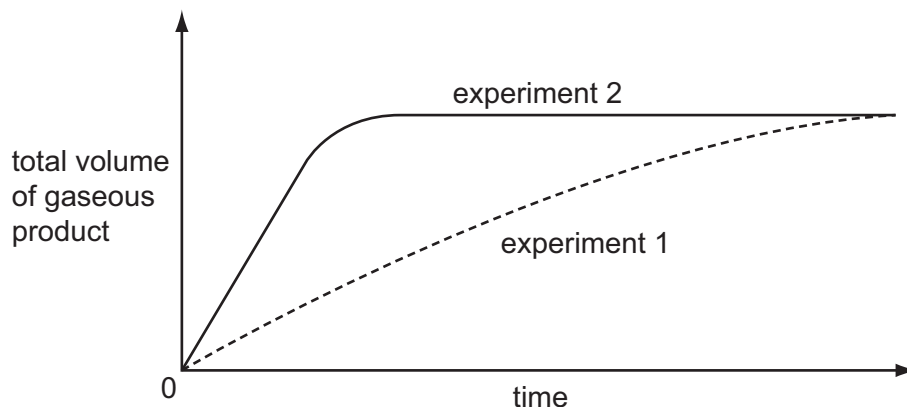
Which row represents these particles?

	atom	ion	molecule
A	H	H ⁺	H ₂
B	H	H ₂	H ⁺
C	H ⁺	H	H ₂
D	H ₂	H ⁺	H

- 20 Substance X does not react with dilute acid. Substance Y reacts with dilute acid, forming a gas.

The graph shows the results of two experiments.

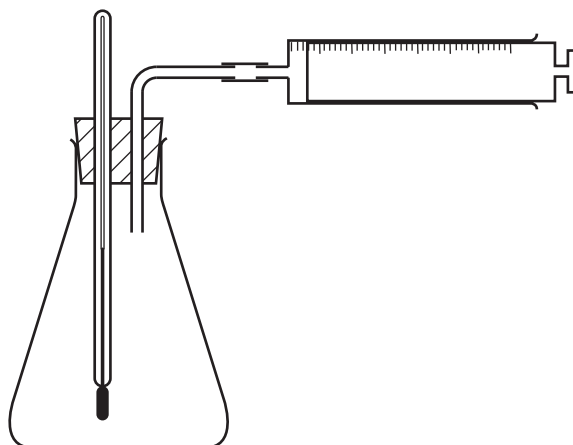
experiment 1 Y + dilute acid
 experiment 2 X + Y + dilute acid



What do these results show?

	X is a catalyst	X is quickly used up	
A	✓	✓	key ✓ = true x = false
B	✓	x	
C	x	✓	
D	x	x	

- 21 The apparatus below is used to investigate the speed of a chemical reaction.



For which reaction is the apparatus suitable?

- A** gas E + gas F → liquid G only
B solid H + solution I → solution J only
C solid K + solution L → solution M + gas N
D solution P + solution Q → solid R + solution Q

22 The elements from sodium to sulfur are in the same period of the Periodic Table.

Na	Mg	Al	Si	P	S
----	----	----	----	---	---

Which trend does **not** occur across the Periodic Table from sodium to sulfur?

- A The chlorides of the elements change from covalent to ionic.
- B The elements change from good to poor electrical conductors.
- C The oxides of the elements change from basic to acidic.
- D The solid elements change from malleable to brittle.

23 A label from a packet of indigestion tablets is shown.

Each tablet contains:	
magnesium carbonate	120 mg
magnesium hydroxide	15 mg
magnesium oxide	62 mg
magnesium sulfate	47 mg

Which substance does **not** neutralise stomach acid?

- A magnesium carbonate
- B magnesium hydroxide
- C magnesium oxide
- D magnesium sulfate

24 The elements in a Group of the Periodic Table are solid at 20 °C.

The reactivity of the elements increases down the group.

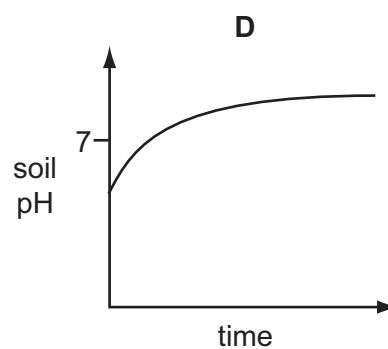
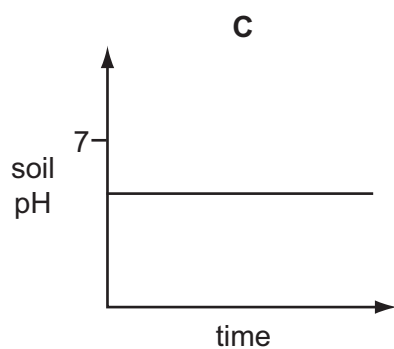
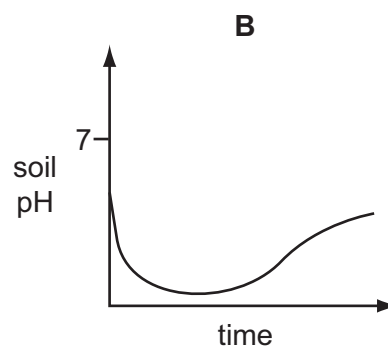
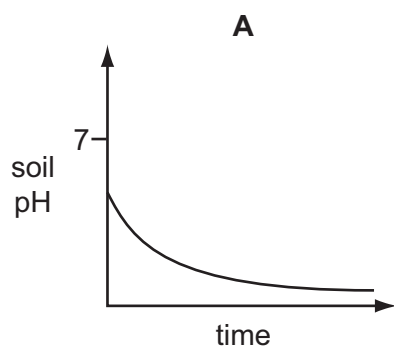
Which statements about this group of elements and their oxides are correct?

	the elements are in	their oxides are
A	Group I	acidic
B	Group I	basic
C	Group VII	acidic
D	Group VII	basic

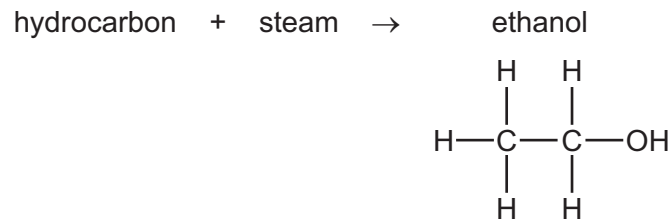
- 25 Which type of reaction and which temperature change take place when an acid reacts with an alkali?

	type of reaction	temperature change
A	endothermic	decrease
B	endothermic	increase
C	exothermic	decrease
D	exothermic	increase

- 26 Which graph shows how the pH of the soil changes when lime is added?



27 Ethanol can be made by reacting steam with a hydrocarbon.

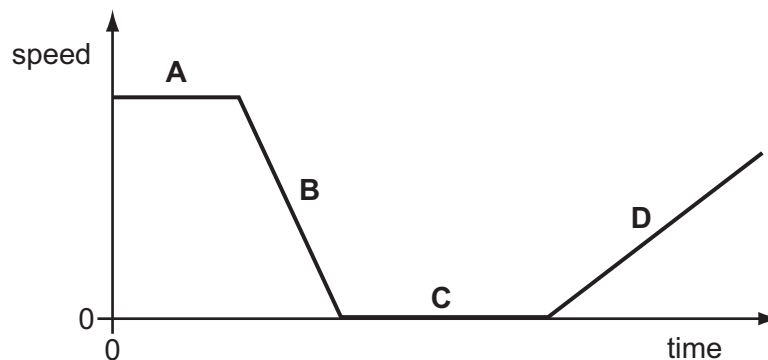


What is the name of the hydrocarbon?

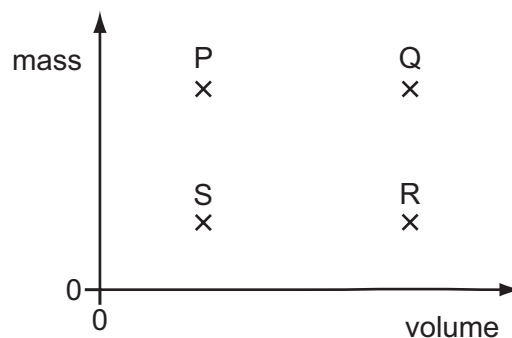
- A ethane
- B ethene
- C methane
- D propene

28 The graph shows the motion of a train during part of a journey.

At which labelled point on the graph could the train be waiting at a station?



29 The diagram shows a graph with values of mass against volume for four different objects P, Q, R and S.



Which two objects have the same density?

- A P and Q
- B P and R
- C R and S
- D S and Q

30 An aeroplane flies at a constant speed and height for several hours.

Which type of energy **must** change during this part of the flight?

- A the gravitational energy of the aeroplane
- B the kinetic energy of the aeroplane
- C the store of chemical energy in the fuel tank of the aeroplane
- D the thermal energy of the aeroplane

31 Liquid in a beaker evaporates quickly.

Which row shows what happens to the mass and to the temperature of the liquid in the beaker?

	mass	temperature
A	decreases	decreases
B	decreases	increases
C	increases	decreases
D	increases	increases

32 A sample of liquid is allowed to cool for 20 minutes. Its temperature is recorded every two minutes.

The results are shown in the table.

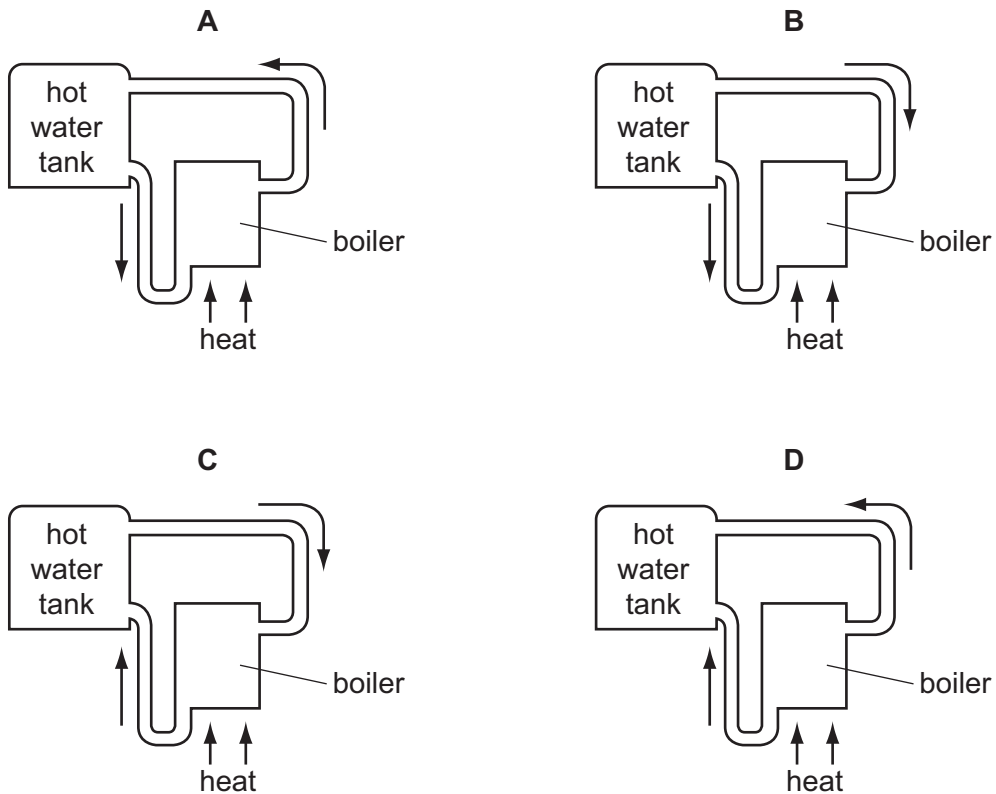
time / minutes	0	2	4	6	8	10	12	14	16	18	20
temperature / °C	90.8	80.9	74.1	67.4	61.9	57.0	53.0	50.2	48.5	47.3	46.1

How should the sample be described at the end of the 20 minutes?

- A all liquid
- B all solid
- C in the process of boiling
- D in the process of solidifying

33 The diagrams show part of a water-heating system which is working by convection.

Which diagram shows the flow of water in the system?



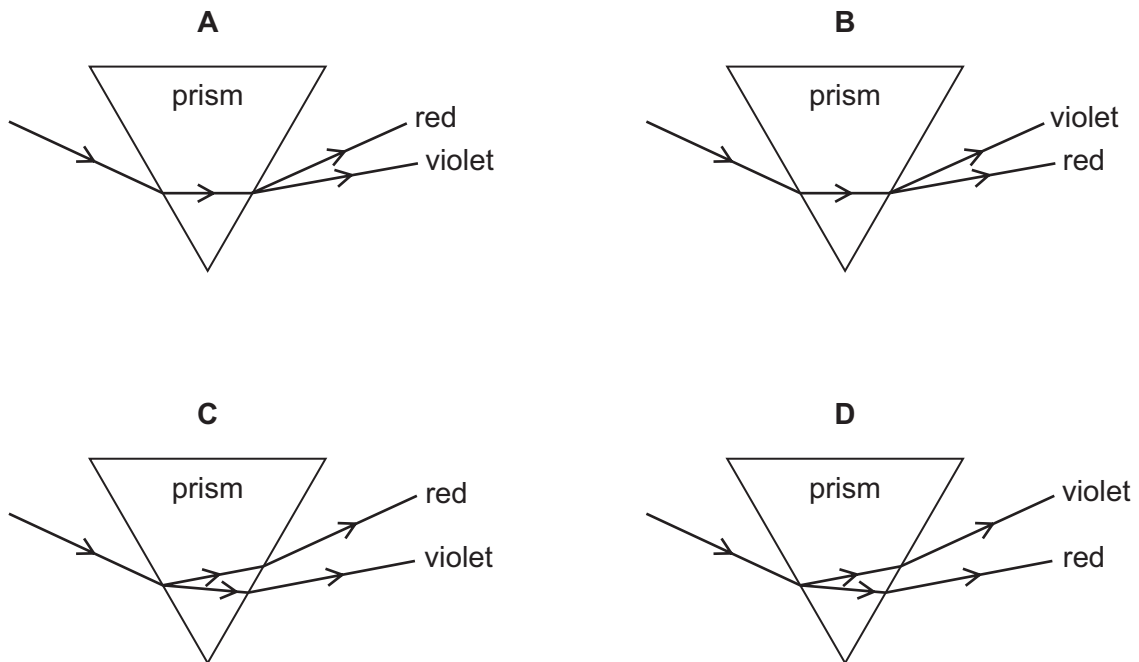
34 A student counts how many waves pass point P in 30 seconds.



Using only this information, what can the student calculate?

- A the amplitude of the wave
- B the frequency of the wave
- C the speed of the wave
- D the wavelength of the wave

35 Which diagram shows the dispersion of white light as it passes through a glass prism?



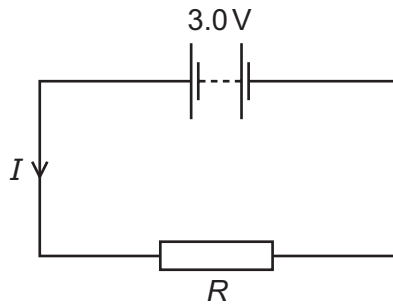
36 Which row shows how the speed and the wavelength of microwaves compare with those of γ (gamma)-rays?

	speed	wavelength
A	less than γ -rays	greater than γ -rays
B	less than γ -rays	less than γ -rays
C	the same as γ -rays	greater than γ -rays
D	the same as γ -rays	less than γ -rays

37 What is the approximate value of the frequency of the highest-pitched sound that can be heard by a young person?

- A** 20 Hz **B** 200 Hz **C** 2000 Hz **D** 20 000 Hz

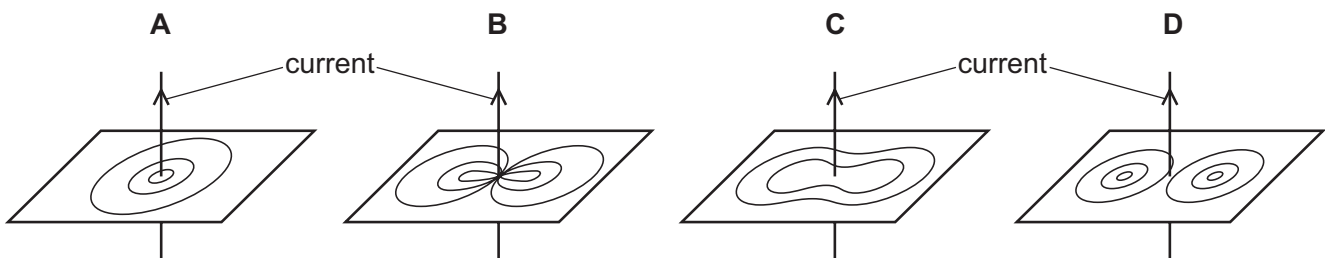
38 The circuit shows a current I in a resistor of resistance R .



Which row gives possible values of I and of R ?

	I/A	R/Ω
A	1.5	1.5
B	1.5	2.0
C	6.0	2.0
D	4.0	12.0

39 Which diagram shows the magnetic field pattern around a straight wire carrying a current?



40 A proton has charge q and mass m . A neutron has no charge and mass m .

Which row shows the charge and mass of an α -particle?

	charge	mass
A	$2q$	$2m$
B	$2q$	$4m$
C	$4q$	$2m$
D	$4q$	$4m$

DATA SHEET
The Periodic Table of the Elements

		Group																																																																																																																																																																																																																																																																																																																																																																																																																																																																																																																																																																																																																																																																																																																																																																																																																																																														
		I	II	III	IV	V	VI	VII	VIII	IX	X																																																																																																																																																																																																																																																																																																																																																																																																																																																																																																																																																																																																																																																																																																																																																																																																																																																					
		1 H Hydrogen 1																																																																																																																																																																																																																																																																																																																																																																																																																																																																																																																																																																																																																																																																																																																																																																																																																																																														
7	9	Li Lithium 3	Be Beryllium 4																																																																																																																																																																																																																																																																																																																																																																																																																																																																																																																																																																																																																																																																																																																																																																																																																																																													
23	24	Na Sodium 11	Mg Magnesium 12																																																																																																																																																																																																																																																																																																																																																																																																																																																																																																																																																																																																																																																																																																																																																																																																																																																													
39	40	K Potassium 19	Ca Calcium 20	45 Sc Scandium 21	48 Ti Titanium 22	51 V Vanadium 23	52 Cr Chromium 24	55 Mn Manganese 25	56 Fe Iron 26	59 Co Cobalt 27	59 Ni Nickel 28	64 Cu Copper 29	65 Zn Zinc 30	70 Ga Gallium 31	73 Ge Germanium 32	75 As Arsenic 33	79 Se Selenium 34	80 Br Bromine 35	84 Kr Krypton 36																																																																																																																																																																																																																																																																																																																																																																																																																																																																																																																																																																																																																																																																																																																																																																																																																																													
85	88	Rb Rubidium 37	Sr Strontium 38	89 Y Yttrium 39	91 Zr Zirconium 40	93 Nb Niobium 41	96 Mo Molybdenum 42	101 Ru Ruthenium 44	101 Rh Rhodium 45	103 Rh Rhodium 45	106 Pd Palladium 46	108 Ag Silver 47	112 Cd Cadmium 48	115 In Indium 49	119 Sn Tin 50	122 Sb Antimony 51	128 Te Tellurium 52	127 I Iodine 53	131 Xe Xenon 54																																																																																																																																																																																																																																																																																																																																																																																																																																																																																																																																																																																																																																																																																																																																																																																																																																													
133	137	Cs Caesium 55	Ba Barium 56	139 La Lanthanum 57	178 Hf Hafnium 72	181 Ta Tantalum 73	184 W Tungsten 74	190 Os Osmium 76	192 Ir Iridium 77	195 Pt Platinum 78	197 Au Gold 79	201 Hg Mercury 80	204 Tl Thallium 81	207 Pb Lead 82	209 Bi Bismuth 83	210 Po Polonium 84	210 At Astatine 85	210 Rn Radon 86																																																																																																																																																																																																																																																																																																																																																																																																																																																																																																																																																																																																																																																																																																																																																																																																																																														
87	226	Fr Francium 87	Ra Radium 88	227 Ac Actinium 89																																																																																																																																																																																																																																																																																																																																																																																																																																																																																																																																																																																																																																																																																																																																																																																																																																																												
												*58-71 Lanthanoid series †90-103 Actinoid series																																																																																																																																																																																																																																																																																																																																																																																																																																																																																																																																																																																																																																																																																																																																																																																																																																																				
		a		X		b																																																																																																																																																																																																																																																																																																																																																																																																																																																																																																																																																																																																																																																																																																																																																																																																																																																										
		Key		X		b																																																																																																																																																																																																																																																																																																																																																																																																																																																																																																																																																																																																																																																																																																																																																																																																																																																										
		a = relative atomic mass		X = atomic symbol		b = proton (atomic) number																																																																																																																																																																																																																																																																																																																																																																																																																																																																																																																																																																																																																																																																																																																																																																																																																																																										
140	141	144	150	152	157	159	162	165	167	169	173	175	181	182	183	184	185	186	187	188	189	190	191	192	193	194	195	196	197	198	199	200	201	202	203	204	205	206	207	208	209	210	211	212	213	214	215	216	217	218	219	220	221	222	223	224	225	226	227	228	229	230	231	232	233	234	235	236	237	238	239	240	241	242	243	244	245	246	247	248	249	250	251	252	253	254	255	256	257	258	259	260	261	262	263	264	265	266	267	268	269	270	271	272	273	274	275	276	277	278	279	280	281	282	283	284	285	286	287	288	289	290	291	292	293	294	295	296	297	298	299	300	301	302	303	304	305	306	307	308	309	310	311	312	313	314	315	316	317	318	319	320	321	322	323	324	325	326	327	328	329	330	331	332	333	334	335	336	337	338	339	340	341	342	343	344	345	346	347	348	349	350	351	352	353	354	355	356	357	358	359	360	361	362	363	364	365	366	367	368	369	370	371	372	373	374	375	376	377	378	379	380	381	382	383	384	385	386	387	388	389	390	391	392	393	394	395	396	397	398	399	400	401	402	403	404	405	406	407	408	409	410	411	412	413	414	415	416	417	418	419	420	421	422	423	424	425	426	427	428	429	430	431	432	433	434	435	436	437	438	439	440	441	442	443	444	445	446	447	448	449	450	451	452	453	454	455	456	457	458	459	460	461	462	463	464	465	466	467	468	469	470	471	472	473	474	475	476	477	478	479	480	481	482	483	484	485	486	487	488	489	490	491	492	493	494	495	496	497	498	499	500	501	502	503	504	505	506	507	508	509	510	511	512	513	514	515	516	517	518	519	520	521	522	523	524	525	526	527	528	529	530	531	532	533	534	535	536	537	538	539	540	541	542	543	544	545	546	547	548	549	550	551	552	553	554	555	556	557	558	559	560	561	562	563	564	565	566	567	568	569	570	571	572	573	574	575	576	577	578	579	580	581	582	583	584	585	586	587	588	589	590	591	592	593	594	595	596	597	598	599	600	601	602	603	604	605	606	607	608	609	610	611	612	613	614	615	616	617	618	619	620	621	622	623	624	625	626	627	628	629	630	631	632	633	634	635	636	637	638	639	640	641	642	643	644	645	646	647	648	649	650	651	652	653	654	655	656	657	658	659	660	661	662	663	664	665	666	667	668	669	670	671	672	673	674	675	676	677	678	679	680	681	682	683	684	685	686	687	688	689	690	691	692	693	694	695	696	697	698	699	700	701	702	703	704	705	706	707	708	709	710	711	712	713	714	715	716	717	718	719	720	721	722	723	724	725	726	727	728	729	730	731	732	733	734	735	736	737	738	739	740	741	742	743	744	745	746	747	748	749	750	751	752	753	754	755	756	757	758	759	760	761	762	763	764	765	766	767	768	769	770	771	772	773	774	775	776	777	778	779	780	781	782	783	784	785	786	787	788	789	790	791	792	793	794	795	796	797	798	799	800	801	802	803	804	805	806	807	808	809	810	811	812	813	814	815	816	817	818	819	820	821	822	823	824	825	826	827	828	829	830	831	832	833	834	835	836	837	838	839	840	841	842	843	844	845	846	847	848	849	850	851	852	853	854	855	856	857	858	859	860	861	862	863	864	865	866	867	868	869	870	871	872	873	874	875	876	877	878	879	880	881	882	883	884	885	886	887	888	889	890	891	892	893	894	895	896	897	898	899	900	901	902	903	904	905	906	907	908	909	910	911	912	913	914	915	916	917	918	919	920	921	922	923	924	925	926	927	928	929	930	931	932	933	934	935	936	937	938	939	940	941	942	943	944	945	946	947	948	949	950	951	952	953	954	955	956	957	958	959	960	961	962	963	964	965	966	967	968	969	970	971	972	973	974	975	976	977	978	979	980	981	982	983	984	985	986	987	988	989	990	991	992	993	994	995	996	997	998	999	1000

The volume of one mole of any gas is 24 dm³ at room temperature and pressure (r.t.p.).

Permission to reproduce items where third-party owned material protected by copyright is included has been sought and cleared where possible. Every reasonable effort has been made by the publisher (UCLES) to trace copyright holders, but if any items requiring clearance have unwittingly been included, the publisher will be pleased to make amends at the earliest possible opportunity.

University of Cambridge International Examinations is part of the Cambridge Assessment Group. Cambridge Assessment is the brand name of University of Cambridge Local Examinations Syndicate (UCLES), which is itself a department of the University of Cambridge.