



**Cambridge International Examinations**  
Cambridge Pre-U Certificate

---

**GEOGRAPHY (PRINCIPAL)**

**9768/03**

Paper 3 Geographical Issues

**May/June 2017**

INSERT

**2 hours 45 minutes**

---



**READ THESE INSTRUCTIONS FIRST**

This Insert contains the Figures and the Table referred to in the questions.

---

The syllabus is approved for use in England, Wales and Northern Ireland as a Cambridge International Level 3 Pre-U Certificate.

---

This document consists of **7** printed pages and **1** blank page.

Table 1 for Question 1

The magnitudes, on the Richter scale, of selected earthquakes and the number of lives lost as a result of these earthquakes

Location	Date	Magnitude	Lives lost
India	2001	7.6	20 000
Iran	2003	6.6	26 000
Pakistan	2005	7.6	75 000
Haiti	2010	7.0	300 000
Chile	2010	8.8	525
New Zealand	2010	7.0	0
Japan	2011	9.0	13 000
Nepal	2015	7.8	9 000

Fig. 1 for Question 2

The area of land that might be flooded as a result of storm surges of varying heights at Corpus Christi, Texas, USA

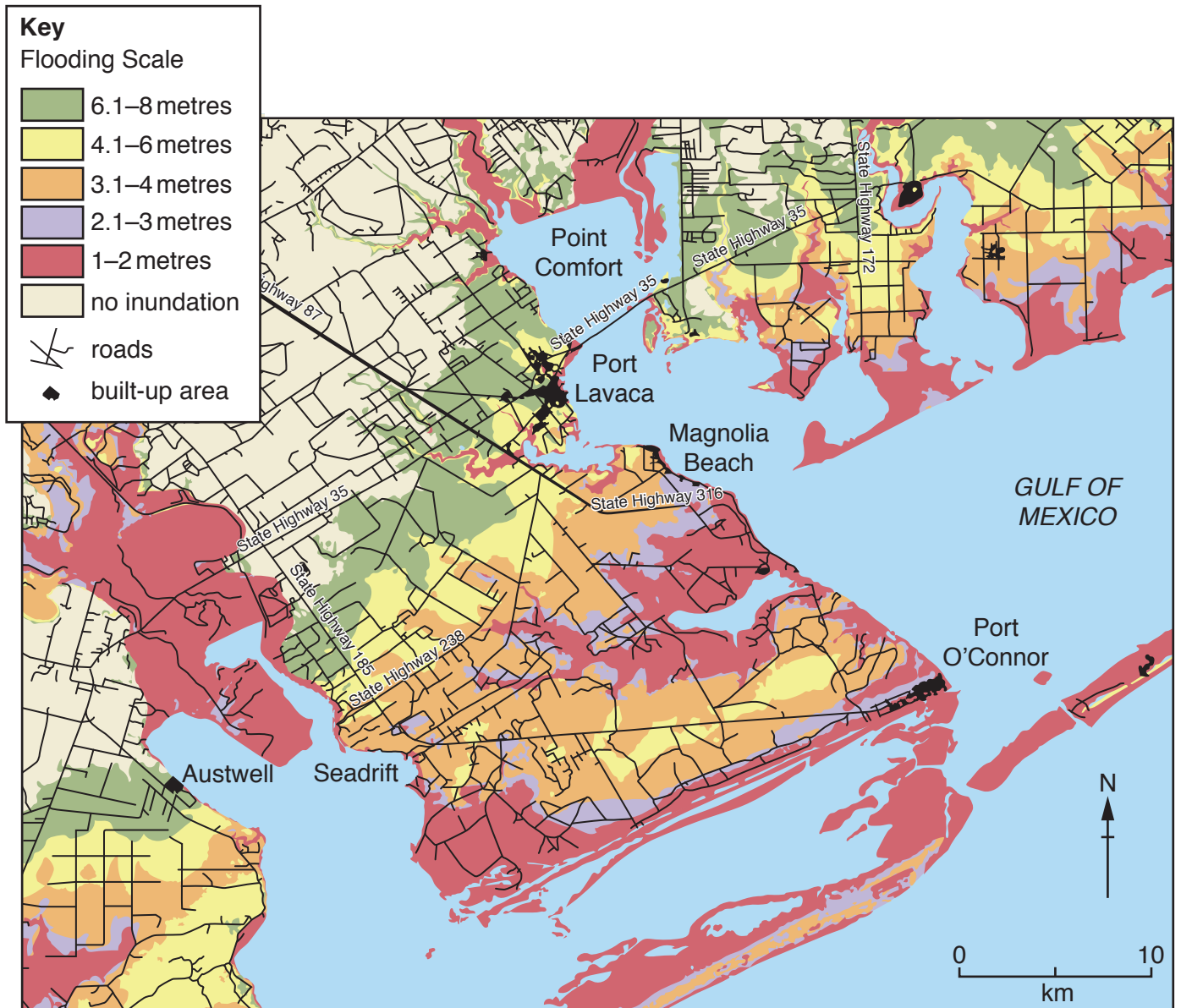


Fig. 2A for Question 3

December 2013 rainfall as a percentage of the 1981–2010 December average for Great Britain

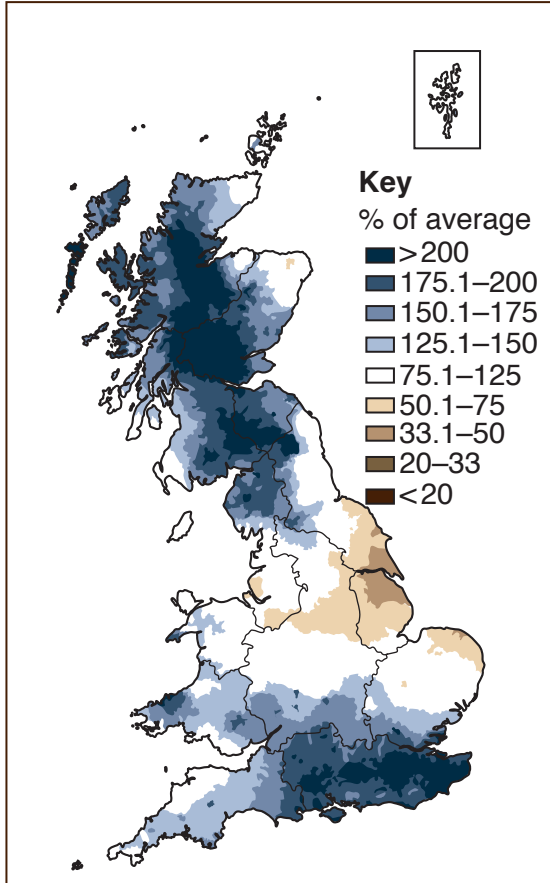


Fig. 2B for Question 3

January 2014 rainfall as a percentage of the 1981–2010 January average for Great Britain

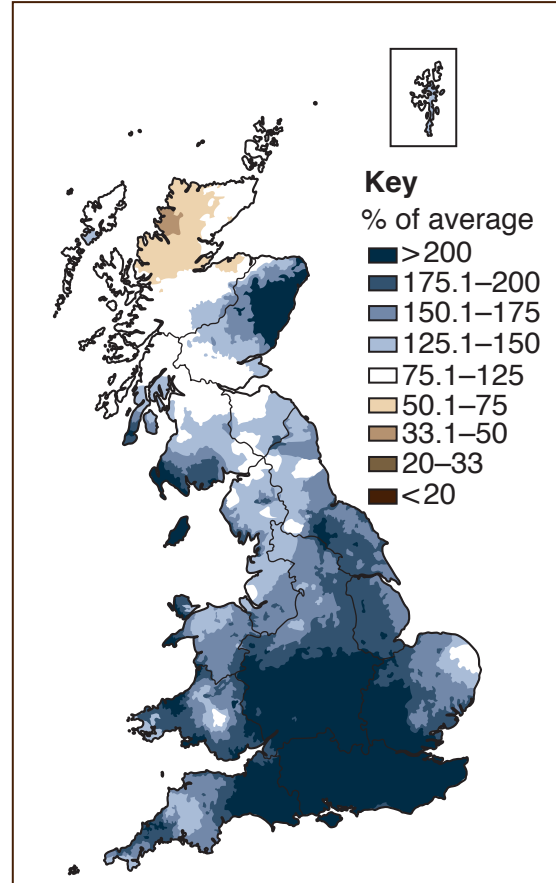
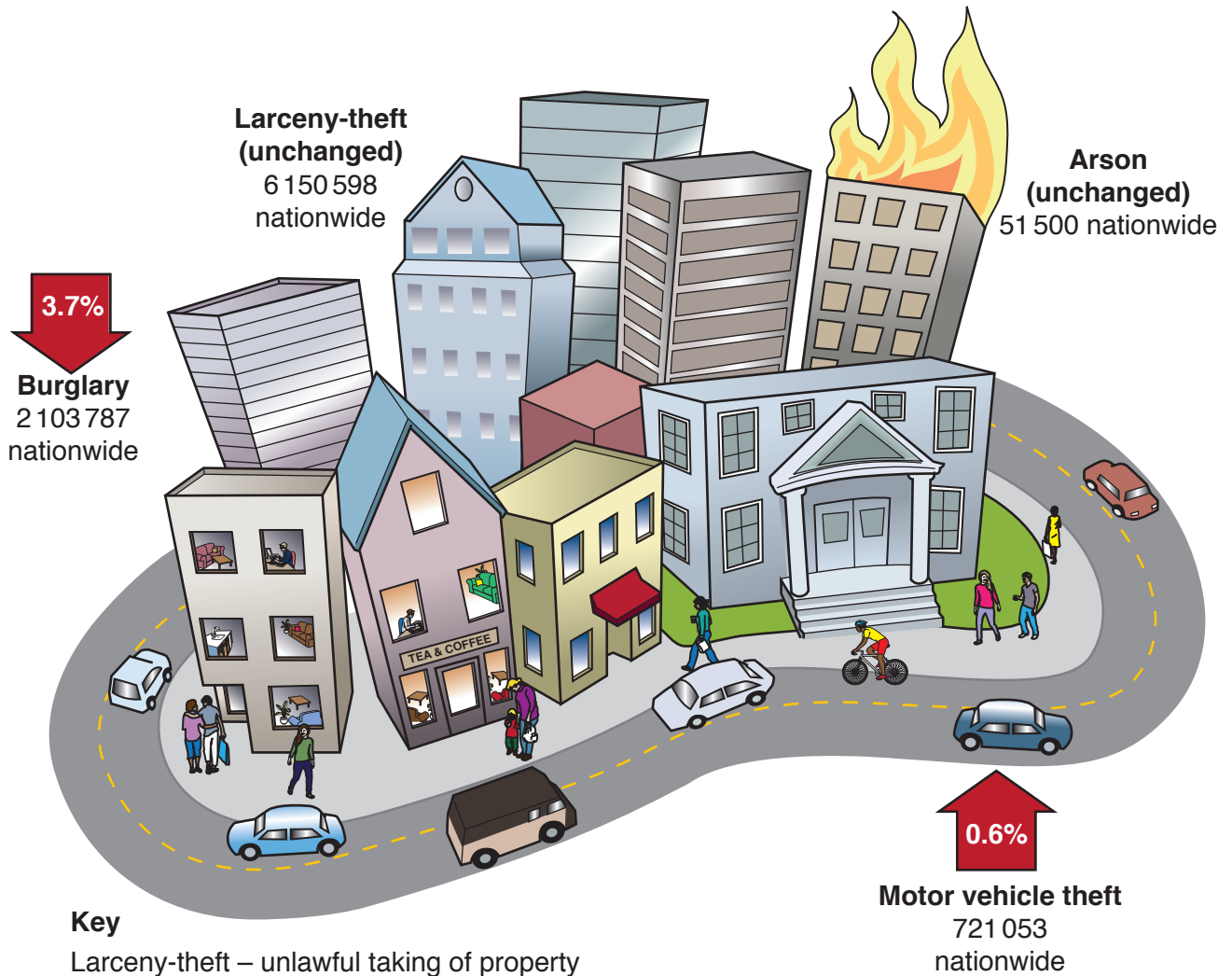


Fig. 3 for Question 4

Crimes against property in the USA for 2012



6

Fig. 4 for Question 5

Changes in life expectancy in 1990–2012 for a selection of world regions

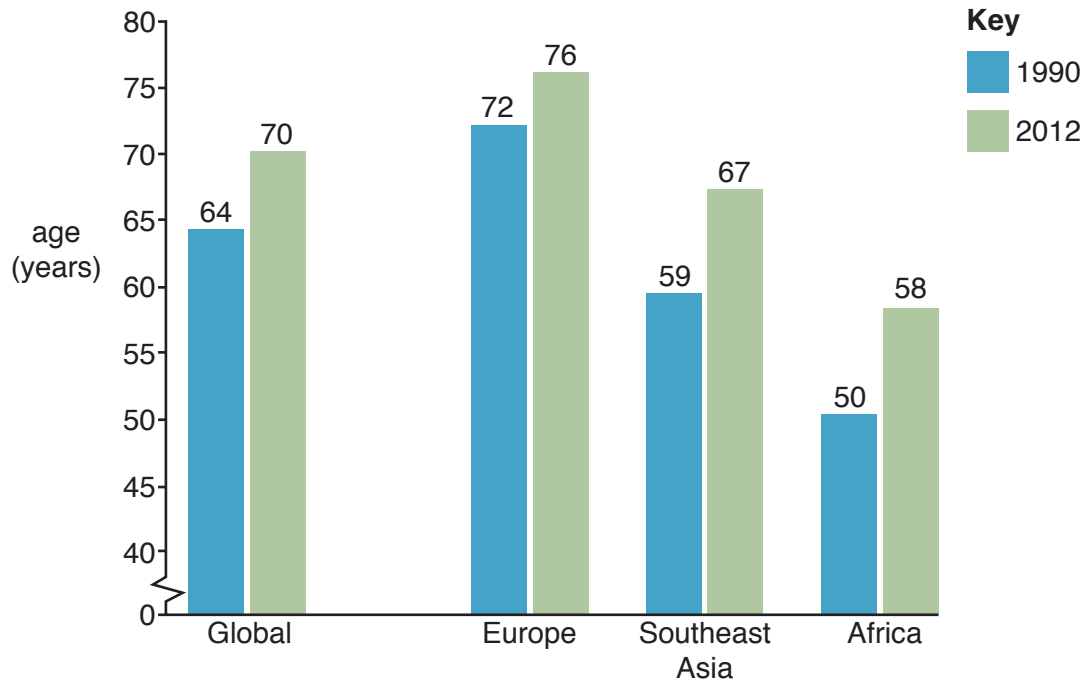
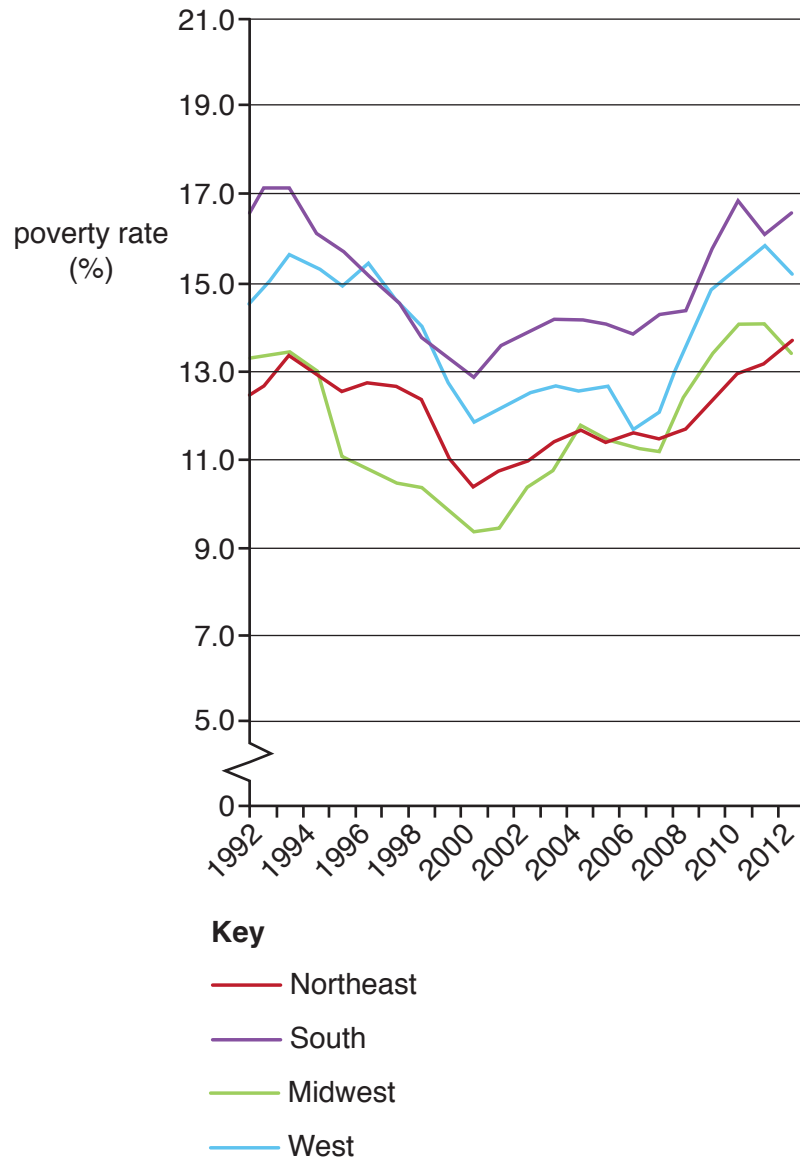


Fig. 5 for Question 6

## Poverty rates for selected regions of the USA between 1992 and 2012



**BLANK PAGE**

---

Permission to reproduce items where third-party owned material protected by copyright is included has been sought and cleared where possible. Every reasonable effort has been made by the publisher (UCLES) to trace copyright holders, but if any items requiring clearance have unwittingly been included, the publisher will be pleased to make amends at the earliest possible opportunity.

To avoid the issue of disclosure of answer-related information to candidates, all copyright acknowledgements are reproduced online in the Cambridge International Examinations Copyright Acknowledgements Booklet. This is produced for each series of examinations and is freely available to download at [www.cie.org.uk](http://www.cie.org.uk) after the live examination series.

Cambridge International Examinations is part of the Cambridge Assessment Group. Cambridge Assessment is the brand name of University of Cambridge Local Examinations Syndicate (UCLES), which is itself a department of the University of Cambridge.