



**Cambridge Assessment International Education**  
Cambridge Pre-U Certificate

---

**GEOGRAPHY (PRINCIPAL)**

**9768/01**

Paper 1 Global Environments

**May/June 2019**

INSERT

**1 hour 30 minutes**

---



**READ THESE INSTRUCTIONS FIRST**

This Insert contains all the Figures referred to in the questions.

---

This syllabus is regulated for use in England, Wales and Northern Ireland as a Cambridge International Level 3 Pre-U Certificate.

---

This document consists of **8** printed pages and **4** blank pages.

Fig. 1.1 for Question 1  
Landforms found in part of the southern Sahara Desert

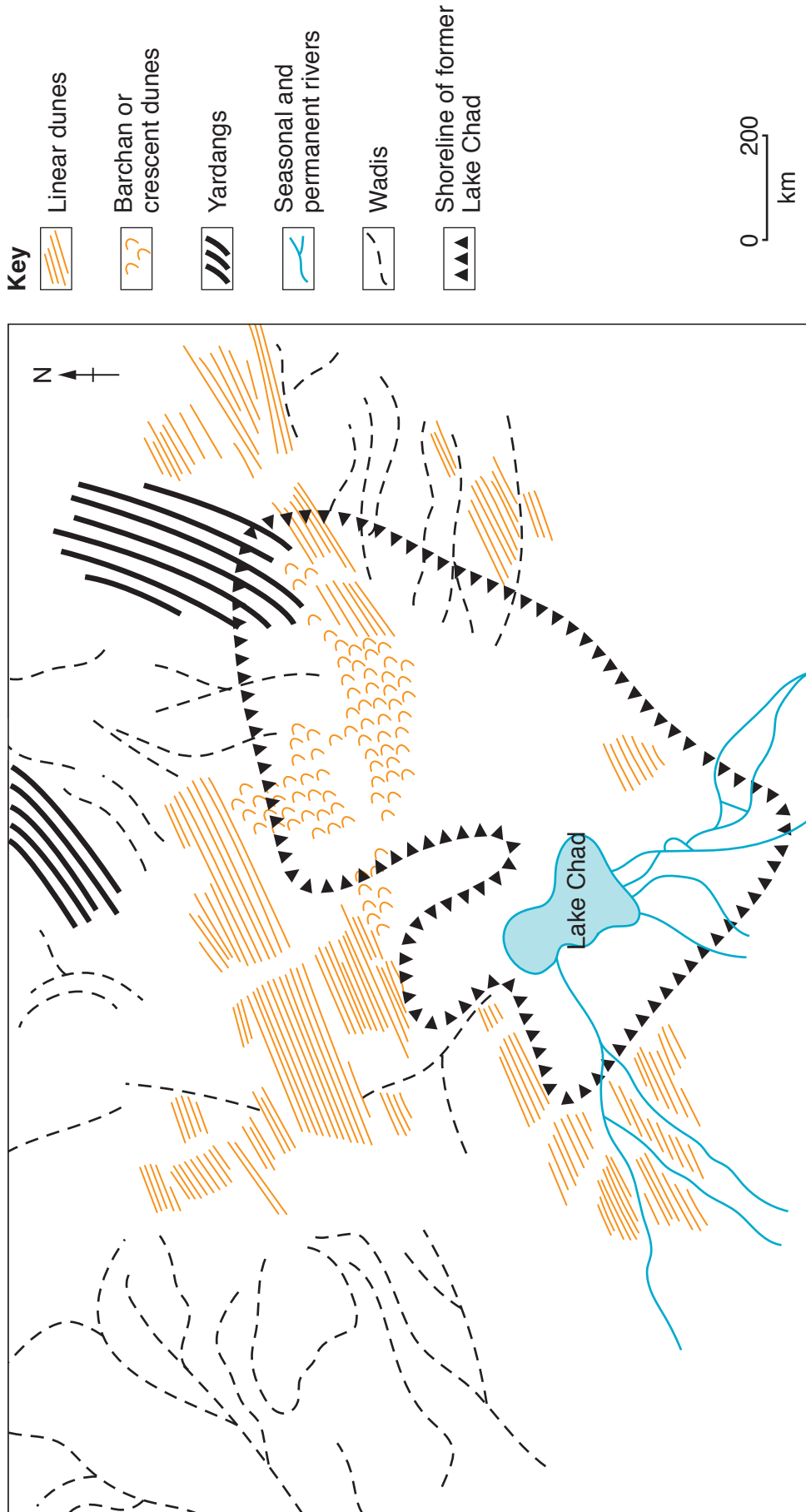
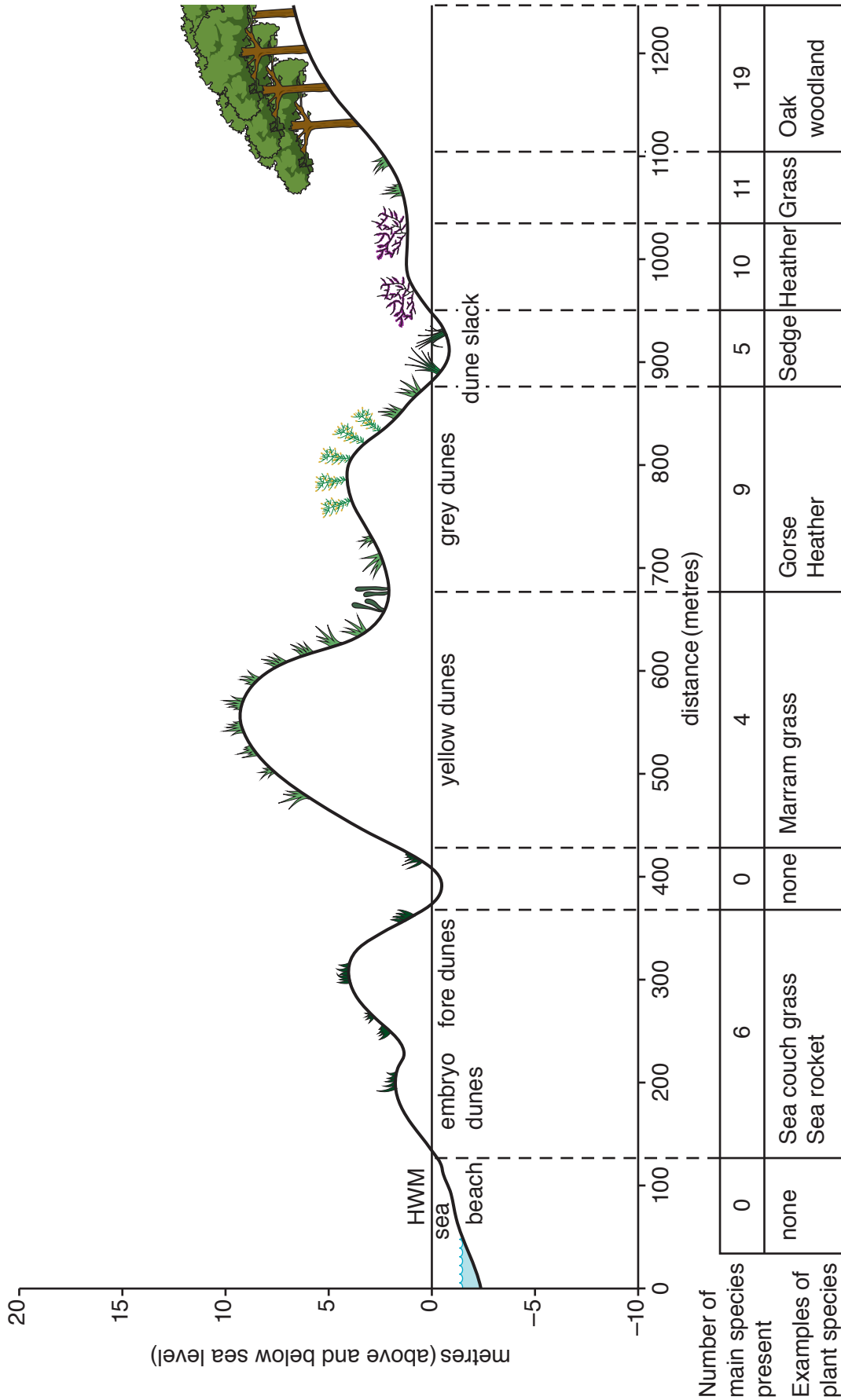


Fig. 2.1 for Question 2



**Fig. 3.1 for Question 3**  
**A profile of a sand dune ecosystem in the UK**



**Key**  
HWM High Water Mark



**BLANK PAGE**

Fig. 4.1 for Question 4





Fig. 4.2 for Question 4



Fig. 4.3 for Question 4





Fig. 5.1 for Question 5

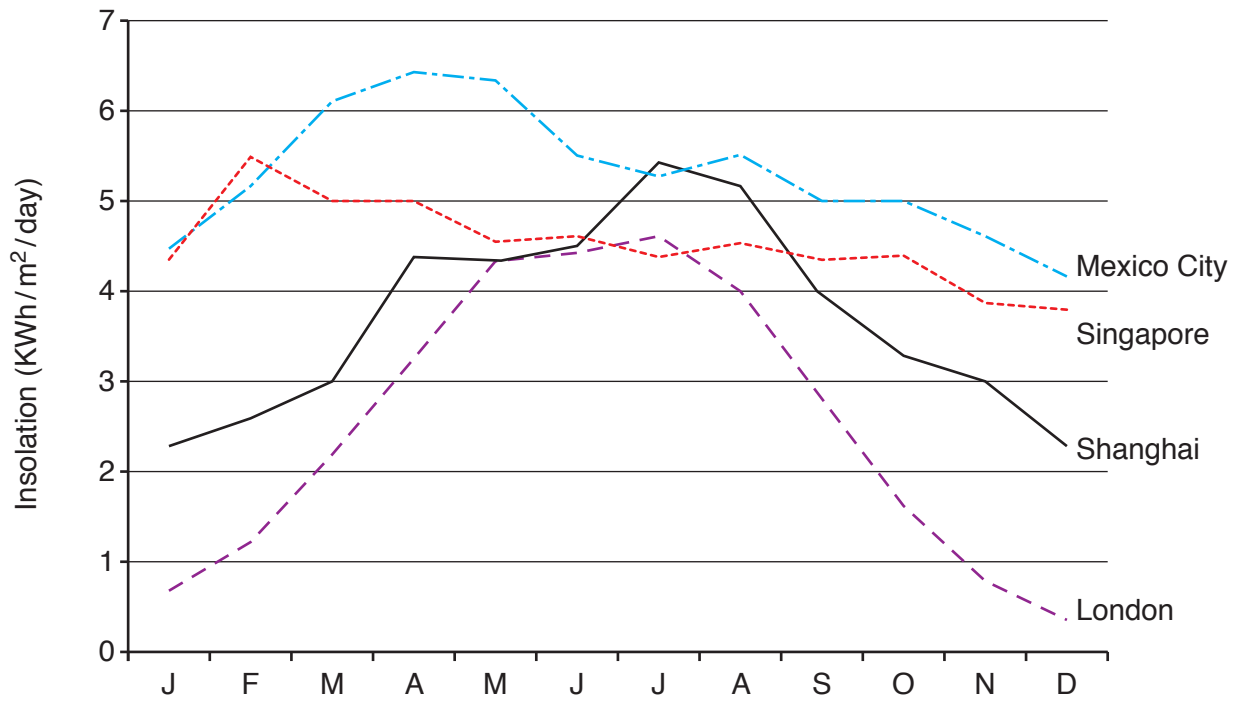


Fig. 5.2 for Question 5



Fig. 6.1 for Question 6

The relationship between average monthly insolation for four different cities at different latitudes



### Key

KWh = Kilowatt hours

----- Singapore 01°N

- - - - - Mexico City 19°N

———— Shanghai 31°N

- - - - - London 51°N







**BLANK PAGE**

---

Permission to reproduce items where third-party owned material protected by copyright is included has been sought and cleared where possible. Every reasonable effort has been made by the publisher (UCLES) to trace copyright holders, but if any items requiring clearance have unwittingly been included, the publisher will be pleased to make amends at the earliest possible opportunity.

To avoid the issue of disclosure of answer-related information to candidates, all copyright acknowledgements are reproduced online in the Cambridge Assessment International Education Copyright Acknowledgements Booklet. This is produced for each series of examinations and is freely available to download at [www.cambridgeinternational.org](http://www.cambridgeinternational.org) after the live examination series.

Cambridge Assessment International Education is part of the Cambridge Assessment Group. Cambridge Assessment is the brand name of the University of Cambridge Local Examinations Syndicate (UCLES), which itself is a department of the University of Cambridge.