



Rewarding Learning

ADVANCED SUBSIDIARY (AS)
General Certificate of Education
2017

Centre Number

--	--	--	--	--

Candidate Number

--	--	--	--

Mathematics

Assessment Unit M1

assessing

Module M1: Mechanics 1



[AMM11]

AMM11

WEDNESDAY 24 MAY, MORNING

TIME

1 hour 30 minutes.

INSTRUCTIONS TO CANDIDATES

Write your Centre Number and Candidate Number in the spaces provided at the top of this page.

You must answer **all seven** questions in the spaces provided.

Do not write outside the boxed area on each page or on blank pages.

Complete in black ink only. **Do not write with a gel pen.**

Questions which require drawing or sketching should be completed using an H.B. pencil.

All working should be clearly shown in the spaces provided. Marks may be awarded for partially correct solutions. **Answers without working may not gain full credit.**

Answers should be given to three significant figures unless otherwise stated.

You are permitted to use a graphic or scientific calculator in this paper.

INFORMATION FOR CANDIDATES

The total mark for this paper is 75

Figures in brackets printed down the right-hand side of pages indicate the marks awarded to each question or part question.

A copy of the **Mathematical Formulae and Tables booklet** is provided.

Throughout the paper the logarithmic notation used is $\ln z$ where it is noted that $\ln z \equiv \log_e z$

10441



24AMM1101

BLANK PAGE
DO NOT WRITE ON THIS PAGE

10441



24AMM1102

Take $g = 9.8 \text{ m s}^{-2}$, unless otherwise specified.

- 1** A rocket is launched from rest at ground level and moves vertically upwards. It rises 96 m in the first 4 seconds of its motion. Model the rocket as a particle moving with constant acceleration.

(i) Show that the acceleration of the rocket is 12 m s^{-2} [2]

[illegible]

[Turn over

10441



24AMM1103

The rocket burns out when it has reached a height of 96 m.
It can now be modelled as a particle moving vertically under gravity.

- (ii) Find the maximum height above the ground reached by the rocket. [5]

[illegible]

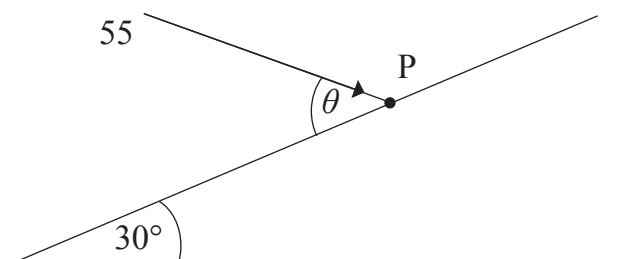
[3]

10441



24AMM1105

- (ii) Complete the diagram below to show the external forces acting on P. [2]



- [6]

This image shows a full page of white paper with horizontal dotted lines, typical of primary school writing paper. The lines are evenly spaced and run across the width of the page. There are no margins, text, or other markings on the paper.

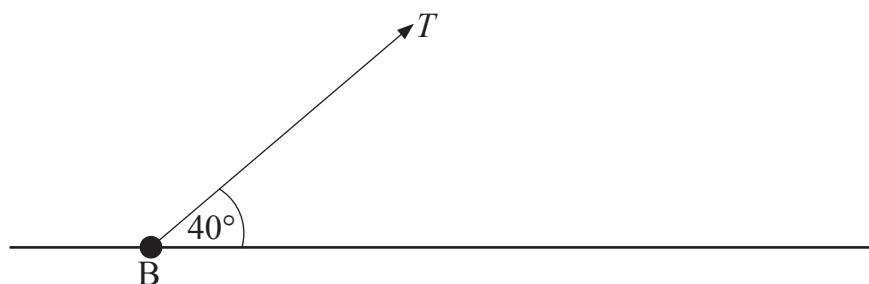
[illegible]

10441



24AMM1107

- (i) Complete the diagram below to show the external forces acting on the bead. [2]



(ii) Find μ . [7]

This image shows a full page of white paper with horizontal dotted lines, typical of primary school writing paper. The lines are evenly spaced and run across the width of the page. There are no margins, text, or other markings on the paper.

10441



24AMM1109

- 4 **Fig. 1** below shows a breakdown truck of mass 1700 kg towing a car of mass 800 kg along a straight horizontal road.



Fig. 1

The vehicles are joined by a light rigid horizontal tow bar.

The truck and the car experience constant resistances to motion of magnitude 700 N and 300 N respectively.

The truck's engine produces a constant horizontal force of magnitude 2000 N.

Model the car and the truck as particles.

- (i) Draw a diagram showing the external forces acting on the truck and on the car. [3]

- (ii) Find the common acceleration of the car and the truck and the tension in the tow bar. [5]

.....

.....

.....

.....

.....

.....





Handwriting practice lines consisting of 24 horizontal dotted lines.

[Turn over]

10441



24AMM1111

When the speed of the car is 8 m s^{-1} , the tow bar breaks.

Assume the resistance to the motion of the car remains as before.

- (iii) Find the distance moved by the car from the moment the tow bar breaks until the car comes to rest. [4]

This image shows a single sheet of white paper with horizontal ruling lines. The lines are evenly spaced and run across the width of the page. There are no margins, text, or other markings on the paper.

10441



24AMM1113

- 5** Fig. 2 below shows two particles P and Q moving on a smooth horizontal plane.



Fig. 2

The mass of P is $2m$ kg and the mass of Q is m kg.

The particles are moving along the same line but in opposite directions.

Immediately before they collide the speed of P is $2u \text{ ms}^{-1}$ and the speed of Q is $3u \text{ ms}^{-1}$

When the particles collide the magnitude of the impulse received by each particle is $3.5mu$ Ns.

- (i) Find, in terms of u , the speed of P immediately after the collision. [4]

[illegible]

[2]

[Turn over

10441



24AMM1115

6 In this question take $g = 10 \text{ m s}^{-2}$

Fig. 3 below shows a plank AB suspended by two vertical ropes attached to the plank at the points P and Q.




Fig. 3

The plank has length 3.2 m and mass 40 kg.

The distances $AP = BQ = 0.4 \text{ m}$.

To paint a wall, Peter, of mass 60 kg, stands on the plank at a point C between P and Q.

$PC = x$ metres.

The plank rests in equilibrium.

Model the plank as a uniform rod and Peter as a particle.

(i) State one modelling assumption you will make about the ropes. [1]

.....

(ii) Draw a diagram showing the external forces acting on the plank. [2]



[7]

10441



24AMM1117

[3]



24AMM1118


- $$v = \begin{cases} 5t & 0 \leq t < 1 \\ t + \frac{4}{t^2} & 1 \leq t \leq 3 \\ 3\frac{4}{9} & t > 3 \end{cases}$$

-
- This image shows a full page of white paper with horizontal dotted lines. The lines are evenly spaced and run across the width of the page, providing a guide for handwriting practice. There are no margins, text, or other markings on the page.

10441



- (ii)** On the axes below sketch the velocity–time graph to show the motion of P in the interval $0 \leq t \leq 6$ [3]



- (iii)** Find the distance travelled by P in the interval $0 \leq t \leq 6$ [8]

[illegible]

THIS IS THE END OF THE QUESTION PAPER



24AMM1121

BLANK PAGE
DO NOT WRITE ON THIS PAGE

10441



24AMM1122

BLANK PAGE

DO NOT WRITE ON THIS PAGE

10441



24AMM1123

DO NOT WRITE ON THIS PAGE

For Examiner's use only	
Question Number	Marks
1	
2	
3	
4	
5	
6	
7	

Total Marks	
--------------------	--

Examiner Number

Permission to reproduce all copyright material has been applied for.
In some cases, efforts to contact copyright holders may have been unsuccessful and CCEA will be happy to rectify any omissions of acknowledgement in future if notified.

10441/7



24AMM1124