



Rewarding Learning

General Certificate of Secondary Education
2019

Centre Number

--	--	--	--	--

Candidate Number

--	--	--	--

Further Mathematics

Unit 3
Statistics



[GFM31]

GFM31

FRIDAY 21 JUNE, AFTERNOON

TIME

1 hour.

INSTRUCTIONS TO CANDIDATES

Write your Centre Number and Candidate Number in the spaces provided at the top of this page.

You must answer the questions in the spaces provided.

Do not write outside the boxed area on each page.

Complete in black ink only. **Do not write with a gel pen.**

All working **must** be clearly shown in the spaces provided. Marks may be awarded for partially correct solutions.

Where rounding is necessary give answers correct to **2 decimal places** unless stated otherwise.

Answer **all seven** questions.

INFORMATION FOR CANDIDATES

The total mark for this paper is 50.

Figures in brackets printed down the right-hand side of pages indicate the marks awarded to each question or part question.

You may use a calculator.

The Formula Sheet is on page 2 and the Normal Probability Table is on page 3.

11901



20GFM3101

FORMULA SHEET

STATISTICS

Statistical measures: Mean = $\frac{\Sigma fx}{\Sigma f}$

$$\text{Standard deviation} = \sqrt{\frac{\Sigma fx^2}{\Sigma f} - (\bar{x})^2}$$

where \bar{x} is the mean

Probability: $P(A \cup B) = P(A) + P(B) - P(A \cap B)$

$$P(A | B) = \frac{P(A \cap B)}{P(B)}$$

Bivariate Analysis: Spearman's coefficient of rank correlation is given by

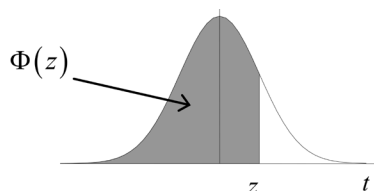
$$r = 1 - \frac{6 \Sigma d^2}{n(n^2 - 1)}$$



NORMAL PROBABILITY TABLE

Table of $\Phi(z)$

Z	0.00	0.01	0.02	0.03	0.04	0.05	0.06	0.07	0.08	0.09
0.0	0.5000	0.5040	0.5080	0.5120	0.5160	0.5199	0.5239	0.5279	0.5319	0.5359
0.1	0.5398	0.5438	0.5478	0.5517	0.5557	0.5596	0.5636	0.5675	0.5714	0.5753
0.2	0.5793	0.5832	0.5871	0.5910	0.5948	0.5987	0.6026	0.6064	0.6103	0.6141
0.3	0.6179	0.6217	0.6255	0.6293	0.6331	0.6368	0.6406	0.6443	0.6480	0.6517
0.4	0.6554	0.6591	0.6628	0.6664	0.6700	0.6736	0.6772	0.6808	0.6844	0.6879
0.5	0.6915	0.6950	0.6985	0.7019	0.7054	0.7088	0.7123	0.7157	0.7190	0.7224
0.6	0.7257	0.7291	0.7324	0.7357	0.7389	0.7422	0.7454	0.7486	0.7517	0.7549
0.7	0.7580	0.7611	0.7642	0.7673	0.7704	0.7734	0.7764	0.7794	0.7823	0.7852
0.8	0.7881	0.7910	0.7939	0.7967	0.7995	0.8023	0.8051	0.8078	0.8106	0.8133
0.9	0.8159	0.8186	0.8212	0.8238	0.8264	0.8289	0.8315	0.8340	0.8365	0.8389
1.0	0.8413	0.8438	0.8461	0.8485	0.8508	0.8531	0.8554	0.8577	0.8599	0.8621
1.1	0.8643	0.8665	0.8686	0.8708	0.8729	0.8749	0.8770	0.8790	0.8810	0.8830
1.2	0.8849	0.8869	0.8888	0.8907	0.8925	0.8944	0.8962	0.8980	0.8997	0.9015
1.3	0.9032	0.9049	0.9066	0.9082	0.9099	0.9115	0.9131	0.9147	0.9162	0.9177
1.4	0.9192	0.9207	0.9222	0.9236	0.9251	0.9265	0.9279	0.9292	0.9306	0.9319
1.5	0.9332	0.9345	0.9357	0.9370	0.9382	0.9394	0.9406	0.9418	0.9429	0.9441
1.6	0.9452	0.9463	0.9474	0.9484	0.9495	0.9505	0.9515	0.9525	0.9535	0.9545
1.7	0.9554	0.9564	0.9573	0.9582	0.9591	0.9599	0.9608	0.9616	0.9625	0.9633
1.8	0.9641	0.9649	0.9656	0.9664	0.9671	0.9678	0.9686	0.9693	0.9699	0.9706
1.9	0.9713	0.9719	0.9726	0.9732	0.9738	0.9744	0.9750	0.9756	0.9761	0.9767
2.0	0.9772	0.9778	0.9783	0.9788	0.9793	0.9798	0.9803	0.9808	0.9812	0.9817
2.1	0.9821	0.9826	0.9830	0.9834	0.9838	0.9842	0.9846	0.9850	0.9854	0.9857
2.2	0.9861	0.9864	0.9868	0.9871	0.9875	0.9878	0.9881	0.9884	0.9887	0.9890
2.3	0.9893	0.9896	0.9898	0.9901	0.9904	0.9906	0.9909	0.9911	0.9913	0.9916
2.4	0.9918	0.9920	0.9922	0.9925	0.9927	0.9929	0.9931	0.9932	0.9934	0.9936
2.5	0.9938	0.9940	0.9941	0.9943	0.9945	0.9946	0.9948	0.9949	0.9951	0.9952
2.6	0.9953	0.9955	0.9956	0.9957	0.9959	0.9960	0.9961	0.9962	0.9963	0.9964
2.7	0.9965	0.9966	0.9967	0.9968	0.9969	0.9970	0.9971	0.9972	0.9973	0.9974
2.8	0.9974	0.9975	0.9976	0.9977	0.9977	0.9978	0.9979	0.9979	0.9980	0.9981
2.9	0.9981	0.9982	0.9982	0.9983	0.9984	0.9984	0.9985	0.9985	0.9986	0.9986
3.0	0.9987	0.9987	0.9987	0.9988	0.9988	0.9989	0.9989	0.9989	0.9990	0.9990



[Turn over]



- 1 A solicitor recorded the times, to the nearest minute, spent with clients. The table below shows a summary of the times.

Time (minutes)	Frequency			
10–14	8			
15–19	16			
20–24	34			
25–29	27			
30–34	10			
35–39	5			

- (i) Calculate an estimate of the mean time. You **must** show your working.

Answer _____ minutes [2]



- (ii) Calculate an estimate of the standard deviation of the times. You **must** show your working.

Answer _____ minutes [3]



- 2 Rebekah takes 2 beads at random, without replacement, from a bag containing 6 blue and 4 green beads.

(i) What is the probability that both beads are the same colour?

Answer _____ [2]

Rebekah takes a third bead from the remaining 8 beads in the bag.

(ii) What is the probability that all 3 beads are the same colour?

Answer _____ [2]



- (iii) Given that the first two beads are the same colour, what is the probability that the third bead is also the same colour as the first two?

Answer _____ [2]



- 3 Two boys and twelve girls sat a piano examination.
- One boy scored 95% and the other boy scored 76%.
- The mean of the girls' results was 82%.
- The standard deviation of the girls' results was 6%.
- (i) Calculate the mean of all 14 results.

Answer _____ % [2]



(ii) Calculate the standard deviation of all 14 results.

Answer _____ % [4]

[Turn over



- 4 (a) Using Pascal's triangle, write out the expansion of $(p + q)^6$

Answer _____ [2]



(b) A bag contains a large number of red pens and black pens.

The probability that a pen, chosen at random from the bag, is black is $\frac{4}{5}$.

Jill picks 6 pens, chosen at random, from the bag.

Find the probability that

(i) none of the pens is red,

Answer _____ [3]

(ii) at least 2 of the pens are red.

Answer _____ [3]

[Turn over]



- 5 A farmer sold a large number of eggs.

The weights of the eggs were normally distributed with mean 56.84 g and standard deviation 5.6 g.

Eggs weighing over 63 g were graded as large.

Find the probability that an egg, chosen at random, was graded as large.

Answer _____ [4]



BLANK PAGE

DO NOT WRITE ON THIS PAGE

(Questions continue overleaf)

[Turn over]

11901



20GFM3113

- 6 A café recorded the number of hot soups sold and the temperature outside at lunchtime on nine particular days. The results are shown in the table below.

Temperature (°C)	3	5	20	17	10	9	13	15	12
Hot soups sold	106	98	20	38	68	80	55	44	68
Ranks (Temperature)									
Ranks (Hot soups sold)									

- (i) Write down, in the table above, the rank orders for the temperatures and the numbers of hot soups sold. [2]

- (ii) Calculate Spearman's coefficient of rank correlation.

Answer _____ [4]



(iii) Interpret your answer to part (ii).

Answer _____ [1]

(iv) Calculate the mean temperature and the mean number of hot soups sold.

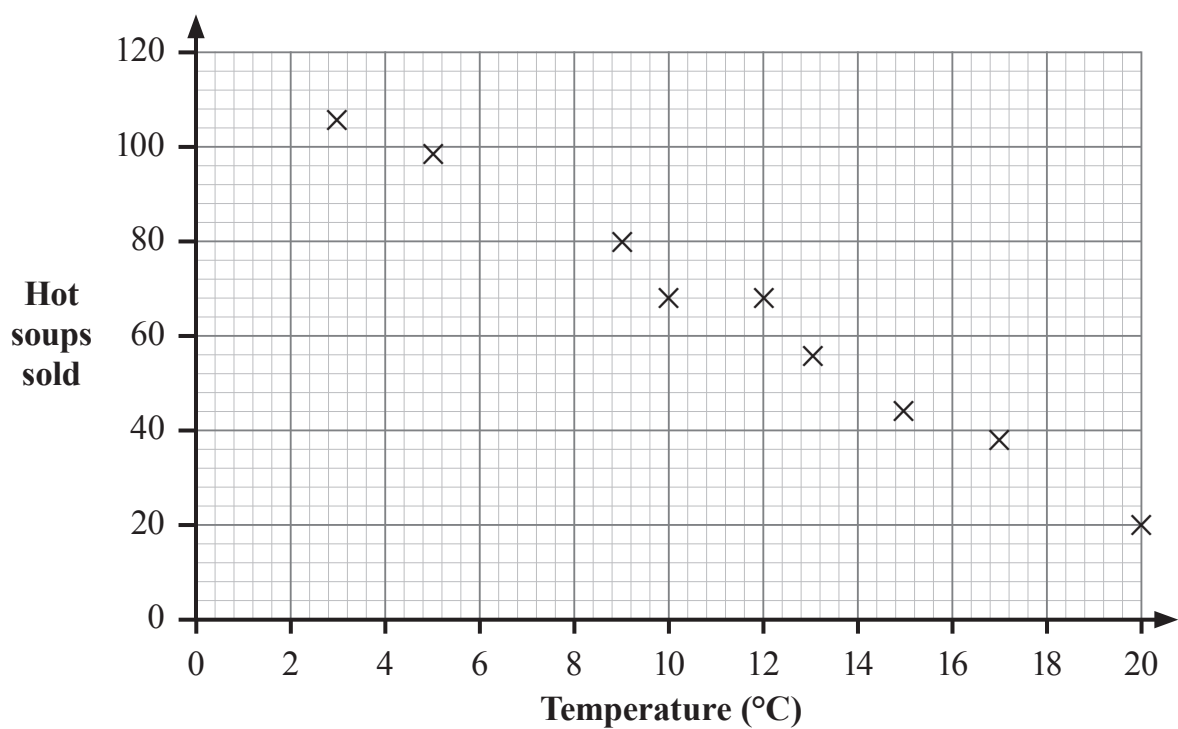
Answer Mean temperature _____ °C

Mean number of hot soups sold _____ [1]

[Turn over]



The data from the table are plotted on the graph below.



(v) Draw your line of best fit on the graph.

[2]



(vi) Determine the equation of the line of best fit which you have drawn.

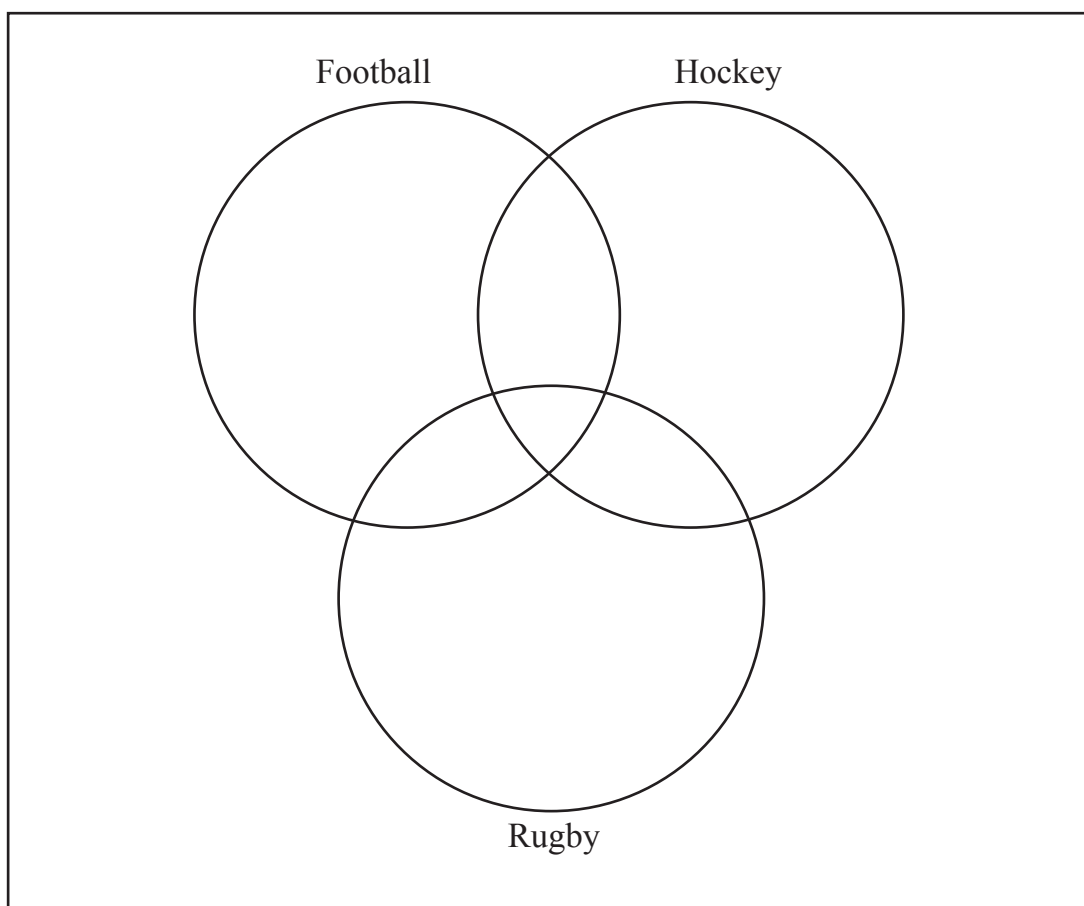
Answer _____ [3]



- 7 At Eastwood Boys Comprehensive, 120 new pupils were allowed to sign up for three after school sports activities – football, hockey and rugby.

Each pupil signed up for **at least** one activity.

17 chose football only
12 chose hockey only
30 chose rugby only
25 chose all three activities
39 did not choose rugby



- (i) Using the Venn diagram opposite, find the probability that a new pupil, selected at random, chose both football and hockey.

Answer _____ [5]

- (ii) Calculate the probability that a new pupil, chosen at random, chose exactly two activities.

Answer _____ [3]

THIS IS THE END OF THE QUESTION PAPER



DO NOT WRITE ON THIS PAGE

For Examiner's use only	
Question Number	Marks
1	
2	
3	
4	
5	
6	
7	

Total Marks	
------------------------	--

Examiner Number

Permission to reproduce all copyright material has been applied for.
In some cases, efforts to contact copyright holders may have been unsuccessful and CCEA
will be happy to rectify any omissions of acknowledgement in future if notified.

11901/4



20GFM3120