



General Certificate of Secondary Education
January 2017

Centre Number

--	--	--	--	--

Candidate Number

--	--	--	--

Mathematics

Unit T6 Paper 2
(With calculator)

Higher Tier



[GMT62]

GMT62

WEDNESDAY 11 JANUARY, 10.45am–12 noon

TIME

1 hour 15 minutes.

INSTRUCTIONS TO CANDIDATES

Write your Centre Number and Candidate Number in the spaces provided at the top of this page.

You must answer the questions in the spaces provided.

Do not write outside the boxed area on each page, on blank pages or tracing paper.

Complete in black ink only. **Do not write with a gel pen.**

Answer **all sixteen** questions.

All working should be clearly shown in the spaces provided. Marks may be awarded for partially correct solutions.

You **may** use a calculator for this paper.

INFORMATION FOR CANDIDATES

The total mark for this paper is 50.

Figures in brackets printed down the right-hand side of pages indicate the marks awarded to each question or part question.

Functional Elements will be assessed in this paper.

Quality of written communication will be assessed in Question 6.

You should have a calculator, ruler, compasses and a protractor.

The Formula Sheet is on page 2.

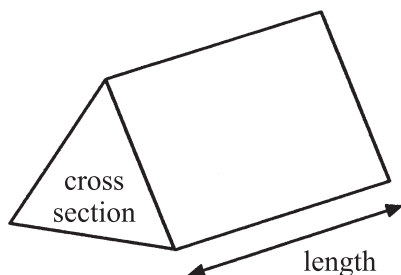
10417



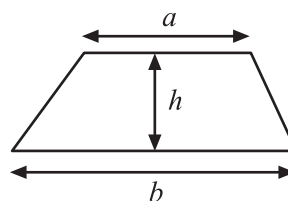
16GMT6201

Formula Sheet

Volume of prism = area of cross section \times length

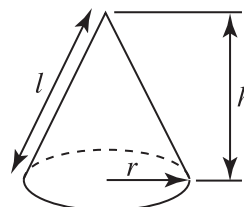


Area of trapezium = $\frac{1}{2}(a+b)h$



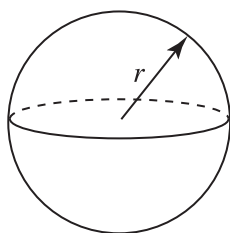
Volume of cone = $\frac{1}{3}\pi r^2 h$

Curved surface area of cone = $\pi r l$

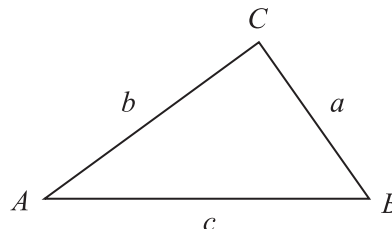


Volume of sphere = $\frac{4}{3}\pi r^3$

Surface area of sphere = $4\pi r^2$



In any triangle ABC



Quadratic Equation

The solutions of $ax^2 + bx + c = 0$
where $a \neq 0$, are given by

$$x = \frac{-b \pm \sqrt{b^2 - 4ac}}{2a}$$

Sine Rule: $\frac{a}{\sin A} = \frac{b}{\sin B} = \frac{c}{\sin C}$

Cosine Rule: $a^2 = b^2 + c^2 - 2bc \cos A$

Area of triangle = $\frac{1}{2} ab \sin C$



1 A train journey from Belfast to Dublin takes 2 hours and 15 minutes.

The distance travelled by the train is 144 kilometres.

Work out the average speed of the train in kilometres per hour.

Answer _____ km/h [2]



- 2 A bag contains a number of counters.

They are either red, green, black or white.

In the bag the number of black counters is the same as the number of white counters.

The table shows some of the probabilities of taking a counter at random from the bag.

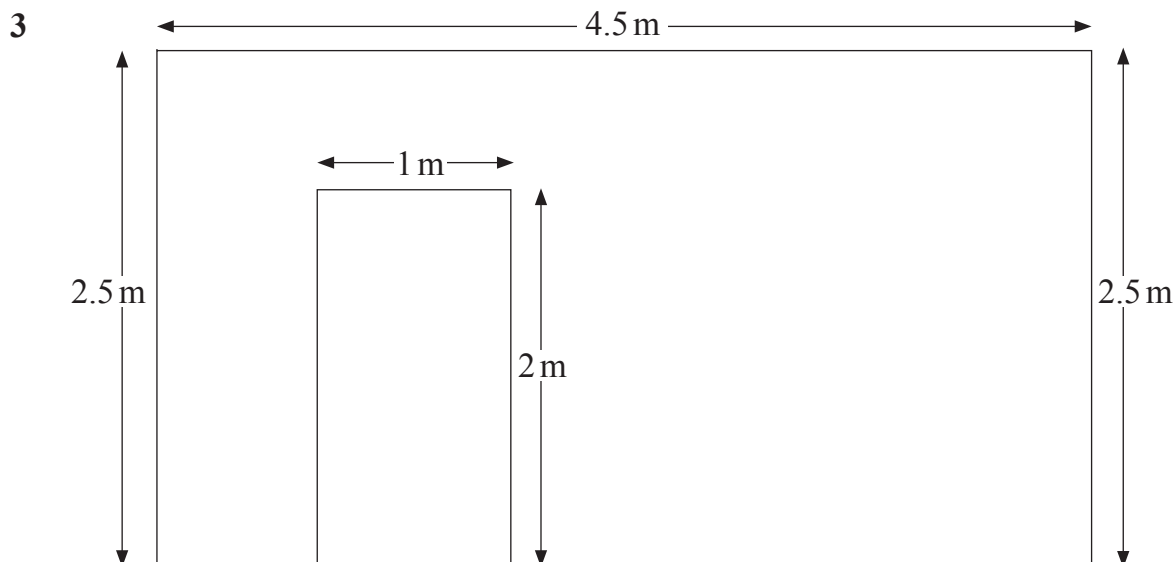
Colour	red	green	black	white
Probability	0.3	0.4		

Teresa takes a counter at random from the bag.

What is the probability that Teresa takes a white counter?

Answer _____ [2]





The diagram above represents a wall with an open entrance.

All the lines are either horizontal or vertical.

(a) Work out the perimeter.

Answer _____ m [1]

(b) Work out the area.

Answer _____ m² [2]

[Turn over]



- 4 Heather has an annual salary of £32 000

The first £10 800 is tax free.

She pays income tax at a rate of 20%.

How much of her salary is left after paying her tax?

Answer £ _____ [3]

- 5 The angles in a quadrilateral are 120° , A° , B° and C° .

The angles A, B and C are in ratio 3 : 5 : 4

Calculate the size of the angle B.

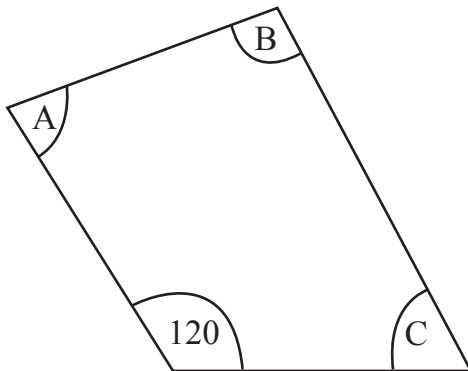


Diagram not drawn
to scale

Answer Angle B = _____ $^\circ$ [3]



Quality of written communication will be assessed in this question.

6

CHOCOLATE ICE CREAM

250 g Dark Chocolate

100 g Butter

120 g Caster Sugar

150 ml Water

3 Eggs

500 ml Double Cream

This ice cream recipe will serve 4 people.

(a) How much caster sugar is needed in a recipe for 7 people?

Answer _____ g [2]

(b) Liz has 13 eggs and needs to make chocolate ice cream for 17 people.

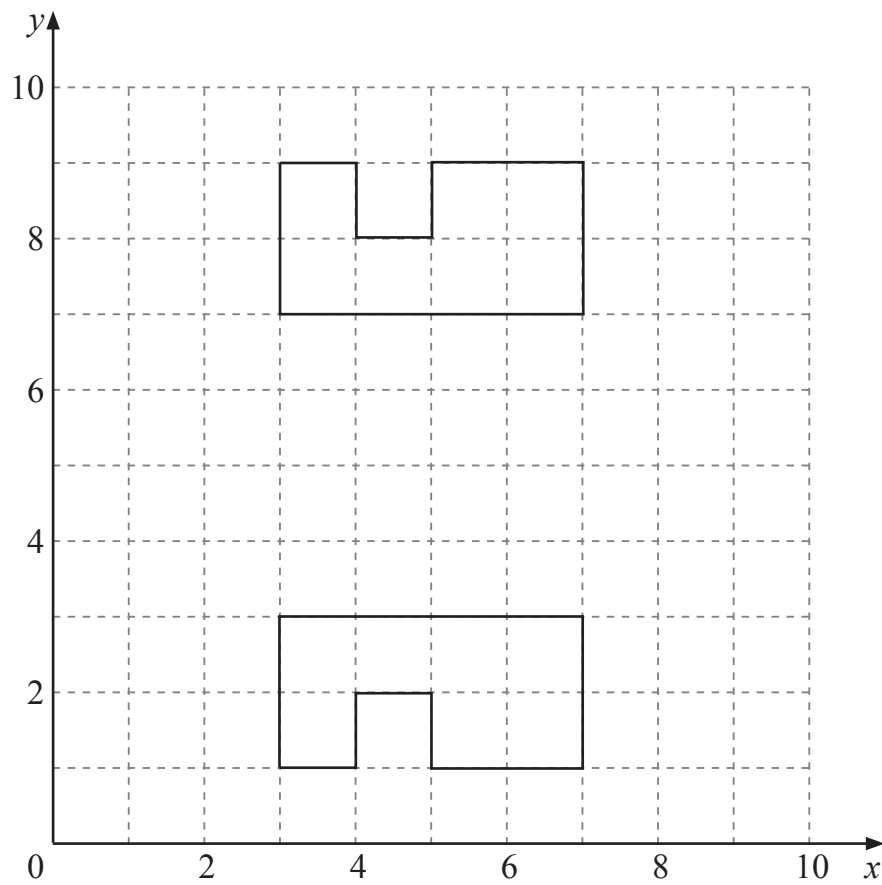
Does she have enough eggs? Explain your answer.

[2]

[Turn over]



- 7 (a) The diagram shows two identical shapes.

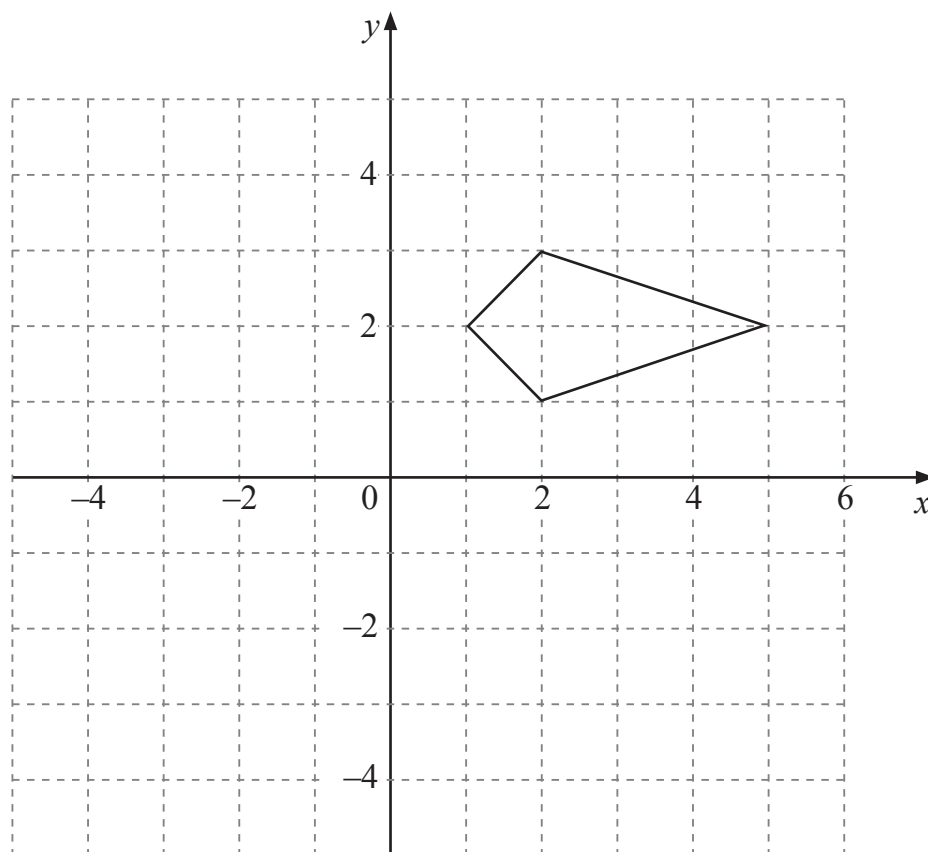


Describe fully the single transformation which maps one shape onto the other.

Answer _____ [2]



(b)



Rotate the shape 90° clockwise about the point $(0, 4)$.

[2]

[Turn over]



- 8 Mark has 16 blue and 12 green marbles in a bag.

What is the smallest number of blue and green marbles he must take out of the bag to make the probability of getting a blue marble at random equal to $\frac{3}{5}$?

Answer _____ blue and _____ green [2]

- 9 Simplify $4x^3y^5 \times 3x^2y$

Answer _____ [2]



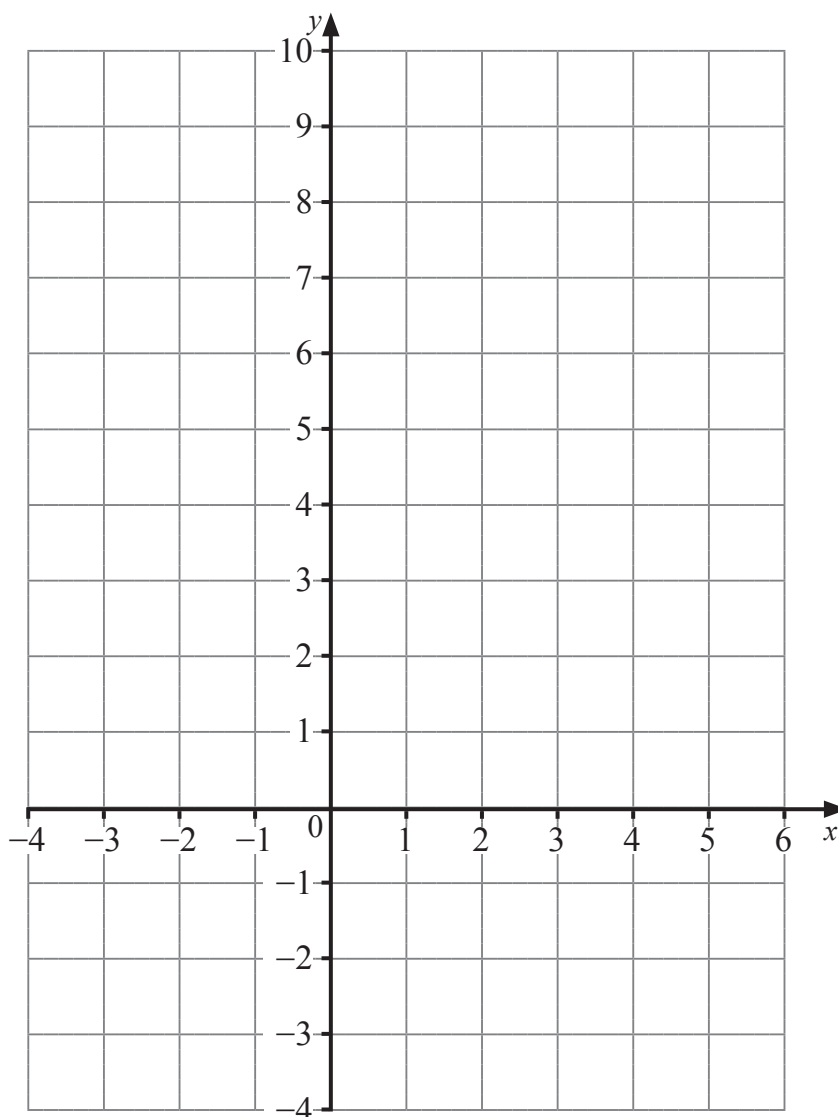
10 Part of the table for the graph of $y = x^2 - 2x - 1$ is shown below.

(a) Fill in the blanks in the table.

x	-2	-1	0	1	2	3	4
y	7			-2		2	7

[2]

(b) Use the values from the table to draw the graph of $y = x^2 - 2x - 1$ for $-2 \leq x \leq 4$



[2]

[Turn over]

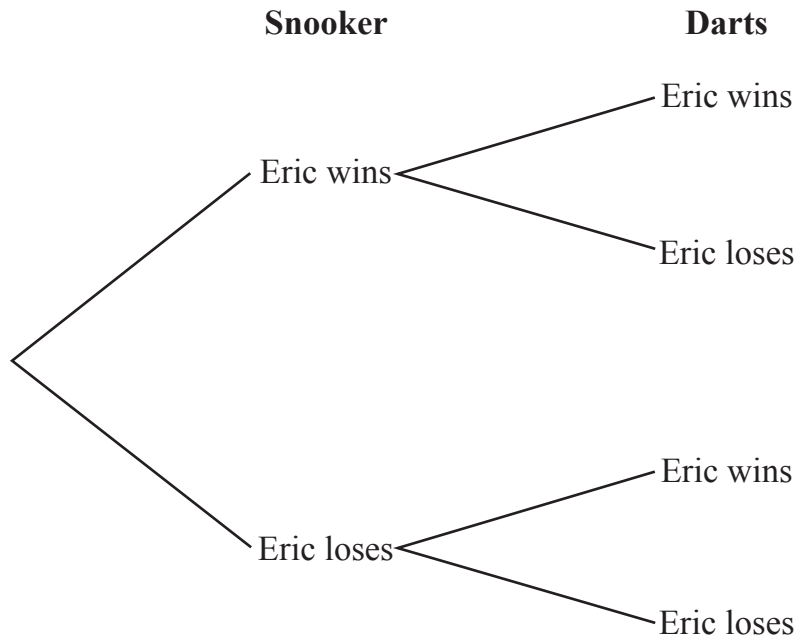


11 Eric is going to play one game of snooker and one game of darts.

He has a 30% chance of winning the game of snooker.

He has a 60% chance of losing the game of darts.

(a) Complete the probability tree diagram below.



[3]

(b) Work out the probability that Eric wins just one of the games that he plays.

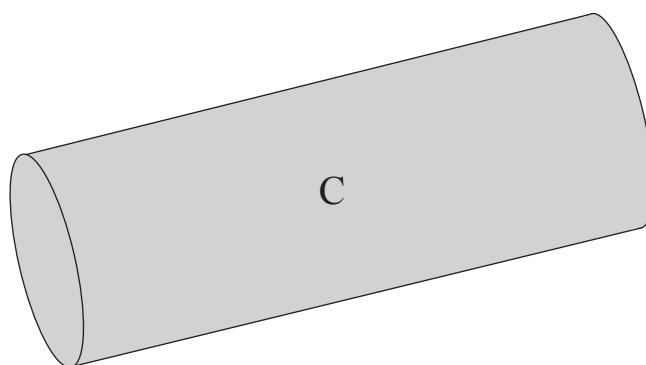
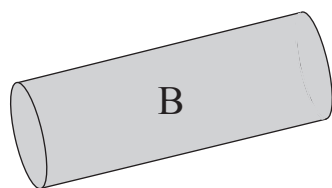
Answer _____ [2]



12 Solve the inequality $5x + 4 \leq 7x - 5$

Answer _____ [2]

13



B and C are two mathematically similar cylinders.

The area of the cross section of B is $14\pi \text{ cm}^2$

The area of the cross section of C is $56\pi \text{ cm}^2$

B has a volume of 580 cm^3

Work out the volume of C.

Answer _____ cm^3 [3]

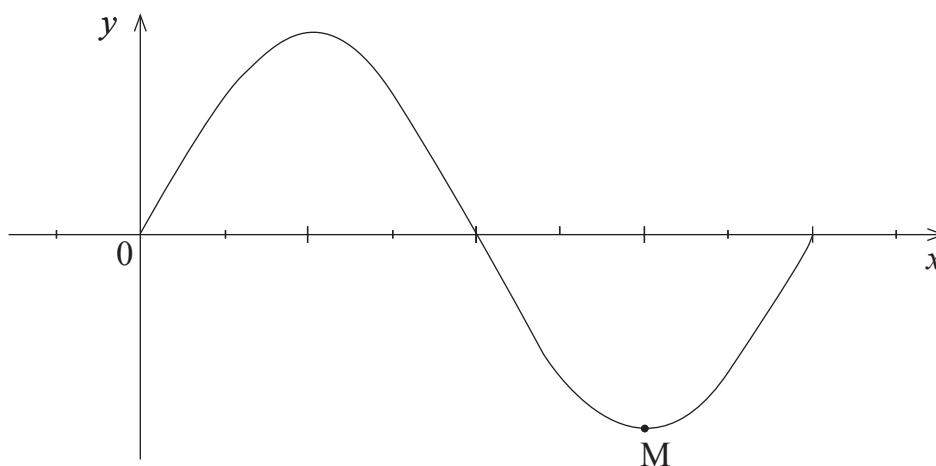
[Turn over]



14 Make n the subject of the formula $H = \frac{5 - 2n}{6 + n}$

Answer _____ [4]

15 The diagram shows a sketch of the graph of $y = \sin x$



(a) Write down the coordinates of the point M.

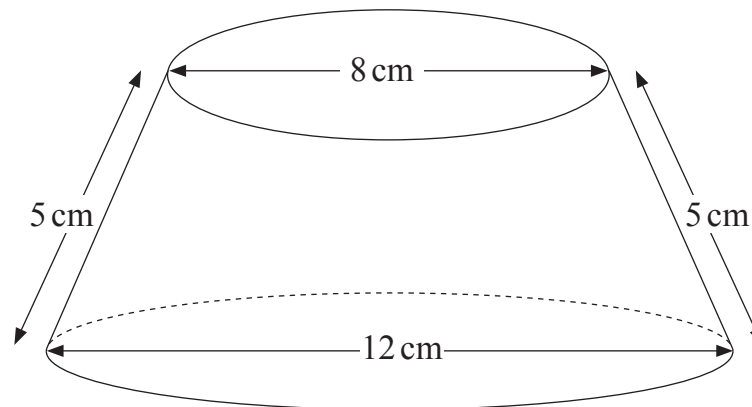
Answer _____ [1]

(b) On the same diagram, draw a sketch of the graph of $y = \cos x$ [1]



16 The frustum of the cone shown below has slant height 5 cm.

The diameter of the base is 12 cm and the diameter of the top is 8 cm.



Work out the volume of the frustum shown.

Answer _____ cm^3 [5]



THIS IS THE END OF THE QUESTION PAPER

DO NOT WRITE ON THIS PAGE

For Examiner's use only	
Question Number	Marks
1	
2	
3	
4	
5	
6	
7	
8	
9	
10	
11	
12	
13	
14	
15	
16	

Total Marks	
--------------------	--

Examiner Number

Permission to reproduce all copyright material has been applied for.
In some cases, efforts to contact copyright holders may have been unsuccessful and CCEA will be happy to rectify any omissions of acknowledgement in future if notified.

