



General Certificate of Secondary Education
2016–2017

Centre Number

--	--	--	--	--

Candidate Number

--	--	--	--

Double Award Science: Physics

Unit P1
Higher Tier

[GSD32]

FRIDAY 11 NOVEMBER 2016, AFTERNOON



TIME

1 hour.

INSTRUCTIONS TO CANDIDATES

Write your Centre Number and Candidate Number in the spaces provided at the top of this page.

Write your answers in the spaces provided in this question paper.
Answer **all nine** questions.

INFORMATION FOR CANDIDATES

The total mark for this paper is 70.

Figures in brackets printed down the right-hand side of pages indicate the marks awarded to each question or part question.

Quality of written communication will be assessed in Questions **1** and **6**.

For Examiner's use only	
Question Number	Marks
1	
2	
3	
4	
5	
6	
7	
8	
9	
Total Marks	

BLANK PAGE

- 2 (a) Explain why atoms are electrically neutral.

[1]

- (b) Complete the table below to show the relative masses and charges of the particles that make up an atom.

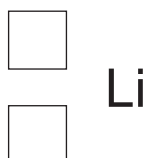
Particle	Relative mass	Relative charge
	1	+1
Neutron		
Electron	$\frac{1}{1840}$	

[4]

- (c) Explain in terms of nuclear particles the meaning of the term **isotope**.

[2]

- (d) The lithium nucleus contains three protons and four neutrons. Complete the symbol below for the lithium nucleus.



[2]

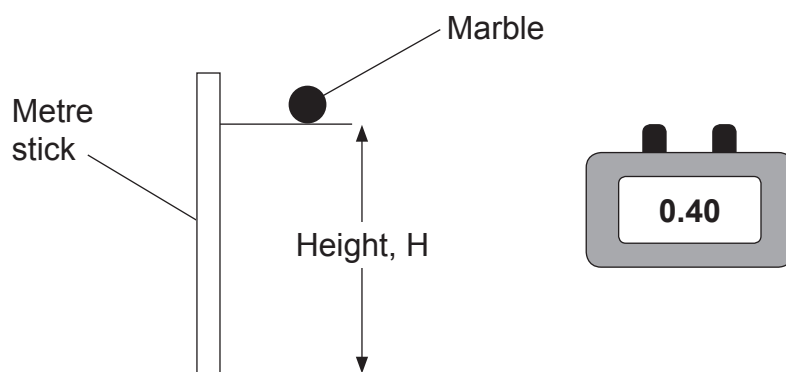
- (e) Another atom has the same number of neutrons but a different number of protons.
Tick (✓) the box to show what this other atom is.

- ☐ An isotope of lithium
- ☐ An ion
- ☐ Another element

[1]

Examiner Only	
Marks	Remark
<div style="border: 1px solid black; width: 40px; height: 40px; margin: 0 auto;"></div>	<div style="border: 1px solid black; width: 40px; height: 40px; margin: 0 auto;"></div>

- 3 The acceleration due to gravity can be measured by finding the times, T , for a marble to fall through various heights, H , above the Earth's surface.



Source: Chief Examiner

According to theory, the relationship between the height, H and the time T , is given by:

$$H = k T^2 \quad \text{Equation 3.1}$$

The following data was obtained.

Height/m	0.2	0.4	0.6	0.8	1.0
T^2/s^2	0.04	0.08	0.12	0.16	0.20

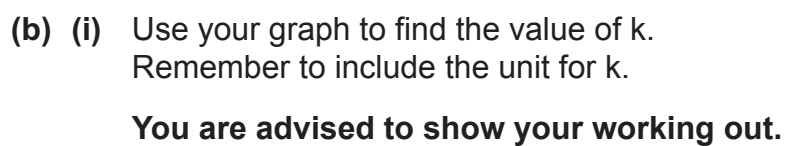
- (a) On the grid opposite, draw a graph of height H on the vertical axis versus T^2 on the horizontal axis.

(i) Label the vertical axis and insert the appropriate scale. [2]

(ii) Plot the points. [2]

(iii) Draw a line of best fit. [1]

Examiner Only	
Marks	Remark

Unit of $k = \underline{\hspace{2cm}}$ [1]

[2]





A cheetah is **travelling** at a constant velocity when it spots its prey. It then accelerates at 8 m/s^2 for 3 seconds.

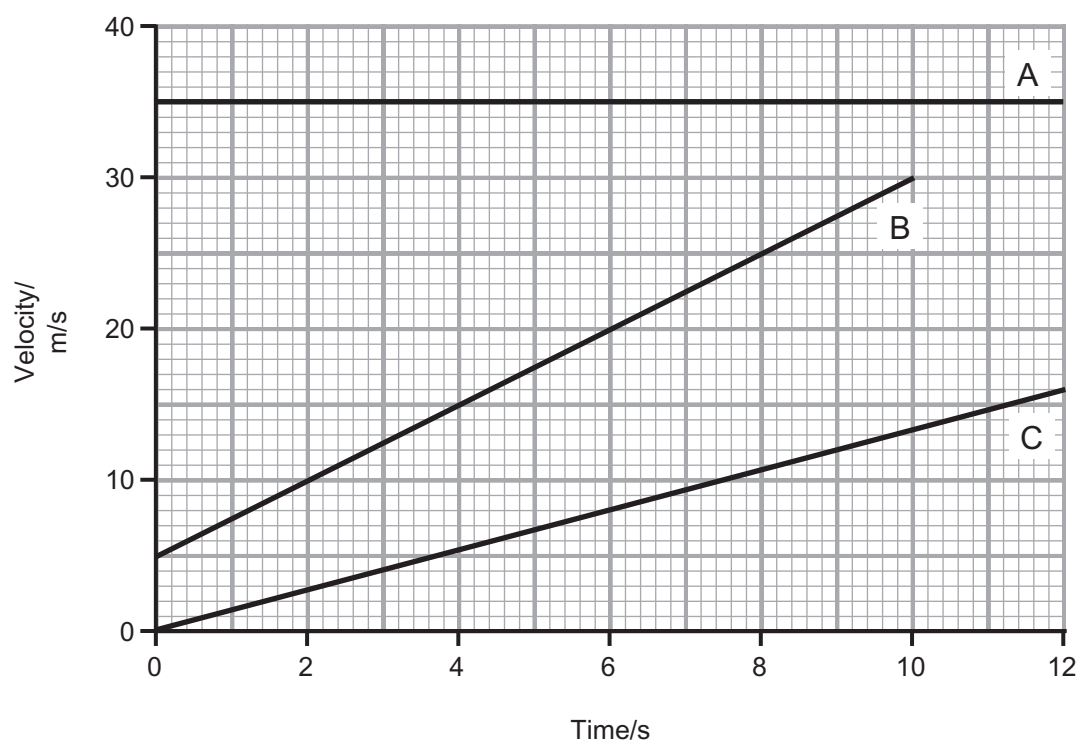
(a) Calculate the cheetah's **change in velocity**.

You are advised to show your working out.

Change in velocity = _____ m/s [3]

Examiner Only	
Marks	Remark
	

- 5 The graphs below represent the motions of three different vehicles, A, B and C.



- (a) (i) Which vehicle is not accelerating?

Vehicle/s = _____ [1]

- (ii) Which vehicle is travelling with the greatest acceleration?

Vehicle = _____ [1]

- (iii) Give a reason for your answer to (ii).

_____ [1]



Examiner Only	
Marks	Remark
<div style="border: 1px solid black; border-radius: 50%; width: 40px; height: 40px; margin: 0 auto;"></div>	<div style="border: 1px solid black; border-radius: 50%; width: 40px; height: 40px; margin: 0 auto;"></div>

- the particles involved;
- the process itself;
- where fusion occurs naturally.

In this question you will be assessed on your written communication skills including the use of specialist scientific terms.

[illegible]

[6]

Examiner Only	
Marks	Remark
	


$${}_{92}^{239}\text{U} \longrightarrow \begin{array}{|c|} \hline \square \\ \hline \square \\ \hline \end{array} \text{Np} + \begin{array}{|c|} \hline \square \\ \hline \square \\ \hline \end{array} \beta$$

You are advised to show your working out.

Half-life = _____ minutes [3]

[Turn over

- 8 An archer shoots an arrow vertically into the air.



Source: Chief Examiner

The arrow has a mass of 200 g and its initial kinetic energy on release is 50 J. Later in its flight the arrow's kinetic energy has decreased to 20 J.

Use the Principle of Conservation of Energy to calculate the height of the arrow at this point. Assume no energy losses have occurred.

You are advised to show your working out.

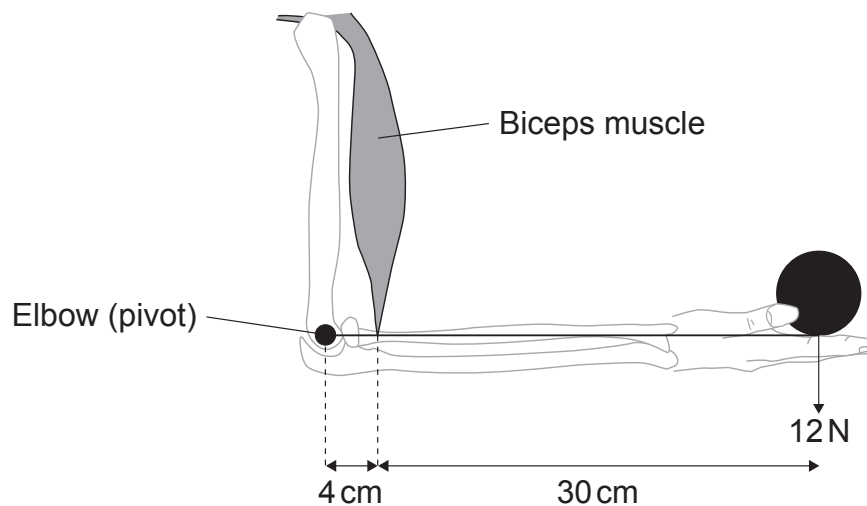
Height = _____ m [4]

Examiner Only	
Marks	Remark
<input type="text"/>	<input type="text"/>

9 (a) State the Principle of Moments.

[2]

(b) The diagram represents the forearm bone and the biceps muscle of the arm of an athlete holding a weight of 12 N.



Source: Chief Examiner

Calculate the upwards force exerted by the athlete's biceps muscle.

You are advised to show your working out.

Force = _____ N [3]

THIS IS THE END OF THE QUESTION PAPER

Examiner Only	
Marks	Remark
<div style="border: 1px solid black; border-radius: 50%; width: 40px; height: 40px; margin: 0 auto;"></div>	<div style="border: 1px solid black; border-radius: 50%; width: 40px; height: 40px; margin: 0 auto;"></div>

Permission to reproduce all copyright material has been applied for.
In some cases, efforts to contact copyright holders may have been unsuccessful and CCEA
will be happy to rectify any omissions of acknowledgement in future if notified.