

**Mathematical studies**  
**Standard level**  
**Paper 2**

Wednesday 13 May 2015 (afternoon)

1 hour 30 minutes

---

**Instructions to candidates**

- Do not open this examination paper until instructed to do so.
- A graphic display calculator is required for this paper.
- A clean copy of the **Mathematical studies SL formula booklet** is required for this paper.
- Answer all the questions in the answer booklet provided.
- Unless otherwise stated in the question, all numerical answers should be given exactly or correct to three significant figures.
- The maximum mark for this examination paper is **[90 marks]**.

Answer **all** questions in the answer booklet provided. Please start each question on a new page. You are advised to show all working, where possible. Where an answer is incorrect, some marks may be given for a correct method, provided this is shown by written working. Solutions found from a graphic display calculator should be supported by suitable working, for example, if graphs are used to find a solution, you should sketch these as part of your answer.

**1. [Maximum mark: 10]**

In a debate on voting, a survey was conducted. The survey asked people's opinion on whether or not the minimum voting age should be reduced to 16 years of age. The results are shown as follows.

	<b>Age 18–25</b>	<b>Age 26–40</b>	<b>Age 41+</b>	<b>Total</b>
<b>Oppose the reduction</b>	12	20	48	80
<b>Favour the reduction</b>	18	15	17	50
<b>Total</b>	30	35	65	130

A  $\chi^2$  test at the 1% significance level was conducted. The  $\chi^2$  critical value of the test is 9.21.

- (a) State
- (i)  $H_0$ , the null hypothesis for the test;
  - (ii)  $H_1$ , the alternative hypothesis for the test. [2]
- (b) Write down the number of degrees of freedom. [1]
- (c) Show that the expected frequency of those between the ages of 26 and 40 who oppose the reduction in the voting age is 21.5, correct to three significant figures. [2]
- (d) Find
- (i) the  $\chi^2$  statistic;
  - (ii) the associated  $p$ -value for the test. [3]
- (e) Determine, giving a reason, whether  $H_0$  should be accepted. [2]

## 2. [Maximum mark: 11]

Consider the following statements.

$p$ : the land has been purchased

$q$ : the building permit has been obtained

$r$ : the land can be used for residential purposes

- (a) Write the following argument in symbolic form.

“If the land has been purchased and the building permit has been obtained, then the land can be used for residential purposes.”

[3]

- (b) **In your answer booklet**, copy and complete a truth table for the argument in part (a). Begin your truth table as follows.

$p$	$q$	$r$	
T	T	T	
T	T	F	
T	F	T	
T	F	F	
F	T	T	
F	T	F	
F	F	T	
F	F	F	

[2]

- (c) Use your truth table to determine whether the argument in part (a) is valid. Give a reason for your decision.

[2]

- (d) Write down the inverse of the argument in part (a)

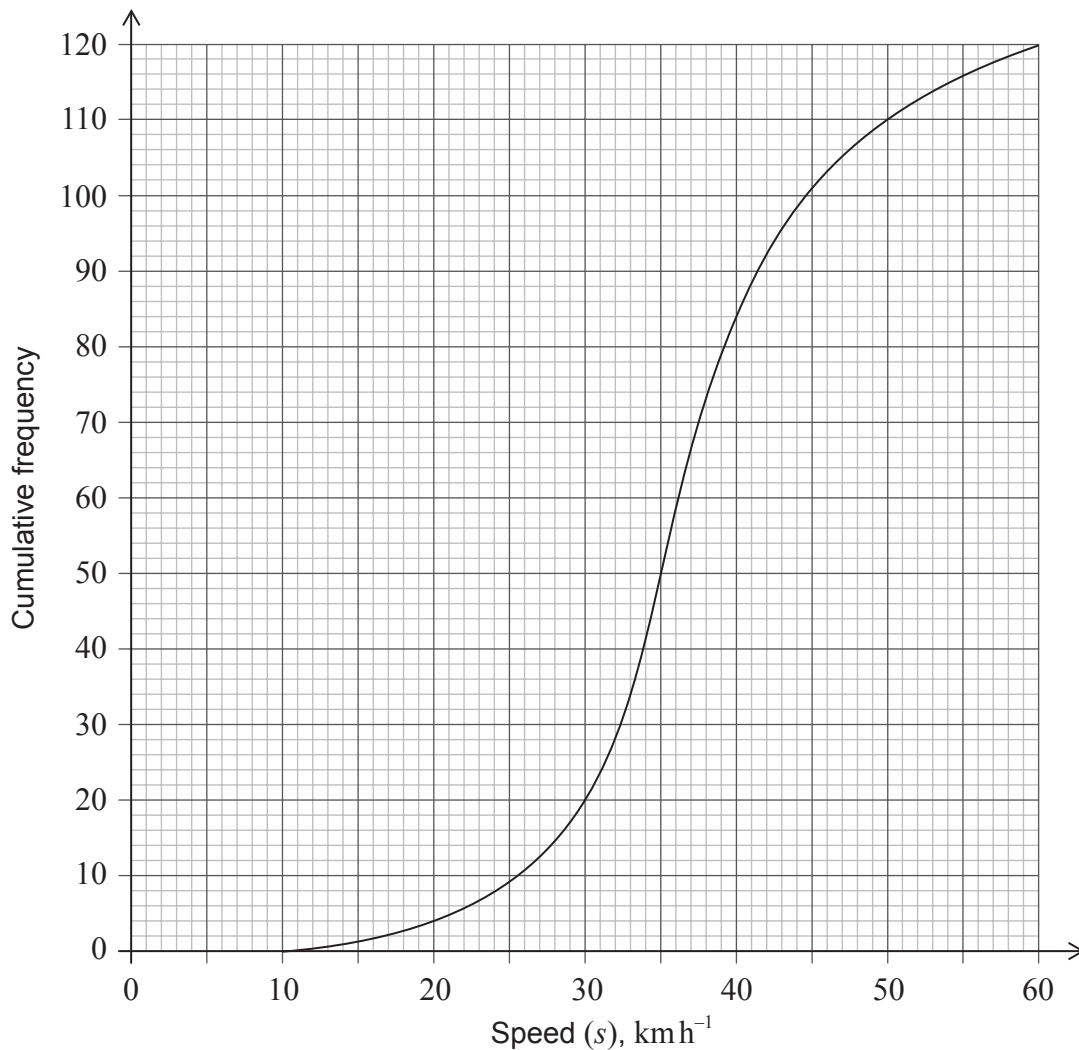
(i) in symbolic form;

(ii) in words.

[4]

## 3. [Maximum mark: 17]

The cumulative frequency graph shows the speed,  $s$ , in  $\text{km h}^{-1}$ , of 120 vehicles passing a hospital gate.



- (a) Estimate the minimum possible speed of one of these vehicles passing the hospital gate. [1]
- (b) Find the median speed of the vehicles. [2]
- (c) Write down the 75th percentile. [1]
- (d) Calculate the interquartile range. [2]

This question continues on the following page

**Question 3 continued**

The speed limit past the hospital gate is  $50 \text{ km h}^{-1}$ .

- (e) Find the number of these vehicles that exceed the speed limit. [2]

The table shows the speeds of these vehicles travelling past the hospital gate.

Speed of Vehicles	Number of Vehicles
$0 < s \leq 10$	0
$10 < s \leq 20$	$p$
$20 < s \leq 30$	16
$30 < s \leq 40$	64
$40 < s \leq 50$	26
$50 < s \leq 60$	$q$

- (f) Find the value of  $p$  and of  $q$ . [2]

- (g) (i) Write down the modal class.

- (ii) Write down the mid-interval value for this class. [2]

- (h) Use your graphic display calculator to calculate an estimate of

- (i) the mean speed of these vehicles;

- (ii) the standard deviation. [3]

It is proposed that the speed limit past the hospital gate is reduced to  $40 \text{ km h}^{-1}$  from the current  $50 \text{ km h}^{-1}$ .

- (i) Find the percentage of these vehicles passing the hospital gate that **do not** exceed the current speed limit but **would** exceed the new speed limit. [2]

## 4. [Maximum mark: 21]

A boat race takes place around a triangular course,  $ABC$ , with  $AB = 700$  m,  $BC = 900$  m and angle  $ABC = 110^\circ$ . The race starts and finishes at point  $A$ .

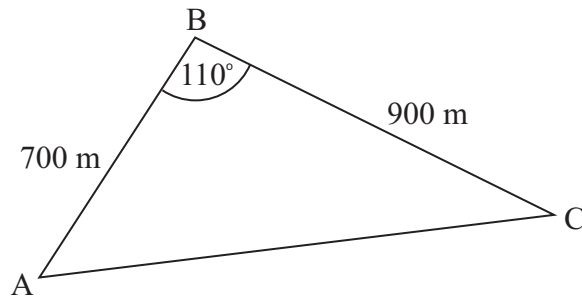


diagram not to scale

- (a) Calculate the total length of the course. [4]

It is estimated that the fastest boat in the race can travel at an average speed of  $1.5 \text{ ms}^{-1}$ .

- (b) Calculate an estimate of the winning time of the race. Give your answer to the nearest minute. [3]

- (c) Find the size of angle  $ACB$ . [3]

To comply with safety regulations, the area inside the triangular course must be kept clear of other boats, and the shortest distance from  $B$  to  $AC$  must be greater than 375 metres.

- (d) Calculate the area that must be kept clear of boats. [3]

- (e) Determine, giving a reason, whether the course complies with the safety regulations. [3]

The race is filmed from a helicopter,  $H$ , which is flying vertically above point  $A$ . The angle of elevation of  $H$  from  $B$  is  $15^\circ$ .

- (f) Calculate the vertical height,  $AH$ , of the helicopter above  $A$ . [2]

- (g) Calculate the maximum possible distance from the helicopter to a boat on the course. [3]

**5. [Maximum mark: 20]**

Consider the function  $f(x) = \frac{96}{x^2} + kx$ , where  $k$  is a constant and  $x \neq 0$ .

(a) Write down  $f'(x)$ . [3]

The graph of  $y = f(x)$  has a local minimum point at  $x = 4$ .

(b) Show that  $k = 3$ . [2]

(c) Find  $f(2)$ . [2]

(d) Find  $f'(2)$ . [2]

(e) Find the equation of the normal to the graph of  $y = f(x)$  at the point where  $x = 2$ .  
Give your answer in the form  $ax + by + d = 0$  where  $a, b, d \in \mathbb{Z}$ . [3]

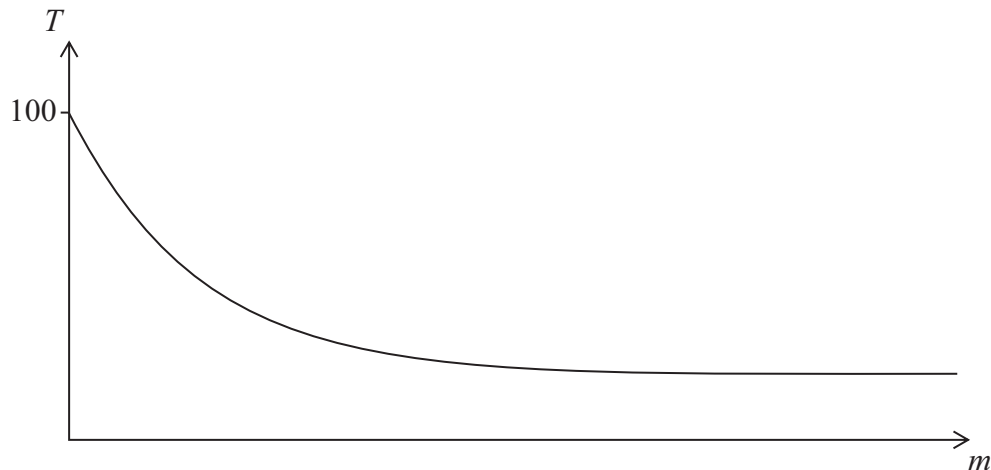
(f) Sketch the graph of  $y = f(x)$ , for  $-5 \leq x \leq 10$  and  $-10 \leq y \leq 100$ . [4]

(g) Write down the coordinates of the point where the graph of  $y = f(x)$  intersects the  $x$ -axis. [2]

(h) State the values of  $x$  for which  $f(x)$  is decreasing. [2]

**6. [Maximum mark: 11]**

A cup of boiling water is placed in a room to cool. The temperature of the room is  $20^{\circ}\text{C}$ . This situation can be modelled by the exponential function  $T = a + b(k^{-m})$ , where  $T$  is the temperature of the water, in  $^{\circ}\text{C}$ , and  $m$  is the number of minutes for which the cup has been placed in the room. A sketch of the situation is given as follows.



- (a) Explain why  $a = 20$ . [2]

Initially, at  $m = 0$ , the temperature of the water is  $100^{\circ}\text{C}$ .

- (b) Find the value of  $b$ . [2]

After being placed in the room for one minute, the temperature of the water is  $84^{\circ}\text{C}$ .

- (c) Show that  $k = 1.25$ . [2]

- (d) Find the temperature of the water three minutes after it has been placed in the room. [2]

- (e) Find the total time needed for the water to reach a temperature of  $35^{\circ}\text{C}$ . Give your answer in minutes and seconds, correct to the nearest second. [3]
-