



No part of this product may be reproduced in any form or by any electronic or mechanical means, including information storage and retrieval systems, without written permission from the IB.

Additionally, the license tied with this product prohibits commercial use of any selected files or extracts from this product. Use by third parties, including but not limited to publishers, private teachers, tutoring or study services, preparatory schools, vendors operating curriculum mapping services or teacher resource digital platforms and app developers, is not permitted and is subject to the IB's prior written consent via a license. More information on how to request a license can be obtained from <http://www.ibo.org/contact-the-ib/media-inquiries/for-publishers/guidance-for-third-party-publishers-and-providers/how-to-apply-for-a-license>.

Aucune partie de ce produit ne peut être reproduite sous quelque forme ni par quelque moyen que ce soit, électronique ou mécanique, y compris des systèmes de stockage et de récupération d'informations, sans l'autorisation écrite de l'IB.

De plus, la licence associée à ce produit interdit toute utilisation commerciale de tout fichier ou extrait sélectionné dans ce produit. L'utilisation par des tiers, y compris, sans toutefois s'y limiter, des éditeurs, des professeurs particuliers, des services de tutorat ou d'aide aux études, des établissements de préparation à l'enseignement supérieur, des fournisseurs de services de planification des programmes d'études, des gestionnaires de plateformes pédagogiques en ligne, et des développeurs d'applications, n'est pas autorisée et est soumise au consentement écrit préalable de l'IB par l'intermédiaire d'une licence. Pour plus d'informations sur la procédure à suivre pour demander une licence, rendez-vous à l'adresse <http://www.ibo.org/fr/contact-the-ib/media-inquiries/for-publishers/guidance-for-third-party-publishers-and-providers/how-to-apply-for-a-license>.

No se podrá reproducir ninguna parte de este producto de ninguna forma ni por ningún medio electrónico o mecánico, incluidos los sistemas de almacenamiento y recuperación de información, sin que medie la autorización escrita del IB.

Además, la licencia vinculada a este producto prohíbe el uso con fines comerciales de todo archivo o fragmento seleccionado de este producto. El uso por parte de terceros —lo que incluye, a título enunciativo, editoriales, profesores particulares, servicios de apoyo académico o ayuda para el estudio, colegios preparatorios, desarrolladores de aplicaciones y entidades que presten servicios de planificación curricular u ofrezcan recursos para docentes mediante plataformas digitales— no está permitido y estará sujeto al otorgamiento previo de una licencia escrita por parte del IB. En este enlace encontrará más información sobre cómo solicitar una licencia: <http://www.ibo.org/es/contact-the-ib/media-inquiries/for-publishers/guidance-for-third-party-publishers-and-providers/how-to-apply-for-a-license>.

Chemistry
Standard level
Paper 1

Wednesday 22 May 2019 (afternoon)

45 minutes

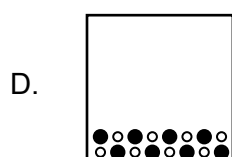
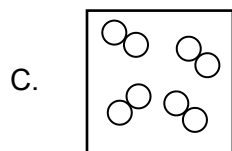
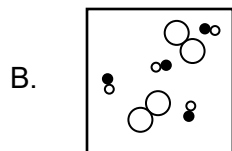
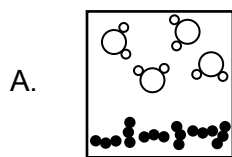
Instructions to candidates

- Do not open this examination paper until instructed to do so.
- Answer all the questions.
- For each question, choose the answer you consider to be the best and indicate your choice on the answer sheet provided.
- The periodic table is provided for reference on page 2 of this examination paper.
- The maximum mark for this examination paper is **[30 marks]**.

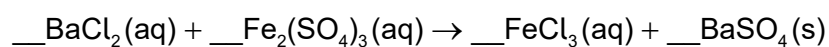
The Periodic Table

	1	2	3	4	5	6	7	8	9	10	11	12	13	14	15	16	17	18	
1	1 H 1.01	Atômico number																	
2	3 Li 6.94	4 Be 9.01	Element																
3	11 Na 22.99	12 Mg 24.31	Relative atomic mass																
4	19 K 39.10	20 Ca 40.08	21 Sc 44.96	22 Ti 47.87	23 V 50.94	24 Cr 52.00	25 Mn 54.94	26 Fe 55.85	27 Co 58.93	28 Ni 58.69	29 Cu 63.55	30 Zn 65.38	31 Ga 69.72	32 Ge 72.63	33 As 74.92	34 Se 78.96	35 Br 79.90	36 Kr 83.90	
5	37 Rb 85.47	38 Sr 87.62	39 Y 88.91	40 Zr 91.22	41 Nb 92.91	42 Mo 95.96	43 Tc (98)	44 Ru 101.07	45 Rh 102.91	46 Pd 106.42	47 Ag 107.87	48 Cd 112.41	49 In 114.82	50 Sn 118.71	51 Sb 121.76	52 Te 127.60	53 I 126.90	54 Xe 131.29	
6	55 Cs 132.91	56 Ba 137.33	57 † La 138.91	72 Hf 178.49	73 Ta 180.95	74 W 183.84	75 Re 186.21	76 Os 190.23	77 Ir 192.22	78 Pt 195.08	79 Au 196.97	80 Hg 200.59	81 Tl 204.38	82 Pb 207.2	83 Bi 208.98	84 Po (209)	85 At (210)	86 Rn (222)	
7	87 Fr (223)	88 Ra (226)	89 † Ac (227)	104 Rf (267)	105 Db (268)	106 Sg (269)	107 Bh (270)	108 Hs (269)	109 Mt (278)	110 Ds (281)	111 Rg (281)	112 Cn (285)	113 Unt (286)	114 Uug (289)	115 Uup (288)	116 Uuh (293)	117 Uus (294)	118 Uuo (294)	
†	58 Ce 140.12	59 Pr 140.91	60 Nd 144.24	61 Pm (145)	62 Sm 150.36	63 Eu 151.96	64 Gd 157.25	65 Tb 158.93	66 Dy 162.50	67 Ho 164.93	68 Er 167.26	69 Tm 168.93	70 Yb 173.05	71 Lu 174.97					
‡	90 Th 232.04	91 Pa 231.04	92 U 238.03	93 Np (237)	94 Pu (244)	95 Am (243)	96 Cm (247)	97 Bk (247)	98 Cf (251)	99 Es (252)	100 Fm (257)	101 Md (258)	102 No (259)	103 Lr (262)					

1. Which diagram represents a heterogeneous mixture?



2. What is the sum of the coefficients when the equation is balanced with the smallest whole numbers?



- A. 4
 B. 6
 C. 8
 D. 9
3. What is the empirical formula of a hydrocarbon with 75% carbon and 25% hydrogen by mass?
- A. C_3H
 B. CH_2
 C. C_2H_6
 D. CH_4

4. Which graph would **not** show a linear relationship for a fixed mass of an ideal gas with all other variables constant?
- P against V
 - P against $\frac{1}{V}$
 - P against T
 - V against T
5. Bromine consists of two stable isotopes that exist in approximately a 1 : 1 ratio. The relative atomic mass, A_r , of bromine is 79.90. Which are the stable isotopes of bromine?
- ^{79}Br and ^{81}Br
 - ^{80}Br and ^{81}Br
 - ^{78}Br and ^{80}Br
 - ^{79}Br and ^{80}Br
6. What is the ground state electron configuration of an atom of chromium, Cr ($Z = 24$)?
- $[\text{Ar}]3d^6$
 - $[\text{Ar}]4s^23d^4$
 - $[\text{Ar}]4s^13d^5$
 - $[\text{Ar}]4s^24p^4$
7. Which describes an atom of bismuth, Bi ($Z = 83$)?

	Principal energy level number	Number of valence electrons
A.	5	3
B.	5	5
C.	6	5
D.	6	15

8. What are typical characteristics of metals?

	Ionization energy	Electron affinity
A.	low	low
B.	high	high
C.	high	low
D.	low	high

9. What is the order of increasing boiling point?

- A. $\text{CH}_3\text{CH}_2\text{CH}_2\text{CH}_3 < \text{CH}_3\text{CH}(\text{OH})\text{CH}_3 < \text{CH}_3\text{COCH}_3 < \text{CH}_3\text{CO}_2\text{H}$
- B. $\text{CH}_3\text{CH}_2\text{CH}_2\text{CH}_3 < \text{CH}_3\text{COCH}_3 < \text{CH}_3\text{CH}(\text{OH})\text{CH}_3 < \text{CH}_3\text{CO}_2\text{H}$
- C. $\text{CH}_3\text{CO}_2\text{H} < \text{CH}_3\text{COCH}_3 < \text{CH}_3\text{CH}(\text{OH})\text{CH}_3 < \text{CH}_3\text{CH}_2\text{CH}_2\text{CH}_3$
- D. $\text{CH}_3\text{CH}_2\text{CH}_2\text{CH}_3 < \text{CH}_3\text{COCH}_3 < \text{CH}_3\text{CO}_2\text{H} < \text{CH}_3\text{CH}(\text{OH})\text{CH}_3$

10. Which species does **not** have resonance structures?

- A. C_6H_6
- B. NH_4^+
- C. CO_3^{2-}
- D. O_3

11. Which describes an ionic compound?

	Melting point	Electrical conductivity of solid
A.	high	high
B.	high	low
C.	low	high
D.	low	low

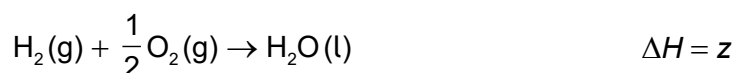
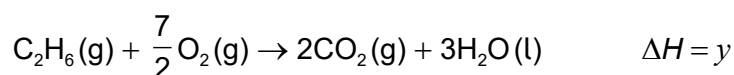
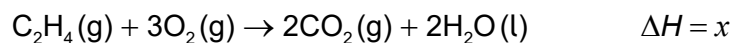
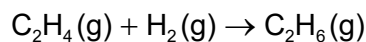
12. Which combination corresponds to a strong metallic bond?

	Charge on the metal ion	Radius of ion
A.	large	large
B.	large	small
C.	small	small
D.	small	large

13. When equal masses of X and Y absorb the same amount of energy, their temperatures rise by 5°C and 10°C respectively. Which is correct?

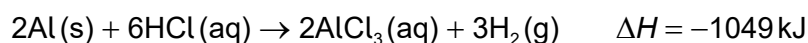
- A. The specific heat capacity of X is twice that of Y.
- B. The specific heat capacity of X is half that of Y.
- C. The specific heat capacity of X is one fifth that of Y.
- D. The specific heat capacity of X is the same as Y.

14. What is the enthalpy change of reaction for the following equation?



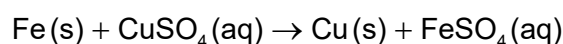
- A. $x + y + z$
- B. $-x - y + z$
- C. $x - y - z$
- D. $x - y + z$

15. Which is correct for the reaction?



- A. Reactants are less stable than products and the reaction is endothermic.
- B. Reactants are more stable than products and the reaction is endothermic.
- C. Reactants are more stable than products and the reaction is exothermic.
- D. Reactants are less stable than products and the reaction is exothermic.

16. Which properties can be monitored to determine the rate of the reaction?



- I. change in volume
- II. change in temperature
- III. change in colour

- A. I and II only
- B. I and III only
- C. II and III only
- D. I, II and III

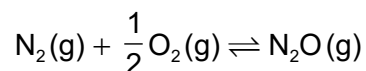
17. Which will increase the rate of reaction between calcium carbonate and hydrochloric acid?

- I. an increase in temperature
- II. an increase in concentration of hydrochloric acid
- III. an increase in particle size of calcium carbonate

- A. I and II only
- B. I and III only
- C. II and III only
- D. I, II and III

18. K_c for $2\text{N}_2\text{O}(\text{g}) \rightleftharpoons 2\text{N}_2(\text{g}) + \text{O}_2(\text{g})$ is 7.3×10^{34} .

What is K_c for the following reaction, at the same temperature?



- A. 7.3×10^{34}
- B. $\frac{1}{\sqrt{7.3 \times 10^{34}}}$
- C. $\frac{2}{7.3 \times 10^{34}}$
- D. $\frac{1}{2 \times 7.3 \times 10^{34}}$
19. Which solution is basic at 25°C ?

$$K_w = 1.0 \times 10^{-14}$$

- A. $[\text{H}^+] = 1.0 \times 10^{-3} \text{ mol dm}^{-3}$
- B. $[\text{OH}^-] = 1.0 \times 10^{-13} \text{ mol dm}^{-3}$
- C. solution of $\text{pH} = 4.00$
- D. $[\text{H}_3\text{O}^+] = 1.0 \times 10^{-13} \text{ mol dm}^{-3}$
20. Which is **not** a source of oxides of sulfur and nitrogen?
- A. burning coal
- B. internal combustion engines
- C. burning methane
- D. volcanic eruptions

21. Where does oxidation occur in a voltaic cell?
- A. positive electrode and anode
- B. negative electrode and anode
- C. positive electrode and cathode
- D. negative electrode and cathode

22. Which is the species oxidized and the oxidizing agent in the reaction?

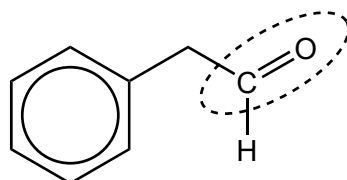


	Species oxidized	Oxidizing agent
A.	Cl^-	HCl
B.	MnO_2	MnO_2
C.	MnO_2	HCl
D.	Cl^-	MnO_2

23. Which product will be obtained at the anode (positive electrode) when molten NaCl is electrolysed?

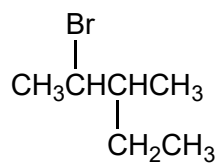
- A. Na(l)
- B. Cl(g)
- C. $\text{Cl}_2(\text{g})$
- D. Na(s)

24. Which functional group is surrounded in the molecule?



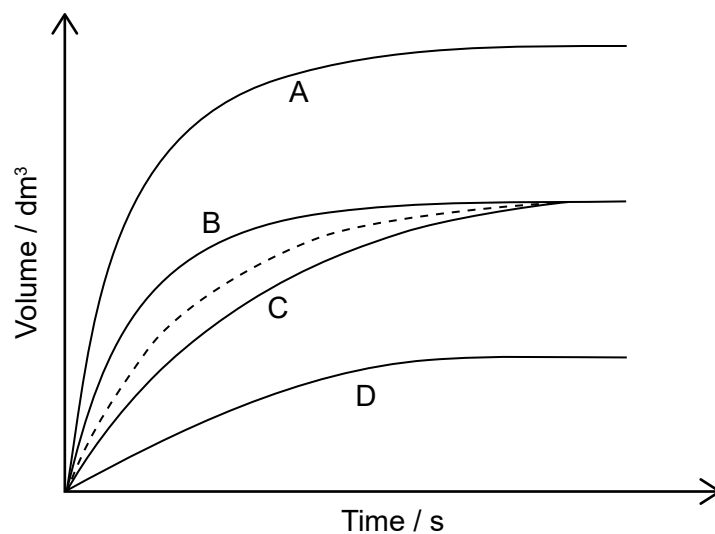
- A. hydroxyl
- B. carboxyl
- C. carbonyl
- D. ether

25. What is the IUPAC name of the following molecule?



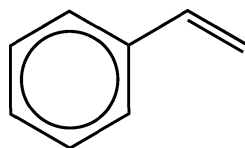
- A. 2-bromo-3-ethylbutane
- B. 3-methyl-4-bromopentane
- C. 2-ethyl-3-bromobutane
- D. 2-bromo-3-methylpentane
26. What is the mechanism of the reaction between alkenes and halogens in the absence of light?
- A. radical substitution
- B. electrophilic substitution
- C. electrophilic addition
- D. nucleophilic substitution
27. Which alcohol would produce a carboxylic acid when heated with acidified potassium dichromate(VI)?
- A. propan-2-ol
- B. butan-1-ol
- C. 2-methylpropan-2-ol
- D. pentan-3-ol
28. How should a measurement of 5.00 g from a balance be recorded?
- A. $5.00 \pm 0.1 \text{ g}$
- B. $5.00 \pm 0.01 \text{ g}$
- C. $5.00 \pm 1 \text{ g}$
- D. $5.00 \pm 0.001 \text{ g}$

29. The dotted line represents the formation of oxygen, $O_2(g)$, from the uncatalysed complete decomposition of hydrogen peroxide, $H_2O_2(aq)$.



Which curve represents a catalysed reaction under the same conditions?

30. What is the degree of unsaturation (index of hydrogen deficiency) for the molecule?



- A. 1
B. 2
C. 4
D. 5
-