



No part of this product may be reproduced in any form or by any electronic or mechanical means, including information storage and retrieval systems, without written permission from the IB.

Additionally, the license tied with this product prohibits commercial use of any selected files or extracts from this product. Use by third parties, including but not limited to publishers, private teachers, tutoring or study services, preparatory schools, vendors operating curriculum mapping services or teacher resource digital platforms and app developers, is not permitted and is subject to the IB's prior written consent via a license. More information on how to request a license can be obtained from <http://www.ibo.org/contact-the-ib/media-inquiries/for-publishers/guidance-for-third-party-publishers-and-providers/how-to-apply-for-a-license>.

Aucune partie de ce produit ne peut être reproduite sous quelque forme ni par quelque moyen que ce soit, électronique ou mécanique, y compris des systèmes de stockage et de récupération d'informations, sans l'autorisation écrite de l'IB.

De plus, la licence associée à ce produit interdit toute utilisation commerciale de tout fichier ou extrait sélectionné dans ce produit. L'utilisation par des tiers, y compris, sans toutefois s'y limiter, des éditeurs, des professeurs particuliers, des services de tutorat ou d'aide aux études, des établissements de préparation à l'enseignement supérieur, des fournisseurs de services de planification des programmes d'études, des gestionnaires de plateformes pédagogiques en ligne, et des développeurs d'applications, n'est pas autorisée et est soumise au consentement écrit préalable de l'IB par l'intermédiaire d'une licence. Pour plus d'informations sur la procédure à suivre pour demander une licence, rendez-vous à l'adresse <http://www.ibo.org/fr/contact-the-ib/media-inquiries/for-publishers/guidance-for-third-party-publishers-and-providers/how-to-apply-for-a-license>.

No se podrá reproducir ninguna parte de este producto de ninguna forma ni por ningún medio electrónico o mecánico, incluidos los sistemas de almacenamiento y recuperación de información, sin que medie la autorización escrita del IB.

Además, la licencia vinculada a este producto prohíbe el uso con fines comerciales de todo archivo o fragmento seleccionado de este producto. El uso por parte de terceros —lo que incluye, a título enunciativo, editoriales, profesores particulares, servicios de apoyo académico o ayuda para el estudio, colegios preparatorios, desarrolladores de aplicaciones y entidades que presten servicios de planificación curricular u ofrezcan recursos para docentes mediante plataformas digitales— no está permitido y estará sujeto al otorgamiento previo de una licencia escrita por parte del IB. En este enlace encontrará más información sobre cómo solicitar una licencia: <http://www.ibo.org/es/contact-the-ib/media-inquiries/for-publishers/guidance-for-third-party-publishers-and-providers/how-to-apply-for-a-license>.

**Biology**  
**Standard level**  
**Paper 1**

Thursday 9 May 2019 (afternoon)

45 minutes

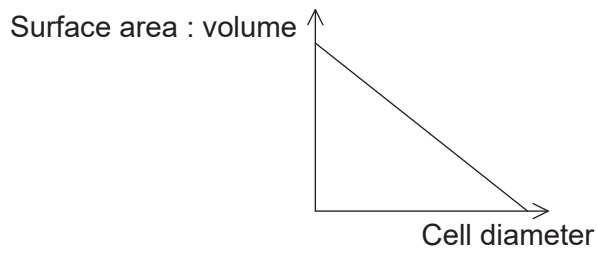
---

**Instructions to candidates**

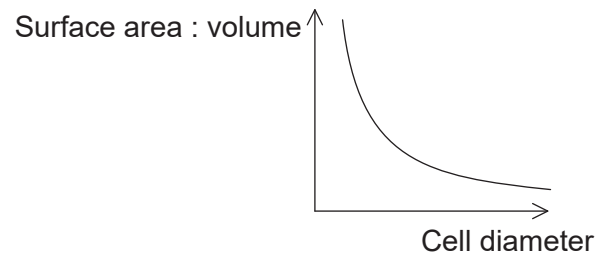
- Do not open this examination paper until instructed to do so.
- Answer all the questions.
- For each question, choose the answer you consider to be the best and indicate your choice on the answer sheet provided.
- The maximum mark for this examination paper is **[30 marks]**.

1. Which graph represents the change in cell surface area to volume ratio with increasing cell diameter?

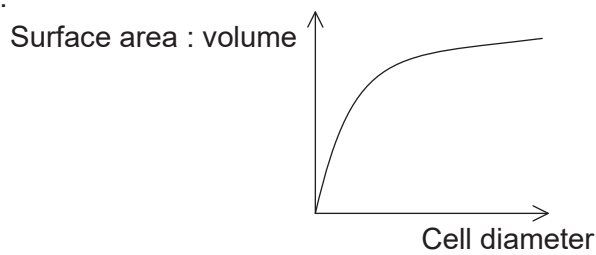
A.



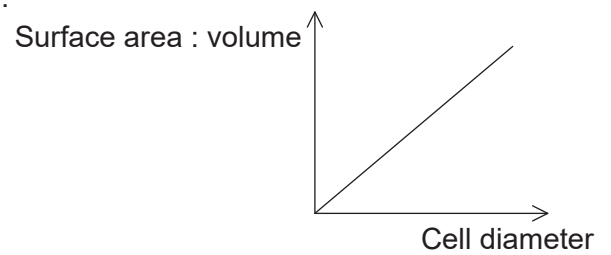
B.



C.

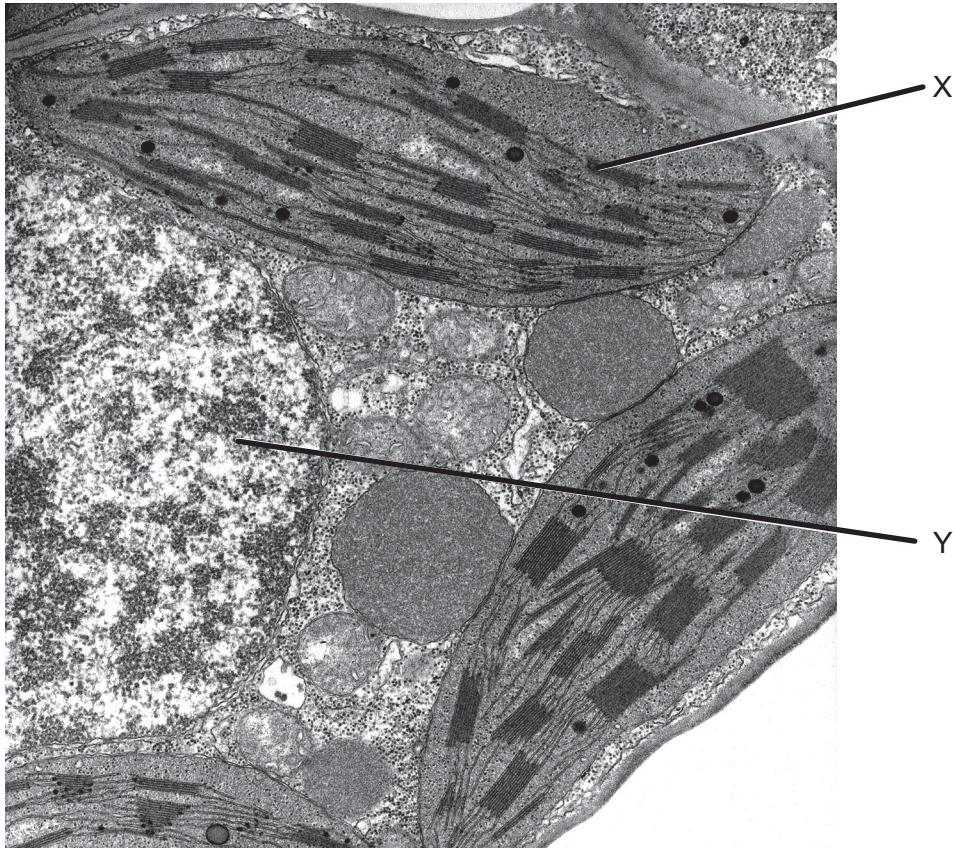


D.



[Source: © International Baccalaureate Organization 2019]

2. The image shows an electron micrograph of part of a cell.

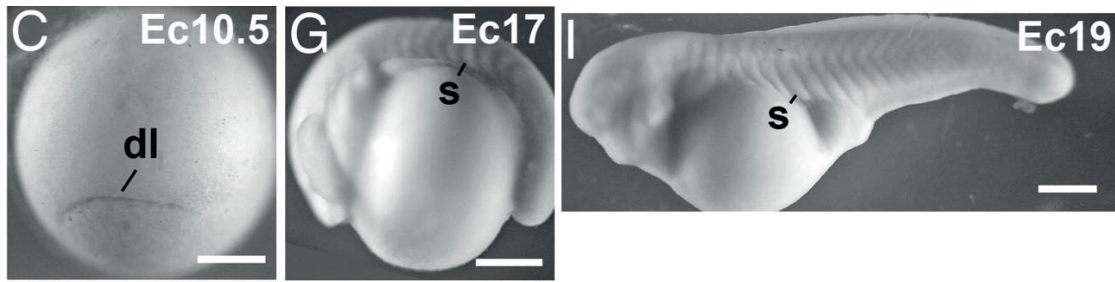


[Source: Dr. Eldon Newcomb – Emeritus Professor at The University of Wisconsin – Madison.]

Which features do the two structures labelled X and Y have in common?

- A. They are surrounded by a double membrane.
- B. They contain 70S ribosomes.
- C. They contain naked DNA.
- D. They are only found in leaf cells.

3. The images show a sequence of changes in an organism.



[Source: Copyright (2007) National Academy of Sciences, U.S.A. 'A comparative analysis of frog early development'. Eugenia M. del Pino, Michael Venegas-Ferrín, Andrés Romero-Carvajal, Paola Montenegro-Larrea, Natalia Sáenz-Ponce, Iván M. Moya, Ingrid Alarcón, Norihiro Sudou, Shinji Yamamoto, and Masanori Taira, *PNAS* July 17, 2007 **104** (29) 11882–11888; <https://doi.org/10.1073/pnas.0705092104>]

What is the change and which process is necessary for it to occur?

	<b>Change occurring</b>	<b>Process necessary</b>
A.	egg production	meiosis
B.	embryonic development	cell differentiation
C.	excretion	exocytosis
D.	feeding	phagocytosis

4. Which process(es) occur(s) by osmosis?

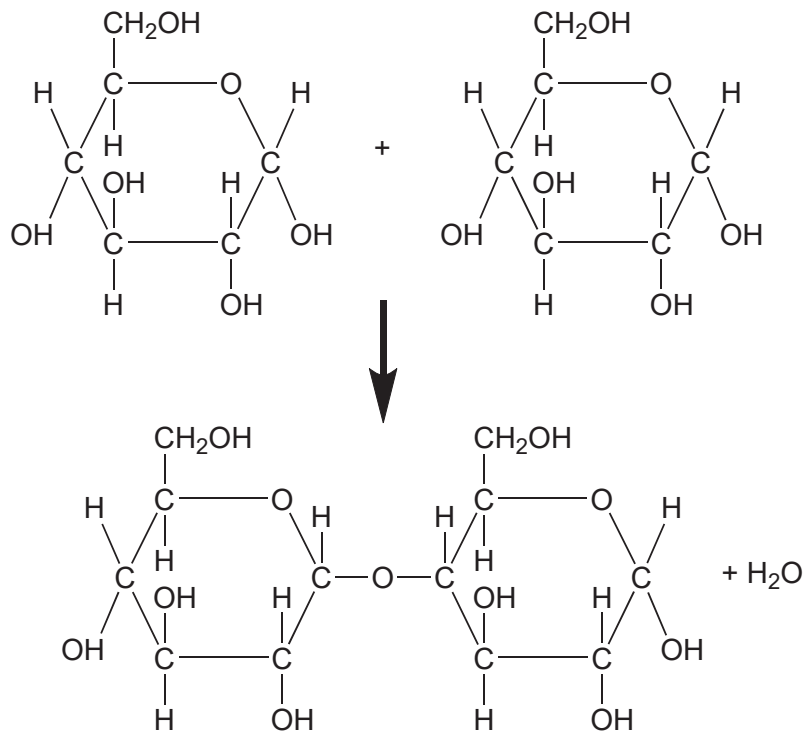
- I. Uptake of water by cells in the wall of the intestine
- II. Loss of water from a plant cell in a hypertonic environment
- III. Evaporation of water from sweat on the skin surface

- A. I only
- B. I and II only
- C. II and III only
- D. I, II and III

5. The table shows the number of cells in various stages of the cell cycle in four samples of ovarian tissue from different patients. Which tissue sample A, B, C or D has the highest mitotic index?

Number of cells						
	Interphase	Prophase	Metaphase	Anaphase	Telophase	Total
A.	46	1	1	1	1	50
B.	96	0	1	2	1	100
C.	21	2	0	1	1	25
D.	72	0	1	1	1	75

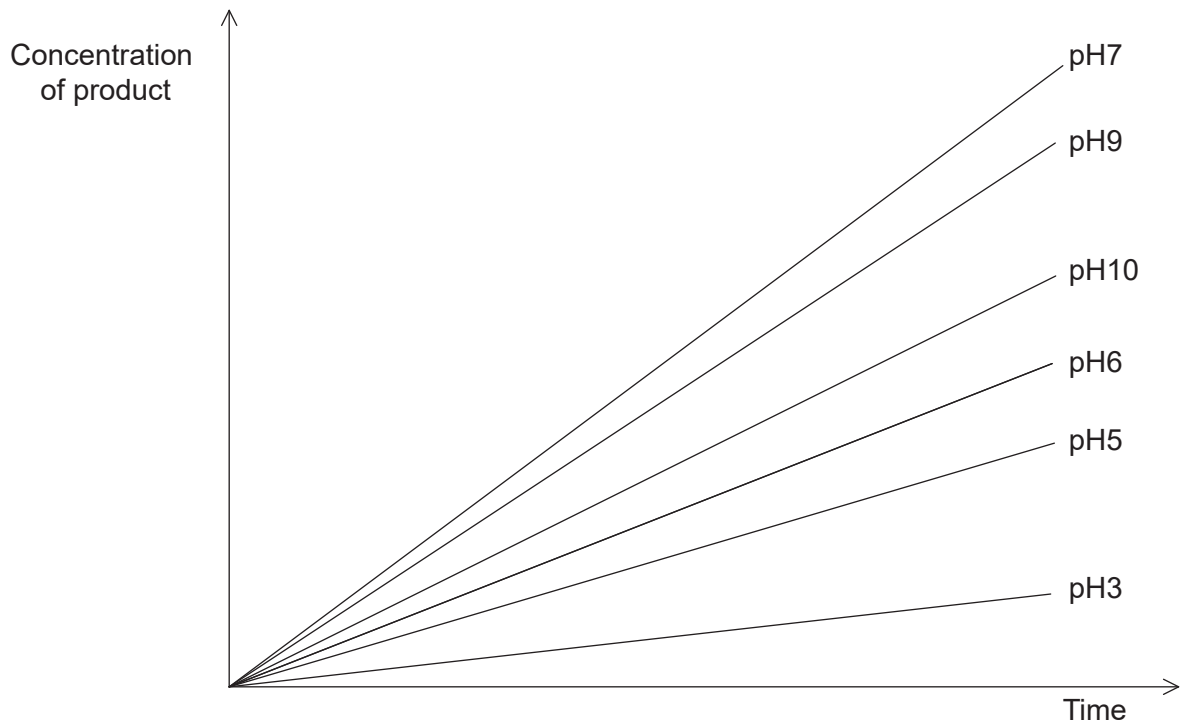
6. What type of molecule is formed by the chemical reaction shown in the diagram?



- A. Dipeptide  
 B. Disaccharide  
 C. Diglyceride  
 D. Cellulose

7. Which substance must be transported in the blood by lipoprotein complexes?
- A. Cholesterol
  - B. Oxygen
  - C. Sodium chloride
  - D. Amino acids
8. What is found in insulin molecules?
- A. Phosphates
  - B. Nucleotides
  - C. Peptide bonds
  - D. Glycerol

9. The graph shows the results of an investigation into the activity of turnip peroxidase. The accumulation of the product of the reaction catalysed by the enzyme is shown at different pH values.



[Source: © International Baccalaureate Organization 2019]

Based on the data in the graph, what is most probably the optimum pH for turnip peroxidase?

- A. Between 3 and 5
  - B. Between 10 and 11
  - C. Between 7 and 8
  - D. Between 9 and 10
10. The gene that codes for a particular polypeptide includes the base sequence shown.

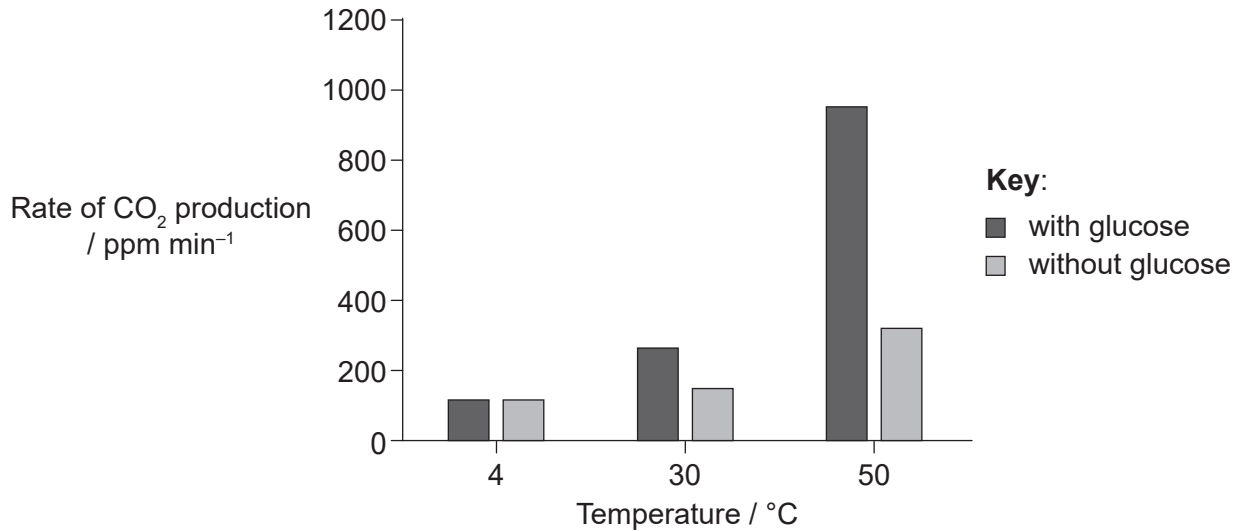
GAGTACCCT

What is the base sequence of the mRNA molecule which is complementary to this sequence?

- A. GAGTACCCT
- B. CTCATGGGA
- C. GUGTUCCT
- D. CUCAUGGGA



11. Yeast cells, *Saccharomyces cerevisiae*, were incubated with and without glucose at three different temperatures for a period of four minutes, during which the rate of CO<sub>2</sub> production was measured with a CO<sub>2</sub> sensor.

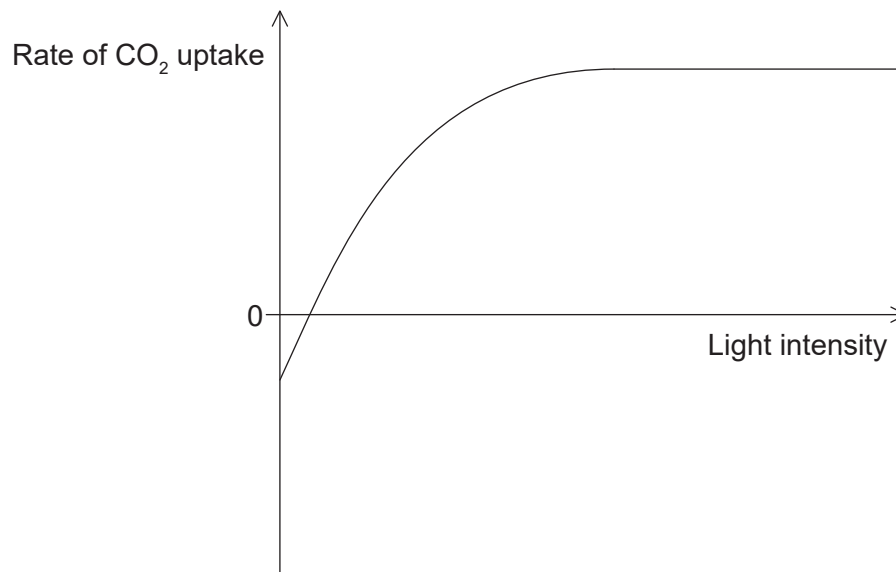


[Source: © International Baccalaureate Organization 2019]

What conclusion can be drawn from the results of this experiment?

- A. Yeast uses lipids rather than glucose in respiration at low temperatures.
- B. Addition of glucose has a greater impact on rates of cell respiration at lower temperatures.
- C. Rates of cell respiration increase with temperature.
- D. More glucose is produced at higher temperatures.

12. The graph shows the effect of increasing light intensity on the rate of  $\text{CO}_2$  uptake by a species of green plant maintained in conditions of constant temperature and  $\text{CO}_2$  concentration.



[Source: © International Baccalaureate Organization 2019]

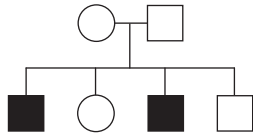
Which statement is consistent with the graph?

- A. Photosynthesis stops at high light intensity.
  - B. Rates of photosynthesis increase with temperature.
  - C. Cell respiration leads to net production of  $\text{CO}_2$  at low light intensity.
  - D. There is a negative correlation between  $\text{CO}_2$  uptake and light intensity.
13. The system of sex determination in chimpanzees (*Pan troglodytes*) is the same as in other mammals. A chimpanzee has 48 chromosomes in the nuclei of its body cells. What can be deduced from this information?
- A. The sex of the chimpanzee
  - B. The number of genes in each chromosome
  - C. Whether non-disjunction has occurred
  - D. The number of autosomes in a diploid cell

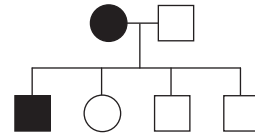
14. At which stage of meiosis are bivalents formed?
- A. Interphase
  - B. Prophase I
  - C. Prophase II
  - D. Metaphase II
15. Creeper in chickens is a condition in which the chickens are born with very short legs. The creeper allele (C) is dominant over the normal allele (c). Embryos which are homozygous for the dominant allele fail to develop into viable chickens and die before they hatch. What phenotypic ratio would you expect in the live offspring of a cross between two creeper chickens?
- A. All creeper
  - B. 1 creeper; 2 normal
  - C. 2 creeper; 1 normal
  - D. 3 creeper; 1 normal

16. Which pedigree chart is consistent with the inheritance of red-green colour blindness?

A.



B.

**Key:**

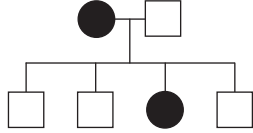
○ normal-vision female

□ normal-vision male

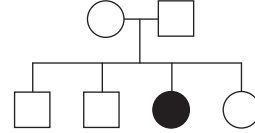
● colour-blind female

■ colour-blind male

C.



D.

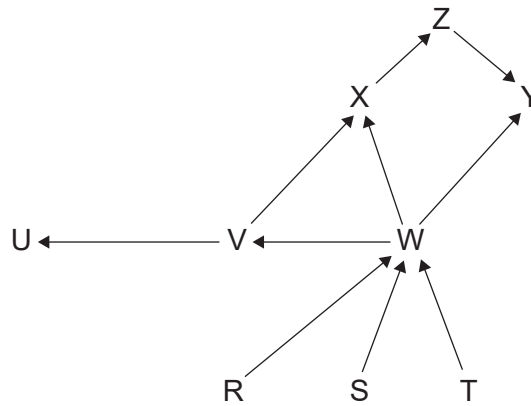


[Source: © International Baccalaureate Organization 2019]

17. Which organism can best be described as a saprotroph?

- A. A fungus that digests its food externally and absorbs the products of digestion
- B. A beetle that feeds by ingesting the dung of other animal species and digesting its food internally
- C. A single-celled eukaryote that is able to photosynthesize and consumes smaller organisms by endocytosis
- D. A giraffe that feeds by ingesting leaves from an acacia tree

18. The diagram shows the food web for an aquatic ecosystem in which letters R–Z represent individual species.




[Source: © International Baccalaureate Organization 2019]

Which organism is a tertiary consumer?

- A. Organism T
  - B. Organism U
  - C. Organism W
  - D. Organism Y
19. Which organisms produce methane in anaerobic environments such as waterlogged soils?
- A. Archaea
  - B. Fungi
  - C. Eukaryotes
  - D. Eubacteria
20. Which are examples of homologous structures?
- A. The wings of bats and butterflies
  - B. The fins of fish and whales
  - C. The hindlimbs of frogs and grasshoppers
  - D. The forelimbs of primates and penguins

21. Which is an example of natural selection?
- A. A giraffe stretching its neck to reach higher leaves
  - B. A juvenile bird learning to sing
  - C. Development of antibiotic resistance in bacteria
  - D. Selective breeding of tail-less cats
22. The image shows an organism belonging to the Kingdom Animalia.



[Source: Titan beetle male. Locality: "RK4,5 route Cacao", French Guiana  
© 2011, Didier Descouens <https://creativecommons.org/licenses/by-sa/4.0/>]

What feature does this organism have in common with all members of the phylum chordata?

- A. Legs and wings
- B. Mouth but no anus
- C. Bilateral symmetry
- D. Chitinous exoskeleton

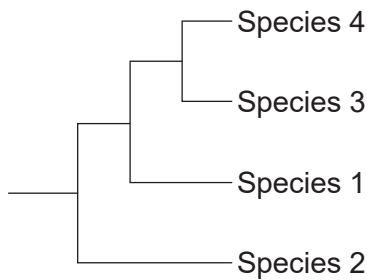
23. The DNA base sequences in a gene coding for a particular protein in four different species are shown. Locations where mutations have occurred resulting in changes to the base sequences are outlined in boxes.

Species 1	TATA	GC	T	A	CGG	ATG	GCT
Species 2	TATA	CA	T	C	CGG	TAA	GCT
Species 3	TATA	CC	T	C	CGG	TAA	GCT
Species 4	TATA	GA	T	C	CGG	TAG	GCT

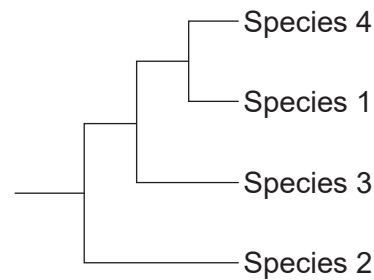
[Source: © International Baccalaureate Organization 2019]

Which cladogram shows the most likely phylogenetic relationship between the four species, based on the data provided?

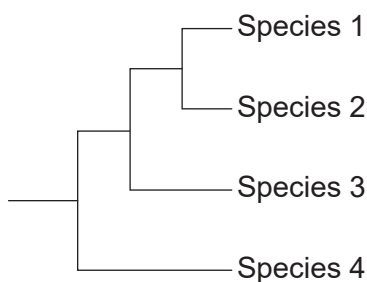
A.



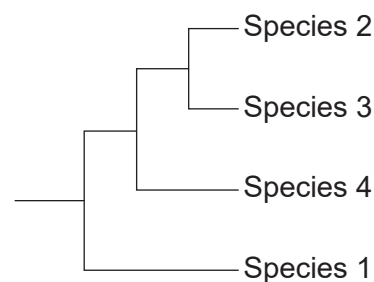
B.



C.




D.



24. Where in the human body is lipase produced?

- A. Stomach
- B. Pancreas
- C. Gall bladder
- D. Liver

25. What are these structures?

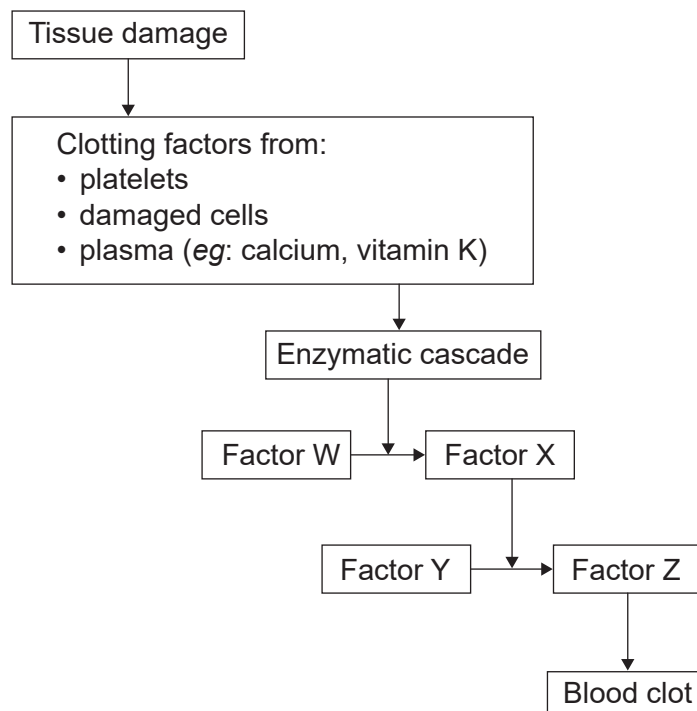


[Source: Burgstedt | Dreamstime.com]

- A. Fatty acids in the small intestine
  - B. Bacteria in the large intestine
  - C. Villi in the small intestine
  - D. Feces egested from the large intestine
26. Which feature of capillaries distinguishes them from arteries and veins?
- A. Narrow diameter
  - B. Valves to prevent backflow
  - C. Thick muscular walls
  - D. Elastic tissue



27. The diagram shows the major events involved in the formation of a blood clot.

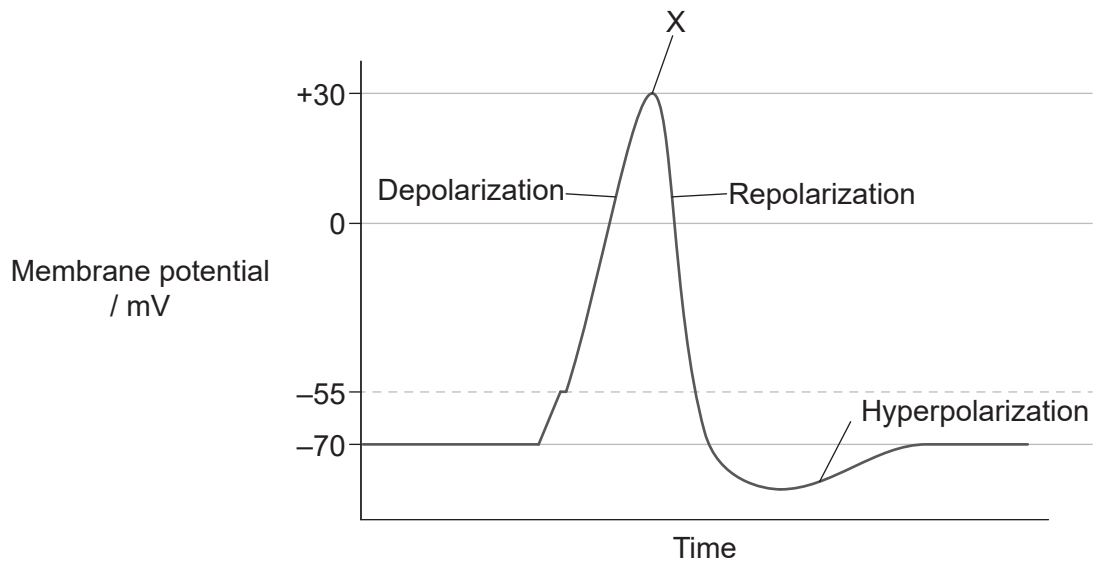


[Source: © International Baccalaureate Organization 2019]

What is Factor Y?

- A. Fibrin
  - B. Prothrombin
  - C. Fibrinogen
  - D. Thrombin
28. Which statement applies to HIV?
- A. HIV infects red blood cells resulting in decreased production of hemoglobin.
  - B. HIV can be effectively treated using antibiotics.
  - C. HIV can only be transmitted by sexual intercourse.
  - D. HIV causes a reduction in production of antibodies.

29. The diagram shows a graph of an action potential.

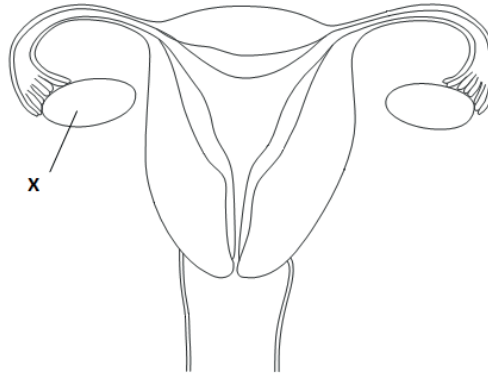


[Source: <https://www.ncbi.nlm.nih.gov/books/NBK538143/figure/article-17127.image.f1/?report=objectonly>  
*Physiology, Action Potential* by Michael H. Grider and Carolyn S. Glaubensklec.  
Copyright © 2019, StatPearls Publishing LLC  
<https://creativecommons.org/licenses/by/4.0/>]

What is happening at X?

- A. Sodium channels close.
- B. Calcium channels open.
- C. Sodium channels open.
- D. Potassium channels close.

30. The diagram shows the human female reproductive system.



[Source: © International Baccalaureate Organization 2019]

What is produced by structure X?

- A. FSH
  - B. X chromosomes
  - C. Fertilized eggs
  - D. Estrogen and progesterone
-