



No part of this product may be reproduced in any form or by any electronic or mechanical means, including information storage and retrieval systems, without written permission from the IB.

Additionally, the license tied with this product prohibits commercial use of any selected files or extracts from this product. Use by third parties, including but not limited to publishers, private teachers, tutoring or study services, preparatory schools, vendors operating curriculum mapping services or teacher resource digital platforms and app developers, is not permitted and is subject to the IB's prior written consent via a license. More information on how to request a license can be obtained from <http://www.ibo.org/contact-the-ib/media-inquiries/for-publishers/guidance-for-third-party-publishers-and-providers/how-to-apply-for-a-license>.

Aucune partie de ce produit ne peut être reproduite sous quelque forme ni par quelque moyen que ce soit, électronique ou mécanique, y compris des systèmes de stockage et de récupération d'informations, sans l'autorisation écrite de l'IB.

De plus, la licence associée à ce produit interdit toute utilisation commerciale de tout fichier ou extrait sélectionné dans ce produit. L'utilisation par des tiers, y compris, sans toutefois s'y limiter, des éditeurs, des professeurs particuliers, des services de tutorat ou d'aide aux études, des établissements de préparation à l'enseignement supérieur, des fournisseurs de services de planification des programmes d'études, des gestionnaires de plateformes pédagogiques en ligne, et des développeurs d'applications, n'est pas autorisée et est soumise au consentement écrit préalable de l'IB par l'intermédiaire d'une licence. Pour plus d'informations sur la procédure à suivre pour demander une licence, rendez-vous à l'adresse <http://www.ibo.org/fr/contact-the-ib/media-inquiries/for-publishers/guidance-for-third-party-publishers-and-providers/how-to-apply-for-a-license>.

No se podrá reproducir ninguna parte de este producto de ninguna forma ni por ningún medio electrónico o mecánico, incluidos los sistemas de almacenamiento y recuperación de información, sin que medie la autorización escrita del IB.

Además, la licencia vinculada a este producto prohíbe el uso con fines comerciales de todo archivo o fragmento seleccionado de este producto. El uso por parte de terceros —lo que incluye, a título enunciativo, editoriales, profesores particulares, servicios de apoyo académico o ayuda para el estudio, colegios preparatorios, desarrolladores de aplicaciones y entidades que presten servicios de planificación curricular u ofrezcan recursos para docentes mediante plataformas digitales— no está permitido y estará sujeto al otorgamiento previo de una licencia escrita por parte del IB. En este enlace encontrará más información sobre cómo solicitar una licencia: <http://www.ibo.org/es/contact-the-ib/media-inquiries/for-publishers/guidance-for-third-party-publishers-and-providers/how-to-apply-for-a-license>.

**Physics**  
**Higher level**  
**Paper 3**

Monday 20 May 2019 (morning)

Candidate session number

1 hour 15 minutes

--	--	--	--	--	--	--	--	--	--

**Instructions to candidates**

- Write your session number in the boxes above.
- Do not open this examination paper until instructed to do so.
- Answers must be written within the answer boxes provided.
- A calculator is required for this paper.
- A clean copy of the **physics data booklet** is required for this paper.
- The maximum mark for this examination paper is **[45 marks]**.

Section A	Questions
Answer all questions.	1 – 2

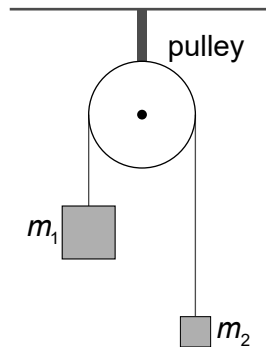
Section B	Questions
Answer all of the questions from one of the options.	
Option A — Relativity	3 – 7
Option B — Engineering physics	8 – 11
Option C — Imaging	12 – 16
Option D — Astrophysics	17 – 20



## Section A

Answer **all** questions. Answers must be written within the answer boxes provided.

1. In an experiment to measure the acceleration of free fall a student ties two different blocks of masses  $m_1$  and  $m_2$  to the ends of a string that passes over a frictionless pulley.



The student calculates the acceleration  $a$  of the blocks by measuring the time taken by the heavier mass to fall through a given distance. Their theory predicts that  $a = g \frac{m_1 - m_2}{m_1 + m_2}$  and this can be re-arranged to give  $g = a \frac{m_1 + m_2}{m_1 - m_2}$ .

- (a) In a particular experiment the student calculates that  $a = (0.204 \pm 0.002) \text{ms}^{-2}$  using  $m_1 = (0.125 \pm 0.001) \text{kg}$  and  $m_2 = (0.120 \pm 0.001) \text{kg}$ .

- (i) Calculate the percentage error in the measured value of  $g$ .

[3]

.....

.....

.....

.....

.....

.....

- (ii) Deduce the value of  $g$  and its absolute uncertainty for this experiment.

[2]

.....

.....

.....

.....

(This question continues on the following page)



**(Question 1 continued)**

(b) There is an advantage and a disadvantage in using two masses that are almost equal.

State and explain,

(i) the advantage with reference to the magnitude of the acceleration that is obtained. [2]

.....

.....

.....

.....

(ii) the disadvantage with reference to your answer to (a)(ii). [2]

.....

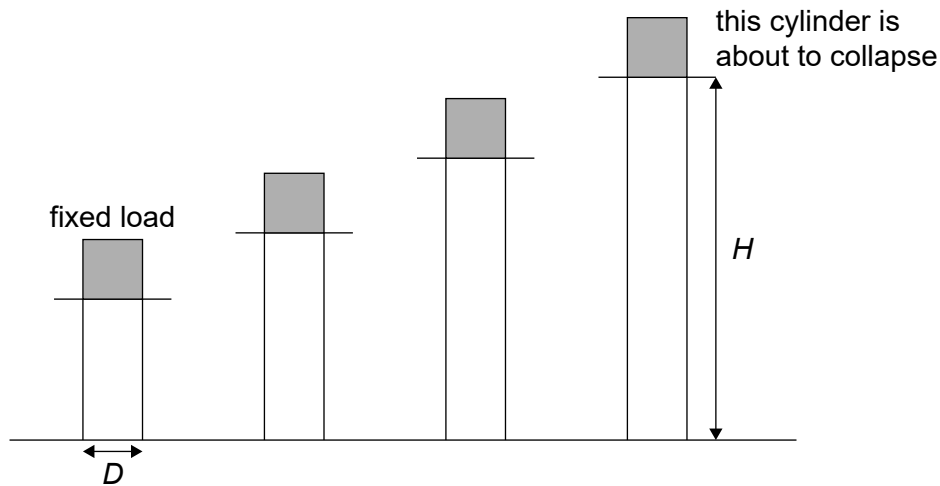
.....

.....

.....

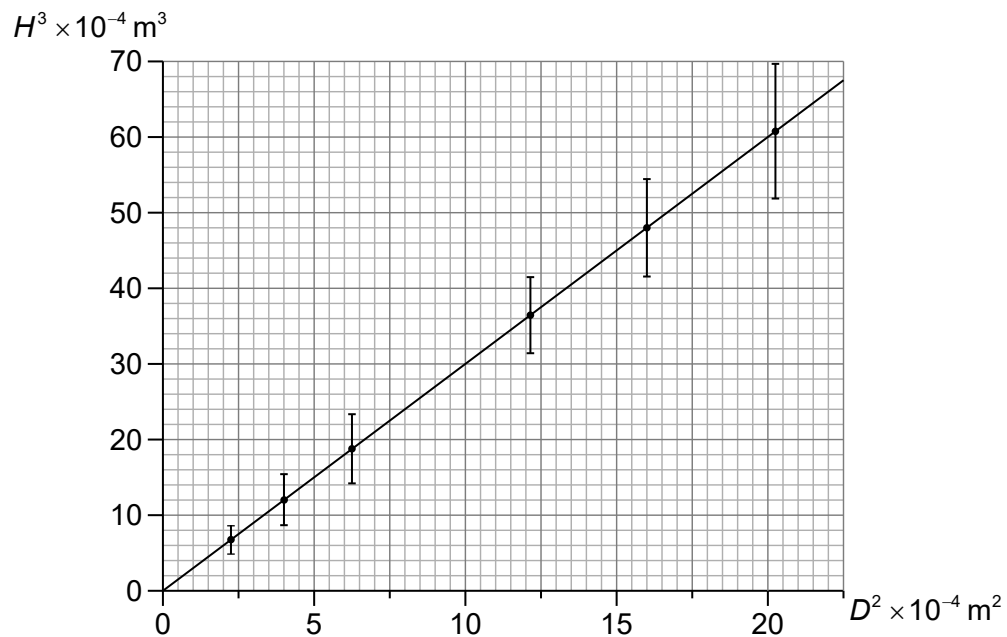


2. In an investigation a student folds paper into cylinders of the same diameter  $D$  but different heights. Beginning with the shortest cylinder they applied the same fixed load to each of the cylinders one by one. They recorded the height  $H$  of the first cylinder to collapse.



They then repeat this process with cylinders of different diameters.

The graph shows the data plotted by the student and the line of best fit.



Theory predicts that  $H = cD^{\frac{2}{3}}$  where  $c$  is a constant.

(This question continues on the following page)



(Question 2 continued)

(a) Suggest why the student's data supports the theoretical prediction. [2]

.....  
.....  
.....  
.....

(b) Determine  $c$ . State an appropriate unit for  $c$ . [3]

.....  
.....  
.....  
.....  
.....  
.....

(c) Identify **one** factor that determines the value of  $c$ . [1]

.....  
.....

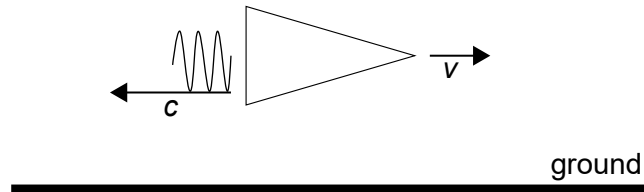


### Section B

Answer **all** of the questions from **one** of the options. Answers must be written within the answer boxes provided.

#### Option A — Relativity

3. A rocket moving with speed  $v$  relative to the ground emits a flash of light in the backward direction.



An observer in the rocket measures the speed of the flash of light to be  $c$ .

State the **speed** of the flash of light according to an observer on the ground using

- (a) Galilean relativity.

[1]

.....

- (b) Maxwell's theory of electromagnetism.

[1]

.....

- (c) Einstein's theory of relativity.

[1]

.....

(Option A continues on the following page)



**(Option A continued)**

4. Muons are created at a height of 3230 m above the Earth's surface. The muons move vertically downward at a speed of  $0.980c$  relative to the Earth's surface. The gamma factor for this speed is 5.00. The half-life of a muon in its rest frame is  $2.20\ \mu\text{s}$ .

(a) Estimate in the Earth frame the fraction of the original muons that will reach the Earth's surface before decaying according to

(i) Newtonian mechanics.

[3]

.....  
.....  
.....  
.....  
.....  
.....

(ii) special relativity.

[2]

.....  
.....  
.....  
.....

(b) Demonstrate how an observer moving with the same velocity as the muons accounts for the answer to (a)(ii).

[2]

.....  
.....  
.....  
.....

**(Option A continues on the following page)**



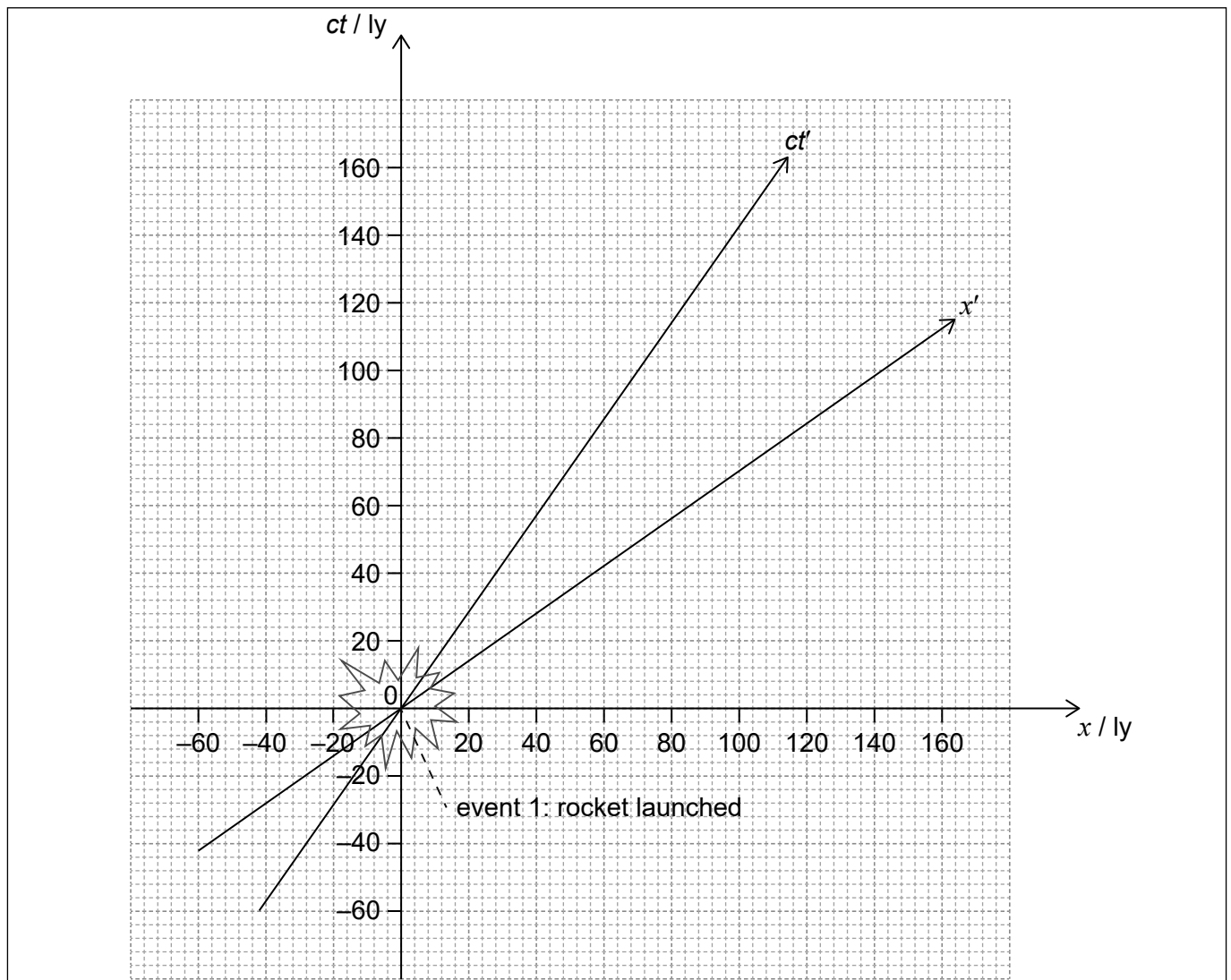
32EP07

Turn over



**(Option A continued)**

5. The diagram shows space and time axes  $x$  and  $ct$  for an observer at rest with respect to a galaxy. A spacecraft moving through the galaxy has space and time axes  $x'$  and  $ct'$ .



A rocket is launched towards the right from the spacecraft when it is at the origin of the axes. This is labelled event 1 on the spacetime diagram. Event 2 is an asteroid exploding at  $x = 100ly$  and  $ct = 20ly$ .

- (a) Plot, on the axes, the point corresponding to event 2. [1]
- (b) Suggest whether the rocket launched by the spacecraft might be the cause of the explosion of the asteroid. [2]

.....

.....

.....

.....

(Option A continues on the following page)



**(Option A, question 5 continued)**

(c) Show that the value of the invariant spacetime interval between events 1 and 2 is  $9600\text{ly}^2$ . [1]

.....  
.....

(d) (i) An observer in the spacecraft measures that events 1 and 2 are a distance of  $120\text{ly}$  apart. Determine, according to the spacecraft observer, the time between events 1 and 2. [2]

.....  
.....  
.....  
.....

(ii) Using the spacetime diagram, determine which event occurred first for the spacecraft observer, event 1 or event 2. [2]

.....  
.....  
.....  
.....

(e) Determine, using the diagram, the speed of the spacecraft relative to the galaxy. [2]

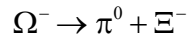
.....  
.....  
.....  
.....

**(Option A continues on the following page)**



**(Option A continued)**

6. The particle omega minus ( $\Omega^-$ ) decays at rest into a neutral pion ( $\pi^0$ ) and the xi baryon ( $\Xi^-$ ) according to



The pion momentum is  $289.7 \text{ MeVc}^{-1}$ .

The rest masses of the particles are:

$$\Omega^-: 1672 \text{ MeVc}^{-2}$$

$$\pi^0: 135.0 \text{ MeVc}^{-2}$$

$$\Xi^-: 1321 \text{ MeVc}^{-2}$$

- (a) Show that energy is conserved in this decay.

[3]

.....

.....

.....

.....

.....

.....

- (b) Calculate the speed of the pion.

[2]

.....

.....

.....

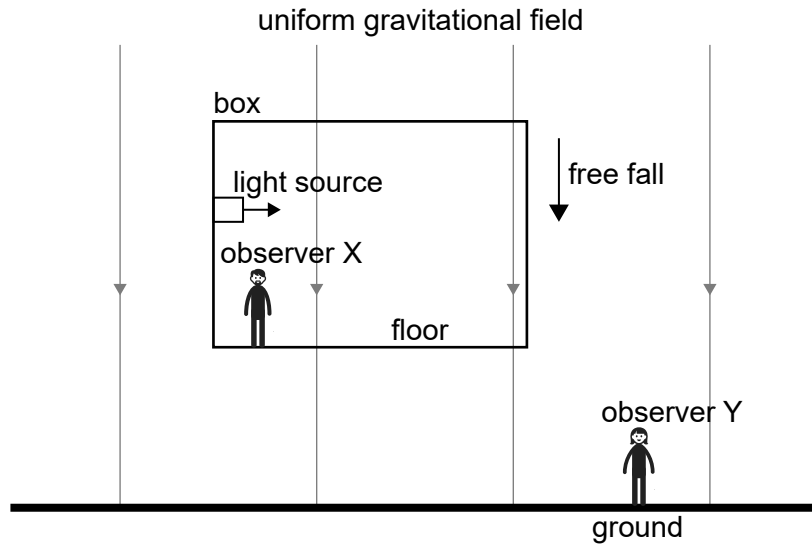
.....

**(Option A continues on the following page)**



**(Option A continued)**

7. A box is in free fall in a uniform gravitational field. Observer X is at rest inside the box. Observer Y is at rest relative to the gravitational field. A light source inside the box emits a light ray that is initially parallel to the floor of the box according to both observers.



- (a) State the equivalence principle. [1]

.....  
.....

- (b) State and explain the path of the light ray according to (i) observer X. [2]

.....  
.....  
.....  
.....

- (ii) observer Y. [2]

.....  
.....  
.....  
.....

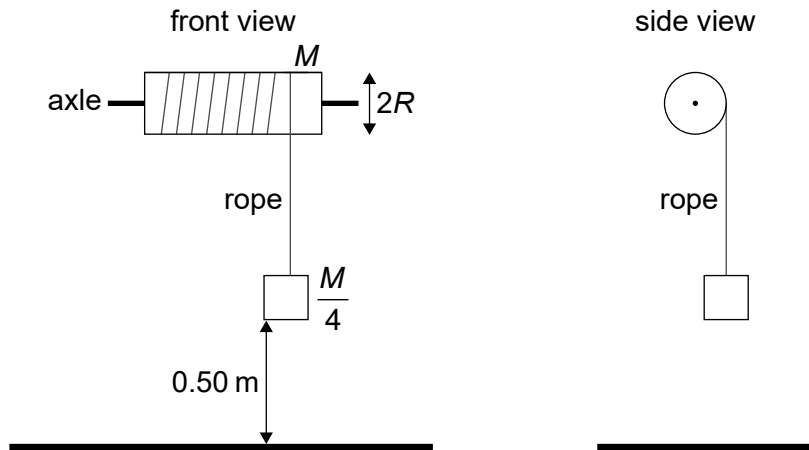
**End of Option A**



**Option B — Engineering physics**

8. A solid cylinder of mass  $M$  and radius  $R$  is free to rotate about a fixed horizontal axle. A rope is tied around the cylinder and a block of mass  $\frac{M}{4}$  is attached to the end of the rope.

diagram not to scale



The system is initially at rest and the block is released. The moment of inertia of the cylinder about the axle is  $\frac{1}{2}MR^2$ .

(a) Show that

- (i) the angular acceleration  $\alpha$  of the cylinder is  $\frac{g}{3R}$  [3]

.....

.....

.....

.....

.....

.....

.....

.....

- (ii) the tension  $T$  in the string is  $\frac{Mg}{6}$ . [1]

.....

.....

(Option B continues on the following page)



**(Option B, question 8 continued)**

- (b) The block falls a distance 0.50 m after its release before hitting the ground. Show that the block hits the ground 0.55 s after release. [2]

.....

.....

.....

.....

- (c) The following data are available:

$$R = 0.20 \text{ m}$$

$$M = 12 \text{ kg}$$

Calculate, for the cylinder, at the instant just before the block hits the ground

- (i) the angular momentum. [2]

.....

.....

.....

.....

- (ii) the kinetic energy. [2]

.....

.....

.....

.....

**(Option B continues on the following page)**



**(Option B continued)**

9. (a) Show that during an adiabatic expansion of an ideal monatomic gas the temperature  $T$  and volume  $V$  are given by [2]

$$TV^{\frac{5}{3}} = \text{constant}$$

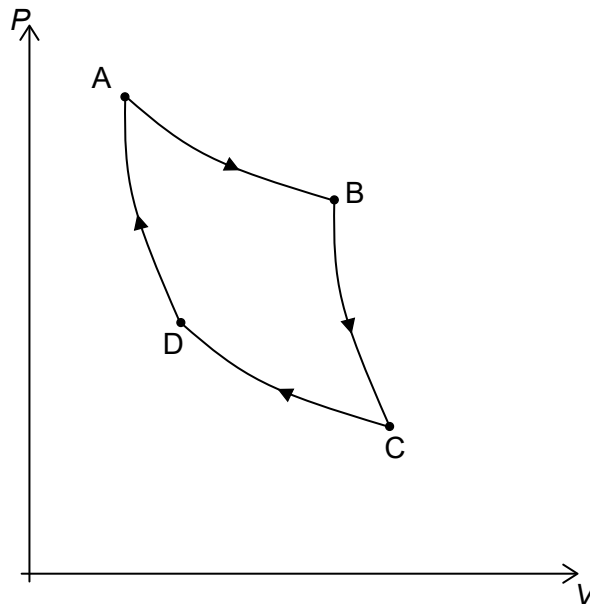
.....

.....

.....

.....

- (b) The diagram shows a Carnot cycle for an ideal monatomic gas.



The highest temperature in the cycle is 620K and the lowest is 340K.

- (i) Calculate the efficiency of the cycle. [1]

.....

.....

**(Option B continues on the following page)**



**(Option B, question 9 continued)**

- (ii) The work done during the isothermal expansion A → B is 540 J. Calculate the thermal energy that leaves the gas during one cycle. [2]

.....

.....

.....

.....

- (iii) Calculate the ratio  $\frac{V_C}{V_B}$  where  $V_C$  is the volume of the gas at C and  $V_B$  is the volume at B. [2]

.....

.....

.....

.....

.....

.....

- (c) (i) Calculate the change in the entropy of the gas during the change A to B. [1]

.....

.....

- (ii) Explain, by reference to the second law of thermodynamics, why a real engine operating between the temperatures of 620 K and 340 K cannot have an efficiency greater than the answer to (b)(i). [2]

.....

.....

.....

.....

**(Option B continues on the following page)**



Turn over



(Option B continued)

10. (a) State **one** condition that must be satisfied for the Bernoulli equation

$$\frac{1}{2}\rho v^2 + \rho g z + p = \text{constant}$$

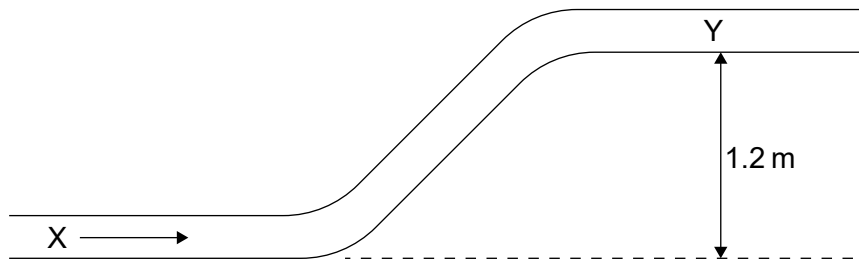
to apply.

[1]

.....

.....

(b) Gasoline of density  $720 \text{ kg m}^{-3}$  flows in a pipe of constant diameter.



(i) Outline why the speed of the gasoline at X is the same as that at Y.

[1]

.....

.....

(ii) Calculate the difference in pressure between X and Y.

[2]

.....

.....

.....

.....

(Option B continues on the following page)



**(Option B, question 10 continued)**

(iii) The diameter at Y is made smaller than that at X. Explain why the pressure difference between X and Y will increase.

[2]

.....

.....

.....

.....

**(Option B continues on the following page)**

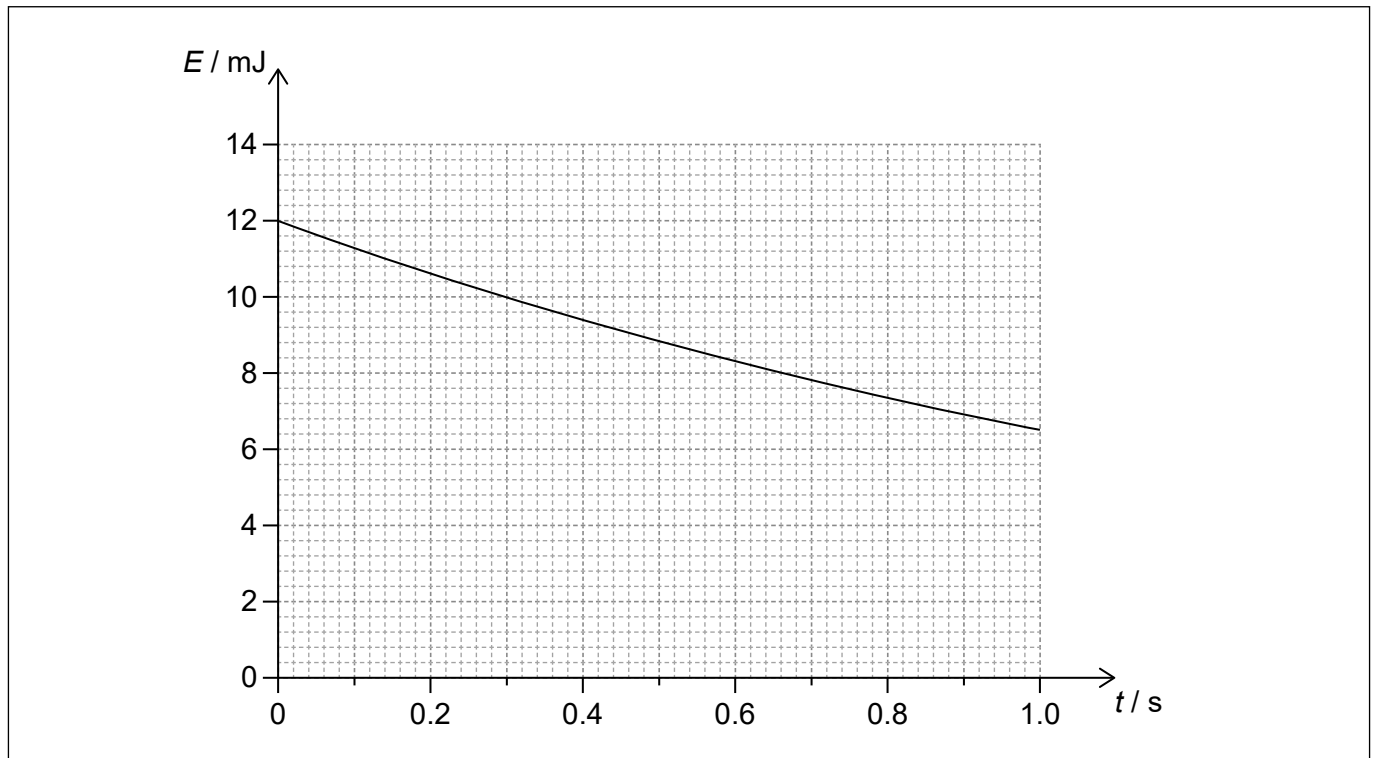


32EP17

Turn over

**(Option B continued)**

11. The graph shows the variation with time  $t$  of the total energy  $E$  of a damped oscillating system.



- (a) The Q factor for the system is 25. Determine the period of oscillation for this system. [3]

.....

.....

.....

.....

.....

.....

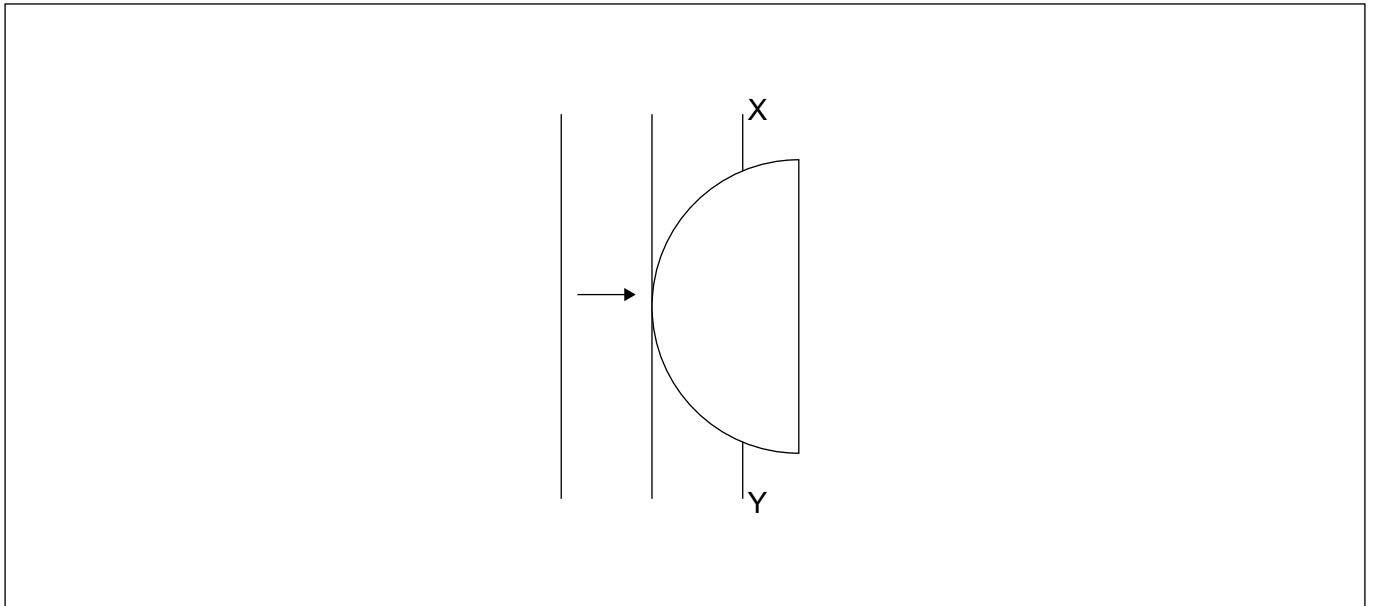
- (b) Another system has the same initial total energy and period as that in (a) but its Q factor is greater than 25. Without any calculations, draw on the graph, the variation with time of the total energy of this system. [1]

**End of Option B**



**Option C — Imaging**

12. Plane wavefronts in air are incident on the curved side of a transparent semi-circular block of refractive index 2.0.



Part of wavefront XY outside the block is shown.

Draw, on the diagram, the wavefront inside the block.

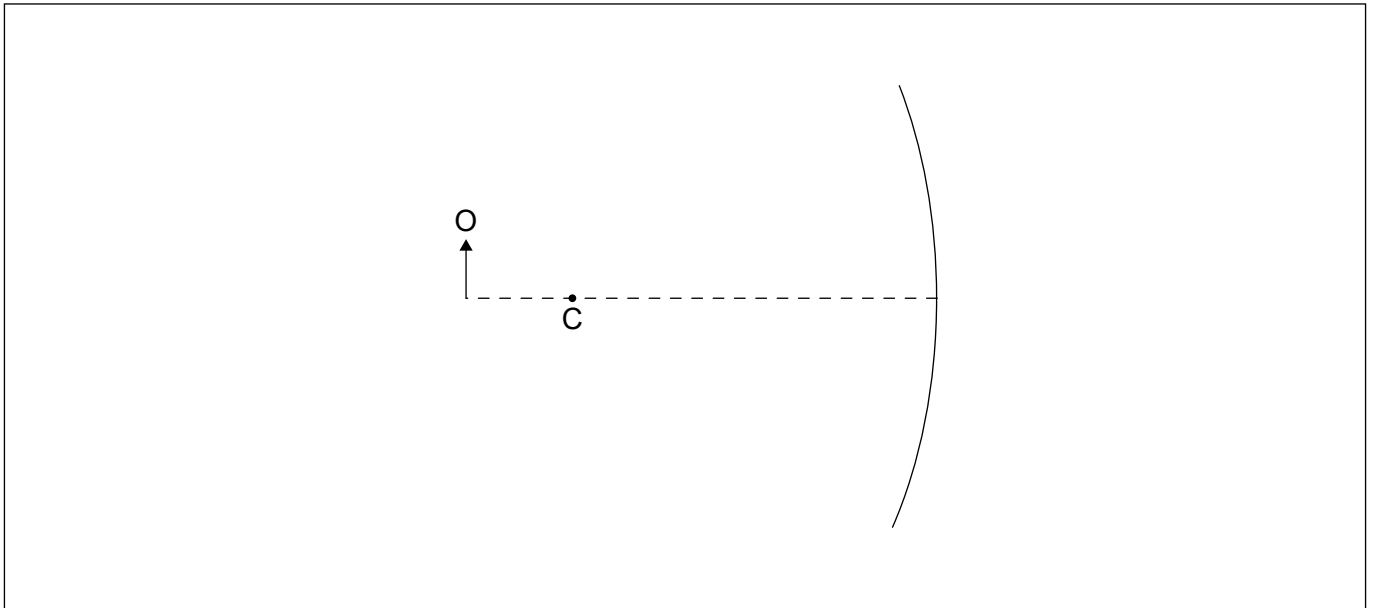
[2]

(Option C continues on the following page)



**(Option C continued)**

13. (a) An object O is placed in front of a concave mirror. The centre of the mirror is labelled with the letter C.



- (i) Label the focal point of the mirror with the letter F. [1]
- (ii) Sketch **two** appropriate rays on the diagram to show the formation of the image. Label the image with the letter I. [3]
- (iii) The upper half of the mirror is blackened so it cannot reflect any light. State the effect of this, if any, on the image. [1]

.....

.....

**(Option C continues on the following page)**



**(Option C, question 13 continued)**

- (b) A concave mirror of radius 3.0 m is used to form the image of the full Moon. The distance from the mirror to the Moon is  $3.8 \times 10^8$  m and the diameter of the Moon is  $3.5 \times 10^6$  m.

Determine the diameter of the image of the Moon.

[3]

.....

.....

.....

.....

.....

.....

.....

.....

.....

.....

**(Option C continues on the following page)**

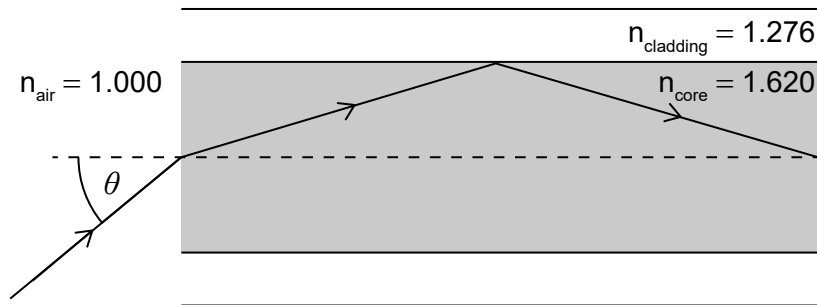


32EP21

Turn over

**(Option C continued)**

14. (a) The diagram shows a light ray incident from air into the core of an optic fibre. The angle of incidence is  $\theta$ . Values of refractive indices are shown on the diagram.



- (i) Calculate the critical angle at the core–cladding boundary. [2]

.....

.....

.....

.....

- (ii) Show that the maximum value of  $\theta$  for which total internal reflection will take place at the core–cladding boundary is about  $90^\circ$ . [3]

.....

.....

.....

.....

.....


.....

- (iii) Comment on your answer to part (a)(ii). [1]

.....

.....

**(Option C continues on the following page)**



**(Option C, question 14 continued)**

- (iv) A signal consists of two rays that enter the core at angle of incidence  $\theta = 0$  and  $\theta = \theta_{\max}$ . Identify a disadvantage of this fibre for transmitting this signal [2]

.....

.....

.....

.....

- (b) Outline the significance of optic fibres in modern communications. [2]

.....

.....

.....

.....

**(Option C continues on the following page)**





**(Option C continued)**

**15.** (a) Outline how ultrasound, in a medical context, is produced. [2]

.....  
.....

(b) Suggest the advantage in medical diagnosis of using ultrasound of frequency 1 MHz rather than 0.1 MHz. [2]

.....  
.....

(c) Ultrasound can be used to measure the dimensions of a blood vessel. Suggest why a B scan is preferable to an A scan for this application. [2]

.....  
.....

**(Option C continues on the following page)**



**(Option C continued)**

16. (a) A parallel beam of X-rays travels through 7.8 cm of tissue to reach the bowel surface. Calculate the fraction of the original intensity of the X-rays that reach the bowel surface. The linear attenuation coefficient for tissue is  $0.24 \text{ cm}^{-1}$ . [2]

.....

.....

.....

.....

- (b) The fluid in the bowel has a similar linear attenuation coefficient as the bowel surface. Gases have much lower linear attenuation coefficients than fluids. Explain why doctors will fill the bowel with air before taking an X-ray image. [2]

.....

.....

.....

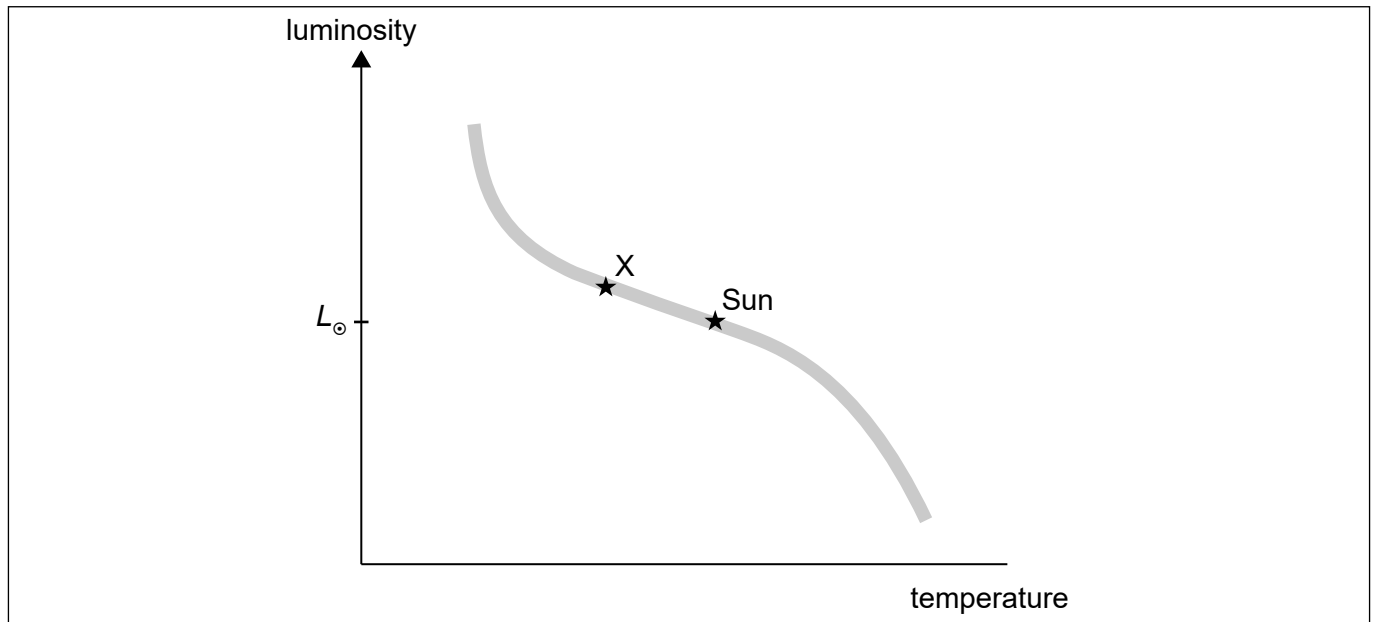
.....

**End of Option C**



## Option D — Astrophysics

17. The Hertzsprung–Russell (HR) diagram shows the Sun and a main sequence star X.



The following data are available for the mass and radius of star X where  $M_{\odot}$  is the mass of the Sun and  $R_{\odot}$  is the radius of the Sun:

$$M_X = 5.0 M_{\odot}$$

$$R_X = 3.2 R_{\odot}$$

- (a) (i) Show that the luminosity of star X is about 280 times greater than the luminosity of the Sun  $L_{\odot}$ .

[1]

.....

.....

- (ii) Determine the ratio  $\frac{\text{surface temperature of star X}}{\text{surface temperature of the Sun}}$ .

[2]

.....

.....

.....

.....

.....

.....

(Option D continues on the following page)



**(Option D, question 17 continued)**

(b) The parallax angle for star X is 0.125 arc-second.

(i) Outline how the parallax angle of a star can be measured.

[2]

.....

.....

.....

.....

(ii) Show that the distance to star X is  $1.6 \times 10^6$  AU.

[2]

.....

.....

.....

.....

(iii) The apparent brightness of the Sun is  $1400 \text{ Wm}^{-2}$ . Calculate, in  $\text{Wm}^{-2}$ , the apparent brightness of star X.

[2]

.....

.....

.....

.....

.....

.....

**(Option D continues on the following page)**



32EP27

Turn over

**(Option D, question 17 continued)**

(c) Star X will evolve to become a white dwarf star D.

(i) Label, on the HR diagram, the region of white dwarf stars. [1]

(ii) Outline the condition that prevents star D from collapsing further. [1]

.....  
.....

(iii) Star D emits energy into space in the form of electromagnetic radiation. State the origin of this energy. [1]

.....  
.....

(iv) Predict the change in luminosity of star D as time increases. [1]

.....  
.....

**18.** (a) Light from a distant galaxy observed on Earth shows a redshift of 0.15.

(i) Outline what is meant by redshift. [1]

.....  
.....

(ii) Determine the distance to this galaxy assuming a Hubble constant of  $H_0 = 72 \text{ km s}^{-1} \text{ Mpc}^{-1}$ . [2]

.....  
.....  
.....  
.....

**(Option D continues on the following page)**



(Option D, question 18 continued)

- (b) (i) The cosmic microwave background (CMB) radiation provides strong evidence for the Big Bang model. State the **two** main pieces of this evidence. [2]

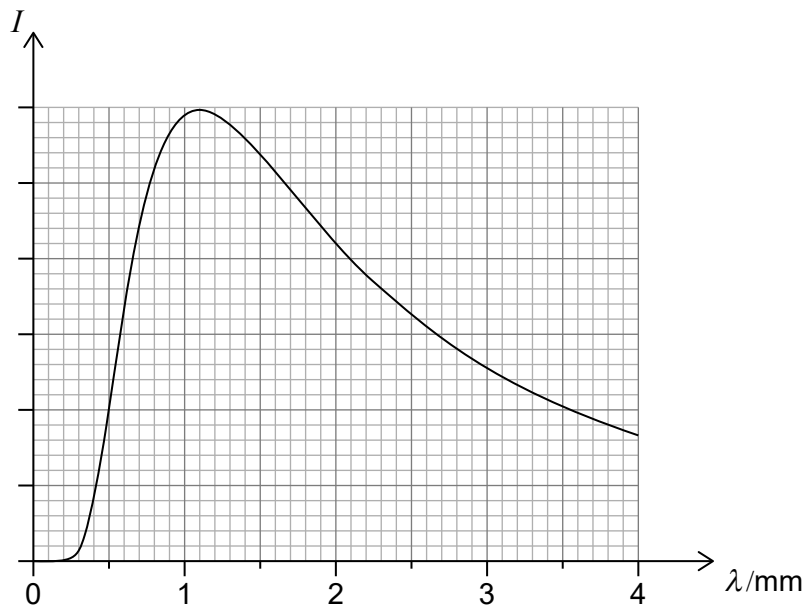
.....

.....

.....

.....

- (ii) The graph shows the variation of the intensity  $I$  of the CMB with wavelength  $\lambda$ .



Determine, using the graph, the temperature of the CMB. [2]

.....

.....

.....

.....

(Option D continues on the following page)



32EP29

Turn over

**(Option D continued)**

19. (a) Describe the mechanism of formation of

(i) type Ia supernovae.

[2]

.....

.....

.....

.....

.....

.....

(ii) type II supernovae.

[1]

.....

.....

.....

(b) Suggest why type Ia supernovae were used in the study that led to the conclusion that the expansion of the universe is accelerating.

[2]

.....

.....

.....

.....

**(Option D continues on the following page)**



**(Option D continued)**

20. (a) Light from distant galaxies is redshifted. Explain the cosmological origin of this redshift. [2]

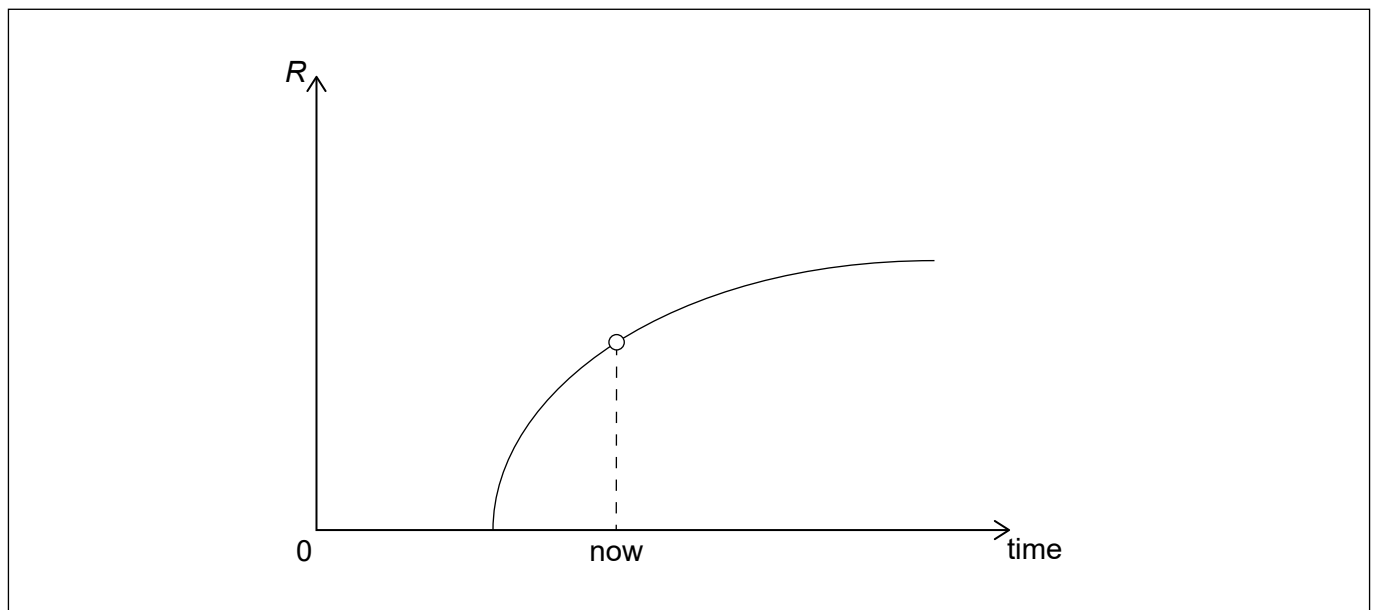
.....

.....

.....

.....

- (b) The graph shows the variation with time of the cosmic scale factor  $R$  of the universe for the flat model of the universe **without** dark energy.



- (i) Draw, on the axes, a graph to show the variation with time of the cosmic scale factor  $R$  for the flat model of the universe **with** dark energy. [1]
- (ii) Compare and contrast, the variation with time of the temperature of the cosmic background (CMB) radiation, for the two models from the present time onward. [2]


.....

.....

.....

.....

**End of Option D**





Please **do not** write on this page.

Answers written on this page  
will not be marked.



32EP32