

**Physics**  
**Standard level**  
**Paper 3**

Wednesday 31 October 2018 (morning)

Candidate session number

1 hour

--	--	--	--	--	--	--	--	--	--

**Instructions to candidates**

- Write your session number in the boxes above.
- Do not open this examination paper until instructed to do so.
- Answers must be written within the answer boxes provided.
- A calculator is required for this paper.
- A clean copy of the **physics data booklet** is required for this paper.
- The maximum mark for this examination paper is **[35 marks]**.

Section A	Questions
Answer all questions.	1 – 2

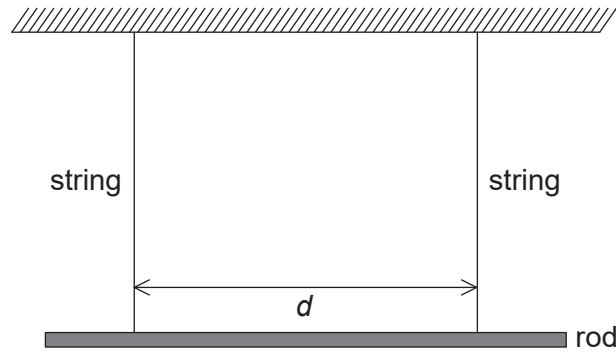
Section B	Questions
Answer all of the questions from one of the options.	
Option A — Relativity	3 – 5
Option B — Engineering physics	6 – 7
Option C — Imaging	8 – 10
Option D — Astrophysics	11 – 13



### Section A

Answer **all** questions. Answers must be written within the answer boxes provided.

1. In an investigation to measure the acceleration of free fall a rod is suspended horizontally by two vertical strings of equal length. The strings are a distance  $d$  apart.



When the rod is displaced by a small angle and then released, simple harmonic oscillations take place in a horizontal plane.

The theoretical prediction for the period of oscillation  $T$  is given by the following equation

$$T = \frac{c}{d\sqrt{g}}$$

where  $c$  is a known numerical constant.

- (a) State the unit of  $c$ .

[1]

.....

- (b) A student records the time for 20 oscillations of the rod. Explain how this procedure leads to a more precise measurement of the time for **one** oscillation  $T$ .

[2]

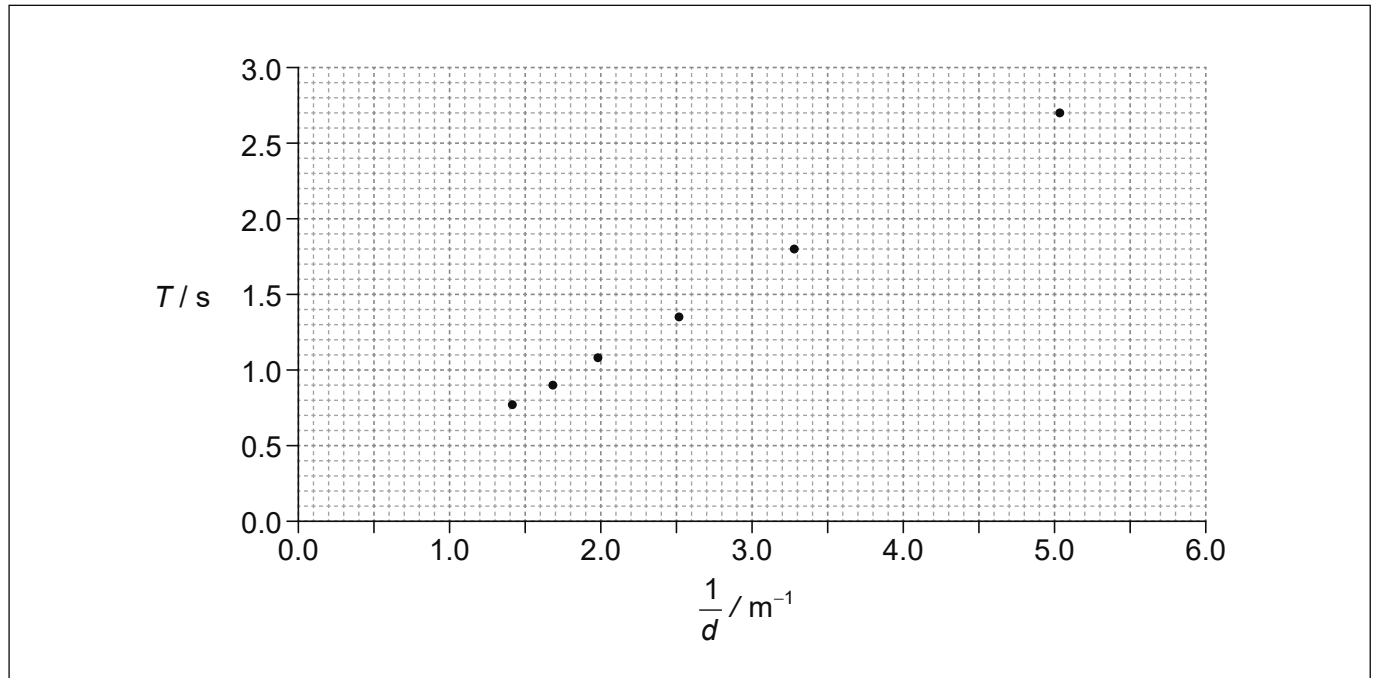
.....  
 .....  
 .....  
 .....

(This question continues on the following page)



**(Question 1 continued)**

- (c) In one experiment  $d$  was varied. The graph shows the plotted values of  $T$  against  $\frac{1}{d}$ . Error bars are negligibly small.



- (i) Draw the line of best fit for these data. [1]
- (ii) Suggest whether the data are consistent with the theoretical prediction. [2]

.....

.....

.....

.....

**(This question continues on the following page)**



**(Question 1 continued)**

- (d) The numerical value of the constant  $c$  in SI units is 1.67. Determine  $g$ , using the graph.

[4]

.....

.....

.....

.....

.....

.....

.....

.....



2. In an experiment to measure the specific latent heat of vaporization of water  $L_v$ , a student uses an electric heater to boil water. A mass  $m$  of water vaporizes during time  $t$ .  $L_v$  may be calculated using the relation

$$L_v = \frac{VIt}{m}$$

where  $V$  is the voltage applied to the heater and  $I$  the current through it.

- (a) Outline why, during the experiment,  $V$  and  $I$  should be kept constant. [1]

.....

.....

- (b) Outline whether the value of  $L_v$  calculated in this experiment is expected to be larger or smaller than the actual value. [2]

.....

.....

.....

.....

- (c) A student suggests that to get a more accurate value of  $L_v$  the experiment should be performed twice using different heating rates. With voltage and current  $V_1, I_1$  the mass of water that vaporized in time  $t$  is  $m_1$ . With voltage and current  $V_2, I_2$  the mass of water that vaporized in time  $t$  is  $m_2$ . The student now uses the expression

$$L_v = \frac{(V_1 I_1 - V_2 I_2)t}{m_1 - m_2}$$


- to calculate  $L_v$ . Suggest, by reference to heat losses, why this is an improvement. [2]

.....

.....

.....

.....

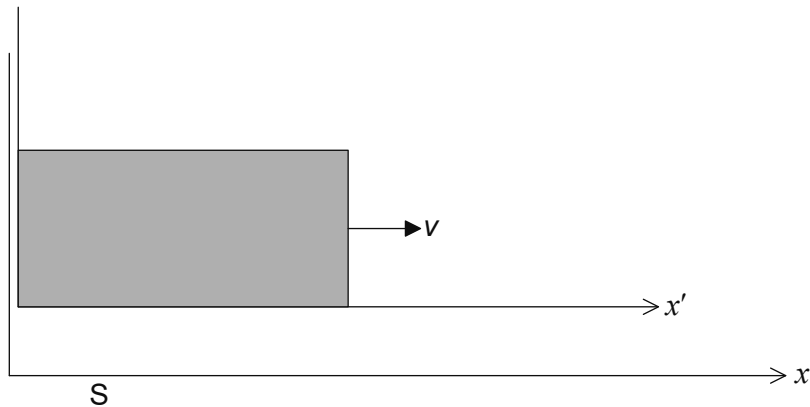


**Section B**

Answer **all** of the questions from **one** of the options. Answers must be written within the answer boxes provided.

**Option A — Relativity**

3. The diagram shows the axes for two inertial reference frames. Frame S represents the ground and frame S' is a box that moves to the right relative to S with speed  $v$ .



- (a) State what is meant by a reference frame.

[1]

..... .....
----------------

(Option A continues on the following page)



**(Option A, question 3 continued)**

- (b) When the origins of the two frames coincide all clocks show zero. At that instant a beam of light of speed  $c$  is emitted from the left wall of the box towards the right wall. The box has proper length  $L$ . Consider the event E = light arrives at the right wall of the box.

Using **Galilean** relativity,

- (i) explain why the time coordinate of E in frame S is  $t = \frac{L}{c}$ . [2]

.....

.....

.....

.....

- (ii) hence show that the space coordinate of E in frame S is  $x = L + \frac{vL}{c}$ . [1]

.....

.....

.....

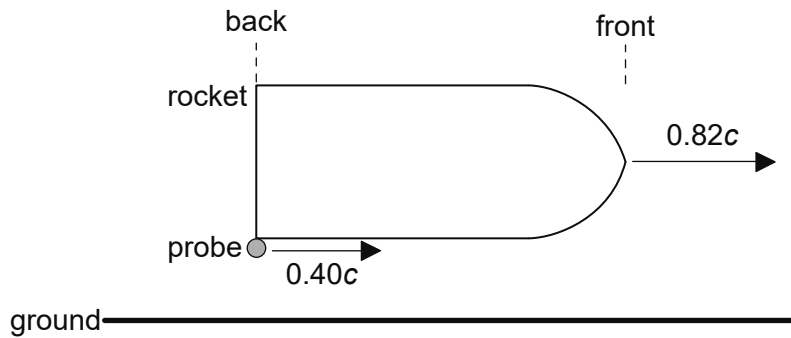
.....

**(Option A continues on the following page)**



(Option A continued)

4. A rocket of proper length 120 m moves to the right with speed  $0.82c$  relative to the ground.



A probe is released from the back of the rocket at speed  $0.40c$  relative to the rocket.

- (a) Calculate the speed of the probe relative to the ground.

[2]

.....

.....

.....

.....

(Option A continues on the following page)





**(Option A, question 4 continued)**

(b) Determine the time it takes the probe to reach the front of the rocket according to an observer

(i) at rest in the rocket.

[2]

.....  
.....  
.....  
.....

(ii) at rest on the ground.

[3]

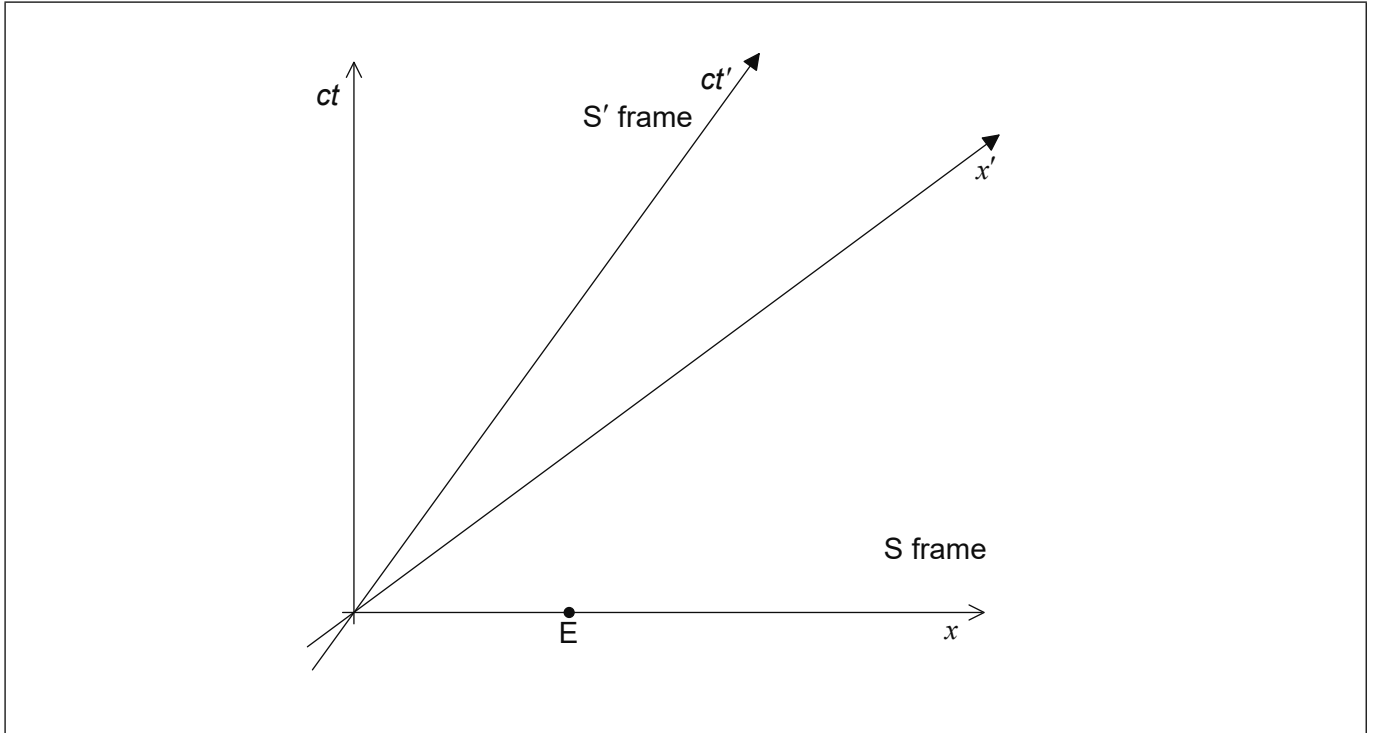
.....  
.....  
.....  
.....  
.....  
.....

**(Option A continues on the following page)**



(Option A continued)

5. The spacetime diagram shows the axes of an inertial reference frame S and the axes of a second inertial reference frame S' that moves relative to S with speed 0.745c. When clocks in both frames show zero the origins of the two frames coincide.



- (a) Event E has coordinates  $x = 1$  m and  $ct = 0$  in frame S. Show that in frame S' the space coordinate and time coordinate of event E are

(i)  $x' = 1.5$  m. [2]

.....

.....

.....

(ii)  $ct' = -1.1$  m. [1]

.....

.....

.....

(Option A continues on the following page)



**(Option A, question 5 continued)**

(b) Label, on the diagram,

(i) the space coordinate of event E in the S' frame. Label this event with the letter P. [1]

(ii) the event that has coordinates  $x' = 1.0$  m and  $ct' = 0$ . Label this event with the letter Q. [1]

(c) A rod at rest in frame S has proper length 1.0 m. At  $t = 0$  the left-hand end of the rod is at  $x = 0$  and the right-hand end is at  $x = 1.0$  m.

Using the spacetime diagram,

(i) outline without calculation, why observers in frame S' measure the length of the rod to be less than 1.0 m. [3]

.....

.....

.....

.....

.....

.....

.....

.....

(ii) estimate, in m, the length of this rod in the S' frame. [1]

.....


.....

**End of Option A**



**Option B — Engineering physics**

6. A uniform rod of weight 36.0 N and length 5.00 m rests horizontally. The rod is pivoted at its left-hand end and is supported at a distance of 4.00 m from the frictionless pivot.



- (a) Calculate the force the support exerts on the rod.

[2]

.....

.....

.....

.....

- (b) The support is suddenly removed and the rod begins to rotate clockwise about the pivot point. The moment of inertia of the rod about the pivot point is  $30.6 \text{ kg m}^2$ .

- (i) Calculate, in  $\text{rad s}^{-2}$ , the initial angular acceleration  $\alpha$  of the rod.

[2]

.....

.....

.....

.....

- (ii) After time  $t$  the rod makes an angle  $\theta$  with the horizontal. Outline why the equation  $\theta = \frac{1}{2}\alpha t^2$  **cannot** be used to find the time it takes  $\theta$  to become  $\frac{\pi}{2}$  (that is for the rod to become vertical for the first time).

[2]

.....

.....

.....

.....

(Option B continues on the following page)



**(Option B, question 6 continued)**

(c) At the instant the rod becomes vertical

(i) show that the angular speed is  $\omega = 2.43 \text{ rad s}^{-1}$ . [3]

.....  
.....  
.....  
.....  
.....  
.....

(ii) calculate the angular momentum of the rod. [1]

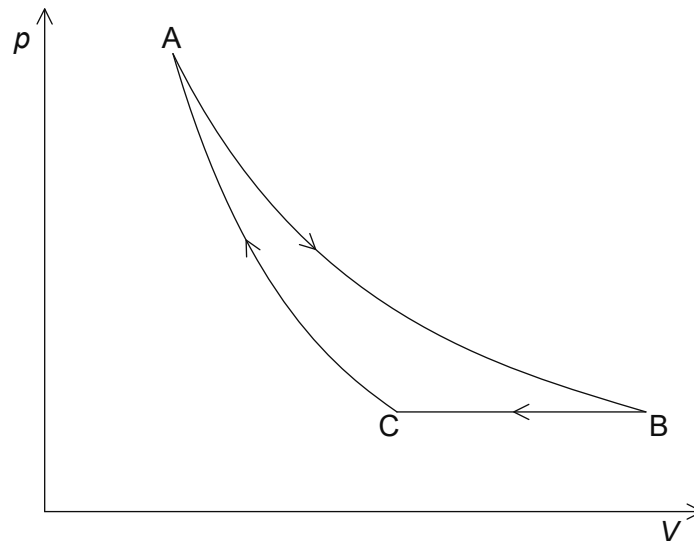
.....  
.....  
.....

**(Option B continues on the following page)**



**(Option B continued)**

7. The  $pV$  diagram of a heat engine using an ideal gas consists of an isothermal expansion  $A \rightarrow B$ , an isobaric compression  $B \rightarrow C$  and an adiabatic compression  $C \rightarrow A$ .



The following data are available:

Temperature at A	= 385 K
Pressure at A	= $2.80 \times 10^6$ Pa
Volume at A	= $1.00 \times 10^{-4}$ m <sup>3</sup>
Volume at B	= $2.80 \times 10^{-4}$ m <sup>3</sup>
Volume at C	= $1.85 \times 10^{-4}$ m <sup>3</sup>

**(Option B continues on the following page)**



**(Option B, question 7 continued)**

(a) Show that at C the

(i) pressure is  $1.00 \times 10^6$  Pa.

[2]

.....  
.....  
.....  
.....

(ii) temperature is 254 K.

[2]

.....  
.....  
.....  
.....

(b) Show that the thermal energy transferred from the gas during the change B → C is 238 J.

[3]

.....  
.....  
.....  
.....  
.....  
.....  
.....  
.....

**(Option B continues page 17)**



Please **do not** write on this page.

Answers written on this page  
will not be marked.





**(Option B, question 7 continued)**

- (c) (i) The work done by the gas from  $A \rightarrow B$  is 288 J. Calculate the efficiency of the cycle.

[2]

.....

.....

.....

.....

.....

.....

- (ii) State, without calculation, during which change ( $A \rightarrow B$ ,  $B \rightarrow C$  or  $C \rightarrow A$ ) the entropy of the gas decreases.

[1]

.....

.....

.....

**End of Option B**



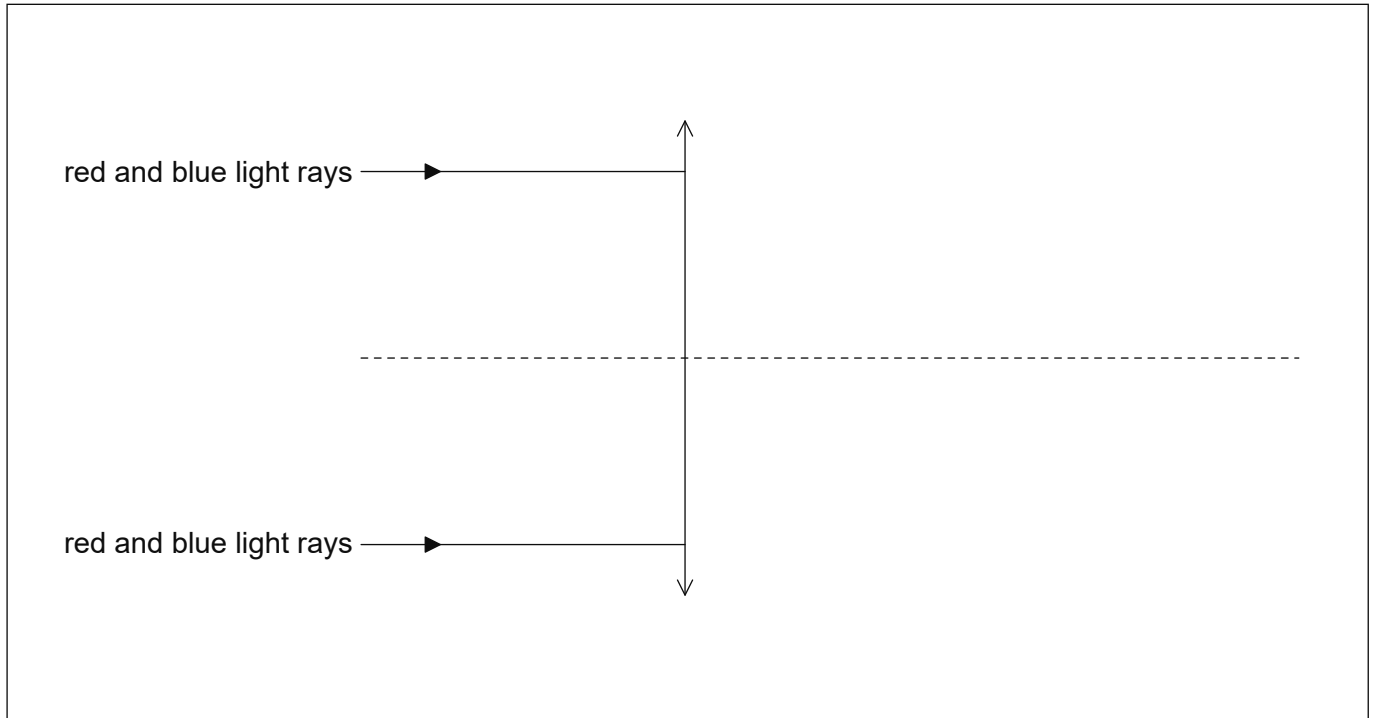
Please **do not** write on this page.

Answers written on this page  
will not be marked.



**Option C — Imaging**

8. The refractive index of glass decreases with increasing wavelength. The diagram shows rays of light incident on a converging lens made of glass. The light is a mixture of red and blue light.



- (a) On the diagram, draw lines to show the rays after they have refracted through the lens. Label the refracted red rays with the letter R and the refracted blue rays with the letter B. [3]
- (b) (i) Suggest how the refracted rays in (a) are modified when the converging lens is replaced by a diverging lens. [1]

.....

.....

- (ii) Hence state how the defect of the converging lens in (a) may be corrected. [1]

.....

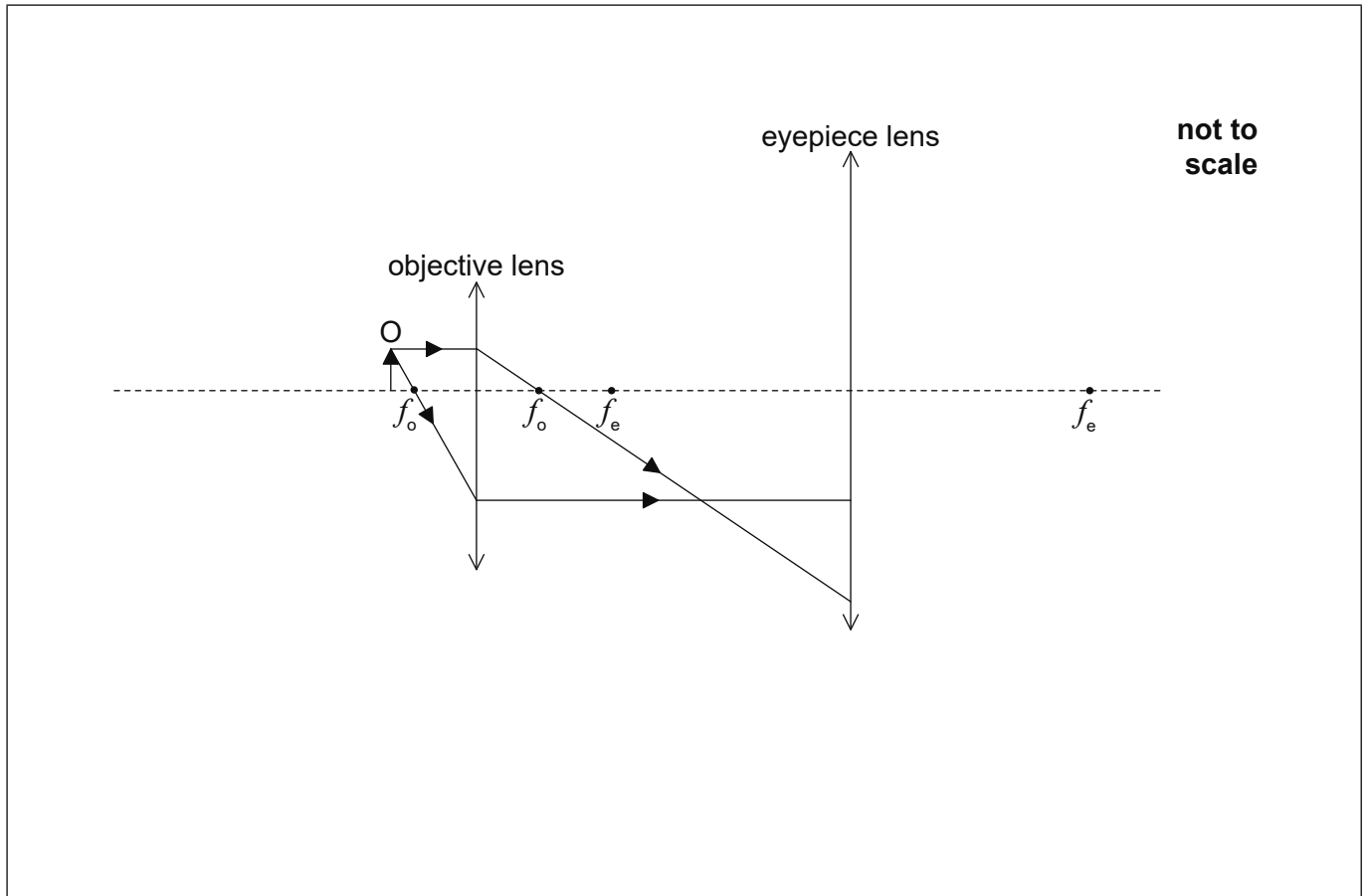
.....

(Option C continues on the following page)



**(Option C continued)**

9. The diagram shows two light rays that form an intermediate image by the objective lens of an optical compound microscope. These rays are incident on the eyepiece lens. The focal points of the two lenses are marked.



- (a) Draw rays on the diagram to show the formation of the final image.

[2]

(Option C continues on the following page)



**(Option C, question 9 continued)**

(b) The object O is placed at a distance of 24.0 mm from the objective lens and the final image is formed at a distance 240 mm from the eyepiece lens. The focal length of the objective lens is 20.0 mm and that of the eyepiece lens is 60.0 mm. The near point of the observer is at a distance of 240 mm from the eyepiece lens.

(i) Calculate the distance between the lenses. [3]

.....

.....

.....

.....

.....

.....

.....

.....

.....

(ii) Determine the magnification of the microscope. [2]

.....

.....

.....

.....

**(Option C continues on the following page)**



**(Option C continued)**

**10.** (a) An optic fibre consists of a glass core of refractive index 1.52 surrounded by cladding of refractive index  $n$ . The critical angle at the glass–cladding boundary is  $84^\circ$ .

(i) Calculate  $n$ .

[2]

.....  
.....  
.....  
.....

(ii) The refractive indices of the glass and cladding are only slightly different. Suggest why this is desirable.

[1]

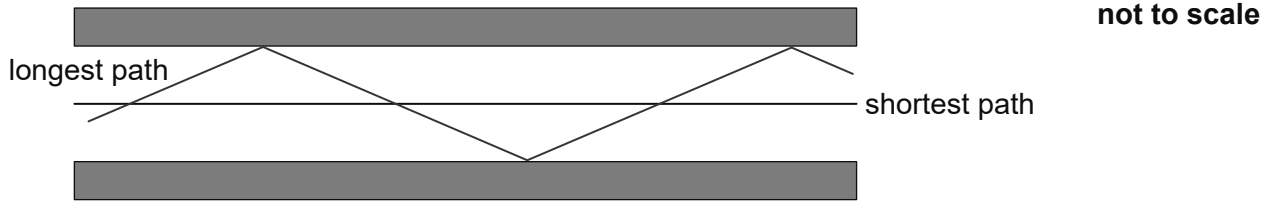
.....  
.....  
.....

**(Option C continues on the following page)**



(Option C, question 10 continued)

(b) The diagram shows the longest and shortest paths that a ray can follow inside the fibre.



For the longest path the rays are incident at the core-cladding boundary at an angle just slightly greater than the critical angle. The optic fibre has a length of 12 km.

(i) Show that the longest path is 66 m longer than the shortest path. [2]

.....

.....

.....

.....

.....

.....

(ii) Determine the time delay between the arrival of signals created by the extra distance in (b)(i). [2]

.....

.....

.....

.....

(iii) Suggest whether this fibre could be used to transmit information at a frequency of 100 MHz. [1]

.....

.....

.....

End of Option C



28EP23

Turn over

**Option D — Astrophysics**

11. A distinctive feature of the constellation Orion is the Trapezium, an open cluster of stars within Orion.

(a) Distinguish between a constellation and an open cluster. [2]

.....

.....

.....

.....

.....

.....

(b) Mintaka is one of the stars in Orion.

(i) The parallax angle of Mintaka measured from Earth is  $3.64 \times 10^{-3}$  arc-second. Calculate, in parsec, the approximate distance of Mintaka from Earth. [1]

.....

.....

(ii) State why there is a maximum distance that astronomers can measure using stellar parallax. [1]

.....

.....

12. The surface temperature of the star Epsilon Indi is 4600 K.

(a) (i) Determine the peak wavelength of the radiation emitted by Epsilon Indi. [1]

.....

.....

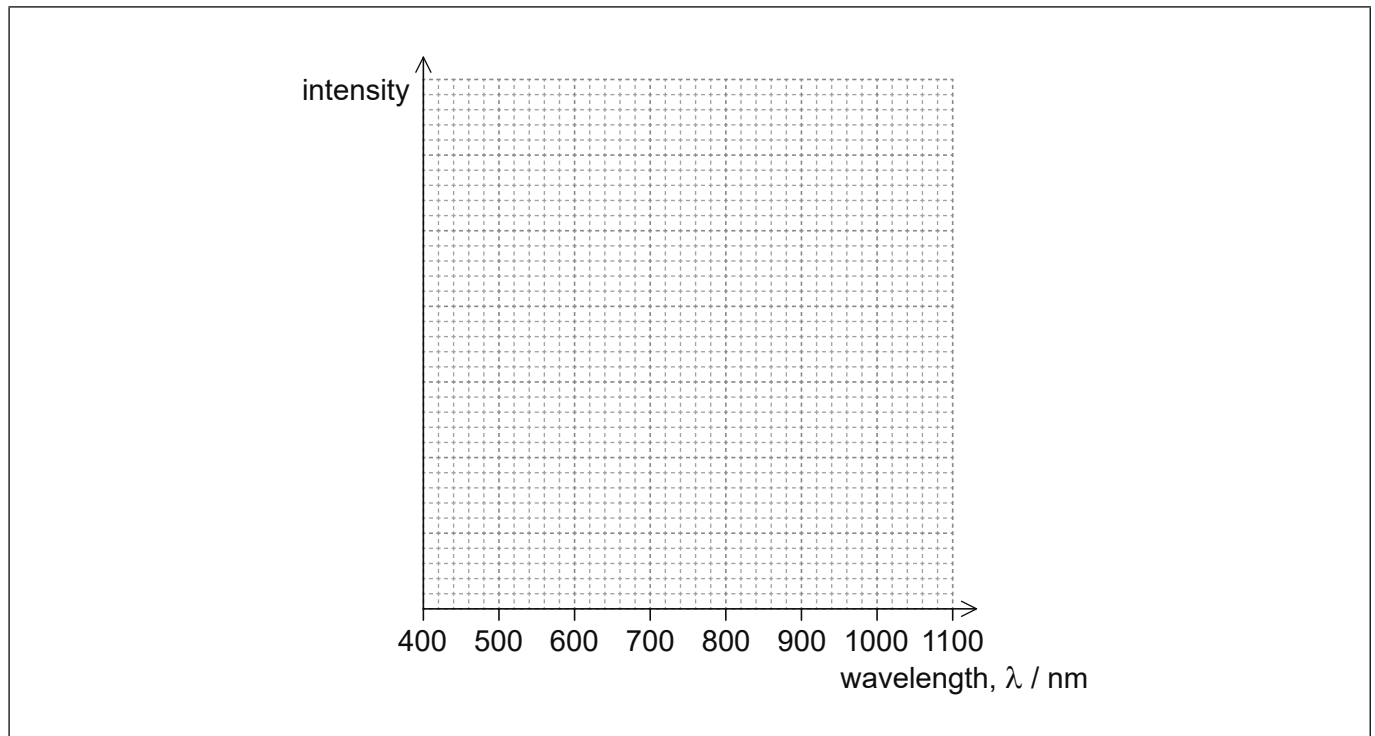
(Option D continues on the following page)





(Option D, question 12 continued)

- (ii) Using the axis, draw the variation with wavelength of the intensity of the radiation emitted by Epsilon Indi. [2]



- (iii) The following data are available for the Sun.

Surface temperature	= 5800 K
Luminosity	= $L_{\odot}$
Mass	= $M_{\odot}$
Radius	= $R_{\odot}$

Epsilon Indi has a radius of  $0.73 R_{\odot}$ . Show that the luminosity of Epsilon Indi is  $0.2 L_{\odot}$ . [2]

.....

.....

.....

.....

.....

.....

(Option D continues on the following page)



28EP25

Turn over

**(Option D, question 12 continued)**

(b) Epsilon Indi is a main sequence star. Show that the mass of Epsilon Indi is  $0.64 M_{\odot}$ . [1]

.....

.....

.....

.....

(c) Describe how the chemical composition of a star may be determined. [2]

.....

.....

.....

.....

(d) Describe the stages in the evolution of Epsilon Indi from the point when it leaves the main sequence until its final stable state. [3]

.....

.....

.....

.....

.....

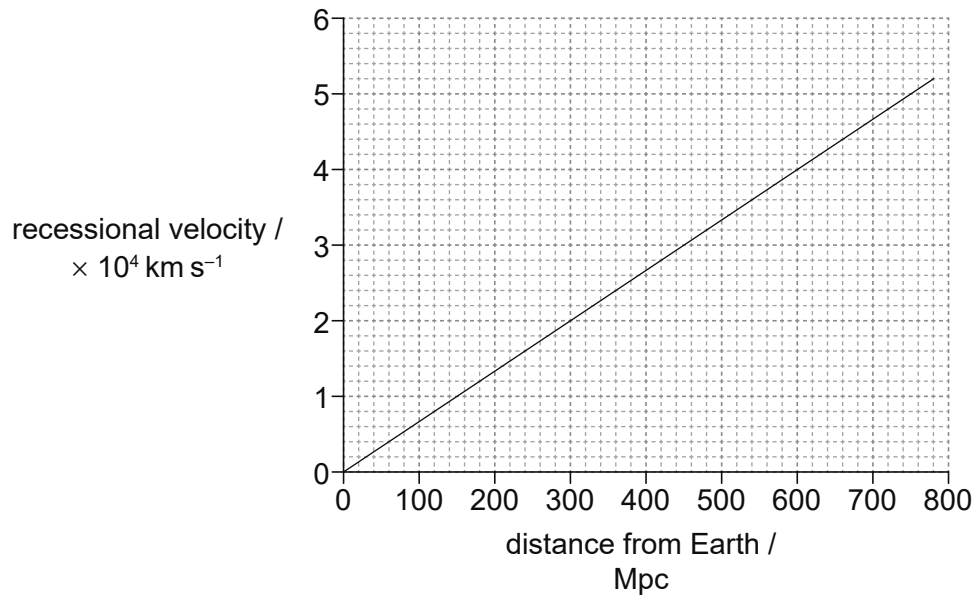
.....

**(Option D continues on the following page)**



**(Option D continued)**

13. The graph shows the variation with distance from the Earth of the recessional velocities of distant galaxies.



- (a) Outline how Hubble measured the recessional velocities of galaxies.

[2]

.....

.....

.....

.....

.....

.....

- (b) Using the graph, determine in s, the age of the universe.

[3]

.....

.....

.....

.....

.....

.....

**End of Option D**



Please **do not** write on this page.

Answers written on this page  
will not be marked.

