

**Chemistry**
Higher level
Paper 2

Thursday 14 May 2015 (afternoon)

Candidate session number

2 hours 15 minutes

--	--	--	--	--	--	--	--	--	--

Instructions to candidates

- Write your session number in the boxes above.
- Do not open this examination paper until instructed to do so.
- Section A: answer all questions.
- Section B: answer two questions.
- Write your answers in the boxes provided.
- A calculator is required for this paper.
- A clean copy of the **chemistry data booklet** is required for this paper.
- The maximum mark for this examination paper is **[90 marks]**.

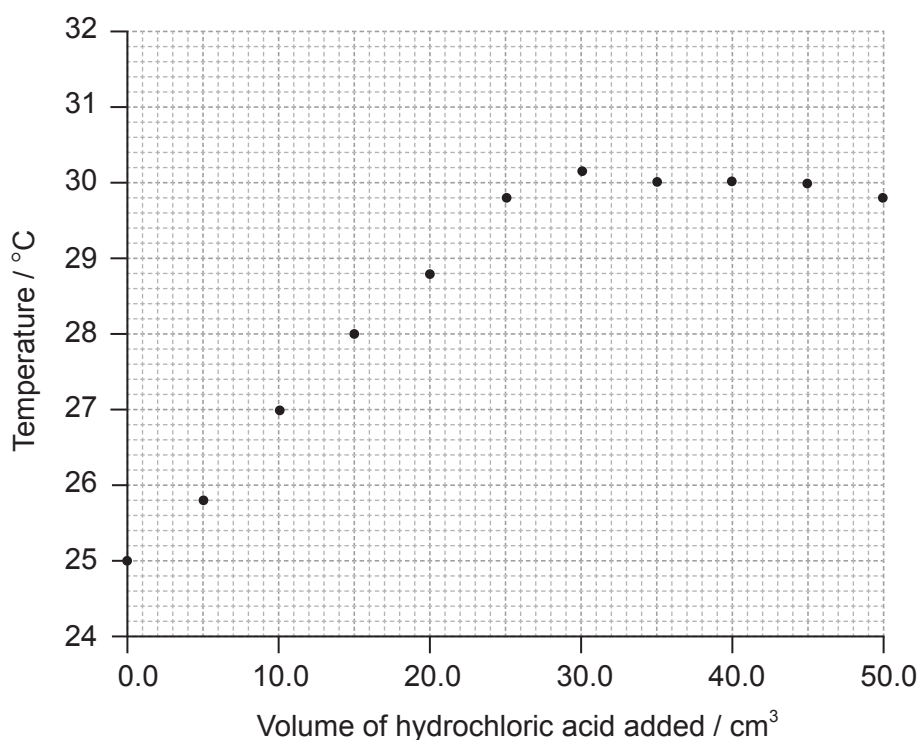


Section A

Answer **all** questions. Write your answers in the boxes provided.

1. A student carried out an experiment to determine the concentration of a hydrochloric acid solution and the enthalpy change of the reaction between aqueous sodium hydroxide and this acid by thermometric titration.

She added 5.0 cm^3 portions of hydrochloric acid to 25.0 cm^3 of 1.00 mol dm^{-3} sodium hydroxide solution in a glass beaker until the total volume of acid added was 50.0 cm^3 , measuring the temperature of the mixture each time. Her results are plotted in the graph below.



The initial temperature of both solutions was the same.

- (a) (i) By drawing appropriate lines, determine the volume of hydrochloric acid required to completely neutralize the 25.0 cm^3 of sodium hydroxide solution. [2]

.....

.....

(This question continues on the following page)



(Question 1 continued)

- (ii) Determine the concentration of the hydrochloric acid, including units. [2]

.....
.....
.....
.....

- (b) (i) Determine the change in temperature, ΔT . [1]

.....
.....

- (ii) Calculate the enthalpy change, in kJ mol^{-1} , for the reaction of hydrochloric acid and sodium hydroxide solution. [3]

.....
.....
.....
.....
.....
.....

- (iii) The accepted theoretical value from the literature of this enthalpy change is -58 kJ mol^{-1} . Calculate the percentage error correct to **two** significant figures. [1]

.....
.....

(This question continues on the following page)



(Question 1 continued)

- (iv) Suggest the major source of error in the experimental procedure **and** an improvement that could be made to reduce it.

[2]

.....

.....

.....

.....



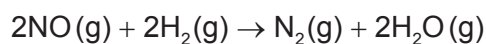
2. (a) Define the term *rate of reaction*. [1]

.....
.....

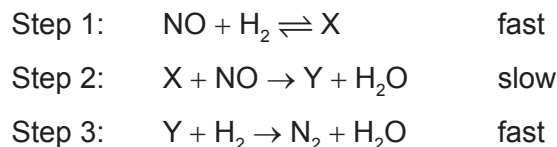
- (b) Explain why increasing the particle size of a solid reactant decreases the rate of reaction. [2]

.....
.....
.....

- (c) Nitrogen(II) oxide reacts with hydrogen according to the equation below.



A suggested mechanism for this reaction is:



- (i) Identify the rate-determining step. [1]


.....

- (ii) A student hypothesized that the order of reaction with respect to H_2 is 2. Evaluate this hypothesis. [2]

.....
.....
.....
.....



3. Carbon monoxide reacts with hydrogen to produce methanol.



Substance	$\Delta H_f^\ominus / \text{kJ mol}^{-1}$	$\Delta G_f^\ominus / \text{kJ mol}^{-1}$	$S^\ominus / \text{J mol}^{-1} \text{K}^{-1}$
CO (g)	- 110.5	- 137.2	+ 197.6
CH ₃ OH (l)	- 239.0	- 166.0	+ 126.8

- (a) Calculate the standard enthalpy change, ΔH^\ominus , in kJ mol^{-1} , for the reaction. [1]

.....

.....

- (b) Calculate the standard free energy change, ΔG^\ominus , in kJ mol^{-1} , for the reaction ($\Delta G_f^\ominus(\text{H}_2) = 0 \text{ kJ mol}^{-1}$). [1]

.....

.....

- (c) Using the values obtained in parts (a) and (b), calculate the standard entropy change, ΔS^\ominus , in $\text{J mol}^{-1} \text{K}^{-1}$, for the reaction at 298 K. [1]

.....

.....

.....

- (d) Determine the absolute entropy, S^\ominus , in $\text{J mol}^{-1} \text{K}^{-1}$, for $\text{H}_2(\text{g})$ at 298 K. [2]

.....

.....

.....

.....



4. A buffer solution with a pH of 3.87 contains 7.41 g dm^{-3} of propanoic acid, $\text{CH}_3\text{CH}_2\text{COOH}$, together with an unknown quantity of sodium propanoate, $\text{CH}_3\text{CH}_2\text{COONa}$.

(a) Define the term *buffer solution*.

[2]

.....

.....

.....

.....

(b) Explain, using appropriate equations, how this solution acts as a buffer solution.

[2]

.....

.....

.....

.....

(c) Calculate the concentration, in mol dm^{-3} , of sodium propanoate in this buffer solution. The $\text{p}K_{\text{a}}$ of propanoic acid is 4.87 at 298 K.

[4]

.....

.....

.....

.....

.....

.....

.....

.....



5. (a) State **two** features of a homologous series. [2]

.....
.....
.....

- (b) Ethane, a member of the homologous series of alkanes, can react with bromine. Explain the free-radical mechanism of this reaction, including any necessary reaction conditions. [4]

.....
.....
.....
.....
.....
.....
.....
.....
.....



6. Electrolysis is an important industrial process used to obtain very reactive elements from their common ores.

- (a) Molten magnesium chloride can be electrolysed using inert graphite electrodes at 800 °C.

Deduce the half-equations, including state symbols, for the reactions occurring at each electrode. (The melting points of MgCl_2 and Mg are 714 °C and 649 °C respectively.)

[3]

Positive electrode (anode):

.....

Negative electrode (cathode):

.....

- (b) Aluminium can also be obtained by electrolysis. Suggest **one** reason why aluminium is often used instead of iron by engineers.

[1]

.....

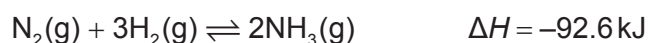
.....



Section B

Answer **two** questions. Write your answers in the boxes provided.

7. When nitrogen gas and hydrogen gas are allowed to react in a closed container the following equilibrium is established.



- (a) (i) Outline **two** characteristics of a reversible reaction in a state of dynamic equilibrium.

[2]

.....

.....

.....

.....

- (ii) Predict, with a reason, how each of the following changes affects the position of equilibrium.

[2]

The volume of the container is increased.

.....

.....

Ammonia is removed from the equilibrium mixture.

.....

.....

- (iii) Define the term *activation energy*, E_a .

[1]

.....

.....

(This question continues on the following page)



(Question 7 continued)

- (b) Ammonia is manufactured by the Haber process in which iron is used as a catalyst. Explain the effect of a catalyst on the rate of reaction. [2]

.....
.....
.....
.....

- (c) Typical conditions used in the Haber process are 500 °C and 200 atm, resulting in approximately 15% yield of ammonia.

- (i) Explain why a temperature lower than 500 °C is **not** used. [2]

.....
.....
.....

- (ii) Outline why a pressure higher than 200 atm is **not** often used. [1]

.....
.....

(This question continues on the following page)



(Question 7 continued)

- (d) (i) Deduce the equilibrium constant expression, K_c , for the reaction on page 10. [1]

.....
.....

- (ii) When 1.00 mol of nitrogen and 3.00 mol of hydrogen were allowed to reach equilibrium in a 1.00 dm³ container at a temperature of 500 °C and a pressure of 1000 atm, the equilibrium mixture contained 1.46 mol of ammonia.

Calculate the value of K_c at 500 °C. [2]

.....
.....
.....
.....
.....
.....

- (e) (i) Define the term *base* according to the Lewis theory. [1]

.....
.....

- (ii) Define the term *weak base* according to the Brønsted–Lowry theory. [1]

.....
.....

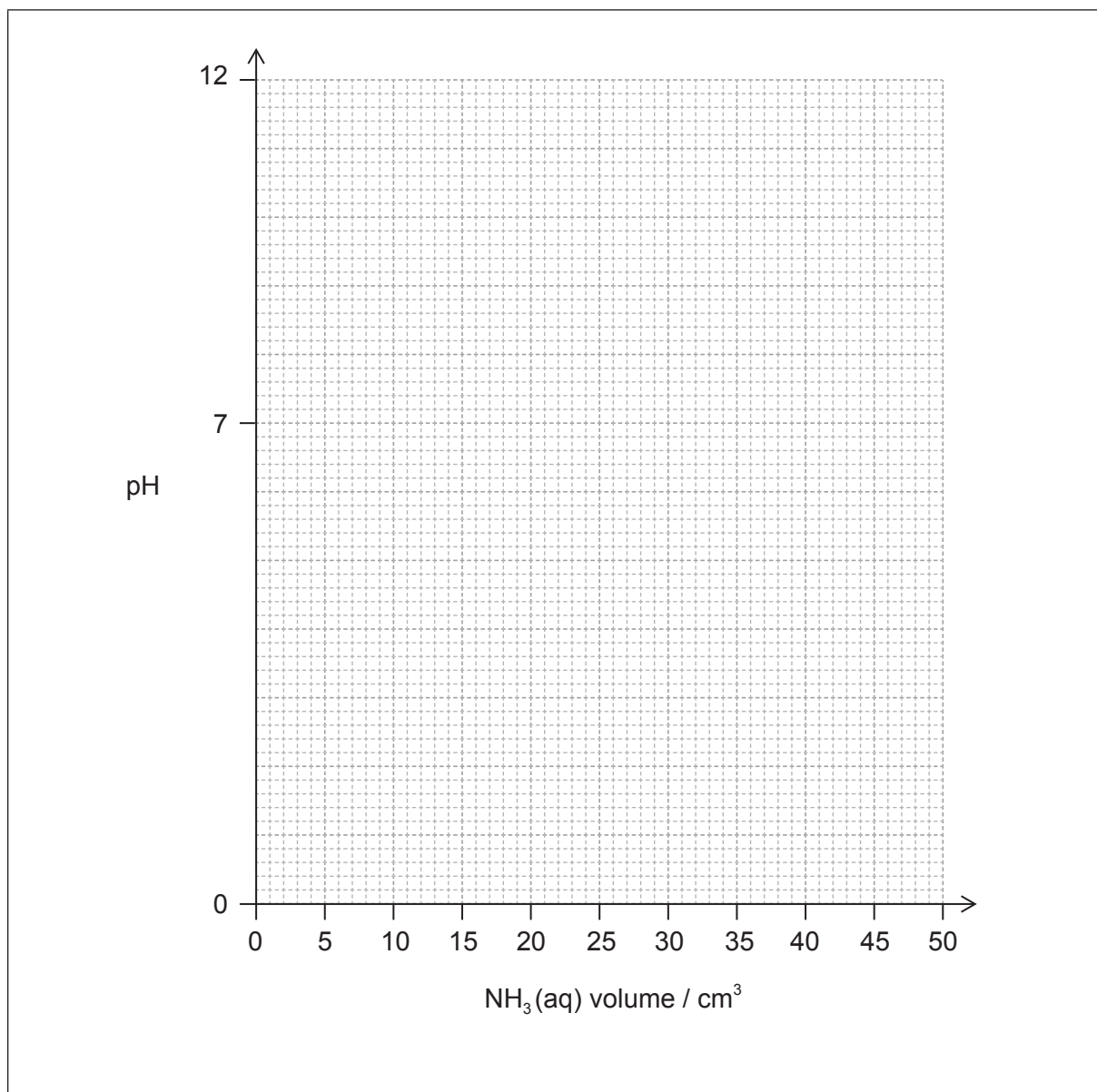
(This question continues on the following page)



(Question 7 continued)

- (g) (i) Sketch the pH titration curve obtained when 50.0 cm^3 of $0.100 \text{ mol dm}^{-3} \text{ NH}_3(\text{aq})$ is added to 25.0 cm^3 of $0.100 \text{ mol dm}^{-3} \text{ HCl}(\text{aq})$.

[3]



- (ii) Identify an indicator from table 16 of the data booklet that could be used for this titration.

[1]

.....



8. Chromium is a transition metal with many uses.

- (a) (i) Draw an orbital diagram (using the arrow-in-box notation) showing the electrons in the 4s and 3d sub-levels in chromium metal. [1]

- (ii) Outline the nature of the metallic bonding present in chromium. [1]

.....

.....

- (iii) Explain why chromium metal is malleable. [1]

.....

.....

.....

- (b) (i) State the name of Cr_2O_3 . [1]

.....

- (ii) Describe the ionic bonding present in Cr_2O_3 and how the ions are formed. [2]

.....

.....

.....

.....

(This question continues on the following page)



(Question 8 continued)

- (iii) Suggest why solid Cr_2O_3 does **not** conduct electricity. [1]

.....
.....

- (c) Chromium forms the complex ion $[\text{Cr}(\text{NH}_3)_4\text{Cl}_2]^+$.

- (i) Deduce the oxidation number of chromium in this complex. [1]

.....
.....
.....

- (ii) Describe the nature of the ligand-chromium ion bonds in terms of acid-base theory. [2]

.....
.....
.....
.....

- (iii) Explain why $[\text{Cr}(\text{NH}_3)_4\text{Cl}_2]^+$ is coloured. [4]

.....
.....
.....
.....
.....
.....
.....
.....

(This question continues on the following page)



(Question 8 continued)

- (iv) Draw the structures of **two** possible isomers of this complex ion. [2]

- (d) (i) The dichromate ion, $\text{Cr}_2\text{O}_7^{2-}(\text{aq})$, and the iodide ion, $\text{I}^-(\text{aq})$, react together in the presence of an acid to form $\text{Cr}^{3+}(\text{aq})$ and $\text{IO}_3^-(\text{aq})$ ions. Deduce the half-equation for the reaction of I^- to IO_3^- and the overall equation for this reaction. [2]

Half-equation:

.....

.....

Overall equation:

.....

.....

- (ii) Explain in terms of oxidation numbers whether iodine is oxidized or reduced in part (d) (i). [1]

.....

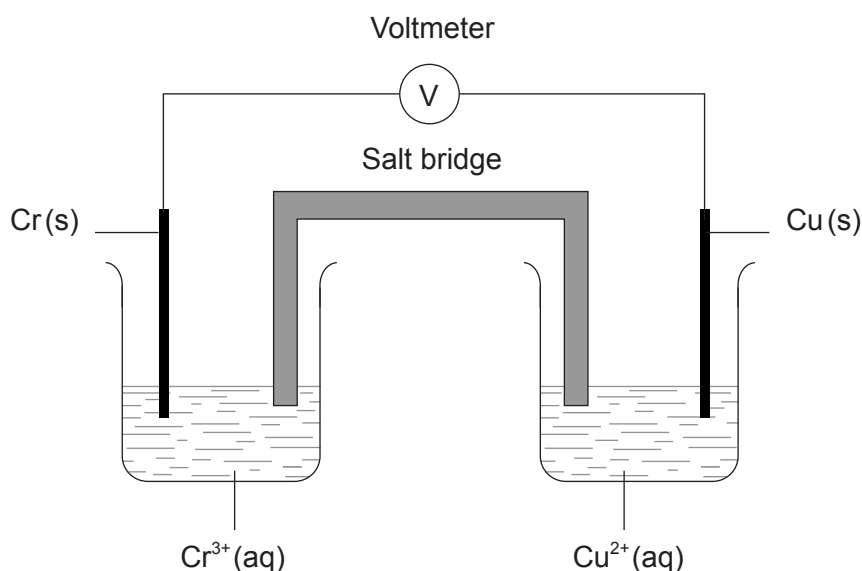
.....

(This question continues on the following page)



(Question 8 continued)

- (e) A voltaic cell is constructed as follows. One half-cell contains a chromium electrode immersed in a solution containing $\text{Cr}^{3+}(\text{aq})$ ions. The other half-cell contains a copper electrode immersed in a solution containing $\text{Cu}^{2+}(\text{aq})$ ions. The two electrodes are connected to a voltmeter and the two solutions by a salt bridge.



- (i) Define the term *standard electrode potential*. [1]

.....

.....

.....

.....

- (ii) Calculate the cell potential, in V, under standard conditions, for this voltaic cell, using table 14 of the data booklet and $E^{\ominus}_{\text{Cr}^{3+}/\text{Cr}} = -0.74\text{V}$. [1]

.....

.....

(This question continues on the following page)



(Question 8 continued)

- (iii) Predict the balanced equation for the spontaneous reaction which will produce a current in this voltaic cell. [1]

.....
.....

- (iv) Identify the negative and the positive electrodes in this cell. [1]

.....
.....

- (v) Predict the direction of movement of electrons in the external circuit. [1]

.....
.....

- (vi) State the directions in which the negative ions (anions) and the positive ions (cations) flow in the salt bridge. [1]

.....
.....
.....



9. (a) Consider the structure and bonding in MgCl_2 and PCl_3 .

(i) State and explain the electrical conductivities of these two chloride compounds in their liquid state. [3]

.....

.....

.....

.....

.....

(ii) Suggest, giving your reasons, the approximate pH values of the solutions formed by adding each chloride compound separately to distilled water. [4]

MgCl_2 :

.....

.....

.....

PCl_3 :

.....

.....

.....

(b) (i) Identify the acid-base character of the oxides of each of the elements from sodium to chlorine in period 3. [2]

.....

.....

.....

.....

(This question continues on the following page)



(Question 9 continued)

- (ii) State the equations for the separate reactions of sodium oxide and phosphorus(V) oxide with water. [2]

<p>.....</p> <p>.....</p> <p>.....</p>
--

- (c) Consider the molecules PBr_3 and SF_4 .

- (i) Deduce the Lewis (electron dot) structure of both molecules. [2]

<p>.....</p> <p>.....</p> <p>.....</p> <p>.....</p> <p>.....</p> <p>.....</p> <p>.....</p> <p>.....</p> <p>.....</p>
--

- (ii) Predict the shapes of the two molecules, giving the Br-P-Br bond angle in PBr_3 and the F-S-F bond angles in SF_4 . [4]

PBr_3	SF_4
Shape:	Shape:
Bond angle:	Bond angles:

(This question continues on the following page)



(Question 9 continued)

(iii) Explain why both PBr_3 and SF_4 are polar.

[2]

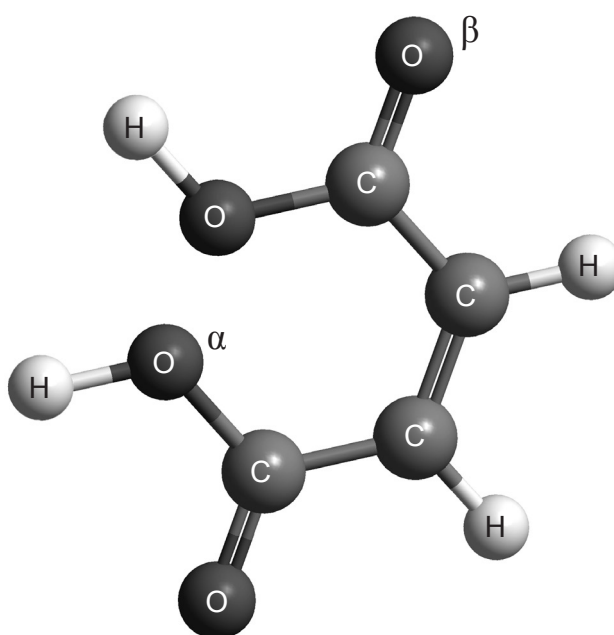
.....

.....

.....

.....

(d) The structure of *cis*-but-2-ene-1,4-dioic acid is shown below.



(i) Describe the covalent bond between carbon and hydrogen in the molecule above and how it is formed.

[2]

.....

.....

.....

.....

(This question continues on the following page)



(Question 9 continued)

- (ii) Deduce the hybridization of the oxygen atoms labelled α and β . [1]

α :
.....
 β :
.....

- (iii) Describe sigma (σ) and pi (π) bonds between atoms. [2]

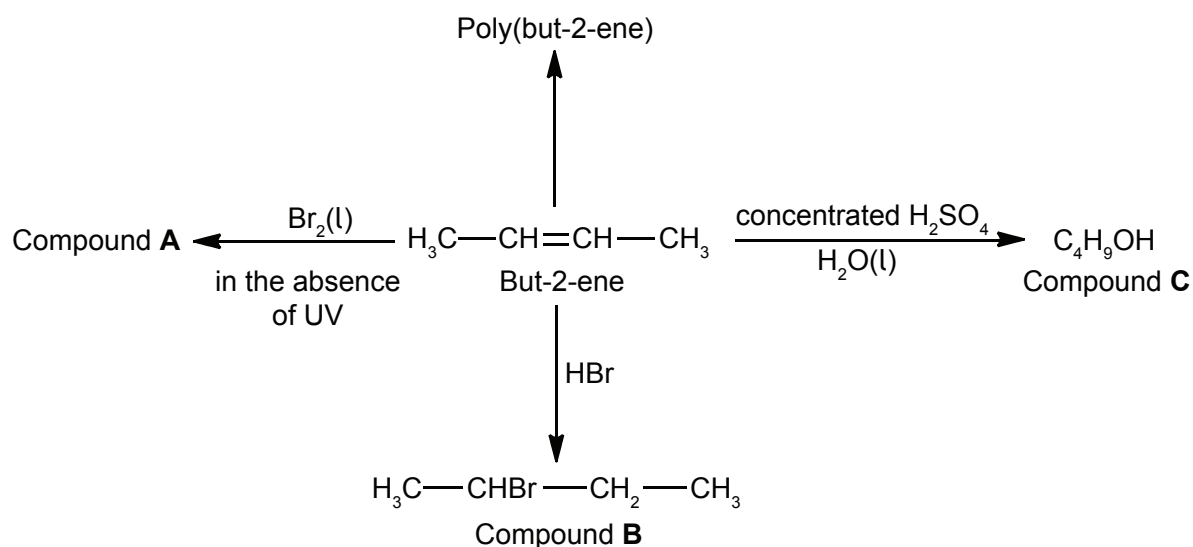
σ bond:
.....
.....
 π bond:
.....
.....

- (iv) Identify the number of sigma (σ) and pi (π) bonds present in a molecule of *cis*-but-2-ene-1,4-dioic acid. [1]

.....
.....



10. Some reactions of but-2-ene are given below.



(a) (i) Deduce the full structural formula of compound **A**. [1]

(ii) Apply IUPAC rules to name compound **A**. [1]

.....

(iii) Describe the colour change observed when excess but-2-ene reacts with bromine to form compound **A**. [1]

.....

.....

(This question continues on the following page)



(Question 10 continued)

- (b) (i) Outline **two** reasons why the polymerization of alkenes is of economic importance. [2]

.....

.....

.....

.....

- (ii) Identify the structure of the repeating unit of poly(but-2-ene). [1]

- (c) (i) Compound **C**, C_4H_9OH , can also be formed by reacting compound **B**, $CH_3CHBrCH_2CH_3$, with aqueous potassium hydroxide. This reaction proceeds by both S_N1 and S_N2 mechanisms. Explain the S_N2 mechanism, using curly arrows to represent the movement of electron pairs. [4]

(This question continues on the following page)



(Question 10 continued)

- (ii) Explain why the hydroxide ion is a better nucleophile than water. [2]

.....

.....

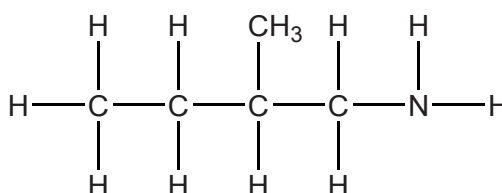
.....

.....

- (d) (i) Compound **B**, $\text{CH}_3\text{CHBrCH}_2\text{CH}_3$, also reacts with potassium cyanide. Apply IUPAC rules to name the organic product formed. [1]

.....

- (ii) The organic product of the reaction in part (d) (i) can be reduced to:



- State the **two** reagents required. [1]

.....

- (iii) Deduce the full structural formula of the organic product formed when the compound in part (d) (ii) reacts with ethanoic acid in the presence of an acid catalyst. [1]

.....

(This question continues on the following page)



(Question 10 continued)

(e) Compound **C**, C_4H_9OH , can be oxidized by acidified potassium dichromate(VI) to form compound **F**.

(i) State the name of the functional group present in compound **F**. [1]

.....

(ii) Deduce the structural formula of an alcohol which is a structural isomer of compound **C** and **cannot** be oxidized by acidified potassium dichromate(VI). [1]

(f) Explain why but-2-ene is more volatile than compound **C**. [2]

.....
.....
.....

(g) Deduce the equation for the complete combustion of compound **C**. [1]

.....

(This question continues on the following page)



(Question 10 continued)

(h) But-2-ene can exist as two geometrical isomers. Geometrical isomerism is a form of stereoisomerism.

(i) Define the term *stereoisomers*.

[1]

.....
.....

(ii) State the conditions needed for a compound to show geometrical isomerism.

[2]

.....
.....
.....
.....

(iii) Draw the structures of the two geometrical isomers of but-2-ene, clearly identifying each as *cis* or *trans*.

[2]

