

OCR

Oxford Cambridge and RSA

Accredited

A Level Geography H481/03 Geographical debates

Sample Resource Booklet Version 1.1

Time allowed: 2 hour 30 minutes

INFORMATION FOR CANDIDATES

- The questions tell you which resources you need to use.
- This document consists of **8** pages. Any blank pages are indicated.

INSTRUCTIONS TO EXAMS OFFICER/INVIGILATOR

- Do not send this Resource Booklet for marking, it should be retained in the centre or recycled. Please contact OCR copyright should you wish to re-use this document.

CONTENTS OF RESOURCE BOOKLET

- Fig.1 – Global temperature variations between 1880 and 2014
- Fig.2 – Percentage of mortality due to diabetes in people under 60 years of age in 2013
- Fig.3 – The global distribution of human impact on marine ecosystems
- Fig.4 – Global distribution of overweight and obese adults
- Fig.5 – Earthquakes of a magnitude 5.0 and greater in 2014

Fig. 1 – Global temperature variations between 1880 and 2014

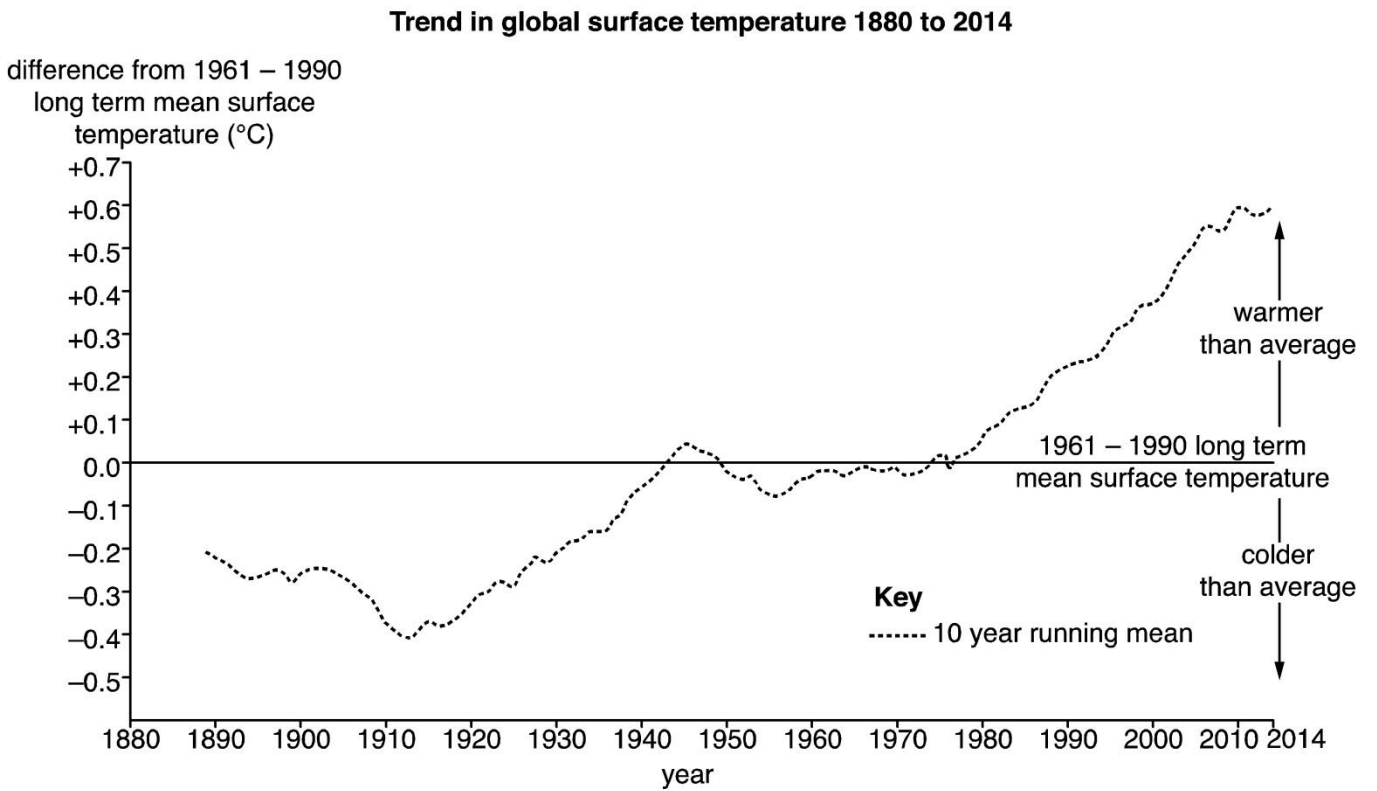


Fig. 2 – Percentage of mortality due to diabetes in people under 60 years of age in 2013

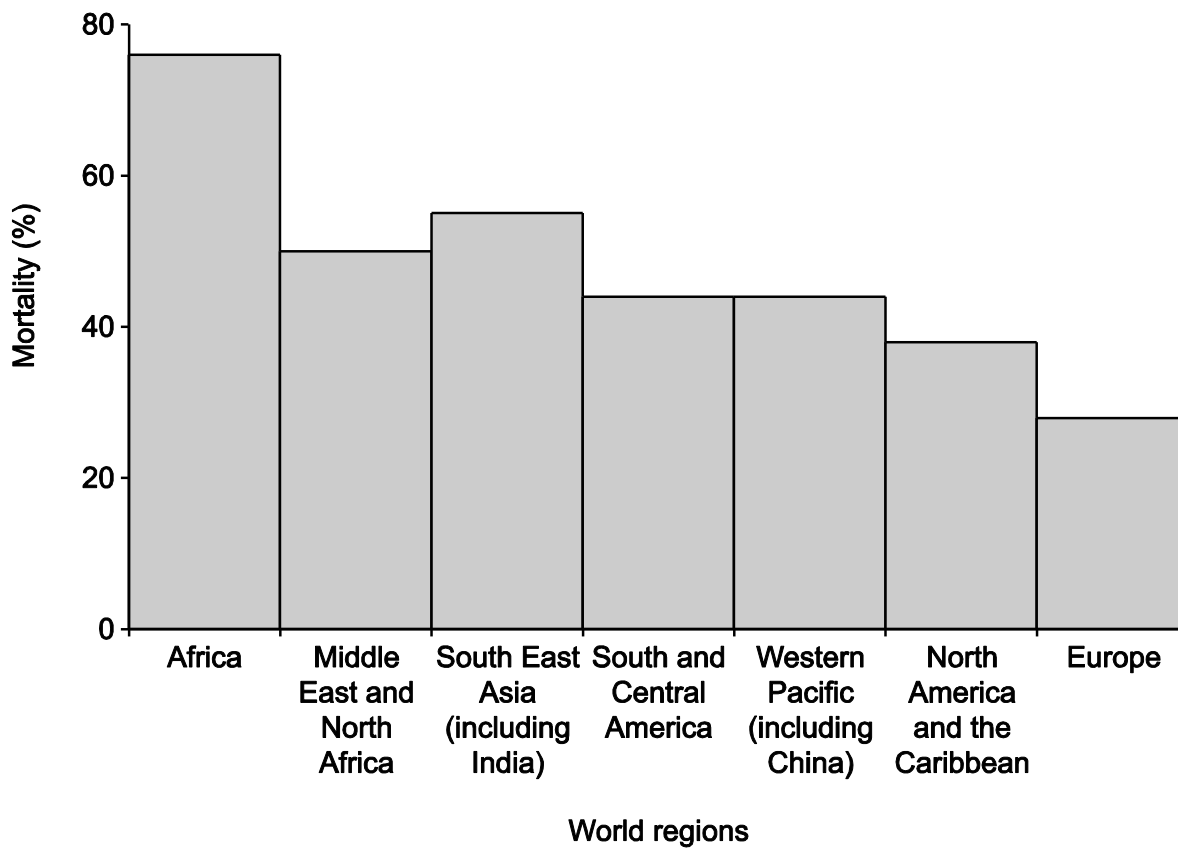
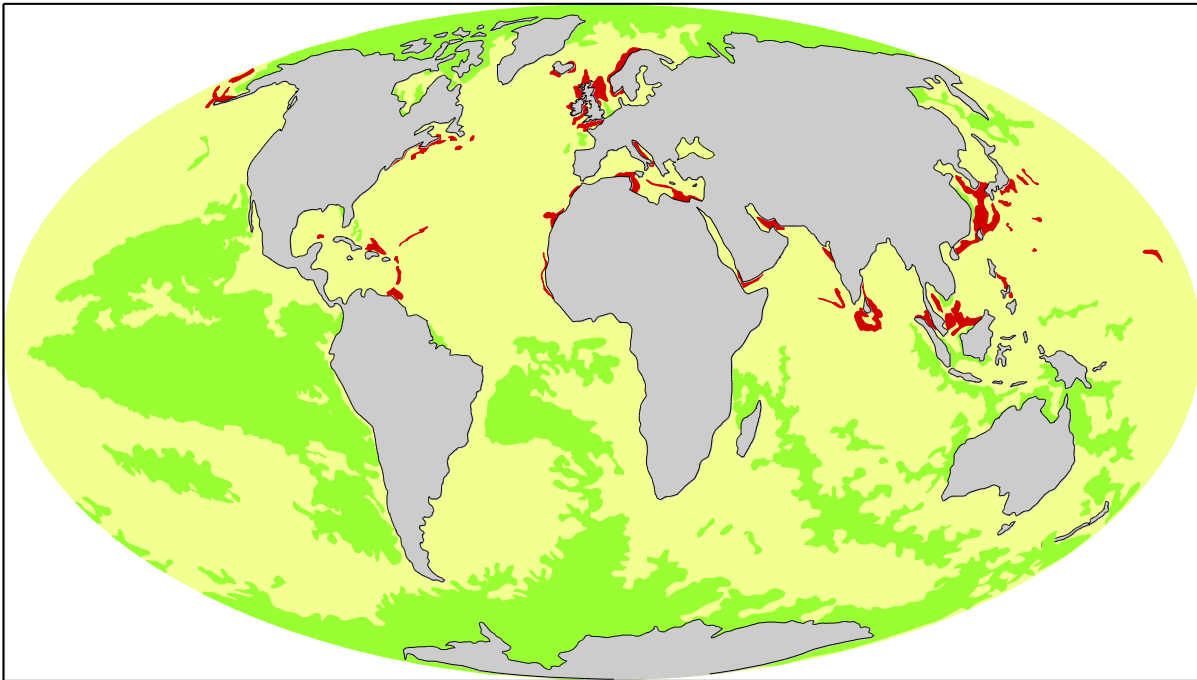


Fig. 3 – The global distribution of human impact on marine ecosystems

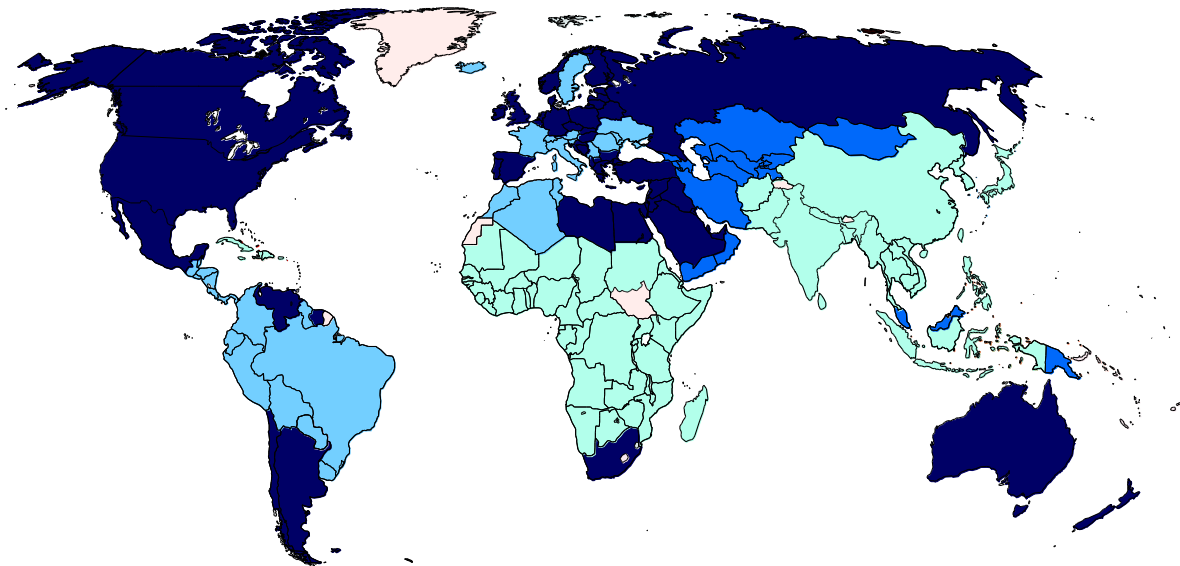


Key

- High
- Medium
- Low

Fig. 4 – Global distribution of overweight and obese adults

BMI (Body Mass Index) is used to quantify how overweight or obese an adult is: a BMI of 25 or higher is classified as 'overweight' and a BMI of 30 or higher is classified as 'obese'.



Key: % adult obesity

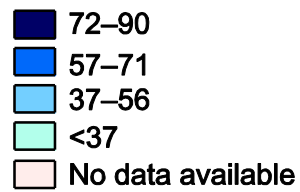
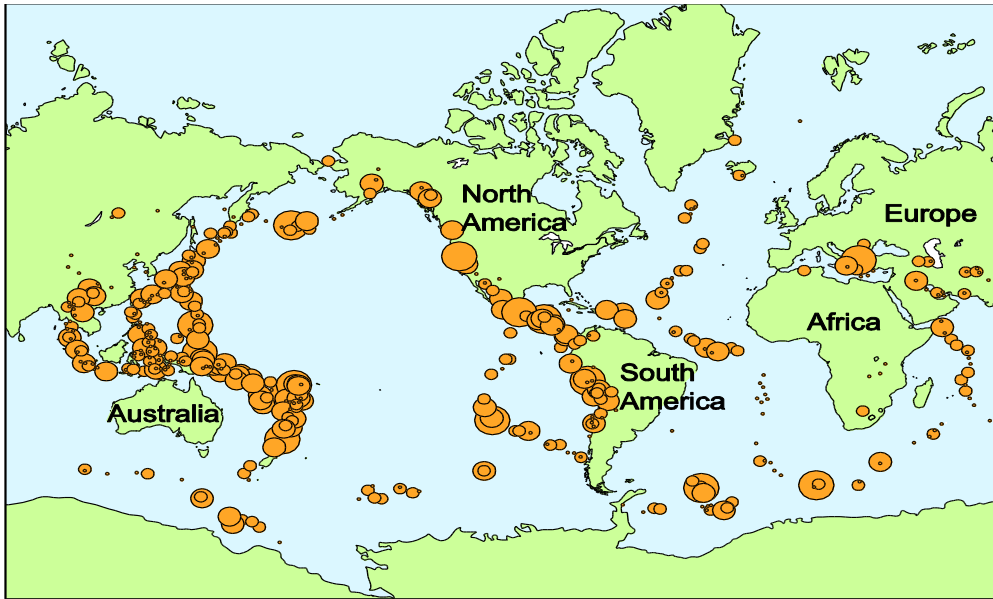


Fig. 5 – Earthquakes of a magnitude 5.0 and greater in 2014



Key: Earthquake magnitude

- 6.6 to 8.2
- 5.8 to 6.59
- 5.3 to 5.79
- 5 to 5.29

Summary of updates

Date	Version	Details
July 2021	1.1	Updated copyright acknowledgements.

Copyright Information:

Fig. 3: Halpern, et.al. (2008), 'A Global Map of Human Impact on Marine Ecosystems', Science, vol 319, no. 5865, pp948-952. Reproduced with permission from AAAS. Readers may view, browse, and/or download material for temporary copying purposes only, provided these uses are for noncommercial personal purposes. Except as provided by law, this material may not be further reproduced, distributed, transmitted, modified, adapted, performed, displayed, published, or sold in whole or in part, without prior written permission from the publisher.

Fig.4: Source: FAO/IAEA, 2014, Food and Nutrition in Numbers, the Food and Agriculture Organisation of the United Nations. © FAO 2014, www.fao.org, accessed Mar 2015.

OCR is committed to seeking permission to reproduce all third-party content that it uses in the assessment materials. OCR has attempted to identify and contact all copyright holders whose work is used in this paper. To avoid the issue of disclosure of answer-related information to candidates, all copyright acknowledgements are reproduced in the OCR Copyright Acknowledgements booklet. This is produced for each series of examinations and is freely available to download from our public website (www.ocr.org.uk) after the live examination series.

If OCR has unwittingly failed to correctly acknowledge or clear any third-party content in this assessment material, OCR will be happy to correct its mistake at the earliest possible opportunity.

For queries or further information please contact the Copyright Team, First Floor, 9 Hills Road, Cambridge CB2 1GE.

OCR is part of the Cambridge Assessment Group; Cambridge Assessment is the brand name of University of Cambridge Local Examinations Syndicate (UCLES), which is itself a department of the University of Cambridge.