

**OXFORD CAMBRIDGE AND RSA EXAMINATIONS
GCSE**

B741/02

**GATEWAY SCIENCE
CHEMISTRY B**

**Chemistry modules C1, C2, C3
(Higher Tier)**

FRIDAY 6 JUNE 2014: Afternoon

**DURATION: 1 hour 15 minutes
plus your additional time allowance**

MODIFIED ENLARGED 24pt

Candidate forename		Candidate surname	
-------------------------------	--	------------------------------	--

Centre number						Candidate number				
--------------------------	--	--	--	--	--	-----------------------------	--	--	--	--

**Candidates answer on the Question Paper.
A calculator may be used for this paper.**

OCR SUPPLIED MATERIALS:

Periodic table

OTHER MATERIALS REQUIRED:

Pencil

Ruler (cm/mm)

READ INSTRUCTIONS OVERLEAF

INSTRUCTIONS TO CANDIDATES

Write your name, centre number and candidate number in the boxes on the first page. Please write clearly and in capital letters.

Use black ink. HB pencil may be used for graphs and diagrams only.

Answer ALL the questions.

Read each question carefully. Make sure you know what you have to do before starting your answer.

Write your answer to each question in the space provided. Additional paper may be used if necessary but you must clearly show your candidate number, centre number and question number(s).

INFORMATION FOR CANDIDATES

The quality of written communication is assessed in questions marked with a pencil ().

The number of marks is given in brackets [] at the end of each question or part question.

The total number of marks for this paper is 75.

Any blank pages are indicated.

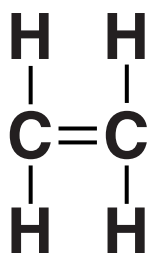
Answer ALL the questions.

SECTION A – Module C1

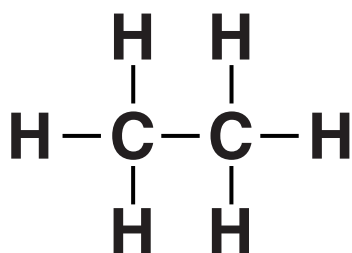
1 This question is about compounds containing carbon.

Look at the displayed formulas of some compounds.

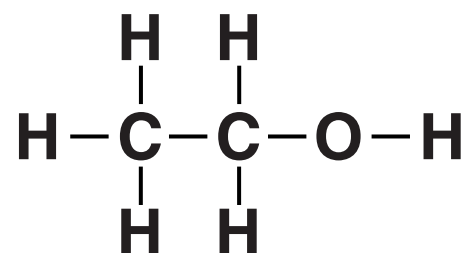
compound A



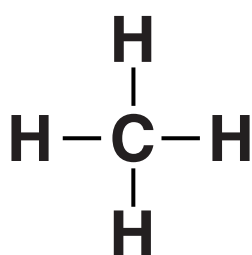
compound B



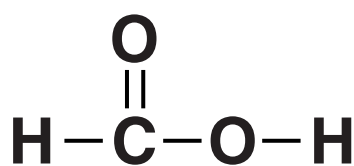
compound C



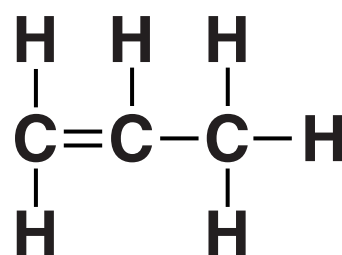
compound D



compound E



compound F



(a) What is the MOLECULAR FORMULA for compound B?

[1]

(b) Explain why compound B is a hydrocarbon but compound C is not a hydrocarbon.

[3]

(c) Two compounds are UNSATURATED.

Which two?

_____ and

_____ **[1]**

[TOTAL: 5]

2 This question is about emulsifiers and cooking.

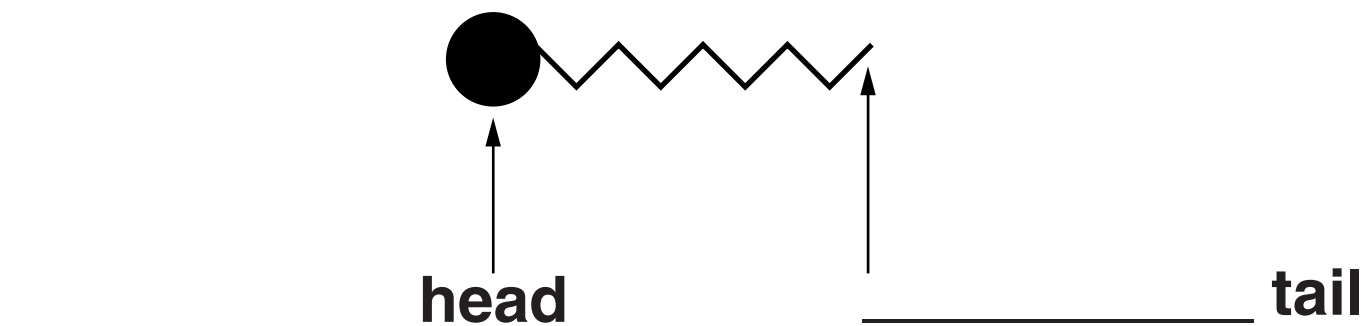
(a) Mayonnaise is a mixture of an emulsifier, an oil and water.

The emulsifier helps to stop the oil and water from separating.

Look at the structure of an emulsifier molecule below.

(i) Label the two parts of the emulsifier molecule.

[1]



(ii) Explain how an emulsifier helps to stop oil and water from separating.

[2]

(b) Egg yolk is a runny liquid.

The egg yolk becomes a solid when it is cooked.

Explain why.

Use ideas about the type of molecules in egg yolk.

[2]

[TOTAL: 5]

BLANK PAGE

3 A power station burns methane, CH₄.

(a) Construct a BALANCED SYMBOL equation for the complete combustion of methane.

_____ **[2]**

(b) The power station produces nitrogen dioxide gas.

The owners need to stop the nitrogen dioxide going into the atmosphere.

They can choose two methods:

use limestone

use sea water.

Look at the table. It shows some information about each method.

	Limestone	Sea water
Percentage of nitrogen dioxide removed	90%	99%
Waste made	carbon dioxide and a solid waste product	none – sea water is pumped back into the sea
Cost	expensive	cheap
Availability	mined from under the ground	must be pumped in from the coast
Mass needed to remove 1 g of nitrogen dioxide	1.2 g	3000 g

The power station is 100 kilometres from the coast.

The power station makes 9000 g of nitrogen dioxide.

Which method would be more suitable for removing nitrogen dioxide from the waste gases?

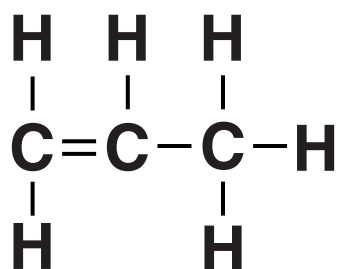
Explain your answer.

[2]

[TOTAL: 4]

- 4 Poly(propene) is a polymer made from propene.**

Look at the displayed formula for propene.



- (a) Draw the displayed formula for poly(propene).**

[2]

(b) Poly(propene) is used to make sandwich boxes.

Anna's sandwich box contains the sandwiches for her lunch.

One of the properties of poly(propene) is that it is flexible.

Explain WHY poly(propene) is flexible and suggest, with reasons, two OTHER properties needed by poly(propene) to be suitable for making a sandwich box. [6]



The quality of written communication will be assessed in your answer to this question.

[illegible]

[TOTAL: 8]

5 An oil paint contains oil, a solvent, a binder and a phosphorescent pigment.

(a) A phosphorescent pigment will glow in the dark.

Explain why.

[2]

(b) A layer of oil paint is left to dry and harden.

The solvent evaporates.

What happens to the oil?

[1]

[TOTAL: 3]

SECTION B – Module C2

6 Many different materials are needed to build a car.

(a) (i) Suggest a property of glass that makes it useful for making a car windscreen.

_____ **[1]**

(ii) Some car bodies are now built from aluminium instead of steel.

One advantage of using aluminium is that it is less dense than steel.

Write down ONE OTHER ADVANTAGE of building car bodies from aluminium instead of steel.

_____ **[1]**

(b) Look at the table below.

It shows information about some of the materials used to build a car.

Material	Density in g/cm³	Electrical conductivity	Flexibility
aluminium	2.7	very high	low
glass	2.5	very low	low
PVC	1.4	very low	high
steel	7.8	high	low

Explain why PVC is used for covering the electrical wires in a car.

Use the information from the table.

[2]

[TOTAL: 4]

7 This question is about fertilisers.

(a) Ammonium sulfate, $(\text{NH}_4)_2\text{SO}_4$, is used as a fertiliser.

Complete the table to show the number of ATOMS OF EACH ELEMENT in the formula for ammonium sulfate.

Element	Number of atoms
nitrogen	
hydrogen	
sulfur	
oxygen	

[1]

(b) Ammonium sulfate is made by reacting an acid with an alkali.

Name the acid and alkali needed.

Describe how the acid and alkali are used to make a sample of ammonium sulfate.

[3]

(c) Nitric acid is used to manufacture fertilisers.

Ammonia, NH_3 , and oxygen, O_2 are used to manufacture nitric acid, HNO_3 .

Water is the other product.

The reaction between ammonia and oxygen uses the following conditions:

a temperature of 900°C

atmospheric pressure

a platinum catalyst.

Construct the BALANCED SYMBOL equation for the manufacture of nitric acid and explain the ADVANTAGES and DISADVANTAGES of using these conditions.

[6]



The quality of written communication will be assessed in your answer to this question.

[TOTAL: 10]

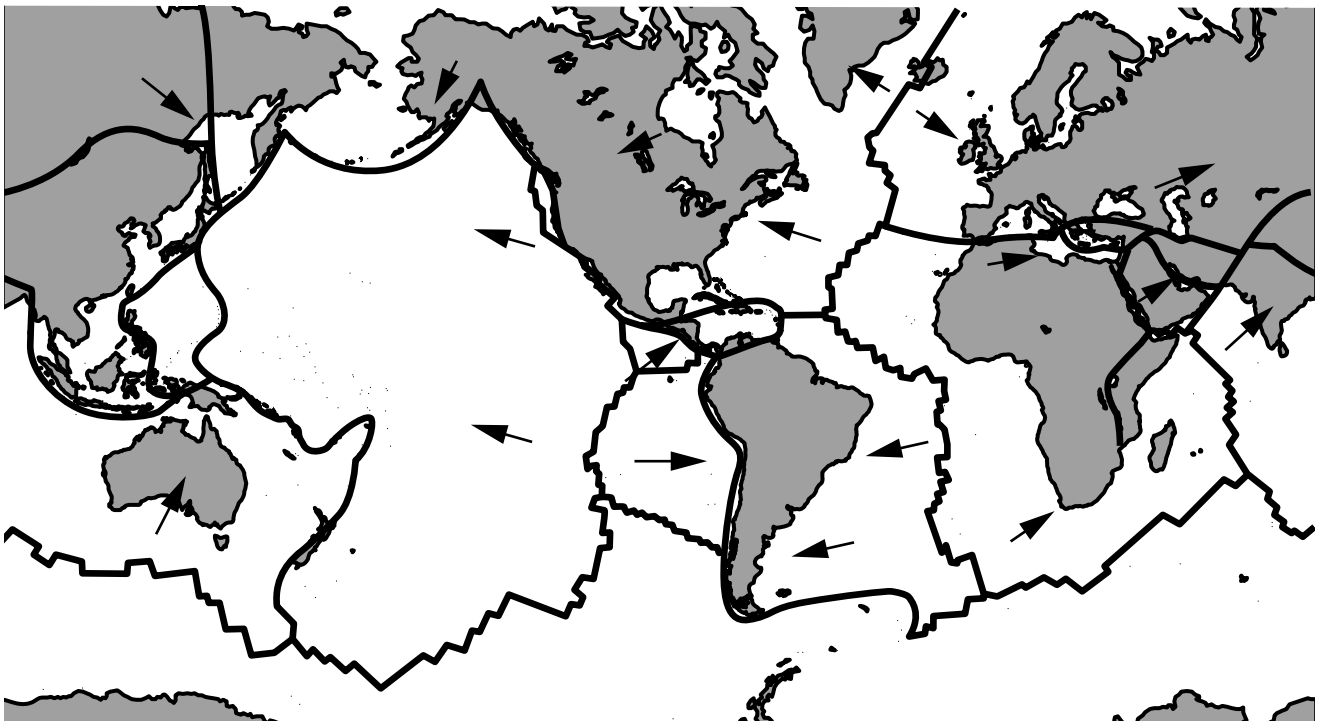
8 This question is about the structure of the Earth.

(a) It is difficult for scientists to study the structure of the Earth.

Explain why.

[1]

(b) The Earth's crust is made up of tectonic plates that move slowly.



The THEORY OF PLATE TECTONICS developed over many years.

- (i) Write about TWO stages in the
DEVELOPMENT of the theory of
plate tectonics.**

[2]

- (ii) Why do most scientists now
accept this developed theory?**

[1]

[TOTAL: 4]

9 This question is about metals.

(a) Phil wants to buy a new bicycle.

He uses the internet to research which metal is the most suitable for making the bicycle frame.

Look at the table opposite.

It shows the information he finds out.

Which metal is the most suitable for making Phil's bicycle frame?

Metal	Density in g/cm³	Relative strength (1= low, 10 = high)	Resistance to corrosion	Cost per tonne in £
aluminium	2.7	0.9	very good	2220
copper	8.9	2.1	good	5550
stainless steel	7.8	7.3	very good	900
titanium	4.5	10	very good	17 000

Explain your answer using information from the table.

[3]

(b) Pure copper is used for electrical wiring.

The copper is purified by ELECTROLYSIS.

The diagram opposite shows the apparatus used to purify copper.

Complete the labels on the diagram opposite.

Choose your answers from the list below.

copper sulfate solution

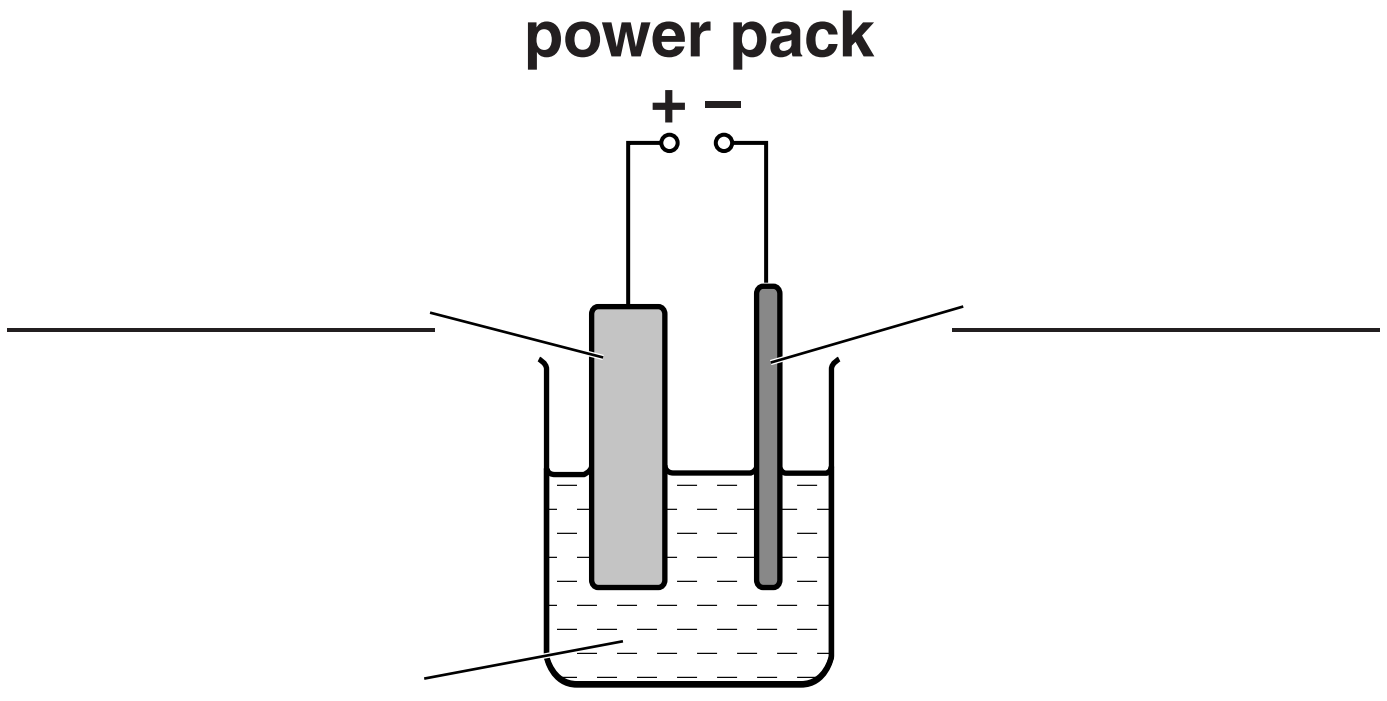
dilute sulfuric acid

impure copper anode

impure copper cathode

pure copper anode

pure copper cathode



[2]

[TOTAL: 5]

10 During the electrolysis of sodium bromide solution, bromide ions make bromine molecules.

(a) Complete the equation for this reaction.



[1]

(b) Explain why this reaction is an example of OXIDATION.

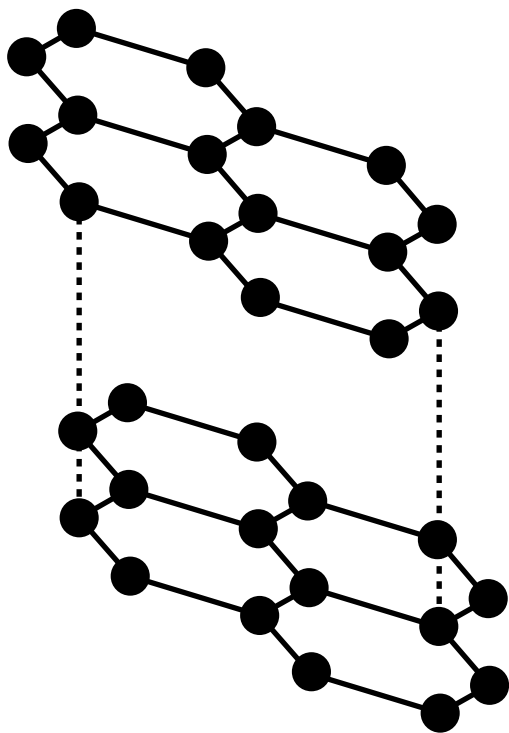
_____ **[1]**

[TOTAL: 2]

BLANK PAGE

SECTION C – Module C3

11 Graphite is one of the allotropes of carbon.



(a) Graphite is used to make pencil leads.

Explain why the properties of graphite make it suitable for pencil leads.

[2]

(b) Graphite is used as an electrode in electrolysis.

This is because it conducts electricity and has a high melting point.

(i) Explain why graphite can conduct electricity. Use the diagram on page 32 to help you.

_____ **[1]**

(ii) Explain why graphite has a high melting point. Use the diagram on page 32 to help you.

_____ **[2]**

[TOTAL: 5]

BLANK PAGE

12 Rachel investigates the reaction between magnesium and hydrochloric acid.

She adds a piece of magnesium ribbon to hydrochloric acid in a beaker.

Rachel measures the time it takes for all the magnesium ribbon to react.

This is the reaction time.

She does five different experiments.

Rachel's prediction is, 'The larger the volume of acid and the greater the mass of magnesium, the shorter the reaction time.'

Look at Rachel's results in the table opposite.

Experiment number	Mass of magnesium used in g	Volume of acid used in cm³	Concentration of acid in mol/dm³	Reaction time in seconds
1	0.05	25	1.0	30
2	0.10	25	1.0	30
3	0.05	50	1.0	30
4	0.05	50	2.0	15
5	0.10	50	2.0	15

- (a) Explain if Rachel's results support her prediction. Use the reacting particle model to explain the difference between the reaction time in experiments 3 and 4. [6]**



The quality of written communication will be assessed in your answer to this question.

(b) Rachel repeats experiment 1. This time she uses acid at a HIGHER temperature.

Explain, using the reacting particle model, what happens to the rate of reaction.

[2]

[TOTAL: 8]

13 Ethanoic acid, $\text{C}_2\text{H}_4\text{O}_2$, can be made by several different processes.

Three of these are process R, process S and process T.

(a) In process R, methanol reacts with carbon monoxide.

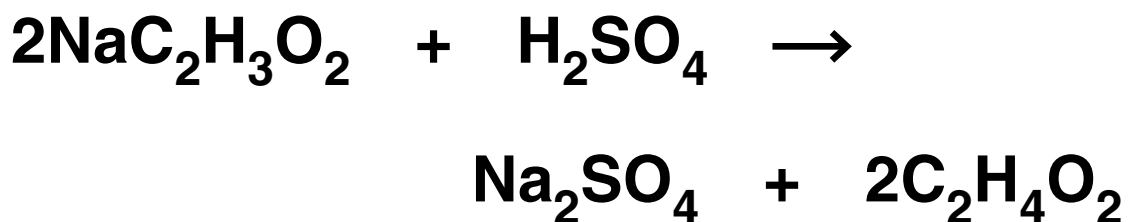


Process R has 100% atom economy.

Explain how you can tell this from the symbol equation.

[1]

(b) In process S, sodium ethanoate, $\text{NaC}_2\text{H}_3\text{O}_2$, reacts with sulfuric acid.



Look at the table of relative formula masses, M_r .

Substance	Relative formula masses, M_r
$\text{NaC}_2\text{H}_3\text{O}_2$	82
H_2SO_4	98
Na_2SO_4	142
$\text{C}_2\text{H}_4\text{O}_2$	60

- (i) A mass of 8.2 g of sodium ethanoate reacts with excess sulfuric acid.

What mass of ethanoic acid, $\text{C}_2\text{H}_4\text{O}_2$, can be made?

mass of ethanoic acid =

_____ g [2]

(ii) Calculate the ATOM ECONOMY for process S.

Sodium sulfate, Na_2SO_4 , is a waste product.

atom economy =

_____ % [2]

(c) In process T, hydrocarbons are oxidised to make ethanoic acid.

Mike predicts that 5.2 tonnes of ethanoic acid should be made.

The factory actually makes 2.4 tonnes of ethanoic acid.

(i) Calculate the percentage yield of ethanoic acid.

Write your answer to TWO significant figures.

percentage yield =

_____ % [2]

(ii) Describe one disadvantage of having a percentage yield of this value.

[1]

[TOTAL: 8]

BLANK PAGE

14 Paraffin is a liquid fuel.

Paraffin releases heat energy when it burns in air.

Jenna wants to find out how much energy is released when she burns 1 g of paraffin.

She decides to use the paraffin to heat some water.

Write about how she does the experiment. You may wish to include a labelled diagram. [4]

[TOTAL: 4]

END OF QUESTION PAPER

BLANK PAGE

BLANK PAGE



Copyright Information

OCR is committed to seeking permission to reproduce all third-party content that it uses in its assessment materials. OCR has attempted to identify and contact all copyright holders whose work is used in this paper. To avoid the issue of disclosure of answer-related information to candidates, all copyright acknowledgements are reproduced in the OCR Copyright Acknowledgements Booklet. This is produced for each series of examinations and is freely available to download from our public website (www.ocr.org.uk) after the live examination series.

If OCR has unwittingly failed to correctly acknowledge or clear any third-party content in this assessment material, OCR will be happy to correct its mistake at the earliest possible opportunity.

For queries or further information please contact the Copyright Team, First Floor, 9 Hills Road, Cambridge CB2 1GE.

OCR is part of the Cambridge Assessment Group; Cambridge Assessment is the brand name of University of Cambridge Local Examinations Syndicate (UCLES), which is itself a department of the University of Cambridge.

