

**OXFORD CAMBRIDGE AND RSA EXAMINATIONS**  
**GCSE**  
**B013/01**  
**HOME ECONOMICS**  
**Child Development**  
**Principles of Child Development**  
**MONDAY 13 JUNE 2016: Afternoon**  
**DURATION: 1 hour 30 minutes**  
**plus your additional time allowance**  
**MODIFIED ENLARGED 24pt**

<b>Candidate forename</b>						<b>Candidate surname</b>				
<b>Centre number</b>						<b>Candidate number</b>				

**Candidates answer on the Question Paper.**

**OCR SUPPLIED MATERIALS:**  
**None**

**OTHER MATERIALS REQUIRED:**  
**None**

**READ INSTRUCTIONS OVERLEAF**

## **INSTRUCTIONS TO CANDIDATES**

**Write your name, centre number and candidate number in the boxes on the first page. Please write clearly and in capital letters.**

**Use black ink. HB pencil may be used for graphs and diagrams only.**

**Answer ALL the questions.**

**Read each question carefully. Make sure you know what you have to do before starting your answer.**

**Write your answer to each question in the space provided. If additional space is required, you should use the lined page(s) at the end of this booklet. The question number(s) must be clearly shown.**

## **INFORMATION FOR CANDIDATES**

**The number of marks is given in brackets [ ] at the end of each question or part question.**

**The total number of marks for this paper is 80.**

**Your quality of written communication is assessed in the question marked with an asterisk (\*).**

**Any blank pages are indicated.**



**1 (a) A variety of methods of contraception are available to women.**

**(i) State the TWO hormones found in the combined pill.**

**1** \_\_\_\_\_  
**2** \_\_\_\_\_  
**[2]**

**(ii) Give TWO disadvantages of taking the combined pill.**

**1** \_\_\_\_\_  
\_\_\_\_\_  
**2** \_\_\_\_\_  
\_\_\_\_\_  
**[2]**

**(iii) Identify THREE methods of contraception, other than the combined pill, that are available to women.**

**1** \_\_\_\_\_  
\_\_\_\_\_  
**2** \_\_\_\_\_  
\_\_\_\_\_  
**3** \_\_\_\_\_  
\_\_\_\_\_  
**[3]**

**(b) Pre-conceptual care means a woman follows a healthy lifestyle before becoming pregnant.**

**Look at the following list:**

<b>Genetic counselling</b>
<b>Rubella</b>
<b>Folic acid</b>
<b>Smoking</b>

**Complete the table below by matching the words in the list to the statements about pre-conceptual care.**

<b>STATEMENT</b>	<b>WORD</b>
<b>One of the B group vitamins women are advised to take</b>	
<b>Should be avoided as it could cause infertility</b>	
<b>Check immunity against this disease as it could cause a baby to be born deaf</b>	
<b>Advice needed if there is a family history of a medical condition</b>	

**[4]**

**(c) An extended family is one type of family structure.**

**(i) Identify what is meant by an extended family.**

---

---

---

**[1]**

**(ii) Give THREE advantages to a lone parent of having an extended family living nearby.**

**1** 

---

---

**2** 

---

---

**3** 

---

---

**[3]**

**[TOTAL: 15]**

**BLANK PAGE**

**BLANK PAGE**

**2 During pregnancy a woman should eat plenty of foods containing protein.**

**(a) Identify FOUR good sources of protein from the following foods.**

- Meat

Oranges
- Baked beans

Cheese
- Milk

Lettuce
- Sugar

Yoghurt
- Fish

1

2

3

4

[4]

**(b) Explain the importance of ante-natal classes to an expectant mother and her partner.** [6]



---

---

---

(c) Safety labels are found on a wide range of products in order to protect children.

Look at the list below of products that must have a safety label.

- ~~Toys~~




Pram

Pyjamas

Household bleach

Complete the table below by matching each product to the label it should have.

The first one has been done for you.

LABEL	PRODUCT
	Toys
	
	
LOW FLAMMABILITY TO BS 5722	

**(d) A bed rail is one piece of equipment that could be bought to reduce the risk of a child falling out of bed.**

**Identify TWO other pieces of equipment that could be bought to reduce the risk of a child falling in the home.**

**1** \_\_\_\_\_

**2** \_\_\_\_\_

**[2]**

**[TOTAL: 15]**

**3\* Labour is the process of giving birth.**

## Describe the stages of labour.

## Explain the routine examinations done on a baby at birth.

**[15]**

This image shows a blank sheet of white paper with horizontal ruling lines. The lines are evenly spaced and run across the width of the page. There are no margins, text, or other markings on the paper.



4 Weaning is the process of introducing solid food into a baby’s diet.

The table below shows the stages of weaning.

STAGE OF WEANING	CONSISTENCY OF FOOD	EXAMPLES OF FOOD
First	Puréed	Baby rice, carrot, banana, lentils
Second	Mashed or finger foods	Potato, cooked apple, dahl, rusks, yoghurt, carrot sticks, pitta bread
Third	Chopped	Meat, fish, pasta, rice, beans

- (a) Use the table to answer the following questions.
- (i) At what stage of weaning can fish and pasta be given to a baby?
- \_\_\_\_\_ [1]
- (ii) What consistency should the food be for a baby in the first stage of weaning?
- \_\_\_\_\_ [1]
- (iii) State ONE food that is suitable for a baby in the second stage of weaning.
- \_\_\_\_\_ [1]

**(b) Sugar is one ingredient that should not be added to weaning foods.**

**Give ONE other ingredient that should NOT be added to weaning foods.**

\_\_\_\_\_ **[1]**

**(c) A diet high in fat could lead to a child becoming overweight.**

**Give THREE problems that a child could face through being overweight when starting school.**

**1** \_\_\_\_\_

\_\_\_\_\_

**2** \_\_\_\_\_

\_\_\_\_\_

**3** \_\_\_\_\_

\_\_\_\_\_

**[3]**

**(d) There are times when a child becomes ill.**

**(i) State what is meant by the term “incubation period” of an illness.**

\_\_\_\_\_

\_\_\_\_\_ **[1]**

**(ii) Identify TWO types of thermometer that measure a child’s temperature when ill.**

**1** \_\_\_\_\_

**2** \_\_\_\_\_

**[2]**

**(iii) Give THREE rules for the safe use of medicines.**

**1** \_\_\_\_\_

**2** \_\_\_\_\_

**3** \_\_\_\_\_

**[3]**



**(e) Statutory services are available for families with young children.**

**(i) State TWO main statutory service providers for the health and education of children.**

**1** \_\_\_\_\_

**2** \_\_\_\_\_

**[2]**

**(ii) Identify THREE benefits available to low-income families.**

**1** \_\_\_\_\_

**2** \_\_\_\_\_

**3** \_\_\_\_\_

**[3]**

**(f) Statutory services for children and families are obtained through a referral system.**

**State TWO different types of referral.**

**1** \_\_\_\_\_

**2** \_\_\_\_\_

**[2]**

**[TOTAL: 20]**

**5 Bonding is important for the emotional development of children.**

**(a) Give FOUR ways parents can bond with their baby in the first few weeks after birth.**

- 1 \_\_\_\_\_
- 2 \_\_\_\_\_
- 3 \_\_\_\_\_
- 4 \_\_\_\_\_

**[4]**

**(b) Children like to play.**

**(i) Identify the type of play described in the table below.**

DESCRIPTION	TYPE OF PLAY
Dressing up and playing pretend games	
Playing on swings and climbing equipment	
Involving activities like painting or making music	
Finding out about how things work and the world around them	
Developing hand and eye co-ordination	

**[5]**

**(ii) Co-operative play is one stage of social play.**

**Identify and describe THREE other stages of social play.**

**1** \_\_\_\_\_

\_\_\_\_\_

\_\_\_\_\_

**2** \_\_\_\_\_

\_\_\_\_\_

\_\_\_\_\_

**3** \_\_\_\_\_

\_\_\_\_\_

\_\_\_\_\_

**[6]**

**[TOTAL: 15]**

**END OF QUESTION PAPER**

### ADDITIONAL ANSWER SPACE

**If additional space is required, you should use the following lined page(s). The question number(s) must be clearly shown in the margin(s).**

[illegible]











**BLANK PAGE**

**BLANK PAGE**

**BLANK PAGE**

**BLANK PAGE**

**BLANK PAGE**

**BLANK PAGE**



### Copyright Information

OCR is committed to seeking permission to reproduce all third-party content that it uses in its assessment materials. OCR has attempted to identify and contact all copyright holders whose work is used in this paper. To avoid the issue of disclosure of answer-related information to candidates, all copyright acknowledgements are reproduced in the OCR Copyright Acknowledgements Booklet. This is produced for each series of examinations and is freely available to download from our public website ([www.ocr.org.uk](http://www.ocr.org.uk)) after the live examination series.

If OCR has unwittingly failed to correctly acknowledge or clear any third-party content in this assessment material, OCR will be happy to correct its mistake at the earliest possible opportunity.

For queries or further information please contact the Copyright Team, First Floor, 9 Hills Road, Cambridge CB2 1GE.

OCR is part of the Cambridge Assessment Group; Cambridge Assessment is the brand name of University of Cambridge Local Examinations Syndicate (UCLES), which is itself a department of the University of Cambridge.