

**OXFORD CAMBRIDGE AND RSA EXAMINATIONS**  
**GCSE**  
**B721/02**  
**GATEWAY SCIENCE**  
**ADDITIONAL SCIENCE B**  
**Additional Science modules B3, C3, P3**  
**(Higher Tier)**

**WEDNESDAY 15 JUNE 2016 – Afternoon**

**DURATION: 1 hour 15 minutes**  
**plus your additional time allowance**

**MODIFIED ENLARGED**

<b>Candidate forename</b>		<b>Candidate surname</b>	
-------------------------------	--	------------------------------	--

<b>Centre number</b>						<b>Candidate number</b>				
--------------------------	--	--	--	--	--	-----------------------------	--	--	--	--

**Candidates answer on the Question Paper.**  
**A calculator may be used for this paper.**

**OCR SUPPLIED MATERIALS:**  
**A copy of the Periodic Table**

**OTHER MATERIALS REQUIRED:**  
**Pencil**  
**Ruler (cm/mm)**

**READ INSTRUCTIONS OVERLEAF**



## **INSTRUCTIONS TO CANDIDATES**

**Write your name, centre number and candidate number in the boxes on the first page. Please write clearly and in capital letters.**

**Use black ink. HB pencil may be used for graphs and diagrams only.**

**Answer ALL the questions.**

**Read each question carefully. Make sure you know what you have to do before starting your answer.**

**Write your answer to each question in the space provided. If additional space is required, you should use the lined page(s) at the end of this booklet. The question number(s) must be clearly shown.**

## **INFORMATION FOR CANDIDATES**

**The quality of written communication is assessed in questions marked with a pencil ().**

**A list of equations can be found on pages 4–5.**

**The number of marks is given in brackets [ ] at the end of each question or part question.**

**The total number of marks for this paper is 75.**

**Any blank pages are indicated.**

**BLANK PAGE**

## **EQUATIONS**

$$\text{energy} = \text{mass} \times \frac{\text{specific heat capacity}}{\text{change}} \times \text{temperature}$$

$$\text{energy} = \text{mass} \times \text{specific latent heat}$$

$$\text{efficiency} = \frac{\text{useful energy output} (\times 100\%)}{\text{total energy input}}$$

$$\text{wave speed} = \text{frequency} \times \text{wavelength}$$

$$\text{power} = \text{voltage} \times \text{current}$$

$$\text{energy supplied} = \text{power} \times \text{time}$$

$$\text{average speed} = \frac{\text{distance}}{\text{time}}$$

$$\text{distance} = \text{average speed} \times \text{time}$$

$$s = \frac{(u + v)}{2} \times t$$

$$\text{acceleration} = \frac{\text{change in speed}}{\text{time taken}}$$

**force = mass × acceleration**

**weight = mass × gravitational field strength**

**work done = force × distance**

**power =  $\frac{\text{work done}}{\text{time}}$**

**power = force × speed**

**KE =  $\frac{1}{2}mv^2$**

**momentum = mass × velocity**

**force =  $\frac{\text{change in momentum}}{\text{time}}$**

**GPE = mgh**

**mgh =  $\frac{1}{2}mv^2$**

**resistance =  $\frac{\text{voltage}}{\text{current}}$**

**Answer ALL the questions.**

**SECTION A – Module B3**

**1 (a) Mike competes in the triathlon.**

**This event involves swimming, cycling and running.**

**He records his heart rate in beats per minute (bpm) during each stage of the triathlon.**

**Look at his results in the table.**

	<b>Heart rate in bpm</b>
<b>Swimming</b>	<b>163</b>
<b>Cycling</b>	<b>165</b>
<b>Running</b>	<b>160</b>

**The maximum heart rate is the highest heart rate that is achievable during exercise.**

**One method to calculate a predicted maximum heart rate uses this formula:**

**PREDICTED MAXIMUM HEART RATE = 220 – AGE**

- (i) Mike is 29 years old.**

**Calculate his heart rate during CYCLING as a percentage of his predicted maximum heart rate.**

\_\_\_\_\_ % **[2]**

- (ii) Mike will gain the most benefit from his training if his heart rate stays within a certain range.**

**This range is called the target heart rate zone and is between 60% and 85% of his maximum heart rate.**

**Heart rates above the target heart rate zone mean that anaerobic respiration will be used.**

**Will Mike gain maximum benefit from his cycling training?**

**Explain your answer using ideas about respiration.**

---

---

---

---

**[2]**

**(b) Blood doping is a way of cheating in sport.**

**The drug EPO increases the amount of haemoglobin in the blood.**

**Explain why taking EPO gives athletes an unfair advantage.**

---

---

---

---

**[2]**


**[TOTAL: 6]**




**BLANK PAGE**

**2 Look at the pictures below.**

**grey wolf**



**pug**



**The grey wolf is a wild animal.**

**All dog breeds like the pug are thought to have been bred originally from the grey wolf.**

- (a) As a result of selective breeding, some pug dogs have breathing problems.**

**Suggest why pug dogs have breathing problems and explain why continued selective breeding could result in other health problems.**

**[6]**



**The quality of written communication will be assessed in your answer to this question.**

---

---

---

---

---

---

---

---

---

---

- (b) (i) Write down the name of the type of cell division that makes dog sperm cells.

\_\_\_\_\_ [1]

- (ii) Put a ring around the word that describes dog skin cells.

acrosome

diploid

fertilised

gamete

zygote

[1]

[TOTAL: 8]

**3 (a) This question is about enzymes.**

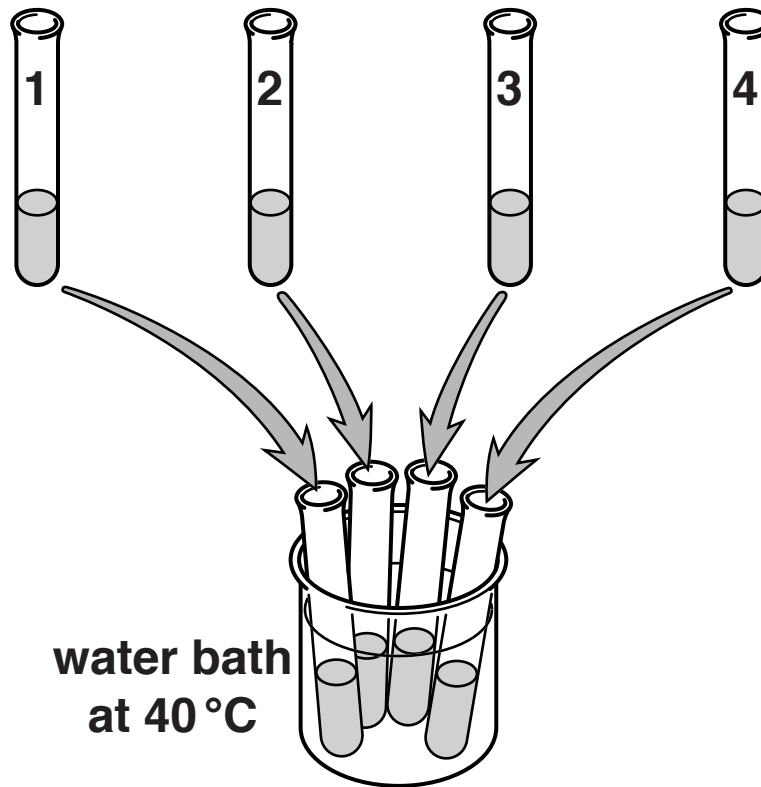
**Pepsin is an enzyme that breaks down protein.**

**Egg-white is a protein that makes water cloudy.**

**Look at the table below.**

**It shows an investigation into the effect of adding the enzyme pepsin to egg-white.**

<b>Tube 1</b>	<b>Tube 2</b>	<b>Tube 3</b>	<b>Tube 4</b>
<b>5 cm<sup>3</sup> egg-white</b>	<b>5 cm<sup>3</sup> egg-white</b>	<b>5 cm<sup>3</sup> egg-white</b>	<b>5 cm<sup>3</sup> egg-white</b>
<b>3 drops distilled water</b>	<b>3 drops hydrochloric acid</b>	<b>3 drops hydrochloric acid</b>	<b>3 drops hydrochloric acid</b>
<b>1 cm<sup>3</sup> pepsin</b>	<b>1 cm<sup>3</sup> distilled water</b>	<b>1 cm<sup>3</sup> pepsin</b>	<b>1 cm<sup>3</sup> of boiled pepsin</b>



**The tubes were put in a water bath at 40 °C for 5 minutes.**

**Look at the results below.**

<b>TUBE</b>	<b>CONTENTS</b>	<b>OBSERVATIONS OF TUBE CONTENTS</b>	
		<b>AT START</b>	<b>AT END</b>
<b>1</b>	<b>egg-white, water and pepsin</b>	<b>cloudy</b>	<b>almost clear</b>
<b>2</b>	<b>egg-white, hydrochloric acid and water</b>	<b>cloudy</b>	<b>cloudy</b>
<b>3</b>	<b>egg-white, hydrochloric acid and pepsin</b>	<b>cloudy</b>	<b>clear</b>
<b>4</b>	<b>egg-white, hydrochloric acid and boiled pepsin</b>	<b>cloudy</b>	<b>cloudy</b>

- (i) Write a conclusion explaining what the results show about the conditions pepsin needs to work.

---

---

---

---

[2]

- (ii) How does the 'lock and key' mechanism explain why pepsin will ONLY break down protein and NOT other food groups like starch?

You may draw a diagram to help your answer.

---

---

---

[2]

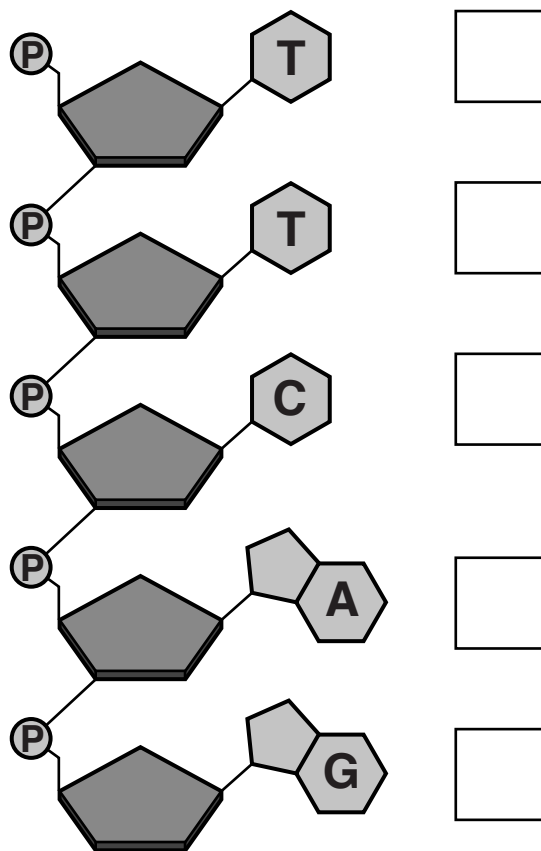
**(b) DNA is important in the production of different enzymes.**

**There are four bases in DNA.**

**The bases are A, C, G and T.**

**The diagram below shows one strand of DNA.**

**Write down in each box, the letter of the base that would be found on the complementary strand of DNA.**



**[2]**

- (c) The table opposite shows the order of bases on DNA that code for different amino acids.

This is part of the DNA base sequence that codes for the enzyme pepsin.

**TAACCACTG**

- (i) Write down the order of amino acids that are coded for by this section of DNA.

\_\_\_\_\_ [2]

- (ii) Explain why the order of amino acids is important for the correct function of pepsin.

\_\_\_\_\_  
\_\_\_\_\_  
\_\_\_\_\_  
\_\_\_\_\_ [2]

- (iii) A gene mutation causes a change in the DNA.

**TATCCACTG**

What effect will this have on the function of pepsin?

Explain your answer.

\_\_\_\_\_  
\_\_\_\_\_ [1]

**[TOTAL: 11]**



BASE ORDER	AMINO ACID	BASE ORDER	AMINO ACID	BASE ORDER	AMINO ACID	BASE ORDER	AMINO ACID	AMINO ACID	BASE ORDER	AMINO ACID
AAA	Phenylalanine	AGA	Serine	ATA	Tyrosine	ACA	Cysteine			
AAG		AGG		ATG		ACG				
AAT	Leucine	AGT								
AAC		AGC				ACC	Tryptophan			
GAA		GGA		GTA	Histidine	GCA	Arginine			
GAG		GGG	Proline	GTG		GCG				
GAT		GGT		GTT	Glutamine	GCT				
GAC		GGC		GTC		GCC				
TAA	Isoleucine	TGA	Threonine	TTA	Asparagine	TCA	Serine			
TAG		TGG		TTG		TCG				
TAT		TGT		TTT	Lysine	TCT	Arginine			
TAC	Methionine	TGC		TTC		TCC				
CAA	Valine	CGA	Alanine	CTA	Aspartic acid	CCA	Glycine			
CAG		CGG		CTG		CCG				
CAT		CGT		CTT	Glutamic acid	CCT				
CAC		CGC		CTC		CCC				


**BLANK PAGE**

## SECTION B – Module C3

- 4 Pete and Helen investigate the reaction between sodium carbonate,  $\text{Na}_2\text{CO}_3$ , and ethanoic acid,  $\text{C}_2\text{H}_4\text{O}_2$ .

Sodium ethanoate,  $\text{C}_2\text{H}_3\text{O}_2\text{Na}$ , carbon dioxide and water are made.

- (a) Complete the **BALANCED SYMBOL** equation for this reaction.



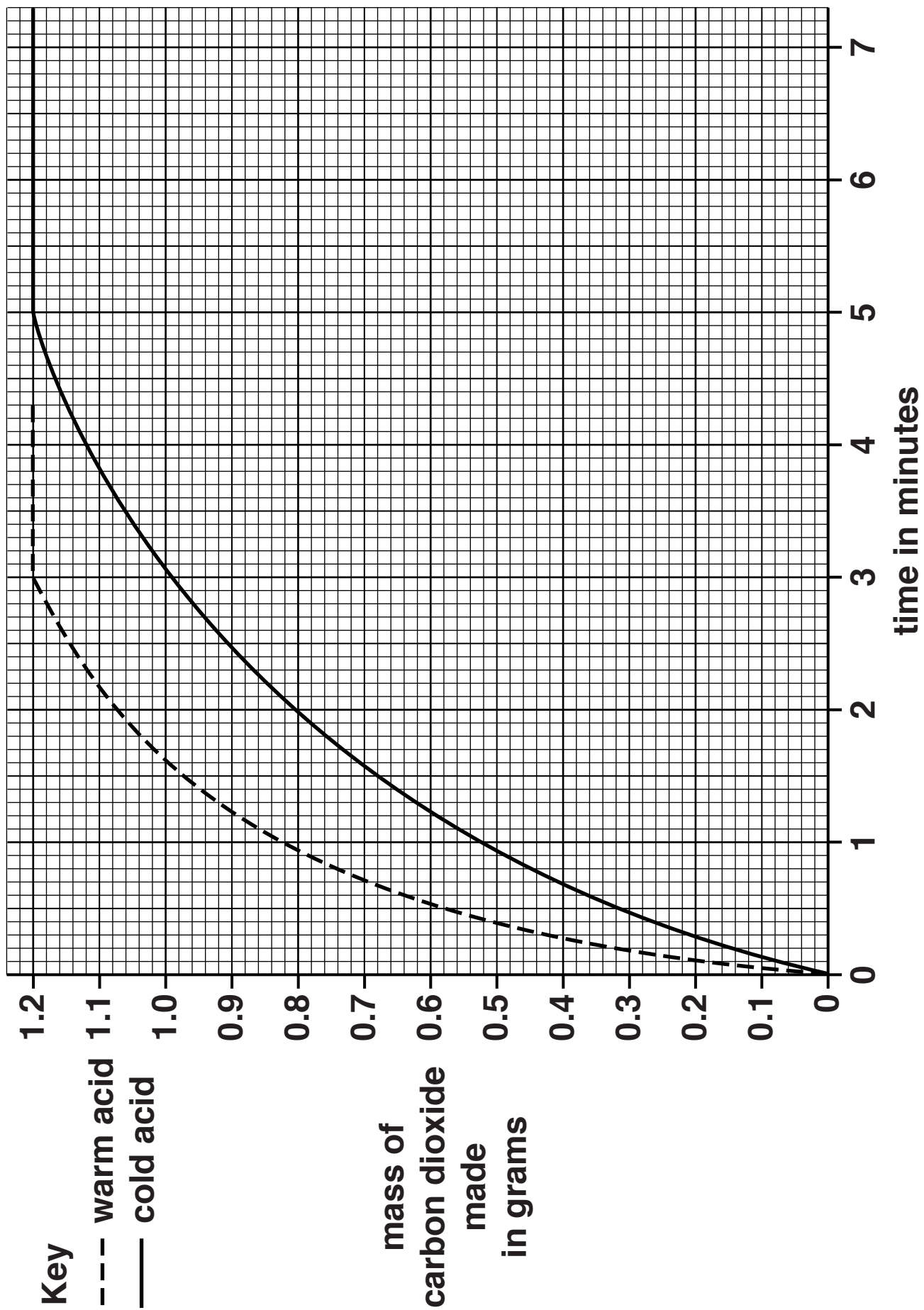
- (b) Pete and Helen measure the mass of carbon dioxide made every 30 seconds during the reaction.

They do the experiment again.

They use the same amount of acid and sodium carbonate.

This time they use **WARM** ethanoic acid instead of cold ethanoic acid.

Look at the graph on the next page. It shows their results.



**Look at the graph for the WARM acid.**

**How long does it take for the reaction to finish?**

**answer \_\_\_\_\_ minutes [1]**

**(c) (i) Look at the graph for the COLD acid.**

**Calculate the rate of this reaction during the first 1.5 minutes of the experiment.**

**Give your answer to 2 SIGNIFICANT FIGURES.**

\_\_\_\_\_  
\_\_\_\_\_

**answer \_\_\_\_\_ g/min [2]**

**(ii) The rate of reaction during the first 1.5 minutes is GREATER than at 4 minutes.**

**How can you tell this from the graph?**

\_\_\_\_\_  
\_\_\_\_\_ [1]

- (d) The reaction with COLD ethanoic acid is SLOWER than the reaction with warm ethanoic acid.**

**Explain, in terms of the reacting particle model, why this reaction is slower with cold acid.**

---

---

---

---

**[3]**

- (e) Complete the sentence.**

**The ethanoic acid is all used up at the end of the reaction because it is the**

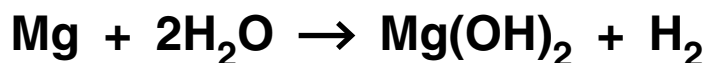
\_\_\_\_\_ reactant. **[1]**

**[TOTAL: 10]**

**5 Soldiers use ‘flameless heaters’ to heat their meals.**

**The ‘flameless heater’ heats the food safely and quickly without using a flame.**

**The heater uses a chemical reaction between magnesium metal and water.**



- (a) Use the balanced symbol equation to show that MASS IS CONSERVED during this reaction.**

**The relative atomic mass,  $A_r$ , of H = 1, Mg = 24 and O = 16.**

---

---

---

**[1]**

- (b) The reaction between magnesium and water is an EXOTHERMIC reaction.**

**Explain why, using ideas about bond breaking and bond making.**

---

---

---

---

**[3]**

- (c) Soldiers need the ‘flameless heaters’ to heat 227 g of food by 56 °C in less than 12 minutes.

A scientist investigates ‘flameless heaters’.

Look at her results below.

Heater	Mass of food heated in g	Temperature rise of food in °C	Time taken in minutes
A	200	40	8
B	227	45	10
C	227	24	6
D	227	30	5

Which heater will heat 227 g of food by 56 °C in less than 12 minutes?

\_\_\_\_\_

Explain your answer.

\_\_\_\_\_

\_\_\_\_\_

\_\_\_\_\_ [2]

[TOTAL: 6]



**6 Pensby pharmaceuticals are making a new painkiller.**

**They make the drug using a BATCH process rather than a continuous process.**

**(a) Explain why BATCH processes are used for making pharmaceutical drugs.**

---

---

**[1]**

**(b) It is often expensive to make and develop new drugs.**

**Explain TWO reasons why.**

---

---

---

---

**[2]**

- (c) Pensby pharmaceuticals investigate four different methods of making the new painkiller.

Look at the table below.

It gives information about the four methods they use.

Method	Predicted mass in g	Actual mass in g	Percentage yield	Atom economy	Cost of raw materials per gram
A	6.7	5.0	75%	50%	£1.92
B	14.2	8.5	60%	85%	£1.30
C	11.5	6.9	_____	40%	£2.16
D	13.3	12.0	90%	80%	£1.36

Use the information to calculate the percentage yield for method C.

Decide which method they should use to make the painkiller and explain your choice. [6]



The quality of written communication will be assessed in your answer to this question.

---

---

---

---

---

---

---

---

---

---

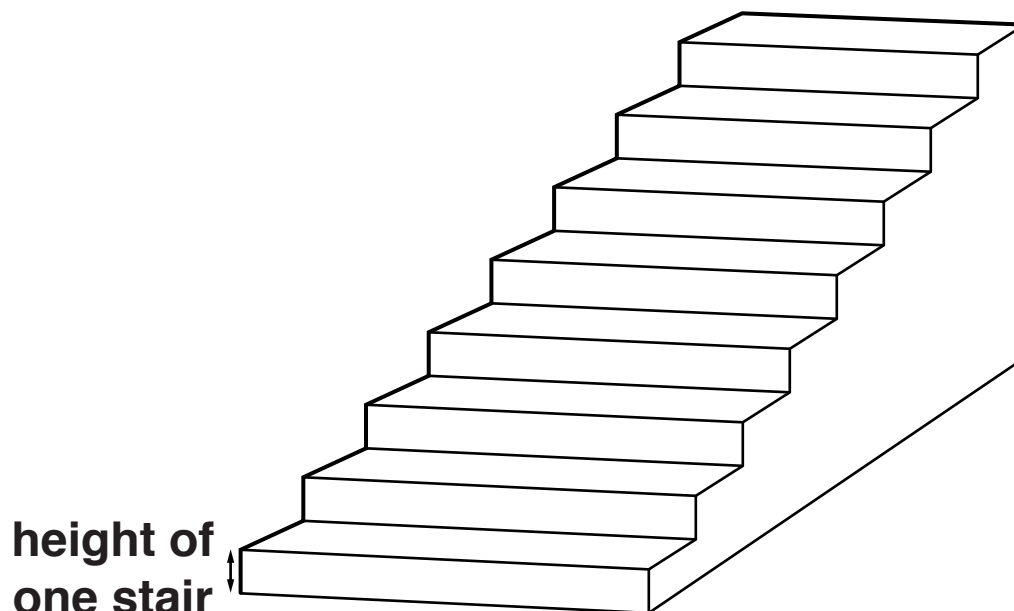
---

**[TOTAL: 9]**

## **SECTION C – Module P3**

**7 This question is about work and power.**

**(a) Janna walks upstairs.**



**The height of one stair is 0.15 m.**

**Janna walks up FOUR stairs. She has a mass of 50 kg.**

**Assume that the gravitational field strength ( $g$ ) is 10 N/kg.**

- (i) Calculate the WORK done by Janna using this data.

---

---

---

---

answer \_\_\_\_\_ J [3]

- (ii) Janna thinks she does MORE work than the value calculated using the data above.

Suggest a reason why.

---

---

 [1]

- (b) Janna walks up to the top of the eight stairs every day.

She walks at different speeds each day.

Look at the information below.

Day	Number of stairs	Power developed in watts
Monday	8	107
Tuesday	8	104
Wednesday	8	108
Thursday	8	112
Friday	8	91

Janna takes the shortest time to reach the top of the stairs on Thursday.

Explain why.

---

---

---

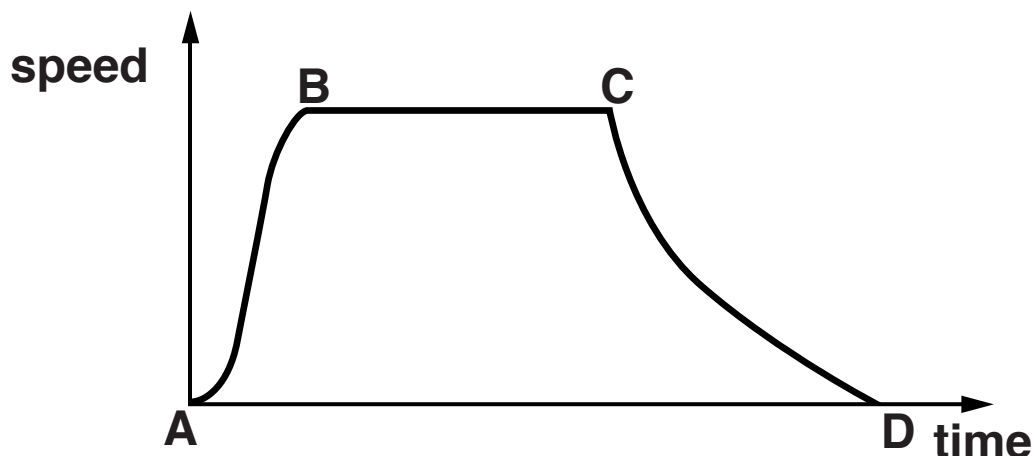
---

[2]

[TOTAL: 6]

**BLANK PAGE**

**8 Look at the speed-time graph below for a journey.**



**Describe the changes in acceleration during the journey and explain how to calculate the distance travelled between time B and C.**

**Use letters A, B, C and D in your answer.**

**[6]**



**The quality of written communication will be assessed in your answer to this question.**

---

---

---

---

---

---

---

---



---

---

---

---

---

---

**[TOTAL: 6]**

**9 Seat belts are a safety feature in cars.**

**The design of seat belts has changed since they were first fitted in cars.**

**(a) Scientists collect test data to help them design new seat belts.**

**(i) Suggest some methods the scientists use to collect valid test data for seat belts.**

---

---

---

**[2]**

**(ii) Why is it important for scientists to publish the test data they collect?**

---

---

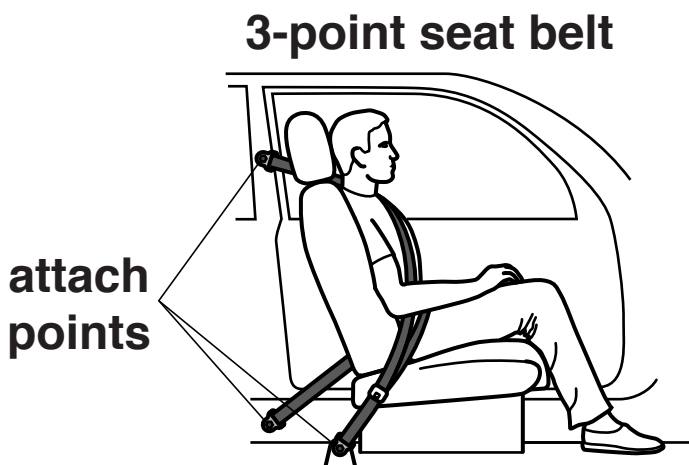
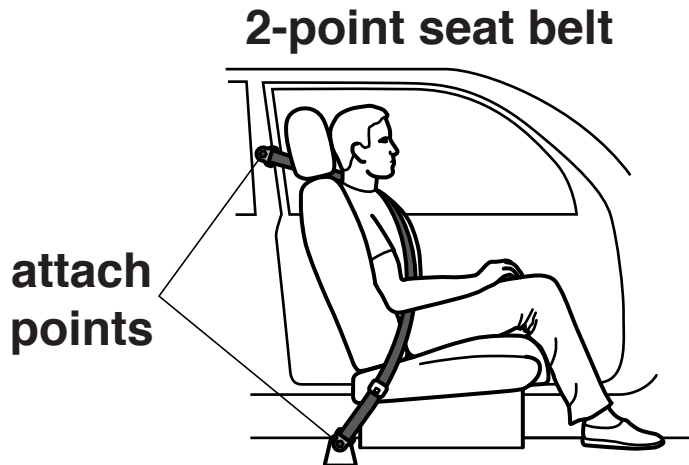
---

**[2]**

**(b) Some seat belts are attached to the car in two places.**

**Others are attached in three places.**

**Look at the diagram below.**



**Suggest why 3-point seat belts are better at reducing injuries.**

---

---

**[1]**

- (c) Test data produced by scientists show that the material which seat belts are made from is important.

Write down one property which seat belt material must have and explain why this property is useful in an accident.

\_\_\_\_\_ [1]

- (d) Pregnant women can find it uncomfortable to wear a seat belt.



Describe one risk AND one benefit of a pregnant woman wearing a seat belt.

\_\_\_\_\_  
\_\_\_\_\_  
\_\_\_\_\_ [2]

[TOTAL: 8]

**10 Taran wants to buy a new car.**

**He uses the internet to find data about fuel consumption and emissions.**

**Look at the table below with the information he finds about two different car models.**

<b>Model R</b>	<b>Model S</b>
<b>FUEL CONSUMPTION IN LITRES PER 100 km:</b> <ul style="list-style-type: none"><li><b>In town 5.7</b></li><li><b>On motorways 4.1</b></li><li><b>Combined 4.6</b></li></ul>	<b>FUEL CONSUMPTION IN LITRES PER 100 km:</b> <ul style="list-style-type: none"><li><b>In town 8.2</b></li><li><b>On motorways 5.2</b></li><li><b>Combined 6.3</b></li></ul>
<b>AVERAGE CARBON DIOXIDE EMISSION 124.0 g/km</b>	<b>AVERAGE CARBON DIOXIDE EMISSION 149.0 g/km</b>

**(a) This data is collected using cars that have been driven with the same driving styles and speeds.**

**Write down another condition that is kept constant to allow the cars to be compared.**

\_\_\_\_\_ **[1]**

- (b) (i) MODEL S has a higher carbon dioxide emission than MODEL R.**

**Use the data to suggest why.**

---

---

---

[1]

- (ii) Suggest why the carbon dioxide emissions quoted in the table are AVERAGE values.**

---

---

[1]

**(c) Taran's friend, Charlie, has a van.**

**Charlie's van has double the mass of Taran's old car.**

**Charlie says 'when my van goes twice the speed of your car, it will have four times as much kinetic energy (KE)'.**

**Is Charlie correct?**

**Explain your answer.**

---

---

---

---

[2]

**[TOTAL: 5]**

**END OF QUESTION PAPER**

### ADDITIONAL ANSWER SPACE

**If additional space is required, you should use the following lined page(s). The question number(s) must be clearly shown in the margins.**

[illegible]





This image shows a blank sheet of white paper with horizontal ruling lines. A single vertical line runs down the left side, creating a margin. There are ten horizontal lines spaced evenly across the page, starting from the top margin line and extending to the right edge. The lines are thin and black.

**BLANK PAGE**

### **Copyright Information**

**OCR is committed to seeking permission to reproduce all third-party content that it uses in its assessment materials. OCR has attempted to identify and contact all copyright holders whose work is used in this paper. To avoid the issue of disclosure of answer-related information to candidates, all copyright acknowledgements are reproduced in the OCR Copyright Acknowledgements Booklet. This is produced for each series of examinations and is freely available to download from our public website ([www.ocr.org.uk](http://www.ocr.org.uk)) after the live examination series.**

**If OCR has unwittingly failed to correctly acknowledge or clear any third-party content in this assessment material, OCR will be happy to correct its mistake at the earliest possible opportunity.**

**For queries or further information please contact the Copyright Team, First Floor, 9 Hills Road, Cambridge CB2 1GE.**

**OCR is part of the Cambridge Assessment Group; Cambridge Assessment is the brand name of University of Cambridge Local Examinations Syndicate (UCLES), which is itself a department of the University of Cambridge.**