

**OCR**

Oxford Cambridge and RSA

**F****GCSE (9–1) Mathematics**  
**J560/03** Paper 3 (Foundation Tier)**Tuesday 12 June 2018 – Morning**  
**Time allowed: 1 hour 30 minutes****You may use:**

- a scientific or graphical calculator
- geometrical instruments
- tracing paper



First name										
Last name										
Centre number						Candidate number				

**INSTRUCTIONS**

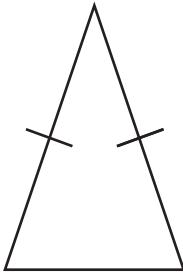
- Use black ink. You may use an HB pencil for graphs and diagrams.
- Complete the boxes above with your name, centre number and candidate number.
- Answer **all** the questions.
- Read each question carefully before you start your answer.
- Where appropriate, your answers should be supported with working. Marks may be given for a correct method even if the answer is incorrect.
- Write your answer to each question in the space provided. Additional paper may be used if required but you must clearly show your candidate number, centre number and question number(s).
- Do **not** write in the barcodes.

**INFORMATION**

- The total mark for this paper is **100**.
- The marks for each question are shown in brackets [ ].
- Use the  $\pi$  button on your calculator or take  $\pi$  to be 3.142 unless the question says otherwise.
- This document consists of **20** pages.

Answer **all** the questions.

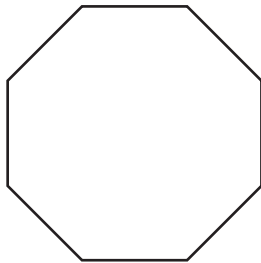
- 1 (a) Write down the mathematical name of this triangle.  
Choose from the list in the box.



isosceles equilateral right-angled scalene

(a) .....triangle [1]

- (b) Write down the order of rotation symmetry of this regular octagon.



(b) ..... [1]

- 2 (a) Write down.

(i) 3091 rounded to the nearest hundred

(a)(i) ..... [1]

(ii) 3% as a decimal

(ii) ..... [1]

(iii) the cube root of 27

(iii) ..... [1]

3

(b) Complete the statement below using a number from this list.

-2      0      -6      6

-5 > ..... [1]

(c) Write the following numbers in order of size, smallest first.

0.4      0.5      0.06      0.444      0.46

..... [2]  
*smallest*

3 Calculate.

(a)  $\frac{3.6}{1.2 - 0.3}$

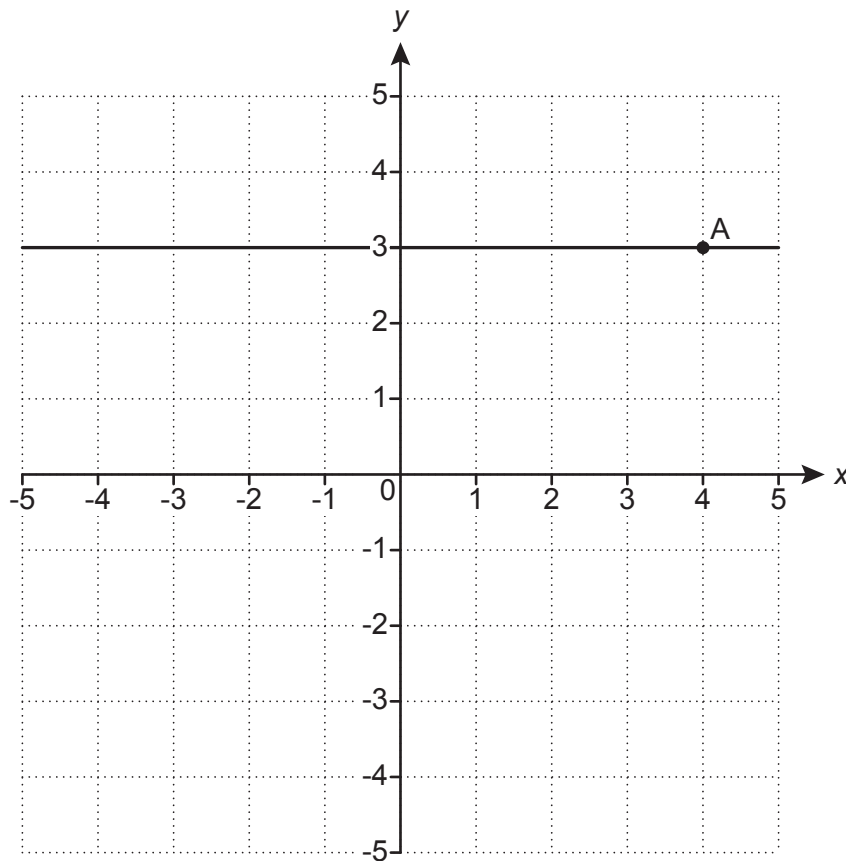
(a) ..... [1]

(b)  $\sqrt{12.25^3}$   
 Give your answer correct to 1 decimal place.

(b) ..... [2]

4

4 This grid shows a horizontal line going through the point A.



(a) (i) Write down the coordinates of point A.

(a)(i) (..... , ..... ) [1]

(ii) Plot the point  $(-2, 3)$ .

[1]

(b) Write down the equation of the horizontal line going through point A.

(b) ..... [1]

5

- 5 *Tea Biscuits* can be bought in packets of 20 or packets of 24.  
All biscuits are identical in size and quality.

20 *Tea Biscuits*  
for  
£1.50

24 *Tea Biscuits*  
for  
£1.80

Nada says

The packet of 24 biscuits is better value.

Is Nada correct?

Show how you decide.

Nada is ..... because.....  
..... [3]

- 6 You are given that  $5y = 4x$ .

(a) Find the value of  $y$  when  $x = 10$ .

(a)  $y =$  ..... [2]

(b) Write  $y$  in terms of  $x$ .

(b)  $y =$  ..... [1]

6

- 7 (a) Frances has three cards: Ace (A), King (K) and Queen (Q). She shuffles these cards and deals them one at a time.

- (i) List all the different orders in which she can deal the cards. One possible order is already shown in the table. You may not need to use all the rows.

First card	Second card	Third card
A	K	Q

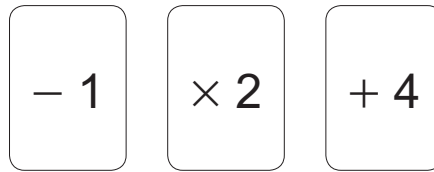
[2]

- (ii) Find the probability that, in the three cards Frances deals, the King (K) is dealt **immediately** after the Queen (Q).

(ii) ..... [1]

7

- (b) A counter has 3 on one side and 5 on the other.  
Lena flips the counter.  
She then picks one of these three cards at random.



Lena puts the card next to the counter and works out the answer.

For example   gives the answer 10.

Find the probability that Lena gets an answer **less than 8**.  
You must show your working.

(b) ..... [4]

8

- 8 Two groups of students go on a water sport holiday.  
Each student chooses one activity.

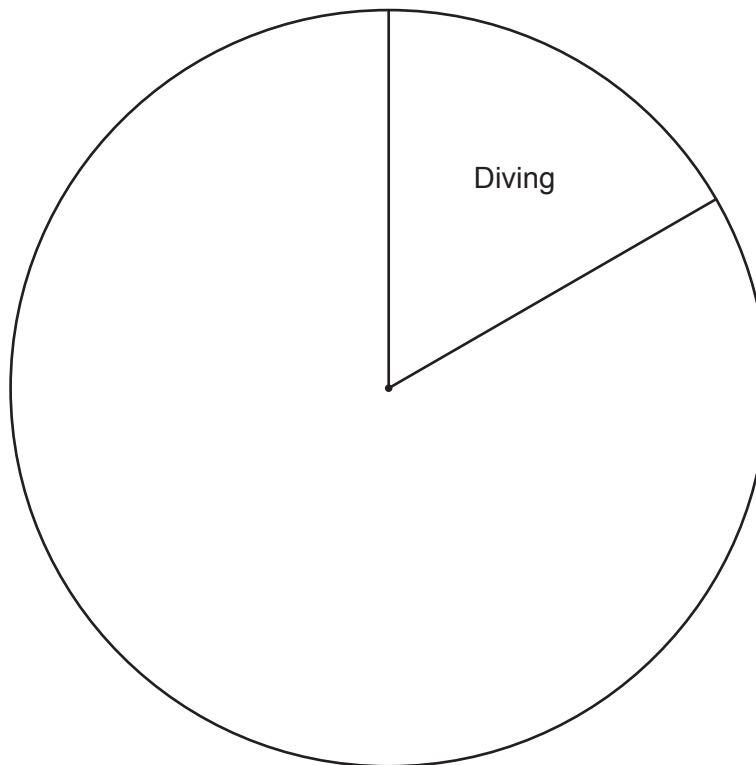
Students in **Group A** choose from Diving, Swimming, Paddleboarding and Kayaking.  
Their choices are to be shown in a pie chart.

- (a) Complete this table for Group A.

Activity	Number of students	Angle of sector
Diving	5	$60^\circ$
Swimming		$120^\circ$
Paddleboarding		
Kayaking	9	$108^\circ$

[4]

- (b) Complete the pie chart for Group A.



[2]

- (c) One student in Group A changes activity.  
There is now a new modal activity for Group A.

Write down the student's original activity and new activity.

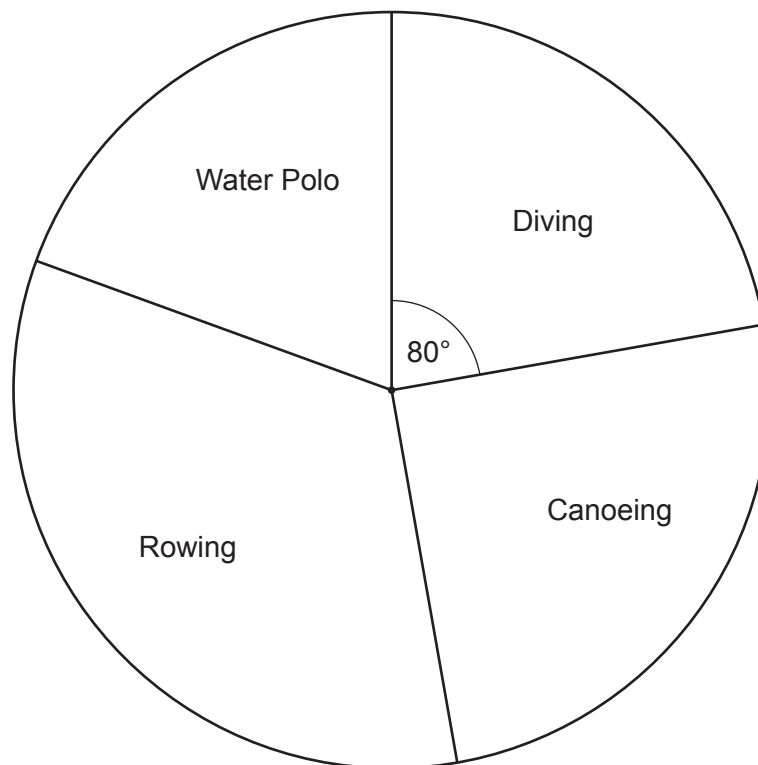
original activity.....

new activity..... [1]



9

(d) The choices made by **Group B** are shown in this pie chart.



A teacher thinks more students chose Diving in Group B than in Group A.

Give a reason why the teacher may be wrong.

.....  
 ..... [1]

9 The length,  $a$ , of a pencil is 15.3 cm, correct to 1 decimal place.

Complete the error interval for the length of the pencil.

.....  $\leq a <$  ..... [2]

10

10 4 people take 3 hours to paint a fence.

Assume that all people paint at the same rate.

(a) How long would it take one of these people to paint the same fence?

(a) ..... hours [1]

(b) How long would it take 5 people to paint the same fence?  
Give your answer in hours and minutes.

(b) ..... hours ..... minutes [4]

11 A recipe for flapjacks uses only oats, butter and syrup, in the ratio 3 : 2 : 1.

- (a) Pirin makes 1.5 kg of flapjacks.  
He uses 600 g of butter.

Has Pirin followed this recipe?  
Show how you decide.

.....

.....

.....

.....

.....

.....

.....

..... [4]

- (b) Using this recipe, 200g of syrup are needed to make 10 flapjacks.  
Find the mass of **oats** needed to make **15** of these flapjacks.

(b) ..... g [3]

12

12 (a)  $\overrightarrow{PQ} = \begin{pmatrix} 3 \\ 4 \end{pmatrix}$

Work out  $5\overrightarrow{PQ}$ .

(a)  $\begin{pmatrix} \quad \\ \quad \end{pmatrix}$  [1]

(b) Find the values of  $h$  and  $k$ .

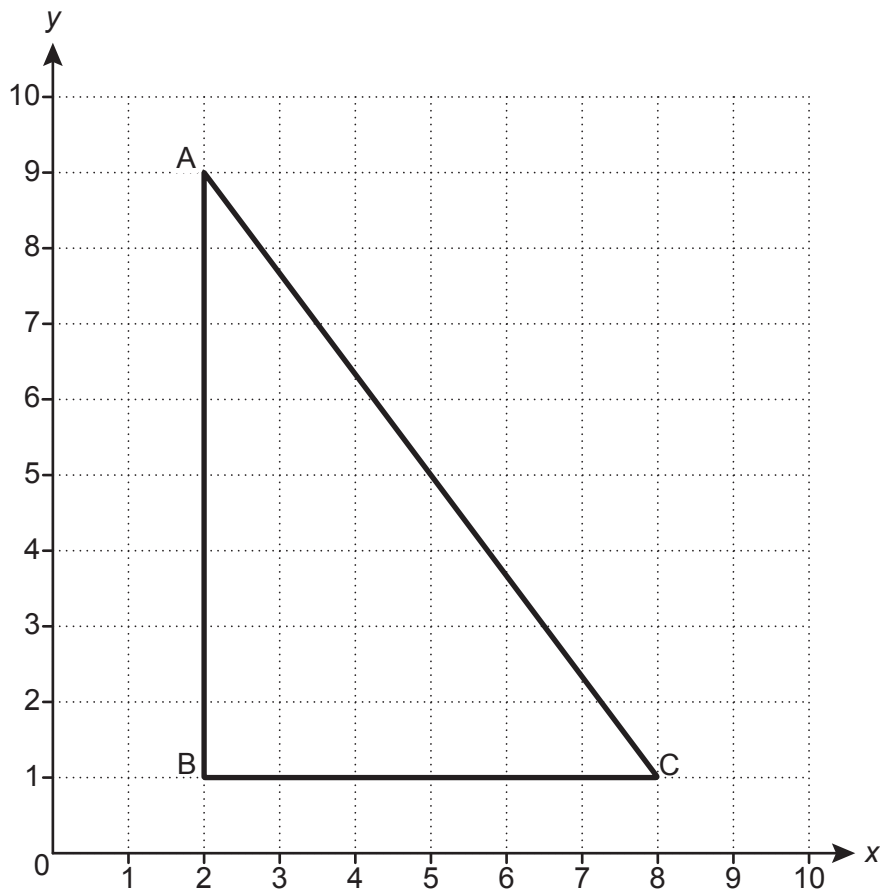
$$\begin{pmatrix} h \\ 5 \end{pmatrix} + \begin{pmatrix} 2 \\ k \end{pmatrix} - \begin{pmatrix} 3 \\ 3 \end{pmatrix} = \begin{pmatrix} 0 \\ 0 \end{pmatrix}$$

(b)  $h = \dots\dots\dots$

$k = \dots\dots\dots$  [2]

13

(c) Triangle ABC is drawn on a coordinate grid.



$$\vec{AB} = \begin{pmatrix} 0 \\ -8 \end{pmatrix}$$

(i) Use the diagram to complete this vector sum.

$$\vec{AB} + \vec{BC} + \vec{CA} = \begin{pmatrix} 0 \\ -8 \end{pmatrix} + \begin{pmatrix} \quad \\ \quad \end{pmatrix} + \begin{pmatrix} \quad \\ \quad \end{pmatrix} = \begin{pmatrix} \quad \\ \quad \end{pmatrix}$$

[2]

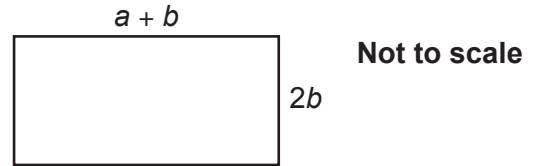
(ii) Give a reason why the answer to the sum could be written down **without doing any working**.

.....

..... [1]

13 In this question, assume all dimensions are in centimetres.

Jess and Pete have many rectangular tiles.  
Each tile has length  $a + b$  and width  $2b$ .



(a) Jess joins three tiles together to make a larger rectangle, as shown.



(i) Write an expression for the perimeter of her rectangle.  
Give your answer in its simplest form.

(a)(i) ..... [2]

(ii) An expression for the **area** of her rectangle is  $6ab + 6b^2$ .

Factorise this expression fully.

(ii) ..... [2]

(b) Pete joins some tiles together to make a different rectangle.  
The area of his rectangle is  $8ab + 8b^2$ .

Draw a possible arrangement of tiles for Pete's rectangle.  
Write down expressions for the length and for the width of the rectangle.

length = .....

width = ..... [5]

15

14 Here are the first four terms of a sequence.

6            10            14            18

(a) Write down the next term.

(a) ..... [1]

(b) Write an expression for the  $n$ th term.

(b) ..... [2]

(c) Explain why 511 is **not** a term in the sequence.

.....  
..... [1]

(d) Find the term in the sequence that is nearest to 511.

(d) ..... [3]

Turn over

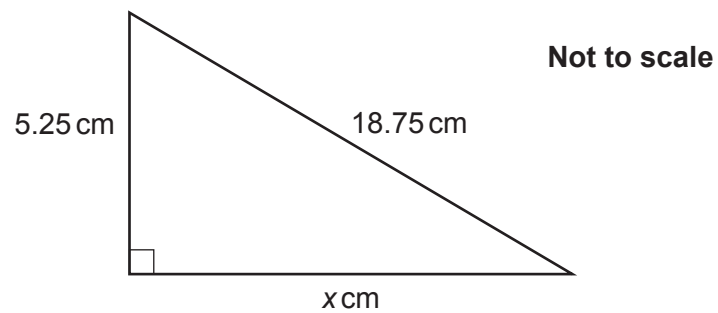
16

- 15 In July the price of a holiday is £500.  
In August the price increases by 25%.  
In September the price drops to £500 again.

Work out the percentage decrease from the August price to the September price.

..... % [4]

- 16 Here is a right-angled triangle.



Work out the value of  $x$ .

$x =$  ..... [3]



17 Ping chooses four numbers.

The mode of these four numbers is 8, the range is 7 and the mean is 11.

Find Ping's four numbers.

..... [3]

18 A box contains only red, blue and green pens.

The ratio of red pens to blue pens is 5 : 9.

The ratio of blue pens to green pens is 1 : 4.

Calculate the percentage of pens that are blue.

..... % [4]

19 Asha worked out  $\frac{326.8 \times (6.94 - 3.4)}{59.4}$ .

She got an answer of 19.5, correct to 3 significant figures.

Write each number correct to 1 significant figure to decide if Asha's answer is reasonable.

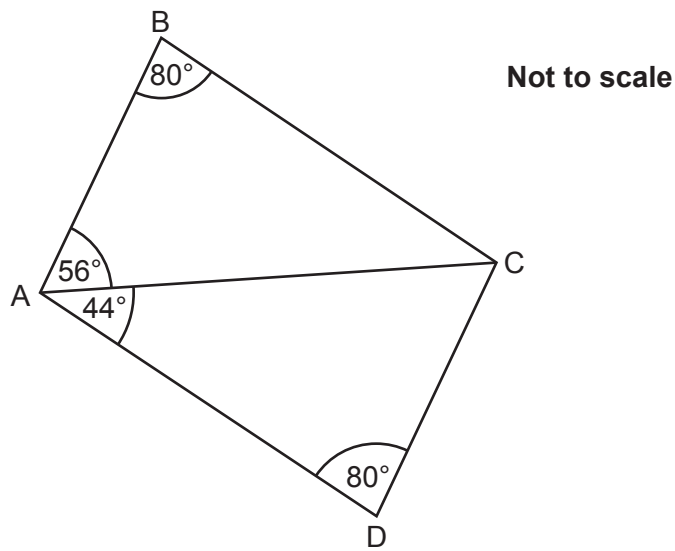
.....  
 ..... [3]

20 (a) Show that  $a^5 \times (a^3)^2$  can be expressed as  $a^{11}$ . [2]

(b) Write  $\frac{1}{125} \times 25^9$  as a power of 5.

(b) ..... [3]

21 The diagram below shows two triangles.



Prove that triangle ABC is congruent to triangle ACD.

.....

.....

.....

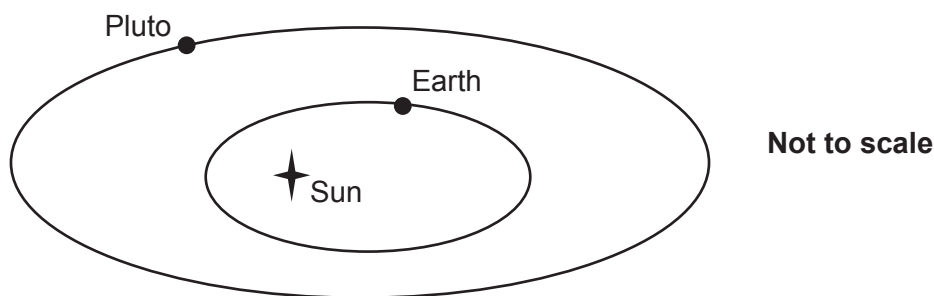
.....

.....

.....

..... [4]

- 22 Earth and Pluto go around the Sun.  
Their distance to the Sun varies.



The table shows the closest distance that Earth and Pluto get to the Sun.

	Closest distance to the Sun (km)
Earth	$1.47 \times 10^8$
Pluto	$4.44 \times 10^9$

- (a) Show that the closest distance of Pluto to the Sun is roughly 30 times the closest distance of Earth to the Sun. [2]

- (b) Give a reason why we **cannot** use this information to say

The distance of Pluto to the Sun is always  
30 times the distance of Earth to the Sun.

.....  
..... [1]

**END OF QUESTION PAPER**

**OCR**

Oxford Cambridge and RSA

**Copyright Information**

OCR is committed to seeking permission to reproduce all third-party content that it uses in its assessment materials. OCR has attempted to identify and contact all copyright holders whose work is used in this paper. To avoid the issue of disclosure of answer-related information to candidates, all copyright acknowledgements are reproduced in the OCR Copyright Acknowledgements Booklet. This is produced for each series of examinations and is freely available to download from our public website ([www.ocr.org.uk](http://www.ocr.org.uk)) after the live examination series.

If OCR has unwittingly failed to correctly acknowledge or clear any third-party content in this assessment material, OCR will be happy to correct its mistake at the earliest possible opportunity.

For queries or further information please contact the Copyright Team, First Floor, 9 Hills Road, Cambridge CB2 1GE.

OCR is part of the Cambridge Assessment Group; Cambridge Assessment is the brand name of University of Cambridge Local Examinations Syndicate (UCLES), which is itself a department of the University of Cambridge.