

**OXFORD CAMBRIDGE AND RSA EXAMINATIONS
AS GCE
4771/01**

**MATHEMATICS (MEI)
Decision Mathematics 1
PRINTED ANSWER BOOK**

**WEDNESDAY 15 JUNE 2016: Morning
DURATION: 1 hour 30 minutes
plus your additional time allowance
MODIFIED ENLARGED 24pt**

Candidate forename						Candidate surname				
Centre number						Candidate number				

Candidates answer on this Printed Answer Book.

**OCR SUPPLIED MATERIALS:
Question Paper 4771/01**

**OTHER MATERIALS REQUIRED:
Scientific or graphical calculator
3 models for Question 3**

READ INSTRUCTIONS OVERLEAF



INSTRUCTIONS TO CANDIDATES

These instructions are the same on the Printed Answer Book and the Question Paper.

Write your name, centre number and candidate number in the spaces provided on the Printed Answer Book. Please write clearly and in capital letters.

WRITE YOUR ANSWER TO EACH QUESTION IN THE SPACE PROVIDED IN THE PRINTED ANSWER BOOK. Additional paper may be used if necessary but you must clearly show your candidate number, centre number and question number(s).

Use black ink. HB pencil may be used for graphs and diagrams only.

Read each question carefully. Make sure you know what you have to do before starting your answer.

Answer ALL the questions.

You are permitted to use a scientific or graphical calculator in this paper.

Final answers should be given to a degree of accuracy appropriate to the context.

INFORMATION FOR CANDIDATES

This information is the same on the Printed Answer Book and the Question Paper.

The number of marks is given in brackets [] at the end of each question or part question on the Question Paper.

You are advised that an answer may receive NO MARKS unless you show sufficient detail of the working to indicate that a correct method is being used.

The total number of marks for this paper is 72.

Any blank pages are indicated.

1 (i)

1 (ii)

1 (iii) RANDOM DIGITS

1 6 4

8 6 4

8 7 4

3 1 1

5 3 2

1 (iv)

2 (i)

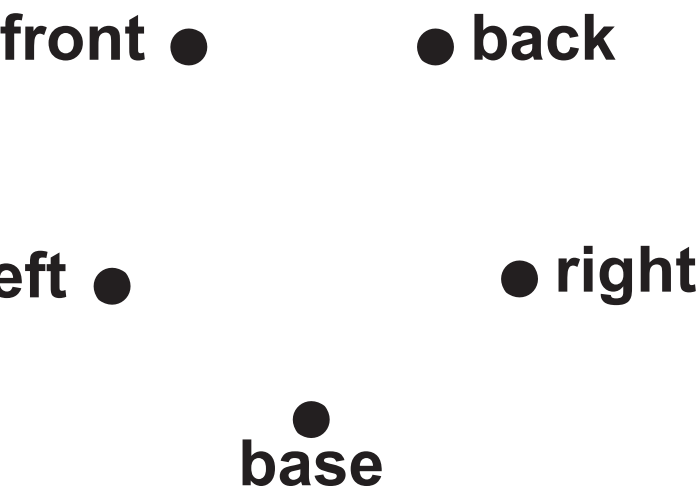
2 (ii)

2 (iii)

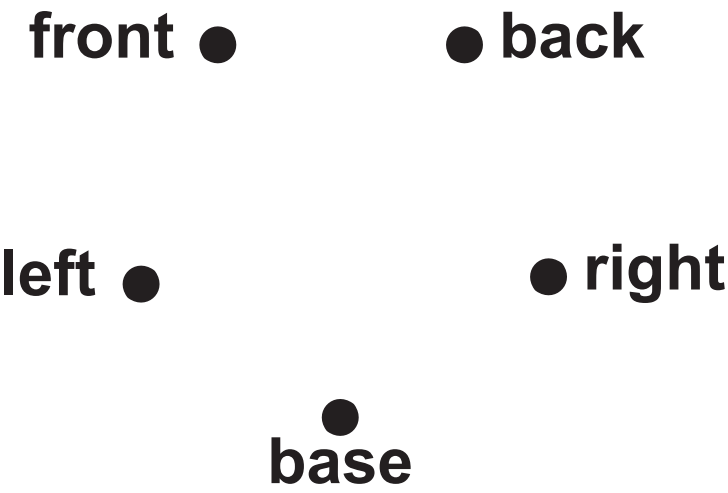
2 (iv)

3 (i)

Adjacency graph



Complement



Minimum number of colours _____

3 (ii)(A)

Adjacency graph

top front ● ● top back

top left ● ● top right

base left ● ● base right

base front ● ● base back

Complement

top front ● ● top back

top left ● ● top right

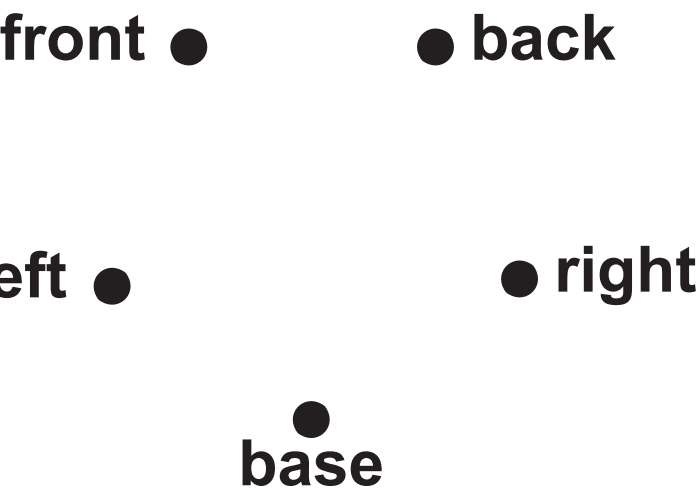
base left ● ● base right

base front ● ● base back

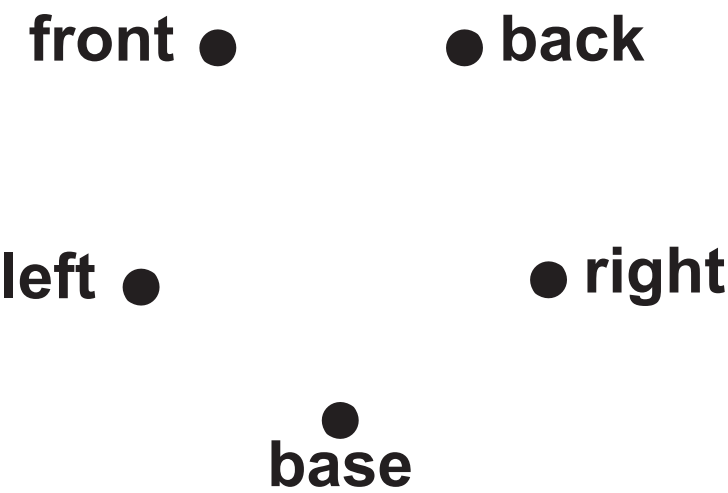
3 (ii)(B)

SPARE TEMPLATE FOR 3(i)

Adjacency graph



Complement



SPARE TEMPLATE FOR 3(ii) (A)

Adjacency graph

top front ● ● top back

top left ● ● top right

base left ● ● base right

base front ● ● base back

Complement

top front ● ● top back

top left ● ● top right

base left ● ● base right

base front ● ● base back

4 (i)



4 (ii)

4 (iii)


4 (iv)

4 (v)

4 (vi)

(ANSWER SPACE CONTINUED ON NEXT PAGE)

4 (vi) (CONTINUED) A SPARE COPY OF THIS GRAPH CAN BE FOUND ON PAGE 16.



5 (i)

Activity	Duration (weeks)	Immediate predecessors
A	1	
B	1	
C	1	
D	8	
E	6	
F	6	
G	6	
H	1	
I	2	
J	4	
K	2	

5 (ii) & (iii)

5 (iv)

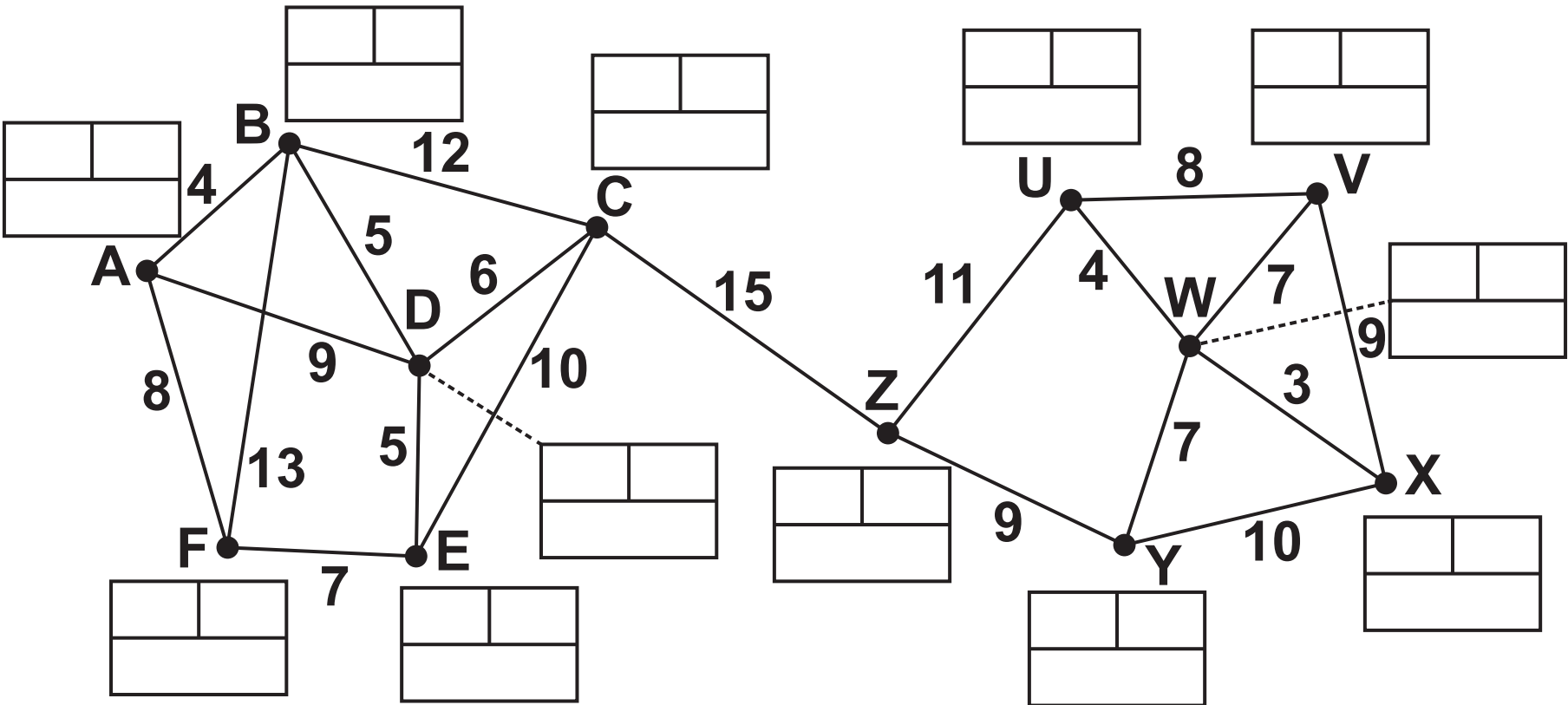
Week	1	2	3	4	5	6	7	8	9	10	11	12
Room 1												
Room 2												
Room 3												

SPARE FOR 5 (iv)

Week	1	2	3	4	5	6	7	8	9	10	11	12
Room 1												
Room 2												
Room 3												


SPARE SPACE FOR 5 (ii) & (iii)

6(a)(i)



6(a)(ii)

6(b)(i)




6(b)(ii)

U. V
Z. W
Y. X

6(b)(iii)

4 (vi) SPARE COPY OF GRAPH FOR QUESTION 4(vi).



Copyright Information

OCR is committed to seeking permission to reproduce all third-party content that it uses in its assessment materials. OCR has attempted to identify and contact all copyright holders whose work is used in this paper. To avoid the issue of disclosure of answer-related information to candidates, all copyright acknowledgements are reproduced in the OCR Copyright Acknowledgements Booklet. This is produced for each series of examinations and is freely available to download from our public website (www.ocr.org.uk) after the live examination series.

If OCR has unwittingly failed to correctly acknowledge or clear any third-party content in this assessment material, OCR will be happy to correct its mistake at the earliest possible opportunity.

For queries or further information please contact the Copyright Team, First Floor, 9 Hills Road, Cambridge CB2 1GE.

OCR is part of the Cambridge Assessment Group; Cambridge Assessment is the brand name of University of Cambridge Local Examinations Syndicate (UCLES), which is itself a department of the University of Cambridge.