

OXFORD CAMBRIDGE AND RSA EXAMINATIONS
LEVEL 1/2
R113/01
CAMBRIDGE NATIONAL IN
SYSTEMS CONTROL ENGINEERING
Electronic principles

MONDAY 1 JUNE 2015: Afternoon
DURATION: 1 hour
plus your additional time allowance

MODIFIED ENLARGED

Candidate forename		Candidate surname	
-------------------------------	--	------------------------------	--

Centre number						Candidate number				
--------------------------	--	--	--	--	--	-----------------------------	--	--	--	--

Candidates answer on the Question Paper.

OCR SUPPLIED MATERIALS:

None

OTHER MATERIALS REQUIRED:

A calculator may be used

A calculator may be used for this paper
--

READ INSTRUCTIONS OVERLEAF

INSTRUCTIONS TO CANDIDATES

Use black ink. HB pencil may be used for graphs and diagrams only.

Complete the boxes on the first page with your name, centre number and candidate number.

Answer ALL the questions.

Write your answer to each question in the space provided.

INFORMATION FOR CANDIDATES

The total number of marks for this paper is 60.

The number of marks for each question is given in brackets [] at the end of the question or part question.

Dimensions are in millimetres unless stated otherwise.

Any blank pages are indicated.

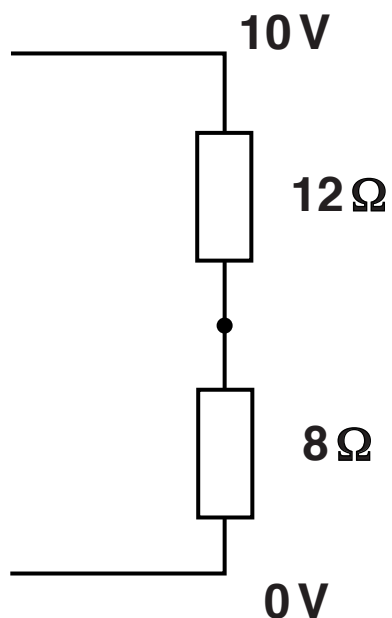
Quality of written communication will be assessed in questions marked with an asterisk (*).

BLANK PAGE

Answer ALL the questions.

1 (a) Fig. 1 shows part of a circuit diagram.

FIG. 1



(i) State whether the resistors are connected in series or in parallel.

_____ [1]

(ii) Give the total resistance of this part of the circuit.

_____ [2]

(iii) Calculate the current flowing through the two resistors.

[2]

(iv) Calculate the potential difference across the 8Ω resistor.

[2]

(b) (i) On Fig. 1 show how you would connect a voltmeter to measure the supply voltage. [1]

- (ii) Write down the colours that would be used for the $12\Omega \pm 5\%$ resistor, using the information from the table:

DIGIT 1	DIGIT 2	MULTIPLIER	TOLERANCE
Black 0	Black 0	Black 0	
Brown 1	Brown 1	Brown 1	Brown 1%
Red 2	Red 2	Red 2	Red 2%
Orange 3	Orange 3	Orange 3	Gold 5%

The resistor colours are:

Digit 1 _____

Digit 2 _____

Multiplier _____

[1]

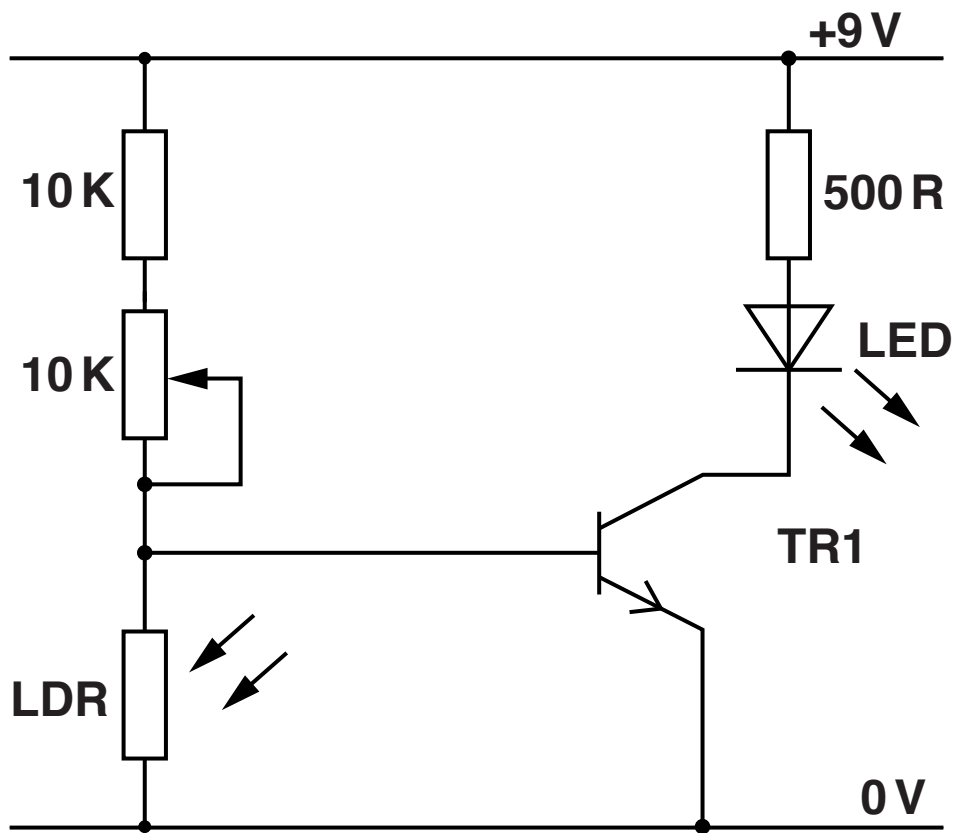
State the maximum value of a resistor that could be expected in a batch of 12Ω resistors.

_____ [1]

BLANK PAGE

2 (a) Fig. 2 shows a circuit diagram.

FIG. 2



(i) Give the meaning of the letters LDR.

_____ [1]

(ii) State the function of the LDR in the circuit.

_____ [1]

(iii) Give the meaning of the letters LED.

_____ [1]

(iv) State ONE function of the transistor TR1 in the circuit.

_____ [1]

(v) Calculate the current flowing through the 500 R resistor if the forward voltage of the LED is 1 V. Assume there is no voltage drop across the transistor.

_____ [3]

(b) Give THREE practical applications of an LED.

1 _____

2 _____

3 _____

[3]

- 3 (a) (i) For a control system, explain what is meant by the term 'input'.**

[2]

- (ii) Draw a labelled block diagram for a closed loop system.**

[2]

- (iii) Complete the table with a tick (✓) to identify which THREE devices are used as output devices.

DEVICE	OUTPUT
Liquid Crystal Display (LCD)	
NTC Thermistor	
Pressure switch	
Piezoelectric buzzer	
Phototransistor	
Solenoid	

[3]

(b) (i) Draw the symbol for an operational amplifier (op amp).

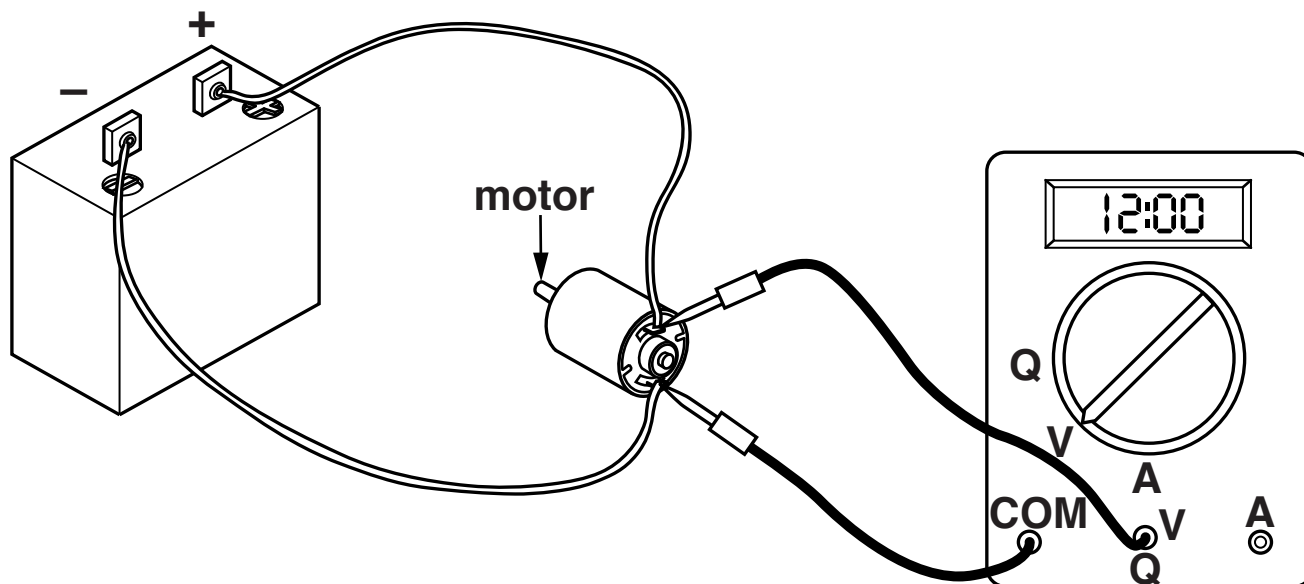
[1]

(ii) Explain the function of an op amp as a process device.

[2]

- 4 (a) Fig. 3 shows a multimeter being used to measure voltage across a motor.

FIG. 3



Describe the changes needed to enable the multimeter to measure current flowing through the motor.

[4]

BLANK PAGE

[illegible]

[6]

- 5 (a) Describe the process of using a soldering iron to solder a component on a printed circuit board (PCB).**

[4]

- (b) Explain why it is necessary to use a PCB eraser.**

[2]

(c) State TWO methods of assuring the quality of tracks on a PCB.

1 _____

2 _____

[2]

(d) Give TWO safety precautions that should be taken when using a soldering iron.

1 _____


2 _____

[2]

6 (a) Name the logic gate shown in Fig. 4.

(i) _____ [1]

FIG. 4



(ii) Add labels for input A, input B and output C to the logic gate in Fig. 4. [1]

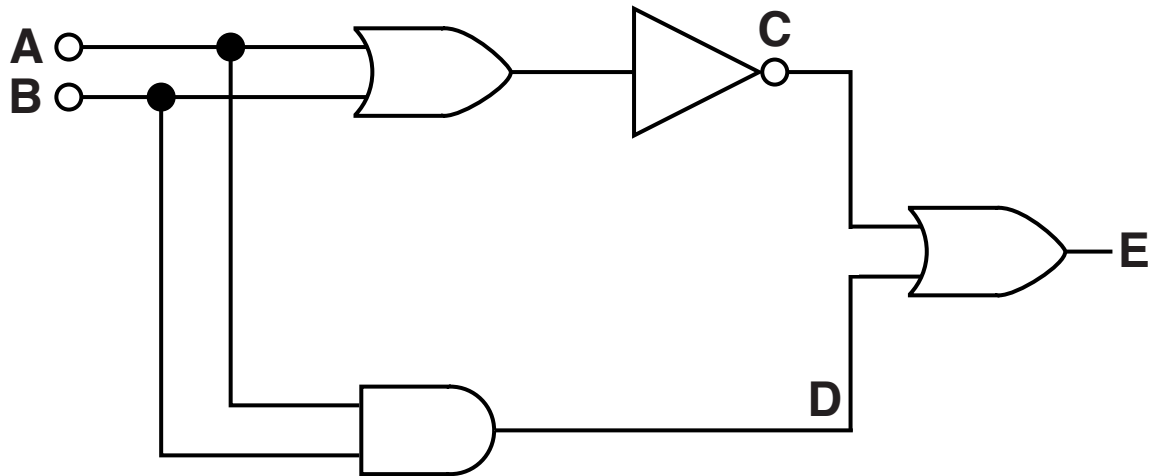
(iii) Complete the truth table shown below.

Input A	Input B	Output C
0	0	
0	1	
1	0	
1	1	

[1]

(b) Fig. 5 shows a digital circuit made up of logic gates.

FIG. 5



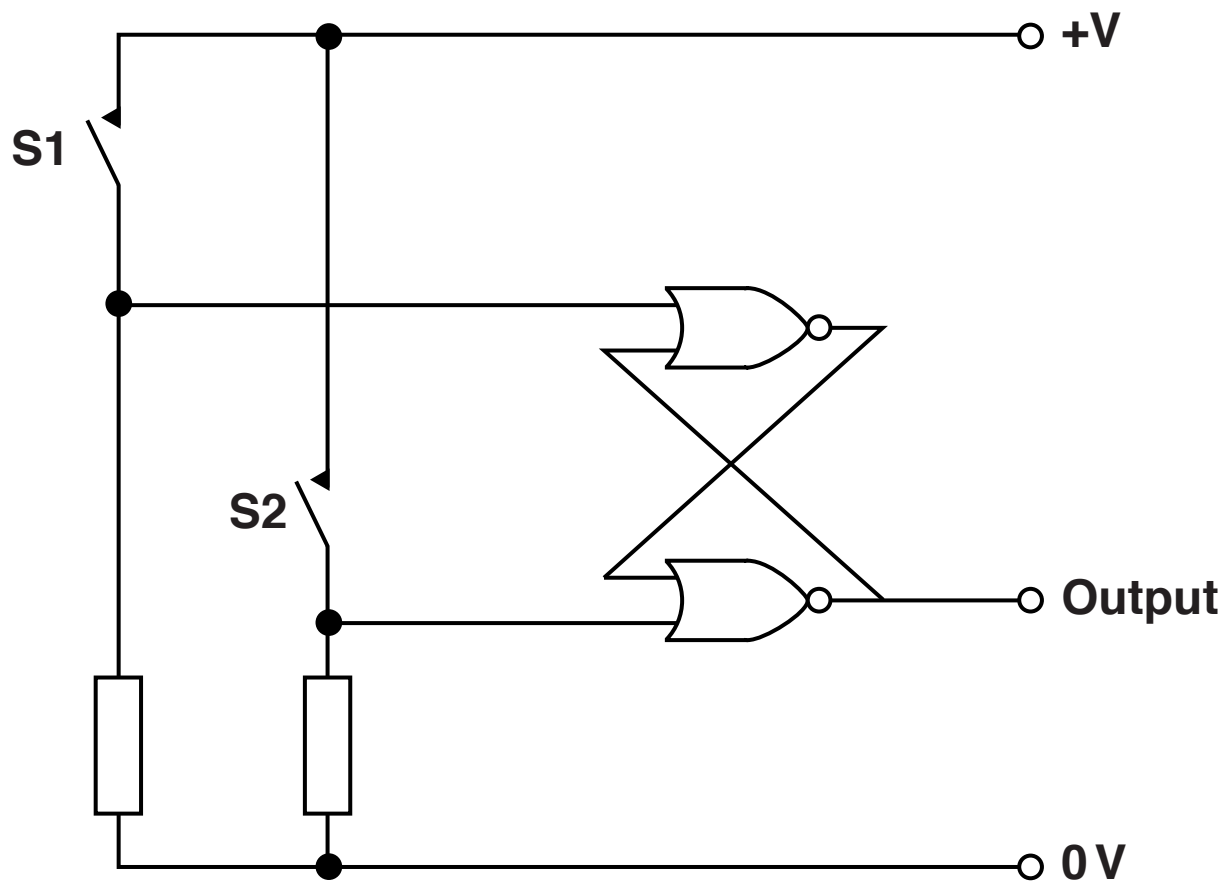
Complete the truth table for the circuit shown in Fig. 5.

Input A	Input B	Input C	Input D	Output E
0	0			
0	1			
1	0			
1	1			

[3]

(c) Fig. 6 shows an SR bistable circuit.

FIG. 6



(i) State what is meant by a 'bistable circuit'.

_____ [1]

(ii) Give the logic level at the output when the circuit is first switched on.

_____ [1]

- (iii) State the logic level at the output when the switch S1 is closed and held down.**

_____ **[1]**

- (iv) State the logic level at the output when the switch S1 is released.**

_____ **[1]**

END OF QUESTION PAPER

Copyright Information

OCR is committed to seeking permission to reproduce all third-party content that it uses in its assessment materials. OCR has attempted to identify and contact all copyright holders whose work is used in this paper. To avoid the issue of disclosure of answer-related information to candidates, all copyright acknowledgements are reproduced in the OCR Copyright Acknowledgements Booklet. This is produced for each series of examinations and is freely available to download from our public website (www.ocr.org.uk) after the live examination series.

If OCR has unwittingly failed to correctly acknowledge or clear any third-party content in this assessment material, OCR will be happy to correct its mistake at the earliest possible opportunity.

For queries or further information please contact the Copyright Team, First Floor, 9 Hills Road, Cambridge CB2 1GE.

OCR is part of the Cambridge Assessment Group; Cambridge Assessment is the brand name of University of Cambridge Local Examinations Syndicate (UCLES), which is itself a department of the University of Cambridge.

