

OXFORD CAMBRIDGE AND RSA EXAMINATIONS
FSMQ

6993/01

ADVANCED LEVEL
Additional Mathematics
QUESTION PAPER

TUESDAY 20 JUNE 2017: Afternoon
DURATION: 2 hours
plus your additional time allowance
MODIFIED ENLARGED

Candidates answer on the Printed Answer Book or on any suitable paper provided by the centre. The Printed Answer Book may be enlarged by the centre.

OCR SUPPLIED MATERIALS:

An insert for Question 12

OTHER MATERIALS REQUIRED:

Scientific or graphical calculator
A model for Question 14

READ INSTRUCTIONS OVERLEAF



INSTRUCTIONS TO CANDIDATES

Write your name, centre number and candidate number in the spaces provided on the Printed Answer Book or on the paper provided. Please write clearly and in capital letters.

IF YOU USE THE PRINTED ANSWER BOOK WRITE YOUR ANSWER TO EACH QUESTION IN THE SPACE PROVIDED. If additional space is required, you should use the lined page(s) at the end of this booklet. The question number(s) must be clearly shown.

Use black ink. HB pencil may be used for graphs and diagrams only.

Answer ALL the questions.

Read each question carefully. Make sure you know what you have to do before starting your answer.

You are permitted to use a scientific or graphical calculator in this paper.

Final answers should be given correct to three significant figures where appropriate.

INFORMATION FOR CANDIDATES

The number of marks is given in brackets [] at the end of each question or part question on the Question Paper.

You are advised that an answer may receive NO MARKS unless you show sufficient detail of the working to indicate that a correct method is being used.

The total number of marks for this paper is 100.

Any blank pages are indicated.

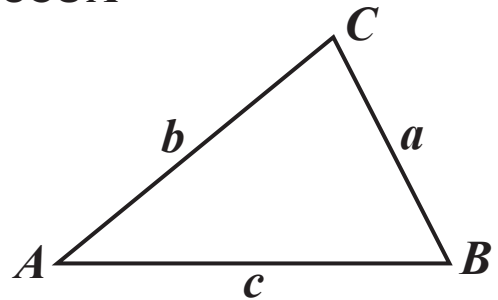
INSTRUCTION TO EXAMS OFFICER/INVIGILATOR

Do not send this Question Paper for marking; it should be retained in the centre or recycled. Please contact OCR Copyright should you wish to re-use this document.

Formulae Sheet: 6993 Additional Mathematics

In any triangle ABC

Cosine rule $a^2 = b^2 + c^2 - 2bc \cos A$



Binomial expansion

When n is a positive integer

$$(a + b)^n = a^n + \binom{n}{1}a^{n-1}b + \binom{n}{2}a^{n-2}b^2 + \dots + \binom{n}{r}a^{n-r}b^r + \dots + b^n$$

where

$$\binom{n}{r} = {}^nC_r = \frac{n!}{r!(n-r)!}$$

Answer ALL the questions.

SECTION A

- 1 Solve the inequality $-2 < 3x + 1 < 7$. [3]**

- 2 Find the equation of the line which is perpendicular to the line with equation $2x + 3y = 4$ and which passes through the point $(3, -1)$. [4]**

- 3 Find the equation of the tangent to the curve $y = x^2 - 3x$ at the point $(4, 4)$. [4]**

- 4 The coordinates of A and B are $(1, 5)$ and $(-3, 7)$ respectively.**
 - (i) Calculate the EXACT length of AB. [2]**
 - (ii) Find the coordinates of the midpoint of AB. [1]**

- 5 (i) Find the equation of the circle which has its centre at the origin and passes through the point $(1, 7)$. [2]**
 - (ii) Find the coordinates of the two points where the line $2x + y = 15$ cuts this circle. [4]**

6 You are given that the equation $x^3 - x^2 - 10x + 6 = 0$ has two non-integer positive roots and one negative integer root.

(i) Using the factor theorem, find the negative root. [2]

(ii) Hence solve the equation. [4]

7 (i) Find $\int_3^5 (x^2 - 7) dx$. [4]

(ii) Explain by means of a sketch why the area between the curve $y = x^2 - 7$ and the lines $x = 2$

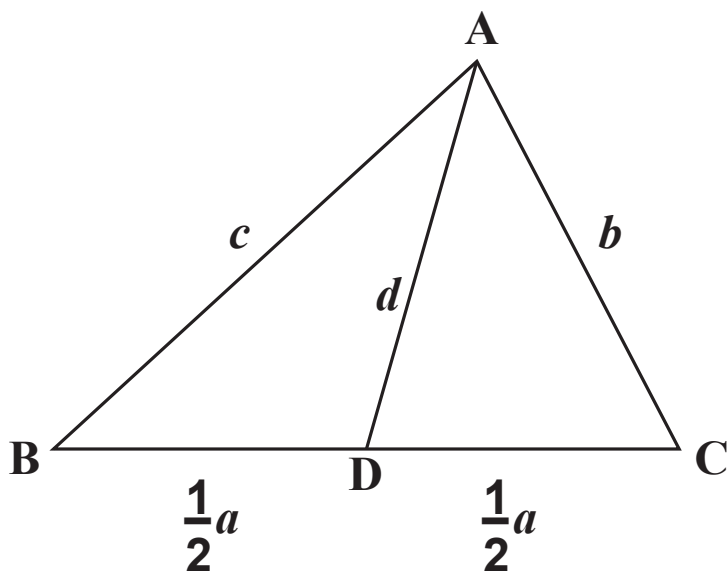
and $x = 5$ is not $\int_2^5 (x^2 - 7) dx$. [2]

- 8 Four ordinary six-sided dice are rolled. Find the probability that at least 2 sixes are obtained. [6]
- 9 A car moves from rest away from traffic lights such that after t seconds its velocity, $v \text{ ms}^{-1}$, is given by
- $$v = \frac{7}{128}(12t^2 - t^3).$$
- (i) Show that the acceleration is 0 when $t = 0$ and $t = 8$. [3]
- (ii) Find the distance travelled in the first 8 seconds. [4]

- 10 The triangle shown in Fig. 10 is such that $AB = c$, $BC = a$ and $CA = b$.

D is the midpoint of the line BC so that $BD = DC = \frac{1}{2}a$ and $AD = d$.

FIG. 10



- (i) Write down a formula for $\cos ADC$ in terms of d , b and a . [1]
- (ii) Write a formula for $\cos ADB$ in terms of d , c and a . [1]
- (iii) Using the property that connects angles ADB and ADC, show that

$$d^2 = \frac{2b^2 + 2c^2 - a^2}{4}.$$

(You may use the fact that if $\alpha = 180 - \beta$ then $\cos \alpha = -\cos \beta$.) [3]

- (iv) In the triangle ABC where $AB = 9$, $AC = 7$ and $BC = 10$, find the EXACT length of the line from A to the midpoint of BC . [2]

SECTION B

- 11 A farmer conducts a trial on plots of land to decide what amounts of fertiliser will yield the greatest crop. He knows that if he uses no fertiliser then the average yield is 24 tonnes per plot. He finds from his trial that if he uses 2 kg per plot then the average yield is 34 tonnes and if he uses 4 kg per plot then the average yield is 32 tonnes. All plots in the trial have the same area.**

He decides to use the equation $y = -x^3 + ax^2 + bx + c$ where the amount of fertiliser, x , in kg produces a yield, y , in tonnes of crop.

(i) Show that $c = 24$. [1]

(ii) Using the data above, show that

$$y = -x^3 + \frac{9}{2}x^2 + 24. \text{ [5]}$$

(iii) Using calculus, find the amount of fertiliser that should be used to maximise the yield and find the yield for this amount of fertiliser. [6]

- 12 A school wishes to transport students and teachers totalling 300 people to a concert. It uses a coach firm that can provide minibuses which can seat 10 or coaches that can seat 30. The coach firm has 15 minibuses and 8 coaches that it can hire out.**

Let x be the number of minibuses that the school hires and y be the number of coaches the school hires.

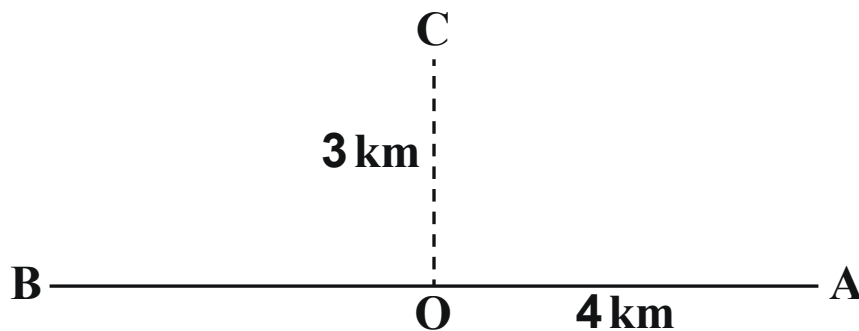
- (i) Write down an inequality in x and y that must be met in order to transport the students and teachers. [1]**
- (ii) State two more inequalities regarding the maximum number of each vehicle that can be hired. [1]**

It costs £100 to hire a minibus and £150 to hire a coach. The school allocates a maximum of £2400 for the hire of the vehicles.

- (iii) Write down another inequality to represent this cost requirement. [1]**
- (iv) Plot the 4 inequalities on the grid provided. You should shade the region that does NOT satisfy the inequalities. [5]**
- (v) One teacher suggests that the best arrangement is to hire as many minibuses as possible. From your graph find the combination of minibuses and coaches that achieves this for as small a cost as possible and the number of vehicles used. [2]**
- (vi) The organiser decides, however, to use the combination of coaches and minibuses that minimises the cost. From your graph find this combination and the minimum cost. [2]**

- 13** A path AB crosses a section of moorland in an east-west direction. John wishes to walk from A to a point C which is due north of a point O on the path AB as shown in Fig. 13. A is 4 km due east of O and C is 3 km due north of O. On the path John can walk at 5 km/hr and on the moorland he can only walk at 2 km/hr.

FIG. 13



- (a)** Find the time he takes to walk from A to C
- (i)** along the path to O and then up to C across the moor, [2]
 - (ii)** direct from A to C across the moor. [3]
- (b)** John finds that he can minimise the time taken to walk from A to C if he sets off towards O on the path but at X, a distance of x km from A, he turns to walk directly to C across the moor.
- (i)** Find an expression for the time, t hrs, that he takes to complete this walk. [4]
 - (ii)** Using this expression and by substituting values for x , $x = 2.6$, 2.7 and 2.8 , show that there is justification for $x = 2.7$ being the distance for which the time taken to walk from A to C is a minimum. [3]

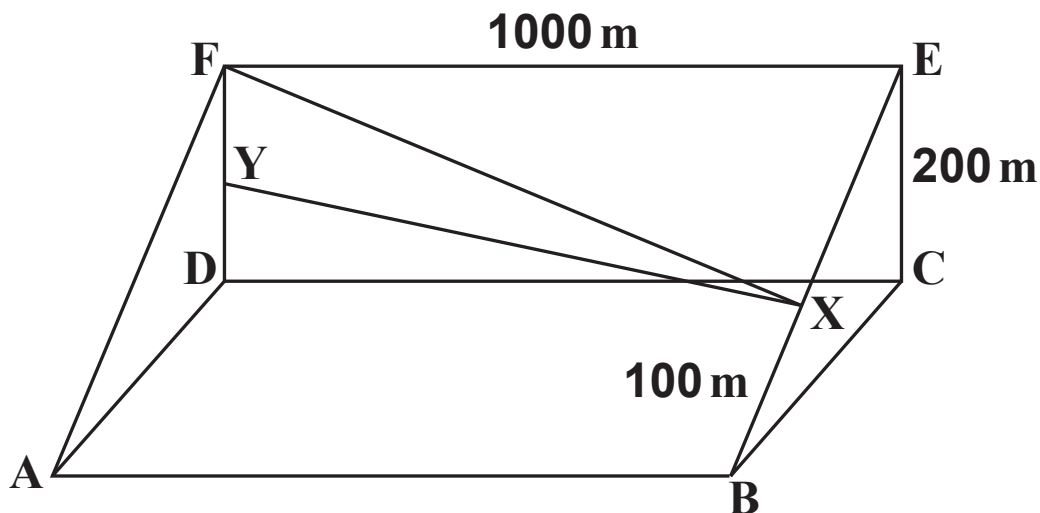
- 14** A hillside can be modelled by a prism $ABCDEF$, as shown in Fig. 14 below. $ABCD$ is a horizontal rectangle and $DCEF$ is a rectangle in the vertical plane. BCE and ADF are right-angled triangles in the vertical plane.

The angle of slope $EBC = FAD = 28^\circ$.

$AB = DC = FE = 1000$ m, $EC = FD = 200$ m.

John sets off from B walking up the line BE to a point X where $BX = 100$ m. He then walks across the slope directly to F , as shown in the diagram. Y is on FD such that XY is horizontal. A model may also be provided to help you.

FIG. 14



- (i) Find the height of X above the base line BC . [2]
- (ii) Find the length FX . [5]
- (iii) Hence calculate the angle of slope of the line FX . [5]

END OF QUESTION PAPER

BLANK PAGE

BLANK PAGE

Copyright Information

OCR is committed to seeking permission to reproduce all third-party content that it uses in its assessment materials. OCR has attempted to identify and contact all copyright holders whose work is used in this paper. To avoid the issue of disclosure of answer-related information to candidates, all copyright acknowledgements are reproduced in the OCR Copyright Acknowledgements Booklet. This is produced for each series of examinations and is freely available to download from our public website (www.ocr.org.uk) after the live examination series.

If OCR has unwittingly failed to correctly acknowledge or clear any third-party content in this assessment material, OCR will be happy to correct its mistake at the earliest possible opportunity.

For queries or further information please contact the Copyright Team, First Floor, 9 Hills Road, Cambridge CB2 1GE.

OCR is part of the Cambridge Assessment Group; Cambridge Assessment is the brand name of University of Cambridge Local Examinations Syndicate (UCLES), which is itself a department of the University of Cambridge.