

**OXFORD CAMBRIDGE AND RSA EXAMINATIONS
GCSE**

B741/01

**GATEWAY SCIENCE
CHEMISTRY B**

**Chemistry modules C1, C2, C3
(Foundation Tier)**

FRIDAY 5 JUNE 2015: Afternoon

**DURATION: 1 hour 15 minutes
plus your additional time allowance**

MODIFIED ENLARGED 24pt

Candidate forename		Candidate surname	
-------------------------------	--	------------------------------	--

Centre number						Candidate number				
--------------------------	--	--	--	--	--	-----------------------------	--	--	--	--

**Candidates answer on the Question Paper
A calculator may be used for this paper.**

**OCR SUPPLIED MATERIALS:
A copy of the Periodic Table**

**OTHER MATERIALS REQUIRED:
Pencil
Ruler (cm/mm)**

READ INSTRUCTIONS OVERLEAF

INSTRUCTIONS TO CANDIDATES

Write your name, centre number and candidate number in the boxes on the first page. Please write clearly and in capital letters.

Use black ink. HB pencil may be used for graphs and diagrams only.

Answer ALL the questions.

Read each question carefully. Make sure you know what you have to do before starting your answer.

Write your answer to each question in the space provided. Additional paper may be used if necessary but you must clearly show your candidate number, centre number and question number(s).

INFORMATION FOR CANDIDATES

The quality of written communication is assessed in questions marked with a pencil (.

The number of marks is given in brackets [] at the end of each question or part question.

The total number of marks for this paper is 75.

Any blank pages are indicated.

BLANK PAGE

Answer ALL the questions.

SECTION A – Module C1

- 1 This question is about some of the hydrocarbons found in crude oil.**

The table shows some information about five of these hydrocarbons.

- (a) Which compound has a molecule with 20 ATOMS?**

Choose from the table.

_____ **[1]**

- (b) Propane is a HYDROCARBON.**

What is meant by a hydrocarbon?

_____ **[2]**

HYDROCARBON	MOLECULAR FORMULA	FRACTION OF CRUDE OIL THAT CONTAINS THE HYDROCARBON	MELTING POINT IN °C	BOILING POINT IN °C	DENSITY IN g/cm ³
propane	C ₃ H ₈	liquefied petroleum gases	−188	−42	0.002
hexane	C ₆ H ₁₄	petrol	−95	68	0.66
decane	C ₁₀ H ₂₂	paraffin	−30	174	0.73
hexadecane	C ₁₆ H ₃₄	diesel	18	287	0.77
icosane	C ₂₀ H ₄₂	heating oil	37	343	

- (c) The density changes as the number of carbon atoms in a hydrocarbon molecule increases.**

Describe this trend in density and predict the density of icosane.

[2]

- (d) A mixture contains hexane, decane, hexadecane and icosane.**

Which method can be used to separate this mixture?

Choose from

cracking

emulsification

evaporation

fractional distillation

polymerisation

Explain your answer.

Method _____

Explanation _____

[2]

(e) Hexane is one of the hydrocarbons found in petrol.

Hexane completely burns in a plentiful supply of air.

Look at the word equation for this reaction.

hexane + oxygen → carbon dioxide + water

(i) Which gas in the air is needed for combustion?

_____ **[1]**

(ii) INCOMPLETE COMBUSTION happens when there is a limited supply of air.

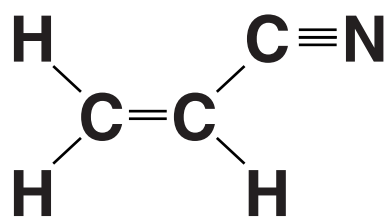
Write down the WORD equation for the incomplete combustion of hexane.

Use your equation to suggest ONE disadvantage of incomplete combustion.

_____ **[2]**

2 Stowmarket Synthetics is a chemical company that makes polymers.

They make a polymer from a monomer called propenenitrile.



(a) What is the name of the polymer made from propenenitrile?

_____ **[1]**

(b) How many covalent bonds are shown in the displayed formula of propenenitrile?

Tick (✓) the correct box.

three ☐

four ☐

five ☐

eight ☐

nine ☐

[1]

(c) Stowmarket Synthetics also make a polymer that is used to make bottles for fizzy drinks.

The polymer used to make the bottles is NON-BIODEGRADABLE.

Some scientists want the polymer to be BIODEGRADABLE.

What is a BIODEGRADABLE polymer?

Write about the advantages and disadvantages of using a BIODEGRADABLE polymer to make these bottles.



The quality of written communication will be assessed in your answer to this question.

[illegible]

3 Some foods contain additives.

Flavour enhancers improve the flavour of a food.

An emulsifier stops oil and water in a food from separating.

(a) Write down the name of ANOTHER food additive.

Describe the job of this food additive.

name of food additive _____

job of the additive _____

_____ **[2]**

(b) Phil finds some information about four emulsifiers.

Look at this information.

EMULSIFIER	IS IT POISONOUS?	DOES IT HAVE A SMELL?	COST OF MAKING 1g OF EMULSIFIER IN PENCE
A	yes	no	3
B	yes	no	6
C	no	no	1
D	no	yes	5

Which emulsifier is the most suitable to be used in a food?

Explain your answer.

[3]

(c) Baking powder is used in cake mixes.

Baking powder makes carbon dioxide when heated.

Write about the chemical test for carbon dioxide.

[2]

SECTION B – Module C2

4 This question is about building materials.

(a) Limestone is a rock used for buildings.

(i) Write down the name of ANOTHER rock used for buildings.

Choose from the list.

amalgam

brass

granite

solder

answer _____ [1]

(ii) Limestone is dug out of the ground in a quarry.

Removing limestone rock from a quarry causes environmental problems.

Write about TWO environmental problems caused by quarrying limestone.

[2]

(b) Concrete is a building material.

Concrete is made stronger using a steel support.

This is called REINFORCED CONCRETE.

Look at the table.

It gives some information about three types of steel.

TYPE OF STEEL	IRON ALLOYED WITH	RELATIVE STRENGTH	OTHER PROPERTIES
A	about 0.25% carbon	386	easily shaped
B	up to 2.5% carbon	414	hard, more difficult to shape
C	chromium and nickel	515	easily shaped, resistant to corrosion

(i) Steel C is the best choice for reinforcing concrete.

Use information from the table to give TWO reasons why.

[2]

(ii) The three types of steel in the table are ALLOYS.

What is meant by an alloy?

[1]

5 This question is about sodium chloride (salt).

(a) Write down one USE of sodium chloride.

_____ [1]

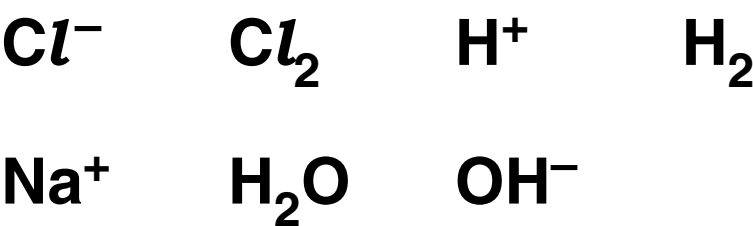
(b) Most of the UK’s salt comes from the Winsford Salt Mine in Cheshire.

Describe one way that the salt can be extracted from the salt mine.

_____ [1]

(c) Useful products are made from sodium chloride solution by electrolysis.

Electrolysis of sodium chloride solution involves these particles:



Some of the particles are IONS.

Some of the particles are MOLECULES.

Finish the table.

Two particles have been done for you.

Ions	Molecules
OH^-	H_2

[2]

6 Martin investigates the corrosion of different metals.

He places strips of metals in some damp gases.

Look at his results.

METAL	APPEARANCE AT START	APPEARANCE AFTER TWO WEEKS IN DAMP ...		
		OXYGEN	ACIDIC AIR	NITROGEN
copper	shiny pink	small patches of green on surface	thick green layer on surface	shiny pink
iron	shiny silver	small patches of brown on surface	lots of brown flakes on surface	shiny silver
lead	shiny silver	dull silver	black layer on surface	shiny silver

(a) Martin concludes that:

oxygen is needed for corrosion

more corrosion happens in acidic air than in any of the other conditions.

Is he correct? _____

How can you tell? Write down evidence from the table in your answer.

_____ [2]

(b) Copper reacts with oxygen, O₂.

Copper oxide, CuO, is made.

Write a BALANCED SYMBOL equation for this reaction.

[2]

7 This question is about fertilisers.

(a) Farmers add fertilisers to the soil.

What part of a plant absorbs the minerals from the fertilisers?

_____ [1]

(b) Ammonium phosphate, $(\text{NH}_4)_3\text{PO}_4$, is a fertiliser.

FERTILISER
$(\text{NH}_4)_3\text{PO}_4$

(i) Complete the table to show the number of each TYPE OF ATOM in the formula $(\text{NH}_4)_3\text{PO}_4$.

Atom	Number
N	
H	
P	
O	

[2]

(ii) Write down the NAMES of the TWO essential elements in ammonium phosphate.

_____ [2]

(c) Ammonium phosphate solution is made by reacting an acid with an alkali in a neutralisation reaction.

Write down the name of the ACID and the ALKALI needed to make ammonium phosphate.

Describe how an indicator can be used to check the pH of the solution made.



The quality of written communication will be assessed in your answer to this question.

[6]

SECTION C – Module C3

8 Hydrogen peroxide, H_2O_2 , is used in some spacecraft to provide oxygen.

(a) Hydrogen peroxide is a compound.

How can you tell from its molecular formula?

_____ **[1]**

(b) Hydrogen peroxide, H_2O_2 , can be made from hydrogen, H_2 , and oxygen, O_2 .

hydrogen + oxygen \rightarrow hydrogen peroxide

(i) Write the BALANCED SYMBOL equation for this reaction.

_____ **[1]**

(ii) This reaction has a 100% atom economy.

What does this mean?

_____ **[1]**

- (iii) Oskar finds out that 5 g of hydrogen should make 85 g of hydrogen peroxide.

Show that 100 g of hydrogen should make 1700 g of hydrogen peroxide.

[2]

- (iv) Oskar uses 100 g of hydrogen to make hydrogen peroxide.

He predicts he should make 1700 g of hydrogen peroxide.

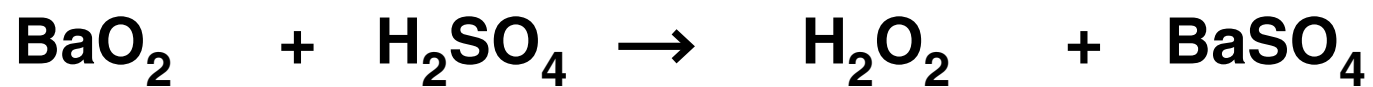
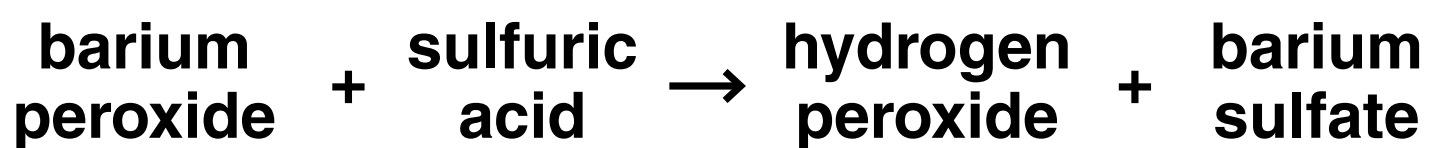
He actually makes 1530 g of hydrogen peroxide.

Calculate Oskar's percentage yield of hydrogen peroxide.

percentage yield = _____ %

[2]

(c) Hydrogen peroxide can also be made from barium peroxide.



The table shows the relative formula masses, M_r , of the substances in the symbol equation.

Substance	Relative formula mass, M_r
BaO_2	169
H_2SO_4	
H_2O_2	34
BaSO_4	233

(i) Calculate the relative formula mass, M_r , of sulfuric acid, H_2SO_4 .

Put your answer in the table.

The relative atomic mass, A_r , of H = 1, O = 16 and S = 32.

[1]

(ii) Barium sulfate is a waste product in this reaction.

Calculate the atom economy for this reaction.

atom economy = _____ % [2]

9 Fatimah investigates the reaction between sodium hydrogencarbonate and dilute hydrochloric acid.

Fatimah does two investigations.

She always adds 0.5 g of sodium hydrogencarbonate to 20 cm³ of dilute hydrochloric acid.

She measures the time it takes for the reaction mixture to stop bubbling.

This is called the REACTION TIME.

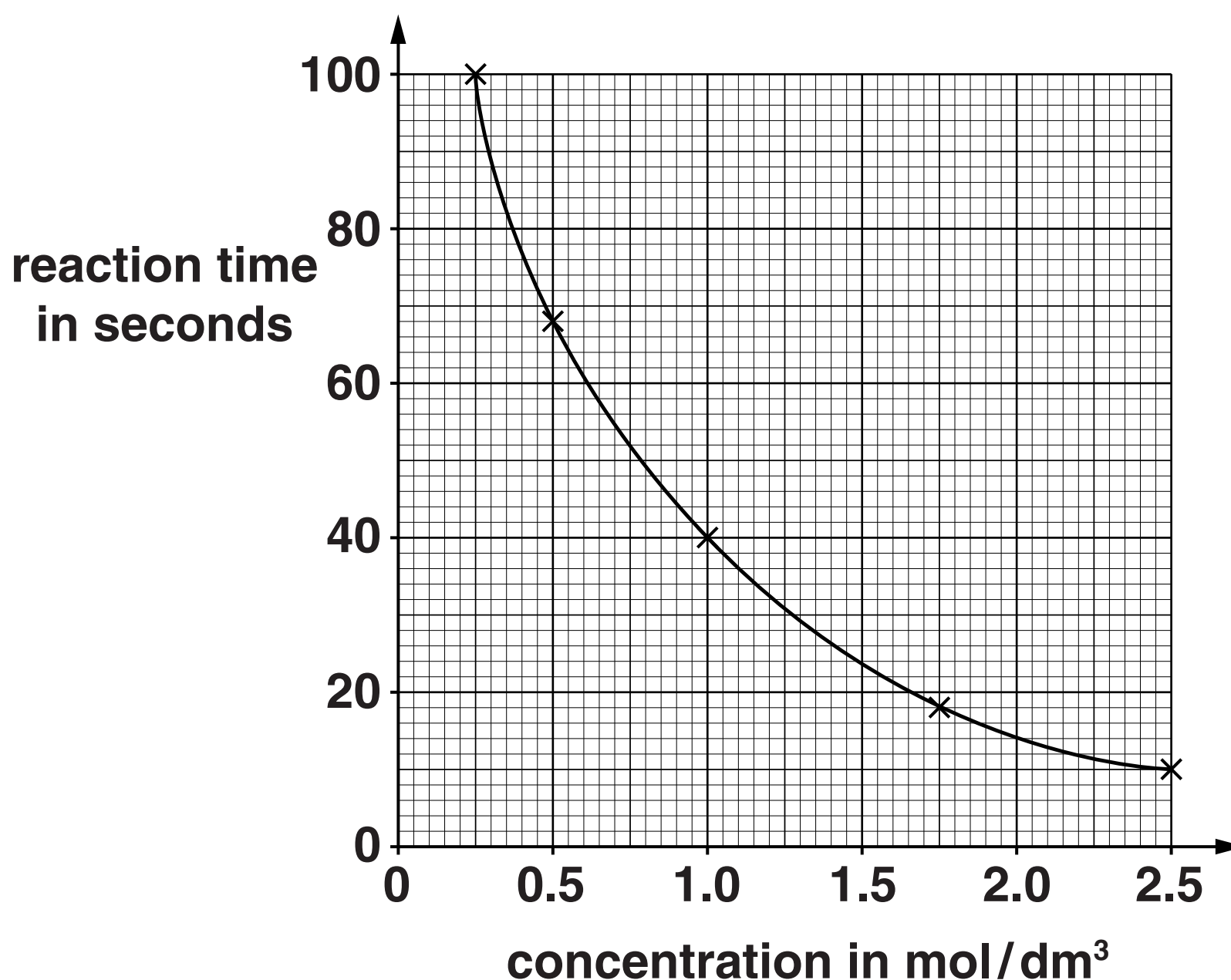
INVESTIGATION ONE

She does five different experiments.

She keeps the temperature the same.

Each experiment uses a DIFFERENT CONCENTRATION of acid.

Look at a graph of her results.



(a) Fatimah makes a conclusion.

‘I think that as the **CONCENTRATION** of the acid increases, the **REACTION TIME** decreases.’

Do the results in **INVESTIGATION ONE** support Fatimah’s conclusion?

Explain your answer.

Use the reacting particle model to explain Fatimah’s results.



 **The quality of written communication will be assessed in your answer to this question.**

[6]

(b) INVESTIGATION TWO

Fatimah does five experiments.

She keeps the concentration of the acid the same.

She uses acid at DIFFERENT TEMPERATURES.

Look at her results.

Temperature of acid in °C	Reaction time in seconds
20	68
30	34
40	17
50	9
60	5

- (i) What conclusion can you make about the effect of TEMPERATURE on the REACTION TIME?**

_____ **[1]**

- (ii) Fatimah does an experiment with acid at a temperature of 10°C.**

Predict the reaction time, in seconds.

_____ **seconds** **[1]**

10 A pharmaceutical drug is made by a batch process.

(a) Write about THREE factors that affect the COST of making a pharmaceutical drug.

[3]

(b) When a pharmaceutical drug is manufactured it must be as pure as possible.

(i) Explain why it is important that the pharmaceutical drug is as pure as possible.

[1]

(ii) Write down ONE method a chemist can use to show that a pharmaceutical drug is pure.

[1]

11 Diamond is a form of carbon.

Diamonds are used in jewellery because they are lustrous (shiny).

Write about two OTHER properties of diamond.

[2]

END OF QUESTION PAPER

BLANK PAGE

Copyright Information

OCR is committed to seeking permission to reproduce all third-party content that it uses in its assessment materials. OCR has attempted to identify and contact all copyright holders whose work is used in this paper. To avoid the issue of disclosure of answer-related information to candidates, all copyright acknowledgements are reproduced in the OCR Copyright Acknowledgements Booklet. This is produced for each series of examinations and is freely available to download from our public website (www.ocr.org.uk) after the live examination series.

If OCR has unwittingly failed to correctly acknowledge or clear any third-party content in this assessment material, OCR will be happy to correct its mistake at the earliest possible opportunity.

For queries or further information please contact the Copyright Team, First Floor, 9 Hills Road, Cambridge CB2 1GE.

OCR is part of the Cambridge Assessment Group; Cambridge Assessment is the brand name of University of Cambridge Local Examinations Syndicate (UCLES), which is itself a department of the University of Cambridge.

