



Oxford Cambridge and RSA

Friday 20 November 2020 – Afternoon

GCSE (9–1) Geography A (Geographical Themes)

J383/03 Geographical Skills

Resource Booklet

Time allowed: 1 hour 30 minutes



INSTRUCTIONS

- Do **not** send this Resource Booklet for marking. Keep it in the centre or recycle it.

INFORMATION

- This document has **8** pages.

Fig. 1 – Aerial photograph of the Tees Barrage



Fig. 2 – Flood risk map for Middlesbrough

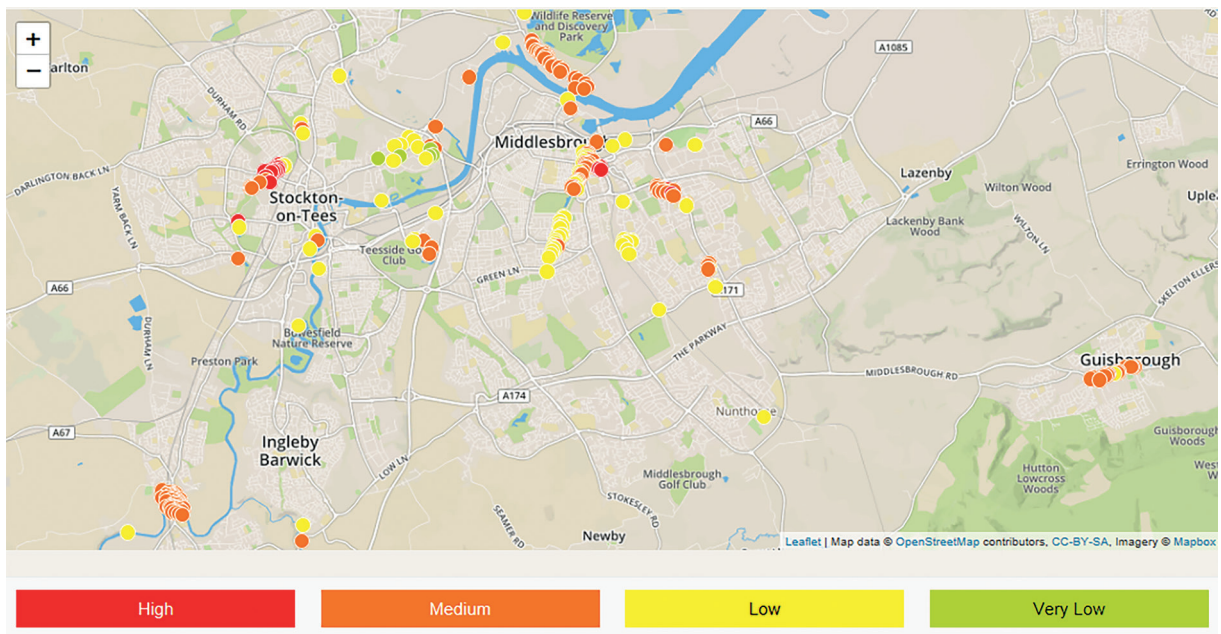


Fig. 3 – The direction and volume of buses per day to the village of Skinningrove

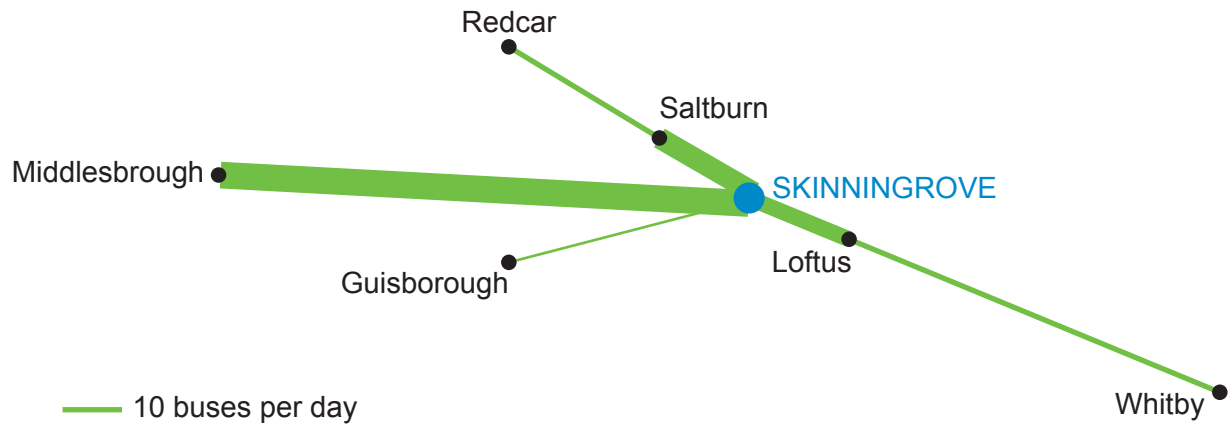


Fig. 4 – Average age of rural and urban UK populations, 2002–2016

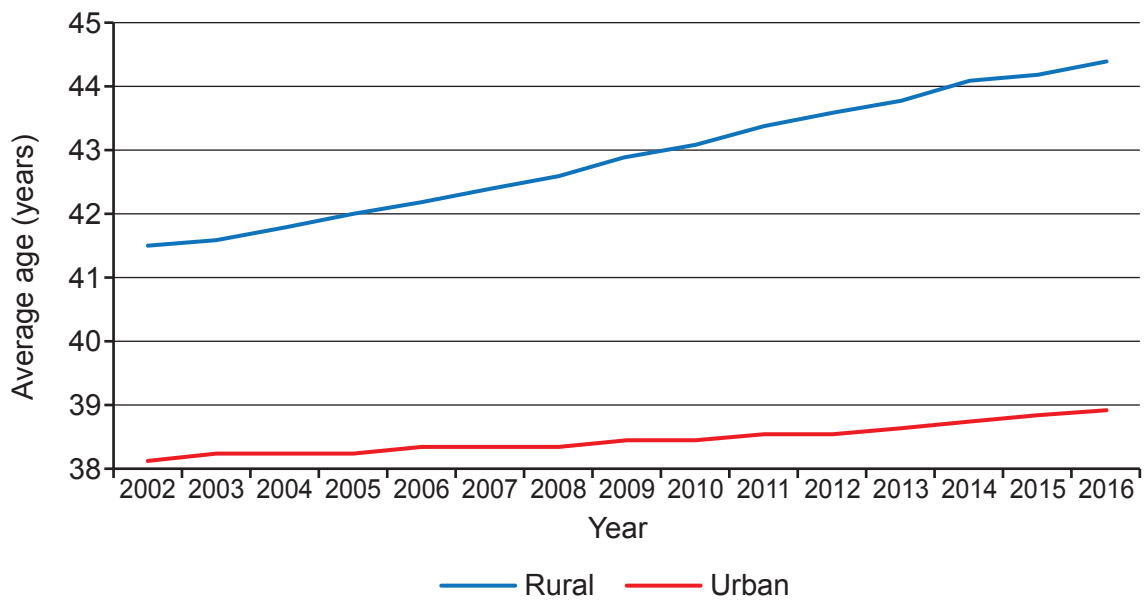


Fig. 5 – Age structure of UK urban and rural populations

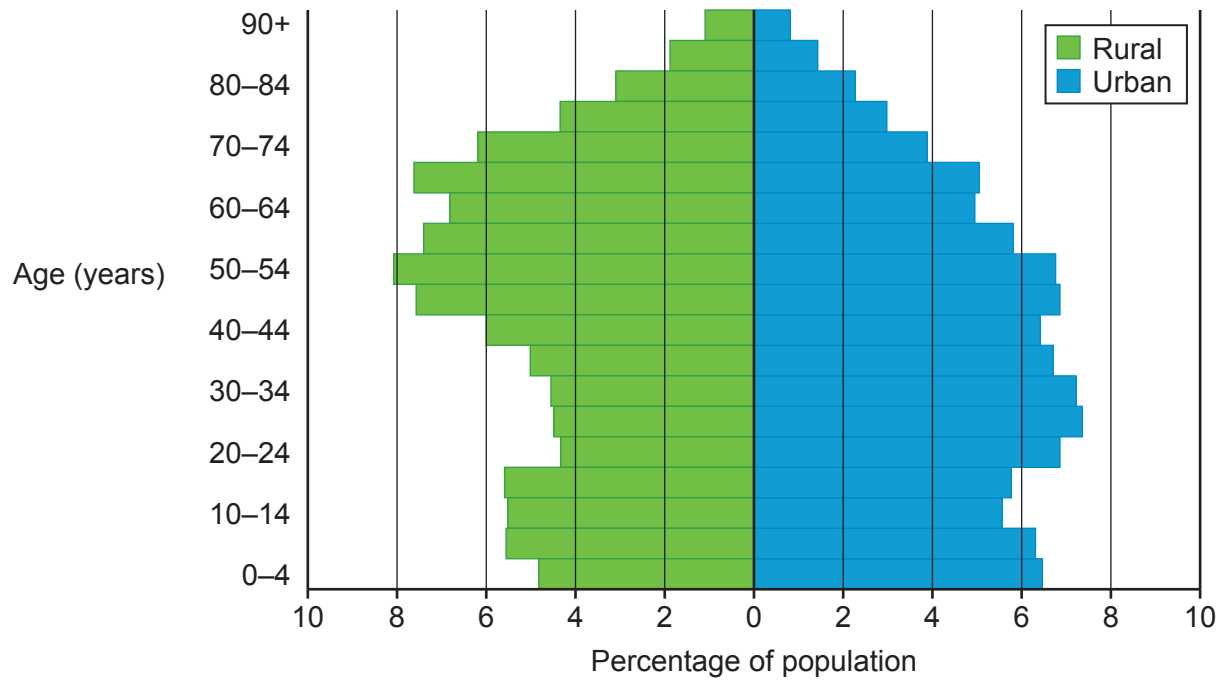


Fig. 6 – Photographs of Ghana

Image A – Hotel in the south of Ghana



Image B – A classroom in the north of Ghana



Fig. 7 – Percentage of population living in poverty in regions of Ghana, 1990–2010

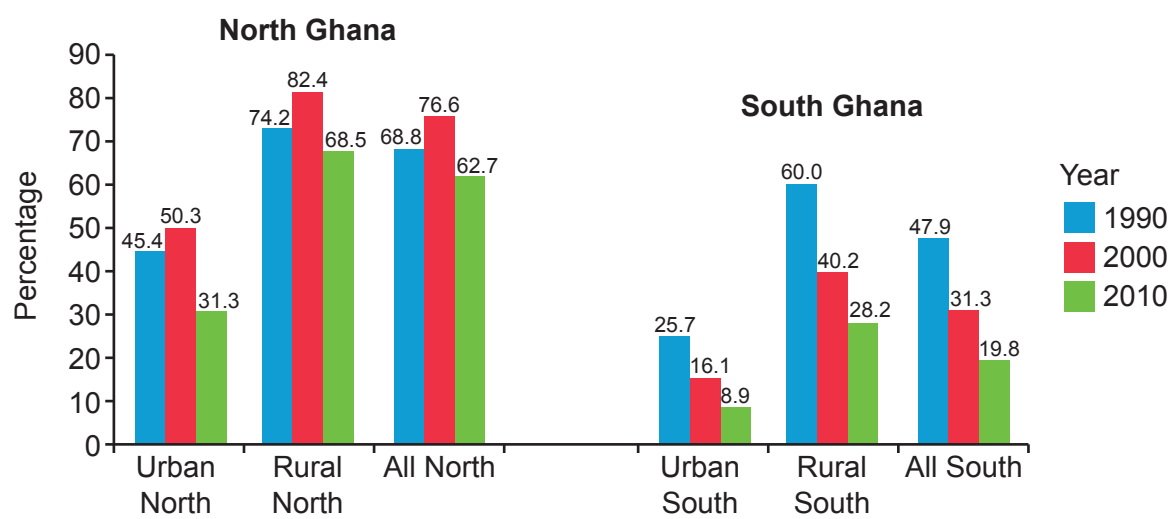


Fig. 8 – Photograph of Middlesbrough city centre



OCR

Oxford Cambridge and RSA

Copyright Information

OCR is committed to seeking permission to reproduce all third-party content that it uses in its assessment materials. OCR has attempted to identify and contact all copyright holders whose work is used in this paper. To avoid the issue of disclosure of answer-related information to candidates, all copyright acknowledgements are reproduced in the OCR Copyright Acknowledgements Booklet. This is produced for each series of examinations and is freely available to download from our public website (www.ocr.org.uk) after the live examination series.

If OCR has unwittingly failed to correctly acknowledge or clear any third-party content in this assessment material, OCR will be happy to correct its mistake at the earliest possible opportunity.

For queries or further information please contact The OCR Copyright Team, The Triangle Building, Shaftesbury Road, Cambridge CB2 8EA.

OCR is part of the Cambridge Assessment Group; Cambridge Assessment is the brand name of University of Cambridge Local Examinations Syndicate (UCLES), which is itself a department of the University of Cambridge.