

OXFORD CAMBRIDGE AND RSA EXAMINATIONS
GCSE
B391/01

METHODS IN MATHEMATICS

Methods in Mathematics 1

(Foundation Tier)

TUESDAY 10 NOVEMBER 2015:
Morning

DURATION: 1 hour
plus your additional time allowance

MODIFIED ENLARGED 24pt

Candidate forename						Candidate surname					
Centre number						Candidate number					

Candidates answer on the Question Paper.

OCR SUPPLIED MATERIALS:

None

OTHER MATERIALS REQUIRED:

Geometrical instruments

Tracing paper (optional)

<p>WARNING No calculator can be used for this paper</p>
--

READ INSTRUCTIONS OVERLEAF

INSTRUCTIONS TO CANDIDATES

Write your name, centre number and candidate number in the boxes on the first page. Please write clearly and in capital letters.

Use black ink. HB pencil may be used for graphs and diagrams only.

Answer **ALL** the questions.

Read each question carefully. Make sure you know what you have to do before starting your answer.

Your answers should be supported with appropriate working. Marks may be given for a correct method even if the answer is incorrect.

Write your answer to each question in the space provided. Additional paper may be used if necessary but you must clearly show your candidate number, centre number and question number(s).

INFORMATION FOR CANDIDATES

The number of marks is given in brackets [] at the end of each question or part question.

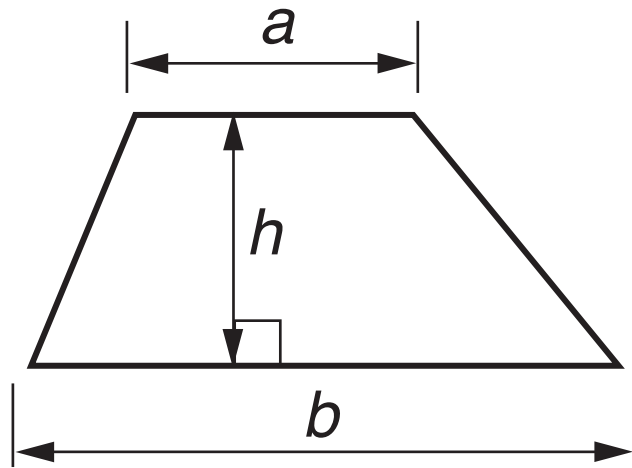
Your quality of written communication is assessed in questions marked with an asterisk (*).

The total number of marks for this paper is **60**.

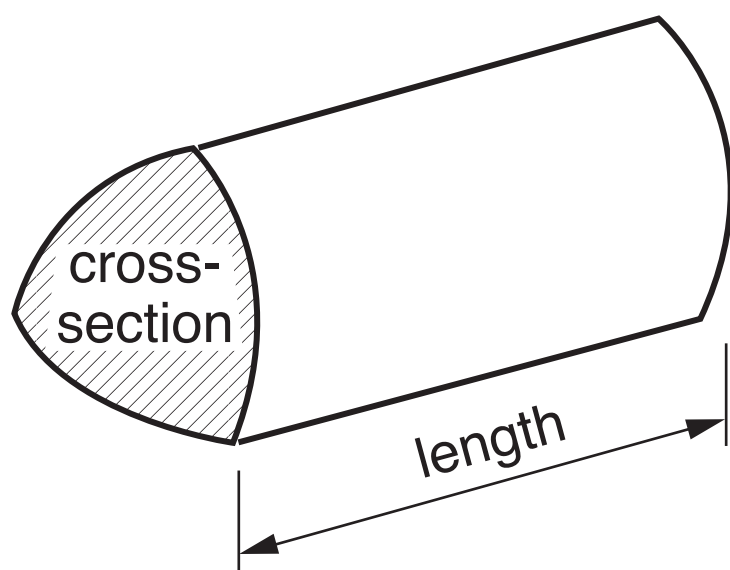
Any blank pages are indicated.

FORMULAE SHEET: FOUNDATION TIER

Area of trapezium = $\frac{1}{2} (a + b)h$

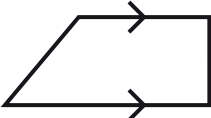
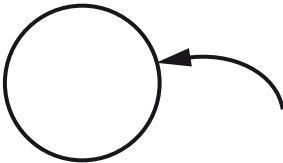

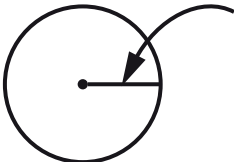
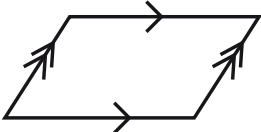


Volume of prism =
(area of cross-section) \times length



Answer **ALL** the questions.

- 1 Match each word to the correct picture.
The first one has been done for you.

rectangle	
radius	
trapezium	
parallelogram	
circumference	

[3]

2 (a) Calculate.

(i) $18.6 - 4.8$

(a)(i) _____ **[1]**

(ii) 24×8

(ii) _____ **[1]**

(b) Harrison works out that $504 \div 7 = 72$.

Use the same numbers to suggest a different calculation that Harrison could do to check that his answer is correct.

(b) _____ **[1]**

3 (a) Fill in the gaps with numbers to make each simplification correct.

(i) $3a + \underline{\hspace{2cm}} a - \underline{\hspace{2cm}} a = 6a$ [1]

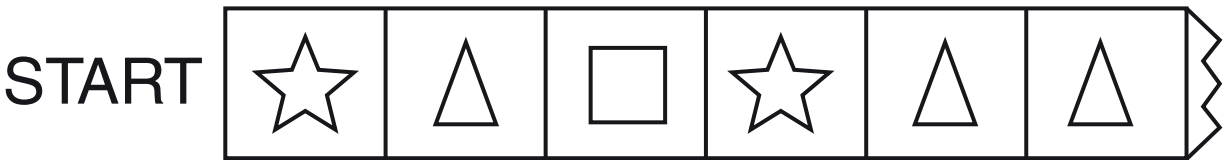
(ii) $\underline{\hspace{2cm}} a \times \underline{\hspace{2cm}} b = 18ab$ [1]

(b) Put + or – in each gap to make the simplification correct.

$2a \underline{\hspace{1cm}} 6b \underline{\hspace{1cm}} 4b \underline{\hspace{1cm}} 5a = 7a + 2b$ [2]




4 In a board game, you roll an ordinary 6-sided dice to see how many spaces to move your counter.

Here are the first 6 spaces on the board. Your counter is on 'START'.



You roll the dice for your first go.

(a) Which symbol do you have an evens chance of landing on?
Tick the correct choice.

		
_____	_____	_____

[1]

(b) What is the probability that you land on

(i) a star,

(b)(i) _____ [1]

(ii) a circle?

(ii) _____ [1]

5 Solve.

(a) $4x = 20$

(a) $x =$ _____ **[1]**

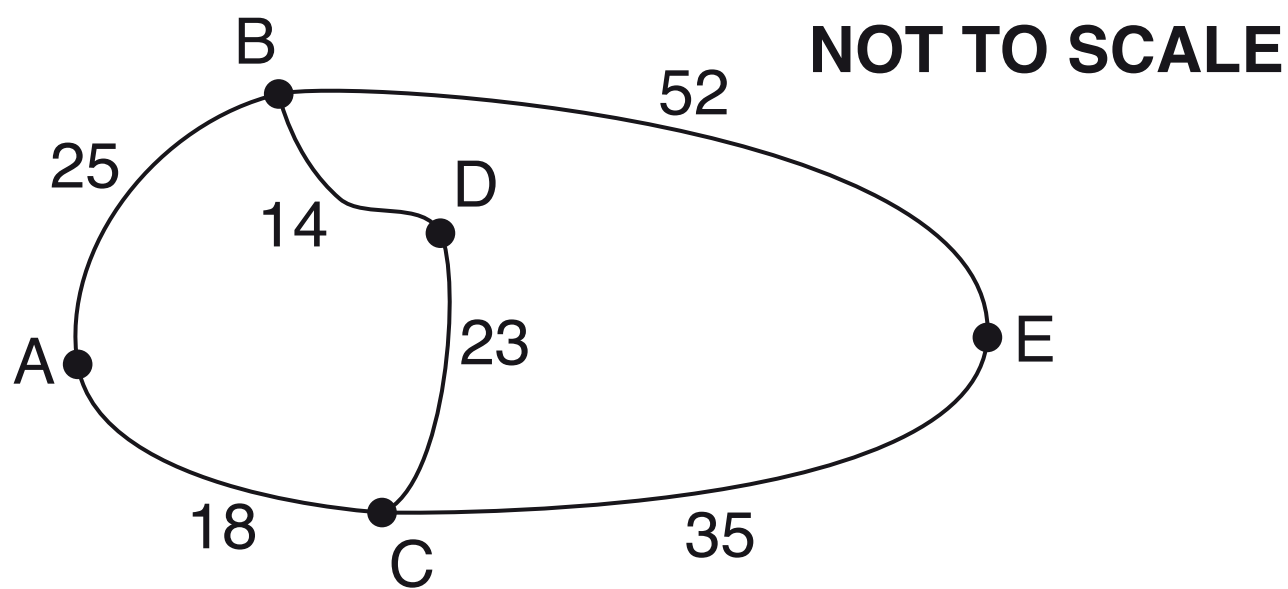
(b) $x - 7 = 15$

(b) $x =$ _____ **[1]**

(c) $3x + 6 = 18$

(c) $x =$ _____ **[2]**

6* The diagram below shows the roads which connect towns A, B, C, D and E.
The distances between towns are also given, in km.



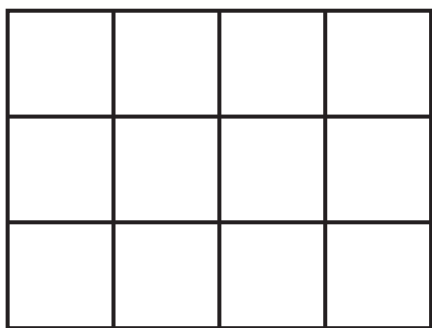
A delivery driver wants to go from town A to town E. He needs to deliver a parcel in town D on the way.

Which is the shortest route the driver could take?

The shortest route is A → _____

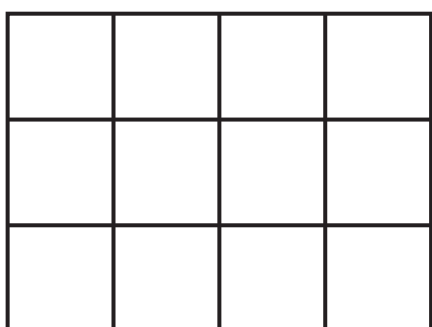
The distance is _____ km [4]

7 (a) (i) Shade $\frac{1}{4}$ of this rectangle.



[1]

(ii) Shade $\frac{1}{3}$ of this rectangle.



[1]

(iii) What is $\frac{1}{4} + \frac{1}{3}$? Give your answer as a fraction.

(a)(iii) _____ **[2]**

(b) What is $\frac{1}{5} \times 30$?

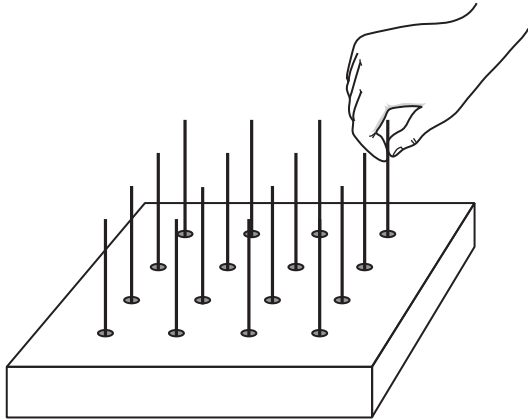
(b) _____ **[1]**

(c) Work out $\frac{6}{7} \times \frac{1}{9}$. Give your answer in its simplest form.

(c) _____ **[2]**

- 8** In a game of ‘Stick Pick’ you pick a stick from a box. The bottom of the stick is hidden.
On the bottom some sticks have red paint, some have black paint and some have no paint.

(a) There are 16 sticks in this box.



In this box

the probability of picking a stick with red paint on the bottom is $\frac{1}{8}$, and

there is a greater chance of picking a stick with no paint on than a stick with paint on.

How many of each type of stick could there be?

(a) Number of sticks with red paint _____
black paint _____
no paint _____ **[3]**

(b) Another game of ‘Stick Pick’ has a different number of sticks. As before, on the bottom some sticks have red paint, some have black paint and some have no paint. Also as before

the probability of picking a stick with red paint on the bottom is $\frac{1}{8}$, and

there is a greater chance of picking a stick with no paint on than a stick with paint on.

There are 15 sticks with no paint on them.

How many sticks are there in total?

(b) _____ **[2]**

9 For each part of this question, circle the 2 cards which are equivalent.

(a)

$$\frac{2}{6}$$

$$\frac{1}{5}$$

$$\frac{5}{10}$$

$$\frac{2}{10}$$

[2]

(b)

$$50 \times 10$$

$$0.5 \times 1000$$

$$500 \times 100$$

$$5 \times 1000$$

[2]

(c)

$$2ab$$

$$2a+b$$

$$a+a+b$$

$$a^2+b$$

[1]

(d)

$$\frac{1}{4}$$

$$0.4$$

$$4$$

$$0.25$$

[1]

(e)

$$240 \div 0.3$$

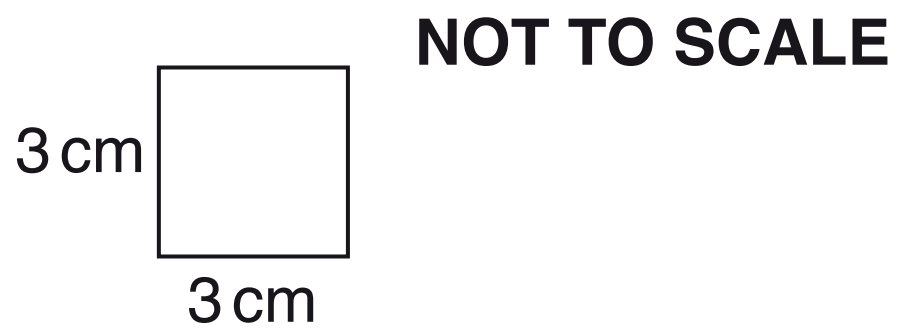
$$2400 \div 30$$

$$2.4 \div 0.3$$

$$24 \div 3$$

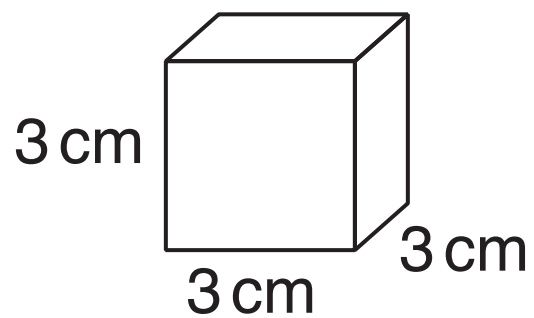
[2]

10 (a) What is the area of this square?



(a) _____ cm^2 **[1]**

(b) This cube has edges of length 3 cm.



(i) Work out the surface area of this cube.

(b)(i) _____ cm^2 **[2]**

(ii) Work out the volume of this cube.

(ii) _____ cm^3 **[1]**

11 Expressed as the product of its prime factors

$$600 = 2^3 \times 3 \times 5^2.$$

(a) Express 420 as the product of its prime factors.

(a) _____ **[2]**

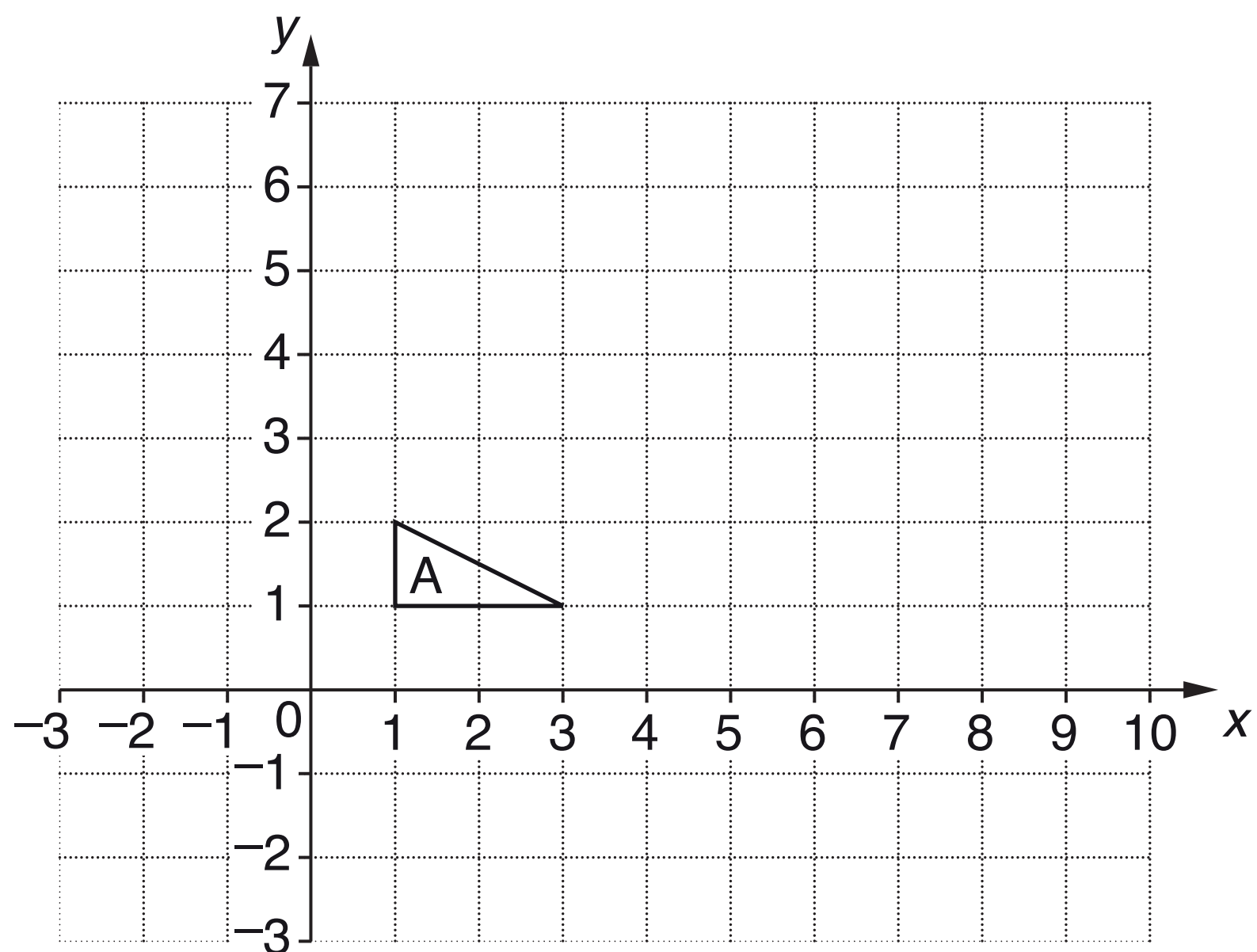
(b) Find, leaving your answers expressed as the **PRODUCT OF PRIME FACTORS**,

(i) the highest common factor (HCF) of 600 and 420,

(b)(i) _____ **[1]**

(ii) the lowest common multiple (LCM) of 600 and 420.

(ii) _____ **[1]**



- (a) (i) Translate triangle A using the vector $\begin{pmatrix} -3 \\ 2 \end{pmatrix}$.

Label the image B.

[2]

- (ii) Enlarge triangle A with scale factor 3 and centre (0, 0).

Label the image C.


[2]

- (b) A triangle P is reflected to give triangle Q.
 Triangle Q is rotated to give triangle R.
 Triangle R is enlarged to give triangle S.
 Triangle S is translated to give triangle T.

Complete this table.
 Write Y if the triangles are **ALWAYS** congruent.
 Write N if the triangles are **NOT ALWAYS** congruent.

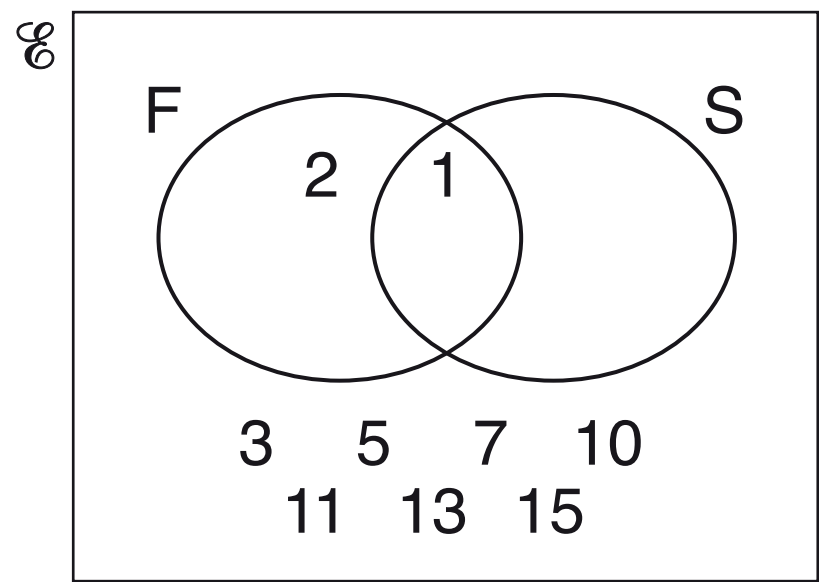
TRIANGLES	CONGRUENT, Y OR N?
P and Q	
P and R	
P and S	
R and T	

You may use this grid if required.
 [3]



13 $\mathcal{E} = \{\text{positive integers less than } 17\}$
 $F = \{\text{factors of } 16\}$
 $S = \{\text{square numbers}\}$

(a) Complete this Venn diagram to show the sets \mathcal{E} , F and S .



[3]

(b) List the members of $F \cap S$.

(b) _____ [1]

END OF QUESTION PAPER

Copyright Information