

**OXFORD CAMBRIDGE AND RSA EXAMINATIONS
GCSE**

A161/01

**TWENTY FIRST CENTURY SCIENCE
BIOLOGY A/SCIENCE A**

Modules B1 B2 B3 (Foundation Tier)

TUESDAY 16 MAY 2017: Afternoon

DURATION: 1 hour

plus your additional time allowance

MODIFIED ENLARGED 24pt

Candidate forename		Candidate surname	
-------------------------------	--	------------------------------	--

Centre number						Candidate number				
--------------------------	--	--	--	--	--	-----------------------------	--	--	--	--

**Candidates answer on the Question Paper.
A calculator may be used for this paper.**

OCR SUPPLIED MATERIALS:

Loose Sheet for Question 7

OTHER MATERIALS REQUIRED:

Pencil

Ruler (cm/mm)

READ INSTRUCTIONS OVERLEAF



INSTRUCTIONS TO CANDIDATES

Write your name, centre number and candidate number in the boxes on the first page. Please write clearly and in capital letters.

Use black ink. HB pencil may be used for graphs and diagrams only.

Answer ALL the questions.

Read each question carefully. Make sure you know what you have to do before starting your answer.

Write your answer to each question in the space provided. If additional space is required, you should use the lined page(s) at the end of this booklet. The question number(s) must be clearly shown.

INFORMATION FOR CANDIDATES

The quality of written communication is assessed in questions marked with a pencil ().

The number of marks is given in brackets [] at the end of each question or part question.

The total number of marks for this paper is 60.

Any blank pages are indicated.

Answer ALL the questions.

- 1 Our chromosomes store the instructions that control how we develop and function.**

(a) Which part of a human cell usually contains the chromosomes?

Put a tick (✓) in the box next to the correct answer.

cell membrane

☐

chloroplast

☐

cytoplasm

☐

nucleus

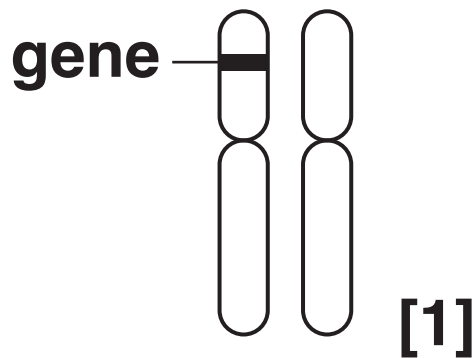
☐

[1]

(b) The diagram shows a pair of chromosomes.

A gene has been marked on the diagram.

Draw an allele of the gene on the diagram.



(c) Read the following sentences about the alleles of a gene.

Draw a ring around the correct word or number to complete each sentence below. [1]

**The alleles CANNOT / MAY / MUST
contain the same instructions.**

**An individual usually has
0 / 2 / 23 / 46 alleles of a gene.**

[TOTAL: 3]

2 Cystic fibrosis is a genetic disorder in humans.

(a) People with cystic fibrosis make thick, sticky mucus.

Write down TWO OTHER symptoms of cystic fibrosis.

[2]

(b) Byron and Tania are friends.

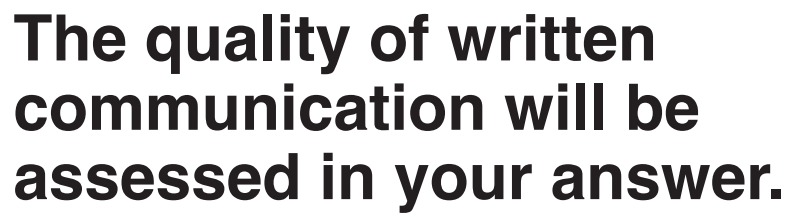
Byron is 22 years old. He has one faulty allele that causes cystic fibrosis.

Tania is also 22 years old. She has one faulty allele that causes a disorder called Huntington's disease.

Neither person has noticed any symptoms.

Explain why Byron and Tania have NOT noticed any symptoms of the disorders.

Use ideas about the inheritance of the different alleles for these disorders in your answer.



[6]

(c) Tania was tested for the allele that causes Huntington's disease.

She had the genetic test several times.

Suggest why she had the test more than once.

[1]

(d) Tania is worried about telling others that she has the allele for Huntington's disease.

Explain how sharing this information with others could have FINANCIAL implications for Tania.

[2]

[TOTAL: 11]

3 Judith takes her female cat to see the vet.

The vet tells her that the cat is pregnant, and will give birth to five kittens.

(a) Judith thinks her cat mated with a male cat that lives nearby.

She hopes all of the kittens will look like their mother.

Use ideas about sexual reproduction to explain why not all of the kittens will look like their mother. [3]

(b) Judith reads about how a kitten develops from a fertilised egg cell.

(i) Complete the sentences by choosing the correct words from the list.

Each word may be used once, more than once or not at all.

all

none

some

The fertilised egg cell divides. Early in development, _____ of the cells are stem cells. Each cell could develop into _____ of the cell types needed to make a kitten.

When the kitten is born, _____ of its cells are stem cells. [2]

(ii) What word is used to describe a stem cell BEFORE it becomes a particular cell type?

_____ **[1]**

[TOTAL: 6]

4 Control systems help to keep conditions constant inside the human body.

(a) Each control system has different parts.

Draw straight lines to join each PART, of a control system on the left, with its JOB on the right. [2]

PART

receptor

processing
centre

effector

JOB

produce the
response

detect a
change

coordinate
response

- (b) The different parts of a control system must communicate with each other.**

What do they use to communicate?

Put ticks (✓) in the boxes next to the TWO correct answers.

antigens

☐

bones

☐

hormones

☐

nerves

☐

white blood cells

☐

[1]

- (c) It is important to keep a healthy water balance in the body.**

Write down ONE way the body loses water.

_____ **[1]**

[TOTAL: 4]

- 5 Sophie and Callum live together. Recently there was an outbreak of chicken pox in the village where they live.**

Chicken pox spreads very quickly and easily, through coughs and sneezes.

Callum did not have chicken pox when he was a child. He developed chicken pox during the recent outbreak.

Sophie had chicken pox when she was a child. She did not develop chicken pox during the outbreak.

Explain why Sophie did NOT develop chicken pox during the outbreak, but Callum did. [6]



The quality of written communication will be assessed in your answer.

[TOTAL: 6]

6 Lifestyle factors affect our risk of developing heart disease.

Read the notes about Katrina and Hayley.

Katrina

22 years old

Overweight

Smokes every day

Katrina works long hours in the busy emergency department of a hospital. She drives to work. She is vegetarian, and eats a lot of fruit and vegetables.

Hayley

24 years old

Ideal weight

Does not smoke

Hayley is a fitness instructor and uses her bicycle to get around town. She has a glass of wine each evening. Her favourite snack is salted peanuts.

- (a) Both Katrina and Hayley have some risk of developing heart disease.**

Which person has the HIGHEST risk of heart disease?

Explain your answer.

[2]

- (b) Suggest ONE action that Hayley could take to reduce her risk of heart disease.**

[1]

[TOTAL: 3]

BLANK PAGE

7 High blood pressure increases the risk of heart disease.

A person's blood pressure can be measured.

The graph opposite shows how blood pressure measurements are classified into categories.

(a) Complete the labels on the axes of the graph. [1]

(b) Ali has high blood pressure. His blood pressure measurement is 150/90.

**Ravi has ideal blood pressure.
Estimate what his blood pressure measurement is likely to be.**

blood pressure = 110/ _____ [1]

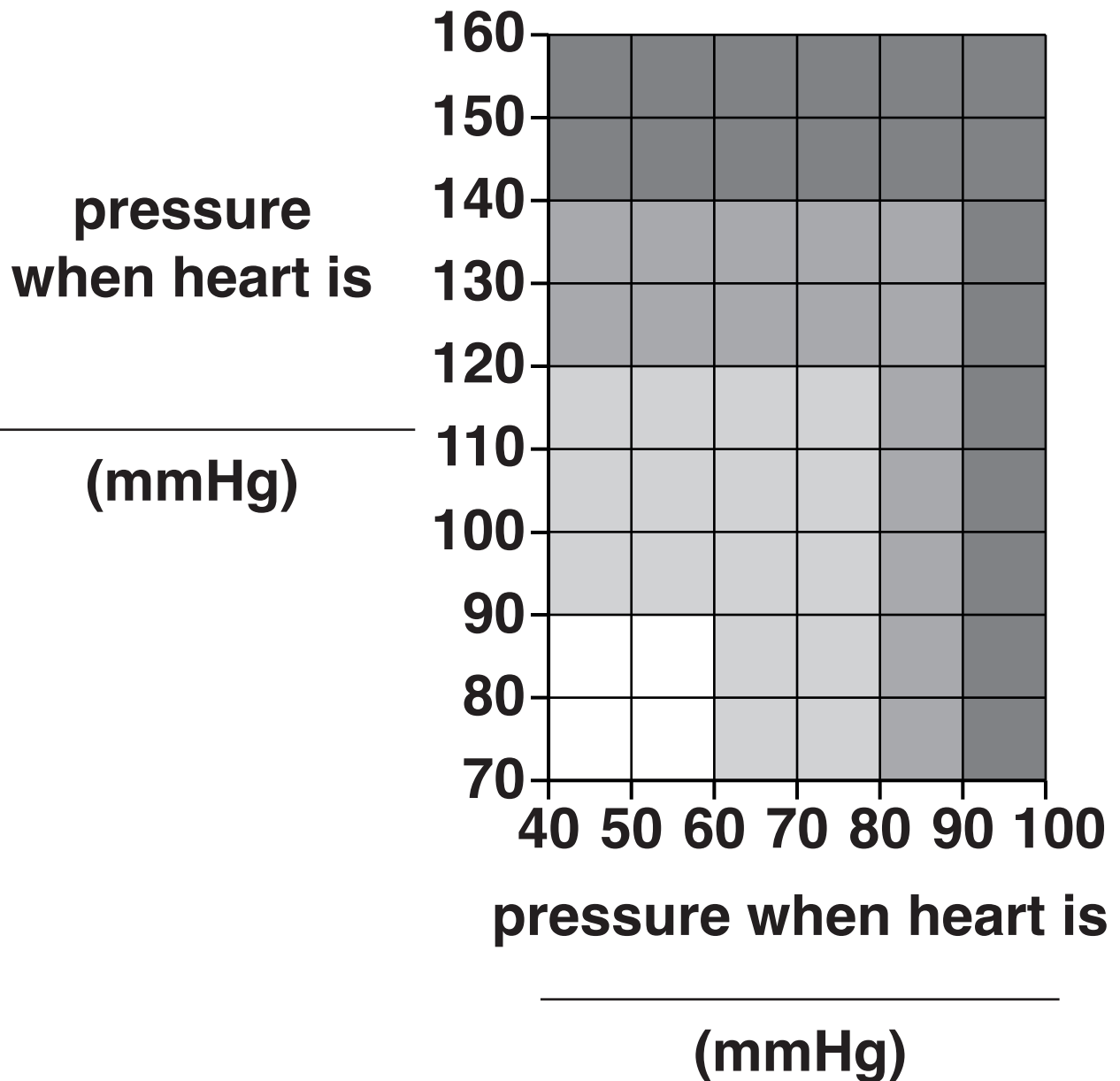
Key

 high blood pressure

 ideal blood pressure

 pre-high blood pressure

 low blood pressure



- (c) A large study in the USA measured the blood pressures of three groups of people with different ethnic origins.**

The results are shown in the graph on the Loose Sheet.

- (i) What percentage of the Caucasian group had ideal blood pressure?**

percentage = _____ % [1]

- (ii) What percentage of the African American group had a blood pressure measurement between 120/80 and 140/90?**

Use both graphs to help you answer the question.

percentage = _____ % [1]

(iii) Each group contained 1000 people.

People with a blood pressure measurement higher than 160/100 have a very high risk of heart disease.

How many of the Hispanic people in the study have a very high risk of heart disease?

Show your working.

number of Hispanic people = _____ [2]

(iv) Which group of people has the **LOWEST** risk of developing heart disease?

Explain your answer.

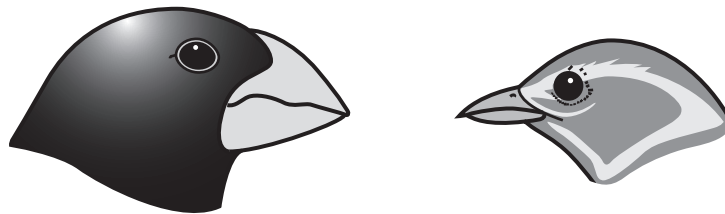
[2]

[TOTAL: 8]

BLANK PAGE

8 Charles Darwin helped to develop the theory of evolution by natural selection.

He studied the Galápagos Islands finches, which have different beak sizes.



Darwin developed explanations based on observations. He also shared his ideas with other scientists.

Put ONE tick (✓) in each row of the table to show whether the statement describes an OBSERVATION, an EXPLANATION, or an example of SHARING IDEAS with other scientists.

[3]

[TOTAL: 3]

	observation	explanation	sharing ideas
Some finches have larger beaks than others.			
Evolution happens because of variation and natural selection.			
Darwin noticed that finches with different sized beaks eat different types of food.			
There has been natural selection of finches with beak size better suited to their environment.			
Darwin's book <i>On The Origin of Species</i> was published in 1859.			

9 A large tree makes lots of glucose on a warm, sunny day.

The glucose molecules contain carbon. The carbon is used by the tree's cells for chemical reactions and to make materials for growth.

Describe how this carbon can be recycled through the ground and the air so that it can eventually be used by another plant to make glucose. [6]



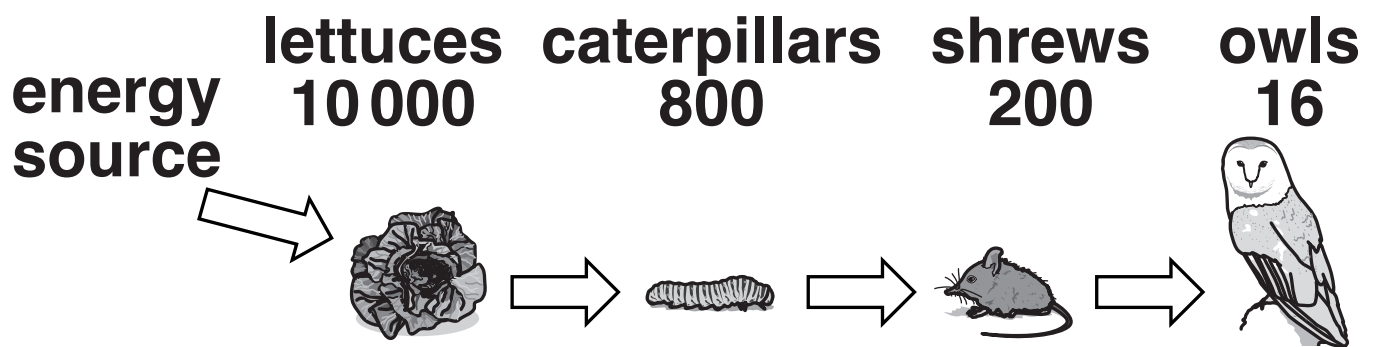
The quality of written communication will be assessed in your answer.

[TOTAL: 6]

10 The diagram shows the transfer of energy through a food chain.

Each arrow represents an energy transfer.

Each number is the amount of energy stored in the population of organisms. The energy is measured in kJ per m² per year.



(a) What is the source of the energy absorbed by the lettuces?

Put a tick (✓) in the box next to the correct answer.

the air

☐

a producer

☐

the soil

☐

a consumer

☐

the Sun

☐

[1]

(b) How is energy transferred from the lettuces to the caterpillars?

_____ **[1]**

(c) Not all of the energy stored in the lettuces is transferred to the caterpillars.

(i) Write down TWO ways that energy passes out of a food chain.

1 _____

2 _____ **[2]**

(ii) How much of the energy stored in the lettuces is NOT transferred to the caterpillars?

Show your working.

**energy not transferred = _____
kJ per m² per year [2]**

- (iii) The percentage efficiency of the energy transfer from the lettuces to the caterpillars is 8%.**

Calculate the overall percentage efficiency of the energy transfer from the LETTUCES to the OWLS.

Show your working, and give your answer to ONE significant figure.

overall percentage efficiency = _____ % [2]

(d) Use ideas about energy to suggest why the owls are unlikely to have any predators.

[2]

[TOTAL: 10]

END OF QUESTION PAPER

ADDITIONAL ANSWER SPACE

If additional space is required, you should use the following lined page(s). The question number(s) must be clearly shown in the margin(s).

BLANK PAGE

Copyright Information

OCR is committed to seeking permission to reproduce all third-party content that it uses in its assessment materials. OCR has attempted to identify and contact all copyright holders whose work is used in this paper. To avoid the issue of disclosure of answer-related information to candidates, all copyright acknowledgements are reproduced in the OCR Copyright Acknowledgements Booklet. This is produced for each series of examinations and is freely available to download from our public website (www.ocr.org.uk) after the live examination series.

If OCR has unwittingly failed to correctly acknowledge or clear any third-party content in this assessment material, OCR will be happy to correct its mistake at the earliest possible opportunity.

For queries or further information please contact the Copyright Team, First Floor, 9 Hills Road, Cambridge CB2 1GE.

OCR is part of the Cambridge Assessment Group; Cambridge Assessment is the brand name of University of Cambridge Local Examinations Syndicate (UCLES), which is itself a department of the University of Cambridge.