

Write your name here

Surname

Other names

Pearson Edexcel
International GCSE

Centre Number

--	--	--	--	--	--

Candidate Number

--	--	--	--	--

Chemistry

Unit: 4CH0

Paper: 2CR

Wednesday 15 June 2016 – Afternoon

Time: 1 hour

Paper Reference

4CH0/2CR

You must have:

Ruler

Calculator

Total Marks

Instructions

- Use **black** ink or ball-point pen.
- **Fill in the boxes** at the top of this page with your name, centre number and candidate number.
- Answer **all** questions.
- Answer the questions in the spaces provided
– *there may be more space than you need.*
- Show all the steps in any calculations and state the units.
- Some questions must be answered with a cross in a box ☒. If you change your mind about an answer, put a line through the box ☒ and then mark your new answer with a cross ☒.

Information

- The total mark for this paper is 60.
- The marks for **each** question are shown in brackets
– *use this as a guide as to how much time to spend on each question.*

Advice

- Read each question carefully before you start to answer it.
- Write your answers neatly and in good English.
- Try to answer every question.
- Check your answers if you have time at the end.

Turn over ►

P45944A

©2016 Pearson Education Ltd.

1/1/1/1/



PEARSON

THE PERIODIC TABLE

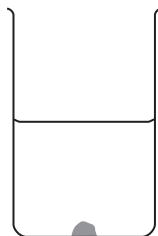
Period 1 2 3 4 5 6 7 0

1	Group																																																																																																																																																																																																																																																																																																																																																																																																																																																																																																																	
1	<div style="display: flex; justify-content: space-between; align-items: center;"> <div style="border: 1px solid black; padding: 2px; text-align: center;"> 1 H Hydrogen 1 </div> <div style="border: 1px solid black; padding: 2px; text-align: center;"> 4 He Helium 2 </div> </div>																																																																																																																																																																																																																																																																																																																																																																																																																																																																																																																	
2	7	9	11	13	15	17	19	21	23	25	27	29	31	33	35	37	39	41	43	45	47	49	51	53	55	57	59	61	63	65	67	69	71	73	75	77	79	81	83	85	87	89	91	93	95	97	99	101	103	105	107	109	111	113	115	117	119	121	123	125	127	129	131	133	135	137	139	141	143	145	147	149	151	153	155	157	159	161	163	165	167	169	171	173	175	177	179	181	183	185	187	189	191	193	195	197	199	201	203	205	207	209	211	213	215	217	219	221	223	225	227	229	231	233	235	237	239	241	243	245	247	249	251	253	255	257	259	261	263	265	267	269	271	273	275	277	279	281	283	285	287	289	291	293	295	297	299	301	303	305	307	309	311	313	315	317	319	321	323	325	327	329	331	333	335	337	339	341	343	345	347	349	351	353	355	357	359	361	363	365	367	369	371	373	375	377	379	381	383	385	387	389	391	393	395	397	399	401	403	405	407	409	411	413	415	417	419	421	423	425	427	429	431	433	435	437	439	441	443	445	447	449	451	453	455	457	459	461	463	465	467	469	471	473	475	477	479	481	483	485	487	489	491	493	495	497	499	501	503	505	507	509	511	513	515	517	519	521	523	525	527	529	531	533	535	537	539	541	543	545	547	549	551	553	555	557	559	561	563	565	567	569	571	573	575	577	579	581	583	585	587	589	591	593	595	597	599	601	603	605	607	609	611	613	615	617	619	621	623	625	627	629	631	633	635	637	639	641	643	645	647	649	651	653	655	657	659	661	663	665	667	669	671	673	675	677	679	681	683	685	687	689	691	693	695	697	699	701	703	705	707	709	711	713	715	717	719	721	723	725	727	729	731	733	735	737	739	741	743	745	747	749	751	753	755	757	759	761	763	765	767	769	771	773	775	777	779	781	783	785	787	789	791	793	795	797	799	801	803	805	807	809	811	813	815	817	819	821	823	825	827	829	831	833	835	837	839	841	843	845	847	849	851	853	855	857	859	861	863	865	867	869	871	873	875	877	879	881	883	885	887	889	891	893	895	897	899	901	903	905	907	909	911	913	915	917	919	921	923	925	927	929	931	933	935	937	939	941	943	945	947	949	951	953	955	957	959	961	963	965	967	969	971	973	975	977	979	981	983	985	987	989	991	993	995	997	999	
3	23	24	11	12	14	16	18	20	22	24	26	28	30	32	34	36	38	40	42	44	46	48	50	52	54	56	58	60	62	64	66	68	70	72	74	76	78	80	82	84	86	88	90	92	94	96	98	100	102	104	106	108	110	112	114	116	118	120	122	124	126	128	130	132	134	136	138	140	142	144	146	148	150	152	154	156	158	160	162	164	166	168	170	172	174	176	178	180	182	184	186	188	190	192	194	196	198	200	202	204	206	208	210	212	214	216	218	220	222	224	226	228	230	232	234	236	238	240	242	244	246	248	250	252	254	256	258	260	262	264	266	268	270	272	274	276	278	280	282	284	286	288	290	292	294	296	298	300	302	304	306	308	310	312	314	316	318	320	322	324	326	328	330	332	334	336	338	340	342	344	346	348	350	352	354	356	358	360	362	364	366	368	370	372	374	376	378	380	382	384	386	388	390	392	394	396	398	400	402	404	406	408	410	412	414	416	418	420	422	424	426	428	430	432	434	436	438	440	442	444	446	448	450	452	454	456	458	460	462	464	466	468	470	472	474	476	478	480	482	484	486	488	490	492	494	496	498	500	502	504	506	508	510	512	514	516	518	520	522	524	526	528	530	532	534	536	538	540	542	544	546	548	550	552	554	556	558	560	562	564	566	568	570	572	574	576	578	580	582	584	586	588	590	592	594	596	598	600	602	604	606	608	610	612	614	616	618	620	622	624	626	628	630	632	634	636	638	640	642	644	646	648	650	652	654	656	658	660	662	664	666	668	670	672	674	676	678	680	682	684	686	688	690	692	694	696	698	700	702	704	706	708	710	712	714	716	718	720	722	724	726	728	730	732	734	736	738	740	742	744	746	748	750	752	754	756	758	760	762	764	766	768	770	772	774	776	778	780	782	784	786	788	790	792	794	796	798	800	802	804	806	808	810	812	814	816	818	820	822	824	826	828	830	832	834	836	838	840	842	844	846	848	850	852	854	856	858	860	862	864	866	868	870	872	874	876	878	880	882	884	886	888	890	892	894	896	898	900	902	904	906	908	910	912	914	916	918	920	922	924	926	928	930	932	934	936	938	940	942	944	946	948	950	952	954	956	958	960	962	964	966	968	970	972	974	976	978	980	982	984	986	988	990	992	994	996	998	1000
4	39	40	19	20	21	22	23	24	25	26	27	28	29	30	31	32	33	34	35	36	37	38	39	40	41	42	43	44	45	46	47	48	49	50	51	52	53	54	55	56	57	58	59	60	61	62	63	64	65	66	67	68	69	70	71	72	73	74	75	76	77	78	79	80	81	82	83	84	85	86	87	88	89	90	91	92	93	94	95	96	97	98	99	100	101	102	103	104	105	106	107	108	109	110	111	112	113	114	115	116	117	118	119	120	121	122	123	124	125	126	127	128	129	130	131	132	133	134	135	136	137	138	139	140	141	142	143	144	145	146	147	148	149	150	151	152	153	154	155	156	157	158	159	160	161	162	163	164	165	166	167	168	169	170	171	172	173	174	175	176	177	178	179	180	181	182	183	184	185	186	187	188	189	190	191	192	193	194	195	196	197	198	199	200	201	202	203	204	205	206	207	208	209	210	211	212	213	214	215	216	217	218	219	220	221	222	223	224	225	226	227	228	229	230	231	232	233	234	235	236	237	238	239	240	241	242	243	244	245	246	247	248	249	250	251	252	253	254	255	256	257	258	259	260	261	262	263	264	265	266	267	268	269	270	271	272	273	274	275	276	277	278	279	280	281	282	283	284	285	286	287	288	289	290	291	292	293	294	295	296	297	298	299	300	301	302	303	304	305	306	307	308	309	310	311	312	313	314	315	316	317	318	319	320	321	322	323	324	325	326	327	328	329	330	331	332	333	334	335	336	337	338	339	340	341	342	343	344	345	346	347	348	349	350	351	352	353	354	355	356	357	358	359	360	361	362	363	364	365	366	367	368	369	370	371	372	373	374	375																																																																																																																																											

Answer ALL questions.

- 1 Hydrated copper(II) sulfate is a soluble blue solid. A large crystal of this solid is placed at the bottom of a beaker of water.

The diagram shows the beaker immediately after placing the crystal in it, and after two days.



after placing the crystal



after two days

- (a) After two days, the crystal becomes smaller and the liquid near the bottom of the beaker becomes blue.

Which statement explains these observations?

(1)

- A the crystal dissolves
- B the crystal freezes
- C the crystal melts
- D the crystal sublimates

- (b) After two weeks, the crystal has disappeared.

Which statement best describes the appearance of the liquid in the beaker after two weeks?

(1)

- A it is all blue
- B it is all brown
- C only the lower part is blue
- D only the upper part is blue

- (c) The formula of the compound in the crystal is $\text{CuSO}_4 \cdot 5\text{H}_2\text{O}$

(i) How many different elements are shown in the formula?

(1)

(ii) How many atoms are shown in the formula?

(1)

(Total for Question 1 = 4 marks)



2 Iron is a metal with many uses. One problem with using iron is that it rusts.

(a) Name two substances needed for iron to rust.

(2)

..... and

(b) State the name of the main compound present in rust.

(1)

(c) The table shows three methods used to protect iron from rusting.

Choose three of the objects from the box to complete the table.

You may choose an object only once.

(3)

bicycle chain	bucket	car body
car engine	food can	railway bridge

Method	Example of use
galvanising	
oiling	
painting	

DO NOT WRITE IN THIS AREA

DO NOT WRITE IN THIS AREA

DO NOT WRITE IN THIS AREA



(d) An iron object is coated with zinc to protect it from rusting. This protection continues even if the zinc coating becomes scratched.

Explain how the zinc coating protects iron from rusting.

(2)

.....

.....

.....

.....

.....

.....

.....

(Total for Question 2 = 8 marks)

DO NOT WRITE IN THIS AREA

DO NOT WRITE IN THIS AREA

DO NOT WRITE IN THIS AREA



3 This question is about some gases present in air.

(a) Which is the most common gas in dry air?

(1)

- A argon
- B carbon dioxide
- C nitrogen
- D oxygen

(b) Which gas makes up about 1 % of dry air?

(1)

- A argon
- B carbon dioxide
- C nitrogen
- D oxygen

(c) A piece of copper is heated in air.

State the formula and colour of the compound formed.

(2)

formula.....

colour.....

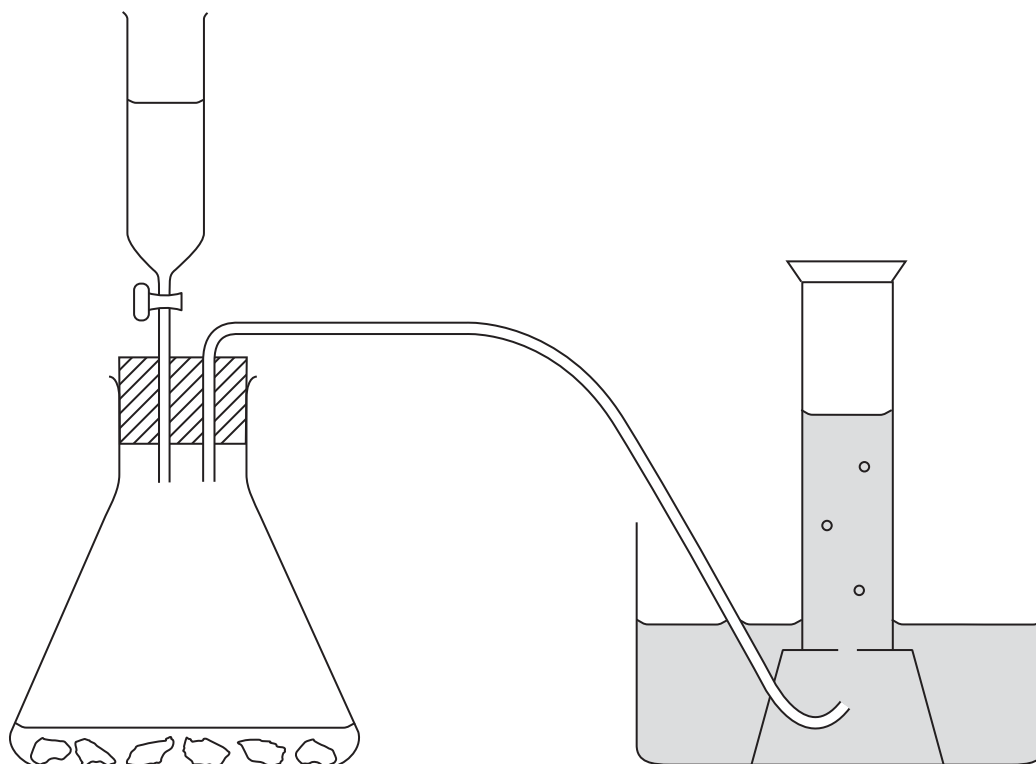
DO NOT WRITE IN THIS AREA

DO NOT WRITE IN THIS AREA

DO NOT WRITE IN THIS AREA



(d) The diagram shows apparatus that can be used to prepare carbon dioxide in the laboratory.



(i) The liquid in the tap funnel is

- A calcium chloride solution
- B concentrated sulfuric acid
- C dilute hydrochloric acid
- D hydrogen peroxide solution

(1)

(ii) The solid in the conical flask is

- A calcium carbonate
- B calcium sulfate
- C copper(II) oxide
- D manganese(IV) oxide

(1)

(iii) The diagram shows the gas being collected over water.

Suggest another way to collect the gas.

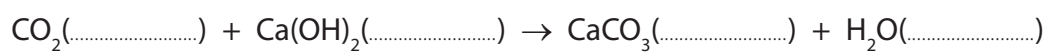
(1)



(e) Limewater can be used in a test for carbon dioxide.

- (i) Complete this equation, by inserting state symbols, for the reaction used to test for carbon dioxide.

(1)



- (ii) State the observation made in this test.

(1)

(Total for Question 3 = 9 marks)



DO NOT WRITE IN THIS AREA

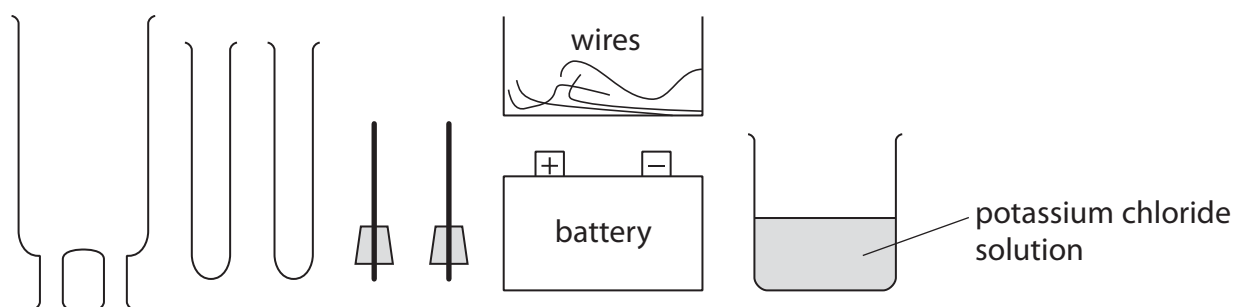
DO NOT WRITE IN THIS AREA

DO NOT WRITE IN THIS AREA

BLANK PAGE



4 A student investigates electrolysis using this apparatus.



DO NOT WRITE IN THIS AREA


DO NOT WRITE IN THIS AREA

DO NOT WRITE IN THIS AREA

(a) The student electrolyses KCl(aq) and collects samples of any gases formed.

Complete the following diagram to show how to assemble the apparatus.
Label the diagram to show the potassium chloride solution.

(3)



(b) The table shows the half-equation for the reaction at one electrode.

Complete the table to show the half-equation for the reaction at the other electrode
and the polarity (+ or -) of each electrode.

(2)

Polarity	Equation
	$2\text{H}_2\text{O} + 2\text{e}^- \rightarrow \text{H}_2 + 2\text{OH}^-$



(c) Describe a test to show that the gas collected is hydrogen.

(1)

.....

.....

(Total for Question 4 = 6 marks)

DO NOT WRITE IN THIS AREA

DO NOT WRITE IN THIS AREA

DO NOT WRITE IN THIS AREA



5 Potassium and lithium are Group 1 metals that exist as isotopes.

(a) (i) Complete the table of information about two isotopes of potassium.

(3)

Atomic number	Mass number	Number of protons	Number of neutrons
19	39		
		19	22

(ii) A sample of lithium has this percentage composition by mass.

$${}^6\text{Li} = 7.4\% \quad {}^7\text{Li} = 92.6\%$$

Use this information to calculate the relative atomic mass of lithium.
Give your answer to one decimal place.

(2)

relative atomic mass of lithium =

(b) A reaction occurs when a small piece of potassium is added to water in a trough.

State two observations that could be made during the reaction.

(2)

1

2

(c) A few drops of phenolphthalein are added to the liquid in the trough at the end of the reaction. A colour change occurs.

(i) State the final colour of the liquid in the trough.

(1)

(ii) Give the formula of the ion formed during the reaction that causes this colour change.

(1)

DO NOT WRITE IN THIS AREA

DO NOT WRITE IN THIS AREA

DO NOT WRITE IN THIS AREA



(d) The electronic configurations of lithium and potassium are

Li 2,1 K 2,8,8,1

Explain why potassium is more reactive than lithium.

(2)

.....

.....

.....

.....

.....

.....

.....

(Total for Question 5 = 11 marks)

DO NOT WRITE IN THIS AREA

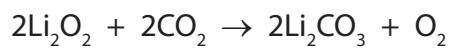

DO NOT WRITE IN THIS AREA

DO NOT WRITE IN THIS AREA



- 6 Lithium hydroxide (LiOH) and lithium peroxide (Li_2O_2) have been used in spacecraft to remove the carbon dioxide astronauts breathe out.

The equations for the reactions with carbon dioxide are



- (a) Explain, with reference to these equations, two advantages of using lithium peroxide, rather than lithium hydroxide, to remove carbon dioxide from the air in a spacecraft. (2)

.....

.....

.....

.....

.....

.....

DO NOT WRITE IN THIS AREA

DO NOT WRITE IN THIS AREA

DO NOT WRITE IN THIS AREA



(b) (i) Calculate the mass of lithium hydroxide needed to react with 100 g of carbon dioxide.

[M_r of LiOH = 24]

(3)

mass of lithium hydroxide = g

(ii) Calculate the volume of carbon dioxide, at room temperature and pressure, removed by 100 g of lithium peroxide.

[M_r of Li_2O_2 = 46]

Assume that one mole of gas has a volume of 24 000 cm^3 at rtp.

(3)

volume of carbon dioxide = cm^3

(Total for Question 6 = 8 marks)

DO NOT WRITE IN THIS AREA

DO NOT WRITE IN THIS AREA

DO NOT WRITE IN THIS AREA



7 This question is about the laboratory preparation of salts.

(a) A student writes this plan for preparing a sample of hydrated magnesium sulfate crystals.

step 1 Pour about 100 cm³ of dilute nitric acid into a 250 cm³ beaker.

step 2 Add a solution of magnesium carbonate to the acid until there is no more effervescence.

step 3 Heat the solution until all of the water has boiled off.

This plan will not succeed because there is one mistake in each step.

Identify the mistake in each of the steps.

(3)

step 1

.....

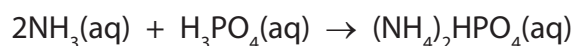
step 2

.....

step 3

.....

(b) Another student uses the following plan to prepare a sample of ammonium hydrogenphosphate, formed in this reaction between aqueous ammonia and dilute phosphoric acid



- use a pipette to transfer 25.0 cm³ of phosphoric acid to a conical flask
- add 3 drops of indicator
- use a burette to add aqueous ammonia until the indicator just changes colour permanently

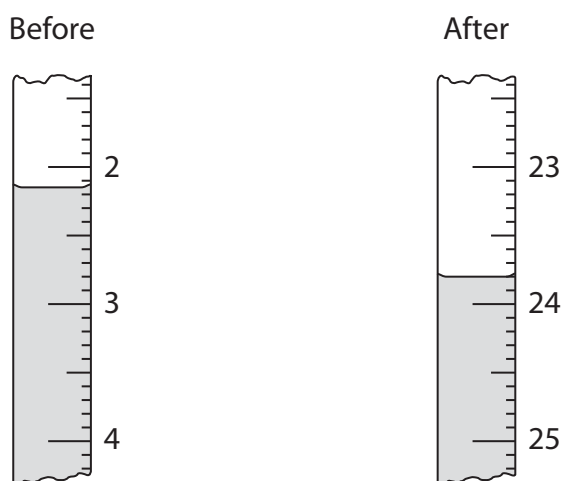
DO NOT WRITE IN THIS AREA

DO NOT WRITE IN THIS AREA

DO NOT WRITE IN THIS AREA



- (i) The diagram shows the burette readings in one experiment before and after adding aqueous ammonia.



Use the readings to complete the table, entering all values to the nearest 0.05 cm³. (3)

burette reading in cm ³ after adding aqueous ammonia	
burette reading in cm ³ before adding aqueous ammonia	
volume in cm ³ of aqueous ammonia added	

- (ii) In another titration, the student made a mistake. After he filled the burette, he noticed that the space between the tap of the burette and the tip contained air. After adding the aqueous ammonia, he noticed that it now contained liquid.

Explain how, if at all, this mistake affects the calculated volume of aqueous ammonia added.

(2)

.....

.....

.....

.....



(c) He repeats the experiment until he obtains concordant results.

The table shows the results.

burette reading in cm^3 after adding ammonia	27.95	28.05	28.00	26.75
burette reading in cm^3 before adding ammonia	0.80	1.60	1.20	0.50
volume in cm^3 of aqueous ammonia added	27.15	26.45	26.80	26.25
concordant results (✓)				

Concordant results are those volumes that differ from each other by 0.20 cm^3 or less.

(i) Identify the concordant results by placing ticks (✓) in the table where appropriate. (1)

(ii) Use the concordant results to calculate the average (mean) volume of aqueous ammonia added. (2)

average volume of aqueous ammonia = cm^3



DO NOT WRITE IN THIS AREA

DO NOT WRITE IN THIS AREA

DO NOT WRITE IN THIS AREA

(d) The student then mixed the volumes of aqueous ammonia and phosphoric acid found in the titration.

Describe how to use the method of crystallisation to obtain a pure dry sample of the salt from this mixture.

(3)

.....

.....

.....

.....

.....

.....

.....

.....

.....

.....

(Total for Question 7 = 14 marks)

TOTAL FOR PAPER = 60 MARKS



DO NOT WRITE IN THIS AREA

DO NOT WRITE IN THIS AREA

DO NOT WRITE IN THIS AREA

BLANK PAGE

Every effort has been made to contact copyright holders to obtain their permission for the use of copyright material. Pearson Education Ltd. will, if notified, be happy to rectify any errors or omissions and include any such rectifications in future editions.

